

**COMBO - ଓଡ଼ିଶା**  
**32,000- PYQ**  
**ପୂର୍ବ ବର୍ଷ ପ୍ରଶ୍ନ**  
 ପୂର୍ବ 5 ବର୍ଷର OSSSC, OSSC, OPSC, ପୋଲିସ, CT, B.ED, ଅନ୍ୟ ସବୁ ପ୍ରଶ୍ନ  
**GK, ODIA, ENGLISH, , MATH, COMPUTER, Reasoning, Pedagogy**

**GK- ଓଡ଼ିଶାର**  
**ସମସ୍ତ ପୂର୍ବ ବର୍ଷ ପ୍ରଶ୍ନ**  
**11,685- PYQ**  
**ଓଡ଼ିଆ ଓ ଇଂରାଜୀ ରେ**  
**EXPLANATION**  
 OSSSC, OSSC, OPSC, Police SI /Constable, PEO, RI, Battalion, Fireman, B.ED, JT, RHT, CT, OAVS, OSSTET, OTET & Other

**ଓଡ଼ିଆ ବ୍ୟାକରଣ**  
**ସମସ୍ତ ପୂର୍ବ ବର୍ଷ ପ୍ରଶ୍ନ**  
**4,343- PYQ**  
**75- TEST**  
**E-BOOK- PDF**  
 OSSSC, OSSC, OPSC, POLICE, B.ED, JT, RHT, CT, OAVS, OSSTET, OTET, OSSSC (PEO, RI, ARI & Other) & Other

**ENGLISH- ଓଡ଼ିଶାର**  
**ସମସ୍ତ ପୂର୍ବ ବର୍ଷ ପ୍ରଶ୍ନ**  
**4,582- PYQ**  
**ଓଡ଼ିଆ ଓ ଇଂରାଜୀ ରେ**  
**EXPLANATION**  
 OSSSC, OSSC, OPSC, Police SI /Constable, PEO, RI, Battalion, Fireman, B.ED, JT, RHT, CT, OAVS, OSSTET, OTET & Other Exam

**କୋମ୍ପ୍ୟୁଟର- ଓଡ଼ିଶାର**  
**ସମସ୍ତ ପୂର୍ବ ବର୍ଷ ପ୍ରଶ୍ନ**  
**2,353- PYQ**  
**ଓଡ଼ିଆ ଓ ଇଂରାଜୀ ରେ**  
**EXPLANATION**  
 OSSSC, OSSC, OPSC, Police SI & Constable, Battalion, PEO, RI, AMIN, JT, RHT & Other Exams

**MATH- ଓଡ଼ିଶାର**  
**ସମସ୍ତ ପୂର୍ବ ବର୍ଷ ପ୍ରଶ୍ନ**  
**4,000- PYQ**  
**ଓଡ଼ିଆ ଓ ଇଂରାଜୀ ରେ**  
**E-BOOK- PDF**  
 OSSSC, OSSC, OPSC, Police SI /Constable, PEO, RI, Battalion, Fireman, B.ED, JT, RHT, CT, OAVS, OSSTET, OTET & Other

**PEDAGOGY ଓଡ଼ିଶାର**  
**TEACHING APTITUDE**  
**ପୂର୍ବ ବର୍ଷ ପ୍ରଶ୍ନ**  
**1,900- PYQ**  
**ଓଡ଼ିଆ ଓ ଇଂରାଜୀ ରେ**  
**EXPLANATION**  
 B.ED, RHT, CT, JT, OAVS, OSSTET, OTET & Other

[Click Here](#)

Tech of World

HOME VIDEOS PLAYLISTS COMMUNITY

ଆମ Channel ରେ ଦେଖନ୍ତୁ Video  
**ASO ଓଡ଼ିଶା ପୋଷ୍ଟାଲ CT ଓ B.Ed**  
**ଓଡ଼ିଶା ପୋଲିସ SSC GD Railway**

**Tech of World**  
 SUBSCRIBE  
 315K subscribers • 928 videos  
 Hello ସାଙ୍ଗ ମାନେ !! ଆମେ ଏହି Channel ରେ ସବୁ ପ୍ରକାରର Educational Video  
 Free ରେ ଯେଉଁପରିକି ଦେଖି ଦେଖି ଦେଖି ଦେଖି ଏହି "Tech Of World" Channel କୁ ...

**+2 କିମ୍ବା +3 ପଢ଼ିବା ପରେ**  
**କେମିତି ଜଣେ ଶିକ୍ଷକ**  
**ହେଇପାରିବେ ?**  
**CT ଓ B.Ed ପରେ କଣ ?**

How To Become A Teacher After +2 Or +3 In Odisha ? How To Get A Teacher Job In Odisha ?  
 Tech of World · 176K views · 3 years ago

[Click Here](#)

2:45 PM | 60.3KB/s

Tech Of World- (Odisha Exam)  
 Tech Of World

Uninstall Open

Your review  
 sujit kumar naik  
 ★★★★★ 29/06/21

Edit your review

App support

About this app

Tech Of World (Odisha Exam) Provides Mock Test & E-Books For Different Exams

Education

[Click Here](#)

6:32 PM | 480KB/s

Tech Of World  
 16.4K subscribers

Pinned Message  
 32,000\_COMBO\_ALL\_ODISHA\_PREVIOUS\_YE...

Tech Of World  
 ଓଡ଼ିଶା Junior Teacher ପରୀକ୍ଷାରେ ଆପଣଙ୍କର Mark କେତେ ରହିଲା ? (Full Mark-240)  
 Anonymous Poll

8%	240-210
4%	210-180
9%	180-160
16%	160-130
16%	130-100
5%	100-70
2%	70-50
4%	50 ରୁ କମ
25%	ମୁଁ ଏ ପରୀକ୍ଷା ଦେଇନାହିଁ !
11%	Poll Check !

1350 votes

14 7 1 1 1

[Click Here](#)





## Odisha Adarsha Vidyalaya Sangathan

Department of School & Mass Education, Govt. Of Odisha

Participant ID	
Participant Name	
Test Center Name	Raja Kishore Chandra Academy Of Technology
Test Date	17/05/2023
Test Time	2:20 PM - 5:40 PM
Subject	TGT Social Studies

Section : Language Proficiency Test-General English

**Q.1** Select the option that can be used as a one-word substitute for the given group of words.

Do you understand the system of classification used in study of birds?

Ans ✓ 1. Ornithology

✗ 2. Apiology

✗ 3. Zoology

✗ 4. Biology

Question ID : 630680224024

Option 1 ID : 630680868812

Option 2 ID : 630680868814

Option 3 ID : 630680868813

Option 4 ID : 630680868811

Status : Answered

Chosen Option : 1

**Q.2** Select the most appropriate meaning of the underlined idiom/phrase.

Devrat's critics even smile in anticipation of a rhetorical question receiving a devastating reply.

Ans ✗ 1. A question which everyone expects

✗ 2. A question which is asked too often

✗ 3. A question which no one asks

✓ 4. A question that does not expect an answer

Question ID : 630680224011

Option 1 ID : 630680868759

Option 2 ID : 630680868762

Option 3 ID : 630680868760

Option 4 ID : 630680868761

Status : Answered

Chosen Option : 2

**Q.3** The following sentence has been split into four segments. Identify the segment that contains a spelling error.





Dharamvir was subjected to / the most vicious calumny, / but he never denounced not / sued any of his colleauges.

Ans ✓ 1. sued any of his colleauges

✗ 2. but he never denounced not

✗ 3. the most vicious calumny,

✗ 4. Dharamvir was subjected to

Question ID : 630680224015

Option 1 ID : 630680868778

Option 2 ID : 630680868777

Option 3 ID : 630680868776

Option 4 ID : 630680868775

Status : Not Answered

Chosen Option : --

Q.4 Select the option that can be used as a one-word substitute for the given group of words.

The division of this order, which is feeding on mainly fruit, is only represented by a single species in Japan.

Ans ✓ 1. Frugivorous

✗ 2. Fructuous

✗ 3. Herbivore

✗ 4. Fructose

Question ID : 630680224026

Option 1 ID : 630680868822

Option 2 ID : 630680868819

Option 3 ID : 630680868821

Option 4 ID : 630680868820

Status : Answered

Chosen Option : 2

Q.5 Identify the option that can correctly replace the underlined segment.

The small military town shrunk later army budget cuts and closure in a large hospital at the region in the 1990s, resulting in thousands of people moving elsewhere to find work.

Ans ✓ 1. after army budget cuts and closure of a large hospital in the region in the 1990s

✗ 2. later army budget cuts and closure of a large hospital in the region in the 1990s

✗ 3. army budget cuts and closure after a large hospital of the region in the 1990s closed

✗ 4. army budget after budget cutting and closing a large hospital around the region in the 1990s

Chosen Option : 2

**Q.6** The following sentence has been split into four segments. Identify the segment that contains a grammatical error.  
**Population growth and distribution has / a more profound and long-term effect / on the planet than does the / destruction of rain forests and desertification.**

- Ans**
- 1. destruction of rain forests and desertification
  - 2. a more profound and long-term effect
  - 3. Population growth and distribution has
  - 4. on the planet than does the

Question ID : 630680224032

Option 1 ID : 630680868846

Option 2 ID : 630680868844

Option 3 ID : 630680868843

Option 4 ID : 630680868845

Status : Answered

Chosen Option : 2

**Q.7** Select the most appropriate option to fill in the blanks.

Surrealism \_\_\_\_\_ as a literary movement in Paris, in 1924, when writer André Breton created its first manifesto- he described it as "pure psychic automatism" – and it was shaped by Symbolist poetry and Dadaism, \_\_\_\_\_ 'anti-artworks' defied reason. It was soon embraced by fine artists including Max Ernst, Hans Arp, Salvador Dalí, Joan Miró and René Magritte, who were reacting to the \_\_\_\_\_ of World War I.

- Ans**
- 1. started, who, atrocities
  - 2. evolved, whom, dangers
  - 3. began, whose, horrors
  - 4. begun, who's, stories

Question ID : 630680224023

Option 1 ID : 630680868809

Option 2 ID : 630680868810

Option 3 ID : 630680868808

Option 4 ID : 630680868807

Status : Not Answered

Chosen Option : --

**Q.8** Select the option that expresses the given sentence in active voice.  
**The company's locker has been stolen.**

- Ans**
- 1. Somebody stolen the company's locker.
  - 2. Somebody has stolen the company's locker.
  - 3. Somebody stole the company's locker.
  - 4. Somebody had stolen the company's locker.

Question ID : 630680224042



Chosen Option : 2

Q.9 The following sentence has been split into four segments. Identify the segment that contains a grammatical error.

Art is considered often the process / or product of deliberately arranging / elements in a way that / appeals to the senses or emotions.

- Ans
- 1. appeals to the senses or emotions
  - 2. elements in a way that
  - 3. or product of deliberately arranging
  - 4. Art is considered often the process

Question ID : 630680224030

Option 1 ID : 630680868838

Option 2 ID : 630680868837

Option 3 ID : 630680868836

Option 4 ID : 630680868835

Status : Not Answered

Chosen Option : --

Q.10 Select the most appropriate synonym of the underlined word.

The eldest man in the tribe was a beacon of hope for the younger generation.

- Ans
- 1. Reason
  - 2. Cover
  - 3. Light
  - 4. Solution

Question ID : 630680224009

Option 1 ID : 630680868753

Option 2 ID : 630680868751

Option 3 ID : 630680868752

Option 4 ID : 630680868754

Status : Answered

Chosen Option : 3

Q.11 Select the most appropriate ANTONYM of the underlined word.

As he saw it, they were an authoritative, international body that could back the country's cultural connection to food.

- Ans
- 1. Commanding
  - 2. Orthodox
  - 3. Docile
  - 4. Hostile

Q.12 Select the most appropriate meaning of the underlined proverb.  
Amrita often found herself constantly surrounded by people who all lay loads on a willing horse.

- Ans
- 1. Like to work hard and do justice to their job
  - 2. Tend to take advantage of persons who are helpful and of good nature
  - 3. Find someone or the other to share their work with
  - 4. Are used to doing challenging tasks which no one else does

Question ID : 630680224013

Option 1 ID : 630680868768

Option 2 ID : 630680868767

Option 3 ID : 630680868770

Option 4 ID : 630680868769

Status : Not Answered

Chosen Option : --

Q.13 Select the most appropriate ANTONYM of the underlined word.  
These kids have been through a difficult time, to say the least, but they still have smiles on their faces.

- Ans
- 1. Easy
  - 2. Sociable
  - 3. Gruelling
  - 4. Tough

Question ID : 630680224005

Option 1 ID : 630680868735

Option 2 ID : 630680868737

Option 3 ID : 630680868738

Option 4 ID : 630680868736

Status : Answered

Chosen Option : 3

Q.14 Select the most appropriate option to fill in the blanks.

Many people now try to recycle their newspapers, plastic bottles and aluminium cans in an effort to \_\_\_\_\_ their household waste. But few of us think about the immense amount of waste \_\_\_\_\_ in our names in a different way: the very buildings we live in. The construction industry is the world's largest consumer of raw materials. New buildings \_\_\_\_\_ are responsible for 5% of the world's annual greenhouse gas emissions.

- Ans
- 1. lessen, created, even
  - 2. minimise, generated, never
  - 3. increase, procured, only
  - 4. reduce, produced, alone



Q.15 Select the option that expresses the given sentence in reported speech.  
Radha said to her husband, "Have you paid the cable guy?"

- Ans
- 1. Radha inquired from her husband if he did paid the cable guy.
  - 2. Radha asked her husband if he have paid the cable guy.
  - 3. Radha asked her husband if he had paid the cable guy.
  - 4. Radha said to her husband if he had paid the cable guy.

Question ID : 630680224037

Option 1 ID : 630680868864

Option 2 ID : 630680868866

Option 3 ID : 630680868865

Option 4 ID : 630680868863

Status : Answered

Chosen Option : 3

Q.16 Select the most appropriate option to fill in the blanks.

Our car swerved past horse-drawn carriages, a \_\_\_\_\_ of transport still popular in the rural reaches of the eastern Indian state of Bihar, the trotting horses and turbaned coachmen \_\_\_\_\_ like shadowy apparitions in the pearly-white mist.

- Ans
- 1. way, seeming
  - 2. mode, looking
  - 3. means, feeling
  - 4. method, showing

Question ID : 630680224019

Option 1 ID : 630680868792

Option 2 ID : 630680868793

Option 3 ID : 630680868791

Option 4 ID : 630680868794

Status : Answered

Chosen Option : 2

Q.17 The following sentence has been split into four segments. Identify the segment that contains a spelling error.

Divya's fiancé took the / unprecedented step of stating / that the rumours of her / previous affairs were false.

- Ans
- 1. that the rumours of her
  - 2. Divya's fiancé took the
  - 3. previous affairs were false
  - 4. unprecedented step of stating

Chosen Option : --

**Q.18** Select the option that expresses the given sentence in reported speech.  
Mrs. Batra said, "The money is lying on the ground."

- Ans
- 1. Mrs. Batra said that the money were lying on the ground.
  - 2. Mrs. Batra said that the money is lying on the ground.
  - 3. Mrs. Batra said that the money was lying on the ground.
  - 4. Mrs. Batra said that the money was laid on the ground.

Question ID : 630680224038

Option 1 ID : 630680868870

Option 2 ID : 630680868868

Option 3 ID : 630680868867

Option 4 ID : 630680868869

Status : Answered

Chosen Option : 3

**Q.19** Select the option that expresses the given sentence in passive voice.  
Why did the company create a new innovative product?

- Ans
- 1. Why were a new innovative product created by the company?
  - 2. Why was a new innovative product created by the company?
  - 3. Why did a new innovative product created by the company?
  - 4. Why a new innovative product was created by the company?

Question ID : 630680224041

Option 1 ID : 630680868880

Option 2 ID : 630680868882

Option 3 ID : 630680868879

Option 4 ID : 630680868881

Status : Answered

Chosen Option : 4

**Q.20** The following sentence has been split into four segments. Identify the segment that contains a grammatical error.

A spokesman for Meet Watch, / which makes apps related to / watches, says it has / whereabouts 500 users.

- Ans
- 1. which makes apps related to
  - 2. watches, says it has
  - 3. A spokesman for Meet Watch,
  - 4. whereabouts 500 users



Section : Language Proficiency Test-Odia

Q.1 କେଉଁଠି ପରୋକ୍ଷ ଉଚ୍ଚି ଚିହ୍ନାଅ?

- Ans
- 1. ଶାମ କହିଲା ଯେ ଆମେ ଆଉ ଖୋଳ ଦେଖୁ ନାହିଁ
  - 2. ଶାମ କହିଲା କି ଆମ ଦ୍ଵାରା ଆଉ ଖୋଳ ଦେଖା ହେବ ନାହିଁ
  - 3. ଶାମ କହିଲା, ଆମେ ଆଉ ଖୋଳ ଦେଖୁ ନାହିଁ
  - 4. ଶାମ କହିଲା ଯେ ସେମାନେ ଆଉ ଖୋଳ ଦେଖିବେ ନାହିଁ

Question ID : 630680224395

Option 1 ID : 630680870291

Option 2 ID : 630680870294

Option 3 ID : 630680870292

Option 4 ID : 630680870293

Status : Answered

Chosen Option : 4

Q.2 'ଗୋପବନ୍ଧୁ ବଢ଼ିମରୁଡ଼ିକଥା ଶୁଣୁଶୁଣୁ କାନ୍ଦୁଥିଲେ?' । ଏହା କେଉଁ ପ୍ରକାର ବାକ୍ୟ?

- Ans
- 1. ଜଟିଳ
  - 2. ଯୌଗିକ
  - 3. ସରଳ
  - 4. ମିଶ୍ର

Question ID : 630680224399

Option 1 ID : 630680870309

Option 2 ID : 630680870308

Option 3 ID : 630680870307

Option 4 ID : 630680870310

Status : Answered

Chosen Option : 3

Q.3 ଶୁଦ୍ଧରୂପ ଲେଖ

- Ans
- 1. ମୁହୁମୁହୁ
  - 2. ମୁହୁଃମୁହୁ
  - 3. ମୁହୁମୁହୁଃ
  - 4. ମୁହୁମୁହୁ

Q.4 ଆମ ବର୍ଣ୍ଣମାଳାରେ \_\_\_\_\_ ଟି ଉଚ୍ଚବର୍ଣ୍ଣର ବ୍ୟବହାର ଦେଖାଯାଏ ।

- Ans
- 1. ତିନିଟି
  - 2. ଦୁଇଟି
  - 3. ପାଞ୍ଚଟି
  - 4. ଚାରିଟି

Question ID : 630680224366

Option 1 ID : 630680870176

Option 2 ID : 630680870175

Option 3 ID : 630680870178

Option 4 ID : 630680870177

Status : Answered

Chosen Option : 4

Q.5 ରମେଶ ଭଲ ପଢ଼େ, ଖେଳେ, ଗାଏ, ନାଚେ, ପହଁରେ ଓ ଗୁରୁଜନମାନଙ୍କୁ ଭଜିକରେ । କେତୋଟି ସମାପିକା କ୍ରିୟା ବୃଦ୍ଧତ ହୋଇଛି?

- Ans
- 1. ଗୋଟିଏ
  - 2. ତିନୋଟି
  - 3. ଛଅଟି
  - 4. ଚାରୋଟି

Question ID : 630680224401

Option 1 ID : 630680870315

Option 2 ID : 630680870316

Option 3 ID : 630680870318

Option 4 ID : 630680870317

Status : Answered

Chosen Option : 3

Q.6 'କୂଳରେ ଲାଗିବା'- ରୁଢ଼ି ଅର୍ଥରେ କେଉଁ ବାକ୍ୟଟି ପ୍ରସ୍ତୁତ?

- Ans
- 1. ଛେଉଣୁ ପିଲାଟି ଚାକିରି ପାଇ କୂଳରେ ଲାଗିଗଲା ।
  - 2. ପବନରେ ଭାସିଭାସି କୂଳରେ ଲାଗିଲା
  - 3. ବୋଇତଟି ପାରାଦୀପ ଠାରେ କୂଳରେ ଲାଗିଛି
  - 4. କୂଳରେ ଲାଗିବା ପାଇଁ ପିଲାଟି ନଈ ପହଁରୁଛି



Ans ✓ 1. ମାଛି ପଡ଼ିଲେ ନବଖଣ୍ଡ

✗ 2. ବାଘ ବକରା ଏକାଠି ପାଣି ପିଇବା

✗ 3. ବାଘଘରେ ମିରିଗ ନାଟ

✗ 4. ମାଛିକୁ ମାଁ କହିବା

Question ID : 630680224388

Option 1 ID : 630680870266

Option 2 ID : 630680870265

Option 3 ID : 630680870264

Option 4 ID : 630680870263

Status : Answered

Chosen Option : 1

Q.8 କେଉଁଟି ଚନ୍ଦ୍ରର ପ୍ରତିଶବ୍ଦ ନୁହେଁ?

Ans ✓ 1. ମାରୁତ

✗ 2. ସିତାଂଶୁ

✗ 3. ନିଶାକର

✗ 4. ଓଷଧୀଶ

Question ID : 630680224374

Option 1 ID : 630680870210

Option 2 ID : 630680870209

Option 3 ID : 630680870208

Option 4 ID : 630680870207

Status : Answered

Chosen Option : 1

Q.9 'ବିଧୁକୁ ଅତିକ୍ରମ ନକରି'କୁ ସଂକ୍ଷିପ୍ତ ରୂପ ଦେଲେ କ'ଣ ହେବ?

Ans ✓ 1. ଯଥାବିଧୁ

✗ 2. ବୈଧୀ

✗ 3. ଅବିଧୁ

✗ 4. ବିଧାନ

Question ID : 630680224391

Option 1 ID : 630680870278

Option 2 ID : 630680870276

Option 3 ID : 630680870275

Option 4 ID : 630680870277

Status : Answered

Chosen Option : 1

Q.10 ସେ ମୋତେ \_\_\_\_\_ କରି ଚାହୁଁଛି ।

Ans ✓ 1. ଡବଡ଼ବ

✗ 2. ଭାବିଭାବି

3. ସିଧାସିଧା

4. କନକନ

Question ID : 630680224378

Option 1 ID : 630680870223

Option 2 ID : 630680870225

Option 3 ID : 630680870226

Option 4 ID : 630680870224

Status : Answered

Chosen Option : 1

Q.11 କେଉଁଟି ପବନର ପ୍ରତିଶବ୍ଦ?

Ans  1. ତାମରସ

2. ଘସ୍ତ

3. ପବନାଳ

4. ଅଦ୍ରୀ

Question ID : 630680224372

Option 1 ID : 630680870200

Option 2 ID : 630680870201

Option 3 ID : 630680870199

Option 4 ID : 630680870202

Status : Answered

Chosen Option : 3

Q.12 କେଉଁଟି କର୍ତ୍ତୃବାଚ୍ୟର ବାକ୍ୟ?

Ans  1. ଦେବାନନ୍ଦର ଭଲ ପୁରାଣ ପଢ଼ା

2. ଦେବାନନ୍ଦ ହାରା ଭଲ ପୁରାଣ ପଢ଼ାହୁଏ

3. ଦେବାନନ୍ଦ ଭଲ ପୁରାଣ ପଢ଼େ ।

4. ଦେବାନନ୍ଦକୁ ଭଲ ପୁରାଣ ପଢ଼ିଆସେ

Question ID : 630680224393

Option 1 ID : 630680870285

Option 2 ID : 630680870284

Option 3 ID : 630680870286

Option 4 ID : 630680870283

Status : Answered

Chosen Option : 3

Q.13 ଶୁଦ୍ଧବାକ୍ୟଟି ଚିହ୍ନାଅ ।

Ans  1. ଅଜ୍ଞାତ କୁଳଶୀଳ ବ୍ୟକ୍ତିକୁ ଆଶ୍ରୟ ଦିଅ ନାହିଁ ।

2. ଅଜ୍ଞାତ କୁଳଶୀଳ ବ୍ୟକ୍ତିକୁ ଆଶ୍ରୟ ଦିଅନାହିଁ ।

3. ଅଜ୍ଞାତ କୁଳଶୀଳ ବ୍ୟକ୍ତିକୁ ଆଶ୍ରୟ ଦିଅ ନାହିଁ ।

4. ଅଜ୍ଞାତ କୁଳଶୀଳ ବ୍ୟକ୍ତିକୁ ଆଶ୍ରୟ ଦିଅ ନାହିଁ ।

Question ID : 630680224370

Option 1 ID : 630680870194

Option 2 ID : 630680870191

Option 3 ID : 630680870193

Option 4 ID : 630680870192

Status : Answered

Chosen Option : 3

Q.14 “ବ୍ୟାସଦେବଙ୍କ ଅଷ୍ଟାଦଶ ପୁରାଣ ଲେଖିପାରନ୍ତି ।” ଏ ବାକ୍ୟକୁ ନାସ୍ତିବାଚକ ରୂପଦେଲେ କ’ଣ ହେବ?

Ans



1. କେବଳ ବ୍ୟାସଦେବ ଅଷ୍ଟାଦଶ ପୁରାଣ ଲେଖିପାରନ୍ତି



2. ବ୍ୟାସଦେବଙ୍କ ବ୍ୟତୀତ ଆଉ କେହି ଅଷ୍ଟାଦଶ ପୁରାଣ ଲେଖିପାରିବେ ନାହିଁ ।



3. ବ୍ୟାସଦେବଙ୍କ ବ୍ୟତୀତ ଆଉ କିଏ ବା ଅଷ୍ଟାଦଶ ପୁରାଣ ଲେଖିବ ।



4. ବ୍ୟାସଦେବ ଅଷ୍ଟାଦଶ ପୁରାଣ ଲେଖିପାରନ୍ତି ନାହିଁ ।

Question ID : 630680224397

Option 1 ID : 630680870299

Option 2 ID : 630680870301

Option 3 ID : 630680870300

Option 4 ID : 630680870302

Status : Answered

Chosen Option : 4

Q.15 ରହସ୍ୟ ଖୋଲିଯାବା ଅର୍ଥରେ କେଉଁ ରୁଚି ବ୍ୟବହୃତ ହୋଇଛି?

Ans



1. ହାତ ଫର୍ଜା ହେବା



2. ଗୁମ୍ଫାରି ବସିବା



3. ଗୁମ୍ଫର ଫିଟିବା



4. ଖାଲ ଖୋଳିବା

Question ID : 630680224384

Option 1 ID : 630680870250

Option 2 ID : 630680870247

Option 3 ID : 630680870249

Option 4 ID : 630680870248

Status : Answered

Chosen Option : 3

Q.16 କୃଷିତ ଆଚାର ପ୍ରତିବଦଳରେ କେଉଁ ଶବ୍ଦ ବ୍ୟବହାର କରାଯାଇପାରେ?

Ans



1. କଦାଚାର



2. କଦାକାର



3. ସଦାଚାର



4. କୁଆଚାର



Q.17 'ଆଖିଦେବା' ରୁଢ଼ିର ପ୍ରକୃତ ବ୍ୟବହାର କେଉଁ ବାକ୍ୟରେ ହୋଇଛି?

Ans ✓ 1. ପରର ଧନ ପ୍ରତି ଆଖିଦେବା ଠିକ୍ ନୁହେଁ

✗ 2. ମୃତ୍ୟୁପରେ ନିଶିକାନ୍ତ ଆଖିଦେବାକୁ ଉଚିତ୍ ମନେକଲେ

✗ 3. ସେ ଆଖି ଦେବାରୁ ସଂପୂର୍ଣ୍ଣ ଦେଖୁଛି ।

✗ 4. ଆଖିଦେବା ଏକ ମହତ୍ କାର୍ଯ୍ୟ

Question ID : 630680224381

Option 1 ID : 630680870237

Option 2 ID : 630680870235

Option 3 ID : 630680870238

Option 4 ID : 630680870236

Status : Answered

Chosen Option : 1

Q.18 'ନିବୃତ୍ତି'ର ବିପରୀତାର୍ଥ ବୋଧକ ଶବ୍ଦ କଣ?

Ans ✓ 1. ପ୍ରବୃତ୍ତି

✗ 2. ଦୁବୃତ୍ତି

✗ 3. ସୁବୃତ୍ତି

✗ 4. କୁବୃତ୍ତି

Question ID : 630680224376

Option 1 ID : 630680870215

Option 2 ID : 630680870218

Option 3 ID : 630680870216

Option 4 ID : 630680870217

Status : Answered

Chosen Option : 1

Q.19 'ଏକ ମନ ହେଲେ \_\_\_\_\_ ଶୁଖେ'- ଏକତା ବଳରେ ଅସାଧ୍ୟ ସାଧନ ଅର୍ଥରେ ଲୋକକଥାଟିକୁ ସଂପୂର୍ଣ୍ଣ କର ।

Ans ✗ 1. ଭରସା

✓ 2. ସମୁଦ୍ର

✗ 3. ବରଷା

✗ 4. କାଦୁଅ

Q.20 କେଉଁଟି ଶୁଦ୍ଧରୂପ ଚିହ୍ନଟାଏ ।

Ans

- 1. ଅହନିଶ
- 2. ଅହନିଶି
- 3. ଅହନିଶି
- 4. ଅହନିଶ

Question ID : 630680224368

Option 1 ID : 630680870186

Option 2 ID : 630680870185

Option 3 ID : 630680870184

Option 4 ID : 630680870183

Status : Answered

Chosen Option : 3

Section : Current Affairs

Q.1 Which of the following pairs won their first-ever Super 750 title and their second title of the season by winning the men's doubles final of the French Open Super-2022 badminton tournament?

Ans

- 1. Satwiksairaj Rankireddy and Chirag Shetty
- 2. Prannoy HS and Srikanth Kidambi
- 3. Lakshya Sen and Chirag Shetty
- 4. Mithun Manjunath and Satwiksairaj Rankireddy

Question ID : 630680224314

Option 1 ID : 630680869968

Option 2 ID : 630680869970

Option 3 ID : 630680869969

Option 4 ID : 630680869967

Status : Answered

Chosen Option : 3

Q.2 When was the first light-and-sound show of 'Pradhanmantri Sangrahalaya' on the journey of India's space programme launched?

Ans

- 1. October 2022
- 2. January 2023
- 3. November 2022
- 4. December 2022

**Q.3** On 21 February 2023, which of the following signed a memorandum of understanding (MoU) with the Aeronautical Development Agency (ADA), DRDO, for the Advanced Medium Combat Aircraft (AMCA) programme?

- Ans
- 1. Hindustan Aeronautics Limited
  - 2. Mahanagar Telephone Nigam Limited (MTNL)
  - 3. Engineers India Limited (EIL)
  - 4. Bharat Electronics Ltd (BEL)

Question ID : 630680224363

Option 1 ID : 630680870163

Option 2 ID : 630680870166

Option 3 ID : 630680870165

Option 4 ID : 630680870164

Status : Answered

Chosen Option : 1

**Q.4** As of 2022, which of the following countries are the first four largest economies of the world in terms of their GDP?

1. India
2. Brazil
3. The United States
4. Germany
5. Japan
6. China

- Ans
- 1. Germany > The United States > China > Brazil
  - 2. The United States > China > Germany > Japan
  - 3. China > The United States > Germany > Brazil
  - 4. The United States > China > Japan > Germany

Question ID : 630680224308

Option 1 ID : 630680869945

Option 2 ID : 630680869944

Option 3 ID : 630680869946

Option 4 ID : 630680869943

Status : Answered

Chosen Option : 2

**Q.5** In October 2022, the National Payments Corporation of India (NPCI) said that there would be no charge for use of RuPay credit cards on Unified Payments Interface (UPI) for transactions up to \_\_\_\_\_.

- Ans
- 1. ₹4,000
  - 2. ₹2,000
  - 3. ₹3,000
  - 4. ₹5,000



Q.6 To which of the following countries does Kim Cotton, who became the first woman on-field umpire in full-member men's T20Is in April 2023, belong?

Ans ✓ 1. New Zealand

✗ 2. Australia

✗ 3. Sri Lanka

✗ 4. England

Question ID : 630680224309

Option 1 ID : 630680869950

Option 2 ID : 630680869948

Option 3 ID : 630680869947

Option 4 ID : 630680869949

Status : Not Answered

Chosen Option : --

Q.7 The NCPCR has developed an app-based monitoring tool called 'MASI' to monitor the \_\_\_\_\_.

Ans ✗ 1. pre-primary and primary schools

✗ 2. institutions promoting child labour

✓ 3. child care institutions

✗ 4. home-based care to children

Question ID : 630680224346

Option 1 ID : 630680870096

Option 2 ID : 630680870098

Option 3 ID : 630680870095

Option 4 ID : 630680870097

Status : Answered

Chosen Option : 3

Q.8 In October 2022, India defeated Australia 5-4 in a nail-biting penalty shootout to reclaim the Sultan of Johor Cup crown for the \_\_\_\_\_ time.

Ans ✗ 1. second

✗ 2. fifth

✓ 3. third

✗ 4. fourth

Question ID : 630680224312

Option 1 ID : 630680869959

Option 2 ID : 630680869962

Option 3 ID : 630680869960

Option 4 ID : 630680869961

Status : Not Answered

Chosen Option : --

Q.9 'DUSTLIK', which had commenced from 20 February 2023 in Uttarakhand, was the 4th joint military exercise of \_\_\_\_\_.

Ans  1. India and the USA

2. India and Uzbekistan

3. India and Japan

4. India and Afghanistan

Question ID : 630680224362

Option 1 ID : 630680870159

Option 2 ID : 630680870160

Option 3 ID : 630680870161

Option 4 ID : 630680870162

Status : Answered

Chosen Option : 1

**Q.10 In October 2022, with how many banks did the Indian Army sign a historic MoU for providing banking facilities to Agniveers upon enrolment?**

Ans  1. 13

2. 8

3. 11

4. 15

Question ID : 630680224327

Option 1 ID : 630680870021

Option 2 ID : 630680870019

Option 3 ID : 630680870020

Option 4 ID : 630680870022

Status : Answered

Chosen Option : 2

**Q.11 In the first-ever \_\_\_\_\_ programme of India Art Fair (IAF) 2023, Gaurav Ogale, Mira Felicia Malhotra and Varun Ogale showcased their digital projects and artworks in the art and technology hall named 'The Studio' from 9 February 2023 to 12 February 2023.**

Ans  1. Digital Artists in Power (DAIP)

2. Digital Artists in Nature (DAIN)

3. Digital Artists in Green (DAIG)

4. Digital Artists in Residence (DAIR)

Question ID : 630680224356

Option 1 ID : 630680870138

Option 2 ID : 630680870136

Option 3 ID : 630680870137

Option 4 ID : 630680870135

Status : Not Answered

Chosen Option : --

**Q.12 In October 2022, which of the following Indian states concluded an MoU with the Government of Dubai for cooperation in economic activities?**

Ans  1. Punjab

- 2. Kerala
- 3. Assam
- 4. Haryana

Question ID : 630680224328

Option 1 ID : 630680870023

Option 2 ID : 630680870025

Option 3 ID : 630680870024

Option 4 ID : 630680870026

Status : Not Answered

Chosen Option : --

Q.13 Which of the following statements about the judiciary in India is/are correct?

I. As of 31 December 2022, 689 eSewa Kendras have been made functional in District Courts under 25 High Courts.

II. Till 02 January 2023, 19 virtual courts in 17 states/UTs have been operationalised to handle traffic challan cases.

III. As of 31 December 2022, a total of 21 High Courts have adopted the model rules of e-filing.

Ans

- 1. Only III
- 2. All of I, II and III
- 3. Only II and III
- 4. Only I

Question ID : 630680224349

Option 1 ID : 630680870108

Option 2 ID : 630680870110

Option 3 ID : 630680870109

Option 4 ID : 630680870107

Status : Not Answered

Chosen Option : --

Q.14 In September 2022, the Government of Delhi announced a 15-point 'Winter Action Plan' to curb air pollution in the capital, which included installation of \_\_\_\_\_ anti-smog guns and deployment of at least \_\_\_\_\_ mobile anti-smog guns.

Ans

- 1. 223; 140
- 2. 233; 150
- 3. 230; 157
- 4. 239; 152



Q.15 To commemorate 'Azadi ka Amrit Mahotsav', which edition of 'Fit India Freedom Run' was launched on 2 October 2022, envisaging promotion of fitness amongst the citizens?

Ans ✓ 1. 3rd

✗ 2. 4th

✗ 3. 2nd

✗ 4. 5th

Question ID : 630680224316

Option 1 ID : 630680869976

Option 2 ID : 630680869977

Option 3 ID : 630680869975

Option 4 ID : 630680869978

Status : Answered

Chosen Option : 4

Q.16 In the 49th meeting of the GST Council held on 18 February 2023, the GST rates for pencil sharpeners were changed from \_\_\_\_\_.

Ans ✓ 1. 18% to 12%

✗ 2. 12% to 18%

✗ 3. 15% to 12%

✗ 4. 12% to 15%

Question ID : 630680224322

Option 1 ID : 630680870000

Option 2 ID : 630680869999

Option 3 ID : 630680870002

Option 4 ID : 630680870001

Status : Answered

Chosen Option : 2

Q.17 Which of the following statements is/are true about the Indian Institute of Technology (IIT) meet held in the month of October 2022?

1. It was inaugurated by Union Education Minister Dharmendra Pradhan; the two-day event titled 'IInvenTiv' was the second showcase of the IITs R&D.

2. 23 Indian Institutes of Technology (IITs) participated in this event.

3. 70 research and development (R&D) innovations were showcased at a fair collectively organised by the Indian Institutes of Technology (IITs).

Ans ✗ 1. All of 1, 2 and 3

✗ 2. Only 1 and 3

✗ 3. Only 1

✓ 4. Only 2

Q.18 In January 2023, which of the following tiger reserves was given the TX2 (Tigers times two) Award for having the tiger population doubled?

- Ans
- 1. Nagarjunsagar-Srisailem Tiger Reserve
  - 2. Manas Tiger Reserve
  - 3. Pench Tiger Reserve
  - 4. Pakke Tiger Reserve

Question ID : 630680224331

Option 1 ID : 630680870036

Option 2 ID : 630680870035

Option 3 ID : 630680870038

Option 4 ID : 630680870037

Status : Answered

Chosen Option : 1

Q.19 Which of the following published a report titled 'State of Gender Equality and Climate Change in South Asia and the HKH Region' in September 2022?

- Ans
- 1. NITI Aayog
  - 2. World Economic Forum
  - 3. ICIMOD
  - 4. WWF-India

Question ID : 630680224334

Option 1 ID : 630680870047

Option 2 ID : 630680870048

Option 3 ID : 630680870049

Option 4 ID : 630680870050

Status : Answered

Chosen Option : 3

Q.20 In January 2023, how many judgments were delivered by the Constitution Benches of the Supreme Court?

- Ans
- 1. 1
  - 2. 2
  - 3. 3
  - 4. 4

Q.21 R'Bonney Gabriel of the USA became 'Miss Universe 2022' by defeating the participant of Venezuela and Dominican Republic in the \_\_\_\_\_ competition of Miss Universe Pageant.

- Ans
- 1. 72nd
  - 2. 70th
  - 3. 71st
  - 4. 69th

Question ID : 630680224306  
Option 1 ID : 630680869938  
Option 2 ID : 630680869935  
Option 3 ID : 630680869936  
Option 4 ID : 630680869937  
Status : Not Answered  
Chosen Option : --

Q.22 5G services were launched in India on 1 October 2022 during the \_\_\_\_\_ edition of India Mobile Congress.

- Ans
- 1. 6th
  - 2. 5th
  - 3. 4th
  - 4. 3rd

Question ID : 630680224340  
Option 1 ID : 630680870074  
Option 2 ID : 630680870073  
Option 3 ID : 630680870072  
Option 4 ID : 630680870071  
Status : Answered  
Chosen Option : 2

Q.23 In December 2022, Indian Railways (IR) envisioned to achieve net-zero carbon emissions by the year \_\_\_\_\_.

- Ans
- 1. 2030
  - 2. 2050
  - 3. 2047
  - 4. 2035

Question ID : 630680224335  
Option 1 ID : 630680870051  
Option 2 ID : 630680870053  
Option 3 ID : 630680870052  
Option 4 ID : 630680870054  
Status : Not Answered  
Chosen Option : --

Q.24 The Union Budget 2023-24 adopts seven priorities. They complement one another and act as the 'Saptarishi', guiding the nation through the 'Amrit Kaal'. Mark the option which carries some of these priorities out of seven.  
I. Climate action



- II. Infrastructure and investment
- III. Unleashing the potential
- IV. Green growth
- V. Youth power
- VI. PM Gati Shakti

- Ans
- 1. Only I, III, IV and V
  - 2. Only II, III, IV and V
  - 3. Only II, III, IV and VI
  - 4. Only I, II, III and IV

Question ID : 630680224330

Option 1 ID : 630680870034

Option 2 ID : 630680870032

Option 3 ID : 630680870033

Option 4 ID : 630680870031

Status : Not Answered

Chosen Option : --

**Q.25 In March 2023, \_\_\_\_\_, a joint venture of Nagpur city police and Nagpur Municipal Corporation's (NMC) social welfare department, was started to stop begging in public places.**

- Ans
- 1. 'Stop Begging'
  - 2. 'Beggars' Wapsi'
  - 3. 'Beggar-free City'
  - 4. 'Begging – No and None'

Question ID : 630680224353

Option 1 ID : 630680870124

Option 2 ID : 630680870126

Option 3 ID : 630680870123

Option 4 ID : 630680870125

Status : Not Answered

Chosen Option : --

**Q.26 As of March 2023, which of the following is NOT a correct match of the person with his/her designation?**

- Ans
- 1. Sanjay Kumar: Secretary, Department of School Education & Literacy, Ministry of Education
  - 2. Rachna Shah: Secretary, Department of Youth Affairs, Ministry of Youth Affairs and Sports
  - 3. Sanjay Malhotra: Secretary, Department of Revenue, Ministry of Finance
  - 4. Kamran Rizvi: Secretary, Ministry of Heavy Industries

Chosen Option : --

Q.27 When did Union Minister Dr. Jitendra Singh launch 'Geospatial Hackathon', an initiative to promote innovations and start-ups in India's geospatial ecosystem?

- Ans  1. February 2023  
 2. January 2023  
 3. December 2022  
 4. November 2022

Question ID : 630680224342

Option 1 ID : 630680870082

Option 2 ID : 630680870081

Option 3 ID : 630680870080

Option 4 ID : 630680870079

Status : Not Answered

Chosen Option : --

Q.28 How much funds have been allocated to the Archaeological Survey of India in the Union Budget 2023-24 for protection, preservation and conservation of centrally protected monuments/sites and excavations of ancient monuments and archaeological sites?

- Ans  1. Rs. 1102.83 crore  
 2. Rs. 650.74 crore  
 3. Rs. 1046.22 crore  
 4. Rs. 3,399.65 crore

Question ID : 630680224360

Option 1 ID : 630680870152

Option 2 ID : 630680870154

Option 3 ID : 630680870151

Option 4 ID : 630680870153

Status : Not Answered

Chosen Option : --

Q.29 Which of the following statements is/are correct with regard to the online maternity benefit claim facility of the Employees' State Insurance Corporation (ESIC)?

- I. Bhupender Yadav, Union Minister of Labour & Employment and Environment, Forest & Climate Change, launched the online maternity benefit claim facility of the Employees' State Insurance Corporation (ESIC) in November 2022.  
 II. The online maternity benefit claim facility of the Employees' State Insurance Corporation (ESIC) was launched during the commemoration of the 102nd birth anniversary of Dattopant Thengadi at Vigyan Bhawan, New Delhi in November 2022.  
 III. Payment at the rate of 100% of wages is paid for 36 weeks as maternity benefit to the insured woman by the ESIC to compensate for the loss of income during the childbirth.

- Ans  1. Only I  
 2. Only III  
 3. Only II and III

✓ 4. Only I and II

Question ID : 630680224351  
 Option 1 ID : 630680870115  
 Option 2 ID : 630680870116  
 Option 3 ID : 630680870118  
 Option 4 ID : 630680870117  
 Status : Not Answered  
 Chosen Option : --

Q.30 In December 2022, the Chief Justice of India launched \_\_\_\_\_ to enable law enforcement agencies and government agencies to track cases.

- Ans
- ✗ 1. Supreme Court Mobile App 4.0
  - ✗ 2. Supreme Court Mobile App 5.0
  - ✗ 3. Supreme Court Mobile App 3.0
  - ✓ 4. Supreme Court Mobile App 2.0

Question ID : 630680224348  
 Option 1 ID : 630680870105  
 Option 2 ID : 630680870106  
 Option 3 ID : 630680870104  
 Option 4 ID : 630680870103  
 Status : Not Answered  
 Chosen Option : --

Section : Reasoning

Q.1 In a group of 115 students sitting in a line facing the same direction, only 33 students are sitting to the right of Ali. 12 students are sitting to the left of Parth. Yug is at the 65<sup>th</sup> position from the right end. Now, if Parth and Yug interchange their positions, how many students will be sitting to the right of Parth?

- Ans
- ✗ 1. 65
  - ✗ 2. 62
  - ✓ 3. 64
  - ✗ 4. 63

Question ID : 630680224254  
 Option 1 ID : 630680869730  
 Option 2 ID : 630680869727  
 Option 3 ID : 630680869729  
 Option 4 ID : 630680869728  
 Status : Not Answered  
 Chosen Option : --

Q.2 Select the option in which the words share the same relationship as that shared by the given triad of wo

Iran : Tehran : Rial

- Ans
- ✗ 1. Italy : Rome : Dollar
  - ✗ 2. Bangladesh : Dhaka : Yen



3. Oman : Kabul : Taka

4. Malaysia : Kuala Lumpur : Ringgit

Question ID : 630680224280  
Option 1 ID : 630680869831  
Option 2 ID : 630680869832  
Option 3 ID : 630680869834  
Option 4 ID : 630680869833  
Status : Not Answered  
Chosen Option : --

Q.3 Select the number from among the given options that can replace the question mark (?) in the following se

33, 44, 59, 83, 123, ?

1. 196

2. 148

3. 188

4. 162

Question ID : 630680224302  
Option 1 ID : 630680869922  
Option 2 ID : 630680869919  
Option 3 ID : 630680869921  
Option 4 ID : 630680869920  
Status : Answered  
Chosen Option : 3

Q.4 Select the correct mirror image of the given combination when the mirror is placed at line PQ as sho

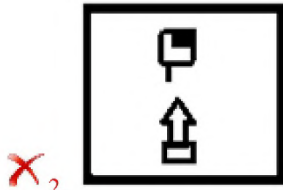
g f Q N h a m | P  
Q

1. m s 4 N Q f g

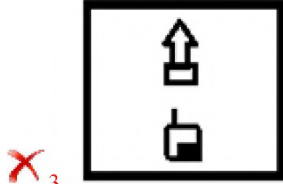
2. m s h N Q f g

3. w e h N Q f g

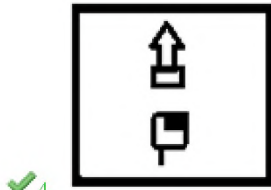
4. m s h N Q f g



✗ 2.



✗ 3.



✓ 4.

Question ID : 630680224290

Option 1 ID : 630680869873

Option 2 ID : 630680869871

Option 3 ID : 630680869874

Option 4 ID : 630680869872

Status : Answered

Chosen Option : 4

**Q.8** Six friends named A, B, C, D, E and F live on different floors of a building. The ground floor is numbered as 1; the floor above it is numbered as 2 and so on. The topmost floor is numbered as 6. F lives on some floor below C. D lives on the floor just above F. E lives on the topmost floor. Only one person lives between C and E. D lives on some floor below A. F does not live on floor no. 1. On which floor does B live?

Answers

✗ 1. Floor no. 5

✗ 2. Floor no. 4

✗ 3. Floor no. 2

✓ 4. Floor no. 1

Question ID : 630680224257

Option 1 ID : 630680869741

Option 2 ID : 630680869742

Option 3 ID : 630680869740

Option 4 ID : 630680869739

Status : Answered

Chosen Option : 2

**Q.9** In a queue of 105 persons standing at a ticket counter, only 28 persons are standing before Charmie, whereas only 10 persons are standing before Manya. How many persons are standing after Charmie but before Manya?

Answers

✗ 1. 42

✗ 2. 44

✓ 3. 43

✗ 4. 41

Question ID : 630680224252

Option 1 ID : 630680869720

Option 2 ID : 630680869722

Option 3 ID : 630680869721

Option 4 ID : 630680869719

Status : Answered

Chosen Option : 1

Q.1 Select the option in which the letter-clusters share the same relationship as that shared by the given triad of letter-clusters.

PORTS : STROP : TUSPQ

Ans ✗ 1. DOERS : SRODE : TSPEF

✓ 2. FLASK : KSALF : LTBMG

✗ 3. GAINS : AGNIS : TJOHB

✗ 4. CLASS : ASSLC : BTTMD

Question ID : 630680224279

Option 1 ID : 630680869828

Option 2 ID : 630680869830

Option 3 ID : 630680869829

Option 4 ID : 630680869827

Status : Answered

Chosen Option : 2

Q.11 Identify the number that does NOT belong to the following series.

15, 27, 50, 95, 184, 366

Ans ✓ 1. 366

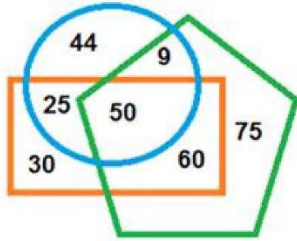
✗ 2. 184

✗ 3. 50

✗ 4. 95



Q.1 Study the given diagram carefully and answer the question that follows. The rectangle represents 'Doctors'; the circle represents 'Females' and the pentagon represents 'Tax-payers'. The numbers in different sections indicate the number of persons.



How many total doctors are tax-payers also?

- Ans
- 1. 60
  - 2. 110
  - 3. 50
  - 4. 75

Question ID : 630680224262

Option 1 ID : 630680869760

Option 2 ID : 630680869761

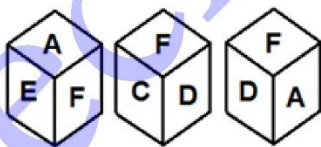
Option 3 ID : 630680869759

Option 4 ID : 630680869762

Status : Not Answered

Chosen Option : --

Q.1 Three different positions of the same dice are shown, the six faces of which are labelled by letters from A to F. See the letter that will be on the face opposite to the one having 'A'.



- Ans
- 1. F
  - 2. C
  - 3. D
  - 4. B

Q.1 Select the combination of letters that when sequentially placed in the blanks of the given series will complete the s  
4

P \_MR\_ E \_FM\_ W \_PF\_ R\_ E

- Ans  1. FWPRPMW  
 2. FWMREMW  
 3. FWPREMW  
 4. FWPREPW

Question ID : 630680224268

Option 1 ID : 630680869786

Option 2 ID : 630680869785

Option 3 ID : 630680869783

Option 4 ID : 630680869784

Status : Not Answered

Chosen Option : --

Q.1 Select the term from among the given options that can replace the question mark (?) in the following se  
5

FWCU-5, IZZR-15, LCWO-35, ?, RIQI-155

- Ans  1. OGSL-85  
 2. OFTM-70  
 3. OFTL-75  
 4. OFSL-75

Question ID : 630680224266

Option 1 ID : 630680869778

Option 2 ID : 630680869777

Option 3 ID : 630680869776

Option 4 ID : 630680869775

Status : Not Answered

Chosen Option : --

Q.1 Mitali walks 50 m towards the east from her home and then, she turns right and walks 75 m. After that, she turns  
6  
and walks 105 m. She then turns left and walks 25 m. She then turns right and walks 32 m. She finally turns right  
walks 100 m to reach a shop. In which direction and at what distance is the shop from her home?

- Ans  1. East, 87 m  
 2. East, 137 m  
 3. West, 137 m  
 4. West, 87 m

Question ID : 630680224275

Q.1 Vishal, Anand, Raj and Prateek are sitting around a square table, facing the centre. Each of them is sitting at the middle of one of the sides of the table. Prateek is sitting to the immediate left of Vishal. Prateek is not sitting to the immediate right of Raj. Who is sitting to the immediate left of Anand?

Ans  1. Either Raj or Vishal

2. Raj

3. Prateek

4. Either Prateek or Raj

Question ID : 630680224247

Option 1 ID : 630680869699

Option 2 ID : 630680869701

Option 3 ID : 630680869702

Option 4 ID : 630680869700

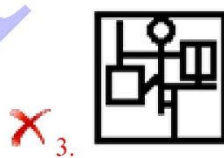
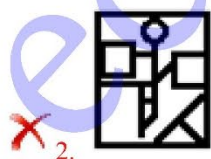
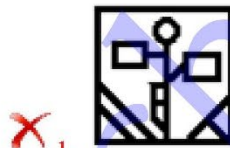
Status : Not Answered

Chosen Option : --

Q.1 Select the option in which the given figure is embedded (Rotation is NOT allowed)



Ans





Q.1  
9 Shantanu walks 25 m towards the east from his home and then he turns right and walks 30 m. After that, he turns left and walks 44 m. He then turns left and walks 30 m. He finally turns right and walks 35 m to reach a bank. How far is the bank from his home?

- Ans
- 1. 92 m
  - 2. 98 m
  - 3. 101 m
  - 4. 104 m

Question ID : 630680224274

Option 1 ID : 630680869810

Option 2 ID : 630680869809

Option 3 ID : 630680869807

Option 4 ID : 630680869808

Status : Not Answered

Chosen Option : --

Q.2  
0 Select the number from among the given options that can replace the question mark (?) in the following sequence:

24, 39, 64, 99, 144, ?

- Ans
- 1. 172
  - 2. 160
  - 3. 188
  - 4. 199

Question ID : 630680224300

Option 1 ID : 630680869912

Option 2 ID : 630680869911

Option 3 ID : 630680869913

Option 4 ID : 630680869914

Status : Answered

Chosen Option : 1

Q.2  
1 Yukti walks 40 m towards the north from her home and then, she turns left and walks 28 m. After that, she turns right and walks 70 m. Next, she turns right and walks 55 m. She turns right again and walks 73 m. In which direction should she walk now in order to reach 27 m east of her home?

- Ans
- 1. 35 m, south
  - 2. 27 m, north
  - 3. 37 m, south
  - 4. 37 m, west

Q.2 Select the option that is NOT embedded in the given figure (Rotation is NOT allow



Ans



X 1.



X 2.



✓ 3.



X 4.

Question ID : 630680224297

Option 1 ID : 630680869900

Option 2 ID : 630680869902

Option 3 ID : 630680869901

Option 4 ID : 630680869899

Status : Not Answered

Chosen Option : --

Q.2 Among six iron rods labelled as P, Q, R, S, T and U, each rod is of different weight. The weight of P is half the w  
3  
of Q. The weight of R is twice the weight of S. The weight of T is 5 kg less than the weight of R. The weight of U  
kg less than the weight of S. The weight of Q is half the weight of S. Which is the heaviest rod among all?

Ans X 1. S

✓ 2. R

X 3. Q

X 4. T

Q.2  
4 Read the given statements and conclusions carefully. Assuming that the information given in the statements is true, if it appears to be at variance with commonly known facts, decide which of the given conclusions logically follow(s) from the statements.

**Statements:**

All utensils are spoons.

All plates are buckets.

No spoon is a bucket.

**Conclusions:**

I. No utensil is a bucket.

II. No plate is a utensil.

III. Some buckets are plates.

- Ans
- 1. Only conclusions I and III follow
  - 2. Only conclusions I and II follow
  - 3. Either conclusion II or conclusion III follows
  - 4. All of conclusions I, II and III follow

Question ID : 630680224260

Option 1 ID : 630680869752

Option 2 ID : 630680869751

Option 3 ID : 630680869753

Option 4 ID : 630680869754

Status : Not Answered

Chosen Option : --

Q.2  
5 Read the given statement and conclusions carefully. Decide which of the given conclusions logically follow(s) from the statement.

**Statement:**

Consuming large amounts of processed or fast foods, which are high in fat and sugar, can cause obesity. Lack of physical activity also contributes to increase in obesity.

**Conclusions:**

I. If a person is not active enough and does not use the energy provided by the food that he/she eats, he/she can be prone to obesity.

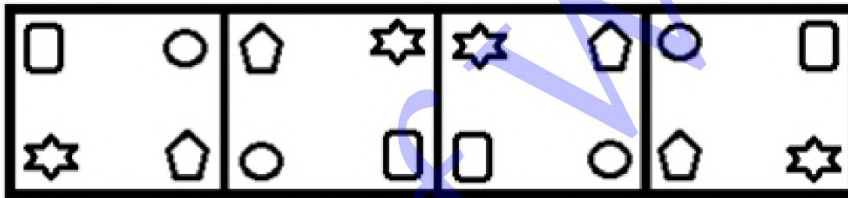
II. Diet and lifestyle factors contribute to development of obesity and overweight.



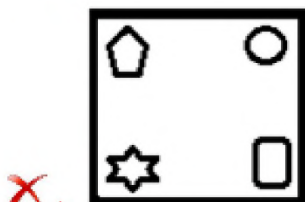
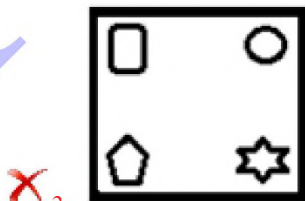
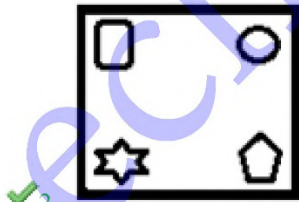
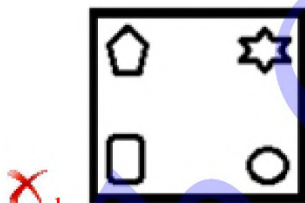
- Ans
- 1. Only conclusion I follows
  - 2. Neither conclusion I nor conclusion II follows
  - 3. Only conclusion II follows
  - 4. Both conclusions I and II follow

Question ID : 630680224286  
Option 1 ID : 630680869855  
Option 2 ID : 630680869858  
Option 3 ID : 630680869856  
Option 4 ID : 630680869857  
Status : Not Answered  
Chosen Option : --

Q.26 Select the figure that will come next in the following series.



Ans



Q.2 Seven girls named K, L, M, N, O, P and R are sitting around a circular table, facing the centre, but not necessarily in the same order. N is sitting fourth to the left of M. Only K is sitting between N and R. L is sitting second to the right of O. Who is sitting third to the left of K?

- Ans
- 1. L
  - 2. O
  - 3. P
  - 4. M

Question ID : 630680224246

Option 1 ID : 630680869695

Option 2 ID : 630680869696

Option 3 ID : 630680869697

Option 4 ID : 630680869698

Status : Not Answered

Chosen Option : --

Q.2 Six boxes contain six different objects, one each, including pens, pencils, erasers, sharpeners, chalks and markers. The boxes are kept one above the other, but not necessarily in the same order. Only two boxes are kept between the boxes that contain erasers and pens. Only three boxes are kept between the boxes that contain pencils and chalks. The box with erasers is kept immediately above the box with chalks. The box with erasers is kept at some place above the box with pens. The box with sharpeners is kept at some place above the box with markers. Which object is there in the second box from the top?

- Ans
- 1. Erasers
  - 2. Pencils
  - 3. Chalks
  - 4. Sharpeners

Question ID : 630680224258

Option 1 ID : 630680869743

Option 2 ID : 630680869746

Option 3 ID : 630680869744

Option 4 ID : 630680869745

Status : Not Answered

Chosen Option : --

Q.2 Select the word-pair in which the two words share a different relationship from that shared by the two words in the other three of the word-pairs.

- Ans
- 1. Hazardous : Perilous
  - 2. Tedious : Panicked

✗<sub>3.</sub> Sparkling : Radiant

✗<sub>4.</sub> Indolent : Slothful

Question ID : 630680224283

Option 1 ID : 630680869846

Option 2 ID : 630680869844

Option 3 ID : 630680869845

Option 4 ID : 630680869843

Status : Not Answered

Chosen Option : --

Q.3 In this question, a group of letters is coded by using numbers as per the table given below. Considering these code

0

the conditions which follow, determine the correct sequential combination of codes for the word 'MEANS'.

(Left) MEANS (Right)

(Consider counting letters from left to right.)

Letters	S	M	A	E	N
Codes	4	7	3	2	8

Conditions:

- (i) If the first and last letters of the given word are consonants, the codes for these two (the first and last let should be interchanged.
- (ii) If the fourth letter of the given word is a vowel, then the fourth letter should be coded as '9'.

Ans ✗<sub>1.</sub> 42397

✗<sub>2.</sub> 72384

✗<sub>3.</sub> 42837

✓<sub>4.</sub> 42387

Question ID : 630680224271

Option 1 ID : 630680869798

Option 2 ID : 630680869795

Option 3 ID : 630680869797

Option 4 ID : 630680869796

Status : Answered

Chosen Option : 1

Section : Subject Content & Methodology

Q.1 Select the option that is true regarding the following two statements labelled Assertion (A) and Reason (R).

(A): Calcutta, Bombay, Madras and Delhi were interconnected by the 'broad-gauge' system of railways.

(R): By the 1920s, all railways in India were brought under government management.



- Ans  1. Both Assertion (A) and Reason (R) are true and Reason (R) is a correct explanation of Assertion (A).
2. Assertion (A) is true but Reason (R) is false
3. Assertion (A) is false but Reason (R) is true
4. Both Assertion (A) and Reason (R) are true but Reason (R) is not a correct explanation of Assertion (A)

Question ID : 630680224742

Option 1 ID : 630680871675

Option 2 ID : 630680871677

Option 3 ID : 630680871678

Option 4 ID : 630680871676

Status : Not Answered

Chosen Option : --

Q.2 In social sciences teaching, geography helps to develop a balanced perspective related to issues concerning the environment, resources and development at different levels, \_\_\_\_\_.

- Ans  1. from national to universal
2. from local to global
3. from national to global
4. from local to national

Question ID : 630680224782

Option 1 ID : 630680871835

Option 2 ID : 630680871837

Option 3 ID : 630680871836

Option 4 ID : 630680871838

Status : Answered

Chosen Option : 3

Q.3 Who among the following is associated with the Zeliangrong movement?

- Ans  1. Tai Khamti
2. Tirath Singh
3. Rani Gaidinliu
4. Tomma Sora

Question ID : 630680224700

Option 1 ID : 630680871510

Option 2 ID : 630680871507

Option 3 ID : 630680871508

Option 4 ID : 630680871509

Status : Not Answered

Chosen Option : --

Q.4 Purchasing Power Parity (PPP) theory is based on which of the following laws?

- Ans  1. Law of One Price

- 2. Law of Differential Price
- 3. Law of Overnight Currency Fluctuations
- 4. Law of Diminishing Returns on Foreign Currency

Question ID : 630680224739

Option 1 ID : 630680871665

Option 2 ID : 630680871663

Option 3 ID : 630680871666

Option 4 ID : 630680871664

Status : Not Answered

Chosen Option : --

**Q.5** What is the name given to the procedure for compacting and cementing sediment to create sedimentary rock?

Ans  1. Lithification

- 2. Melting
- 3. Memorising
- 4. Galvanisation

Question ID : 630680224709

Option 1 ID : 630680871546

Option 2 ID : 630680871545

Option 3 ID : 630680871543

Option 4 ID : 630680871544

Status : Answered

Chosen Option : 2

**Q.6** 'Child-centred' pedagogy means giving primacy to children's \_\_\_\_\_, their voices, and \_\_\_\_\_.

Ans  1. experiences; their active participation

- 2. knowledge, their family background
- 3. experiences; their participatory assessment
- 4. knowledge; their academic evaluation

Question ID : 630680224771

Option 1 ID : 630680871791

Option 2 ID : 630680871794

Option 3 ID : 630680871793

Option 4 ID : 630680871792

Status : Answered

Chosen Option : 1

**Q.7** Which of the following missions was launched by the Government of India, which aims to achieve universal foundational literacy and numeracy in primary classes and to ensure that all children attain grade level competencies in reading, writing and numeracy?

Ans  1. National Initiative for Progressive Education in Urban and Non-urban areas

2. National Institute for Progressive Reading in Urban and Non-urban areas

3. National Initiative for Proficiency in Reading with Understanding and Numeracy

4. National Initiative for Proficiency in Education with Understanding and Numeracy

Question ID : 630680224741

Option 1 ID : 630680871673

Option 2 ID : 630680871672

Option 3 ID : 630680871674

Option 4 ID : 630680871671

Status : Answered

Chosen Option : 4

**Q.8 The Constituent Assembly of India was elected to frame the Constitution of India. Of the 389 members of the Indian Constituent Assembly, \_\_\_\_\_ were women.**

Ans  1. 15

2. 31

3. 7

4. 12

Question ID : 630680224749

Option 1 ID : 630680871703

Option 2 ID : 630680871706

Option 3 ID : 630680871705

Option 4 ID : 630680871704

Status : Answered

Chosen Option : 1

**Q.9 As of February 2023, what is the Policy Repo Rate in India?**

Ans  1. 5.25%

2. 6.00%

3. 3.35%

4. 6.50%

Question ID : 630680224733

Option 1 ID : 630680871639

Option 2 ID : 630680871640

Option 3 ID : 630680871641

Option 4 ID : 630680871642

Status : Answered

Chosen Option : 1

**Q.10 Identify the correct statement about Homosphere.**

Ans  1. Homosphere begins from about 102 km away from the Earth's surface.

2. Homosphere lies between the heterosphere and the surface of the earth.



3. Homosphere is the uppermost part of the Earth's atmosphere.

4. Pure dry air in the homosphere contains only one gas, that is Ozone.

Question ID : 630680224711

Option 1 ID : 630680871552

Option 2 ID : 630680871551

Option 3 ID : 630680871553

Option 4 ID : 630680871554

Status : Not Answered

Chosen Option : --

**Q.11 In context of the French society, which of the following statements is/are NOT correct?**

**I. Taille was a tax payable to the church, varying from 8 to 12.5 per cent.**

**II. Corvee were the services to be rendered to the seigneurs.**

Ans  1. Both I and II

2. Only I

3. Only II

4. Neither I nor II

Question ID : 630680224688

Option 1 ID : 630680871461

Option 2 ID : 630680871460

Option 3 ID : 630680871459

Option 4 ID : 630680871462

Status : Answered

Chosen Option : 3

**Q.12 Which of the following Fundamental Rights is available to citizens of India but NOT available to foreigners?**

Ans  1. Prohibition of discrimination on grounds of religion, race, caste, sex or place of birth (Article 15)

2. Right to elementary education (Article 21A)

3. Equality before law and equal protection of laws (Article 14)

4. Protection in respect of conviction for offences (Article 20)

Question ID : 630680224753

Option 1 ID : 630680871721

Option 2 ID : 630680871722

Option 3 ID : 630680871719

Option 4 ID : 630680871720

Status : Answered

Chosen Option : 1

**Q.13 Teaching and learning processes in the classroom should be planned to respond to the \_\_\_\_\_ of students.**

Ans  1. learning difficulties

2. weakness

3. socio-economic context

4. diverse needs

Question ID : 630680224778

Option 1 ID : 630680871820

Option 2 ID : 630680871821

Option 3 ID : 630680871822

Option 4 ID : 630680871819

Status : Answered

Chosen Option : 2

**Q.14 The Panchayats (rural local governments) were granted constitutional status by the 73rd Constitutional Amendment Act of 1992, which included a new \_\_\_\_\_ in the Indian Constitution.**

Ans  1. Part II

2. Part X

3. Part IX

4. Part VII

Question ID : 630680224759

Option 1 ID : 630680871744

Option 2 ID : 630680871746

Option 3 ID : 630680871743

Option 4 ID : 630680871745

Status : Answered

Chosen Option : 3

**Q.15 By 1935, the first Nepalese political party, the \_\_\_\_\_ came into being among Nepalese exiles.**

Ans  1. Rastriya Swatantra Party

2. Praja Parishad

3. Communist Party of Nepal

4. Nepali Congress

Question ID : 630680224765

Option 1 ID : 630680871770

Option 2 ID : 630680871767

Option 3 ID : 630680871769

Option 4 ID : 630680871768

Status : Answered

Chosen Option : 3

**Q.16 Social science learning must be placed so that it allows learners to engage with concepts and deepen understanding \_\_\_\_\_ remembering only to forget after examinations.**

Ans  1. hereafter

2. along with

3. but also

✓ 4. rather than

Question ID : 630680224785

Option 1 ID : 630680871849

Option 2 ID : 630680871847

Option 3 ID : 630680871848

Option 4 ID : 630680871850

Status : Answered

Chosen Option : 2

**Q.17 What muskets were replaced by the new Enfield rifle by the British government in India against the backdrop of the mutiny of 1857?**

Ans

✗ 1. Snider-Enfield

✗ 2. Ferguson rifle

✗ 3. Martini-Henry

✓ 4. Brown Bess

Question ID : 630680224695

Option 1 ID : 630680871489

Option 2 ID : 630680871488

Option 3 ID : 630680871490

Option 4 ID : 630680871487

Status : Answered

Chosen Option : 2

**Q.18 At a meeting in Nadiad on 22 March 1918, MK Gandhi urged the volunteers to make a sacred oath in the setting of which well-known satyagraha?**

Ans

✓ 1. Kheda Satyagraha

✗ 2. Champaran Satyagraha

✗ 3. Ahmedabad Satyagraha

✗ 4. Dandi satyagraha

Question ID : 630680224702

Option 1 ID : 630680871518

Option 2 ID : 630680871515

Option 3 ID : 630680871516

Option 4 ID : 630680871517

Status : Answered

Chosen Option : 1

**Q.19 The 1990 Constitution of Nepal does NOT describes the country as:**

Ans

✗ 1. indivisible

✗ 2. multi-ethnic

✗ 3. democratic

✓ 4. secular



**Q.20** Social science teaching should aim at generating in students \_\_\_\_\_, making them alert to the social forces that threaten human values.

- Ans
- 1. a strong sense of commitment
  - 2. a creative sense of national energy
  - 3. a familiarity with school textbook
  - 4. a critical moral and mental energy

Question ID : 630680224780

Option 1 ID : 630680871829

Option 2 ID : 630680871830

Option 3 ID : 630680871827

Option 4 ID : 630680871828

Status : Answered

Chosen Option : 2

**Q.21** In the year \_\_\_\_\_, Micro, Small and Medium Enterprises Development (MSMED) Act came into force whereby the growth of small enterprises were facilitated so that they could grow into medium enterprises thus improving their competitive strength.

- Ans  1. 2006

- 2. 1969
- 3. 2009
- 4. 2002

Question ID : 630680224748

Option 1 ID : 630680871702

Option 2 ID : 630680871699

Option 3 ID : 630680871701

Option 4 ID : 630680871700

Status : Answered

Chosen Option : 4

**Q.22** A social science teacher needs to organise the content in such a manner that it raises students' awareness through questioning of \_\_\_\_\_.

- Ans
- 1. new information
  - 2. unfamiliar concepts
  - 3. familiar social reality
  - 4. old information

Q.23 A good teacher must always remember that all children are \_\_\_\_\_ to learn.

- Ans
- 1. naturally frenzied
  - 2. always distracted
  - 3. always demotivated
  - 4. naturally motivated

Question ID : 630680224773

Option 1 ID : 630680871802

Option 2 ID : 630680871801

Option 3 ID : 630680871800

Option 4 ID : 630680871799

Status : Answered

Chosen Option : 4

Q.24 Weight-for-age is a composite index of:

- (i) height-for-age
  - (ii) weight-for-height
  - (iii) weight-for-muscles
- Select the correct answer.

- Ans
- 1. Only I and III
  - 2. I, II and III
  - 3. Only I and II
  - 4. Only II and III

Question ID : 630680224740

Option 1 ID : 630680871669

Option 2 ID : 630680871670

Option 3 ID : 630680871667

Option 4 ID : 630680871668

Status : Answered

Chosen Option : 2

Q.25 Who was the first president of the Bahishkrit Hitakarini Sabha, which was formed to promote the interests of the untouchables?

- Ans
- 1. CH Setalved
  - 2. MK Gandhi
  - 3. Dayanand Saraswati
  - 4. Narayan Guru

Q.26 If the government's policy objective is to enhance farmers' income, the ratio of output prices to input prices must be \_\_\_\_\_.

Ans  1. less than zero

2. greater than one

3. between zero and one

4. equal to zero

Question ID : 630680224745

Option 1 ID : 630680871687

Option 2 ID : 630680871688

Option 3 ID : 630680871690

Option 4 ID : 630680871689

Status : Answered

Chosen Option : 2

Q.27 Which of the following options does NOT represent interests of the Moderates in Indian National Congress?

Ans  1. They wanted to broaden Indian participation in legislatures.

2. They wanted to strengthen the India Council.

3. They never visualised a clinical separation from the British empire.

4. They wanted new council for North-Western provinces.

Question ID : 630680224696

Option 1 ID : 630680871494

Option 2 ID : 630680871492

Option 3 ID : 630680871491

Option 4 ID : 630680871493

Status : Answered

Chosen Option : 3

Q.28 The liberal democratic or polyarchical regimes are found in \_\_\_\_\_.

Ans  1. China

2. Australia

3. Brazil

4. North Korea

Question ID : 630680224762

Option 1 ID : 630680871757

Option 2 ID : 630680871755

Option 3 ID : 630680871756

Option 4 ID : 630680871758

Status : Answered

Chosen Option : 1

Q.29 Who among the following was NOT a member of the Sarkaria Commission, which was appointed to review the Centre-State relations?

Ans  1. PN Kirpal



- 2. RS Sarkaria
- 3. B Sivaraman
- 4. SR Sen

Question ID : 630680224761  
 Option 1 ID : 630680871752  
 Option 2 ID : 630680871751  
 Option 3 ID : 630680871753  
 Option 4 ID : 630680871754  
 Status : Not Answered  
 Chosen Option : --

**Q.30 A good teacher needs to recognise the child as a learner, and knowledge as the outcome of the \_\_\_\_\_.**

- Ans
- 1. teacher's teaching activity
  - 2. teaching learning activity
  - 3. child's own activity
  - 4. textbook-based activity

Question ID : 630680224767  
 Option 1 ID : 630680871775  
 Option 2 ID : 630680871777  
 Option 3 ID : 630680871776  
 Option 4 ID : 630680871778  
 Status : Answered  
 Chosen Option : 3

**Q.31 Relevant local content should be part of the teaching-learning process in a social science classroom, ideally transacted through \_\_\_\_\_.**

- Ans
- 1. textbooks drawing on creativity
  - 2. textbooks drawing on standard knowledge
  - 3. activities drawing on local resources
  - 4. activities drawing on analysis

Question ID : 630680224775  
 Option 1 ID : 630680871809  
 Option 2 ID : 630680871807  
 Option 3 ID : 630680871810  
 Option 4 ID : 630680871808  
 Status : Answered  
 Chosen Option : 3

**Q.32 The Gini-coefficient gives the summary figure for which of the following curves?**

- Ans
- 1. Laffer curve
  - 2. Indifference curve
  - 3. Lorenz curve

4. Phillips curve

Question ID : 630680224736

Option 1 ID : 630680871652

Option 2 ID : 630680871651

Option 3 ID : 630680871654

Option 4 ID : 630680871653

Status : Not Answered

Chosen Option : --

Q.33 For cyclones, the pattern of wind direction in the Northern hemisphere \_\_\_\_\_ and in the Southern hemisphere is \_\_\_\_\_.

Ans  1. anticlockwise; clockwise

2. clockwise; anticlockwise

3. clockwise; clockwise

4. anticlockwise; anticlockwise

Question ID : 630680224712

Option 1 ID : 630680871557

Option 2 ID : 630680871558

Option 3 ID : 630680871555

Option 4 ID : 630680871556

Status : Answered

Chosen Option : 3

Q.34 Identify the INCORRECTLY matched name of the country and year in which universal adult franchise was introduced in it.

Ans  1. France – 1935

2. India – 1950

3. Sweden – 1920

4. Germany – 1919

Question ID : 630680224760

Option 1 ID : 630680871749

Option 2 ID : 630680871750

Option 3 ID : 630680871748

Option 4 ID : 630680871747

Status : Answered

Chosen Option : 2

Q.35 Arrange the following hills of peninsular India from West to East.

I. Mahadeo hills

II. Satmala hills

III. Garhjat hills

Ans  1. III - I - II

2. I - II - III

3. II - I - III

4. II - III - I

Question ID : 630680224716

Option 1 ID : 630680871572

Option 2 ID : 630680871571

Option 3 ID : 630680871573

Option 4 ID : 630680871574

Status : Not Answered

Chosen Option : --

Q.36 Which of the following statements is/are NOT true in context of the Champaran Satyagraha?

I. Frank G Sly was appointed to carry out an independent review by the colonial government.

II. The Champaran Agrarian Act of 1919 was the immediate outcome of the movement.

Ans

1. Neither I nor II

2. Only II

3. Only I

4. Both I and II

Question ID : 630680224703

Option 1 ID : 630680871522

Option 2 ID : 630680871519

Option 3 ID : 630680871521

Option 4 ID : 630680871520

Status : Answered

Chosen Option : 2

Q.37 Which of the following ideas was NOT opposed by fascists in Italy?

Ans  1. Extreme nationalism

2. Democracy

3. Liberalism

4. Forms of socialism

Question ID : 630680224690

Option 1 ID : 630680871468

Option 2 ID : 630680871467

Option 3 ID : 630680871469

Option 4 ID : 630680871470

Status : Answered

Chosen Option : 4

Q.38 Which of the following statements is/are true for the Nazi doctrine?

I. Nietzsche's ideas contributed to the Nazi doctrine.

II. Sartre gave the ideas of extreme militarism to Nazi doctrine.

Ans

1. Neither I nor II

2. Only II



✓ 3. Only I

✗ 4. Both I and II

Question ID : 630680224691

Option 1 ID : 630680871474

Option 2 ID : 630680871472

Option 3 ID : 630680871471

Option 4 ID : 630680871473

Status : Answered

Chosen Option : 4

Q.39 Ujjain, Dewas and Indore are famous for which textile manufacturing industry?

Ans ✗ 1. Wool

✗ 2. Linen

✓ 3. Cotton

✗ 4. Silk

Question ID : 630680224724

Option 1 ID : 630680871605

Option 2 ID : 630680871606

Option 3 ID : 630680871604

Option 4 ID : 630680871603

Status : Answered

Chosen Option : 1

Q.40 Which of the following statements is NOT true about the mantle of the Earth?

Ans ✗ 1. Magma is the term used to describe the material in the upper mantle.

✗ 2. The upper portion of the mantle is called asthenosphere.

✓ 3. Mantle is the solid, outermost part of the earth.

✗ 4. From Moho's discontinuity, the mantle extends to a depth of 2,900 km.

Question ID : 630680224708

Option 1 ID : 630680871542

Option 2 ID : 630680871539

Option 3 ID : 630680871540

Option 4 ID : 630680871541

Status : Answered

Chosen Option : 3

Q.41 Which of the following indexes is NOT used for poverty estimation?

Ans ✓ 1. Consumer Price Index

✗ 2. Poverty Gap Index

✗ 3. Sen's Index

✗ 4. Watts Index

Q.42 Where is the Kolleru lake located in India?

- Ans
- 1. The Northern plains
  - 2. Rajasthan plains
  - 3. The Western coastal plains
  - 4. The Eastern coastal plains

Question ID : 630680224717

Option 1 ID : 630680871577

Option 2 ID : 630680871578

Option 3 ID : 630680871575

Option 4 ID : 630680871576

Status : Answered

Chosen Option : 2

Q.43 In context of the First World War, the battle of Jutland took place in which sea?

- Ans  1. North sea

- 2. Tyrrhenian sea
- 3. Adriatic sea
- 4. Ionian sea

Question ID : 630680224692

Option 1 ID : 630680871476

Option 2 ID : 630680871477

Option 3 ID : 630680871475

Option 4 ID : 630680871478

Status : Not Answered

Chosen Option : --

Q.44 Who passed the Indian Universities Act in 1904, imposing stiff control over Indian Universities?

- Ans
- 1. Lord Minto II
  - 2. Lord Elgin II
  - 3. Lord Curzon
  - 4. Lord Reading

Q.45 Who among the following was NOT a member of the Constituent Assembly who signed onto the Indian Constitution when it was completed?

Ans

- 1. G Durgabai
- 2. Parul Chaudhari
- 3. Ammu Swaminathan
- 4. Renuka Ray

Question ID : 630680224752

Option 1 ID : 630680871715

Option 2 ID : 630680871716

Option 3 ID : 630680871717

Option 4 ID : 630680871718

Status : Answered

Chosen Option : 2

Q.46 Who among the following were invited by the British government as representatives of the Depressed Classes to attend the Round Table Conference in London in 1930?

Ans

- 1. BR Ambedkar and R Srinivasan
- 2. BR Ambedkar and BC Mandal
- 3. Jyotiba Phule and MG Ranade
- 4. MK Gandhi and Jawahar Lal Nehru

Question ID : 630680224701

Option 1 ID : 630680871512

Option 2 ID : 630680871514

Option 3 ID : 630680871511

Option 4 ID : 630680871513

Status : Answered

Chosen Option : 4

Q.47 ପ୍ରଥମ ବିଶ୍ୱଯୁଦ୍ଧର ଅନ୍ତ ପରିଶେଷରେ ନିମ୍ନଲିଖିତ ମଧ୍ୟରୁ କେଉଁ ବିକଳତା ଭୁଲ ଅଟେ?

Ans

- 1. ସମ୍ରାଟ କୈସର ଓଲିୟମ II ପଦରୁ ଇସ୍ତଫା ଦେଲେ ଏବଂ ଜର୍ମାନୀ ଆତ୍ମସମର୍ପଣ କଲା ।
- 2. ହାପସବର୍ଗ ସାମ୍ରାଜ୍ୟ ବିଭାଜିତ ହେଲା ଏବଂ ସମ୍ରାଟ ଫର୍ଡିନାଣ୍ଡ ଇସ୍ତଫା ଦେଲେ ।
- 3. 1918 ର ଉତ୍ତରାଧିକାର କେନ୍ଦ୍ରୀୟ ଶକ୍ତିମାନେ ଆତ୍ମସମର୍ପଣ କରିବା ଆରମ୍ଭ କରିଥିଲେ ।
- 4. ଆମେରିକା ବିଭିନ୍ନ କ୍ଷେତ୍ରରେ ମିତ୍ର ରାଷ୍ଟ୍ରର ସାମରିକ ଶକ୍ତି ବୃଦ୍ଧି କରିଥିଲା ।

Question ID : 630680224693

Option 1 ID : 630680871482

Option 2 ID : 630680871481

Option 3 ID : 630680871480

Option 4 ID : 630680871479

Status : Answered

Chosen Option : 3

Q.48 What is the term used to describe the phenomenon by which erosion wears away relief variations on the earth's surface?



- Ans
- 1. Weathering
  - 2. Melting
  - 3. Gradation
  - 4. Corrosion

Question ID : 630680224710

Option 1 ID : 630680871548

Option 2 ID : 630680871550

Option 3 ID : 630680871549

Option 4 ID : 630680871547

Status : Answered

Chosen Option : 4

Q.49 Which soil is formed through the process of leaching and is good for rubber and coffee?

- Ans
- 1. Laterite soil
  - 2. Red soil
  - 3. Alluvial soil
  - 4. Black soil

Question ID : 630680224720

Option 1 ID : 630680871588

Option 2 ID : 630680871589

Option 3 ID : 630680871590

Option 4 ID : 630680871587

Status : Answered

Chosen Option : 1

Q.50 Initially, the planet earth was a hot, rocky, and barren entity with a thin atmosphere of \_\_\_\_\_ and helium.

- Ans
- 1. tungsten
  - 2. carbon monoxide
  - 3. phosphorus
  - 4. hydrogen

Question ID : 630680224707

Option 1 ID : 630680871537

Option 2 ID : 630680871538

Option 3 ID : 630680871536

Option 4 ID : 630680871535

Status : Answered

Chosen Option : 2

Q.51 Any meaningful report on the quality and extent of a child's learning needs to be \_\_\_\_\_.

- Ans
- 1. comprehensive
  - 2. selective

3. exclusive

4. definite

Question ID : 630680224750

Option 1 ID : 630680871710

Option 2 ID : 630680871709

Option 3 ID : 630680871708

Option 4 ID : 630680871707

Status : Answered

Chosen Option : 1

**Q.52 A teacher who provides her students with an opportunity to critically reflect on issues pertaining to social, political, economic, and moral aspects is practicing:**

Ans

1. experiential pedagogy

2. reflective pedagogy

3. social pedagogy

4. critical pedagogy

Question ID : 630680224772

Option 1 ID : 630680871797

Option 2 ID : 630680871798

Option 3 ID : 630680871796

Option 4 ID : 630680871795

Status : Answered

Chosen Option : 4

**Q.53 Which of the following is NOT a geological hazard?**

Ans

1. Landslide

2. Flood

3. Volcanic eruption

4. Oil spill

Question ID : 630680224728

Option 1 ID : 630680871619

Option 2 ID : 630680871621

Option 3 ID : 630680871620

Option 4 ID : 630680871622

Status : Answered

Chosen Option : 4

**Q.54 Public offering of shares, Private sale of shares, Sale of Government or state enterprises assets are examples of which of the following?**

Ans

1. Privatisation

2. Liberalisation

3. Globalisation

4. Hospitalisation

Q.55 While conducting a mock drill in a class, teacher asks students, "Drop down on your knee. Cover your head, neck and face by going under the table." Identify the disaster from the drill exercise.

- Ans
- 1. House fire
  - 2. Flood
  - 3. Avalanche
  - 4. Earthquake

Question ID : 630680224730

Option 1 ID : 630680871627

Option 2 ID : 630680871629

Option 3 ID : 630680871630

Option 4 ID : 630680871628

Status : Answered

Chosen Option : 4

Q.56 Which of the following is a type of water body formed by the accumulation of water behind a dam?

- Ans
- 1. River
  - 2. Reservoir
  - 3. Ocean
  - 4. Sea

Question ID : 630680224714

Option 1 ID : 630680871564

Option 2 ID : 630680871563

Option 3 ID : 630680871566

Option 4 ID : 630680871565

Status : Answered

Chosen Option : 2

Q.57 In 1942, the Indian National Army was formed in South-East Asia to secure Indian independence with the assistance of \_\_\_\_\_.

- Ans
- 1. Burma
  - 2. Indonesia
  - 3. Japan
  - 4. Vietnam



Q.58 ମହାଡ଼ର ସତ୍ୟାଗ୍ରହ \_\_\_\_\_ ସହିତ ଜଡ଼ିତ ଥିଲା ।

Ans

1. ସଂରକ୍ଷିତ ଜଙ୍ଗଲରେ ପ୍ରବେଶ କରିବାକୁ ନଦେବା ପ୍ରତିବାଦରେ ଆଦିବାସୀମାନେ ଆନ୍ଦୋଳନ କରିବା
2. ମହିଳାମାନେ, ପୈତୃକ ସମ୍ପତ୍ତିରେ ସମାନ ଭାଗ ପାଇବାର ଅଧିକାର ଦାବି କରିବା
3. ଅସ୍ପୃଶ୍ୟଙ୍କୁ ସର୍ବସାଧାରଣ ସ୍ଥାନରୁ ଜଳ ପାଇବାର ସମାନ ଅଧିକାର ମିଳିବା
4. ବ୍ରାହ୍ମଣମାନେ ସେମାନଙ୍କ ଇତିହାସକୁ ବଦନାମ କରିବା ଅଭିଯୋଗରେ ଅଣବ୍ରାହ୍ମଣଙ୍କ ବିରୋଧରେ ମାମଲା ରୁଜୁ କରିବା

Question ID : 630680224699

Option 1 ID : 630680871506

Option 2 ID : 630680871505

Option 3 ID : 630680871503

Option 4 ID : 630680871504

Status : Not Answered

Chosen Option : --

Q.59 As per Economic Survey of India 2022-23, what was the total Gross Enrolment Ratio (approx.) of All India for Secondary schools in 2021-22?

Ans

1. 64.5%
2. 79.6%
3. 81.2%
4. 69.7%

Question ID : 630680224738

Option 1 ID : 630680871661

Option 2 ID : 630680871660

Option 3 ID : 630680871659

Option 4 ID : 630680871662

Status : Not Answered

Chosen Option : --

Q.60 Which of the following is NOT a characteristic of monsoonal rainfall?

Ans

1. Its spatial distribution ranges from 12 cm to more than 250 cm.
2. The showers received due to southwest monsoon occur between June and September.
3. The monsoon rainfall has an increasing trend with increasing distance from the sea.
4. Monsoonal rainfall is largely governed by relief or topography.

Q.61 Which of the following is NOT a subdivision of the biosphere?

- Ans
- 1. Hydrosphere
  - 2. Lithosphere
  - 3. Atmosphere
  - 4. Chromosphere

Question ID : 630680224715

Option 1 ID : 630680871570

Option 2 ID : 630680871569

Option 3 ID : 630680871567

Option 4 ID : 630680871568

Status : Answered

Chosen Option : 4

Q.62 In India, demand for and supply of money are regulated by \_\_\_\_\_.

- Ans
- 1. Reserve Bank of India
  - 2. National Bank for Agriculture and Rural Development
  - 3. Ministry of Defence
  - 4. Ministry of Corporate Affairs

Question ID : 630680224732

Option 1 ID : 630680871635

Option 2 ID : 630680871637

Option 3 ID : 630680871638

Option 4 ID : 630680871636

Status : Answered

Chosen Option : 1

Q.63 In the context of disaster management, what is defined as a measure of the expected losses due to a hazardous event occurring in a given area over a specific time period?

- Ans
- 1. Vulnerability
  - 2. Capacity
  - 3. Disaster
  - 4. Risk

Question ID : 630680224726

Option 1 ID : 630680871612

Option 2 ID : 630680871611

Option 3 ID : 630680871614

Option 4 ID : 630680871613

Status : Answered

Chosen Option : 1

Q.64 To aid the process of developing the farming community, the Small Farmers Development Agency (SFDA) and the Marginal Farmers and Agricultural Labour Development Agency (MFALDA) were established during the \_\_\_\_\_.

- Ans
- 1. Eighth Five-Year Plan
  - 2. First Five-Year Plan
  - 3. Fourth Five-Year Plan
  - 4. Sixth Five-Year Plan

Question ID : 630680224744

Option 1 ID : 630680871686

Option 2 ID : 630680871684

Option 3 ID : 630680871683

Option 4 ID : 630680871685

Status : Not Answered

Chosen Option : --

Q.65 The formal processes of learning that school makes possible can open up new possibilities of \_\_\_\_\_.

- Ans
- 1. understanding and conquering the world
  - 2. knowing and living in the world
  - 3. understanding and relating to the world
  - 4. knowing and becoming familiar with the world

Question ID : 630680224768

Option 1 ID : 630680871780

Option 2 ID : 630680871781

Option 3 ID : 630680871782

Option 4 ID : 630680871779

Status : Answered

Chosen Option : 3

Q.66 Which of the following is the CORRECT explanation of 'Mid-term Elections' in India?

- Ans
- 1. If at any time there is a mid-term vacancy due to the death of a member in Lok Sabha, the election for that seat is known as mid-term elections.
  - 2. If the Lok Sabha is dissolved before completion of five years and the election is held to constitute a new Lok Sabha, such elections are known as mid-term elections.
  - 3. If there is a mid-term vacancy in Lok Sabha owing to the resignation of a member, the election for that seat is known as a mid-term election.
  - 4. Election to constitute a new Lok Sabha after five years of completion of the previous Lok Sabha is known as mid-term elections.

Question ID : 630680224758

Option 1 ID : 630680871740

Option 2 ID : 630680871741

Option 3 ID : 630680871742

Option 4 ID : 630680871739

Status : Answered

Chosen Option : 2

Q.67 In social science teaching, it is important to address gender concerns in terms of \_\_\_\_\_ of any historical event and contemporary concerns.



- Ans
- 1. making the reality of women extrinsic to the discussion
  - 2. making the perspectives of women secondary to the beginning
  - 3. making the stories and narratives of women to the beginning
  - 4. making the perspectives of women integral to the discussion

Question ID : 630680224781

Option 1 ID : 630680871833

Option 2 ID : 630680871834

Option 3 ID : 630680871832

Option 4 ID : 630680871831

Status : Not Answered

Chosen Option : --

Q.68 Which of the following statement(s) is/are CORRECT?

I. The Classical Quantity Theory of Money states that the marginal propensity to consume is proportional to the quantity of money in the economy.

II. The value of money flow is equal to the nominal quantity of money supply (M) multiplied by the transaction velocity of money (V).

- Ans
- 1. Both I and II are correct
  - 2. Only II is correct
  - 3. Neither I nor II are correct
  - 4. Only I is correct

Question ID : 630680224735

Option 1 ID : 630680871649

Option 2 ID : 630680871647

Option 3 ID : 630680871650

Option 4 ID : 630680871648

Status : Answered

Chosen Option : 1

Q.69 It is important for the teachers to know that learning takes place both within school and outside school. Learning is \_\_\_\_\_ if the two arenas interact with each other.

- Ans
- 1. diluted
  - 2. weakened
  - 3. remembered
  - 4. enriched

Q.70 The Constitution of India stipulates in \_\_\_\_\_ that the President shall appoint judges of the Supreme Court after consulting other persons besides taking the advice of his ministers.

- Ans
- 1. Article 125(2)
  - 2. Article 134A
  - 3. Article 133(2)
  - 4. Article 124(2)

Question ID : 630680224757  
 Option 1 ID : 630680871738  
 Option 2 ID : 630680871737  
 Option 3 ID : 630680871736  
 Option 4 ID : 630680871735  
 Status : Answered  
 Chosen Option : 2

Q.71 Which of the following is NOT a Financial Committee among the Standing Committees in India?

- Ans
- 1. Committee on Estimates
  - 2. Committee on Public Undertakings
  - 3. Committee on Public Accounts
  - 4. Committee on Health and Family Welfare

Question ID : 630680224756  
 Option 1 ID : 630680871731  
 Option 2 ID : 630680871733  
 Option 3 ID : 630680871732  
 Option 4 ID : 630680871734  
 Status : Answered  
 Chosen Option : 4

Q.72 Which of the following pairs of inventor and invention is INCORRECTLY matched?

- Ans
- 1. John Kay – Cotton gin
  - 2. James Hargreaves – The Spinning jenny
  - 3. Richard Arkwright – The Water frame
  - 4. Samuel Crompton – Spinning mule

Question ID : 630680224686  
 Option 1 ID : 630680871454  
 Option 2 ID : 630680871451  
 Option 3 ID : 630680871452  
 Option 4 ID : 630680871453  
 Status : Answered  
 Chosen Option : 1

Q.73 ପିଲାମାନଙ୍କର ସ୍ୱାସ୍ଥ୍ୟ ସମ୍ବନ୍ଧୀୟ ସମସ୍ୟା ଏବଂ କିଶୋର ଅବସ୍ଥାରେ ସେମାନଙ୍କ ମଧ୍ୟରେ ହେଉଥିବା ପରିବର୍ତ୍ତନର ସାମାଜିକ ଦିଗ ସହିତ ଜଡ଼ିତ ଚିନ୍ତା ଯେପରିକି ପିତାମାତା, ସହକର୍ମୀ ଗୋଷ୍ଠୀ, ବିପତ୍ତୀ ଲିଙ୍ଗ ସହିତ ସମ୍ପର୍କ ପରିବର୍ତ୍ତନ \_\_\_\_\_ ଆବଶ୍ୟକ ।

Ans ✓ 1. ଶିକ୍ଷକଙ୍କ ଦ୍ୱାରା ଉପଯୁକ୍ତ ଭାବରେ ସମ୍ବୋଧିତ କରାଯିବା

- ✗ 2. ଶିକ୍ଷକଙ୍କ ଦ୍ୱାରା ସ୍ୱଳ୍ପ ଭାବେ ଅଣଦେଖା କରାଯିବା
- ✗ 3. ଶିକ୍ଷକଙ୍କ ଦ୍ୱାରା କଠୋର ଭାବରେ ସମ୍ବୋଧିତ କରାଯିବା
- ✗ 4. ଶିକ୍ଷକଙ୍କ ଦ୍ୱାରା ତୀବ୍ର ଭାବରେ ଏତାଇ ଦିଆଯିବା

Question ID : 630680224783

Option 1 ID : 630680871841

Option 2 ID : 630680871839

Option 3 ID : 630680871842

Option 4 ID : 630680871840

Status : Answered

Chosen Option : 1

Q.74 Which of the following pairs of specialised agencies of UN and its headquarter is INCORRECTLY matched?

- Ans ✗ 1. Food and Agriculture Organization of the United Nations – Rome
- ✗ 2. International Seabed Authority – Kingston
- ✓ 3. World Intellectual Property Organization – USA
- ✗ 4. International Atomic Energy Agency – Austria

Question ID : 630680224694

Option 1 ID : 630680871485

Option 2 ID : 630680871484

Option 3 ID : 630680871486

Option 4 ID : 630680871483

Status : Answered

Chosen Option : 2

Q.75 Which of the following options is NOT true about local storms in the hot weather season?

- Ans ✓ 1. In Telangana, Nor Western storms are known as Barsoisila.
- ✗ 2. Nor Westers are dreaded evening thunderstorms in Bengal and Assam.
- ✗ 3. Mango showers are pre-monsoon showers in Kerala and Karnataka.
- ✗ 4. Blossom shower helps coffee flowers blossom in Kerala.

Question ID : 630680224718

Option 1 ID : 630680871579

Option 2 ID : 630680871582

Option 3 ID : 630680871580

Option 4 ID : 630680871581

Status : Answered

Chosen Option : 2

Q.76 ମୂଲ୍ୟାୟନର ଉଦ୍ଦେଶ୍ୟ \_\_\_\_\_ ରୁହେଁ ।

- Ans ✗ 1. ପାଠ୍ୟପୁସ୍ତକରୁ ଜ୍ଞାନ ଶିଖିବା ପାଇଁ ପିଲାମାନଙ୍କୁ ପ୍ରସ୍ତୁତ କରିବା
- ✗ 2. ପିଲାମାନଙ୍କୁ ସେମାନଙ୍କ ମାତୃପ୍ରୟୋଗ କରିବାକୁ ଉତ୍ସାହିତ କରିବା



✗ 3. ସୂଚନା ରଖିବା ପାଇଁ ପିଲାମାନଙ୍କୁ ସମ୍ମତ କରିବା

✓ 4. ଭୟରେ ପାଠ ପଢ଼ିବା ପାଇଁ ପିଲାମାନଙ୍କୁ ଉତ୍ସାହିତ କରିବା

Question ID : 630680224770

Option 1 ID : 630680871790

Option 2 ID : 630680871787

Option 3 ID : 630680871789

Option 4 ID : 630680871788

Status : Answered

Chosen Option : 4

Q.77 Which of the following is a session of Parliament in India?

Ans ✗ 1. Summer Session

✓ 2. Monsoon Session

✗ 3. Spring Session

✗ 4. Autumn Session

Question ID : 630680224754

Option 1 ID : 630680871725

Option 2 ID : 630680871723

Option 3 ID : 630680871724

Option 4 ID : 630680871726

Status : Answered

Chosen Option : 2

Q.78 ଶିକ୍ଷକ ଏବଂ ନିୟମିତ ରିପୋର୍ଟ କାର୍ତ୍ତ ହାରା ଭଲ ଭାବରେ ତିଆରି କରାଯାଇଥିବା ମୂଲ୍ୟାୟନ, ଶିକ୍ଷାର୍ଥୀମାନଙ୍କୁ ମତାମତ ପ୍ରଦାନ କରେ ଏବଂ \_\_\_\_\_ ମାନକ ସେଟ୍ କରେ ।

Ans ✗ 1. ସ୍କୁଲ ସହ ମେଳ ଖାଇବା ପାଇଁ

✗ 2. ଆଗକୁ କାର୍ଯ୍ୟ କରିବାରେ ଶିକ୍ଷକମାନଙ୍କ ପାଇଁ

✗ 3. ନକଲ ରଖିବାରେ ପିତାମାତାଙ୍କ ପାଇଁ

✓ 4. ଛାତ୍ରଛାତ୍ରୀମାନେ ଏ ଦିଗରେ ପ୍ରତ୍ୟାସ କରିବା ପାଇଁ

Question ID : 630680224769

Option 1 ID : 630680871785

Option 2 ID : 630680871783

Option 3 ID : 630680871786

Option 4 ID : 630680871784

Status : Answered

Chosen Option : 4

Q.79 Which of the following is NOT a function of the Reserve Bank of India?

Ans ✗ 1. Debt and cash management for Central and State Governments

✗ 2. Foreign exchange management

✗ 3. Formulation of monetary policy

✓ 4. Approval of RBI's governor is required to pass a money bill in parliament

Q.80 କୋପେନ (Köppen) ଜଳବାୟୁ ବର୍ଗୀକରଣ ବ୍ୟବସ୍ଥାର ପ୍ରାଥମିକ ଆଧାର କ'ଣ ଅଟେ?

- Ans
- 1. ସମୁଦ୍ର ସ୍ତୋତ ଏବଂ ଛୁଆର
  - 2. ଉଚ୍ଚତା ଏବଂ ଅଶୁ ଆକାର
  - 3. ତାପମାତ୍ରା ଏବଂ ଅବଶେଷ ସୃଷ୍ଟି ହେବା
  - 4. ପବନର ଦିଗ ଏବଂ ବେଗ

Question ID : 630680224713

Option 1 ID : 630680871562

Option 2 ID : 630680871559

Option 3 ID : 630680871560

Option 4 ID : 630680871561

Status : Answered

Chosen Option : 1

Q.81 Which of the following disasters is associated with storm surge?

- Ans
- 1. Earthquake
  - 2. Deforestation
  - 3. Cloud burst
  - 4. Tropical cyclone

Question ID : 630680224729

Option 1 ID : 630680871623

Option 2 ID : 630680871624

Option 3 ID : 630680871626

Option 4 ID : 630680871625

Status : Answered

Chosen Option : 4

Q.82 Who among the following French philosophers had said that 'Man is born free, but is everywhere in chains'?

- Ans
- 1. John Locke
  - 2. Montesquieu
  - 3. Voltaire
  - 4. Jean Jacques Rousseau

Q.83 Aliabet oil field is located in which state?

- Ans  1. Tamil Nadu  
 2. Gujarat  
 3. Assam  
 4. Maharashtra

Question ID : 630680224722  
 Option 1 ID : 630680871595  
 Option 2 ID : 630680871598  
 Option 3 ID : 630680871597  
 Option 4 ID : 630680871596  
 Status : Not Answered  
 Chosen Option : --

Q.84 Terrestrial planets, which simply mean '\_\_\_\_\_', include Mercury, Venus, Earth, and Mars.

- Ans  1. Earth-like  
 2. Sun-like  
 3. Moon-like  
 4. Jupiter-like

Question ID : 630680224706  
 Option 1 ID : 630680871532  
 Option 2 ID : 630680871531  
 Option 3 ID : 630680871533  
 Option 4 ID : 630680871534  
 Status : Answered  
 Chosen Option : 4

Q.85 Identify the INCORRECTLY matched names of the Committees of Indian Constituent Assembly and their Chairman:

- Ans  1. Finance and Staff Committee - B. Pattabhi Sitaramayya  
 2. Order of Business Committee - Dr. K.M. Munshi  
 3. Steering Committee - Dr. Rajendra Prasad  
 4. Union Powers Committee - Jawaharlal Nehru

Question ID : 630680224751  
 Option 1 ID : 630680871713  
 Option 2 ID : 630680871714  
 Option 3 ID : 630680871712  
 Option 4 ID : 630680871711  
 Status : Answered  
 Chosen Option : 4

Q.86 ଏକ ନ୍ୟାୟପୂର୍ଣ୍ଣ ଏବଂ ଶାନ୍ତିପୂର୍ଣ୍ଣ ସମାଜ ପାଇଁ ଜ୍ଞାନ ଭିତ୍ତିକ ଗଠନ କରିବା ପାଇଁ \_\_\_\_\_ ଦୃଷ୍ଟିକୋଣ ଅପରିହାର୍ଯ୍ୟ ଅଟେ ।



- Ans
- 1. ସୂଚନା ପ୍ରଯୁକ୍ତିବିଦ୍ୟା
  - 2. ପ୍ରାକୃତିକ ବିଜ୍ଞାନ
  - 3. ଗଣିତ
  - 4. ସାମାଜିକ ବିଜ୍ଞାନ

Question ID : 630680224766

Option 1 ID : 630680871774

Option 2 ID : 630680871771

Option 3 ID : 630680871773

Option 4 ID : 630680871772

Status : Answered

Chosen Option : 4

Q.87 A social science teacher must view differences between students as \_\_\_\_\_ for learning.

Ans  1. resources

- 2. bottle necks
- 3. problems
- 4. hard spots

Question ID : 630680224774

Option 1 ID : 630680871805

Option 2 ID : 630680871806

Option 3 ID : 630680871803

Option 4 ID : 630680871804

Status : Answered

Chosen Option : 1

Q.88 Which of the following is NOT included in the 'services sector' in an economy?

Ans  1. Real Estate

- 2. Automobile
- 3. Communications
- 4. Defence

Question ID : 630680224746

Option 1 ID : 630680871692

Option 2 ID : 630680871693

Option 3 ID : 630680871691

Option 4 ID : 630680871694

Status : Answered

Chosen Option : 2

Q.89 Which of the following statements is/are true with respect to the Ashok Mehta Committee, which was appointed to suggest measures to strengthen the Panchayati Raj system in India?

I. The Committee submitted its report in August 1980.

II. The Committee recommended that the two-tier system of Panchayati

Raj should prevail.

III. The Committee recommended that the Panchayati Raj institutions should have powers of taxation to mobilise their financial resources.

- Ans  1. Only I and III are true  
 2. Only III is true  
 3. Only I is true  
 4. Only II and III are true

Question ID : 630680224763

Option 1 ID : 630680871760

Option 2 ID : 630680871762

Option 3 ID : 630680871759

Option 4 ID : 630680871761

Status : Answered

Chosen Option : 1

Q.90 In the context of disaster management, which of the following statements is/ are NOT true for mitigation?

- I. Mitigation is the extent to which a community is likely to be damaged.  
 II. Mitigation measures are taken to reduce the effect of the hazard.  
 III. Mitigation activities are focused on the elements exposed to the threat.

Ans  1. Only I

2. I and III  
 3. Only III  
 4. I and II

Question ID : 630680224727

Option 1 ID : 630680871616

Option 2 ID : 630680871615

Option 3 ID : 630680871617

Option 4 ID : 630680871618

Status : Not Answered

Chosen Option : --

Q.91 The Sendai Framework for Disaster Risk Reduction provides the member states with concrete actions to protect development gains from the risk of disaster for the time period \_\_\_\_\_.

Ans  1. 2015 – 2030

2. 2020 – 2025  
 3. 2010 – 2025  
 4. 2020 – 2035

Q.92 Approximately what per cent of Indian population enjoyed the right to vote in 1937, elections to the provincial legislatures, which were held for the first time?

Ans ✓ 1. 10 – 12 per cent

✗ 2. 20 – 25 per cent

✗ 3. 5 – 8 per cent

✗ 4. 18 – 20 per cent

Question ID : 630680224705

Option 1 ID : 630680871527

Option 2 ID : 630680871528

Option 3 ID : 630680871529

Option 4 ID : 630680871530

Status : Not Answered

Chosen Option : --

Q.93 ବନିକ୍ତ ମୋରି \_\_\_\_\_ ସହ ସମ୍ପୃକ୍ତ ।

Ans ✗ 1. ମହୁମାଛି ଚାଷ

✗ 2. ଅଜ୍ଞର ଚାଷ

✗ 3. ମାଛ ଚାଷ

✓ 4. ଟସର ପୋକ ଚାଷ

Question ID : 630680224723

Option 1 ID : 630680871600

Option 2 ID : 630680871599

Option 3 ID : 630680871601

Option 4 ID : 630680871602

Status : Answered

Chosen Option : 1

Q.94 ଶିକ୍ଷାରେ \_\_\_\_\_, ସମାଜରେ ଅନ୍ତର୍ଭୁକ୍ତ ଥିବା ଅନ୍ୟତମ ଉପାଦାନ ଅଟେ ।

Ans ✗ 1. ସମ୍ପୂର୍ଣ୍ଣତା

✓ 2. ଅନ୍ତର୍ଭୁକ୍ତ ହେବା

✗ 3. ପ୍ରତିଯୋଗିତା

✗ 4. ସଂଘର୍ଷ



Q.95 Which of the following National Waterways connects Dhubri and Sadiya?

Ans

- 1. National Waterway 3
- 2. National Waterway 4
- 3. National Waterway 2
- 4. National Waterway 1

Question ID : 630680224725

Option 1 ID : 630680871610

Option 2 ID : 630680871609

Option 3 ID : 630680871607

Option 4 ID : 630680871608

Status : Answered

Chosen Option : 1

Q.96 Where are the headquarters of the Indian Bureau of Mines?

Ans

- 1. Jamshedpur
- 2. Nagpur
- 3. Durgapur
- 4. Chennai

Question ID : 630680224721

Option 1 ID : 630680871593

Option 2 ID : 630680871592

Option 3 ID : 630680871594

Option 4 ID : 630680871591

Status : Not Answered

Chosen Option : --

Q.97 ଗଠନମୂଳକ ଦୃଷ୍ଟିକୋଣରେ, ଶିକ୍ଷାର୍ଥୀମାନେ ସେମାନଙ୍କ ପାଖରେ ଉପସ୍ଥିତ ସାମଗ୍ରୀ ଏବଂ କାର୍ଯ୍ୟକଳାପ ମାଧ୍ୟମରେ ବିଦ୍ୟମାନ ଚିନ୍ତାଧାରା ସହିତ ନୂତନ ଚିନ୍ତାଧାରାକୁ ସଂଯୋଗ କରିବା ଦ୍ୱାରା \_\_\_\_\_ ।

Ans

- 1. ସକୃତ ଭାବରେ ନିଜର ଜ୍ଞାନ ନିର୍ମାଣ କରନ୍ତି
- 2. ସ୍ଥିର ଭାବରେ ସେମାନଙ୍କ ଶିକ୍ଷକଙ୍କ ଜ୍ଞାନକୁ ଅନୁସରଣ କରନ୍ତି
- 3. ଶିକ୍ଷକଙ୍କ ଜ୍ଞାନ ସହଜରେ ଶିଖନ୍ତି
- 4. ଶୀଘ୍ର ପାଠ୍ୟପୁସ୍ତକ ଜ୍ଞାନ ହାସଲ କରନ୍ତି

Question ID : 630680224777

Option 1 ID : 630680871817

Option 2 ID : 630680871818

Option 3 ID : 630680871815

Option 4 ID : 630680871816

Status : Answered

Chosen Option : 1

Q.98 The National Policy on Cooperatives, was formulated in \_\_\_\_\_, with the objectives of facilitating all round development of cooperatives and providing necessary support and assistance to them, so as to ensure that cooperatives work as autonomous and self-reliant institutions.

Ans ✓ 1. 2002

✗ 2. 2014

✗ 3. 2007

✗ 4. 1991

Question ID : 630680224743

Option 1 ID : 630680871681

Option 2 ID : 630680871679

Option 3 ID : 630680871682

Option 4 ID : 630680871680

Status : Answered

Chosen Option : 1

Q.99 According to which theory the organisation and development of the modes of production determined through its material conditions?

Ans ✓ 1. Historical materialism

✗ 2. Theory of surplus value

✗ 3. Ideal materialism

✗ 4. Dialectical materialism

Question ID : 630680224689

Option 1 ID : 630680871463

Option 2 ID : 630680871466

Option 3 ID : 630680871465

Option 4 ID : 630680871464

Status : Answered

Chosen Option : 3

Q.100 The Seventeenth Lok Sabha first met after the election on \_\_\_\_\_.

Ans ✓ 1. 17 June 2019

✗ 2. 17 March 2019

✗ 3. 17 January 2019

✗ 4. 17 November 2019

ଓଡ଼ିଶାର ସମସ୍ତ ପୁର୍ବ ବର୍ଷର ପ୍ରଶ୍ନ ଉତ୍ତର ପାଇଁ

[Download "Tech Of World" App](#)

WtsApp/Call- 8596976190

Join Us-





ଓଡ଼ିଶାର ସମସ୍ତ ପୁର୍ବ ବର୍ଷର ପ୍ରଶ୍ନ ଉତ୍ତର ପାଇଁ

[Download "Tech Of World" App](#)

WtsApp/Call- 8596976190

Join Us-



ଓଡ଼ିଶାର ସମସ୍ତ ପୁର୍ବ ବର୍ଷର ପ୍ରଶ୍ନ ଉତ୍ତର ପାଇଁ

[Download "Tech Of World" App](#)

WtsApp/Call- 8596976190

Join Us-



ଓଡ଼ିଶାର ସମସ୍ତ ପୁର୍ବ ବର୍ଷର ପ୍ରଶ୍ନ ଉତ୍ତର ପାଇଁ

[Download "Tech Of World" App](#)

WtsApp/Call- 8596976190

Join Us-





ଓଡ଼ିଶାର ସମସ୍ତ ପୁର୍ବ ବର୍ଷର ପ୍ରଶ୍ନ ଉତ୍ତର ପାଇଁ

[Download "Tech Of World" App](#)

WtsApp/Call- 8596976190

Join Us-



ଓଡ଼ିଶାର ସମସ୍ତ ପୁର୍ବ ବର୍ଷର ପ୍ରଶ୍ନ ଉତ୍ତର ପାଇଁ

[Download "Tech Of World" App](#)

WtsApp/Call- 8596976190

Join Us-



ଓଡ଼ିଶାର ସମସ୍ତ ପୁର୍ବ ବର୍ଷର ପ୍ରଶ୍ନ ଉତ୍ତର ପାଇଁ

[Download "Tech Of World" App](#)

WtsApp/Call- 8596976190

Join Us-





ଓଡ଼ିଶାର ସମସ୍ତ ପୁର୍ବ ବର୍ଷର ପ୍ରଶ୍ନ ଉତ୍ତର ପାଇଁ

[Download "Tech Of World" App](#)

WtsApp/Call- 8596976190

Join Us-



ଓଡ଼ିଶାର ସମସ୍ତ ପୁର୍ବ ବର୍ଷର ପ୍ରଶ୍ନ ଉତ୍ତର ପାଇଁ

[Download "Tech Of World" App](#)

WtsApp/Call- 8596976190

Join Us-



ଓଡ଼ିଶାର ସମସ୍ତ ପୁର୍ବ ବର୍ଷର ପ୍ରଶ୍ନ ଉତ୍ତର ପାଇଁ

[Download "Tech Of World" App](#)

WtsApp/Call- 8596976190

Join Us-





ଓଡ଼ିଶାର ସମସ୍ତ ପୁର୍ବ ବର୍ଷର ପ୍ରଶ୍ନ ଉତ୍ତର ପାଇଁ

[Download "Tech Of World" App](#)

WtsApp/Call- 8596976190

Join Us-



ଓଡ଼ିଶାର ସମସ୍ତ ପୁର୍ବ ବର୍ଷର ପ୍ରଶ୍ନ ଉତ୍ତର ପାଇଁ

[Download "Tech Of World" App](#)

WtsApp/Call- 8596976190

Join Us-



ଓଡ଼ିଶାର ସମସ୍ତ ପୁର୍ବ ବର୍ଷର ପ୍ରଶ୍ନ ଉତ୍ତର ପାଇଁ

[Download "Tech Of World" App](#)

WtsApp/Call- 8596976190

Join Us-



ଓଡ଼ିଶାର ସମସ୍ତ ପୁର୍ବ ବର୍ଷର ପ୍ରଶ୍ନ ଉତ୍ତର ପାଇଁ

[Download "Tech Of World" App](#)

WtsApp/Call- 8596976190

Join Us-





ଓଡ଼ିଶାର ସମସ୍ତ ପୁର୍ବ ବର୍ଷର ପ୍ରଶ୍ନ ଉତ୍ତର ପାଇଁ

[Download "Tech Of World" App](#)

WtsApp/Call- 8596976190

Join Us-



ଓଡ଼ିଶାର ସମସ୍ତ ପୁରୁ ବର୍ଷର ପ୍ରଶ୍ନ ଉତ୍ତର ପାଇଁ

[Download "Tech Of World" App](#)

WtsApp/Call- 8596976190

Join Us-



ଓଡ଼ିଶାର ସମସ୍ତ ପୁର୍ବ ବର୍ଷର ପ୍ରଶ୍ନ ଉତ୍ତର ପାଇଁ

[Download "Tech Of World" App](#)

WtsApp/Call- 8596976190

Join Us-



ଓଡ଼ିଶାର ସମସ୍ତ ପୁର୍ବ ବର୍ଷର ପ୍ରଶ୍ନ ଉତ୍ତର ପାଇଁ

[Download "Tech Of World" App](#)

WtsApp/Call- 8596976190

Join Us-





ଓଡ଼ିଶାର ସମସ୍ତ ପୁର୍ବ ବର୍ଷର ପ୍ରଶ୍ନ ଉତ୍ତର ପାଇଁ

[Download "Tech Of World" App](#)

WtsApp/Call- 8596976190

Join Us-



ଓଡ଼ିଶାର ସମସ୍ତ ପୁର୍ବ ବର୍ଷର ପ୍ରଶ୍ନ ଉତ୍ତର ପାଇଁ

[Download "Tech Of World" App](#)

WtsApp/Call- 8596976190

Join Us-



ଓଡ଼ିଶାର ସମସ୍ତ ପୁର୍ବ ବର୍ଷର ପ୍ରଶ୍ନ ଉତ୍ତର ପାଇଁ

[Download "Tech Of World" App](#)

WtsApp/Call- 8596976190

Join Us-



ଓଡ଼ିଶାର ସମସ୍ତ ପୁର୍ବ ବର୍ଷର ପ୍ରଶ୍ନ ଉତ୍ତର ପାଇଁ

[Download "Tech Of World" App](#)

WtsApp/Call- 8596976190

Join Us-





ଓଡ଼ିଶାର ସମସ୍ତ ପୁର୍ବ ବର୍ଷର ପ୍ରଶ୍ନ ଉତ୍ତର ପାଇଁ

[Download "Tech Of World" App](#)

WtsApp/Call- 8596976190

Join Us-



ଓଡ଼ିଶାର ସମସ୍ତ ପୁର୍ବ ବର୍ଷର ପ୍ରଶ୍ନ ଉତ୍ତର ପାଇଁ

[Download "Tech Of World" App](#)

WtsApp/Call- 8596976190

Join Us-



ଓଡ଼ିଶାର ସମସ୍ତ ପୁର୍ବ ବର୍ଷର ପ୍ରଶ୍ନ ଉତ୍ତର ପାଇଁ

[Download "Tech Of World" App](#)

WtsApp/Call- 8596976190

Join Us-



ଓଡ଼ିଶାର ସମସ୍ତ ପୁର୍ବ ବର୍ଷର ପ୍ରଶ୍ନ ଉତ୍ତର ପାଇଁ

[Download "Tech Of World" App](#)

WtsApp/Call- 8596976190

Join Us-





ଓଡ଼ିଶାର ସମସ୍ତ ପୁର୍ବ ବର୍ଷର ପ୍ରଶ୍ନ ଉତ୍ତର ପାଇଁ

[Download "Tech Of World" App](#)

WtsApp/Call- 8596976190

Join Us-



ଓଡ଼ିଶାର ସମସ୍ତ ପୁର୍ବ ବର୍ଷର ପ୍ରଶ୍ନ ଉତ୍ତର ପାଇଁ

[Download "Tech Of World" App](#)

WtsApp/Call- 8596976190

Join Us-



ଓଡ଼ିଶାର ସମସ୍ତ ପୁର୍ବ ବର୍ଷର ପ୍ରଶ୍ନ ଉତ୍ତର ପାଇଁ

[Download "Tech Of World" App](#)

WtsApp/Call- 8596976190

Join Us-



ଓଡ଼ିଶାର ସମସ୍ତ ପୁର୍ବ ବର୍ଷର ପ୍ରଶ୍ନ ଉତ୍ତର ପାଇଁ

[Download "Tech Of World" App](#)

WtsApp/Call- 8596976190

Join Us-





ଓଡ଼ିଶାର ସମସ୍ତ ପୁର୍ବ ବର୍ଷର ପ୍ରଶ୍ନ ଉତ୍ତର ପାଇଁ

[Download "Tech Of World" App](#)

WtsApp/Call- 8596976190

Join Us-



ଓଡ଼ିଶାର ସମସ୍ତ ପୁର୍ବ ବର୍ଷର ପ୍ରଶ୍ନ ଉତ୍ତର ପାଇଁ

[Download "Tech Of World" App](#)

WtsApp/Call- 8596976190

Join Us-



ଓଡ଼ିଶାର ସମସ୍ତ ପୁର୍ବ ବର୍ଷର ପ୍ରଶ୍ନ ଉତ୍ତର ପାଇଁ

[Download "Tech Of World" App](#)

WtsApp/Call- 8596976190

Join Us-



ଓଡ଼ିଶାର ସମସ୍ତ ପୁର୍ବ ବର୍ଷର ପ୍ରଶ୍ନ ଉତ୍ତର ପାଇଁ

[Download "Tech Of World" App](#)

WtsApp/Call- 8596976190

Join Us-





ଓଡ଼ିଶାର ସମସ୍ତ ପୁର୍ବ ବର୍ଷର ପ୍ରଶ୍ନ ଉତ୍ତର ପାଇଁ

[Download "Tech Of World" App](#)

WtsApp/Call- 8596976190

Join Us-



ଓଡ଼ିଶାର ସମସ୍ତ ପୁର୍ବ ବର୍ଷର ପ୍ରଶ୍ନ ଉତ୍ତର ପାଇଁ

[Download "Tech Of World" App](#)

WtsApp/Call- 8596976190

Join Us-



ଓଡ଼ିଶାର ସମସ୍ତ ପୁର୍ବ ବର୍ଷର ପ୍ରଶ୍ନ ଉତ୍ତର ପାଇଁ

[Download "Tech Of World" App](#)

WtsApp/Call- 8596976190

Join Us-



ଓଡ଼ିଶାର ସମସ୍ତ ପୁର୍ବ ବର୍ଷର ପ୍ରଶ୍ନ ଉତ୍ତର ପାଇଁ

[Download "Tech Of World" App](#)

WtsApp/Call- 8596976190

Join Us-



ଓଡ଼ିଶାର ସମସ୍ତ ପୁର୍ବ ବର୍ଷର ପ୍ରଶ୍ନ ଉତ୍ତର ପାଇଁ

[Download "Tech Of World" App](#)

WtsApp/Call- 8596976190

Join Us-





ଓଡ଼ିଶାର ସମସ୍ତ ପୁର୍ବ ବର୍ଷର ପ୍ରଶ୍ନ ଉତ୍ତର ପାଇଁ

[Download "Tech Of World" App](#)

WtsApp/Call- 8596976190

Join Us-



ଓଡ଼ିଶାର ସମସ୍ତ ପୁର୍ବ ବର୍ଷର ପ୍ରଶ୍ନ ଉତ୍ତର ପାଇଁ

[Download "Tech Of World" App](#)

WtsApp/Call- 8596976190

Join Us-



ଓଡ଼ିଶାର ସମସ୍ତ ପୁର୍ବ ବର୍ଷର ପ୍ରଶ୍ନ ଉତ୍ତର ପାଇଁ

[Download "Tech Of World" App](#)

WtsApp/Call- 8596976190

Join Us-



ଓଡ଼ିଶାର ସମସ୍ତ ପୁର୍ବ ବର୍ଷର ପ୍ରଶ୍ନ ଉତ୍ତର ପାଇଁ

[Download "Tech Of World" App](#)

WtsApp/Call- 8596976190

Join Us-



ଓଡ଼ିଶାର ସମସ୍ତ ପୁର୍ବ ବର୍ଷର ପ୍ରଶ୍ନ ଉତ୍ତର ପାଇଁ

[Download "Tech Of World" App](#)

WtsApp/Call- 8596976190

Join Us-





ଓଡ଼ିଶାର ସମସ୍ତ ପୁର୍ବ ବର୍ଷର ପ୍ରଶ୍ନ ଉତ୍ତର ପାଇଁ

[Download "Tech Of World" App](#)

WtsApp/Call- 8596976190

Join Us-



ଓଡ଼ିଶାର ସମସ୍ତ ପୁର୍ବ ବର୍ଷର ପ୍ରଶ୍ନ ଉତ୍ତର ପାଇଁ

[Download "Tech Of World" App](#)

WtsApp/Call- 8596976190

Join Us-



ଓଡ଼ିଶାର ସମସ୍ତ ପୁରୁ ବର୍ଷର ପ୍ରଶ୍ନ ଉତ୍ତର ପାଇଁ

[Download "Tech Of World" App](#)

WtsApp/Call- 8596976190

Join Us-



ଓଡ଼ିଶାର ସମସ୍ତ ପୁରୁ ବର୍ଷର ଗ୍ରନ୍ଥ ଉତ୍ତର ପାଇଁ

[Download "Tech Of World" App](#)

WtsApp/Call- 8596976190

Join Us-



ଓଡ଼ିଶାର ସମସ୍ତ ପୁରୁ ବର୍ଷର ପ୍ରଶ୍ନ ଉତ୍ତର ପାଇଁ

[Download "Tech Of World" App](#)

WtsApp/Call- 8596976190

Join Us-





ଓଡ଼ିଶାର ସମସ୍ତ ପୁର୍ବ ବର୍ଷର ପ୍ରଶ୍ନ ଉତ୍ତର ପାଇଁ

[Download "Tech Of World" App](#)

WtsApp/Call- 8596976190

Join Us-



ଓଡ଼ିଶାର ସମସ୍ତ ପୁର୍ବ ବର୍ଷର ପ୍ରଶ୍ନ ଉତ୍ତର ପାଇଁ

[Download "Tech Of World" App](#)

WtsApp/Call- 8596976190

Join Us-



ଓଡ଼ିଶାର ସମସ୍ତ ପୁର୍ବ ବର୍ଷର ପ୍ରଶ୍ନ ଉତ୍ତର ପାଇଁ

[Download "Tech Of World" App](#)

WtsApp/Call- 8596976190

Join Us-



ଓଡ଼ିଶାର ସମସ୍ତ ପୁରୁ ବର୍ଷର ପ୍ରଶ୍ନ ଉତ୍ତର ପାଇଁ

[Download "Tech Of World" App](#)

WtsApp/Call- 8596976190

Join Us-



ଓଡ଼ିଶାର ସମସ୍ତ ପୁରୁ ବର୍ଷର ପ୍ରଶ୍ନ ଉତ୍ତର ପାଇଁ

[Download "Tech Of World" App](#)

WtsApp/Call- 8596976190

Join Us-





ଓଡ଼ିଶାର ସମସ୍ତ ପୁର୍ବ ବର୍ଷର ପ୍ରଶ୍ନ ଉତ୍ତର ପାଇଁ

[Download "Tech Of World" App](#)

WtsApp/Call- 8596976190

Join Us-



ଓଡ଼ିଶାର ସମସ୍ତ ପୁର୍ବ ବର୍ଷର ପ୍ରଶ୍ନ ଉତ୍ତର ପାଇଁ

[Download "Tech Of World" App](#)

WtsApp/Call- 8596976190

Join Us-



ଓଡ଼ିଶାର ସମସ୍ତ ପୁର୍ବ ବର୍ଷର ପ୍ରଶ୍ନ ଉତ୍ତର ପାଇଁ

[Download "Tech Of World" App](#)

WtsApp/Call- 8596976190

Join Us-



ଓଡ଼ିଶାର ସମସ୍ତ ପୁର୍ବ ବର୍ଷର ପ୍ରଶ୍ନ ଉତ୍ତର ପାଇଁ

[Download "Tech Of World" App](#)

WtsApp/Call- 8596976190

Join Us-



ଓଡ଼ିଶାର ସମସ୍ତ ପୁର୍ବ ବର୍ଷର ପ୍ରଶ୍ନ ଉତ୍ତର ପାଇଁ

[Download "Tech Of World" App](#)

WtsApp/Call- 8596976190

Join Us-

