

**COMBO - ଓଡ଼ିଶା**  
**29,000- MCQ**  
**ପୂର୍ବ ବର୍ଷ ପ୍ରଶ୍ନ**  
 ପୂର୍ବ 5 ବର୍ଷର OSSSC, OSSC, OPSC, ପୋଲିସ, CT, B.ED, ଅନ୍ୟ ସବୁ ପ୍ରଶ୍ନ  
**GK, ODIA, ENGLISH, , MATH, COMPUTER, Reasoning, Pedagogy**

**GK- ଓଡ଼ିଶାର**  
**ସମସ୍ତ ପୂର୍ବ ବର୍ଷ ପ୍ରଶ୍ନ**  
**ଓଡ଼ିଆ ଓ ଇଂରାଜୀ ରେ**  
**10,800- MCQ**  
**E-BOOK- PDF**  
 OSSSC , OSSC , OPSC, Police SI /Constable, PEO, RI, Battalion, Fireman, B.ED, JT, RHT, CT, OAVS, OSSTET, OTET & Other

**ଓଡ଼ିଆ ବ୍ୟାକରଣ**  
**ସମସ୍ତ ପୂର୍ବ ବର୍ଷ ପ୍ରଶ୍ନ**  
**4,246- MCQ**  
**75- TEST**  
**E-BOOK- PDF**  
 OSSSC, OSSC, OPSC, POLICE, B.ED, JT, RHT, CT, OAVS, OSSTET, OTET, OSSSC (PEO, RI, ARI & Other) & Other

**ENGLISH- ଓଡ଼ିଶାର**  
**ସମସ୍ତ ପୂର୍ବ ବର୍ଷ ପ୍ରଶ୍ନ**  
**4,300- MCQ**  
**E-BOOK- PDF**  
 OSSSC , OSSC , OPSC, Police SI /Constable, PEO, RI, Battalion, Fireman, B.ED, JT, RHT, CT, OAVS, OSSTET, OTET & Other

**କୋମ୍ପ୍ୟୁଟର- ଓଡ଼ିଶାର**  
**ସମସ୍ତ ପୂର୍ବ ବର୍ଷ ପ୍ରଶ୍ନ**  
**ଓଡ଼ିଆ ଓ ଇଂରାଜୀ ରେ**  
**E-BOOK- PDF**  
**1,900- MCQ**  
 OSSSC, OSSC , OPSC, Police SI & Constable, Battalion, PEO, RI, AMIN, JT, RHT & Other Exams

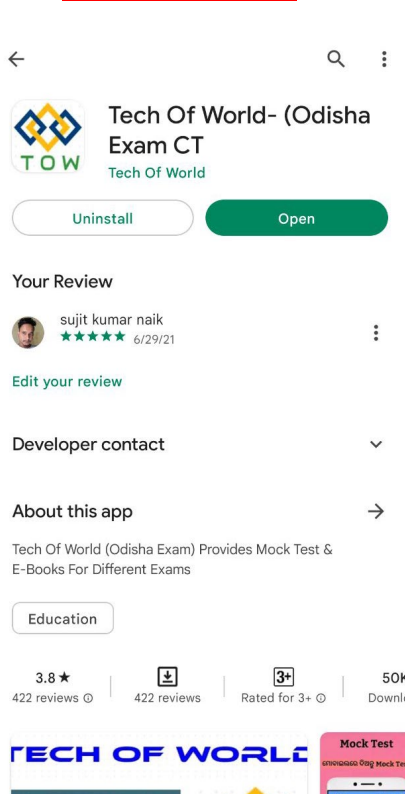
**MATH- ଓଡ଼ିଶାର**  
**ସମସ୍ତ ପୂର୍ବ ବର୍ଷ ପ୍ରଶ୍ନ**  
**ଓଡ଼ିଆ ଓ ଇଂରାଜୀ ରେ**  
**3,000- MCQ**  
**E-BOOK- PDF**  
 OSSSC , OSSC , OPSC, Police SI /Constable, PEO, RI, Battalion, Fireman, B.ED, JT, RHT, CT, OAVS, OSSTET, OTET & Other

**PEDAGOGY ଓଡ଼ିଶାର**  
**TEACHING APITUDE**  
**ପୂର୍ବ ବର୍ଷ ପ୍ରଶ୍ନ**  
**ଓଡ଼ିଆ ଓ ଇଂରାଜୀ ରେ**  
**1,900- MCQ**  
 B.ED, RHT, CT, JT, OAVS, OSSTET, OTET & Other

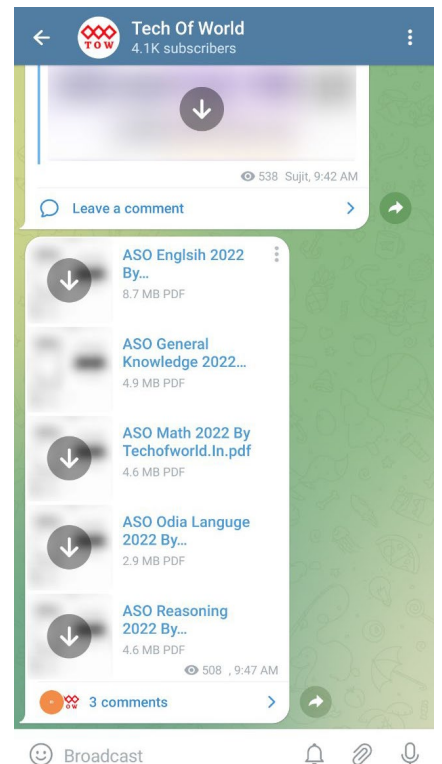
[Click Here](#)



[Click Here](#)



[Click Here](#)



[Click Here](#)



## ARITHMETIC

- In covering a distance of 60 km, Tanu takes 3 hours more than Ritika. If Tanu doubles her speed, then she would take 2 hour less than Ritika. Then, Tanu's speed is:
  - 8 kmph
  - 6 kmph
  - 7.25 kmph
  - 8.5 kmph
- Among the following series of numbers, find the odd number out:  
37, 43, 47, 53, 61, 71, 73, 81
  - 37
  - 71
  - 73
  - 81
- If  $\log_{10} 5 + \log_{10} (5x + 1) = \log_{10} (x + 5) + 1$ , then 'x' is equal to:
  - 1
  - 3
  - 5
  - 10
- A dishonest milkman professes to sell his milk at cost price but he mixes it with water and thereby gains 25%. The percentage of water in the mixture is:
  - 14%
  - 20%
  - 25%
  - 50%
- If  $\left(\frac{a}{b}\right)^{x-1} = \left(\frac{b}{a}\right)^{x-3}$ , then the value of x is:
  - 2
  - $\frac{2}{3}$
  - $\frac{7}{2}$
  - 1
- How many two-digit numbers satisfy this property:  
The last digit (unit's digit) of the square of the two-digit number is 2?
  - 11
  - 24
  - 34
  - None of these
- A man has some hens and cows. If the number of heads be 50 and the number of feet equals 160, then the number of cows will be:
  - 22
  - 21
  - 20
  - 30
- The rational number for recurring decimal 0.123123.... is:
  - $\frac{73}{367}$
  - $\frac{123}{1230}$
  - $\frac{123}{999}$
  - None of these
- What is the unit digit in  $(7^{97} \cdot 3^{53})$ ?
  - 0
  - 4
  - 6
  - 7
- 88 cubic centimetres of copper is drawn into a wire 1 mm in diameter. The length of the wire in metres will be:
  - 84
  - 90
  - 112
  - 336
- The length of a rectangle is halved, while its breadth is tripled. What is the percentage change in area?
  - 25% increase
  - 50% increase
  - 66% decrease
  - 50% decrease
- A library has an average of 260 visitors on Sundays and 140 on other days. The average number of visitors per day in a month of 30 days beginning with a Sunday is:
  - 180
  - 176
  - 160
  - 215
- The angle between the minute hand and the hour hand of a clock when the time is 8.30, is:
  - $85^\circ$
  - $75^\circ$
  - $65^\circ$
  - $115^\circ$
- The last day of a century cannot be
  - Monday
  - Wednesday
  - Thursday
  - Friday
- A, B, C rent a grass lawn. A puts 10 Goats for 7 months, B puts 12 Goats for 5 months and C puts 15 Goats for 3 months for grazing. If the total rent of the pasture is Rs. 175, how much must C pay as his share of rent?
  - Rs. 45
  - Rs. 50
  - Rs. 55
  - Rs. 60
- On selling 18 balls at Rs. 720, there is a loss equal to the cost price of 6 balls. The cost price of a ball is:
  - Rs. 55
  - Rs. 50
  - Rs. 65
  - Rs. 60
- A bank offers 5% compound interest calculated on half-yearly basis. A customer deposits Rs. 1600 each on 1st January and 1st July of a year. At the end of the year, the amount he would have gained by way of interest is:
  - Rs. 55
  - Rs. 50
  - Rs. 65
  - Rs. 60



- a) Rs. 120  
b) Rs. 121  
c) Rs. 122  
d) Rs. 123
18. Two pipes can fill a tank in 20 and 24 minutes respectively and a waste pipe can empty 18 litres per minute. All the three pipes working together can fill the tank in 15 minutes. The capacity of the tank is:  
a) 460 litres  
b) 700 litres  
c) 620 litres  
d) 720 litres
19. The angle of elevation of the sun, when the length of the shadow of a Tower is same as the height of the tower, is:  
a)  $30^\circ$   
b)  $45^\circ$   
c)  $60^\circ$   
d)  $90^\circ$
20. A batsman scored 144 runs which included 6 boundaries and 8 sixes. What percent of his total score did he make by running between the wickets?  
a) 65%  
b) 50%  
c) 55%  
d) 45%
21. The sum of three numbers is 147. If the ratio of the first to second is 2 : 3 and that of the second to the third is 5 : 8, then the second number is:  
a) 45  
b) 30  
c) 48  
d) 58
22. Prachi's father was 28 years of age when she was born while her mother was 26 years old when her brother four years younger to her was born. What is the difference between the ages of her parents?  
a) 2 years  
b) 4 years  
c) 6 years  
d) 8 years
23. The total number of digits used in numbering the pages of a Book having 536 pages is  
a) 1500  
b) 1800  
c) 1611  
d) 1378
24. Anand, Binod and Chandra start at the same time in the same direction to run around a circular stadium. Anand completes a round in 252 seconds, Binod in 308 seconds and Chandra in 198 seconds, all starting at the same point. After what time, will they all be again at the starting point together for the first time?  
a) 26 minutes and 18 seconds  
b) 42 minutes and 36 seconds  
c) 45 minutes  
d) 46 minutes and 12 seconds
25. Uma says, "If you reverse my age, the figures represent my husband's age. He is, of course, senior to me and the difference between our ages is one-eleventh of the sum of our ages." Then Uma's age is  
a) 43 years  
b) 34 years  
c) 45 years  
d) None of these
26. In a 400 m race, the ratio of the speed of two contestants A and B is 3 : 4. A has a start of 160 m. Then, A wins by:  
a) 60 m  
b) 40 m  
c) 20 m  
d) 80 m
27. In one hour, a boat goes 13 km/hr along the stream and 7 km/hr against the stream. The speed of the boat in still water (in km/hr) is:  
a) 10 km/hr  
b) 5 km/hr  
c) 11 km/hr  
d) 9 km/hr
28. A 230 metres long train running at the speed of 110 kmph crosses another train running in opposite direction at the speed of 70 kmph in 10 seconds. What is the length of the other train?  
a) 220 m  
b) 240 m  
c) 270 m  
d) 320 m
29. Amit and Sumit can do a piece of work in 20 days and 12 days respectively. Amit started the work alone and then after 4 days Sumit joined him till the completion of the work. How long did the work last?  
a) 6 days  
b) 10 days  
c) 15 days  
d) 20 days
30. The Sum of all Even numbers from 1 to 100 is:  
a) 2550  
b) 5100  
c) 2500  
d) None of these
31. The cost price of 30 toys is the same as the selling price of  $x$  toys. If the profit is 50%, then the value of  $x$  is:  
a) 20  
b) 30  
c) 15  
d) 25
32. Which of the following numbers will completely divide  $(49^{15} - 1)$ ?  
a) 8  
b) 14  
c) 46  
d) 50

33. The least number of complete years in which a sum of money put out at 20% compound interest will be more than tripled is:

- a) 3
- b) 4
- c) 7
- d) 6

34. A hollow iron pipe is 21 cm long and its external diameter is 8 cm. If the thickness of the pipe is 1 cm and iron weighs 9g/cm<sup>3</sup>, then the weight of the pipe is:

- a) 41.58 kg
- b) 4.158 kg
- c) 41.58 g
- d) 415.8 g

35. If  $2\sqrt{5} + \sqrt{180} = 17.88$ , then what will be the value of  $\sqrt{45} + 7\sqrt{5}$ ?

- a) 14.41
- b) 23.46
- c) 21.66
- d) 22.35

#### LOGICAL REASONING

36. In a Code Language, word 'LATE' is written as 38, then in the same language, word 'MAKE' would be written as :

- a) 25
- b) 26
- c) 27
- d) 30

37. If A = 1 and AND = 19, Then BAT =?

- a) 22
- b) 23
- c) 21
- d) 20

38. In the following question, what will come in the place of (?)

RAMO: SCPS :: VXMJ : ?

- a) WPZN
- b) WQZN
- c) WQPN
- d) WZPN

39. In the following series, which number will come in place of the question mark (?) from the given options

16 23 31 40 50 61 ?

- a) 73
- b) 77
- c) 83
- d) 81

40. With the help of options given below, find the suitable number which will come in place of the question mark

FED X 3 = 1629  
BCD X 4 = 492  
BEF X 1 = ?

- a) 451
- b) 145
- c) 514
- d) 415

41. If a month of a specific year ends on Friday, then how many Tuesdays will be there in that Month?

- a) 4
- b) 5
- c) 3
- d) 6

42. If Addition is said to be A, division to be B, Subtraction to be C and Multiplication to be D, then, what will be the value of the following equation:

$18 D 2 C 20 A 2 A 18 B 9 = ?$

- a) 16
- b) 20
- c) 13
- d) 15

43. 'X' walks towards south and then turns right, then left and then right. In which direction is he walking now?

- a) South
- b) North
- c) West
- d) South-West

44. Anil, Raju and Ravi are standing on the corners of an Equilateral triangle in an open ground. Raju walks 3 km to reach Anil. How much will Anil have to walk to reach Ravi and come back to his starting point?

- a) 3 km
- b) 4 km
- c) 5 km
- d) 6 km

45. B is mother of D and C is brother of D. H is daughter of E, whereas, D is wife of E. Then, what is the relation of E with C?

- a) Father- in -law
- b) Brother - in - law
- c) Uncle
- d) Brother

46. In a specific Code, 'A+B' means A is brother of B; 'A- B' means A is mother of B; 'A X B' means A is father of B; which of the following depicts that

P is uncle of Q

- a) P + Q + K
- b) P X K + Q
- c) P + K X Q
- d) None of these

47. From the below given options, find the word which can be formed by using the letters of the given word :-

RATIONALISATION

- a) NATIONALIST
- b) NATIONALISTIC
- c) REALISATION
- d) SITUATION

48. Which of the following letter's group is an odd one

- a) BJN
- b) FPT
- c) LQU
- d) JTV

**DATA INTERPRETATION**

Q(66-69) The following questions are based on the following table. Study the table carefully and answer the questions given below.

**Year wise and discipline wise number of Candidates Selected in an Industry (In thousands)**

Discipline	Year					
	1971	1972	1973	1974	1975	1976
Science	16	20	25	15	14	16
Commerce	8	12	12	11	15	13
Arts	4	8	8.5	10	11	13
Agriculture	1	3	3	2.5	1	2
Engineering	0.5	1	1	1	0.5	0.5
Others	0.5	1	0.5	0.5	0.5	0.5
<b>Total</b>	<b>30</b>	<b>45</b>	<b>50</b>	<b>40</b>	<b>42</b>	<b>45</b>

66. In which discipline is the number of Selected Candidates increasing every year?  
 a) Science  
 b) Engineering  
 c) Arts  
 d) Commerce
67. Approximately, what percentage of Candidates of Science discipline were Selected for the given period?  
 a) 38%  
 b) 42%  
 c) 29%  
 d) 45%
68. In which year is the percentage of Agriculture discipline Candidates Selected, the highest?  
 a) 1972  
 b) 1973  
 c) 1975  
 d) 1976
69. In which year for the first time did the Arts discipline Candidates constitute more than 25% of the Selected Candidates?  
 a) 1972  
 b) 1975  
 c) 1976  
 d) 1974

(Q70-71): Study the following table showing Bus fares for different destinations (in rupees) and answer the questions given below it.

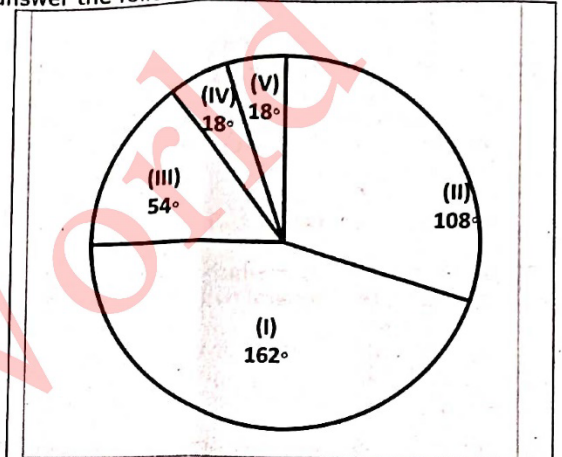
	Destinations				
	A	B	C	D	E
Male	10	3	5	2	15
Female	10	2	4	1	12
Children	5	1	3	1	6

70. Two males, three females and a child purchased tickets for destination E. How much did they pay?  
 a) Rs 72  
 b) Rs 42  
 c) Rs 33

d) Rs 60

71. For which destinations is the fare for children less than 50% of that of males?  
 a) A & B only  
 b) B & E only  
 c) A, C & E only  
 d) E only

(Q72-76) The total population of a city is 5000. The various Selections of the population are indicated below in the pie chart. Study the pie chart and answer the following questions.

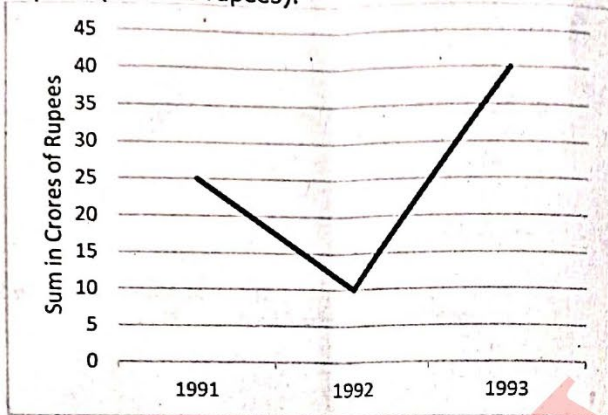


- I. Employees of the Public Sector**  
**II. Employees of the Private Sector**  
**III. Employee of the Corporate Sector**  
**IV. Self-Employed**  
**V. Unemployed**

72. What percentage of the employed persons is Self-Employed?  
 a) 5%  
 b)  $5\frac{5}{19}\%$   
 c) 19%  
 d) 20%
73. Number of persons employed in the Corporate Sector is  
 a) 250  
 b) 500  
 c) 750  
 d) 1500
74. The Number of Unemployed persons is  
 a) 250  
 b) 150  
 c) 100  
 d) 50
75. The number of persons employed in both the Public Sector and Corporate Sector is  
 a) 3750  
 b) 3000  
 c) 2500  
 d) 2200
76. What percentage of the employed persons is employed in Private Sector?  
 a)  $5\frac{5}{19}\%$

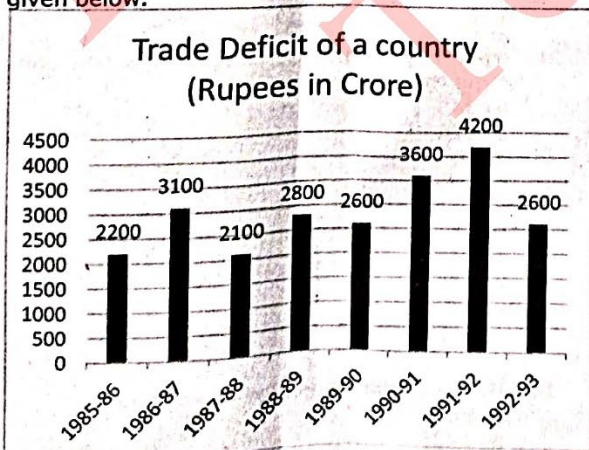
- b)  $15\frac{15}{19}\%$
- c)  $31\frac{11}{19}\%$
- d)  $52\frac{12}{19}\%$

(Q77-79) The following graph shows the value of imports of a company for a period of 3 years. Study the graph and answer the questions given below it. Imports (in Crore rupees).



- 77. What was the average import in these years (in Rs Crores)?
  - a) 17.5
  - b) 25
  - c) 35
  - d) 10
- 78. What was the decrease in percentage of import during the year 1992?
  - a) 60
  - b) 600
  - c) 40
  - d) 400
- 79. What was the Percentage of import in the Year 1993 relative to the year 1991?
  - a) 62.5
  - b) 60
  - c) 160
  - d) 266

(Q80-84) The bar diagram given below represents the trade deficit of country (for period of eight years). Study the diagram and answer the questions given below.



- 80. The deficit in 1991-92 was roughly how many times the deficit in 1988-89?
  - a) 1.4
  - b) 1.5
  - c) 2.5
  - d) 2.8
- 81. The percentage increase in deficit in 1991-92 as compared to the deficit in 1987-88 was
  - a) 200
  - b) 150
  - c) 100
  - d) 130
- 82. In which of the following years, the percentage increase of deficit compared to the preceding year was highest?
  - a) 1990-91
  - b) 1988-89
  - c) 1991-92
  - d) 1986-87
- 83. The deficit in 1990-91 was approximately \_\_\_\_\_ percent of the average deficit.
  - a) 150
  - b) 124
  - c) 90
  - d) 140
- 84. The ratio of the number of years in which the trade deficit is above the average deficit to those in which the trade deficit is below the average deficit is
  - a) 5:3
  - b) 4:3
  - c) 3:5
  - d) 3:4

(Q85-89) Study the data given below and answer the following questions.

Six boys A, B, C, D, E and F play a game of cards. Each has a pack of 10 cards. F borrows 2 cards from A and gives away 5 to C who in his turn gives 3 to B, while B gives 6 to D who passes on 1 to E.

- 85. Who has the maximum number of cards?
  - a) D
  - b) A
  - c) E
  - d) F
- 86. How many persons have the number of cards which are prime numbers?
  - a) One
  - b) Two
  - c) Three
  - d) None
- 87. The difference in the number of cards possessed by E and A is
  - a) 1
  - b) 4
  - c) 3
  - d) 5
- 88. Which of the following is definitely true?
  - a) D's number of cards is a multiple of 3
  - b) A possesses greater number of cards than D, B and F.

- c) 'C' gave away 3 cards to B, whereas B gave away double that number to E.
- d) Even number of cards are possessed by A, C and E.

89. The person possessing one less than double the number of cards possessed by A is
- a) E
  - b) D
  - c) F
  - d) B

(Q90-94) The questions are based on the following table, showing the courier charges for sending 1 kg parcel from one city to another (which is proportional to distance between cities). Study the table and answer the questions given below.

Cities	A	B	C	D	E
A	---	10	5	15	10
B	---	---	7	25	20
C	---	---	---	20	15
D	---	---	---	---	10
E	---	---	---	---	---

90. The cost of sending parcel from city B to city A and then A to E is
- a) Rs 25
  - b) Rs 20
  - c) Rs 17
  - d) Rs 15

91. Among the following, the charges will be the least for sending parcel from

- 1. A to E
- 2. B to D
- 3. E to D
- 4. C to B

- a) 1
- b) 2
- c) 3
- d) 4

92. B city is nearest to

- a) A
- b) C
- c) D
- d) E

93. For sending parcel from city C, the least charges will be for city

- a) A
- b) B
- c) D
- d) E

94. For which one of the following will the charges be different from the other three?

- 1. B to A
- 2. A to E
- 3. D to E
- 4. D to B

- a) 1
- b) 2
- c) 3
- d) 4

(Q95-97) Use the data given below and answer the questions.

For an Examination consisting of three subjects- Maths, Physics and Chemistry, 280 students appeared. When the results were declared, 185 students had passed in Maths, 210 had passed in Physics and 222 had passed in Chemistry.

All those except 5 students who passed in Maths, Passed in Physics.  
All those except 10 students who passed in Maths, Passed in Chemistry  
47 students failed in all the three subjects.  
200 students who passed Physics also passed Chemistry.

95. How many students passed in all the three subjects?

- a) 185
- b) 175
- c) 170
- d) 171

96. How many students failed in Physics and Mathematics?

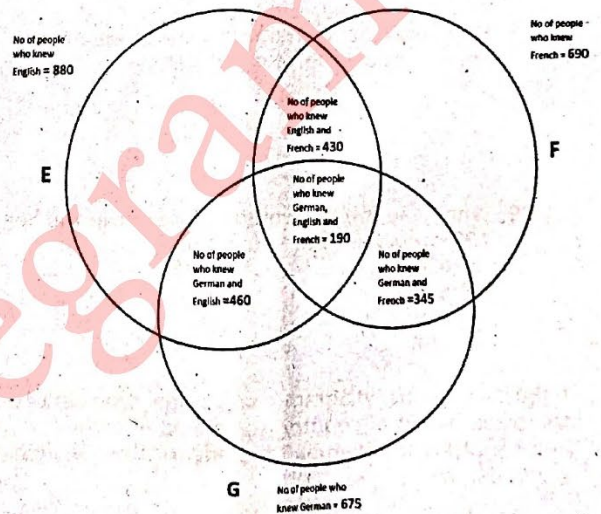
- a) 65
- b) 18
- c) 58
- d) 47

97. How many students passed in Maths but failed in both Physics and Chemistry?

- a) 5
- b) 10
- c) 15
- d) 1

(Q98-100) The questions are based on the Venn diagram given below. Study the diagram carefully and answer the following questions.

Total number of people Interviewed = 1200



98. How many people interviewed knew only one of the three languages?

- a) 345
- b) 320
- c) 50
- d) 190

99. How many people knew English alone?

- a) 450
- b) 420
- c) 10
- d) 180

100. How many people knew two or more languages?

- a) 1235

- b) 460
- c) 855
- d) 1045

**COMPUTER/ INTERNET AWARENESS**

101. Abacus was the first
- a) electronic computer
  - b) mechanical computer
  - c) electronic calculator
  - d) mechanical calculator
102. Which of the following is the smallest unit of data in a computer?
- a) Bit
  - b) KB
  - c) Nibble
  - d) Byte
103. Which of the following computer language is written in binary codes only?
- a) Pascal
  - b) Machine language
  - c) C
  - d) C#
104. Which shortcut key is used to switch between open programs in Microsoft Windows?
- a) Alt + Ctrl
  - b) Alt + Esc
  - c) Alt + Del
  - d) Alt + Tab
105. In email communication, CC stands for \_\_\_\_\_.
- a) Carbon Copy
  - b) Cold Coffee
  - c) Blind Carbon Copy
  - d) Casual copy
106. Verification of a login name and password is known as:
- a) Configuration
  - b) Accessibility
  - c) Authentication
  - d) Logging in
107. Which one of the following refers to the technique used for verifying the integrity of the message?
- a) Digital signature
  - b) Decryption algorithm
  - c) Protocol
  - d) Message Digest
108. What does SEO stand for?
- a) Search Engine Optimal
  - b) Social Engine Optimal
  - c) Search Engine Optimization
  - d) Social Engine Optimization
109. \_\_\_\_\_ is required to boot a computer.
- a) Loader
  - b) Operating system
  - c) Assembler
  - d) Compiler
110. The .....enables your computer to connect to other computers.
- a) Video card
  - b) Sound card
  - c) Network Interface Card (NIC)
  - d) Controller card
111. Which of the following refers to restarting the system when it is already powered on?
- a) Hibernation
  - b) A cold boot
  - c) Standby mode
  - d) A warm boot
112. In MS-Excel, all formulas must begin with
- a) /
  - b) (
  - c) =
  - d) %
113. The Process of erasing a disk is called:
- a) Wiping
  - b) Formatting
  - c) Cleaning
  - d) Defragmenting
114. In which situation running applications of an user account remains active?
- a) When we Log Off
  - b) When we Switch User
  - c) When we Shut Down
  - d) When we Reboot
115. Which one of the following refers to the copies of the same data (or information) occupying the memory space at multiple places.
- a) Data Repository
  - b) Data Inconsistency
  - c) Data Mining
  - d) Data Redundancy
116. In Excel, which one denoted a range from B1 through E5
- a) B1 - E5
  - b) B1:E5
  - c) B1 to E5
  - d) B1\$E5
117. From where we can change the name of an User account in a Computer?
- a) Settings
  - b) Computer Name
  - c) Code Panel
  - d) Control Panel
118. Which is considered a direct entry input device?
- a) Optical scanner
  - b) Mouse and digitizer
  - c) Light pen
  - d) All of the above
119. A storage area used to store data to compensate for the difference in speed at which the different units can handle details
- a) Memory
  - b) Buffer
  - c) Accumulator
  - d) Address





120. What is gutter margin in MS WORD?
- Margin that is added to the left margin when printing
  - Margin that is added to right margin when printing
  - Margin that is added to the binding side of page when printing
  - Margin that is added to the outside of the page when printing

**CURRENT EVENTS**

121. Who is the author of Book "How to Prevent next Pandemic"
- Bill Gates
  - Dr. Soumya Swaminathan
  - Dr. Bhavdeep Kang
  - Dr. Ashish Kumar Jha
122. Humza Yusuf is
- First Minister of Scotland
  - Foreign minister of Turkey
  - Home Minister of Lebanon
  - Defence Minister of Syria
123. Donald Trump was recently indicted by a US Court for
- His alleged role in hush Money payment
  - Attempted election manipulation
  - Tax evasion
  - Inciting 6<sup>th</sup> January 2022 mob
124. In March 2023 there were protests in Paris. The reason for protests was
- Price rise
  - Deteriorating Law and Order situation
  - Enhancing the age of retirement from 62 to 64 for pension purpose
  - Reducing the age of retirement from 64 to 62 years for pension purpose
125. Antaryami Mishra was recently awarded Padmashree. In which field did he excel?
- Literature
  - Farming
  - Dance
  - Music
126. Large scale protests held in March 2023 in Israel were against
- Compulsory Military Service
  - Proposal to amend the Constitution to reduce the powers of Judiciary
  - Price rise / inflation
  - For more aggressive policy against Palestine
127. Who is the current Chief Minister of Tripura?
- Dasrathi Debbarma
  - Manik Sarkar
  - Manik Saha
  - Biplab Kumar Deb

128. Who is the current Chief Minister of Nagaland?
- S.C Jamir
  - Neiphiu Rio
  - T.R. Zeliang
  - Shurhozelle Liezletsu

129. Vivan Sundaram died on 29 March 2023. In what field did he distinguished himself?
- Art
  - Music
  - Literature
  - Athletics

130. Sharad Yadav died in January 23. During his long political career which of the following ministry he did not hold the charge of?
- Ministry of Civil Aviation
  - Ministry of Textiles
  - Ministry of Labour
  - Ministry of Health & Family Welfare

131. Who is the current Managing Director of International Monetary Fund
- Rodrigo Rato
  - Dominique Strauss-Khan
  - Kristalina Georgieva
  - Christine Lagarda

132. Who won the Sahitya Akademi Award for Odin literature in 2022?
- Harekrushna Mallick
  - Gayatribala Panda
  - Yashodhara Mishra
  - Dasarathy Das

133. Who is the new CEO of Starbucks?
- Laxman Narasimhan
  - Arvind Krishna
  - Shantanu Narayan
  - Ajay Banga

134. Who is the present Minister of Industries in Odisha Govt?
- Pratap Keshari Deb
  - Ashok Chandra Panda
  - Samir Ranjan Das
  - Rohit Pujari

135. Who is present advocate General of Odisha?
- Ashok Kumar Parija
  - Ramakant Mohapatra
  - Ashok Mohanty
  - Jayant Das

136. Who is the present President of Nepal?
- Ram Chandra Paudel
  - Bidya Devi Bhandari
  - Ram Baran Yadav
  - None of above

137. In which field does Ms Nandita Das excel?
- Dance
  - Film direction and acting
  - Science
  - Sports

138. A recent joint survey by Directorate of Mining of Govt. of Odisha and GSI found gold reserves in 3 districts of Odisha. Which among following is not one of the said 3 districts?
- Deogarh
  - Keonjhar
  - Mayurbhanj
  - Sundergarh

139. "Ret Samadhi" (Tomb of sand) by Gitanjali Shree was recently awarded international booker prize.  
Who translated the book from Hindi to English?  
a) Gitanjali Shree herself  
b) Daisy Rockwell  
c) Shashi Tharoor  
d) Arunav Sinha
140. Who received 57th Gyanapith award in 2022?  
a) Amitabh Ghosh  
b) A. A. Namboothiri  
c) Damodar Mauzo  
d) Nilamani Phookan
141. As per live stock census 2019, what was total live stock population of Odisha?  
a) 282 Lakh  
b) 72 Lakh  
c) 156 Lakh  
d) 182 Lakh
142. In 2021-22 how much rice did Odisha produce?  
a) 82.91 MT  
b) 92.91 MT  
c) 102.91 MT  
d) 72.91 MT
143. Who was top scorer in Hockey World Cup 2023?  
a) Jeremy Hayward  
b) Tom Boon  
c) Victor Charlet  
d) Jip Janssen
144. Who has written the Book "The Body Keeps The Score: Brain, Mind and Body in the healing of Trauma"?  
a) Adam Grant  
b) James Clear  
c) Bessel Van Der Kolk  
d) Yuval Noah Harari
145. In which country was a draconian anti LGBT Law proposed recently which attracted international attention?  
a) Nigeria  
b) Ghana  
c) Iran  
d) Saudi Arabia
146. Who has written "Atomic Habits"?  
a) James Clear  
b) Charles Duhigg  
c) Daniel Goleman  
d) Stephen King
147. By a recent judgement U.S. Supreme Court overturned its own earlier judgement in Row vs. Wade. What is the subject matter of judgement?  
a) Right of persons arrested in terrorist cases.  
b) Right of accused to maintain silence during interrogation.  
c) A pregnant women's liberty to choose abortion  
d) None of above
148. Which of following is true?  
a) Credit Suisse is being acquired by UBS  
b) UBS is being acquired by Credit Suisse  
c) Neither UBS nor Credit Suisse is being acquired by any company  
d) Both UBS and Credit Suisse are being acquired by Bank of England
149. Who won men's Singles Championship of Australian Open 2023?  
a) Tommy Paul  
b) Novoc Djokovic  
c) Stefanos Tstisipas  
d) Roger Federer
150. Who has composed Theme song of Odisha Millet Mission?  
a) A.R. Rehman  
b) Anu Malik  
c) Preetam  
d) Ricky Kej