

COMBO - ଓଡ଼ିଶା
32,000- PYQ
ପୂର୍ବ ବର୍ଷ ପ୍ରଶ୍ନ
 ପୂର୍ବ 5 ବର୍ଷର OSSSC, OSSC, OPSC, ପୋଲିସ, CT, B.ED, ଅନ୍ୟ ସବୁ ପ୍ରଶ୍ନ
GK, ODIA, ENGLISH, , MATH, COMPUTER, Reasoning, Pedagogy

GK- ଓଡ଼ିଶାର
ସମସ୍ତ ପୂର୍ବ ବର୍ଷ ପ୍ରଶ୍ନ
11,685- PYQ
ଓଡ଼ିଆ ଓ ଇଂରାଜୀ ରେ
EXPLANATION
 OSSSC , OSSC , OPSC, Police SI /Constable, PEO, RI, Battalion, Fireman, B.ED, JT, RHT, CT, OAVS, OSSTET, OTET & Other

ଓଡ଼ିଆ ବ୍ୟାକରଣ
ସମସ୍ତ ପୂର୍ବ ବର୍ଷ ପ୍ରଶ୍ନ
4,343- PYQ
75- TEST
E-BOOK- PDF
 OSSSC, OSSC, OPSC, POLICE, B.ED, JT, RHT, CT, OAVS, OSSTET, OTET, OSSSC (PEO, RI, ARI & Other) & Other

ENGLISH- ଓଡ଼ିଶାର
ସମସ୍ତ ପୂର୍ବ ବର୍ଷ ପ୍ରଶ୍ନ
4,582- PYQ
ଓଡ଼ିଆ ଓ ଇଂରାଜୀ ରେ
EXPLANATION
 OSSSC , OSSC , OPSC, Police SI /Constable, PEO, RI, Battalion, Fireman, B.ED, JT, RHT, CT, OAVS, OSSTET, OTET & Other Exam

କୋମ୍ପ୍ୟୁଟର- ଓଡ଼ିଶାର
ସମସ୍ତ ପୂର୍ବ ବର୍ଷ ପ୍ରଶ୍ନ
2,353- PYQ
ଓଡ଼ିଆ ଓ ଇଂରାଜୀ ରେ
EXPLANATION
 OSSSC, OSSC , OPSC, Police SI & Constable, Battalion, PEO, RI, AMIN, JT, RHT & Other Exams

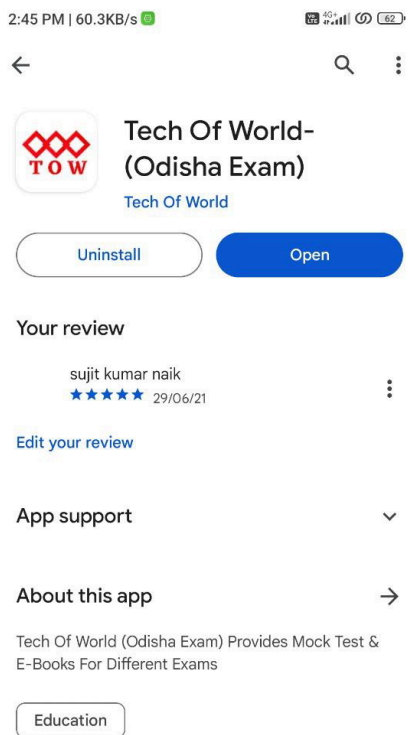
MATH- ଓଡ଼ିଶାର
ସମସ୍ତ ପୂର୍ବ ବର୍ଷ ପ୍ରଶ୍ନ
4,000- PYQ
ଓଡ଼ିଆ ଓ ଇଂରାଜୀ ରେ
E-BOOK- PDF
 OSSSC , OSSC , OPSC, Police SI /Constable, PEO, RI, Battalion, Fireman, B.ED, JT, RHT, CT, OAVS, OSSTET, OTET & Other

PEDAGOGY ଓଡ଼ିଶାର
TEACHING APTITUDE
ପୂର୍ବ ବର୍ଷ ପ୍ରଶ୍ନ
1,900- PYQ
ଓଡ଼ିଆ ଓ ଇଂରାଜୀ ରେ
EXPLANATION
 B.ED, RHT, CT, JT, OAVS, OSSTET, OTET & Other

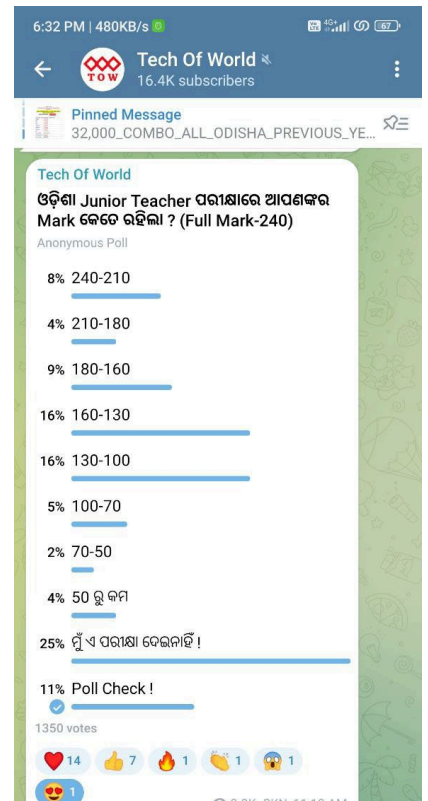
[Click Here](#)



[Click Here](#)



[Click Here](#)



[Click Here](#)



ଓଡ଼ିଶା ବିଦ୍ୟାଳୟ ଶିକ୍ଷା କାର୍ଯ୍ୟକ୍ରମ ପ୍ରାଧିକରଣ

Odisha School Education Programme Authority

Government of Odisha

Application Seq No.	OSEPA230013209
Participant ID	1250471700011
Participant Name	DEBIN BANU
Test Center Name	Government Polytechnic Jajpur
Test Date	09/11/2023
Test Time	2:00 PM - 4:30 PM
Subject	Junior Teacher (Schematic) CATEGORY I (Odia)

Section : Part I General English

Q.1 Identify the sentence with the correct subject-verb agreement:

- Ans 1. The groups of students is excited about the trip.
2. The group of students is excited about the trip.
3. The group of students were excited about the trip.
4. The group of students are excited about the trip.

Question ID : 630680

Option 1 ID : 630680

Option 2 ID : 630680

Option 3 ID : 630680

Option 4 ID : 630680

Status : Answer

Chosen Option : 4

Q.2 In which sentence is the phrase correctly used?

- Ans 1. Quickly, she walked reaching the bus stop in time.
2. Walking quickly, she reached the bus stop in time.
3. Quickly she walked, reaching the bus stop in time.
4. She walked quickly, reaching the bus stop in time.



Comprehension:

Read the given poem and answer the questions based on it:

It is true

I was created in you.

It is also true

That you were created for me.

I owned your voice.

It was shaped and tuned to soothe me.

Your arms were molded

Into a cradle to hold me, to rock me.

The scent of your body was the air

Perfumed for me to breathe.

Mother,

During those early, dearest days

I did not dream that you had

A large life which included me,

For I had a life

Which was only you.

SubQuestion No : 3

Q.3 What role did the mother's arms play in the speaker's life?

- Ans**
- 1. They helped the speaker learn to walk.
 - 2. They shaped the speaker's body.
 - 3. They symbolized the mother's strength.
 - 4. They provided warmth and comfort.

Comprehension:

Read the given poem and answer the questions based on it:

It is true

I was created in you.

It is also true

That you were created for me.

I owned your voice.

It was shaped and tuned to soothe me.

Your arms were molded

Into a cradle to hold me, to rock me.

The scent of your body was the air

Perfumed for me to breathe.

Mother,

During those early, dearest days

I did not dream that you had

A large life which included me,

For I had a life

Which was only you.

SubQuestion No : 4

Q.4 What is the primary inference drawn from the passage?

- Ans**
- 1. The speaker's mother had a separate life apart from the speaker.
 - 2. The speaker's mother had a difficult time raising the speaker.
 - 3. The speaker and their mother shared a deep and close bond.
 - 4. The speaker resented their mother's influence on their life.

Comprehension:

Read the given poem and answer the questions based on it:

It is true

I was created in you.

It is also true

That you were created for me.

I owned your voice.

It was shaped and tuned to soothe me.

Your arms were molded

Into a cradle to hold me, to rock me.

The scent of your body was the air

Perfumed for me to breathe.

Mother,

During those early, dearest days

I did not dream that you had

A large life which included me,

For I had a life

Which was only you.

SubQuestion No : 5

Q.5 What is the central theme of the passage?

- Ans**
- 1. The mother-child bond and interconnectedness
 - 2. The mother's sacrifice for her child
 - 3. Mother's dreams for her child
 - 4. The child's independence from the mother

Comprehension:

Read the given poem and answer the questions based on it:

It is true

I was created in you.

It is also true

That you were created for me.

I owned your voice.

It was shaped and tuned to soothe me.

Your arms were molded

Into a cradle to hold me, to rock me.

The scent of your body was the air

Perfumed for me to breathe.

Mother,

During those early, dearest days

I did not dream that you had

A large life which included me,

For I had a life

Which was only you.

SubQuestion No : 6

Q.6 How does the speaker describe the role of the mother's voice?

- Ans**
- 1. It was used for singing and music.
 - 2. It was created to entertain the speaker.
 - 3. It was molded to soothe and comfort the speaker.
 - 4. It was shaped to discipline the speaker.

Comprehension:

Read the following passage and answer the questions below.

"In the tranquil village of Willowbrook, nestled amidst rolling hills and lush green forests, there lived a young girl named Eliza. With a heart as wild as the meadows that stretched beyond her cottage, she yearned for adventure that lay beyond her quaint surroundings. Each morning, as the sun's first rays painted the sky in shades of pink and gold, Eliza would wander into the woods, her loyal dog, Max, by her side. They would explore secret paths, discovering hidden clearings and bubbling streams. It was in these woods that Eliza found not just beauty, but also a profound connection to nature. The rustling leaves whispered ancient tales, and the birds serenaded her with melodies that spoke of hope and possibility. Eliza learned that the greatest adventures are often found in the places closest to our hearts, and that in the quiet of nature, one can find a world filled with wonder."

SubQuestion No : 7

Q.7 What is the antonym of "quaint" as used in the passage?

- Ans
- 1. Charming
 - 2. Beautiful
 - 3. Serene
 - 4. Modern

Question ID

Option 1 ID

Option 2 ID

Option 3 ID

Option 4 ID

Status

Chosen Option

Comprehension:

Read the following passage and answer the questions below.

"In the tranquil village of Willowbrook, nestled amidst rolling hills and lush green forests, there lived a young girl named Eliza. With a heart as wild as the meadows that stretched beyond her cottage, she yearned for adventure that lay beyond her quaint surroundings. Each morning, as the sun's first rays painted the sky in shades of pink and gold, Eliza would wander into the woods, her loyal dog, Max, by her side. They would explore secret paths, discovering hidden clearings and bubbling streams. It was in these woods that Eliza found not just beauty, but also a profound connection to nature. The rustling leaves whispered ancient tales, and the birds serenaded her with melodies that spoke of hope and possibility. Eliza learned that the greatest adventures are often found in the places closest to our hearts, and that in the quiet of nature, one can find a world filled with wonder."

SubQuestion No : 8

Q.8 What could be an appropriate title for this passage?

- Ans
- 1. "Eliza's Daily Adventures"
 - 2. "Max and Eliza's Forest Journey"
 - 3. "The Enchanted Village of Willowbrook"
 - 4. "Exploring Nature in Willowbrook"

Comprehension:

Read the following passage and answer the questions below.

"In the tranquil village of Willowbrook, nestled amidst rolling hills and lush green forests, there lived a young girl named Eliza. With a heart as wild as the meadows that stretched beyond her cottage, she yearned for adventure that lay beyond her quaint surroundings. Each morning, as the sun's first rays painted the sky in shades of pink and gold, Eliza would wander into the woods, her loyal dog, Max, by her side. They would explore secret paths, discovering hidden clearings and bubbling streams. It was in these woods that Eliza found not just beauty, but also a profound connection to nature. The rustling leaves whispered ancient tales, and the birds serenaded her with melodies that spoke of hope and possibility. Eliza learned that the greatest adventures are often found in the places closest to our hearts, and that in the quiet of nature, one can find a world filled with wonder."

SubQuestion No : 9

Q.9 Which of the following statements best connects the passage to real-life situations?

- Ans 1. Adventure is only for those who travel to distant lands.
2. Nature can provide solace and inspiration in our lives.
3. Exploring the woods is dangerous and should be avoided.
4. Dogs are unreliable companions for outdoor activities.

Question ID:

Option 1 ID:

Option 2 ID:

Option 3 ID:

Option 4 ID:

Status:

Chosen Option:

Comprehension:

Read the following passage and answer the questions below.

"In the tranquil village of Willowbrook, nestled amidst rolling hills and lush green forests, there lived a young girl named Eliza. With a heart as wild as the meadows that stretched beyond her cottage, she yearned for adventure that lay beyond her quaint surroundings. Each morning, as the sun's first rays painted the sky in shades of pink and gold, Eliza would wander into the woods, her loyal dog, Max, by her side. They would explore secret paths, discovering hidden clearings and bubbling streams. It was in these woods that Eliza found not just beauty, but also a profound connection to nature. The rustling leaves whispered ancient tales, and the birds serenaded her with melodies that spoke of hope and possibility. Eliza learned that the greatest adventures are often found in the places closest to our hearts, and that in the quiet of nature, one can find a world filled with wonder."

SubQuestion No : 10

Q.10 Which sentence best summarizes the passage?

- Ans 1. Eliza loved exploring the village of Willowbrook with her dog, Max.
2. Eliza discovered the magic of nature in the woods of Willowbrook.
3. The village of Willowbrook was known for its tranquil forests and hills.
4. Max and Eliza had many adventures together in the village.

Comprehension:

ନିମ୍ନଲିଖିତ ଗଦ୍ୟାଂଶଟିକୁ ପଢ଼ି ଦିଆ ଯାଇଥିବା ପ୍ରଶ୍ନର ଉତ୍ତର ଦିଅନ୍ତୁ ।

ଜାତୀୟ ଜୀବନ

“ମୋ ସାଙ୍ଗେ ଆପଣଙ୍କ ମନ ମିଳିଲା ନାହିଁ, ଅତଏବ ମୁଁ ସମ୍ମିଳନୀରେ କାର୍ଯ୍ୟ କରିପାରିବି ନାହିଁ ।” ଏଥିର କାରଣ ଆତ୍ମମାନଙ୍କର ଜାତୀୟ ଜୀବନର ଅଭାବ । ଜାତୀୟ ଜୀବନ ଗଠିତ ହେଲେ ବ୍ୟକ୍ତିଗତ ଭାବରେ ଅସଭାବ ଥିଲେ ସୁଦ୍ଧା ଜାତୀୟ ଅନୁଷ୍ଠାନରେ ସମସ୍ତେ ମିଳିମିଶି କାର୍ଯ୍ୟ କରିପାରିବା, ଏଥିରେ ସନ୍ଦେହ ନାହିଁ ।”

SubQuestion No : 1

Q.1 “ମୁଁ ସମ୍ମିଳନୀରେ କାର୍ଯ୍ୟ କରିପାରିବି ନାହିଁ”- ଏହାର କାରଣ କଣ?

- Ans
- 1. ବ୍ୟକ୍ତିଗତ ଆଗ୍ରହର ଅଭାବ
 - 2. ଜାତୀୟ ଜୀବନର ଅଭାବ
 - 3. ଜାତୀୟତାର ଅଭାବ
 - 4. ଶିକ୍ଷାର ଅଭାବ

Question
Option 1
Option 2
Option 3
Option 4
Sta
Chosen Opt

Comprehension:

ନିମ୍ନଲିଖିତ ଗଦ୍ୟାଂଶଟିକୁ ପଢ଼ି ଦିଆ ଯାଇଥିବା ପ୍ରଶ୍ନର ଉତ୍ତର ଦିଅନ୍ତୁ ।

ଜାତୀୟ ଜୀବନ

“ମୋ ସାଙ୍ଗେ ଆପଣଙ୍କ ମନ ମିଳିଲା ନାହିଁ, ଅତଏବ ମୁଁ ସମ୍ମିଳନୀରେ କାର୍ଯ୍ୟ କରିପାରିବି ନାହିଁ ।” ଏଥିର କାରଣ ଆତ୍ମମାନଙ୍କର ଜାତୀୟ ଜୀବନର ଅଭାବ । ଜାତୀୟ ଜୀବନ ଗଠିତ ହେଲେ ବ୍ୟକ୍ତିଗତ ଭାବରେ ଅସଭାବ ଥିଲେ ସୁଦ୍ଧା ଜାତୀୟ ଅନୁଷ୍ଠାନରେ ସମସ୍ତେ ମିଳିମିଶି କାର୍ଯ୍ୟ କରିପାରିବା, ଏଥିରେ ସନ୍ଦେହ ନାହିଁ ।”

SubQuestion No : 2

Q.2 କେଉଁଟି “ଅସଭାବ” ର ବିପରୀତ ଶବ୍ଦ?

- Ans
- 1. ସଭାବର
 - 2. ସଭାବନା
 - 3. ସଭାବନୀୟ
 - 4. ସଭାବ

Comprehension:

ନିମ୍ନଲିଖିତ ଗଦ୍ୟାଂଶଟିକୁ ପଢ଼ି ଦିଆ ଯାଇଥିବା ପ୍ରଶ୍ନର ଉତ୍ତର ଦିଅନ୍ତୁ ।

ଜାତୀୟ ଜୀବନ

“ମୋ ସାଙ୍ଗେ ଆପଣଙ୍କ ମନ ମିଳିଲା ନାହିଁ, ଅତଏବ ମୁଁ ସମ୍ମିଳନୀରେ କାର୍ଯ୍ୟ କରିପାରିବି ନାହିଁ ।” ଏଥିର କାରଣ ଆମ୍ଭମାନଙ୍କର ଜାତୀୟ ଜୀବନର ଅଭାବ । ଜାତୀୟ ଜୀବନ ଗଠିତ ହେଲେ ବ୍ୟକ୍ତିଗତ ଭାବରେ ଅସଭାବ ଥିଲେ ସୁଦ୍ଧା ଜାତୀୟ ଅନୁଷ୍ଠାନରେ ସମସ୍ତେ ମିଳିମିଶି କାର୍ଯ୍ୟ କରିପାରିବା, ଏଥିରେ ସନ୍ଦେହ ନାହିଁ ।”

SubQuestion No : 3

Q.3 ଏଠାରେ କେଉଁ ସମ୍ମିଳନୀ ସଂପର୍କରେ ଉଲ୍ଲେଖ କରାଯାଇଛି?

- Ans**
- ✓ 1. ଉତ୍କଳ ସମ୍ମିଳନୀ
 - ✗ 2. ଜାତୀୟ ସମ୍ମିଳନୀ
 - ✗ 3. ଚକ୍ରଧରପୁର ସମ୍ମିଳନୀ
 - ✗ 4. ନାଗପୁର ସମ୍ମିଳନୀ

Question

Option 1

Option 2

Option 3

Option 4

Stat

Chosen Optio

Comprehension:

ନିମ୍ନଲିଖିତ ଗଦ୍ୟାଂଶଟିକୁ ପଢ଼ି ଦିଆ ଯାଇଥିବା ପ୍ରଶ୍ନର ଉତ୍ତର ଦିଅନ୍ତୁ ।

ଜାତୀୟ ଜୀବନ

“ମୋ ସାଙ୍ଗେ ଆପଣଙ୍କ ମନ ମିଳିଲା ନାହିଁ, ଅତଏବ ମୁଁ ସମ୍ମିଳନୀରେ କାର୍ଯ୍ୟ କରିପାରିବି ନାହିଁ ।” ଏଥିର କାରଣ ଆମ୍ଭମାନଙ୍କର ଜାତୀୟ ଜୀବନର ଅଭାବ । ଜାତୀୟ ଜୀବନ ଗଠିତ ହେଲେ ବ୍ୟକ୍ତିଗତ ଭାବରେ ଅସଭାବ ଥିଲେ ସୁଦ୍ଧା ଜାତୀୟ ଅନୁଷ୍ଠାନରେ ସମସ୍ତେ ମିଳିମିଶି କାର୍ଯ୍ୟ କରିପାରିବା, ଏଥିରେ ସନ୍ଦେହ ନାହିଁ ।”

SubQuestion No : 4

Q.4 “ସମସ୍ତେ ମିଳିମିଶି କାର୍ଯ୍ୟ କରିପାରିବେ”, ଏଥିପାଇଁ କ’ଣ ଦରକାର?

- Ans**
- ✗ 1. ଆଧୁନିକ ଶିକ୍ଷା
 - ✓ 2. ଜାତୀୟ ଜୀବନ
 - ✗ 3. ଦେଶସେବା
 - ✗ 4. ଭଲପାଇବା

Comprehension:

ନିମ୍ନଲିଖିତ ପଦ୍ୟାଂଶଟିକୁ ପଢ଼ି ଦିଆ ଯାଇଥିବା ପ୍ରଶ୍ନର ଉତ୍ତର ଦିଅନ୍ତୁ ।

ଆରେ ବାବୁ ଶ୍ୟାମଘନ ତୁ ଗଲେ ମଧୁଭୁବନ

କାହା ମୁଖ ଅନାଇ ବଞ୍ଚିବି

ହେବ ଦଶଦିଗ ଶୂନ୍ୟ-ଅଥୁର ହେବ ଜୀବନ

ନିଶି ଦିବସରେ ଝୁରୁଥିବିରେ ଜୀବଧନ ।

ଜୀବନ ବିହୁନେ ଯେହ୍ନେ ଝଷ ।

ରାଜା ବିନେ ଯେହ୍ନେ ଗ୍ରାମ ଦେଶରେ ।

SubQuestion No : 5

Q.5 କେଉଁଟି ନିଶି-ଶବ୍ଦର ପ୍ରତିଶବ୍ଦ ?

- Ans
- 1. ଅସ୍ତ୍ର
 - 2. ରାତି
 - 3. ଦିନ
 - 4. ସକାଳ

Comprehension:

ନିମ୍ନଲିଖିତ ପଦ୍ୟାଂଶଟିକୁ ପଢ଼ି ଦିଆ ଯାଇଥିବା ପ୍ରଶ୍ନର ଉତ୍ତର ଦିଅନ୍ତୁ ।

ଆରେ ବାବୁ ଶ୍ୟାମଘନ ତୁ ଗଲେ ମଧୁଭୁବନ

କାହା ମୁଖ ଅନାଇ ବଞ୍ଚିବି

ହେବ ଦଶଦିଗ ଶୂନ୍ୟ-ଅଥୁର ହେବ ଜୀବନ

ନିଶି ଦିବସରେ ଝୁରୁଥିବିରେ ଜୀବଧନ ।

ଜୀବନ ବିହୁନେ ଯେହ୍ନେ ଝଷ ।

ରାଜା ବିନେ ଯେହ୍ନେ ଗ୍ରାମ ଦେଶରେ ।

SubQuestion No : 6

Q.6 "ଝଷ" ଶବ୍ଦର ଅର୍ଥ କଣ?

- Ans**
- 1. କଇଁଚ
 - 2. ପୋକ
 - 3. ମାଛ
 - 4. ଯୋକ

Comprehension:

ନିମ୍ନଲିଖିତ ପଦ୍ୟାଂଶଟିକୁ ପଢ଼ି ଦିଆ ଯାଇଥିବା ପ୍ରଶ୍ନର ଉତ୍ତର ଦିଅନ୍ତୁ ।

ଆରେ ବାବୁ ଶ୍ୟାମଘନ ତୁ ଗଲେ ମଧୁଭୁବନ

କାହା ମୁଖ ଅନାଇ ବଞ୍ଚିବି

ହେବ ଦଶଦିଗ ଶୂନ୍ୟ-ଅଥୁର ହେବ ଜୀବନ

ନିଶି ଦିବସରେ ଝୁରୁଥିବିରେ ଜୀବଧନ ।

ଜୀବନ ବିହୁନେ ଯେହ୍ନେ ଝଷ ।

ରାଜା ବିନେ ଯେହ୍ନେ ଗ୍ରାମ ଦେଶରେ ।

SubQuestion No : 7

Q.7 ଏହି ପଦ୍ୟାଂଶରେ ଶ୍ୟାମଘନ ବୋଲି କାହାକୁ ସମ୍ବୋଧନ କରାଯାଇଛି?

Ans 1. ରାମ

2. ବଳରାମ

3. ହରି

4. କୃଷ୍ଣ

Comprehension:

ନିମ୍ନଲିଖିତ ପଦ୍ୟାଂଶଟିକୁ ପଢ଼ି ଦିଆ ଯାଇଥିବା ପ୍ରଶ୍ନର ଉତ୍ତର ଦିଅନ୍ତୁ ।

ଆରେ ବାବୁ ଶ୍ୟାମଘନ ତୁ ଗଲେ ମଧୁଭୁବନ

କାହା ମୁଖ ଅନାଇ ବଞ୍ଚିବି

ହେବ ଦଶଦିଗ ଶୂନ୍ୟ-ଅଥୁର ହେବ ଜୀବନ

ନିଶି ଦିବସରେ ଝୁରୁଥିବିରେ ଜୀବଧନ ।

ଜୀବନ ବିହୁନେ ଯେହ୍ନେ ଝଷ ।

ରାଜା ବିନେ ଯେହ୍ନେ ଗ୍ରାମ ଦେଶରେ ।

SubQuestion No : 8

Q.8 ଏହି ପଦ୍ୟାଂଶରେ "ମଧୁଭୁବନ" କେଉଁ ସ୍ଥାନକୁ ବୁଝାଏ?

- Ans
- 1. ଦ୍ଵାରିକା
 - 2. ଗୋପ
 - 3. ହସ୍ତିନା
 - 4. ମଥୁରା

Q.9 "ବ୍ୟାଧି" ଶବ୍ଦର ପ୍ରତିଶବ୍ଦ କଣ?

- Ans
- 1. ରୋଗ
 - 2. ଜ୍ଵର
 - 3. ବିକଳାଙ୍ଗ
 - 4. ସଂକ୍ରମଣ

Q.10 "ଗହାଳୀ"ରେ କିଏ ପାଠ ପଢ଼ାନ୍ତି?

- Ans
- 1. ଶିକ୍ଷକ
 - 2. ଶିକ୍ଷୟତ୍ରୀ
 - 3. ପଣ୍ଡିତ
 - 4. ଅବଧାନ

Que
Op
Op
Op
Op
Chose

Section : Part 1 General Knowledge and Current Affairs

Q.1 _____ crops are sown in winter from October to December and harvested in summer from April to June.

- Ans
- 1. Kharif and Zaid both
 - 2. Zaid
 - 3. Rabi
 - 4. Kharif

Que
Op
Op
Op
Op
Chose

Q.2 Environment performs vital function of producing :-

- Ans
- 1. Non Conventional sources of energy only
 - 2. non renewable sources only
 - 3. renewable resources only
 - 4. renewable and non renewable resources

Q.3 Each gene has a _____ DNA (Deoxyribonucleic acid) sequence.

- Ans
- 1. common
 - 2. repetitive
 - 3. similar
 - 4. unique

Q.4 The 102nd Amendment inserted Article 338B into the Constitution. This article provides for the establishment of :-

- Ans
- 1. National Finance Commission
 - 2. Election Commission
 - 3. National Commission for Scheduled Class
 - 4. National Commission for Backward Classes

Q.5 _____ ranks among the most populous districts of Odisha.

- Ans
- 1. Debagarh
 - 2. Jharsuguda
 - 3. Gajapati
 - 4. Ganjam

Q.6 Which among the given options is not a part of Equatorial Region:-

- Ans 1. Central Asia
2. The Amazon Valley in South America
3. Malayan Peninsula
4. Congo Basin and Ghana in Africa

Questi
Optior
Optior
Optior
Optior
S
Chosen O

Q.7 _____ popularly known as Jayee Rajguru a great freedom fighter and martyr of Odisha was born on, 29th October, 1739.

- Ans 1. Haramani Devi
2. Raja Artatran Deo
3. Aykrushana Mohapatra
4. Chand Rajguru

Questi
Optior
Optior
Optior
Optior
S
Chosen O

Q.8 _____, a 13-year-old from Bengaluru, wins the International EcoHero Award for her innovative and dedicated environmental activism.

- Ans 1. Maya Harsha
2. Bangaru Adhiyan
3. Rajeshwari Acharya
4. Maria Sultan

Q.9 Recently in July 2023, which country has imposed a complete ban on single-use produce bags.

- Ans
- 1. China
 - 2. Nepal
 - 3. India
 - 4. New Zealand

Ques
Opti
Opti
Opti
Opti
Chosen

Q.10 The abolition of Diarchy in the provinces was recommended by the _____.

- Ans
- 1. Charter Act
 - 2. Indian Council Act
 - 3. Government of India Act of
 - 4. Vernacular Press Act

Ques
Opti
Opti
Opti
Opti
Chosen

Section : Part 1 Reasoning Ability

Q.1 Select the option that is related to the fifth number-letter cluster in the same way as the fourth number-letter cluster is related to the third number-letter cluster and the second number-letter cluster is related to the first number-letter cluster.
BHUBANESWAR : UAEA114 :: CHANDIGARH : AIA73 :: HYDERABAD : ?

- Ans
- 1. EAA56
 - 2. AE62
 - 3. EAA66
 - 4. EAA68

Q.2 Select the option that is related to the third number in the same way as the second number is related to the first number.
 $26 : 676 :: 125 : ?$

- Ans**
- 1. 10500
 - 2. 25625
 - 3. 15625
 - 4. 5100

Que
 Opt
 Opt
 Opt
 Opt
 Choser

Q.3 In a class of 110 students, Nirmal's rank from the top is 56. Harsh is ten ranks below Nirmal. What is Harsh's rank from the bottom?

- Ans**
- 1. 45th
 - 2. 46th
 - 3. 43rd
 - 4. 44th

Que
 Opt
 Opt
 Opt
 Opt
 Choser

Q.4 If X denotes 'multiplication', Y denotes 'addition', Z denotes 'division', and W denotes 'subtraction', then what will be the value of the following equation?
 $16 X 3 Z 6 Y 9 W 5 = ?$

- Ans**
- 1. 8
 - 2. 48
 - 3. 12
 - 4. 24

Q.5 Anand, Bishal, Celia, Drake, and Eshwar are five friends sitting around a circular table facing the centre. Drake sits to the immediate right of Anand. Celia is not sitting next to Drake or Anand. Eshwar is sitting to the immediate right of Celia. Who is sitting to the immediate right of Drake?

- Ans**
- 1. Bishal
 - 2. Eshwar
 - 3. Celia
 - 4. Anand

Question ID
Option 1 ID
Option 2 ID
Option 3 ID
Option 4 ID
Status
Chosen Option

Q.6 If ' $M \times N$ ' means 'M is the mother of N'.
If ' $M + N$ ' means 'M is the father of N'.
If ' $M \div N$ ' means 'M is the sister of N'.
If ' $M - N$ ' means 'M is the brother of N'.

How is A related to D in the expression ' $A - B \div C \times D$ '?

- Ans**
- 1. Father's brother
 - 2. Mother's brother
 - 3. Father's father
 - 4. Brother

Question ID
Option 1 ID
Option 2 ID
Option 3 ID
Option 4 ID
Status
Chosen Option

Q.7 In a certain code language, if BOTTLE is coded as APSUKF, GLASS is coded as FMZTR, then what will PLATE be coded as?

- Ans**
- 1. OMZSF
 - 2. OMZUD
 - 3. QMBUF
 - 4. QKBSF

Q.8 Two Statements are given followed by two conclusions numbered I and II. Assuming the statements to be true, even if they seem to be at variance with commonly known facts, decide which of the conclusions logically follow(s) from the statements.

Statements:

Statement I: No lamp is a bulb.

Statement II: All bulbs are fans.

Conclusions:

Conclusion I: No lamp is a fan.

Conclusion II: Some fans are bulbs.

Ans 1. Only conclusion II follows

2. Only conclusion I follows

3. Both conclusions I and II follow

4. Neither conclusion I nor II follows

Questi
Optio
Optio
Optio
Optio
S
Chosen C

Q.9 How many vowels are there in the given letter series that are immediately preceded by a consonant?

HJDTUHVNXZLKIEBUQ

Ans 1. 1

2. 2

3. 4

4. 3

Questi
Optio
Optio
Optio
Optio
S
Chosen C

Q.10 Four letter-cluster pairs have been given, out of which three are alike in some manner and one is different. Select the odd letter-cluster pair.

Ans 1. UX : DF

2. IL : RO

3. EH : VS

4. PS : KH

Q.1 What is the primary concern regarding the ethical use of artificial intelligence (AI) in society?

- Ans
- 1. Lack of skilled AI developers
 - 2. Privacy and security
 - 3. Limited computing power
 - 4. High implementation costs

Qu
Op
Op
Op
Op
Chose

Q.2 A company has a network of offices across the world. The company wants to implement a secure and reliable way for employees to access confidential files and applications from any office. Which of the following solutions would be best for the company?

- Ans
- 1. Wide area network (WAN)
 - 2. Public cloud-based storage and application suite
 - 3. Virtual private network (VPN)
 - 4. Local area network (LAN)

Qu
Op
Op
Op
Op
Chose

Q.3 Which of the following is a function of the operating system's kernel?

- Ans
- 1. Running application software
 - 2. Allocating system resources
 - 3. Creating documents and files
 - 4. Managing user interfaces

Q.4 What is the primary function of the Central Processing Unit (CPU) in a computer?

- Ans 1. Execute instructions and perform calculations
2. Input data from peripherals
3. Store data in memory
4. Display graphical information

Q.5 Which programming language is often used for data analysis, scientific computing, and machine learning?

- Ans 1. Swift
2. Ruby
3. PHP
4. R

Section : Part 1 Child Development Learning Curriculum and Assessment

Q.1 ପ୍ରଭାବଶାଳୀ ରୁକ୍ଷବୋର୍ଡ ଲେଖା ପାଇଁ କେଉଁ କାରକକୁ ବିଚାର କରିବା ଜରୁରୀ?

- Ans 1. କିଛିବି ନ ଲିଭାଇ ପୁରା ବୋର୍ଡ ଭରିବା ।
2. ଯଥାସମ୍ଭବ ଶୀଘ୍ର ଶୀଘ୍ର ଲେଖିବା ।
3. କର୍ଷିତ୍ୱ ଓ କଳାତ୍ମକ ଲେଖା ଶୈଳୀ ବ୍ୟବହାର କରିବା ।
4. ଯଥାର୍ଥତା ଏବଂ ସଂରଚନାତ୍ମକ ଉପସ୍ଥାପନାକୁ ନିଶ୍ଚିତ କରିବା ।

Q.2 In implementing inclusive education, how do regular assessments enhance student learning?

- Ans
- 1. By identifying areas of improvement and adapting instruction.
 - 2. By focusing solely on grades.
 - 3. By increasing competition among students.
 - 4. By reducing hands-on learning.

Q.3 The Right to Education (RTE) is a fundamental right under which Article of the Indian Constitution?

- Ans
- 1. Article 19
 - 2. Article 21A
 - 3. Article 370
 - 4. Article 32

Q.4 Which approach mainly revolves around the teacher delivering knowledge?

- Ans
- 1. Teacher-centered
 - 2. Learning-centered
 - 3. Constructivist
 - 4. Learner-centered

Q.5 What characterizes the "continuous" aspect of CCA?

- Ans
- 1. Annual assessment of students.
 - 2. Regular and periodic evaluations.
 - 3. Evaluation only during semester ends.
 - 4. Occasional feedback on performance.

Ques
Opti
Opti
Opti
Opti
Chosen

Q.6 Which developmental milestone is typically expected for children aged 7-11, during the concrete operational stage in Piaget's theory of cognitive development?

- Ans
- 1. Ability to think logically about concrete events and classify objects.
 - 2. Basic reflexes and sensory exploration.
 - 3. Egocentric thinking with a strong focus on oneself.
 - 4. Abstract thinking and moral reasoning.

Ques
Opti
Opti
Opti
Opti
Chosen

Q.7 In an experience-centered curriculum, what is most likely to be used as a primary teaching strategy?

- Ans
- 1. Standardized tests.
 - 2. Field trips and project-based learning.
 - 3. Lecture method.
 - 4. Traditional textbooks.

Q.8 Why might adolescents experience heightened emotional sensitivity and mood swings?

- Ans
- 1. Rapid hormonal changes.
 - 2. They are naturally more aggressive.
 - 3. They resist adult authority.
 - 4. They are seeking attention.

Question
Option 1
Option 2
Option 3
Option 4
Sta
Chosen Opt

Q.9 In the constructivist approach, learning is primarily viewed as:

- Ans
- 1. A passive absorption of facts
 - 2. An active process of constructing knowledge
 - 3. A process of memorization
 - 4. A quick process based on imitation

Question
Option 1
Option 2
Option 3
Option 4
Sta
Chosen Opt

Q.10 The objective of the Udaan initiative, launched by the Central Board of Secondary Education (CBSE) in India, was to:

- Ans
- 1. Mentor and facilitate girl students to pursue higher education in engineering and technology.
 - 2. Reduce the dropout rate of girl students.
 - 3. Increase enrollment of girl students in primary education.
 - 4. Provide free bicycles to girl students.

Q.11 Why is it crucial to tailor curriculum objectives to the learner's context?

- Ans
- 1. It helps make learning more relevant and relatable.
 - 2. It encourages memorization over understanding.
 - 3. It promotes a centralized education system.
 - 4. It ensures all students study the same material.

Q.12 How does a positive school environment primarily benefit a child's socio-emotional development?

- Ans
- 1. By ensuring the child has high academic grades.
 - 2. By focusing solely on textbook knowledge.
 - 3. By promoting healthy peer relationships and a sense of belonging.
 - 4. By emphasizing competition among students.

Q.13 Which statement best represents the nature vs. nurture debate in child development?

- Ans
- 1. Nature refers to learning, and nurture to genetic factors.
 - 2. Nature refers to heredity, and nurture refers to environment.
 - 3. Both heredity and environment play negligible roles.
 - 4. Nurture has a minor role, while nature is dominant.

Q.14 When preparing a multiple-choice question, what is the distractor?

- Ans 1. An incorrect answer choice
2. The correct answer
3. The question stem
4. The topic of the question

Qu
Op
Op
Op
Op
Chose

Q.15 What best defines the concept of a curriculum in the context of education?

- Ans 1. A list of textbooks for a subject.
2. A planned set of educational experiences and content.
3. The layout of a school's physical infrastructure.
4. A collection of the school's achievement data.

Qu
Op
Op
Op
Op
Chose

Section : Part II Subject Contents

Q.1 Find the rational number which is equivalent to $\frac{11}{13}$.

- Ans 1. $\frac{65}{78}$
2. $\frac{104}{88}$
3. $\frac{77}{91}$
4. $\frac{22}{39}$

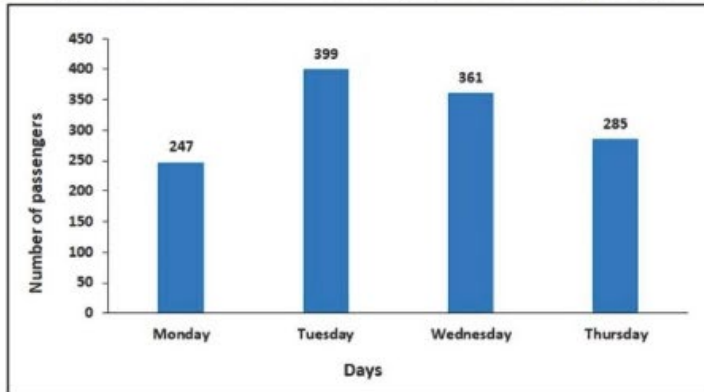
Q.2 An angle that measures less than 90 degrees is known as:

- Ans
- 1. Reflex
 - 2. Obtuse
 - 3. Straight
 - 4. Acute

Q.3 Find the value of $3.8 \div 1.9 + 45 \times 4$

- Ans
- 1. 179
 - 2. 180
 - 3. 182
 - 4. 170

Q.4 The given bar graph shows the number of passengers who booked cabs on four different days. Find the ratio of the number of passengers who booked cabs on Wednesday to the number of passengers who booked on Tuesday.



- Ans**
- 1. 21: 17
 - 2. 19: 14
 - 3. 19: 17
 - 4. 19: 21

Question
Option
Option
Option
Option
Sta
Chosen Op

Q.5 A clock gains 4 minutes in 1 hour. It is set right at 9:20 a.m. What time will the clock show at 4:20 pm the same day?

- Ans**
- 1. 3:02 p.m.
 - 2. 4:48 p.m.
 - 3. 4:02 p.m.
 - 4. 4:22 p.m.

Q.6 Find the highest common factor of 34 and 51.

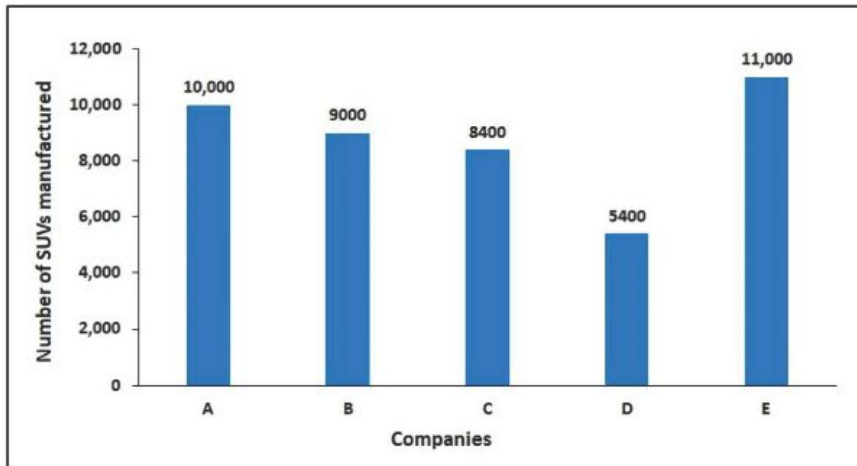
- Ans
- 1. 12
 - 2. 11
 - 3. 18
 - 4. 17

Question
Option
Option
Option
Option
Sta
Chosen Op

Q.7 In an election, candidate A got 64% of the total valid votes. 30% of the total votes were declared invalid. If the total number of votes is 55,000, find the number of valid votes polled in favour of the candidate.

- Ans
- 1. 24,000
 - 2. 22,660
 - 3. 25,500
 - 4. 24,640

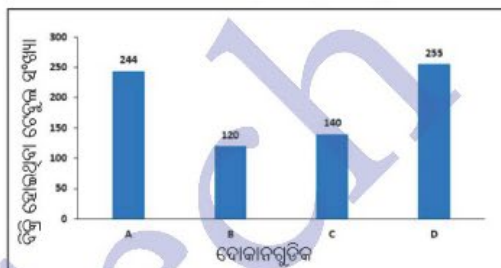
Q.8 The given bar chart shows the number of SUVs manufactured by five different companies (A, B, C, D and E) in 2022. SUVs manufactured by C is what percent of SUVs manufactured by A?



- Ans
- 1. 80%
 - 2. 78%
 - 3. 77%
 - 4. 84%

Question ID : 6
 Option 1 ID : 6
 Option 2 ID : 6
 Option 3 ID : 6
 Option 4 ID : 6
 Status : A
 Chosen Option : 4

Q.9 ପ୍ରଦତ୍ତ ବାରଗ୍ରାଫ, ଚାରୋଟି ଭିନ୍ନ ଦୋକାନ A, B, C ଏବଂ D ଦ୍ୱାରା ବିକ୍ରି ହୋଇଥିବା ଟେବୁଲ୍ ସଂଖ୍ୟା ଦର୍ଶାଏ । ଷ୍ଟୋର A ଦ୍ୱାରା ବିକ୍ରି ହୋଇଥିବା ଟେବୁଲ୍ ଏବଂ ଷ୍ଟୋର C ଦ୍ୱାରା ବିକ୍ରି ହୋଇଥିବା ଟେବୁଲ୍‌ର ଅନୁପାତ କେତେ?



- Ans
- 1. 61: 35
 - 2. 20: 33
 - 3. 16: 55
 - 4. 61: 30

Q.10 The two angles of a quadrilateral are 67° and 107° . If the other two angles are in the ratio of 43: 50, then find the measure of each of them.

- Ans**
- 1. 100° and 84°
 - 2. 94° and 90°
 - 3. 80° and 74°
 - 4. 100° and 86°

Question
Option
Option
Option
Option
St
Chosen Op

Q.11 Which of the following is not a macronutrient required by the body?

- Ans**
- 1. Iodine
 - 2. Carbohydrates
 - 3. Fats
 - 4. Proteins

Question
Option
Option
Option
Option
St
Chosen Op

Q.12 CPCB Stands for:

- Ans**
- 1. Central Pollution and Prevention Control Board
 - 2. Commission for Pollution Control and Biohazard
 - 3. Central Pollution Control Board
 - 4. Conventional Pollution Prevention Board

Q.13 Salt satyagraha march happened in which of the following year?

- Ans
- 1. 1932
 - 2. 1931
 - 3. 1929
 - 4. 1930

Qu
Op
Op
Op
Op
Chose

Q.14 Tropical cyclones are intense low-pressure areas confined to the area lying between _____ and _____ latitudes.

- Ans
- 1. 30° N and 30° S
 - 2. 40° N and 40° S
 - 3. 50° N and 50° S
 - 4. 60° N and 60° S

Qu
Op
Op
Op
Op
Chose

Q.15 Which of the following is not under the general classifications as per physiographical features of India?

- Ans
- 1. Costal Plains
 - 2. Aravali hills
 - 3. Himalayan Mountain
 - 4. Peninsular plateau

Q.16 Which of the following is not a factor affecting evaporation?

- Ans 1. decrease in pressure
 2. Increase of surface area
 3. Increase of temperature
 4. decrease in humidity

Q.17 What is the percentage of oxygen in exhaled air?

- Ans 1. 18.0
 2. 16.4
 3. 17.0
 4. 17.4

Q.18 E-waste consists of:

- Ans 1. Dismantle part of Computer
 2. Plastic
 3. Dry waste
 4. Wet waste

Q.19 What is the critical temperature of carbon dioxide?

Ans 1. 30.98°C

2. 50.98°C

3. 40.98°C

4. 20.98°C

Q.20 ନିମ୍ନୋକ୍ତ ମଧ୍ୟରୁ କେଉଁଟି ଶକ୍ତିର ଏକ ପାରମ୍ପରିକ ଉତ୍ସ ଅଟେ?

Ans 1. ପାରମାଣବିକ ଶକ୍ତି

2. ଜୁଆର ଶକ୍ତି

3. ତୈଳ

4. ବାୟୋମାସ୍

Q.21 Fill in the blank with the correct preposition.

The treasure was hidden _____ the ancient ruins.

Ans 1. within

2. near

3. through

4. beneath

Q.22 The word given in the brackets defines the modification of the noun. Based on this understanding fill in the blank with the correct adjective from the given options.
In the dark and (intriguing) _____ forest, the hikers cautiously navigated their way through the dense undergrowth, hoping to catch a glimpse of elusive wildlife.

- Ans
- 1. mysterious
 - 2. towering
 - 3. enchanting
 - 4. treacherous

Ques
Optic
Optic
Optic
Optic
Chosen

Q.23 Fill in the blank with the correct adverb.
She spoke _____ when delivering the important news to the anxious audience.

- Ans
- 1. loud
 - 2. louder
 - 3. loudest
 - 4. loudly

Ques
Optic
Optic
Optic
Optic
Chosen

Q.24 Fill in the blank with the correct irregular verb.
She had _____ the novel before the movie adaptation was released.

- Ans
- 1. reads
 - 2. reading
 - 3. readed
 - 4. read

Q.25 Complete the sentence with the correct form of the tense:
When we got to the theatre, the show _____.

- Ans
- 1. starts
 - 2. is starting
 - 3. had started
 - 4. started

Q.26 Complete the sentence with the correct form of the tense:
By next month, I _____ my driving test.

- Ans
- 1. will pass
 - 2. passing
 - 3. passed
 - 4. will be passing

Q.27 Choose the correct punctuation from the given options:
I'm not sure when they will arrive _____.

- Ans
- 1. colon
 - 2. full stop
 - 3. question mark
 - 4. comma

Q.28 Fill in the blank with the correct collective noun.

A _____ of geese flew in formation across the sky.

Ans 1. flock

2. school

3. pride

4. herd

Que
Op
Op
Op
Op
Op
Chose

Q.29 Complete the sentence with the appropriate article to make it grammatically correct.

I need to buy _____ ingredients for the recipe.

Ans 1. the

2. an

3. any

4. a

Que
Op
Op
Op
Op
Op
Chose

Q.30 Choose the correct punctuation from the given options:

She asked me to bring some fruits _____ a bag of chips, and drinks to the picnic.

Ans 1. colon

2. comma

3. full stop

4. question mark

Q.31 'ସାପ' ଶବ୍ଦଟିର ସମାର୍ଥବୋଧକ ଶବ୍ଦ କେଉଁଟି ?

- Ans
- 1. ଭୁଜଙ୍ଗ
 - 2. ଭ୍ରମର
 - 3. ଭୁଜ
 - 4. ଭଜନ

Q.32 'ଆଖି ପକାଇବା'ର ଅର୍ଥ କେଉଁଟି ?

- Ans
- 1. ଲକ୍ଷ୍ୟ ରଖିବା
 - 2. ମୃତ୍ୟୁବରଣ କରିବା
 - 3. ମୋଟାମୋଟି ଦେଖିବା
 - 4. ଲୋଲୁପ ଦୃଷ୍ଟି ପକାଇବା

Q.33 ନିମ୍ନୋକ୍ତ ମଧ୍ୟରୁ 'ପଖାଳ' ଶବ୍ଦଟିର ବିପରୀତବୋଧକ ଶବ୍ଦ କେଉଁଟି ?

- Ans
- 1. ସଜ
 - 2. ଚବ୍ଚ
 - 3. ବାସି
 - 4. ନରମ

Q.34 'ପ୍ରାଚୀ' ଶବ୍ଦଟିର ବିପରୀତ ଶବ୍ଦଟିକୁ ଚିହ୍ନାଅ ।

- Ans
- 1. ଅପ୍ରାଚୀ
 - 2. ନବୀନ
 - 3. ପ୍ରଚୀନ
 - 4. ଅର୍ବାଚୀନ

Q.35 'ଆଜ୍ଞା' ପଦଟି କେଉଁ ପ୍ରକାରର ଅବ୍ୟୟ ?

- Ans
- 1. ଭାବସୂଚକ ଅବ୍ୟୟ
 - 2. ବିକଳ୍ପାର୍ଥକ ଅବ୍ୟୟ
 - 3. ସମ୍ପତ୍ତିସୂଚକ ଅବ୍ୟୟ
 - 4. ସମ୍ପ୍ରେଧନସୂଚକ ଅବ୍ୟୟ

Q.36 'ଅକାଳ କୁଷ୍ମାଣ୍ଡ' - ରୁଚି ପଦଟିର ଅର୍ଥ ଚିହ୍ନଟ କର ।

- Ans
- 1. ଅଦୁଃଖା ହେବା
 - 2. ଅକାଳରେ ପଡ଼ି ବାଟବଣା ହେବା
 - 3. ନିତାନ୍ତ ଅଯୋଗ୍ୟ
 - 4. ଅକାଳରେ ମରିଯିବା

Q.37 'ପ୍ରତୀତୀ' ଶବ୍ଦଟିରେ ବ୍ୟବହୃତ ଉପସର୍ଗଟିକୁ ଚିହ୍ନାଅ ?

- Ans
- 1. ପ୍ର
 - 2. ଅତି
 - 3. ପରା
 - 4. ପ୍ରତି

Q.38 ସାରଳା ଦାସ ଓଡ଼ିଶାରେ ମୁନି ଭାବରେ ପରିଚିତ - ରେଖାଙ୍କିତ ପଦଟି କେଉଁ ପ୍ରକାରର ବିଶେଷ୍ୟ ?

- Ans
- 1. ଗୁଣବାଚକ ବିଶେଷ୍ୟ
 - 2. କାରିବାଚକ ବିଶେଷ୍ୟ
 - 3. କ୍ରିୟାବାଚକ ବିଶେଷ୍ୟ
 - 4. ବସ୍ତୁବାଚକ ବିଶେଷ୍ୟ

Q.39 ନିମ୍ନୋକ୍ତ ମଧ୍ୟରୁ କେଉଁଟି ବିଶେଷ୍ୟ ?

- Ans
- 1. ଅତ୍ୟବ
 - 2. ପରୁଛି
 - 3. କିଏ
 - 4. କାଠ

Q.40 'ଭୂଗୋଳ' ଶବ୍ଦରେ 'ଇକ' ପ୍ରତ୍ୟୟ ଯୋଗହେଲେ କେଉଁ ଶବ୍ଦ ହୁଏ ?

- Ans
- 1. ଭୌଗଳିକ
 - 2. ଭୂଗଳିକ
 - 3. ଭୂଗୋଳିକ
 - 4. ଭୌଗୋଳିକ

Quest
Optio
Optio
Optio
Optio
S
Chosen C

Section : Part II Pedagogy

Q.1 A grammatically correct declarative sentence that makes sense, which is either true or false but not both, is a:

- Ans
- 1. undefined term
 - 2. definition
 - 3. proposition
 - 4. axiom

Quest
Optio
Optio
Optio
Optio
S
Chosen C

Q.2 Which of the following represents the lowest level of Bloom's taxonomy in case of teaching mathematics to a high school student?

- Ans
- 1. Remembering
 - 2. Creating
 - 3. Applying
 - 4. Organising

Q.3 ନିମ୍ନଲିଖିତ ଉଦ୍ଦେଶ୍ୟଗୁଡ଼ିକ ମଧ୍ୟରୁ କେଉଁଟି 'ଏକ ବୃତ୍ତର ପରିଧି' ବିଷୟ ପ୍ରତି ଅନୁକୂଳ ନୁହେଁ?

Ans 1.

ଶିକ୍ଷାର୍ଥୀମାନଙ୍କୁ, ଏକ ବୃତ୍ତର ପରିଧି ଏବଂ ବ୍ୟାସ ମଧ୍ୟରେ ସମ୍ପର୍କ ନିର୍ଣ୍ଣୟ କରିବା ପାଇଁ ସକ୍ଷମ କରିବା

2.

ଶିକ୍ଷାର୍ଥୀମାନଙ୍କୁ, ବୃତ୍ତର ପରିଧି ସମ୍ବନ୍ଧୀୟ ସୂତ୍ର ବ୍ୟବହାର କରି, ଏହା ସମ୍ବନ୍ଧୀୟ ସମସ୍ୟାଗୁଡ଼ିକର ସମାଧାନ କରିବା ପାଇଁ ସକ୍ଷମ କରିବା

3.

ଶିକ୍ଷାର୍ଥୀମାନଙ୍କୁ, ବୃତ୍ତର କ୍ଷେତ୍ରଫଳ ସମ୍ବନ୍ଧୀୟ ସମସ୍ୟା ସମାଧାନ କରିବାକୁ ସକ୍ଷମ କରିବା

4. ଶିକ୍ଷାର୍ଥୀମାନଙ୍କୁ, ଏକ ବୃତ୍ତର ଧାରଣା ବୁଝିବାକୁ ସକ୍ଷମ କରିବା

Question II
Option 1 II
Option 2 II
Option 3 II
Option 4 II
Statu
Chosen Optio

Q.4 A teacher wrote natural numbers 1 to 20 into two tables as follows.

Table I: 2, 3, 5, 7, 11, 13, 17, 19

Table II: 4, 6, 8, 9, 10, 12, 14, 15, 16, 18, 20

Further she asked the students to share observations about this grouping. Which of the following observations is NOT correct?

Ans 1. Numbers in table I are prime numbers.

2. Table II consists of even prime numbers.

3. Numbers in table II have more than two factors.

4. Numbers in table I cannot be divisible by 5.

Question II
Option 1 II
Option 2 II
Option 3 II
Option 4 II
Statu
Chosen Optio

Q.5 A comprehensive series of meaningful learning experiences built around a central theme or idea and organised in such a way as to result in appropriate behavioural changes in pupils is called a:

Ans 1. unit plan

2. year plan

3. lesson plan

4. unit test

Q.6 Which pedagogical tool in EVS can be most effective in fostering global environmental awareness?

- Ans
- 1. Comparative studies of different ecosystems
 - 2. Only local case studies
 - 3. Ignoring international environmental events
 - 4. Only reading textbooks

Ques
Optic
Optic
Optic
Optic
Chosen

Q.7 How does EVS contribute to the holistic development of a child?

- Ans
- 1. By teaching only laboratory techniques
 - 2. By focusing solely on exam preparation
 - 3. By connecting academic knowledge with real-world situations
 - 4. By teaching only about plants

Ques
Optic
Optic
Optic
Optic
Chosen

Q.8 EVS ଶିକ୍ଷାବିଜ୍ଞାନ ପରିପ୍ରେକ୍ଷୀରେ କେଉଁ ନୀତି, ଗଭୀର ବୁଝାମଣା ଏବଂ ଦୀର୍ଘସମୟ ପାଇଁ ଧାରଣାଗୁଡ଼ିକୁ ସୁନିଶ୍ଚିତ କରି ଧାରଣାଗୁଡ଼ିକର ପୁନର୍ବାର ପରିଦର୍ଶନ ହେଉଥିବା ପ୍ରକ୍ରିୟାର ସମୀକ୍ଷା ଆବଶ୍ୟକ କରେ?

- Ans
- 1. ଏକକ-ସମୟ ଶିକ୍ଷଣର ସିଦ୍ଧାନ୍ତ (Principle of One-Time Learning)
 - 2. ପର୍ଯ୍ୟାୟ ପୁନରାବୃତ୍ତିର ସିଦ୍ଧାନ୍ତ (Principle of Periodic Reiteration)
 - 3. କେବଳ ଅଗ୍ରଗତିର ସିଦ୍ଧାନ୍ତ (Principle of Forward-only Progression)
 - 4. ପ୍ରାରମ୍ଭିକ ଦକ୍ଷତାର ସିଦ୍ଧାନ୍ତ (Principle of Initial Mastery)

Q.9 Which of the following best describes the significance of Environmental Studies (EVS) in education?

- Ans
- 1. To understand geographical landscapes only.
 - 2. To solely focus on biological species and their classifications.
 - 3. To develop an interdisciplinary understanding of our natural and human-made environments.
 - 4. To study political systems in different countries.

Question
Option 1
Option 2
Option 3
Option 4
Stat
Chosen Opti

Q.10 Which of the following principles stresses the importance of relating EVS concepts with daily life experiences?

- Ans
- 1. Principle of Theory
 - 2. Principle of Correlation
 - 3. Principle of Application
 - 4. Principle of Practice

Question
Option 1
Option 2
Option 3
Option 4
Stat
Chosen Opti

Q.11 Fill in the blank:

Personal interest in learning English and personal need to accomplish a goal are examples of ____.

- Ans
- 1. intrinsic motivation
 - 2. areas of demand
 - 3. extrinsic motivation
 - 4. social environment

Q.12 What is one of the main aims of teaching prose to learners?

- Ans
- 1. Enabling socialization skills
 - 2. Facilitating usage of internet
 - 3. Development of digital skills
 - 4. Development of language ability

Q.13 Listening skills is a type of _____.

- Ans
- 1. time management skills
 - 2. communication skills
 - 3. creativity skills
 - 4. data analysis skills

Q.14 Identify the non-verbal cue which signifies the manner of speaking.

- Ans
- 1. Emotion
 - 2. Words
 - 3. Mood
 - 4. Tone

Q.15 Which of the following will help non-native English speakers in a language class?

- Ans
- 1. Allowing the students to speak in their own language in the class.
 - 2. Explain that it is not acceptable to ask questions during the class.
 - 3. Pairing them with students who speak their language to talk during the class.
 - 4. Asking questions by the teacher at first that require short answers.

Q.16 କେଉଁ ପଦ୍ଧତି ମନୋବିଜ୍ଞାନ ସମ୍ପର୍କ ?

- Ans
- 1. ଭାଷା ସଂସର୍ଗ ପଦ୍ଧତି
 - 2. ଆରୋହୀ ପଦ୍ଧତି
 - 3. ଆଲୋଚନା ପଦ୍ଧତି
 - 4. ଅବରୋହ ପଦ୍ଧତି

Q.17 ସୂକ୍ଷ୍ମ ଅଧ୍ୟାପନା ପଦ୍ଧତିର ପ୍ରବର୍ତ୍ତକ କିଏ ?

- Ans
- 1. ଏଡ଼ୱାର୍ଡ ଯାପିର
 - 2. କାର୍ତ୍ତିକେଶ୍ଵର କର
 - 3. ଡବ୍ଲ୍ୟୁ ଏଚ କିଲିପାଟ୍ରିକ
 - 4. ଆଲେକ୍ସ

Q.18 କେଉଁ ଧାରଣାଟି ଜ୍ଞାନାତ୍ମକ ଉଦ୍ଦେଶ୍ୟ ଅନୁର୍ଣ୍ଣତ ?

- Ans
- 1. ଶିଶୁର ସୃଜନଶକ୍ତିର ବିକାଶ କରାଇବା
 - 2. ଭାଷାର ଭିନ୍ନ ଭିନ୍ନ ବିଭାଗ ସହିତ ପରିଚିତ କରାଇବା
 - 3. ଲିଖିତ ଭାଷା ଅଧ୍ୟୟନ କରିବା
 - 4. ଅଳଙ୍କାର ସଂପର୍କରେ ସୂଚନା ନ ଦେବା

Q.19 ଟିଏ- କେଉଁ ବିଭକ୍ତିର ଚିହ୍ନ ?

- Ans
- 1. ୁତ୍ତତୀୟା
 - 2. ସପ୍ତମୀ
 - 3. ପ୍ରଥମୀ
 - 4. ତ୍ରିତୀୟା

Q.20 ମାତୃଭାଷା ମଣିଷର କାହା ସଦୃଶ ?

- Ans
- 1. ମାଆ
 - 2. ବାପା
 - 3. ଭାଇ
 - 4. ପଡୋଶୀ