

COMBO - ଓଡ଼ିଶା
32,000- PYQ
ପୂର୍ବ ବର୍ଷ ପ୍ରଶ୍ନ
 ପୂର୍ବ 5 ବର୍ଷର OSSSC, OSSC, OPSC, ପୋଲିସ, CT, B.ED, ଅନ୍ୟ ସବୁ ପ୍ରଶ୍ନ
GK, ODIA, ENGLISH, , MATH, COMPUTER, Reasoning, Pedagogy

GK- ଓଡ଼ିଶାର
ସମସ୍ତ ପୂର୍ବ ବର୍ଷ ପ୍ରଶ୍ନ
11,685- PYQ
ଓଡ଼ିଆ ଓ ଇଂରାଜୀ ରେ
EXPLANATION
 OSSSC , OSSC , OPSC, Police SI /Constable, PEO, RI, Battalion, Fireman, B.ED, JT, RHT, CT, OAVS, OSSTET, OTET & Other

ଓଡ଼ିଆ ବ୍ୟାକରଣ
ସମସ୍ତ ପୂର୍ବ ବର୍ଷ ପ୍ରଶ୍ନ
4,343- PYQ
75- TEST
E-BOOK- PDF
 OSSSC, OSSC, OPSC, POLICE, B.ED, JT, RHT, CT, OAVS, OSSTET, OTET, OSSSC (PEO, RI, ARI & Other) & Other

ENGLISH- ଓଡ଼ିଶାର
ସମସ୍ତ ପୂର୍ବ ବର୍ଷ ପ୍ରଶ୍ନ
4,582- PYQ
ଓଡ଼ିଆ ଓ ଇଂରାଜୀ ରେ
EXPLANATION
 OSSSC , OSSC , OPSC, Police SI /Constable, PEO, RI, Battalion, Fireman, B.ED, JT, RHT, CT, OAVS, OSSTET, OTET & Other Exam

କୋମ୍ପ୍ୟୁଟର- ଓଡ଼ିଶାର
ସମସ୍ତ ପୂର୍ବ ବର୍ଷ ପ୍ରଶ୍ନ
2,353- PYQ
ଓଡ଼ିଆ ଓ ଇଂରାଜୀ ରେ
EXPLANATION
 OSSSC, OSSC , OPSC, Police SI & Constable, Battalion, PEO, RI, AMIN, JT, RHT & Other Exams

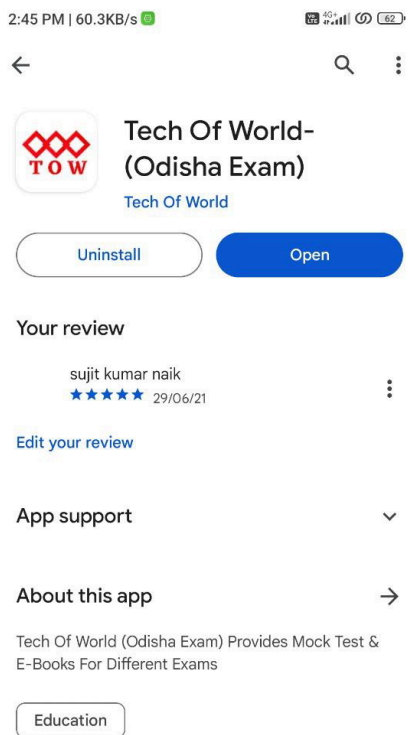
MATH- ଓଡ଼ିଶାର
ସମସ୍ତ ପୂର୍ବ ବର୍ଷ ପ୍ରଶ୍ନ
4,000- PYQ
ଓଡ଼ିଆ ଓ ଇଂରାଜୀ ରେ
E-BOOK- PDF
 OSSSC , OSSC , OPSC, Police SI /Constable, PEO, RI, Battalion, Fireman, B.ED, JT, RHT, CT, OAVS, OSSTET, OTET & Other

PEDAGOGY ଓଡ଼ିଶାର
TEACHING APTITUDE
ପୂର୍ବ ବର୍ଷ ପ୍ରଶ୍ନ
1,900- PYQ
ଓଡ଼ିଆ ଓ ଇଂରାଜୀ ରେ
EXPLANATION
 B.ED, RHT, CT, JT, OAVS, OSSTET, OTET & Other

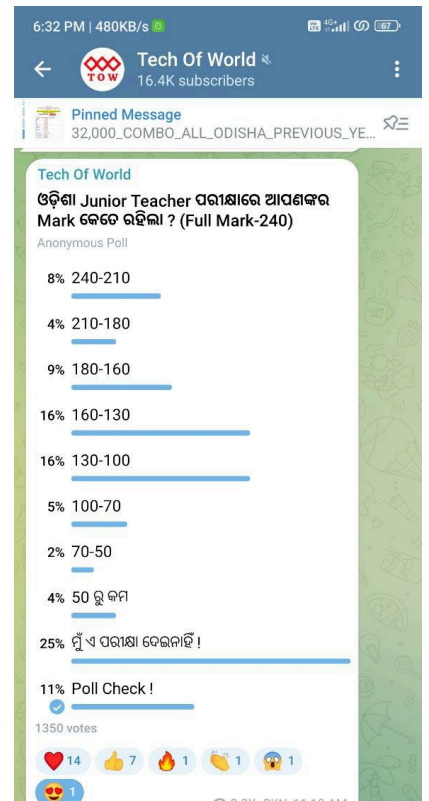
[Click Here](#)



[Click Here](#)



[Click Here](#)



[Click Here](#)



ଓଡ଼ିଶା ବିଦ୍ୟାଳୟ ଶିକ୍ଷା କାର୍ଯ୍ୟକ୍ରମ ପ୍ରାଧିକରଣ

Odisha School Education Programme Authority

Government of Odisha

Application Seq No.	Tehofworld.In
Participant ID	Tehofworld.In
Participant Name	Tehofworld.In
Test Center Name	The Orion Service
Test Date	10/11/2023
Test Time	9:00 AM - 11:30 AM
Subject	Junior Teacher (Schematic) CATEGORY I (Odia)

Section : Part I General English

Q.1 Choose the sentence with the correct use of the gerund:

- Ans
- 1. He enjoys to swim in the ocean.
 - 2. He enjoys swim at the ocean.
 - 3. He enjoys swimming in the ocean.
 - 4. He enjoys swim in the ocean.

Question ID : 6306

Option 1 ID : 6306

Option 2 ID : 6306

Option 3 ID : 6306

Option 4 ID : 6306

Status : Answ

Chosen Option : 3

Q.2 Identify the sentence with the correct use of colons:

- Ans
- 1. I have many interests: reading, writing, and painting.
 - 2. I have many interests such as: reading, writing, and painting.
 - 3. I have many interests: such as reading, writing, and painting.
 - 4. I have many interest, such as: reading, writing, and painting.

Comprehension:

Read the given poem and answer the questions based on it:

All I know is a door into the dark.

Outside, old axles and iron hoops rusting;

Inside, the hammered anvil's short-pitched ring,

The unpredictable fantail of sparks

Or hiss when a new shoe toughens in water.

The anvil must be somewhere in the centre,

Horned as a unicorn, at one end and square,

Set there immoveable: an altar

Where he expends himself in shape and music.

Sometimes, leather-aproned, hairs in his nose,

He leans out on the jamb, recalls a clatter

Of hoofs where traffic is flashing in rows;

Then grunts and goes in, with a slam and flick

To beat real iron out, to work the bellows.

SubQuestion No : 3

Q.3 Select the correct summary for the passage:

- Ans**
- 1. The passage focuses on the traffic outside a blacksmith's workshop.
 - 2. The passage reflects on the unpredictability of working with iron in a forge.
 - 3. The passage describes a blacksmith's workshop and the sounds and sights within it.
 - 4. The passage discusses the symbolism of a unicorn horn in a blacksmith's shop.

Comprehension:

Read the given poem and answer the questions based on it:

All I know is a door into the dark.
Outside, old axles and iron hoops rusting;
Inside, the hammered anvil's short-pitched ring,
The unpredictable fantail of sparks
Or hiss when a new shoe toughens in water.
The anvil must be somewhere in the centre,
Horned as a unicorn, at one end and square,
Set there immovable: an altar
Where he expends himself in shape and music.
Sometimes, leather-aproned, hairs in his nose,
He leans out on the jamb, recalls a clatter
Of hoofs where traffic is flashing in rows;
Then grunts and goes in, with a slam and flick
To beat real iron out, to work the bellows.

SubQuestion No : 4

Q.4 What is the significance of the "unpredictable fantail of sparks" in the poem?

- Ans**
- 1. It represents the beauty of nature
 - 2. It symbolizes the sparks of creativity
 - 3. It indicates danger and unpredictability
 - 4. It signifies the arrival of a new day

Comprehension:

Read the given poem and answer the questions based on it:

All I know is a door into the dark.

Outside, old axles and iron hoops rusting;

Inside, the hammered anvil's short-pitched ring,

The unpredictable fantail of sparks

Or hiss when a new shoe toughens in water.

The anvil must be somewhere in the centre,

Horned as a unicorn, at one end and square,

Set there immovable: an altar

Where he expends himself in shape and music.

Sometimes, leather-aproned, hairs in his nose,

He leans out on the jamb, recalls a clatter

Of hoofs where traffic is flashing in rows;

Then grunts and goes in, with a slam and flick

To beat real iron out, to work the bellows.

SubQuestion No : 5

Q.5 Which phrase best describes the emotional atmosphere of the passage?

- Ans**
- 1. Contentment and satisfaction
 - 2. Determination and resolve
 - 3. Regret and longing
 - 4. Irritation and annoyance

Comprehension:

Read the given poem and answer the questions based on it:

All I know is a door into the dark.

Outside, old axles and iron hoops rusting;

Inside, the hammered anvil's short-pitched ring,

The unpredictable fantail of sparks

Or hiss when a new shoe toughens in water.

The anvil must be somewhere in the centre,

Horned as a unicorn, at one end and square,

Set there immoveable: an altar

Where he expends himself in shape and music.

Sometimes, leather-aproned, hairs in his nose,

He leans out on the jamb, recalls a clatter

Of hoofs where traffic is flashing in rows;

Then grunts and goes in, with a slam and flick

To beat real iron out, to work the bellows.

SubQuestion No : 6

Q.6 What is the significance of the anvil in the poem?

- Ans**
- 1. It symbolizes the door into the dark.
 - 2. It represents the unpredictability of nature.
 - 3. It signifies the passing of time.
 - 4. It is described as an altar of craftsmanship.

Comprehension:

Read the following passage and answer the questions below.

"In the classic novel 'To Kill a Mockingbird' by Harper Lee, the town of Maycomb serves as a microcosm of the broader societal issues prevailing in the American South during the 1930s. Through the eyes of young Scout Finch, we witness the stark realities of racism, injustice, and the moral complexities that shape our world. Atticus Finch, Scout's father, emerges as a beacon of moral integrity in a town plagued by prejudice. His unwavering commitment to defending Tom Robinson, an African American man falsely accused of a crime, challenges the status quo and raises questions about the nature of humanity and justice. As students explore this literary masterpiece, they are not only exposed to the art of storytelling but also prompted to reflect upon the enduring themes of empathy, discrimination, and the power of one's conscience."

SubQuestion No : 7

Q.7 What does the town of Maycomb symbolize in the passage?

- Ans**
- 1. A place where justice always prevails
 - 2. A peaceful and harmonious community
 - 3. A reflection of broader societal issues
 - 4. An idyllic setting for the story

Comprehension:

Read the following passage and answer the questions below.

"In the classic novel 'To Kill a Mockingbird' by Harper Lee, the town of Maycomb serves as a microcosm of the broader societal issues prevailing in the American South during the 1930s. Through the eyes of young Scout Finch, we witness the stark realities of racism, injustice, and the moral complexities that shape our world. Atticus Finch, Scout's father, emerges as a beacon of moral integrity in a town plagued by prejudice. His unwavering commitment to defending Tom Robinson, an African American man falsely accused of a crime, challenges the status quo and raises questions about the nature of humanity and justice. As students explore this literary masterpiece, they are not only exposed to the art of storytelling but also prompted to reflect upon the enduring themes of empathy, discrimination, and the power of one's conscience."

SubQuestion No : 8

Q.8 What is the central theme of the passage?

Ans 1. The history of the American South during the 1930s.

2. The character development of Scout Finch.

3. The importance of storytelling in literature.

4. The enduring themes of empathy, discrimination, and moral integrity in "To Kill a Mockingbird."

Comprehension:

Read the following passage and answer the questions below.

"In the classic novel 'To Kill a Mockingbird' by Harper Lee, the town of Maycomb serves as a microcosm of the broader societal issues prevailing in the American South during the 1930s. Through the eyes of young Scout Finch, we witness the stark realities of racism, injustice, and the moral complexities that shape our world. Atticus Finch, Scout's father, emerges as a beacon of moral integrity in a town plagued by prejudice. His unwavering commitment to defending Tom Robinson, an African American man falsely accused of a crime, challenges the status quo and raises questions about the nature of humanity and justice. As students explore this literary masterpiece, they are not only exposed to the art of storytelling but also prompted to reflect upon the enduring themes of empathy, discrimination, and the power of one's conscience."

SubQuestion No : 9

Q.9 What does the character of Atticus Finch challenge in the town of Maycomb?

- Ans
- 1. Educational system
 - 2. Status quo and prejudice
 - 3. Economic inequality
 - 4. Local government

Comprehension:

Read the following passage and answer the questions below.

"In the classic novel 'To Kill a Mockingbird' by Harper Lee, the town of Maycomb serves as a microcosm of the broader societal issues prevailing in the American South during the 1930s. Through the eyes of young Scout Finch, we witness the stark realities of racism, injustice, and the moral complexities that shape our world. Atticus Finch, Scout's father, emerges as a beacon of moral integrity in a town plagued by prejudice. His unwavering commitment to defending Tom Robinson, an African American man falsely accused of a crime, challenges the status quo and raises questions about the nature of humanity and justice. As students explore this literary masterpiece, they are not only exposed to the art of storytelling but also prompted to reflect upon the enduring themes of empathy, discrimination, and the power of one's conscience."

SubQuestion No : 10

Q.10 What is the primary structure of the passage?

- Ans**
- 1. Descriptive
 - 2. Expository
 - 3. Persuasive
 - 4. Narrative

Comprehension:

ନିମ୍ନଲିଖିତ ପଦ୍ୟାଂଶଟିକୁ ପଢ଼ି ଦିଆ ଯାଇଥିବା ପ୍ରଶ୍ନର ଉତ୍ତର ଦିଅନ୍ତୁ ।

ପଦ୍ମ

କୋଟି ଲାବଣ୍ୟନିଧି ରେ ପଦ୍ମ ତୁହି,

କି ଅମୃତେ ତୋ'ତନୁ ଗଢ଼ିଲା ବିହି!

ତୋ'ରୁପ-ଦରଶନେ ମୋ'ର ହୃଦୟ,

ପୁଣ୍ୟ ଆନନ୍ଦେ ହୁଏ ଅମୃତ ମୟ ।

SubQuestion No : 1

Q.1 ଏହି ପଦ୍ୟାଂଶରେ "ତୋ" ସର୍ବନାମ ପଦ କାହାପାଇଁ ବ୍ୟବହୃତ ହୋଇଛି?

Ans 1. ଅମୃତ

2. ପଦ୍ମ

3. ଇଶ୍ଵର

4. ଚନ୍ଦ୍ର

Comprehension:

ନିମ୍ନଲିଖିତ ପଦ୍ୟାଂଶଟିକୁ ପଢ଼ି ଦିଆ ଯାଇଥିବା ପ୍ରଶ୍ନର ଉତ୍ତର ଦିଅନ୍ତୁ ।

ପଦ୍ମ

କୋଟି ଲାବଣ୍ୟନିଧି ରେ ପଦ୍ମ ତୁହି,

କି ଅମୃତେ ତୋ'ତନୁ ଗଢ଼ିଲା ବିହି!

ତୋ'ରୁପ-ଦରଶନେ ମୋ'ର ହୃଦୟ,

ପୁଣ୍ୟ ଆନନ୍ଦେ ହୁଏ ଅମୃତ ମୟ ।

SubQuestion No : 2

Q.2 "ବିହି" ଶବ୍ଦର ଅର୍ଥ କଣ?

Ans 1. ବିଧାତା

2. ସୂର୍ଯ୍ୟ

3. ଚନ୍ଦ୍ର

4. ସମ୍ପତ୍ତି

Comprehension:

ନିମ୍ନଲିଖିତ ପଦ୍ୟାଂଶଟିକୁ ପଢ଼ି ଦିଆ ଯାଇଥିବା ପ୍ରଶ୍ନର ଉତ୍ତର ଦିଅନ୍ତୁ ।

ପତ୍ର

କୋଟି ଲାବଣ୍ୟନିଧି ରେ ପତ୍ର ତୁହି,

କି ଅମୃତେ ତୋ'ତନୁ ଗଢ଼ିଲା ବିହି!

ତୋ'ରୁପ-ଦରଶନେ ମୋ'ର ହୃଦୟ,

ପୁଣ୍ୟ ଆନନ୍ଦେ ହୁଏ ଅମୃତ ମୟ ।

SubQuestion No : 3

Q.3 ଏହି ପଦ୍ୟାଂଶରେ "କୋଟି ଲାବଣ୍ୟନିଧି" ବୋଲି କାହାକୁ କୁହାଯାଇଛି?

Ans 1. ଆନନ୍ଦ

2. କଇଁ

3. ଅମୃତ

4. ପତ୍ର

Comprehension:

ନିମ୍ନଲିଖିତ ପଦ୍ୟାଂଶଟିକୁ ପଢ଼ି ଦିଆ ଯାଇଥିବା ପ୍ରଶ୍ନର ଉତ୍ତର ଦିଅନ୍ତୁ ।

ପତ୍ର

କୋଟି ଲାବଣ୍ୟନିଧି ରେ ପତ୍ର ତୁହି,

କି ଅମୃତେ ତୋ'ତନୁ ଗଢ଼ିଲା ବିହି!

ତୋ'ରୁପ-ଦରଶନେ ମୋ'ର ହୃଦୟ,

ପୁଣ୍ୟ ଆନନ୍ଦେ ହୁଏ ଅମୃତ ମୟ ।

SubQuestion No : 4

Q.4 "ଅମୃତ"ର ବିପରୀତବୋଧକ ଶବ୍ଦ କଣ?

Ans 1. ବିଂଶ

2. ବିସ

3. ବିଷ

4. ବିଶ

Comprehension:

ନିମ୍ନଲିଖିତ ଗଦ୍ୟାଂଶଟିକୁ ପଢ଼ି ଦିଆ ଯାଇଥିବା ପ୍ରଶ୍ନର ଉତ୍ତର ଦିଅନ୍ତୁ ।
ଭାଷା ଓ ଜାତୀୟତା

ଆଜି ସମସ୍ତେ ଭାରତୀୟ ଜାତୀୟତା ନିମନ୍ତେ ବ୍ୟାକୁଳ । ସମ୍ବାଦପତ୍ରରେ ଆଲୋଚନା ହେଉଅଛି, ସଭା ସମିତିରେ ବକୃତା ହେଉଅଛି, କାବ୍ୟନାଟକ ଉପନ୍ୟାସାଦିରେ ରୂପକ ଛଳରେ ସୂଚନା ଦିଆଯାଉଅଛି- କିପରି ଭାରତ- ଜାତୀୟତା ପ୍ରତିଷ୍ଠିତ ହେବ । ଅନେକେ ଭାରତ- ଜାତୀୟତା ଏକାବେଳକେ ଅସମ୍ଭବ ବୋଲି ହତାଶ । କେହି କେହି କେବଳ ଅତୀତ ଆଡ଼କୁ ଚାହିଁଅଛନ୍ତି ପ୍ରେରଣା ପାଇବା ଲାଗି । ଅନ୍ୟ କେତେକଙ୍କର କେବଳ ଭବିଷ୍ୟତ ଉପରେ ଆଶା । କେହି ନିଜ ଭିତରକୁ ଚାହିଁ ପ୍ରାଚୀନ ସଭ୍ୟତାକୁ ମନୁଅଛନ୍ତି; କେହି ପୁଣି ପରମୁହଁକୁ ଚାହିଁଛନ୍ତି ଏବଂ କେବଳ ପଶ୍ଚିମ ଉପରେ ଭରସା ରଖୁଅଛନ୍ତି ।

SubQuestion No : 5

Q.5 କେହିକେହି କେବଳ ଅତୀତ ଆଡ଼କୁ ଚାହିଁଅଛନ୍ତି – କଣ ପାଇବା ପାଇଁ?

- Ans**
- 1. ଜାତୀୟତା
 - 2. ପ୍ରେରଣା
 - 3. ଆଦର
 - 4. ଭାଷା

Quest
Optic
Optic
Optic
Optic
;
Chosen (

Comprehension:

ନିମ୍ନଲିଖିତ ଗଦ୍ୟାଂଶଟିକୁ ପଢ଼ି ଦିଆ ଯାଇଥିବା ପ୍ରଶ୍ନର ଉତ୍ତର ଦିଅନ୍ତୁ ।
ଭାଷା ଓ ଜାତୀୟତା

ଆଜି ସମସ୍ତେ ଭାରତୀୟ ଜାତୀୟତା ନିମନ୍ତେ ବ୍ୟାକୁଳ । ସମ୍ବାଦପତ୍ରରେ ଆଲୋଚନା ହେଉଅଛି, ସଭା ସମିତିରେ ବକୃତା ହେଉଅଛି, କାବ୍ୟନାଟକ ଉପନ୍ୟାସାଦିରେ ରୂପକ ଛଳରେ ସୂଚନା ଦିଆଯାଉଅଛି- କିପରି ଭାରତ- ଜାତୀୟତା ପ୍ରତିଷ୍ଠିତ ହେବ । ଅନେକେ ଭାରତ- ଜାତୀୟତା ଏକାବେଳକେ ଅସମ୍ଭବ ବୋଲି ହତାଶ । କେହି କେହି କେବଳ ଅତୀତ ଆଡ଼କୁ ଚାହିଁଅଛନ୍ତି ପ୍ରେରଣା ପାଇବା ଲାଗି । ଅନ୍ୟ କେତେକଙ୍କର କେବଳ ଭବିଷ୍ୟତ ଉପରେ ଆଶା । କେହି ନିଜ ଭିତରକୁ ଚାହିଁ ପ୍ରାଚୀନ ସଭ୍ୟତାକୁ ମନୁଅଛନ୍ତି; କେହି ପୁଣି ପରମୁହଁକୁ ଚାହିଁଛନ୍ତି ଏବଂ କେବଳ ପଶ୍ଚିମ ଉପରେ ଭରସା ରଖୁଅଛନ୍ତି ।

SubQuestion No : 6

Q.6 କାହା ଛଳରେ ସୂଚନା ଦିଆଯାଉଛି?

- Ans**
- 1. ନାଟକ
 - 2. ଉପନ୍ୟାସ
 - 3. ରୂପକ
 - 4. କାବ୍ୟ

Comprehension:

ନିମ୍ନଲିଖିତ ଗଦ୍ୟାଂଶଟିକୁ ପଢ଼ି ଦିଆ ଯାଇଥିବା ପ୍ରଶ୍ନର ଉତ୍ତର ଦିଅନ୍ତୁ ।
ଭାଷା ଓ ଜାତୀୟତା

ଆଜି ସମସ୍ତେ ଭାରତୀୟ ଜାତୀୟତା ନିମନ୍ତେ ବ୍ୟାକୁଳ । ସମ୍ବାଦପତ୍ରରେ ଆଲୋଚନା ହେଉଅଛି, ସଭା ସମିତିରେ ବକୃତା ହେଉଅଛି, କାବ୍ୟନାଟକ ଉପନ୍ୟାସାଦିରେ ରୂପକ ଛଳରେ ସୂଚନା ଦିଆଯାଉଅଛି- କିପରି ଭାରତ- ଜାତୀୟତା ପ୍ରତିଷ୍ଠିତ ହେବ । ଅନେକେ ଭାରତ- ଜାତୀୟତା ଏକାବେଳକେ ଅସମ୍ଭବ ବୋଲି ହତାଶ । କେହି କେହି କେବଳ ଅତୀତ ଆଡ଼କୁ ଚାହିଁଅଛନ୍ତି ପ୍ରେରଣା ପାଇବା ଲାଗି । ଅନ୍ୟ କେତେକଙ୍କର କେବଳ ଭବିଷ୍ୟତ ଉପରେ ଆଶା । କେହି ନିଜ ଭିତରକୁ ଚାହିଁ ପ୍ରାଚୀନ ସଭ୍ୟତାକୁ ମନୁଅଛନ୍ତି; କେହି ପୁଣି ପରମୁହଁକୁ ଚାହିଁଛନ୍ତି ଏବଂ କେବଳ ପଶ୍ଚିମ ଉପରେ ଭରସା ରଖୁଅଛନ୍ତି ।

SubQuestion No : 7**Q.7** କାହା ଉପରେ ଭରସା ରଖୁଛନ୍ତି?

- Ans**
- 1. ଉତ୍ତର
 - 2. ପଶ୍ଚିମ
 - 3. ପୂର୍ବ
 - 4. ଦକ୍ଷିଣ

Quest
Optic
Optic
Optic
Optic
:
Chosen (

Comprehension:

ନିମ୍ନଲିଖିତ ଗଦ୍ୟାଂଶଟିକୁ ପଢ଼ି ଦିଆ ଯାଇଥିବା ପ୍ରଶ୍ନର ଉତ୍ତର ଦିଅନ୍ତୁ ।
ଭାଷା ଓ ଜାତୀୟତା

ଆଜି ସମସ୍ତେ ଭାରତୀୟ ଜାତୀୟତା ନିମନ୍ତେ ବ୍ୟାକୁଳ । ସମ୍ବାଦପତ୍ରରେ ଆଲୋଚନା ହେଉଅଛି, ସଭା ସମିତିରେ ବକୃତା ହେଉଅଛି, କାବ୍ୟନାଟକ ଉପନ୍ୟାସାଦିରେ ରୂପକ ଛଳରେ ସୂଚନା ଦିଆଯାଉଅଛି- କିପରି ଭାରତ- ଜାତୀୟତା ପ୍ରତିଷ୍ଠିତ ହେବ । ଅନେକେ ଭାରତ- ଜାତୀୟତା ଏକାବେଳକେ ଅସମ୍ଭବ ବୋଲି ହତାଶ । କେହି କେହି କେବଳ ଅତୀତ ଆଡ଼କୁ ଚାହିଁଅଛନ୍ତି ପ୍ରେରଣା ପାଇବା ଲାଗି । ଅନ୍ୟ କେତେକଙ୍କର କେବଳ ଭବିଷ୍ୟତ ଉପରେ ଆଶା । କେହି ନିଜ ଭିତରକୁ ଚାହିଁ ପ୍ରାଚୀନ ସଭ୍ୟତାକୁ ମନୁଅଛନ୍ତି; କେହି ପୁଣି ପରମୁହଁକୁ ଚାହିଁଛନ୍ତି ଏବଂ କେବଳ ପଶ୍ଚିମ ଉପରେ ଭରସା ରଖୁଅଛନ୍ତି ।

SubQuestion No : 8**Q.8** ଆମେ ଆଜି କ'ଣ ପାଇଁ ବ୍ୟାକୁଳ?

- Ans**
- 1. ଜାତୀୟତା
 - 2. ଭାରତୀୟତା
 - 3. ସମ୍ମାନ
 - 4. ସଂପତ୍ତି

Q.9 ମହାନୀୟ-ଏହାର ବିଶେଷ୍ୟ ପଦ କଣ?

- Ans
- 1. ମହାନୀୟା
 - 2. ମହାନୀୟତା
 - 3. ମହନୀୟେ
 - 4. ମହାନୀୟ

Q.10 ଗୁଁ ବୁଝିକି କିପରି ?-ଏହା କି ପ୍ରକାର ବାକ୍ୟ?

- Ans
- 1. ବିବୃତିସୂଚକ
 - 2. ପ୍ରଶ୍ନବାଚକ
 - 3. ଆଦେଶାତ୍ମକ
 - 4. ନାସ୍ତିବାଚକ

Section : Part 1 General Knowledge and Current Affairs

Q.1 A place where there is no hospital will see a_____.

- Ans
- 1. decline in the mortality rate
 - 2. rise in gender equality
 - 3. rise in the mortality rate
 - 4. rise in the employment rate

Q.2 India jumps 2 spots higher, and is now ranked _____ as per Climate Change Performance Index (CCPI, 2023) published by German Watch, New Climate Institute and Climate Action Network International based in Germany.

- Ans
- 1. 1st
 - 2. 8th
 - 3. 9th
 - 4. 18th

Ques
Optic
Optic
Optic
Optic
Chosen

Q.3 Bangladesh does not share land border with:

- Ans
- 1. Sikkim
 - 2. Mizoram
 - 3. Meghalaya
 - 4. Tripura

Ques
Optic
Optic
Optic
Optic
Chosen

Q.4 The Rowlatt Act (Black Act) was passed on March 10, 1919, authorizing the government to imprison or confine, without a trial, any person associated with seditious activities. This led to _____.

- Ans
- 1. JALLIANWALA BAGH MASSACRE
 - 2. CHAMPARAN SATYAGRAH
 - 3. KAKORI CASE
 - 4. CRIPPS PLAN

Q.5 The Human Development Index (HDI) is a statistical tool used to measure a country's overall _____ in its social and economic dimensions.

- Ans
- 1. achievement
 - 2. net income
 - 3. factor income
 - 4. gross income

Question
Option
Option
Option
Option
St
Chosen Op

Q.6 Sandton Convention Centre in _____ (country), hosted the 15th BRICS summit in 2023.

- Ans
- 1. South America
 - 2. Brazil
 - 3. South Africa
 - 4. Ukraine

Question
Option
Option
Option
Option
St
Chosen Op

Q.7 The process of removal of President may begin in _____ of the Parliament.

- Ans
- 1. Upper House
 - 2. Lower House
 - 3. Upper House and Lower House simultaneously
 - 4. Either of the two houses

Q.8 A _____ is an organism that mostly consumes decaying biomass, such as meat or rotting plant material.

- Ans
- 1. carnivore
 - 2. herbivore
 - 3. scavenger
 - 4. microorganism

Que
Op
Op
Op
Op
Chose

Q.9 Identify the leader of Odisha who revolted against Britishers in 1857 revolt.

- Ans
- 1. Surendra Sai
 - 2. VD Savarkar
 - 3. Kunwar Singh
 - 4. Tantya Tope

Que
Op
Op
Op
Op
Chose

Q.10 ମାର୍ଚ୍ଚ 2023 ରେ କ୍ୟାବିନେଟ ସଭାରେ ନିଆଯାଇଥିବା ନିଷ୍ପତ୍ତି ଅନୁସାରେ ଆଦିବାସୀ ସମ୍ପ୍ରଦାୟଗୁଡ଼ିକୁ ସଶକ୍ତ କରିବା ଲକ୍ଷ୍ୟରେ, ରାଜ୍ୟ କ୍ଷେତ୍ରୀୟ ଯୋଜନା "ST ଲାଇଭଲିହୁଡ ଆଣ୍ଡ ଇନକମ ଜେନେରେଟିଙ୍ଗ ପ୍ରୋଗ୍ରାମ" ମାଧ୍ୟମରେ _____ ଅଧୀନରେ ଓଡ଼ିଶା ସରକାର 'ଲାଇଭଲିହୁଡ ଲୁଷ୍ଟର ଡେଭେଲପମେଣ୍ଟ' ଯୋଜନାକୁ କାର୍ଯ୍ୟକାରୀ କରିବେ ।

- Ans
- 1. "ମୁଖ୍ୟ ମନ୍ତ୍ରୀ ଜନଜାତି ଜୀବିକା ନିସନ୍"
 - 2. "ମୁଖ୍ୟ ମନ୍ତ୍ରୀ ଜନଜାତି ପ୍ରେରଣା ନିସନ୍"
 - 3. "ମୁଖ୍ୟ ମନ୍ତ୍ରୀ ଜନଜାତି ସେବା ନିସନ୍"
 - 4. "ମୁଖ୍ୟ ମନ୍ତ୍ରୀ ଅଜାବିକା ନିସନ୍"

Q.1 Four letter-clusters have been given, out of which three are alike in some manner and one is different. Select the odd letter-cluster.

- Ans**
- 1. UTS
 - 2. PON
 - 3. EDC
 - 4. LJK

Question
Option 1
Option 2
Option 3
Option 4
Sta
Chosen Opt

Q.2 Select the option that is related to the fifth word in the same way as the fourth word is related to the third word and the second word is related to the first word.

SIKKIM : GANGTOK :: NAGALAND : KOHIMA :: UTTAR PRADESH : ?

- Ans**
- 1. PRAYAGRAJ
 - 2. KANPUR
 - 3. VARANASI
 - 4. LUCKNOW

Question
Option 1
Option 2
Option 3
Option 4
Sta
Chosen Opt

Q.3 Three Statements are given followed by two conclusions numbered I and II. Assuming the statements to be true, even if they seem to be at variance with commonly known facts, decide which of the conclusions logically follow(s) from the statements.

Statements:

Statement I: All pens are pencils.

Statement II: All pencils are erasers.

Statement III: All erasers are notebooks.

Conclusions:

Conclusion I: All pens are notebooks.

Conclusion II: Some erasers are not pens.

- Ans**
- 1. Neither conclusion I nor II follows
 - 2. Only conclusion II follows
 - 3. Both conclusions I and II follow
 - 4. Only conclusion I follows

Q.4 Select the option that is related to the third number in the same way as the second number is related to the first number.
624 : 566 :: 208 : ?

- Ans**
- 1. 105
 - 2. 150
 - 3. 158
 - 4. 100

Question
Option 1
Option 2
Option 3
Option 4
Stat
Chosen Opti

Q.5 Six friends A, B, H, I, M and N are sitting on a bench facing north. H is sitting exactly in between A and M. I is not at the end. B is sitting to the immediate right of M. N is not sitting at the right end.
How many people are sitting to the right of I?

- Ans**
- 1. 4
 - 2. 2
 - 3. 3
 - 4. 1

Question
Option 1
Option 2
Option 3
Option 4
Stat
Chosen Opti

Q.6 How many numbers are there in the given series that are immediately preceded by a symbol and immediately followed by a number?
1 & 2 ^ 3 0 8 ! 6 2 0 S @ 1 % ! 5 6 4

- Ans**
- 1. 4
 - 2. 1
 - 3. 3
 - 4. 2

Q.7 There are 133 boxes kept one above the other. What will be the position of the box from the bottom whose position from the top is 27th?

- Ans**
- 1. 107
 - 2. 108
 - 3. 106
 - 4. 105

Question
Option 1
Option 2
Option 3
Option 4
Sta
Chosen Opt

Q.8 In a certain code language, if MILK is coded as LGKJ, POTATO is coded as OMSYSM, then what will BRINJAL be coded as?

- Ans**
- 1. AQGMIYK
 - 2. AQJMIIBK
 - 3. AQHMIZK
 - 4. CSJOKBM

Question
Option 1
Option 2
Option 3
Option 4
Sta
Chosen Opt

Q.9 Subham says Surbhi's mother is the mother of my only daughter. How is Surbhi related to Subham?

- Ans**
- 1. Sister
 - 2. Mother
 - 3. Daughter
 - 4. Wife

Q.10 If the positions of the first and the third digits within each number are interchanged, which of the following will be the hundred digit of the second-highest number?

846 345 508 856 245

Ans ✓ 1. 6

✗ 2. 9

✗ 3. 7

✗ 4. 8

Questi
Optior
Optior
Optior
Optior
S
Chosen O

Section : Part 1 Computer Literacy

Q.1 Which computer component stores data even when the computer is turned off and is considered non-volatile memory?

Ans ✓ 1. ROM (Read-Only Memory)

✗ 2. Pen drive

✗ 3. RAM (Random Access Memory)

✗ 4. CPU (Central Processing Unit)

Questi
Optior
Optior
Optior
Optior
S
Chosen O

Q.2 ଗୋଟିଏ କମ୍ପ୍ୟୁଟର ଏପରି ଏକ ଅନଲାଇନ୍ ଗେମ୍ ବିକଶିତ କରୁଛି, ଯେଉଁଥିପାଇଁ ଖେଳାଳିମାନଙ୍କୁ ବହୁତ କମ୍ ଲେଟେନ୍ସୀ ବିଶିଷ୍ଟ କନେକ୍ଟିଭ୍ ଆବଶ୍ୟକ । ଏହି ଗେମ୍ ପାଇଁ ନିମ୍ନଲିଖିତ ମଧ୍ୟରୁ କେଉଁ ଟେକ୍ନୋଲୋଜୀ ଉପଯୁକ୍ତ ହେବ?

Ans ✓ 1. ଫାଇବାର୍ ଅପଟିକ୍ ଇଣ୍ଟରନେଟ୍

✗ 2. କେବଲ୍ ଇଣ୍ଟରନେଟ୍

✗ 3. ଡିଜିଟାଲ୍ ସବସ୍ଟ୍ରିମିଂ ଲାଇନ୍ (DSL)

✗ 4. ସ୍ୟାଟେଲାଇଟ୍ ଇଣ୍ଟରନେଟ୍

Q.3 What does the term "Data Mining" refer to in the context of IT?

- Ans**
- 1. Extracting valuable minerals from computer components
 - 2. Cleaning and organizing databases
 - 3. Extracting useful patterns and information from large datasets
 - 4. Encrypting sensitive data

Q.4 What is the purpose of version control systems (VCS) in software development?

- Ans**
- 1. To manage different versions of source code
 - 2. To track internet browsing history
 - 3. To control the version of the operating system
 - 4. To optimize program execution

Q.5 What is the purpose of virtual memory in operating systems?

- Ans**
- 1. Provide a larger address space than the physical memory
 - 2. Enhance graphical user interfaces
 - 3. Increase physical RAM
 - 4. Extend the lifetime of hardware components

Q.1 How are students typically assessed in a core curriculum framework?

- Ans** 1. Through a combination of assignments, projects, and exams.
2. Only through group projects.
3. By their participation in extracurricular activities.
4. Solely through final exams.

Questi
Optioi
Optioi
Optioi
Optioi
S
Chosen O

Q.2 What is a primary purpose of implementing a core curriculum in educational institutions?

- Ans** 1. To guarantee all students receive a foundational knowledge base.
2. To reduce the number of subjects offered.
3. To emphasize sports and arts only.
4. To ensure uniformity in grading systems.

Questi
Optioi
Optioi
Optioi
Optioi
S
Chosen O

Q.3 Which statement best represents the nature vs. nurture debate in child development?

- Ans** 1. Nature refers to learning, and nurture to genetic factors.
2. Nature refers to heredity, and nurture refers to environment.
3. Nurture has a minor role, while nature is dominant.
4. Both heredity and environment play negligible roles.

Q.4 ଦକ୍ଷତା ଭିତ୍ତିକ ଆଭିମୁଖ୍ୟ (competency-based approach), _____ ଉପରେ ଗୁରୁତ୍ୱ ଦେଇଥାଏ ।

- Ans
- 1. ନିର୍ଦ୍ଦିଷ୍ଟ କୌଶଳ ଉପରେ ଦକ୍ଷତା
 - 2. ସାଧାରଣ ବୁଝାମଣା (ଜେନେରାଲ ଅଣ୍ଡରଷ୍ଟାଣ୍ଡିଙ୍ଗ୍)
 - 3. ଚତୁରତା ଜ୍ଞାନ (ଥୁଓରେଟିକାଲ ନଲେଜ୍)
 - 4. ଶିଖିବା ପାଇଁ ଅତିବାହିତ ହେଉଥିବା ସମୟ

Q.5 ଏକାଧିକ ବିକଳ ଥିବା ପ୍ରଶ୍ନ ପ୍ରସ୍ତୁତ କରିବାବେଳେ, ବିଭ୍ରାନ୍ତକାରୀ କ'ଣ?

- Ans
- 1. ପ୍ରଶ୍ନ ଷ୍ଟେମ୍
 - 2. ପ୍ରଶ୍ନର ବିଷୟ
 - 3. ଏକ ଭୁଲ ଉତ୍ତର ଥିବା ବିକଳ
 - 4. ସଠିକ୍ ଉତ୍ତର

Q.6 How does a positive school environment primarily benefit a child's socio-emotional development?

- Ans
- 1. By promoting healthy peer relationships and a sense of belonging.
 - 2. By focusing solely on textbook knowledge.
 - 3. By ensuring the child has high academic grades.
 - 4. By emphasizing competition among students.

Q.7 In implementing inclusive education, how do regular assessments enhance student learning?

- Ans**
- 1. By reducing hands-on learning.
 - 2. By focusing solely on grades.
 - 3. By identifying areas of improvement and adapting instruction.
 - 4. By increasing competition among students.

Que
Op
Op
Op
Op

Chose

Q.8 CCA ର "ନିରନ୍ତର" (continuous) ଦିଗକୁ କିପରି ବର୍ଣ୍ଣିତ କରାଯାଏ?

- Ans**
- 1. କେବଳ ସେମିଷ୍ଟର ସମାପ୍ତ ସମୟରେ ମୂଲ୍ୟାଙ୍କନ ହୁଏ ।
 - 2. ଛାତ୍ରଛାତ୍ରୀମାନଙ୍କର ବାର୍ଷିକ ମୂଲ୍ୟାଙ୍କନ ।
 - 3. ନିୟମିତ ଓ ପର୍ଯ୍ୟାୟକ୍ରମିକ ମୂଲ୍ୟାଙ୍କନ ।
 - 4. କାର୍ଯ୍ୟଦକ୍ଷତା ଉପରେ ବେଳେବେଳେ ମତାମତ ଦେବା ।

Que
Op
Op
Op
Op

Chose

Q.9 Why might adolescents experience heightened emotional sensitivity and mood swings?

- Ans**
- 1. They are seeking attention.
 - 2. They are naturally more aggressive.
 - 3. Rapid hormonal changes.
 - 4. They resist adult authority.

Q.10 Which factor is essential to consider for effective blackboard writing?

- Ans**
- 1. Using cursive and artistic writing styles.
 - 2. Ensuring legibility and structured presentation.
 - 3. Writing as quickly as possible.
 - 4. Filling up the entire board without erasing.

Questi
Optio
Optio
Optio
Optio
S
Chosen C

Q.11 The objective of the Udaan initiative, launched by the Central Board of Secondary Education (CBSE) in India, was to:

- Ans**
- 1. Increase enrollment of girl students in primary education.
 - 2. Mentor and facilitate girl students to pursue higher education in engineering and technology.
 - 3. Provide free bicycles to girl students.
 - 4. Reduce the dropout rate of girl students.

Questi
Optio
Optio
Optio
Optio
S
Chosen C

Q.12 Which developmental milestone is typically expected for children aged 7-11, during the concrete operational stage in Piaget's theory of cognitive development?

- Ans**
- 1. Egocentric thinking with a strong focus on oneself.
 - 2. Basic reflexes and sensory exploration.
 - 3. Ability to think logically about concrete events and classify objects.
 - 4. Abstract thinking and moral reasoning.

Q.13 Why is it crucial to tailor curriculum objectives to the learner's context?

- Ans**
- 1. It encourages memorization over understanding.
 - 2. It promotes a centralized education system.
 - 3. It helps make learning more relevant and relatable.
 - 4. It ensures all students study the same material.

Q.14 What is a common criticism of learner-centered approaches?

- Ans**
- 1. Doesn't involve any student participation
 - 2. It is very individual specific and lacks structure
 - 3. Relies solely on textbook-based learning
 - 4. Overemphasis on rote memorization

Q.15 Which document globally upholds and elaborates the rights of a child?

- Ans**
- 1. Universal Declaration of Human Rights.
 - 2. UN Convention on the Rights of the Child (CRC).
 - 3. UN Convention on Climate Change.
 - 4. World Health Organization Charter.

Q.1 ପ୍ରଥମ 23 ଟି ପୂର୍ଣ୍ଣ ସଂଖ୍ୟାର ଗୁଣଫଳ କେତେ ?

- Ans
- ✗ 1. 908
 - ✓ 2. 0
 - ✗ 3. 676
 - ✗ 4. 740

Que:
Opt
Opt
Opt
Opt
Chosen

Q.2 ଦୁଇଟି ସଂଖ୍ୟା ମଧ୍ୟରେ ପାର୍ଥକ୍ୟ 1455 ଅଟେ । ବୃହତ୍ତର ସଂଖ୍ୟାକୁ କ୍ଷୁଦ୍ରତର ସଂଖ୍ୟା ଦ୍ୱାରା ବିଭକ୍ତ କଲେ, ଆମେ ଭାଗଫଳ ଭାବରେ 6 ଏବଂ ଭାଗଶେଷ ଭାବରେ 230 ପାଇଥାଉ । କ୍ଷୁଦ୍ରତର ସଂଖ୍ୟାଟି କେତେ?

- Ans
- ✓ 1. 245
 - ✗ 2. 175
 - ✗ 3. 275
 - ✗ 4. 250

Que:
Opt
Opt
Opt
Opt
Chosen

Q.3 Find the value of $\frac{15}{7}$ of 28 + $\frac{15}{6} \div \frac{5}{3} - \frac{4}{3}$

- Ans
- ✓ 1. $\frac{361}{6}$
 - ✗ 2. $\frac{361}{5}$
 - ✗ 3. $\frac{360}{11}$
 - ✗ 4. $\frac{361}{15}$

Q.4 ନିମ୍ନ ମଧ୍ୟରୁ କେଉଁଟିରେ ଉଭୟ ରେଖା ପ୍ରତିସାମ୍ୟ (line symmetry) ଏବଂ ଘୂର୍ଣ୍ଣନା ପ୍ରତିସାମ୍ୟ (rotational symmetry) ଅଛି ?

- Ans
- 1. H ଏବଂ Z
 - 2. H, Z ଏବଂ O
 - 3. O ଏବଂ H
 - 4. Z ଏବଂ O

Question
Option 1
Option 2
Option 3
Option 4
Stat
Chosen Opti

Q.5 Two books together weigh 4 kg 300 g. If the weight of the first book is 2 kg 200 g, what is the weight of the second book?

- Ans
- 1. 1 kg 200 g
 - 2. 2 kg 200 g
 - 3. 1 kg 100 g
 - 4. 2 kg 100 g

Question
Option 1
Option 2
Option 3
Option 4
Stat
Chosen Opti

Q.6 Based on the given pattern identify the missing number.



- Ans
- 1. 79
 - 2. 80
 - 3. 81
 - 4. 74

Q.7 Varsha drove 52 km 242 m away from her house on the first day and reached a place 94 km 222 m away from her house on the next day. What distance did she travel on the second day?

- Ans**
- ✓ 1. 41 km 980 m
 - ✗ 2. 52 km 880 m
 - ✗ 3. 42 km 880 m
 - ✗ 4. 52 km 980 m

Question
Option
Option
Option
Option
St
Chosen Op

Q.8 13 cm ବ୍ୟାସାର୍ଦ୍ଧ ବିଶିଷ୍ଟ ଏକ ବୃତ୍ତର ଦୁଇଟି ସମାନ୍ତରାଳ ସ୍ପର୍ଶକ ମଧ୍ୟରେ ଦୂରତା କେତେ?

- Ans**
- ✗ 1. 21 cm
 - ✗ 2. 24 cm
 - ✗ 3. 39 cm
 - ✓ 4. 26 cm

Question
Option
Option
Option
Option
St
Chosen Op

Q.9 Anuj scored 42 out of 80 in mathematics. Convert his marks into percentages

- Ans**
- ✓ 1. 52.5%
 - ✗ 2. 40%
 - ✗ 3. 50.5%
 - ✗ 4. 55.6%

Question

Q.10 The given bar graph shows the production of shirts by six different stores. What is the total number of shirts produced by store B and store D?



Ans ✓ 1. 3382

✗ 2. 3340

✗ 3. 3310

✗ 4. 3421

Ques
Optic
Optic
Optic
Optic

Chosen

Q.11 Who was the first president of India?

Ans ✗ 1. Jawahar Lal Nehru

✗ 2. Zakir Hussain

✗ 3. Pratibha Devisingh Patil

✓ 4. Dr. Rajendra Prasad

Ques
Optic
Optic
Optic
Optic

Chosen

Q.12 Solid waste can be divided into broad categories, such as -

Ans ✗ 1. Domestic and Industrial waste

✗ 2. Plastic and Non-Plastic waste

✓ 3. Biodegradable and Non- Biodegradable

✗ 4. Commercial and Non-commercial waste

Q.13 _____ is an insoluble protein that is produced in response to bleeding and is the major component of the blood clot.

- Ans
- 1. fibrins
 - 2. thrombokinase
 - 3. thrombin
 - 4. prothrombin

Q.14 The circle that divides the day from night on the globe is called the _____.

- Ans
- 1. Line of light
 - 2. Circle of illumination
 - 3. Circle of shadow
 - 4. Line of illumination

Q.15 Odisha accounts for _____ % of total area of India.

- Ans
- 1. 4.87
 - 2. 5.87
 - 3. 3.87
 - 4. 6.87

Q.16 As per Koppen's Classification, what type of climate is in Odisha?

- Ans**
- 1. Subtropical Highland climate
 - 2. Tropical rainforest
 - 3. Humid Subcontinental Climate
 - 4. Tropical Savannah

Que
Op
Op
Op
Op
Chosen

Q.17 Who is credited for starting the green revolution in India?

- Ans**
- 1. M.S. Swaminathan.
 - 2. Subhash Palekar
 - 3. Tribhuvandas Kishibhai Patel
 - 4. Verghese Kurien

Que
Op
Op
Op
Op
Chosen

Q.18 The _____ is a model of global mean sea level that is used to measure precise surface elevations.

- Ans**
- 1. oval
 - 2. annulus
 - 3. geoid
 - 4. ellipsoid

Q.19 NGT stands for:

- Ans
- 1. National Glow Tribunal
 - 2. National Green Tribunal
 - 3. New Green Tribunal
 - 4. National Green Testimony

Ques:
Optic
Optic
Optic
Optic
Chosen (

Q.20 These Hazards are caused by inappropriate and cumbersome postures, leading to damage or pain in muscles and tendons known as:

- Ans
- 1. Electrical Hazards
 - 2. Ergonomic Hazards
 - 3. Physical Hazards
 - 4. Chemical Hazards

Ques:
Optic
Optic
Optic
Optic
Chosen (

Q.21 Fill in the blank with the correct adverb.


The skilled gymnast performed the routine _____ and gracefully, impressing the judges.

- Ans
- 1. effortlessly
 - 2. ruggedly
 - 3. awkwardly
 - 4. timidly

Q.22 Fill in the blank with the correct collective noun.

The _____ of fish moved in a synchronized manner, creating a mesmerizing underwater display.


- Ans
- 1. assembly
 - 2. army
 - 3. swarm
 - 4. school



Q.23 Fill in the blank with the correct irregular verb.

The team _____ a thrilling victory in the championship game.

- Ans
- 1. winning
 - 2. won
 - 3. win
 - 4. wined



Q.24 Complete the sentence with the appropriate article to make it grammatically correct.

He plays _____ piano beautifully.

- Ans
- 1. a
 - 2. the
 - 3. some
 - 4. an

Q.25 Complete the sentence with the correct form of the tense:
They promised they _____ the report by the end of the week.

- Ans
- 1. submits
 - 2. will submit
 - 3. submitted
 - 4. submit

Q.26 Fill in the blank with the correct preposition.
The athlete sprinted _____ the finish line, securing first place in the race.

- Ans
- 1. towards
 - 2. within
 - 3. beside
 - 4. around

Q.27 Choose the correct punctuation from the given options:
The meeting is scheduled for 2:00 PM _____ everyone should attend.

- Ans
- 1. full stop
 - 2. question mark
 - 3. semi colon
 - 4. colon

Q.28 Choose the correct punctuation from the given options:

She inquired whether he had received her email _____.

- Ans
- 1. comma
 - 2. full stop
 - 3. question mark
 - 4. colon

Q.29 The word given in the brackets defines the modification of the noun. Based on this understanding fill in the blank with the correct adjective from the given options.

The (thrilling)_____ mountains were covered with a thick blanket of snow, creating a breathtaking winter landscape.

- Ans
- 1. obnoxious
 - 2. encouraging
 - 3. captive
 - 4. exhilarating

Q.30 Complete the sentence with the correct form of the tense:

Before the storm hit, they _____ all their preparations.

- Ans
- 1. are completing
 - 2. complete
 - 3. had completed
 - 4. completes

Q.31 ନିମ୍ନୋକ୍ତ ମଧ୍ୟରୁ କେଉଁଟି ସର୍ବନାମ ?

- Ans
- 1. ବଣିତା
 - 2. ନଦୀ
 - 3. ରାମ
 - 4. ସିଂ

Q.32 'ଭୀମ' ଶବ୍ଦଟିର ବିପରୀତ ଶବ୍ଦଟିକୁ ଚିହ୍ନାଅ ।

- Ans
- 1. ତରଳ
 - 2. କାନ୍ଥ
 - 3. ଟାଣ
 - 4. ଶାନ୍ତ

Q.33 'ଘନ' ଶବ୍ଦର ବିପରୀତ ଶବ୍ଦ କେଉଁଟି ?

- Ans
- 1. କଠିନ
 - 2. ମୟୂଣ
 - 3. ଗୁରୁ
 - 4. ତରଳ

Q.34 'ବିଧାନ' ଶବ୍ଦଟି କେଉଁ ଉପସର୍ଗ ଯୋଗରେ ହୋଇଛି ?

- Ans
- 1. ଅବ
 - 2. ଅଧି
 - 3. ଅପ
 - 4. ଅପି

Q.35 ଔଷଧ ରାଗରେ ଚାଟିଆ କାମୁଡ଼ିବା - ରୁଡ଼ି ପଦଟିର ଅର୍ଥ କେଉଁଟି ?

- Ans
- 1. ଜଣକ ଉପରେ କ୍ରୋଧ ପ୍ରକାଶ ନକରିପାରି ଅନ୍ୟ ଜଣକ ଉପରେ କ୍ରୋଧ ପ୍ରକାଶ କରିବା
 - 2. ରାଗରେ ଚାଟିଆ କାମୁଡ଼ିବା
 - 3. ରାଗ ଜରଜର ହେବା
 - 4. ଜଣକ ଉପରେ ଖୁବ୍ ରାଗିବା

Q.36 ଅନ୍ଧର ଲରଡ଼ି - ଏହା କେଉଁ ପ୍ରକାରର ରୁଡ଼ି ?

- Ans
- 1. କ୍ରିୟାତ୍ମକ
 - 2. କ୍ରିୟାହୀନ
 - 3. ତୁଳନାତ୍ମକ
 - 4. ପ୍ରତ୍ୟୟତ୍ମକ

Q.37 'ଦୁର୍ଗମ' ଶବ୍ଦଟିର ପ୍ରକୃତି ପ୍ରତ୍ୟୟ ନିର୍ଣ୍ଣୟ କର ?

- Ans
- 1. ଦୁଃ-ଗମ୍+ଅ
 - 2. ଦୁର୍-ଗମ୍+ଅ
 - 3. ଦୁର୍+ଗମ
 - 4. ଦୁଃ+ଗମ୍

Q.38 'ପୃଥ୍ବୀ' ଶବ୍ଦଟିର ସମାର୍ଥବୋଧକ ଶବ୍ଦଟିକୁ ଚିହ୍ନଟ କର ।

- Ans
- 1. ଶୈଳ
 - 2. ମନୀଷା
 - 3. ମେଦିନୀ
 - 4. ମଞ୍ଜୁଳ

Q.39 'ପଢ଼ୁଛି' ଶବ୍ଦର ପ୍ରେରଣାର୍ଥକ କ୍ରିୟାପଦ କେଉଁଟି ?

- Ans
- 1. ପଢ଼ିବି
 - 2. ପଢ଼ିବାର ଅଛି
 - 3. ପଢ଼ିଲି
 - 4. ପଢ଼ାଉଛି

Q.40 ନିମ୍ନୋକ୍ତ ମଧ୍ୟରୁ 'ପଦ୍ମ' ଶବ୍ଦର ସମାର୍ଥବୋଧକ ଶବ୍ଦ ଚିହ୍ନଟ କର ।

- Ans
- 1. ପାଦକ
 - 2. ପୁଷ୍କର
 - 3. ପ୍ରମୋଦ
 - 4. ପଲ୍ଲବ

Questi
Optio
Optio
Optio
Optio
s
Chosen C

Section : Part II Pedagogy

Q.1 Which of the following is a conjecture?

- Ans
- 1. There does not exist integers x, y, z such that $x^5 + y^5 = z^5$.
 - 2. 2 is an even prime number.
 - 3. Product of two even numbers is an even number.
 - 4. Every even integer greater than 4 can be expressed as the sum of two odd primes.

Questi
Optio
Optio
Optio
Optio
s
Chosen C

Q.2 Which of the following is considered a higher aim of school mathematics education?

- Ans
- 1. To develop the skills in measurements
 - 2. To develop the child's resources to think and reason mathematically
 - 3. To develop the child's number operations
 - 4. To develop the concept of decimals

Q.6 ଯେତେବେଳେ ଛାତ୍ରଛାତ୍ରୀମାନେ ସକ୍ରିୟ ଭାବରେ ଏବଂ ସେମାନେ ଯାହା କରିଛନ୍ତି ତାହାକୁ ପ୍ରତିଫଳିତ କରି ଶିଖନ୍ତି, ଏହାକୁ _____ କୁହାଯାଏ ।

- Ans
- 1. ମସ୍ତୁଷ୍ଟ କର୍ଷଣ
 - 2. ପ୍ରତ୍ୟକ୍ଷ ନିର୍ଦ୍ଦେଶ
 - 3. ଅଭିଜ୍ଞ ମୂଳକ ଶିକ୍ଷା
 - 4. ତ୍ରିଲ୍ ଏବଂ ଅଭ୍ୟାସ

Ques:
Optic
Optic
Optic
Optic
Chosen

Q.7 Which methodology benefits most from the integration of science and social science in EVS?

- Ans
- 1. Memorizing historical dates
 - 2. Case studies that encompass both scientific and societal perspectives
 - 3. Rote learning
 - 4. Practical experiments only

Ques:
Optic
Optic
Optic
Optic
Chosen

Q.8 Which pedagogical term in EVS suggests learning that emphasizes real-world problem-solving through extended projects, fostering depth over breadth in understanding environmental issues?

- Ans
- 1. Concept Mapping
 - 2. Project-based Learning
 - 3. Summative Assessment
 - 4. Formative Assessment

Q.9 Which term describes a teaching strategy in EVS where students' prior knowledge is connected to new concepts, facilitating deeper understanding?

- Ans**
- 1. Scaffolding
 - 2. Anchoring
 - 3. Chaining
 - 4. Bridging

Que
Op
Op
Op
Op
Chose

Q.10 How does the integration of science and social science benefit the study of EVS?

- Ans**
- 1. It focuses only on scientific experiments.
 - 2. It is only concerned with social traditions.
 - 3. It provides a balanced view of human and natural interactions.
 - 4. It delves deep into historical events without considering their environmental impact.

Que
Op
Op
Op
Op
Chose

Q.11 Which is not an element of public speaking?

- Ans**
- 1. Feedback
 - 2. Audience
 - 3. Capitalization
 - 4. Channel

Q.12 Which is not a barrier of listening?

- Ans**
- 1. Language
 - 2. Noise
 - 3. Information overload
 - 4. Cloudy day

Q.13 Which one of the following is not a principle of second language teaching?

- Ans**
- 1. Knowing every student in the class well
 - 2. Dominating classroom discussions
 - 3. Creating motivation to learn the language
 - 4. Creating a congenial classroom environment

Q.14 Which of the following tasks is a part of introducing a prose lesson?

- Ans**
- 1. Teaching vocabulary
 - 2. Giving assignment
 - 3. Testing application
 - 4. Testing previous knowledge

Q.15 Which of the following is a good before-class strategy to use while teaching language to non-native speakers?

- Ans
- 1. Provide students with contacts for ESL tutoring if required.
 - 2. Invite students to come to office for one-to-one interactions.
 - 3. Provide assignments as homework for better practice.
 - 4. Provide students with directed readings and a list of key concepts.

Q
0
0
0
0
0
Chos

Q.16 ଶିକ୍ଷାର ସଫଳତା କେଉଁ ଭାଷା ମାଧ୍ୟମରେ ହୋଇଥାଏ ?

- Ans
- 1. ବୋଲୀ
 - 2. ସଂସୋଗକାରୀ ଭାଷା
 - 3. ଆଞ୍ଚଳିକ ଭାଷା
 - 4. ମାତୃଭାଷା

Q
0
0
0
0
0
Chos

Q.17 "କାରକ" କାହାକୁ କହନ୍ତି ?

- Ans
- 1. ଶବ୍ଦ ସହିତ ଅର୍ଥର ଅନୁୟ
 - 2. କର୍ତ୍ତା ସହିତ କର୍ମର ଅନୁୟ
 - 3. ଧ୍ୱନି ସହିତ ଶବ୍ଦର ଅନୁୟ
 - 4. କ୍ରିୟା ସହିତ ଯାହାର ଅନୁୟ

Q.18 କେଉଁ ଧାରଣାଟି ଭାବାତ୍ମକ ଉଦ୍ଦେଶ୍ୟ ଅନୁଗତ ?

- Ans
- 1. ସାହିତ୍ୟ ସଂପର୍କରେ ଜ୍ଞାନ ଅର୍ଜନ କରିବା
 - 2. ଭାଷା ଓ ସାହିତ୍ୟ ପ୍ରତି ଶିଶୁମାନଙ୍କର ଆଗ୍ରହ ସୃଷ୍ଟି କରିବା
 - 3. ଭାଷା ଶୁଣି, ସଠିକ ଅର୍ଥ ବିନ୍ୟାସ କରିବା
 - 4. ଅନୁବାଦ କରିବା

Q.19 ଓଡ଼ିଶାରେ କେତୋଟି ପ୍ରମୁଖ ଭାଷା ପରିବାର ରହିଛି?

- Ans
- 1. ୦୨
 - 2. ୦୧
 - 3. ୦୫
 - 4. ୦୩

Q.20 ଓଡ଼ିଆ ଭାଷାର କେତୋଟି ମୌଳିକ ସ୍ୱର ଧ୍ୱନି ?

- Ans
- 1. ୦୭
 - 2. ୧୭
 - 3. ୧୧
 - 4. ୦୮