

COMBO - ଓଡ଼ିଶା
29,000- MCQ
ପୂର୍ବ ବର୍ଷ ପ୍ରଶ୍ନ
 ପୂର୍ବ 5 ବର୍ଷର OSSSC,
 OSSC, OPSC, ପୋଲିସ,
 CT, B.ED, ଅନ୍ୟ ସବୁ ପ୍ରଶ୍ନ
 GK, ODIA, ENGLISH, ,
 MATH, COMPUTER,
 Reasoning, Pedagogy

GK- ଓଡ଼ିଶାର
ସମସ୍ତ ପୂର୍ବ ବର୍ଷ ପ୍ରଶ୍ନ
ଓଡ଼ିଆ ଓ ଇଂରାଜୀ ରେ
10,800- MCQ
E-BOOK- PDF
 OSSSC , OSSC , OPSC, Police SI /Constable,
 PEO, RI, Battalion, Fireman, B.ED, JT,
 RHT, CT, OAVS, OSSTET, OTET & Other

ଓଡ଼ିଆ ବ୍ୟାକରଣ
ସମସ୍ତ ପୂର୍ବ ବର୍ଷ ପ୍ରଶ୍ନ
4,246- MCQ
75- TEST
E-BOOK- PDF
 OSSSC, OSSC, OPSC, POLICE, B.ED, JT,
 RHT, CT, OAVS, OSSTET, OTET, OSSSC
 (PEO, RI, ARI & Other) & Other

ENGLISH- ଓଡ଼ିଶାର
ସମସ୍ତ ପୂର୍ବ ବର୍ଷ ପ୍ରଶ୍ନ
4,300- MCQ
E-BOOK- PDF
 OSSSC , OSSC , OPSC,
 Police SI /Constable, PEO,
 RI, Battalion, Fireman, B.ED, JT,
 RHT, CT, OAVS, OSSTET, OTET & Other

କୋମ୍ପ୍ୟୁଟର- ଓଡ଼ିଶାର
ସମସ୍ତ ପୂର୍ବ ବର୍ଷ ପ୍ରଶ୍ନ
ଓଡ଼ିଆ ଓ ଇଂରାଜୀ ରେ
E-BOOK- PDF
1,900- MCQ
 OSSSC, OSSC , OPSC, Police SI &
 Constable, Battalion, PEO, RI, AMIN,
 JT, RHT & Other Exams

MATH- ଓଡ଼ିଶାର
ସମସ୍ତ ପୂର୍ବ ବର୍ଷ ପ୍ରଶ୍ନ
ଓଡ଼ିଆ ଓ ଇଂରାଜୀ ରେ
3,000- MCQ
E-BOOK- PDF
 OSSSC , OSSC , OPSC, Police SI /Constable,
 PEO, RI, Battalion, Fireman, B.ED, JT,
 RHT, CT, OAVS, OSSTET, OTET & Other

PEDAGOGY ଓଡ଼ିଶାର
TEACHING APTITUDE
ପୂର୍ବ ବର୍ଷ ପ୍ରଶ୍ନ
ଓଡ଼ିଆ ଓ ଇଂରାଜୀ ରେ
1,900- MCQ
 B.ED, RHT, CT, JT, OAVS,
 OSSTET, OTET & Other

[Click Here](#)

Tech of World

HOME VIDEOS PLAYLISTS COMMUNITY

ଆମ Channel ରେ ଦେଖନ୍ତୁ Video
 ASO ଓଡ଼ିଶା ପୋଷ୍ଟାଲ CT ଓ B.Ed
 ଓଡ଼ିଶା ପୋଲିସ SSC GD Railway

Tech of World
 SUBSCRIBE
 315K subscribers • 928 videos
 Hello ସାଥୀ ମିତ୍ର !! ଆମର ଏହି Channel ରେ ସବୁ ପ୍ରକାରର Educational Video
 Free ରେ ଯୋଗାଯୋଗ କରନ୍ତୁ ଯେଉଁଠି କେହି କେହି ଏହି "Tech Of World" Channel କୁ ...

+2 କିମ୍ବା +3 ପଢ଼ିବା ପରେ
କେମିତି ଜଣେ ଶିକ୍ଷକ
ହେଇପାରିବେ ?
CT ଓ B.Ed ପରେ କଣ ?

How To Become A Teacher After +2 Or +3 In
 Odisha ? How To Get A Teacher Job In Odisha ?
 Tech of World · 176K views · 3 years ago

Home Shorts Subscriptions Library

[Click Here](#)

Tech Of World- (Odisha Exam CT)

Uninstall Open

Your Review

sujit kumar naik
 ★★★★★ 6/29/21
 Edit your review

Developer contact

About this app

Tech Of World (Odisha Exam) Provides Mock Test &
 E-Books For Different Exams

Education

3.8 ★
 422 reviews

422 reviews

Rated for 3+

50K+
 Downlo.

TECH OF WORLD

Mock Test

[Click Here](#)

Tech Of World
 4.1K subscribers

ASO English 2022 By...
 8.7 MB PDF

ASO General Knowledge 2022...
 4.9 MB PDF

ASO Math 2022 By Techofworld.in.pdf
 4.6 MB PDF

ASO Odia Language 2022 By...
 2.9 MB PDF

ASO Reasoning 2022 By...
 4.6 MB PDF

3 comments

Broadcast

[Click Here](#)



T.E & SCERT Exam 2023
(CANDIDATE RESPONSE SHEET)

Roll No _____
App No _____
Name _____
Paper/Subject D.El.Ed(Odia)
Exam Date 31 May 2023
Exam Slot 2

The questions are based on a short passage. Read the passage below to answer the questions. Choose the correct answer from the 4 listed choices.

The U.S. always was large in terms of area, but its population was small, only 4 million in 1790. Population growth was rapid, reaching 316 million in 2013. Economic growth in terms of overall GDP was even faster. However the nation's military strength was quite limited in peacetime before 1940. The expansion of slavery was increasingly controversial and fueled political and constitutional battles, which were resolved by compromises. Slavery was abolished in all states north of the Mason–Dixon line by 1804, but the South continued to profit off the institution, producing high-value cotton exports to feed increasing high demand in Europe.

The 1860 presidential election of Republican Abraham Lincoln was on a platform of ending the expansion of slavery and putting it on a path to extinction. Seven cotton-based deep South slave states seceded and later founded the Confederacy months before Lincoln's inauguration. No nation ever recognized the Confederacy, but it opened the war by attacking Fort Sumter in 1861. A surge of nationalist outrage in the North fueled a long, intense American Civil War (1861-1865). It was fought largely in the South as the overwhelming material and manpower advantages of the North proved decisive in a long war.

The war's result was restoration of the Union, the impoverishment of the South, and the abolition of slavery. The national government emerged much stronger, and because of the Fourteenth Amendment, it gained the explicit duty to protect individual rights.

Passage:

Question ID:5011

Topic Name:SECTION-I English Language

Question: Which of the following was the result of the American Civil War?

- A Restoration of the Union
- B The impoverishment of the South
- C Abolition of slavery

D All of the above

Correct Answer

Answer Given By Candidate: D

Question ID:5012

Topic Name:SECTION-I English Language

Question: Which of the following is correct according to the passage?

- A Population of US was very large in 1790.
- B US's military strength was very large in peacetime before 1940.
- C Presidential election of Abraham Lincoln was for ending the expansion of slavery. Correct Answer
- D Slavery was abolished in all states of US by 1804.

Answer Given By Candidate: C

Question ID:5013

Topic Name:SECTION-I English Language

Question: Which of the following played important roles in the American Civil War?

- A A surge of nationalist outrage in the North as well as material and manpower advantages of the North Correct Answer
- B The overwhelming material and manpower advantages of the South
- C A quest for inexpensive land for yeoman farmers and slave owners
- D High-value cotton exports to feed increasing high demand in Europe

Answer Given By Candidate: A

Question ID:5014

Topic Name:SECTION-I English Language

Question: Select the correct synonym of "CRUCIBLE".

- A Gist
- B Cruel
- C Severe
- D Container Correct Answer

Answer Given By Candidate: Not Attempted

Question ID:5015

Topic Name:SECTION-I English Language

Question: Select the correct synonym of "ADIEU".

- A Salute
- B Welcome
- C Portray

D Goodbye Correct Answer

Answer Given By Candidate: Not Attempted

Question ID: 5016

Topic Name: SECTION-I English Language

Question: Find the antonym for the word: Swift

A Express

B Steep

C Slow

Correct Answer

D Ready

Answer Given By Candidate: Not Attempted

Question ID: 5017

Topic Name: SECTION-I English Language

Question: Select the correct meaning of the idiom, "Call it a day".

A Stop doing something, especially working

Correct Answer

B Happily continue working

C Disguised as

D Broadly

Answer Given By Candidate: Not Attempted

Question ID: 5018

Topic Name: SECTION-I English Language

Question: Choose the correct meaning of the idiom "Break a leg".

A Speedy recovery

B Good luck

C Enjoy the weather

D Do something bad or cheap

Answer Given By Candidate: Not Attempted

Question ID: 5019

Topic Name: SECTION-I English Language

Question: Fill in the blank with the correct option.

India is _____ largest producer of pulses in the world.

A the

Correct Answer

B a

C an

D No article required

Answer Given By Candidate:A

Question ID:50110

Topic Name:SECTION-I English Language

Question: Insert the correct preposition in the blank given:

Mom always keeps her wallet ___ the drawer.

- A off
- B after
- C away
- D in

Correct Answer

Answer Given By Candidate:D

Question ID:50111

Topic Name:SECTION-I Education and General Awareness

Question: Who was the Chairman of National Steering Committee for the Development of National Curriculum Framework in 2021?

2021 ରେ ଜାତୀୟ ପାଠ୍ୟକ୍ରମ ଢାଞ୍ଚାର ବିକାଶ ପାଇଁ ଜାତୀୟ ପରିଚାଳନା କମିଟିର ଅଧ୍ୟକ୍ଷ କିଏ ଥିଲେ?

- A MK Sridhar
ଏମକେ ଶ୍ରୀଧର
- B K Kasturirangan
କେ କସ୍ତୁରୀରଙ୍ଗନ୍
- C Najma Akhtar
ନଜମା ଅଖତାର୍
- D Krishna Bose
କ୍ରୀଷ୍ଣା ବୋସ

Correct Answer

Answer Given By Candidate:Not Attempted

Question ID:50112

Topic Name:SECTION-I Education and General Awareness

Question: Jamia Millia Islamia is located in which city?

ଜାମିଆ ମିଲିଆ ଇସଲାମିଆ କେଉଁ ସହରରେ ଅବସ୍ଥିତ ?

- A Chandigarh
ଚଣ୍ଡିଗଡ଼
- B Aligarh
ଆଲିଗଡ଼
- C Delhi
ଦିଲ୍ଲୀ

Correct Answer

D Kota
କୋଟା

Answer Given By Candidate: **Not Attempted**

Question ID: 50113

Topic Name: SECTION-I Education and General Awareness

Question: What is the movement of water molecules from a solution with a high concentration of water molecules to a solution with a lower concentration of water molecules, through a cell's partially permeable membrane, called?

ଜଳ ଅଣୁର ଅଧିକ ସାନ୍ଦ୍ରତା ଥିବା ଦ୍ରବଣରୁ ଏକ କୋଷର ଆଂଶିକ ପାରଗମ୍ୟ ମେମ୍ବ୍ରେନ୍ ମାଧ୍ୟମରେ ଜଳ ଅଣୁର କମ୍ ସାନ୍ଦ୍ରତା ଥିବା ଦ୍ରବଣକୁ ଜଳ ଅଣୁଗୁଡ଼ିକର ଗତି କ'ଣ କୁହାଯାଏ?

- A Diffusion
ବିଭେଦ
- B Plasmolysis
ପ୍ଲାଜମଲିସିସ୍
- C Osmosis
ଓସମୋସିସ୍
- D Transpiration
ବାଷ୍ପୀଭବନ

Correct Answer

Answer Given By Candidate: **D**

Question ID: 50114

Topic Name: SECTION-I Education and General Awareness

Question: As of March 2023, who is the Minister of Education in the Central Government?

ମାର୍ଚ୍ଚ 2023 ସୁଦ୍ଧା, କେନ୍ଦ୍ର ସରକାରଙ୍କ ଶିକ୍ଷା ମନ୍ତ୍ରୀ କିଏ ଥିଲେ?

- A Smt. Annapurna Devi
ଶ୍ରୀମତୀ ଅନ୍ନପୂର୍ଣ୍ଣା ଦେବୀ
- B Dr. Rajkumar Ranjan Singh
ଡକ୍ଟର. ରାଜକୁମାର ରଞ୍ଜନ ସିଂହ
- C Dr. Subhas Sarkar
ଡକ୍ଟର ସୁବାଷ ସରକାର
- D Shri Dharmendra Pradhan
ଶ୍ରୀଯୁକ୍ତ ଧର୍ମେନ୍ଦ୍ର ପ୍ରଧାନ

Correct Answer

Answer Given By Candidate: **D**

Question ID:50115

Topic Name:SECTION-I Education and General Awareness

Question: The Indus Water Treaty was mediated by which country or body?

ସିନ୍ଧୁ ଜଳ ଚୁକ୍ତି କେଉଁ ଦେଶ କିମ୍ବା ସଂସ୍ଥା ଦ୍ୱାରା ମଧ୍ୟସ୍ଥାପିତ କରାଯାଇଥିଲା?

- A China
ଚାଇନା
- B United Nations
ମିଳିତ ଜାତିସଂଘ
- C USA
USA (ୟୁଏସଏ)
- D World Bank
ବିଶ୍ୱ ବ୍ୟାଙ୍କ

Correct Answer

Answer Given By Candidate:Not Attempted

Question ID:50116

Topic Name:SECTION-I Reasoning

Question: Statement: Trust me, I have watched the news in channel X.

Assumptions:

Assumption 1: Channel Y gives exact information on the happenings.

Assumption 2 : I am presenting the information as it is broadcasted in the television.

Select the best/correct assumption/s

ବିବୃତି: ମୋତେ ବିଶ୍ୱାସ କରନ୍ତୁ, ମୁଁ ଚ୍ୟାନେଲ୍ Xରେ ଖବର ଦେଖିଛି।

ଅନୁମାନ:

ଧାରଣା 1: ଚ୍ୟାନେଲ୍ Y ଘଟଣାଗୁଡ଼ିକ ବିଷୟରେ ସଠିକ୍ ସୂଚନା ଦେଇଥାଏ।

ଧାରଣା 2 : ମୁଁ ସୂଚନା ଉପସ୍ଥାପନ କରୁଛି କାରଣ ଏହା ଟେଲିଭିଜନରେ ପ୍ରସାରିତ ହୁଏ ।

- A Only Assumption 1 is implicit
କେବଳ ଅନୁମାନ 1 ଅନ୍ତର୍ନିହିତ ଅଟେ
- B Only Assumption 2 is implicit
କେବଳ ଅନୁମାନ 2 ଅନ୍ତର୍ନିହିତ ଅଟେ
- C Either 1 or 2 is implicit
1 କିମ୍ବା 2 ଅନ୍ତର୍ନିହିତ ଅଟେ
- D Neither 1 or 2 is implicit
1 କିମ୍ବା 2 ଅନ୍ତର୍ନିହିତ ନୁହେଁ

Correct Answer

Answer Given By Candidate:Not Attempted

Question ID:50117

Topic Name:SECTION-I Reasoning

Question: In a certain code "BARK" is written as "DCTM". How is "DATE" written in that code?

ଏକ ନିର୍ଦ୍ଦିଷ୍ଟ ସଙ୍କେତରେ "ବାକ" "DCTM" ଭାବରେ ଲେଖାଯାଇଥାଏ । ସେହି ସଙ୍କେତରେ "ଡେଟ୍" କିପରି ଲେଖାଯାଇଛି?

- A JKDM
JKDM
- B FCVG
FCVG
- C HFTM
HFTM
- D URWM
URWM

Correct Answer

Answer Given By Candidate:B

Question ID:50118

Topic Name:SECTION-I Reasoning

Question: In a code "PASTE" is coded as "SDVWH". How is "CATCH" coded in that code?

ଏକ ସଙ୍କେତରେ "ପେଷ୍ଟ"କୁ "SDVWH" ଭାବରେ ସଙ୍କେତ କରାଯାଇଛି । ସେହି ସଙ୍କେତରେ "କ୍ୟାଚ୍" କିପରି ସଙ୍କେତ କରାଯାଏ?

- A HJVCT
HJVCT
- B FDWFK
FDWFK
- C JDTWQ
JDTWQ
- D JHGFF
JHGFF

Correct Answer

Answer Given By Candidate:B

Question ID:50119

Topic Name:SECTION-I Reasoning

Question: Look at this series: 460, 385, 315, 250, 190, ____.

What number should come next?

ଏହି କ୍ରମକୁ ଦେଖନ୍ତୁ: 460, 385, 315, 250, 190, ____.

ପରବର୍ତ୍ତୀ କେଉଁ ସଂଖ୍ୟା ଆସିବ?

- A 145
145

B 135 Correct Answer

135

C 120

120

D 115

115

Answer Given By Candidate: A

Question ID: 50120

Topic Name: SECTION-I Reasoning

Question: Complete the below series.

Z, V, R, ____, J

ନିମ୍ନଲିଖିତ ଶ୍ରେଣୀ ସମ୍ପୂର୍ଣ୍ଣ କରନ୍ତୁ ।

Z, V, R, ____, J

A N

N

Correct Answer

B M

M

C O

O

D P

P

Answer Given By Candidate: A

Question ID: 50121

Topic Name: SECTION-I Teaching Aptitude

Question: Students should take part in setting classroom rules and draft them. Which of the statement regarding classroom rules is correct?

ଛାତ୍ରଛାତ୍ରୀମାନେ ଶ୍ରେଣୀଗୃହ ନିୟମ ନିର୍ଦ୍ଧାରଣ ରେ ଅଂଶଗ୍ରହଣ କରି ଏହାର ଢାଞ୍ଚା ପ୍ରସ୍ତୁତ କରିବା ଉଚିତ୍ ।
ଶ୍ରେଣୀଗୃହ ନିୟମ ସମ୍ପର୍କିତ ବିବୃତି ମଧ୍ୟରୁ କେଉଁଟି ଠିକ୍ ?

A Rules should be simple and reasonable.

ନିୟମ ସରଳ ଏବଂ ଯୁକ୍ତିଯୁକ୍ତ ହେବା ଉଚିତ୍ ।

Correct Answer

B Rules should be complicated.

ନିୟମ ଜଟିଳ ହେବା ଆବଶ୍ୟକ ।

C If rules are not followed by a student, entire class should be punished.

ଯଦି କୌଣସି ଛାତ୍ର ନିୟମ ପାଳନ ନକରନ୍ତି, ତେବେ ସମଗ୍ର ଶ୍ରେଣୀକୁ ଦଣ୍ଡ ମିଳିବା ଆବଶ୍ୟକ ।

D All of the above.

ଉପରୋକ୍ତ ସମସ୍ତ

Answer Given By Candidate:A

Question ID:50122

Topic Name:SECTION-I Teaching Aptitude

Question:

Problem-solving strategies that teachers can demonstrate, model, and teach directly can include graphic organisers, models, questioning, projects and discovering the patterns.

Hence this:

ସମସ୍ୟା ସମାଧାନ ରଣନୀତି ଯାହା ଶିକ୍ଷକମାନେ ପ୍ରଦର୍ଶନ କରିପାରିବେ, ମଡେଲ କରିପାରିବେ ଏବଂ ସିଧାସଳଖ ଶିକ୍ଷା ଦେଇପାରିବେ ସେଥିରେ ଗ୍ରାଫିକ୍ ଆୟୋଜକ, ମଡେଲ୍, ପ୍ରଶ୍ନ, ପ୍ରକଳ୍ପ ଏବଂ ଢାଞ୍ଚା ଆବିଷ୍କାର ଅନ୍ତର୍ଭୁକ୍ତ ହୋଇପାରେ । ତେଣୁ ଏହା:

A Helps Students to focus on process and content.

Correct Answer

ଛାତ୍ରମାନଙ୍କୁ ପ୍ରକ୍ରିୟା ଏବଂ ବିଷୟବସ୍ତୁ ଉପରେ ଧ୍ୟାନ ଦେବାକୁ ସାହାଯ୍ୟ କରେ ।

B Creates confusion in students

ଛାତ୍ରଛାତ୍ରୀଙ୍କ ମଧ୍ୟରେ ବୁଦ୍ଧି ସୃଷ୍ଟି କରୁଛି

C This is cumbersome and waste of time

ଏହା ଜଟିଳ ଏବଂ ସମୟର ଅପଚୟ

D None of the above

ଉପରୋକ୍ତ ମଧ୍ୟରୁ କୌଣସିଟି ନୁହେଁ

Answer Given By Candidate:A

Question ID:50123

Topic Name:SECTION-I Teaching Aptitude

Question:

Problem-solving can be taught in any content area and can even combine cross-curricular concepts to connect learning from all subjects. This helps the students to:

ଯେକୌଣସି ବିଷୟବସ୍ତୁ କ୍ଷେତ୍ରରେ ସମସ୍ୟା ସମାଧାନ ଶିଖାଯାଇପାରିବ ଏବଂ ସମସ୍ତ ବିଷୟରୁ ଶିକ୍ଷା ସଂଯୋଗ କରିବା ପାଇଁ କ୍ରସ୍-ପାଠ୍ୟକ୍ରମ ଧାରଣାକୁ ମଧ୍ୟ ଏକାଠି କରାଯାଇପାରିବ । ଏହା ଛାତ୍ରମାନଙ୍କୁ ସାହାଯ୍ୟ କରେ:

A Increase confidence and achievement across all school subjects.

ବିଦ୍ୟାଳୟର ସମସ୍ତ ବିଷୟରେ ଆତ୍ମବିଶ୍ୱାସ ଓ ସଫଳତା ବଢ଼ାନ୍ତି ।

B Analyze the world around them to draw their own conclusions.

ନିଜ ନିଜର ସିଦ୍ଧାନ୍ତ ବାହାର କରିବା ପାଇଁ ସେମାନଙ୍କ ଆଖପାଖରେ ଥିବା ଦୁନିଆର ବିଶ୍ଳେଷଣ କରନ୍ତି ।

C Explore innovative solutions and long-term knowledge retention

ଅଭିନବ ସମାଧାନ ଏବଂ ଦୀର୍ଘକାଳୀନ ଜ୍ଞାନ ଧାରଣାର ଅନୁସନ୍ଧାନ କରନ୍ତି

D All of the Above

ଉପରୋକ୍ତ ସମସ୍ତ

Correct Answer

Answer Given By Candidate:D

Question ID:50124

Topic Name:SECTION-I Teaching Aptitude

Question: What is the role of feedback in the teaching-learning process?

ଶିକ୍ଷାଦାନ-ଶିକ୍ଷଣ ପ୍ରକ୍ରିୟାରେ ମତାମତର ଭୂମିକା କ'ଣ?

A To maintain teacher authority and control.

ଶିକ୍ଷକଙ୍କ ଅଧିକାର ଓ ନିୟନ୍ତ୍ରଣ ବଜାୟ ରଖିବା।

B To enforce punitive measures for student mistakes.

ଛାତ୍ରଛାତ୍ରୀଙ୍କ ଭୁଲ ପାଇଁ ଦଣ୍ଡନୀୟ ପଦକ୍ଷେପ ଗ୍ରହଣ କରିବା ।

C To provide guidance and support for student improvement.

ଛାତ୍ରଛାତ୍ରୀଙ୍କ ଉନ୍ନତି ପାଇଁ ମାର୍ଗଦର୍ଶନ ଓ ସହାୟତା ପ୍ରଦାନ କରିବା

Correct Answer

D To restrict student autonomy and creativity.

ଛାତ୍ରସ୍ୱାଧୀନତା ଏବଂ ସୃଜନଶୀଳତାକୁ ସୀମିତ କରିବା ।

Answer Given By Candidate:C

Question ID:50125

Topic Name:SECTION-I Teaching Aptitude

Question: Differentiated Instruction works very well for the diverse group of learners. It depends on four elements namely:

ଭିନ୍ନ ଭିନ୍ନ ଶିକ୍ଷା ଶିକ୍ଷାର୍ଥୀମାନଙ୍କ ର ବିବିଧ ଗୋଷ୍ଠୀ ପାଇଁ ବହୁତ ଭଲ ଭାବରେ କାର୍ଯ୍ୟ କରେ । ଏହା ଚାରୋଟି ଉପାଦାନ ଉପରେ ନିର୍ଭର କରେ ଯଥା:

A Content, product, process and learning environment

ବିଷୟବସ୍ତୁ, ଉତ୍ପାଦ, ପ୍ରକ୍ରିୟା ଏବଂ ଶିକ୍ଷଣ ପରିବେଶ

Correct Answer

B Collaboration, procedures, process and learning environment

ସହଯୋଗ, ପ୍ରକ୍ରିୟା, ପ୍ରକ୍ରିୟା ଏବଂ ଶିକ୍ଷଣ ପରିବେଶ

C Conduct, product, progress and learning environment

ଆଚରଣ, ଉତ୍ପାଦ, ପ୍ରଗତି ଏବଂ ଶିକ୍ଷଣ ପରିବେଶ

D Communication, product, process and learning environment

ଯୋଗାଯୋଗ, ଉତ୍ପାଦ, ପ୍ରକ୍ରିୟା ଏବଂ ଶିକ୍ଷଣ ପରିବେଶ

Answer Given By Candidate:B

Question ID:50126

Topic Name:SECTION-I Teaching Aptitude

Question: Student-teacher relationships are important in the short term because it creates a thriving classroom environment and helps students develop:

ଛାତ୍ର-ଶିକ୍ଷକ ସମ୍ପର୍କ ସ୍ୱଳ୍ପ କାଳରେ ଗୁରୁତ୍ୱପୂର୍ଣ୍ଣ କାରଣ ଏହା ଏକ ସମୃଦ୍ଧ ଶ୍ରେଣୀଗୃହ ପରିବେଶ ସୃଷ୍ଟି କରେ ଏବଂ ଛାତ୍ରମାନଙ୍କୁ ବିକଶିତ କରିବାରେ ସାହାଯ୍ୟ କରେ:

- A Physical health
ଶାରୀରିକ ସ୍ୱାସ୍ଥ୍ୟ
- B Positive relationships which may decrease behavioral problems.
ସକାରାତ୍ମକ ସମ୍ପର୍କ ଯାହା ଆଚରଣଗତ ସମସ୍ୟାକୁ ହ୍ରାସ କରିପାରେ ।
- C Over confidence leading to decline in studies.
ଅତ୍ୟଧିକ ଆତ୍ମବିଶ୍ୱାସ ଯୋଗୁଁ ପାଠପଢ଼ା ହ୍ରାସ ପାଇଥାଏ ।
- D Negative attitudes, leading to unhealthy gossip.
ନକାରାତ୍ମକ ମନୋଭାବ, ଅସ୍ୱାସ୍ଥ୍ୟକର ଗପସପ ସୃଷ୍ଟି କରିଥାଏ ।

Correct Answer

Answer Given By Candidate: B

Question ID: 50127

Topic Name: SECTION-I Teaching Aptitude

Question: Children who experience holistic development during their school years grow up to become global citizens. As important as it is to learn Math and English, it is equally necessary that kids in school get a proper education in the arts and are taken on field trips. Such experiences enhance:

ଯେଉଁ ପିଲାମାନେ ବିଦ୍ୟାଳୟ ସମୟରେ ସାମଗ୍ରିକ ବିକାଶ ଅନୁଭବ କରନ୍ତି ସେମାନେ ବଡ଼ ହୋଇ ବିଶ୍ୱ ନାଗରିକ ହୁଅନ୍ତି । ଗଣିତ ଓ ଇଂରାଜୀ ଶିଖିବା ଯେତିକି ଗୁରୁତ୍ୱପୂର୍ଣ୍ଣ, ସେତିକି ଜରୁରୀ ଯେ ସ୍କୁଲରେ ପିଲାମାନେ କଳାରେ ଉପଯୁକ୍ତ ଶିକ୍ଷା ଲାଭ କରନ୍ତୁ ଏବଂ ଫିଲ୍ଡ ଟ୍ରିପ୍ ରେ ନିଆଯିବ । ଏଭଳି ଅନୁଭୂତି ବୃଦ୍ଧି ପାଇଥାଏ:

- A Collaborative skills
ସହଯୋଗୀ ଦକ୍ଷତା
- B Experiential learning-not only hands on but minds on too
ଅନୁଭୂତିମୂଳକ ଶିକ୍ଷା- କେବଳ ହାତ ନୁହେଁ, ମନ ଉପରେ ମଧ୍ୟ
- C Values are set with growth mindset
ଅଭିବୃଦ୍ଧି ମାନସିକତା ସହିତ ମୂଲ୍ୟବୋଧ ସ୍ଥିର କରାଯାଏ
- D All of the above
ଉପରୋକ୍ତ ସମସ୍ତ

Correct Answer

Answer Given By Candidate: D

Question ID: 50128

Topic Name: SECTION-I Teaching Aptitude

Question: School is a formal institution that imparts education. Informal institutions educate:
ବିଦ୍ୟାଳୟ ଏକ ଆନୁଷ୍ଠାନିକ ଅନୁଷ୍ଠାନ ଯାହା ଶିକ୍ଷା ପ୍ରଦାନ କରେ । ଅନୌପଚାରିକ ଅନୁଷ୍ଠାନଗୁଡ଼ିକ ଶିକ୍ଷିତ କରନ୍ତି:

- A Children in a traditional way with fixed mindset.
ସ୍ଥିର ମାନସିକତା ଥିବା ପିଲାମାନେ ପାରମ୍ପରିକ ଉପାୟରେ ।
- B Individual in developing a range of capacities at different levels in life.
ଜୀବନର ବିଭିନ୍ନ ସ୍ତରରେ ବିଭିନ୍ନ ଦକ୍ଷତା ବିକଶିତ କରିବାରେ ବ୍ୟକ୍ତି ।
- C Children through a time-bound courses.
ଏକ ସମୟବଦ୍ଧ ପାଠ୍ୟକ୍ରମ ମାଧ୍ୟମରେ ପିଲାମାନେ ।
- D Children in developing conflicts and frustration.
ପିଲାମାନେ ସଂଘର୍ଷ ଏବଂ ନିରାଶାରେ ପୀଡ଼ିତ ହୁଅନ୍ତି ।

Correct Answer

Answer Given By Candidate: B

Question ID: 50129

Topic Name: SECTION-I Teaching Aptitude

Question:

Students differ in their grasping, memory, concentration, ability to learn and write and show varied interests in various subjects. Teacher should focus and balance:
ଛାତ୍ରଛାତ୍ରୀମାନଙ୍କର ବୁଝାମଣା, ସ୍ମୃତିଶକ୍ତି, ଏକାଗ୍ରତା, ଶିଖିବା ଓ ଲେଖିବାର ଦକ୍ଷତା ଏବଂ ବିଭିନ୍ନ ବିଷୟରେ ଭିନ୍ନ ଭିନ୍ନ ଆଗ୍ରହ ଦେଖାଇଥାଏ । ଶିକ୍ଷକ ଧ୍ୟାନ ଦିଅନ୍ତୁ ଏବଂ ସନ୍ତୁଳନ କରନ୍ତୁ:

- A On her content delivery which is S.M.A.R.T
ତାଙ୍କ ବିଷୟବସ୍ତୁ ବିତରଣ ଉପରେ ଯାହା ଏସ.ଏମ.ଏ.ଆର.ଟି ଅଟେ
- B The needs of the children by giving differentiated support.
ଭିନ୍ନ ଭିନ୍ନ ସମର୍ଥନ ଦେଇ ପିଲାଙ୍କ ଆବଶ୍ୟକତା ।
- C The multiple intelligences of the students.
ଛାତ୍ରମାନଙ୍କର ଏକାଧିକ ବୁଦ୍ଧିମତା ।
- D All of the above.
ଉପରୋକ୍ତ ସମସ୍ତ ।

Correct Answer

Answer Given By Candidate: D

Question ID: 50130

Topic Name: SECTION-I Teaching Aptitude

Question:

Interpersonal Skills are very important which primarily helps in:

ଆନ୍ତର୍ବ୍ୟକ୍ତିକ ଦକ୍ଷତା ଅତ୍ୟନ୍ତ ଗୁରୁତ୍ୱପୂର୍ଣ୍ଣ ଯାହା ମୁଖ୍ୟତଃ ଏଥିରେ ସାହାଯ୍ୟ କରେ:

- A Building Relationships
ସମ୍ପର୍କ ଗଢ଼ିତୋଳିବା

B Conflict Resolution

ବିବାଦ ସମାଧାନ

C Teamwork and Collaboration

ଦଳଗତ କାର୍ଯ୍ୟ ଏବଂ ସହଯୋଗ

D All of the Above

ଉପରୋକ୍ତ ସମସ୍ତ

Correct Answer

Answer Given By Candidate: D

Question ID: 50131

Topic Name: SECTION-II Odia Language

Question: ଆମ ଭାଷାରେ (ଓଡ଼ିଆ ଭାଷାରେ) ମୁଖ୍ୟତଃ କେତେ ପ୍ରକାରର ଶବ୍ଦର ପ୍ରଚଳନ ଦେଖାଯାଏ ?

A ଦ୍ରୁତପ୍ରକାର

B ତିନିପ୍ରକାର

C ଚାରିପ୍ରକାର

Correct Answer

D ପାଞ୍ଚପ୍ରକାର

Answer Given By Candidate: C

Question ID: 50132

Topic Name: SECTION-II Odia Language

Question: 'ଶିଆଳ'ର ମୂଳ ଶବ୍ଦଟି କିଏ?

A ଶୃଗାଳ

Correct Answer

B ଶୀଳ

C ଶିଆଳି

D ଶିଆର

Answer Given By Candidate: A

Question ID: 50133

Topic Name: SECTION-II Odia Language

Question: ସାଧାରଣ ଜନତା ବା ଦେଶୀୟ ଲୋକର ଭାଷାରେ ବ୍ୟବହୃତ ହେଉଥିବା ଶବ୍ଦକୁ ଦେଶଜ ଶବ୍ଦ ବା ଆଉ କ'ଣ କୁହାଯାଏ ?

A ଲୋକ ଶବ୍ଦ

B ଦେଶୀୟ ଶବ୍ଦ

Correct Answer

C ଦେଶ ଶବ୍ଦ

D ଦେଶି ଶବ୍ଦ

Answer Given By Candidate:C

Question ID:50134

Topic Name:SECTION-II Odia Language

Question: 'ଅତିକ୍ରମ' ଶବ୍ଦଟିରେ କେଉଁ ଉପସର୍ଗ ର ବ୍ୟବହାର ହୋଇଛି ?

- A ଅତି Correct Answer
- B କ୍ରମ
- C ଅ
- D ତିକ୍ର

Answer Given By Candidate:A

Question ID:50135

Topic Name:SECTION-II Odia Language

Question: ଉଡ଼-କୁଡ଼-ଅ = _____ । ନିମ୍ନୋକ୍ତ ଶବ୍ଦ ମଧ୍ୟରୁ କେଉଁ ଶବ୍ଦଟି ଶୂନ୍ୟସ୍ଥାନ ପାଇଁ ଉପଯୁକ୍ତ ଅଟେ ?

- A ଉକ୍ତ
- B ଉକ୍ତ
- C ଉକ୍ତୋ Correct Answer
- D ଉତୋକ୍ତ

Answer Given By Candidate:Not Attempted

Question ID:50136

Topic Name:SECTION-II Odia Language

Question: 'ପ୍ରତି' ଉପସର୍ଗଟି କେଉଁ ଅର୍ଥରେ ବ୍ୟବହାର ହୋଇ ପାରିବ ?

- A ଅସୀମ
- B ବିପରୀତ Correct Answer
- C ବ୍ୟାପ୍ତି
- D ଅତ୍ୟନ୍ତ

Answer Given By Candidate:B

Question ID:50137

Topic Name:SECTION-II Odia Language

Question: ତା'ଙ୍କର _____ ନୀତି ଯୋଗୁଁ ସବୁବେଳେ ବିଫଳ ହୁଅନ୍ତି । ଶୂନ୍ୟସ୍ଥାନରେ ନିମ୍ନୋକ୍ତ ମଧ୍ୟରୁ କେଉଁଟି ହେବ ?

- A ମନ ଘର ଧରିବା
- B ଛୁଞ୍ଚିମାଛି ପରୀକ୍ଷା

C ହୁଙ୍କା ପିଟା Correct Answer

D ମାଛିକୁ ମ'ନକହିବା

Answer Given By Candidate: C

Question ID: 50138

Topic Name: SECTION-II Odia Language

Question:

ପିଲାଟି ଏପରି _____ ଯେ, ଯାହା କହିବ ତାହା କରିବ । ଶୂନ୍ୟସ୍ଥାନରେ ନିମ୍ନୋକ୍ତ ମଧ୍ୟରୁ କେଉଁଟି ଲେଖାଯାଇ ପାରିବ ?

A ବଣ ବିଛୁଆଟି Correct Answer

B ଦେହଲଗା

C ନାଟର ଗୋବର୍ଦ୍ଧନ

D କୁହାମୁଣ୍ଡା କପିଳା

Answer Given By Candidate: D

Question ID: 50139

Topic Name: SECTION-II Odia Language

Question:

ଏ କାର୍ଯ୍ୟ କରିବା ତୁମ ପକ୍ଷରେ _____ । ଶୂନ୍ୟସ୍ଥାନରେ ନିମ୍ନୋକ୍ତ ମଧ୍ୟରୁ କେଉଁଟି ଲେଖାଯାଇ ପାରିବ ?

A ବାଆକୁ ବଡ଼ା

B କପାଳ ଲିଖନ

C କାଠିକର ପାଠ Correct Answer

D ଜପାମାଳୀ

Answer Given By Candidate: C

Question ID: 50140

Topic Name: SECTION-II Odia Language

Question: "ଗ୍ୟାରେଜ୍" କେଉଁ ଶବ୍ଦ ଅଟେ ?

A ଫରାସା Correct Answer

B ପର୍ଯ୍ୟୁଗାଜ

C ଭୂର୍ଜୀ

D ଆରବିକ

Answer Given By Candidate: Not Attempted

Question ID:50141

Topic Name:SECTION-II Odia Language

Question: "ଭକତ" କେଉଁ ପ୍ରକାର ଶବ୍ଦ ?

- A ତତ୍ସମ
- B ଦେଶଜ
- C ବୈଦେଶିକ
- D ଅର୍ଦ୍ଧତତ୍ସମ Correct Answer

Answer Given By Candidate: Not Attempted

Question ID:50142

Topic Name:SECTION-II Odia Language

Question: "ଜାନ" କେଉଁ ପ୍ରକାର ଶବ୍ଦ ?

- A ତତ୍ସମ
- B ଅର୍ଦ୍ଧତତ୍ସମ
- C ତତ୍ତ୍ୱ Correct Answer
- D ଦେଶଜ

Answer Given By Candidate: C

Question ID:50143

Topic Name:SECTION-II Odia Language

Question: ମୁଗୁଁ ସମାଜରେ ଆଦର ପାଏ ନାହିଁ। 'ମୁଗୁଁ' ପଦଟି କେଉଁ ବିଶେଷ୍ୟ ?

- A ଗୁଣବାଚକ Correct Answer
- B ଜାତିବାଚକ
- C ବ୍ୟକ୍ତିବାଚକ
- D ବସ୍ତୁବାଚକ

Answer Given By Candidate: B

Question ID:50144

Topic Name:SECTION-II Odia Language

Question: ପଣ୍ଡିତ ସମାଜରେ ଆଦର ପାଏ। 'ସମାଜ' ପଦଟି କେଉଁ ବିଶେଷ୍ୟ ?

- A କ୍ରିୟାବାଚକ
- B ଗୁଣବାଚକ
- C ଜାତିବାଚକ Correct Answer
- D ବ୍ୟକ୍ତିବାଚକ

Answer Given By Candidate:C

Question ID:50145

Topic Name:SECTION-II Odia Language

Question: ବାକ୍ୟ ମଧ୍ୟରେ କେତେ ଗୁଡ଼ିଏ _____ ରହିଥାଏ?

- A ପଦ
- B ଧ୍ବନି
- C ଗୁଡ଼ି **Correct Answer**
- D ପ୍ରବାଦ

Answer Given By Candidate:A

Question ID:50191

Topic Name:SECTION-II Mathematics

Question: Calculate the profit%, if the cost price is 30% of selling price.

ଯଦି ଖର୍ଚ୍ଚ ମୂଲ୍ୟ ବିକ୍ରୟ ମୂଲ୍ୟର 30% ଅଟେ ତେବେ ଲାଭ% ହିସାବ କରନ୍ତୁ।

- A 70%
70%
- B 42.85%
42.85%
- C 200%
200%
- D 233.33%
233.33% **Correct Answer**

Answer Given By Candidate:A

Question ID:50192

Topic Name:SECTION-II Mathematics

Question: Raju paid Rs 10240 as interest on a loan he took for 8 years, at 8% rate of simple interest. What was the principal?

ରାଜୁ 8 ବର୍ଷ ପାଇଁ ନେଇଥିବା ଋଣର ସ୍ଥୁଳ ବାବଦରେ 8% ସରଳ ସ୍ଥୁଳ ହାରରେ 10240 ଟଙ୍କା ଫେରି କରିଥିଲେ। ମୂଳଧନ କେତେ ଥିଲା?

- A Rs 16000
Rs 16000 **Correct Answer**
- B Rs 15000
Rs 15000
- C Rs 10000
Rs 10000
- D Rs 12500
Rs 12500

Answer Given By Candidate:A

Question ID:50193

Topic Name:SECTION-II Mathematics

Question: Ram deposited Rs.2000 in an account at 4% compounded annually for 2 years. He then withdrew the amount at the end of the two years and deposited in another bank at the rate of 6% compounded annually for 4 years. Calculate the approximate balance amount in the second account after 4 years.

ରାମ 2 ବର୍ଷ ପର୍ଯ୍ୟନ୍ତ ବାର୍ଷିକ 4% ହିସାବରେ ଏକ ଆକାଉଣ୍ଟରେ 20 ଟଙ୍କା ଜମା କରିଥିଲେ। ଏହାପରେ ସେ ଦୁଇ ବର୍ଷ ଶେଷରେ ଟଙ୍କା ଉଠାଇ ଅନ୍ୟ ଏକ ବ୍ୟାଙ୍କରେ 4 ବର୍ଷ ପର୍ଯ୍ୟନ୍ତ ବାର୍ଷିକ 6% ହାରରେ ଜମା କରିଥିଲେ। 4 ବର୍ଷ ପରେ ଦ୍ୱିତୀୟ ଆକାଉଣ୍ଟରେ ଆନୁମାନିକ ବାଲାନ୍ସ ପରିମାଣ ଗଣନା କରନ୍ତୁ।

A Rs. 2275

Rs. 2275

B Rs. 2701

Rs. 2701

C Rs. 2163

Rs. 2163

D Rs. 2731

Rs. 2731

Correct Answer

Answer Given By Candidate:Not Attempted

Question ID:50194

Topic Name:SECTION-II Mathematics

Question: Find the HCF of 1241 and 8979.

1241 ଏବଂ 8979 ର HCF ସନ୍ଧାନ କରନ୍ତୁ।

A 48

48

B 73

73

Correct Answer

C 89

89

D 70

70

Answer Given By Candidate:B

Question ID:50195

Topic Name:SECTION-II Mathematics

Question: If 360 is divided among A, B, C and D such that the ratio is 2 : 3 : 4 : 3; how much does C get?

ଯଦି 360 କୁ A, B, C ଏବଂ D ମଧ୍ୟରେ ବିଭକ୍ତ କରାଯାଏ ତେବେ ଅନୁପାତ 2 : 3 : 4 : 3; C କେତେ ପାଇଥାଏ?

A 360
360

B 90
90

C 60
60

D 120
120

Correct Answer

Answer Given By Candidate: D

Question ID: 50196

Topic Name: SECTION-II Mathematics

Question: The length of a ribbon was originally 60 cm. It was reduced in the ratio 5 : 3.

What is its length now?

ଗୋଟିଏ ରିବନର ଲମ୍ବ ମୂଳତଃ 60 cm ଥିଲା । ଏହାକୁ 5 : 3 ଅନୁପାତରେ ହ୍ରାସ କରାଯାଇଥିଲା । ବର୍ତ୍ତମାନ ଏହାର ଲମ୍ବ କ'ଣ?

A 12 cms
12 cms

B 34 cms
34 cms

C 36 cms
36 cms

Correct Answer

D 48 cms
48 cms

Answer Given By Candidate: Not Attempted

Question ID: 50197

Topic Name: SECTION-II Mathematics

Question: In a triangle, the line segment joining a vertex to the midpoint of the opposite side is:

ଗୋଟିଏ ତ୍ରିଭୁଜରେ, ବିପରୀତ ପାର୍ଶ୍ୱର ମଧ୍ୟବିନ୍ଦୁରେ ଏକ ଶୀର୍ଷବିନ୍ଦୁକୁ ଯୋଡ଼ିଥିବା ସିଧା ରେଖାଖଣ୍ଡ

ହେଉଛି:

A Altitude
ଉଚ୍ଚତା

B Median
ମଧ୍ୟମା

Correct Answer

C Inradius
ବ୍ୟାସାର୍ଦ୍ଧ ମଧ୍ୟରେ

D Circumradius
ପରିକେନ୍ଦ୍ର ମଧ୍ୟରେ

Answer Given By Candidate: A

Question ID: 50198

Topic Name: SECTION-II Mathematics

Question: A rectangle with a length of 8 units and a width of 3 units has an area of:

8 ୟୁନିଟ୍ ଦୈର୍ଘ୍ୟ ଏବଂ 3 ୟୁନିଟ୍ ପ୍ରସ୍ଥ ବିଶିଷ୍ଟ ଏକ ଆୟତ କ୍ଷେତ୍ରଫଳର କ୍ଷେତ୍ରଫଳ ନିମ୍ନଲିଖିତ ଅଟେ:

- A 11 square units
11 ବର୍ଗଯୁକ୍ତ ୟୁନିଟ୍
- B 15 square units
15 ବର୍ଗଯୁକ୍ତ ୟୁନିଟ୍
- C 24 square units
24 ବର୍ଗଯୁକ୍ତ ୟୁନିଟ୍
- D 32 square units
32 ବର୍ଗଯୁକ୍ତ ୟୁନିଟ୍

Correct Answer

Answer Given By Candidate: C

Question ID: 50199

Topic Name: SECTION-II Mathematics

Question: Which one of the following is NOT a type of angle?

ନିମ୍ନଲିଖିତ ମଧ୍ୟରୁ କେଉଁଟି ଏକ ପ୍ରକାର କୋଣ ନୁହେଁ?

- A Acute
ସୂକ୍ଷ୍ମକୋଣ
- B Obtuse
ସ୍ୱଥୁଳକୋଣ
- C Parallel
ସାମନ୍ତରିକ
- D Right
ସମକୋଣ

Correct Answer

Answer Given By Candidate: C

Question ID: 501100

Topic Name: SECTION-II Mathematics

Question: Which of the following is the solution of the equation $2x - 5 = 7$?

ନିମ୍ନଲିଖିତ ମଧ୍ୟରୁ କେଉଁଟି $2x - 5 = 7$ ସମୀକରଣର ସମାଧାନ ଅଟେ?

- A 6
6
- B 4
4
- C -1
-1
- D 6.5
6.5

Correct Answer

Answer Given By Candidate: A

Question ID:501101

Topic Name:SECTION-II Mathematics

Question: If $x + 2y = 5$ and $3x - y = 1$, what is the value of x and y ?ଯଦି $x + 2y = 5$ ଏବଂ $3x - y = 1$, ତେବେ x ଏବଂ y ର ମୂଲ୍ୟ କ'ଣ?

A $x = 2, y = 1$

$x = 2, y = 1$

B $x = 1, y = 2$
 $x = 1, y = 2$

Correct Answer

C $x = -1, y = 3$
 $x = -1, y = 3$

D $x = 3, y = -1$
 $x = 3, y = -1$

Answer Given By Candidate:B

Question ID:501102

Topic Name:SECTION-II Mathematics

Question: In which of the following the first set is a proper subset of the second set?

ନିମ୍ନଲିଖିତ ମଧ୍ୟରୁ କେଉଁଟିରେ ପ୍ରଥମ ସେଟ୍ ଦ୍ୱିତୀୟ ସେଟ୍‌ର ଏକ ପ୍ରକୃତ ଉପସେଟ୍ ଅଟେ?

A $\{1, 2, 3\}, \{1, 2, 3, 4\}$
 $\{1, 2, 3\}, \{1, 2, 3, 4\}$

Correct Answer

B $\{1, 2, 3\}, \{1, 2, 3\}$
 $\{1, 2, 3\}, \{1, 2, 3\}$

C $\{1, 2, 3\}, \{2, 3, 4\}$
 $\{1, 2, 3\}, \{2, 3, 4\}$

D $\{1, 2, 3\}, \{3, 2, 1\}$
 $\{1, 2, 3\}, \{3, 2, 1\}$

Answer Given By Candidate:A

Question ID:501103

Topic Name:SECTION-II Mathematics

Question: What is the difference between two sets?

ଦୁଇଟି ସେଟ୍ ମଧ୍ୟରେ ପାର୍ଥକ୍ୟ କ'ଣ?

A The set of all elements that are in both sets
ଉଭୟ ସେଟ୍‌ରେ ଥିବା ସମସ୍ତ ଉପାଦାନର ସେଟ୍B The set of all elements that are only in one set
କେବଳ ଗୋଟିଏ ସେଟ୍‌ରେ ଥିବା ସମସ୍ତ ଉପାଦାନର ସେଟ୍

Correct Answer

C The set of all elements that are not in either set
ଉଭୟ ସେଟ୍‌ରେ ନଥିବା ସମସ୍ତ ଉପାଦାନର ସେଟ୍D The set of all elements that are in either set
ଉଭୟ ସେଟ୍‌ରେ ଥିବା ସମସ୍ତ ଉପାଦାନର ସେଟ୍

Answer Given By Candidate:Not Attempted



Question ID:501104

Topic Name:SECTION-II Mathematics

Question: What is the value of $(\sqrt{2} + \sqrt{3})^2$? $(\sqrt{2} + \sqrt{3})^2$ ର ମୂଲ୍ୟ କେତେ?A $5 + 2\sqrt{6}$ $5 + 2\sqrt{6}$

Correct Answer

B $5 + \sqrt{6}$ $5 + \sqrt{6}$ C $5 + 6$ $5 + 6$ D $5 + 2\sqrt{3}$ $5 + 2\sqrt{3}$

Answer Given By Candidate:A

Question ID:501105

Topic Name:SECTION-II Mathematics

Question: What is the square of $3x - 4y$? $3x - 4y$ ର ବର୍ଗମୂଳ କେତେ?A $9x^2 + 16y^2$ $9x^2 + 16y^2$ B $9x^2 - 24xy + 16y^2$ $9x^2 - 24xy + 16y^2$

Correct Answer

C $9x^2 - 24xy - 16y^2$ $9x^2 - 24xy - 16y^2$ D $3x^2 - 4y^2$ $3x^2 - 4y^2$

Answer Given By Candidate:B

Question ID:501106

Topic Name:SECTION-II Social Science

Question: In the beginning, the early human beings were_____.

ପ୍ରାରମ୍ଭରେ, ପ୍ରାରମ୍ଭିକ ମନୁଷ୍ୟମାନେ_____ ଥିଲେ ।

A Food producer

ଖାଦ୍ୟ ଉତ୍ପାଦନକାରୀ

B Food gatherer and hunters

ଖାଦ୍ୟ ସଂଗ୍ରହକାରୀ ଏବଂ ଶିକାରୀ

Correct Answer

C Hunters only

ଶିକାରୀ କେବଳ

D Food gatherers only

ଖାଦ୍ୟ ସଂଗ୍ରହକାରୀ କେବଳ

Answer Given By Candidate: B

Question ID: 501107

Topic Name: SECTION-II Social Science

Question: Which emperor targeted Somnath Temple at Gujarat to raid and plunder it?

କେଉଁ ସମ୍ରାଟ ଗୁଜରାଟର ସୋମନାଥ ମନ୍ଦିର ଉପରେ ଚଢ଼ାଇ କରି ଲୁଟ୍ କରିଥିଲେ?

- A Mahmud Ghazni
ମାମୁଦ୍ ଗଜନି **Correct Answer**
- B Rajraj-I
ରାଜରାଜ- I
- C Muhammad Ghorī
ମହମ୍ମଦ ଘୋରୀ
- D Rajendra-I
ରାଜେନ୍ଦ୍ର-I

Answer Given By Candidate: Not Attempted

Question ID: 501108

Topic Name: SECTION-II Social Science

Question: When was Indian National Congress established?

ଭାରତୀୟ ଜାତୀୟ କଂଗ୍ରେସ କେବେ ସ୍ଥାପିତ ହୋଇଥିଲା?

- A 1885
1885 **Correct Answer**
- B 1880
1880
- C 1857
1857
- D 1882
1882

Answer Given By Candidate: A

Question ID: 501109

Topic Name: SECTION-II Social Science

Question: Who is popularly called as the 'Grand Old Man of India'?

କାହାକୁ 'ଗ୍ରାଣ୍ଡ ଓଲ୍ଡ ମ୍ୟାନ୍ ଅଫ୍ ଇଣ୍ଡିଆ' ବୋଲି କୁହାଯାଏ?

- A Dadabhai Naoroji
ଦାଦାଭାଉ ନାରୋଜୀ **Correct Answer**
- B Bhagat Singh
ଭଗତ ସିଂହ

C Lala Lajpat Rai
ଲାଲା ଲଜପତ୍ ରାୟ

D Bal Gangadhar Tilak
ବାଲ୍ ଗଙ୍ଗାଧର ତିଳକ

Answer Given By Candidate:A

Question ID:501110

Topic Name:SECTION-II Social Science

Question: How many Schedules are there in Indian constitution?

ଭାରତୀୟ ସମ୍ବିଧାନରେ କେତେ ଅନୁସୂଚୀ ରହିଛି?

A 9
9

B 10
10

C 12
12 **Correct Answer**

D 11
11

Answer Given By Candidate:C

Question ID:501111

Topic Name:SECTION-II Social Science

Question: Which of the following is not a feature of Indian Constitution?

ନିମ୍ନଲିଖିତ ମଧ୍ୟରୁ କେଉଁଟି ଭାରତୀୟ ସମ୍ବିଧାନର ଏକ ବୈଶିଷ୍ଟ୍ୟ ନୁହେଁ?

A Unitarian Federalism
ୟୁନିଟେରିଆନ୍ ସଂଘବାଦ

B Democratic republic
ଗଣତାନ୍ତ୍ରିକ ଗଣତନ୍ତ୍ର

C Parliamentary form of Government
ସଂସଦୀୟ ଶାସନ ବ୍ୟବସ୍ଥା

D Presidential form of Government.
ରାଷ୍ଟ୍ରପତି ଶାସନ ପ୍ରଣାଳୀ **Correct Answer**

Answer Given By Candidate:D

Question ID:501112

Topic Name:SECTION-II Social Science

Question: In which constitutional amendment in the year 1978, Right to property was removed from the fundamental rights of Indian constitution?

1978 ମସିହାରେ କେଉଁ ସମ୍ବିଧାନ ସଂଶୋଧନରେ ସମ୍ପତ୍ତି ଅଧିକାରକୁ ଭାରତୀୟ ସମ୍ବିଧାନର ମୌଳିକ ଅଧିକାରରୁ ହଟାଇ ଦିଆଯାଇଥିଲା?

A 43rd
43ତମ

B 44th **Correct Answer**
44ତମ

C 42nd
42ତମ

D 45th
45ତମ

Answer Given By Candidate: B

Question ID:501113

Topic Name:SECTION-II Social Science

Question: Who is the elected head of the Municipal Corporation?

ମହାନଗର ନିଗମର ନିର୍ବାଚିତ ମୁଖ୍ୟ କିଏ ?

A Chairman
ଚେୟାରମ୍ୟାନ୍

B Mayor **Correct Answer**
ମେୟର

C Municipality Commissioner
ମ୍ୟୁନିସିପାଲିଟି କମିଶନର

D Corporator
କର୍ପୋରେଟର

Answer Given By Candidate: B

Question ID:501114

Topic Name:SECTION-II Social Science

Question: Which of the following constitutional amendments deals with rural and urban local self-governments?

ନିମ୍ନଲିଖିତ ମଧ୍ୟରୁ କେଉଁ ସାମ୍ବିଧାନିକ ସଂଶୋଧନ ଗ୍ରାମୀଣ ଏବଂ ସହରାଞ୍ଚଳ ସ୍ଥାନୀୟ ସ୍ୱୟଂ-ଶାସନ ସହିତ ସମ୍ବନ୍ଧିତ?

A 73rd and 74th **Correct Answer**
73ତମ ଏବଂ 74ତମ

B 71st and 72nd
71ତମ ଏବଂ 72ତମ

C 75th and 76th
75ତମ ଏବଂ 76ତମ

D 70th and 71st
70ତମ ଏବଂ 71ତମ

Answer Given By Candidate: A

Question ID: 501115

Topic Name: SECTION-II Social Science

Question: Which type of farming includes both the growing of crops as well as raising of livestock?

କେଉଁ ପ୍ରକାର ଚାଷରେ ଉଭୟ ଫସଲ ଚାଷ ସହିତ ପଶୁସମ୍ପଦ ପାଳନ ଅନ୍ତର୍ଭୁକ୍ତ?

A Mixed Farming
ମିଳିତ ଚାଷ

Correct Answer

B Intensive Farming
ମାତ୍ରାସ୍ପତନ୍ତ୍ର ଚାଷ

C Horticulture
ଉଦ୍ୟାନ କୃଷି

D Apiculture
ମହୁମାଛି ପାଳନ

Answer Given By Candidate: A

Question ID: 501116

Topic Name: SECTION-II Social Science

Question: The location of a cement industry is mostly based on:

ଏକ ସିମେଣ୍ଟ ଶିଳ୍ପର ଅବସ୍ଥାନ ମୁଖ୍ୟତଃ ଏହା ଉପରେ ଆଧାରିତ:

A Nearness to a port
ଏକ ବନ୍ଦରର ନିକଟତମ

B Where demand is high
ଯେଉଁଠି ଚାହିଦା ଅଧିକ

C Where transportation facilities are available
ଯେଉଁଠି ପରିବହନ ସୁବିଧା ଉପଲବ୍ଧ

D Availability of raw materials
କଞ୍ଚାମାଲର ଉପଲବ୍ଧତା

Correct Answer

Answer Given By Candidate: Not Attempted

Question ID:501117

Topic Name:SECTION-II Social Science

Question: Navagaon and Ankaleshwar oil fields are located in:

ନବଗାଓ ଓ ଅଙ୍କଳେଶ୍ୱର ତେଲ କ୍ଷେତ୍ର ଗୁଡ଼ିକ ଏଠାରେ ଅବସ୍ଥିତ:

A Karnataka

କର୍ଣ୍ଣାଟକ

B Gujarat

ଗୁଜରାଟ

C Kerala

କେରଳ

D Odisha

ଓଡ଼ିଶା

Correct Answer

Answer Given By Candidate:Not Attempted

Question ID:501118

Topic Name:SECTION-II Social Science

Question: Which mines in Rajasthan is famous for copper?

ରାଜସ୍ଥାନର କେଉଁ ଖଣି ତମ୍ବା ପାଇଁ ପ୍ରସିଦ୍ଧ ?

A Jharla

ଝରିଆ

B Birbhum

ବୀରଭୂମ

C Ratnagiri

ରତ୍ନଗିରି

D Khetri

ଖେତ୍ରୀ

Correct Answer

Answer Given By Candidate:D

Question ID:501119

Topic Name:SECTION-II Social Science

Question: Which of the following pairs is correct?

ନିମ୍ନଲିଖିତ ଯୋଡ଼ି ମଧ୍ୟରୁ କେଉଁଟି ଠିକ୍ ଅଟେ?

A 180° longitude – Prime Meridian

180° ଦ୍ରାଘିମା – ପ୍ରମୁଖ ଧରଣ ବୃତ୍ତ

B 0° longitude – Equator

0° ଦ୍ରାଘିମା – ବିଷୁବରେଖା

C 25.5° North – Tropic of Cancer

25.5° ଉତ୍ତର – କର୍କଟ ରେଖା

D 0° latitude – Equator

0° ଅକ୍ଷାଂଶ – ବିଷୁବରେଖା

Correct Answer

Answer Given By Candidate: D

Question ID: 501120

Topic Name: SECTION-II Social Science

Question: Longitude and latitude both:

ଦ୍ରାଘିମା ଓ ଅକ୍ଷାଂଶ ଉଭୟ:

A run parallel to each other

ପରସ୍ପର ସହ ସମାନ୍ତରାଳ ଭାବେ ଚାଲନ୍ତି

B run perpendicular to each other

ପରସ୍ପର ସହ ଲମ୍ବା ଭାବେ ଚାଲନ୍ତି

Correct Answer

C run parallel to Equator

ବିଷୁବ ରେଖାର ସମାନ୍ତରାଳ ଭାବରେ ଚାଲନ୍ତି

D run parallel to Prime Meridian

ପ୍ରମୁଖ ଧ୍ରୁବ ବୃତ୍ତରେ ସମାନ୍ତରାଳ ଭାବେ ଚାଲନ୍ତି

Answer Given By Candidate: A

Question ID: 501121

Topic Name: SECTION-II Science

Question: Rate of evaporation _____ with a/an _____ in humidity

ଆର୍ଦ୍ରତାରେ _____ ସହିତ ବାଷ୍ପୀକରଣ ହାର _____

A decreases, increase

ହ୍ରାସ, ବୃଦ୍ଧି

Correct Answer

B decreases, decrease

ହ୍ରାସ, ହ୍ରାସ

C increases, increase

ବୃଦ୍ଧି, ବୃଦ୍ଧି

D None of the above

ଉପରୋକ୍ତ ମଧ୍ୟରୁ କୌଣସିଟି ନୁହେଁ

Answer Given By Candidate: Not Attempted

Question ID: 501122

Topic Name: SECTION-II Science

Question: States of matter:

ପଦାର୍ଥର ସ୍ଥିତି:

- A are inter-convertible
ଆନ୍ତଃ-ରୂପାନ୍ତରୀୟ ଅଟେ
- B can be changed by changing temperature
ତାପମାତ୍ରା ପରିବର୍ତ୍ତନ କରି ବଦଳାଇ ଯାଇପାରିବ
- C can be changed by changing pressure
ଚାପ ପରିବର୍ତ୍ତନ କରି ବଦଳାଇ ଯାଇପାରିବ
- D All of the above
ଉପରୋକ୍ତ ମଧ୍ୟରୁ ସମସ୍ତ

Correct Answer

Answer Given By Candidate: D

Question ID: 501123

Topic Name: SECTION-II Science

Question: Which of the following is NOT water (H₂O)?

ନିମ୍ନଲିଖିତ ମଧ୍ୟରୁ କେଉଁଟି ଜଳ (H₂O) ନୁହେଁ?

- A Dry ice
ଶୁଖିଲା ବରଫ
- B Water vapour
ପାଣିର ବାଷ୍ପ
- C Steam
ବାଷ୍ପ
- D Rain
ବର୍ଷା

Correct Answer

Answer Given By Candidate: A

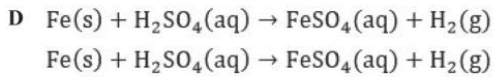
Question ID: 501124

Topic Name: SECTION-II Science

Question: Which one of the following reactions is a balanced reaction?

ନିମ୍ନଲିଖିତ ପ୍ରତିକ୍ରିୟା ମଧ୍ୟରୁ କେଉଁଟି ଏକ ସନ୍ତୁଳିତ ପ୍ରତିକ୍ରିୟା ଅଟେ?

- A $\text{Fe(s)} + \text{O}_2\text{(g)} \rightarrow \text{FeO}_2\text{(s)}$
 $\text{Fe(s)} + \text{O}_2\text{(g)} \rightarrow \text{FeO}_2\text{(s)}$
- B $\text{Fe(s)} + \text{I(s)} \rightarrow \text{FeI}_2\text{(s)}$
 $\text{Fe(s)} + \text{I(s)} \rightarrow \text{FeI}_2\text{(s)}$
- C $\text{Fe(s)} + \text{I(s)} \rightarrow \text{FeI(s)}$
 $\text{Fe(s)} + \text{I(s)} \rightarrow \text{FeI(s)}$



Correct Answer

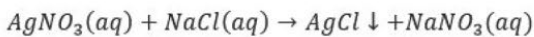
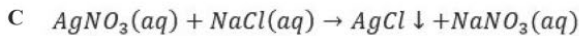
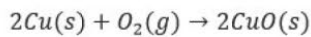
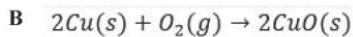
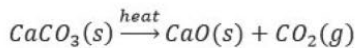
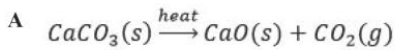
Answer Given By Candidate: Not Attempted

Question ID: 501125

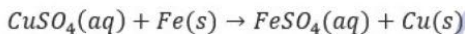
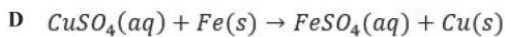
Topic Name: SECTION-II Science

Question: Which one of the following is a double displacement reaction?

ନିମ୍ନଲିଖିତ ପ୍ରତିକ୍ରିୟା ମଧ୍ୟରୁ କେଉଁଟି ଏକ ସ୍ଥାନାନ୍ତର ପ୍ରତିକ୍ରିୟା ଅଟେ?



Correct Answer



Answer Given By Candidate: C

Question ID: 501126

Topic Name: SECTION-II Science

Question: Force exerted by a spring that gets stretched by length 1.02 mm is due to:

1.02 mm ଦୈର୍ଘ୍ୟ ରେ ପ୍ରସାରିତ ଏକ ଝରଣା ଦ୍ୱାରା ପ୍ରୟୋଜିତ ବଳ କାରଣରୁ ହୁଏ:

A weak nuclear force

ଦୁର୍ବଳ ପରମାଣୁ ଶକ୍ତି

B gravitational force

ମାଧ୍ୟାକର୍ଷଣ ବଳ

C electromagnetic force

ଇଲେକ୍ଟ୍ରୋମ୍ୟାଗ୍ନେଟିକ ବଳ

Correct Answer

D strong nuclear force

ଶକ୍ତିଶାଳୀ ପରମାଣୁ ଶକ୍ତି

Answer Given By Candidate: Not Attempted

Question ID: 501127

Topic Name: SECTION-II Science

Question: Hydro power is a _____ source of energy

ଜଳ ବିଦ୍ୟୁତ୍ ହେଉଛି ଶକ୍ତିର ଏକ _____ ଉତ୍ସ

A renewable

ନବୀକରଣଯୋଗ୍ୟ

Correct Answer

B non-renewable

ଅଣ-ନବୀକରଣଯୋଗ୍ୟ

C fossil fuel

ଜୀବାଶ୍ମ ଉଦ୍ଭିଦ

D limited source

ସୀମିତ ଉତ୍ସ

Answer Given By Candidate: A

Question ID: 501128

Topic Name: SECTION-II Science

Question: A car travelled from point A to point B at an average speed of 50.0 km per hour and from point B to point A at an average speed of 60.0 km per hour. The average velocity \bar{v}_{avg} for the entire journey will be given by

ଗୋଟିଏ କାର୍ ଘଣ୍ଟା ପ୍ରତି ହାରାହାରି 50.0 km ବେଗରେ ପଏଣ୍ଟ୍ A ରୁ ପଏଣ୍ଟ୍ B ଏବଂ ପଏଣ୍ଟ୍ B ରୁ ପଏଣ୍ଟ୍ A ପର୍ଯ୍ୟନ୍ତ ଘଣ୍ଟା ପ୍ରତି ହାରାହାରି 60.0 km ବେଗରେ ଯାତ୍ରା କରିଥିଲା । ସମଗ୍ର ଯାତ୍ରା ପାଇଁ ହାରାହାରି ବେଗ \bar{v}_{avg} ବ୍ୟାଖ୍ୟା ପ୍ରଦାନ କରାଯିବ

A
$$\bar{v}_{avg} = \frac{50.0+60.0}{2}$$

$$\bar{v}_{avg} = \frac{50.0+60.0}{2}$$

B
$$\bar{v}_{avg} = \frac{2 \times 50.0 \times 60.0}{50.0 + 60.0}$$

$$\bar{v}_{avg} = \frac{2 \times 50.0 \times 60.0}{50.0 + 60.0}$$

C
$$\bar{v}_{avg} = \frac{50.0 \times 60.0}{50.0 + 60.0}$$

$$\bar{v}_{avg} = \frac{50.0 \times 60.0}{50.0 + 60.0}$$

D
$$\bar{v}_{avg} = 0$$

$$\bar{v}_{avg} = 0$$

Correct Answer

Answer Given By Candidate: Not Attempted

Question ID: 501129

Topic Name: SECTION-II Science

Question: _____ are a special kind of leucoplasts that store proteins in plant cells.

_____ ହେଉଛି ଏକ ବିଶେଷ ପ୍ରକାରର ଲିଉକୋପ୍ଲାଷ୍ଟ ଯାହା ଉଦ୍ଭିଦ କୋଷରେ ପ୍ରୋଟିନ୍ ସଂରକ୍ଷଣ କରିଥାଏ ।

A Aleuroplasts

Correct Answer

ଆଲେରୋପ୍ଲାଷ୍ଟ୍

B Amyloplasts
ଆମିଲୋପ୍ଲାଷ୍ଟ୍

C Elaioplasts
ଏଲାଇଓପ୍ଲାଷ୍ଟ୍

D Chromoplasts
କ୍ରୋମୋପ୍ଲାଷ୍ଟ୍

Answer Given By Candidate: **Not Attempted**

Question ID: 501130

Topic Name: SECTION-II Science

Question: Cells shrink when kept in _____ solution.

_____ ଦ୍ରବଣରେ ରଖାଗଲେ କୋଷଗୁଡ଼ିକ ସଂକୁଚିତ ହୋଇଯାଏ ।

A hypertonic
ଉଚ୍ଚ ରକ୍ତଚାପ

Correct Answer

B hypotonic
ହାଇପୋଟୋନିକ୍

C cold
ଥଣ୍ଡା

D hot
ଗରମ

Answer Given By Candidate: **Not Attempted**

Question ID: 501131

Topic Name: SECTION-II Science

Question: Wood is a:

କାଠ ହେଉଛି:

A Primary Phloem
ପ୍ରାଥମିକ ଫ୍ଲୋଏମ୍

B Secondary Xylem
ଦ୍ୱିତୀୟ ଜାଇଲେମ୍

Correct Answer

C Cortex
କୋରଟେକ୍ସ

D Primary Xylem
ପ୍ରାଥମିକ ଜାଇଲେମ୍

Answer Given By Candidate: **Not Attempted**

Question ID: 501132

Topic Name: SECTION-II Science

Question: 'Cuticle', the layer covering the epidermis, is absent in _____.

ଏପିଡର୍ମିସ୍ କୁ ଘୋଡ଼ାଇ ଥିବା ସ୍ତର 'କ୍ୟୁଟିକଲ୍', _____ ରେ ଅନୁପସ୍ଥିତ ।

A Stem

କାଣ୍ଡ

B Leaves

ପତ୍ର

C Branches

ଡାଳ

D Roots

ମୂଳ

Correct Answer

Answer Given By Candidate: Not Attempted

Question ID: 501133

Topic Name: SECTION-II Science

Question: Gymnosperms are also called 'naked seeded' because _____.

_____ କାରଣରୁ ଜିମ୍ନୋସ୍ପର୍ମ୍‌ସ୍‌କୁ 'ନକ୍ସ ବିହନ' ମଧ୍ୟ କୁହାଯାଏ ।

A Ovules have embryo sac

ଡିମ୍ବାଶୟରେ ଭ୍ରୂରଣ ଥିବା ଅଛି

B Ovules are not enclosed in an ovary

ଅଣ୍ଡାବାନ୍ଧ ଏକ ଡିମ୍ବାଶୟରେ ଆବଦ୍ଧ ନୁହେଁ

Correct Answer

C Zygote develops into sporophytes

ଯୁଗ୍ମକୋଷକ ଗୋରୋଫାଇଟ୍ ରେ ବିକଶିତ ହୁଏ

D Male and female cones are formed

ପୁରୁଷ ଏବଂ ମହିଳା କୋଣ ଯୁଗ୍ମ ହୁଏ

Answer Given By Candidate: Not Attempted

Question ID: 501134

Topic Name: SECTION-II Science

Question: The name 'Virus' which means venom or poisonous fluid was given by _____.

'ଭୂତାଣୁ' ଯାହାର ଅର୍ଥ ହେଉଛି ବିଷ ବା ବିଷାକ୍ତ ତରଳ _____ ଦ୍ୱାରା ଦିଆଯାଇଥିଲା ।

A W.M. Stanley

ଡବ୍ଲ୍ୟୁ.ଏମ୍. ଷ୍ଟାନଲି

B D.J. Ivanowsky

ଡି.ଜେ. ଇଭାନୋସ୍କି

Correct Answer

C M.W. Beijerinck

ଏମ୍.ଡବ୍ଲ୍ୟୁ. ବେଜେରିନେକ୍

D Aristotle

ଆରିଷ୍ଟୋଟଲ

Answer Given By Candidate: **Not Attempted**

Question ID: **501135**

Topic Name: SECTION-II Science

Question: Bacteria that take up 'Gram stain' are called _____.

ଯେଉଁ ଜୀବାଣୁ 'ଗ୍ରାମ ବାଗ' ଗ୍ରହଣ କରନ୍ତି ସେମାନଙ୍କୁ ____ କୁହାଯାଏ ।

A Gram Positive

ଗ୍ରାମ୍ ପଜିଟିଭ୍

Correct Answer

B Gram Neutral

ଗ୍ରାମ ନିରପେକ୍ଷ

C Gram Negative

ଗ୍ରାମ୍ ନେଗେଟିଭ୍

D Gram Charged

ଗ୍ରାମ୍ ଚାର୍ଜ୍

Answer Given By Candidate: **Not Attempted**

ଓଡ଼ିଶାର ସମସ୍ତ ପୁରୁଷ ବର୍ଷର ପ୍ରଶ୍ନ ଉତ୍ତର ପାଇଁ

Download “Tech Of World” App

WtsApp/Call- 8596976190

Join Us-

