

COMBO - ଓଡ଼ିଶା
29,000- MCQ
ପୂର୍ବ ବର୍ଷ ପ୍ରଶ୍ନ
 ପୂର୍ବ 5 ବର୍ଷର OSSSC, OSSC, OPSC, ପୋଲିସ, CT, B.ED, ଅନ୍ୟ ସବୁ ପ୍ରଶ୍ନ
 GK, ODIA, ENGLISH, , MATH, COMPUTER, Reasoning, Pedagogy

GK- ଓଡ଼ିଶାର
ସମସ୍ତ ପୂର୍ବ ବର୍ଷ ପ୍ରଶ୍ନ
ଓଡ଼ିଆ ଓ ଇଂରାଜୀ ରେ
10,800- MCQ
E-BOOK- PDF
 OSSSC , OSSC , OPSC, Police SI /Constable, PEO, RI, Battalion, Fireman, B.ED, JT, RHT, CT, OAVS, OSSTET, OTET & Other

ଓଡ଼ିଆ ବ୍ୟାକରଣ
ସମସ୍ତ ପୂର୍ବ ବର୍ଷ ପ୍ରଶ୍ନ
4,246- MCQ
75- TEST
E-BOOK- PDF
 OSSSC, OSSC, OPSC, POLICE, B.ED, JT, RHT, CT, OAVS, OSSTET, OTET, OSSSC (PEO, RI, ARI & Other) & Other

ENGLISH- ଓଡ଼ିଶାର
ସମସ୍ତ ପୂର୍ବ ବର୍ଷ ପ୍ରଶ୍ନ
4,300- MCQ
E-BOOK- PDF
 OSSSC , OSSC , OPSC, Police SI /Constable, PEO, RI, Battalion, Fireman, B.ED, JT, RHT, CT, OAVS, OSSTET, OTET & Other

କୋମ୍ପ୍ୟୁଟର- ଓଡ଼ିଶାର
ସମସ୍ତ ପୂର୍ବ ବର୍ଷ ପ୍ରଶ୍ନ
ଓଡ଼ିଆ ଓ ଇଂରାଜୀ ରେ
E-BOOK- PDF
1,900- MCQ
 OSSSC, OSSC , OPSC, Police SI & Constable, Battalion, PEO, RI, AMIN, JT, RHT & Other Exams

MATH- ଓଡ଼ିଶାର
ସମସ୍ତ ପୂର୍ବ ବର୍ଷ ପ୍ରଶ୍ନ
ଓଡ଼ିଆ ଓ ଇଂରାଜୀ ରେ
3,000- MCQ
E-BOOK- PDF
 OSSSC , OSSC , OPSC, Police SI /Constable, PEO, RI, Battalion, Fireman, B.ED, JT, RHT, CT, OAVS, OSSTET, OTET & Other

PEDAGOGY ଓଡ଼ିଶାର
TEACHING APTITUDE
ପୂର୍ବ ବର୍ଷ ପ୍ରଶ୍ନ
ଓଡ଼ିଆ ଓ ଇଂରାଜୀ ରେ
1,900- MCQ
 B.ED, RHT, CT, JT, OAVS, OSSTET, OTET & Other

[Click Here](#)

Tech of World

HOME VIDEOS PLAYLISTS COMMUNITY

ଆମ Channel ରେ ଦେଖନ୍ତୁ Video
 ASO ଓଡ଼ିଶା ପୋଷ୍ଟାଲ CT ଓ B.Ed
 ଓଡ଼ିଶା ପୋଲିସ SSC GD Railway

Tech of World
 SUBSCRIBE
 315K subscribers • 928 videos
 Hello ବାଙ୍ଗ ମାତେ !! ଆମର ଏହି Channel ରେ ସବୁ ପ୍ରକାରର Educational Video
 Free ରେ ଯେଉଁପରିକି ଯେଉଁ ଡେଭିଲକରି କଲେ ଏହି "Tech Of World" Channel ହୁ ...

+2 କିମ୍ବା +3 ପଢ଼ିବା ପରେ
କେମିତି ଜଣେ ଶିକ୍ଷକ
ହେଇପାରିବେ ?
CT ଓ B.Ed ପରେ କଣ ?

How To Become A Teacher After +2 Or +3 In Odisha ? How To Get A Teacher Job In Odisha ?
 Tech of World · 176K views · 3 years ago

Home Shorts Subscriptions Library

[Click Here](#)

Tech Of World- (Odisha Exam CT)

Uninstall Open

Your Review

sujit kumar naik ★★★★★ 6/29/21

Edit your review

Developer contact

About this app

Tech Of World (Odisha Exam) Provides Mock Test & E-Books For Different Exams

Education

3.8 ★ 422 reviews 422 reviews Rated for 3+ 50K+ Downlo.

TECH OF WORLD

Mock Test

[Click Here](#)

Tech Of World 4.1K subscribers

ASO Englih 2022 By... 8.7 MB PDF

ASO General Knowledge 2022... 4.9 MB PDF

ASO Math 2022 By Techofworld.in.pdf 4.6 MB PDF

ASO Odia Language 2022 By... 2.9 MB PDF

ASO Reasoning 2022 By... 4.6 MB PDF

3 comments

Broadcast

[Click Here](#)



T.E & SCERT Exam 2023
(CANDIDATE RESPONSE SHEET)

Roll No

App No

Name

Paper/Subject D.El.Ed(Santali)

Exam Date 30 May 2023

Exam Slot 1

Passage:

The questions are based on a short passage. Read the passage below to answer the questions. Choose the correct answer from the four listed choices.

India tested its Agni-V intercontinental ballistic missile (ICBM) in its final operational configuration from Wheeler Island off Odisha on Monday, paving the way for its eventual induction into the Strategic Forces Command (SFC) after user-trials.

While the 17-metre tall Agni-V was tested in an "open configuration" in April 2012 and September 2013, the third test in January 2015 saw it being fired from a hermetically sealed canister mounted on a Tatra launcher truck. The missile's canister-launch version makes it even deadlier since it gives the armed forces requisite flexibility to swiftly transport and fire the missile from anywhere they want.

Once the Agni-V is inducted, India will join the super exclusive club of countries with ICBMs (missiles with a range of over 5,000-5,500km) alongside the US, Russia, China, France and the UK.

The Indian defence establishment believes the Agni-V is sufficient to take care of existing threat perceptions. As earlier reported by TOI, DRDO has also done some work on developing "manoeuvring warheads or intelligent re-entry vehicles" to defeat enemy ballistic missile defence systems, as well as MIRVs (multiple independently targetable re-entry vehicles) for the Agni missiles. An MIRV payload basically means a single missile is capable of carrying several nuclear warheads, each programmed to hit different targets. Meanwhile, the President of India Pranab Mukherjee has congratulated DRDO on the successful test-firing of intercontinental ballistic missile - 'Agni-V'.

Question ID:1011

Topic Name:SECTION-I English Language

Question:

How many countries, according to the passage, other than India have missiles having range as Agni-V does?

- A Three
- B Four
- C Five **Correct Answer**
- D More than five

Answer Given By Candidate:Not Attempted

Question ID:1012

Topic Name:SECTION-I English Language

Question: What according to the passage is the role of "intelligent re-entry vehicles"?

- A To defeat enemy ballistic missile defence systems Correct Answer
- B To save fuel cost during the journey
- C To reduce the weight of the payload
- D To carry more war-heads to meet threat perceptions.

Answer Given By Candidate:Not Attempted

Question ID:1013

Topic Name:SECTION-I English Language

Question: What according to the passage makes the missile 'even deadlier'?

- A Not more than five countries in the world have such advance missiles at present
- B It can reach up to remotest part our chief adversaries, i.e., China and Pakistan
- C Missile's canister-launch version makes it flexible to be swiftly transported and to be fire from anywhere Correct Answer
- D None of the above

Answer Given By Candidate:Not Attempted

Question ID:1014

Topic Name:SECTION-I English Language

Question: What is the synonym of "Abstain"?

- A Refrain Correct Answer
- B Consume
- C Take in
- D Devour

Answer Given By Candidate:A

Question ID:1015

Topic Name:SECTION-I English Language

Question: Select the correct synonym of "BEWILDERED".

- A Aware
- B Clear
- C Baffled Correct Answer
- D Calm

Answer Given By Candidate:Not Attempted

Question ID:1016

Topic Name:SECTION-I English Language

Question: What is the Antonym of "Terrible"?

- A Awful
- B Fearsome
- C Dreadful
- D Delectable Correct Answer

Answer Given By Candidate:D

Question ID:1017

Topic Name:SECTION-I English Language

Question: Find the meaning of the idiom/phrase: "Apple Pie Order"

- A In random order
- B Related to fruits packing
- C Related to dry fruits packing
- D In perfect order Correct Answer

Answer Given By Candidate:C

Question ID:1018

Topic Name:SECTION-I English Language

Question: Choose the correct meaning of the idiom, "Roll up one's sleeves".

- A Keep something secretive
- B Prepare to work or fight Correct Answer
- C Treat someone as a celebrity
- D Speak out the thing that is worrying one

Answer Given By Candidate:A

Question ID:1019

Topic Name:SECTION-I English Language

Question: Insert the correct article in the blank given:
Are you ___ engineer from the gas company?

- A an
- B the Correct Answer
- C a
- D No Article Required

Answer Given By Candidate:A

Question ID:10110

Topic Name:SECTION-I English Language

Question: Fill in the blank with the correct preposition.

Will you play cricket _____ me?

- A in
- B on
- C at
- D with

Correct Answer

Answer Given By Candidate:Not Attempted

Question ID:10111

Topic Name:SECTION-I Education and General Awareness

Question: Navodaya Schools were set up as:

ନବୋଦୟ ବିଦ୍ୟାଳୟଗୁଡ଼ିକ ଏହିପରି ସ୍ଥାପିତ ହୋଇଥିଲା:

- A Residential Schools
ଆବାସିକ ବିଦ୍ୟାଳୟ
- B Day schools
ଦିନକାଳୀନ ବିଦ୍ୟାଳୟ
- C Evening schools
ସନ୍ଧ୍ୟାକାଳୀନ ବିଦ୍ୟାଳୟ
- D Part-time schools
ସ୍ୱଳ୍ପକାଳୀନ-ସମୟ ବିଦ୍ୟାଳୟ

Correct Answer

Answer Given By Candidate:A

Question ID:10112

Topic Name:SECTION-I Education and General Awareness

Question: PM-POSHAN scheme is primarily meant to:

PM-POSHAN (ପିଏମ୍ ପୋଷଣ) ଯୋଜନା ମୁଖ୍ୟତଃ ନିମ୍ନଲିଖିତ ଅଟେ:

- A Provide free school uniforms in Government schools
ସରକାରୀ ବିଦ୍ୟାଳୟରେ ମାଗଣା ସ୍କୁଲ ଯୁନିଫର୍ମ ଯୋଗାଇବା
- B Provide free text books in Government schools
ସରକାରୀ ବିଦ୍ୟାଳୟରେ ମାଗଣା ପାଠ୍ୟ ପୁସ୍ତକ ଯୋଗାଇବା
- C Ensure mid-day meals in Government schools
ସରକାରୀ ବିଦ୍ୟାଳୟରେ ମଧ୍ୟାହ୍ନ ଭୋଜନ ସୁନିଶ୍ଚିତ କରିବା
- D Ensure transportation to reach Government schools
ସରକାରୀ ବିଦ୍ୟାଳୟରେ ପହଞ୍ଚିବା ପାଇଁ ଯାତାୟତ ପରିବହନ ସୁନିଶ୍ଚିତ କରନ୍ତୁ

Correct Answer

Answer Given By Candidate:D

Question ID:10113

Topic Name:SECTION-I Education and General Awareness

Question: What converts the alternating current (AC) into direct current (DC)?

ଅଲଟରନେଟିଂ କରେଣ୍ଟ (AC) କୁ ସିଧାସଳଖ କରେଣ୍ଟ (DC) ରେ କିଏ ପରିଣତ କରେ?

A Rectifier
ରେକ୍ଟିଫାଇର

Correct Answer

B Transformer
ଟ୍ରାନ୍ସଫର୍ମର୍C Battery
ବ୍ୟାଟେରୀD Dynamo
ଡାଇନାମୋ

Answer Given By Candidate:A

Question ID:10114

Topic Name:SECTION-I Education and General Awareness

Question: What is "Sahityotsav"?

'ସହିତ୍ୟୋତ୍ସବ' କ'ଣ?

A Festival of authors
ଲେଖକଙ୍କ ଉତ୍ସବB Festival of writing
ଲେଖିବା ପାଇଁ ଉତ୍ସବC Tribal writers meet
ଆଦିବାସୀ ଲେଖକ ସମ୍ମିଳନୀD Festival of letters
ଚିଠିର ଉତ୍ସବ

Correct Answer

Answer Given By Candidate:C

Question ID:10115

Topic Name:SECTION-I Education and General Awareness

Question: Which body authorizes nuclear retaliatory attack in India?

କେଉଁ ସଂସ୍ଥା ଭାରତରେ ପରମାଣୁ ପ୍ରତିଶୋଧମୂଳକ ଆକ୍ରମଣକୁ ଅନୁମତି ଦେଇଥାଏ?

A Ministry of Defense
ପ୍ରତିରକ୍ଷା ମନ୍ତ୍ରାଳୟB Nuclear Command Authority
ପରମାଣୁ ସମାଦେଶ ପ୍ରାଧିକରଣ

Correct Answer

C Nuclear Wing of PMO

PMO ର ପରମାଣୁ ଶାଖା

D The President

ରାଷ୍ଟ୍ରପତି

Answer Given By Candidate:C

Question ID:10116

Topic Name:SECTION-I Reasoning

Question:

Read the statement given below and select the best assumptions from the options given

Red haired people love riding bikes.

Assumptions:

- I. All people love riding bikes.
- II. Red haired people only love riding bikes.

ନିମ୍ନରେ ଦିଆଯାଇଥିବା ବିବୃତି ପଢନ୍ତୁ ଏବଂ ଦିଆଯାଇଥିବା ବିକଳ୍ପଗୁଡ଼ିକ ମଧ୍ୟରୁ ସର୍ବୋତ୍ତମ ଅନୁମାନ ଚୟନ କରନ୍ତୁ

ନାଲି କେଶ ଥିବା ଲୋକମାନେ ବାଇକ୍ ଚଳାଇବାକୁ ଭଲ ପାଆନ୍ତି।

ଅନୁମାନ:

- I. ସମସ୍ତ ଲୋକ ବାଇକ୍ ଚଳାଇବାକୁ ଭଲ ପାଆନ୍ତି।
- II. ନାଲି କେଶ ଥିବା ଲୋକମାନେ କେବଳ ବାଇକ୍ ଚଳାଇବାକୁ ଭଲ ପାଆନ୍ତି।

A Only assumption I is implicit

କେବଳ ଧାରଣା I ଅନ୍ତର୍ନିହିତ ଅଟେ

B Only assumption II is implicit

କେବଳ ଧାରଣା II ଅନ୍ତର୍ନିହିତ ଅଟେ

C Either I or II is implicit

I କିମ୍ବା II ଅନ୍ତର୍ନିହିତ ଅଟେ

D Neither I or II is implicit

I ନୁହେଁ କିମ୍ବା II ଅନ୍ତର୍ନିହିତ ନୁହେଁ

Correct Answer

Answer Given By Candidate:C

Question ID:10117

Topic Name:SECTION-I Reasoning

Question: In a certain language, 'HARMONY' is written as 'FCPOMPW' and 'MELODY' is written as 'KGJQBA', then how will 'RHYTHM' be written?

ଏକ ନିର୍ଦ୍ଦିଷ୍ଟ ଭାଷାରେ 'ହାର୍ମୋନି' 'FCPOMPW' ଏବଂ 'ମେଲୋଡି' 'KGJQBA' ଭାବରେ ଲେଖାଯାଇଛି, ତେବେ 'ରିଦିମ୍' କେମିତି ଲେଖାଯିବ?

- A PJWVFO Correct Answer
PJWVFO
- B PFWRFO
PFWRFO
- C PFWVJK
PFWVJK
- D PJVWFO
PJVWFO

Answer Given By Candidate: A

Question ID: 10118

Topic Name: SECTION-I Reasoning

Question: In certain language, TOGETHER is coded as OTEGTHRE, how is VALIDATE coded in that code?

ନିର୍ଦ୍ଦିଷ୍ଟ ଭାଷାରେ, ଟୁଗେଥର ଭାବରେ ସଜେଡନ କରାଯାଇଛି, ସେହି ସଜେଡନରେ କିପରି ସଜେଡ କରାଯାଏ?

- A AVILADET
AVILADET
- B AVILDAET Correct Answer
AVILDAET
- C AVILADTE
AVILADTE
- D VADALITE
VADALITE

Answer Given By Candidate: B

Question ID: 10119

Topic Name: SECTION-I Reasoning

Question: What should come at the place of question mark (?) in the following number series?

71, 55, 46, 42, ?

ନିମ୍ନଲିଖିତ ସଂଖ୍ୟା ଶ୍ରେଣୀରେ ପ୍ରଶ୍ନଚିହ୍ନ (?) ସ୍ଥାନରେ କ'ଣ ଆସିବା ଉଚିତ୍?

71, 55, 46, 42?

- A 40
40

B 41
41
Correct Answer

C 39
39

D 38
38

Answer Given By Candidate:A

Question ID:10120

Topic Name:SECTION-I Reasoning

Question: What should come at the place of question mark (?) in the following letter series?

Q, M, I, E, ?

ନିମ୍ନଲିଖିତ ଅକ୍ଷର ଶ୍ରେଣୀରେ ପ୍ରଶ୍ନଚିହ୍ନ (?) ସ୍ଥାନରେ କ'ଣ ଆସିବା ଉଚିତ?

Q, M, I, E, ?

A C
C

B B
B

C A
A
Correct Answer

D Z
Z

Answer Given By Candidate:C

Question ID:10121

Topic Name:SECTION-I Teaching Aptitude

Question:A teacher can enjoy teaching as a profession when he/she:

ଜଣେ ଶିକ୍ଷକ ଅଧ୍ୟାପନାକୁ ଏକ ବୃତ୍ତି ଭାବରେ ଉପଭୋଗ କରିପାରିବେ ଯେତେବେଳେ ସେ:

A Seeks respect from students
ଛାତ୍ରଛାତ୍ରୀଙ୍କ ଠାରୁ ସମ୍ମାନ ପାଇବେ
Correct Answer

B Ensures strict discipline in the class
ଶ୍ରେଣୀରେ କଡ଼ା ଶୃଙ୍ଖଳା ସୁନିଶ୍ଚିତ କରନ୍ତି

C Has better qualification than his/her peers
ତାଙ୍କ (ମହିଳା/ପୁରୁଷ) ସାଥୀମାନଙ୍କ ତୁଳନାରେ ଭଲ ଯୋଗ୍ୟତା ରହିଛି

D Is close to the Principal/Higher ups
ପ୍ରିନ୍ସିପାଲ/ଉଚ୍ଚପଦସ୍ଥ ଅଧିକାରୀଙ୍କ ନିକଟତର ଅଟନ୍ତି

Answer Given By Candidate:D

Question ID:10122

Topic Name:SECTION-I Teaching Aptitude

Question: Yoga is popular but it may not be suitable for everyone. Before you sign yourself up for a yoga class, you need to examine what it is you want from your fitness routine. If you're looking for a high-energy, fast-paced aerobic workout, a yoga class might not be your best choice.

This paragraph best supports the statement that:

ଯୋଗ ଲୋକପ୍ରିୟ କିନ୍ତୁ ଏହା ସମସ୍ତଙ୍କ ପାଇଁ ଉପଯୁକ୍ତ ହୋଇନପାରେ । ଆପଣ ଯୋଗ କ୍ଲାସ ପାଇଁ ନିଜକୁ ସାଇନ୍ ଅପ୍ କରିବା ପୂର୍ବରୁ, ଆପଣ କୁ ଆପଣଙ୍କ ଫିଟନେସ୍ ରୁଟିନ୍ ରୁ ଆପଣ କ'ଣ ଚାହୁଁଛନ୍ତି ତାହା ଯାଞ୍ଚ କରିବା ଆବଶ୍ୟକ । ଯଦି ଆପଣ ଏକ ଉଚ୍ଚ ଶକ୍ତି, ଦ୍ରୁତ ଗତିର ଏରୋବିକ୍ ବ୍ୟାୟାମ ଖୋଜୁଛନ୍ତି, ତେବେ ଯୋଗ କ୍ଲାସ ଆପଣଙ୍କର ସର୍ବୋତ୍ତମ ପସନ୍ଦ ହୋଇନପାରେ । ଏହି ଅନୁକ୍ରେମ ଏହି ବିବୃତିକୁ ସର୍ବୋତ୍ତମ ସମର୍ଥନ କରେ ଯେ:

A yoga is more popular than high-impact aerobics.
ଉଚ୍ଚ ପ୍ରଭାବୀ ଏରୋବିକ୍ସ ଅପେକ୍ଷା ଯୋଗ ଅଧିକ ଲୋକପ୍ରିୟ ।

B You need to check on your fitness needs and routines.
ଆପଣଙ୍କୁ ଆପଣଙ୍କ ଫିଟନେସ୍ ଆବଶ୍ୟକତା ଏବଂ ରୁଟିନ୍ ଯାଞ୍ଚ କରିବା ଆବଶ୍ୟକ ।

Correct Answer

C Yoga is suitable for everyone
ଯୋଗ ସମସ୍ତଙ୍କ ପାଇଁ ଉପଯୁକ୍ତ

D yoga benefits your body and mind
ଯୋଗ ଆପଣଙ୍କ ଶରୀର ଓ ମନକୁ ଫାଇଦା ଦେଇଥାଏ

Answer Given By Candidate:A

Question ID:10123

Topic Name:SECTION-I Teaching Aptitude

Question:Models, charts, film strip, projectors are:

ମଡେଲ, ଚାର୍ଟ, ଫିଲ୍ମ ଷ୍ଟ୍ରିପ୍, ପ୍ରୋଜେକ୍ଟରଗୁଡ଼ିକ ହେଲା:

A Intellectual Aids
ବୌଦ୍ଧିକ ସହାୟତା

B Intelligent Aids
ବୁଦ୍ଧିମାନ ସହାୟତା

C Instructional Aids
ଶିକ୍ଷାଗତ ସହାୟତା

Correct Answer

D Tangible Aids
ଆତ୍ମଦୃଶ୍ୟ ସହାୟତା

Answer Given By Candidate:D

Question ID:10124

Topic Name:SECTION-I Teaching Aptitude

Question:The primary responsibility for the teacher's adjustment lies with:

ଶିକ୍ଷକଙ୍କ ଆଡଜଷ୍ଟମେଣ୍ଟର ପ୍ରାଥମିକ ଦାୟିତ୍ୱ ହେଉଛି:

A The Friends
ବନ୍ଧୁ

B The head of Department

ବିଭାଗ ମୁଖ୍ୟ

C The teacher himself

ଶିକ୍ଷକ ନିଜେ

Correct Answer

D The School

ବିଦ୍ୟାଳୟ

Answer Given By Candidate:D

Question ID:10125

Topic Name:SECTION-I Teaching Aptitude

Question: Which of the following information are important to motivate the students for studies?

ନିମ୍ନଲିଖିତ ମଧ୍ୟରୁ କେଉଁ ସୂଚନା ଛାତ୍ରମାନଙ୍କୁ ଅଧ୍ୟୟନ ପାଇଁ ପ୍ରେରିତ କରିବା ପାଇଁ ଗୁରୁତ୍ୱପୂର୍ଣ୍ଣ?

A Learning style

ଶିକ୍ଷଣ ଶୈଳୀ

B Teaching Strategies

ଶିକ୍ଷାଦାନ ରଣନୀତି

C Socio-cultural background

ସାମାଜିକ-ସାଂସ୍କୃତିକ ପୃଷ୍ଠଭୂମି

D All of the above

ଉପରୋକ୍ତ ସମସ୍ତ

Correct Answer

Answer Given By Candidate:B

Question ID:10126

Topic Name:SECTION-I Teaching Aptitude

Question: To make learning effective, a goal must be meaningful in terms of:

ଶିକ୍ଷଣକୁ ପ୍ରଭାବଶାଳୀ କରିବା ପାଇଁ, ଏକ ଲକ୍ଷ୍ୟ ଏହି ଦୃଷ୍ଟିରୁ ଅର୍ଥପୂର୍ଣ୍ଣ ହେବା ଆବଶ୍ୟକ:

A Objectives of the curriculum

ପାଠ୍ୟକ୍ରମର ଉଦ୍ଦେଶ୍ୟ

B Intellectual ideas

ବୌଦ୍ଧିକ ଚିନ୍ତାଧାରା

C Standards of others

ଅନ୍ୟମାନଙ୍କ ମାନାଙ୍କ

D The needs and purposes of students

ଛାତ୍ରଛାତ୍ରୀଙ୍କ ଆବଶ୍ୟକତା ଓ ଉଦ୍ଦେଶ୍ୟ

Correct Answer

Answer Given By Candidate:A

Question ID:10127

Topic Name:SECTION-I Teaching Aptitude

Question:By 'agent' we mean a person or thing that acts or exerts power. Hence

'ଏଜେଣ୍ଟ' ଭାବରେ ଆମେ ଜଣେ ବ୍ୟକ୍ତି ବା ଜିନିଷକୁ ବୁଝାଇଥାଉ ଯିଏ କାର୍ଯ୍ୟ କରେ କିମ୍ବା କ୍ଷମତା ପ୍ରୟୋଗ କରେ । ତେଣୁ

A agencies of education are those factors which exercise an educational influence on the child.

ଶିକ୍ଷାର ଏଜେଣ୍ଟ ହେଉଛି ସେହି କାରଣ ଯାହା ପିଲାଉପରେ ଶିକ୍ଷାଗତ ପ୍ରଭାବ ପକାଇଥାଏ ।

Correct Answer

B agencies of education are those factors which is a non influencer.

ଶିକ୍ଷାର ଏଜେଣ୍ଟ ହେଉଛି ସେହି କାରକ ଯାହା ଏକ ଅଣ-ପ୍ରଭାବଶାଳୀ ଅଟେ ।

C agencies of education are those factors which has a negative influence on the learners growth.

ଶିକ୍ଷାର ଏଜେଣ୍ଟ ହେଉଛି ସେହି କାରକ ଯାହା ଶିକ୍ଷାର୍ଥୀଙ୍କ ଅଭିବୃଦ୍ଧି ଉପରେ ନକାରାତ୍ମକ ପ୍ରଭାବ ପକାଇଥାଏ ।

D agencies of education are those factors which is not mandatory.

ଶିକ୍ଷାର ଏଜେଣ୍ଟଗୁଡ଼ିକ ହେଉଛି ସେହି କାରକ ଯାହା ବାଧ୍ୟତାମୂଳକ ନୁହେଁ ।

Answer Given By Candidate:A

Question ID:10128

Topic Name:SECTION-I Teaching Aptitude

Question: Students do not monitor and judge their level of understanding of concepts or regulate their learning effectively. Identify the best strategy to improve.

ଛାତ୍ରମାନେ ଧାରଣାଗୁଡ଼ିକର ବୁଝିବାର ସ୍ତରକୁ ନିରୀକ୍ଷଣ କରନ୍ତି ନାହିଁ ଏବଂ ବିଚାର କରନ୍ତି ନାହିଁ କିମ୍ବା ସେମାନଙ୍କ ଶିକ୍ଷଣକୁ ପ୍ରଭାବଶାଳୀ ଭାବରେ ନିୟନ୍ତ୍ରଣ କରନ୍ତି ନାହିଁ । ଉନ୍ନତି ପାଇଁ ସର୍ବୋତ୍ତମ ରଣନୀତି ଚିହ୍ନଟ କରନ୍ତୁ ।

A SWOT (Strength, Weakness, Opportunity and threat) Analysis

SWOT (ଶକ୍ତି, ଦୁର୍ବଳତା, ସୁଯୋଗ ଏବଂ ବିପଦ) ବିଶ୍ଳେଷଣ

B Self-Awareness
ଆତ୍ମ-ସଚେତନତା

C Meta Cognition
ମେଟା ଜ୍ଞାନ

D All of the above
ଉପରୋକ୍ତ ସମସ୍ତ

Correct Answer

Answer Given By Candidate:D

Question ID:10129

Topic Name:SECTION-I Teaching Aptitude

Question: Students have a certain level of fear about a topic or interpret the teacher's behavior as being unsupportive of their learning, resulting in some degree of mistrust. The correction of this act can be by:

ଛାତ୍ରଛାତ୍ରୀମାନେ କୌଣସି ବିଷୟକୁ ନେଇ ଏକ ନିର୍ଦ୍ଦିଷ୍ଟ ସ୍ତରର ଭୟ ରଖନ୍ତି କିମ୍ବା ଶିକ୍ଷକଙ୍କ ଆଚରଣକୁ ସେମାନଙ୍କ ଶିକ୍ଷଣ ପ୍ରତି ଅସମର୍ଥ ବୋଲି ବ୍ୟାଖ୍ୟା କରନ୍ତି, ଯାହାଫଳରେ କିଛି ମାତ୍ରାରେ ଅବିଶ୍ୱାସ ସୃଷ୍ଟି ହୁଏ । ଏହି ଆଇନର ସଂଶୋଧନ ଏହା ଦ୍ୱାରା ହୋଇପାରେ:

- A Giving constructive Feedback
ଗଠନମୂଳକ ମତାମତ ଦେବା Correct Answer
- B Listing few mistakes
କିଛି ତ୍ରୁଟି ଚାଲିକାଉଳ କରିବା
- C Adding remarks
ମନ୍ତବ୍ୟ ଯୋଡ଼ିବା
- D Comparing with their peer work
ସେମାନଙ୍କ ସହକର୍ମୀଙ୍କ କାର୍ଯ୍ୟ ସହିତ ତୁଳନା କରିବା

Answer Given By Candidate:A

Question ID:10130

Topic Name:SECTION-I Teaching Aptitude

Question: Teaching learning materials should be selected according to:

ଶିକ୍ଷା ଶିକ୍ଷଣ ସାମଗ୍ରୀ ସେହି ଅନୁଯାୟୀ ଚୟନ କରାଯିବା ଉଚିତ୍:

- A Their availability
ସେମାନଙ୍କର ଉପଲବ୍ଧତା
- B The objectives of teaching
ଶିକ୍ଷାଦାନର ଉଦ୍ଦେଶ୍ୟ Correct Answer
- C Their cost effectiveness
ସେମାନଙ୍କର ମୂଲ୍ୟ ଫଳପ୍ରସ୍ତୁତି
- D Student's Interest
ଛାତ୍ରଛାତ୍ରୀଙ୍କ ଆଗ୍ରହ

Answer Given By Candidate:C

Question ID:10176

Topic Name:SECTION-II Santhali Language

Question: ଚଞ୍ଚି.କ୍ଷୁ ଓଞ୍ଚି.ଢ଼ ଠଞ୍ଚି.ଞ୍ଚି ଠଞ୍ଚି.ଞ୍ଚି ଠଞ୍ଚି.ଞ୍ଚି ଠଞ୍ଚି.ଞ୍ଚି ଠଞ୍ଚି.ଞ୍ଚି
ଠଞ୍ଚି.ଞ୍ଚି ଠଞ୍ଚି.ଞ୍ଚି ଠଞ୍ଚି.ଞ୍ଚି

- A ଞ.ମ.ମ. ଞ.ମ.ମ. Correct Answer
- B ଠ.କ.କ. ଠ.କ.କ.
- C ଠ.କ.କ. ଠ.କ.କ.
- D ଠ.କ.କ. ଠ.କ.କ.

B 479

C 72479

D 79

Answer Given By Candidate: **B**

Question ID:10182

Topic Name:SECTION-II Santhali Language

[illegible]

A W3

B ३३

C  Correct Answer

D $\omega\theta\eta$

Answer Given By Candidate: **B**

Question ID:10183

Topic Name:SECTION-II Santhali Language

Question: **ՈՆԵՂ ԴՆՅՈՒՆ, ՆՇՆԵՂԵ ԿԱԳ ԿՇԷՇՈ ԴՆՅՈՒՆ, ԳԻ ԺԵՅՈՒՆ**

A $\mathbb{Z}\mathbb{Z}\mathbb{W}\mathbb{Z}\mathbb{P}$

B 108,2

C ଘଟଣା.୧ Correct Answer

D 182000

Answer Given By Candidate: **A**

Question ID:10184

Topic Name:SECTION-II Santhali Language

Topic Name: SECTION - II (Sinhala Language)
Question: 474 42220 නිවැරදි නි.27. දුම ඵභනි භව 420නිවැරදි
භනිවන?

A. ධනාත් නිෂ්පාදන, එම බැරණිද පැවැත්ම පැවැත්ම
මනවත්

B. Լսնալիս՝ չի ճշտ. եթ արձանի ԿԶԶԶԶ ԿԶԶ ԶԶ
Օժնաճճճ

Correct Answer

C. ධනාත් නිෂ්පාදන, හිමි බැඳුණු ගැටලු හඳුනා, මනවයන්

D. පාඨකයාගේ නම, ලිපිනය, වැඩ, ආදිය පිළිබඳව ප්‍රශ්න කරනු ලබන ප්‍රශ්න

Answer Given By Candidate: **B**

Question ID:10185

Topic Name:SECTION-II Santhali Language

Question: **ඉබ් නි. 17, 22 සහ 26 හි පවතින, නි. 17, 22 ට වඩා වෙනස්වන?**

A ୫୩୨୨

B 000000

c OƏp

D ကမ္ဘာပေါ်တွင် **Correct Answer**

Answer Given By Candidate: **A**

Question ID:10186

Topic Name:SECTION-II Santhali Language

Question: ୧୩୧୭୧୨ ଓ ୧୩୧୭୧୩ ଉପରେ ଉପରୋକ୍ତ ଉପାଦାନ ଉପରେ କିପରି ପ୍ରତିକ୍ରିୟା କରିବେ?

A ከግሪግ

B 5954

C 95254 Correct Answer

D G5E5E

Answer Given By Candidate: **A**

Question ID:10187

Topic Name:SECTION-II Santhali Language

Question: ԿԵՂ ԳԾ ԺԵՆ ՄՈՒՆԱԼ ԵՆ. ՆԱԼ ԵՆ. ԱՅՈՒՆ. ԵՆԵՆ?

A 95E5U

B ከጎረቤት

C G5E5E

D 5954 Correct Answer

Answer Given By Candidate: A

Question ID:10188

Topic Name:SECTION-II Santhali Language

Question: **ଫୁଲ, ଥା ଫୁଲ ଯେଉଁ ଲୁଗା, ଲାଗି ଯାଏ, ବୋଲେ?**

A 95E54

B G5E5E

C ԵՊԻԴԵՐՄԱ **Correct Answer**

D 5954

Answer Given By Candidate: **B**

Question ID:10189

Topic Name:SECTION-II Santhali Language

Question: 2420 ଡ଼ର ଚରଣ ପଣ, ନୀଳ ନିଧି, ଚରଣ?

A **ᐅᐅᐅᐅ** **Correct Answer**

B 95E54

C 5954

D ከጋራው ጋር

Answer Given By Candidate: **B**

Question ID:10190

Topic Name:SECTION-II Santhali Language

Question: Էլեմենտը և ֆունկցիոնալ օպերացիան ԳԱՆՈՒՄԱՆ ԵՐԱՆՈՒՄԻ ՆԱԽԵՐԱՐՈՒՄԸ ԵՎ ԴՐԱՆՈՒՄԻ ԿԱՐԳԱՆ ԿԱՆՈՒՆՈՒՄԸ:

A 2022 Correct Answer

- B ୮୯୭.୦
C ୮୭୮୮
D ୦୯୯୯୦

Answer Given By Candidate: B

Question ID: 10191

Topic Name: SECTION-II Mathematics

Question: A TV is purchased at Rs. 55000 and sold at Rs. 77000. Find the gain percentage.

ଗୋଟିଏ ଟିଭି 55000 ଟଙ୍କାରେ କିଣାଯାଇ ଏବଂ 77000 ଟଙ୍କାରେ ବିକ୍ରି ହୁଏ । ଲାଭ ପ୍ରତିଶତ ନିର୍ଦ୍ଧାରଣ କରନ୍ତୁ ।

- A 20%
20%
B 40%
40%
C 14%
14%
D 28%
28%

Correct Answer

Answer Given By Candidate: Not Attempted

Question ID: 10192

Topic Name: SECTION-II Mathematics

Question: Salim borrowed Rs. 15000 from his friend, at simple interest, at 8% per annum. He returned Rs. 19800 to his friend. How long did Salim take to return the money?

ସଲିମ୍ ତାଙ୍କ ସାଙ୍ଗଠାରୁ ବାର୍ଷିକ 8% ସୁଧରେ 15000 ଟଙ୍କା ଋଣ କରିଥିଲେ । ସେ ତାଙ୍କ ବନ୍ଧୁଙ୍କୁ 19800 ଟଙ୍କା ଫେରାଇ ଦେଇଥିଲେ । ଟଙ୍କା ଫେରାଇବା ପାଇଁ ସଲିମ୍‌ଙ୍କୁ କେତେ ସମୟ ଲାଗିଥିଲା ?

- A 5 years
5 ବର୍ଷ
B 4 years
4 ବର୍ଷ
C 6 years
6 ବର୍ଷ
D 3 years
3 ବର୍ଷ

Correct Answer

Answer Given By Candidate: Not Attempted

Question ID: 10193

Topic Name: SECTION-II Mathematics

Question: The compound interest on Rs. 5000, at 10% p.a. for 2 years is:

2 ବର୍ଷ ପାଇଁ ପ୍ରତି ବାର୍ଷିକ 5000 ଟଙ୍କା ଉପରେ 10% ଚକ୍ରବୃଦ୍ଧି ସୁଧ ହେଉଛି:

- A Rs 550
Rs 550
- B Rs 1000
Rs 1000
- C Rs 1050
Rs 1050
- D Rs 6050
Rs 6050

Correct Answer

Answer Given By Candidate: Not Attempted

Question ID:10194

Topic Name:SECTION-II Mathematics

Question: Write a number which when divided by 4,12 and 16 leaves 7 as the reminder.

ଏକ ସଂଖ୍ୟା ଲେଖନ୍ତୁ ଯାହାକୁ 4, 12 ଏବଂ 16 ରେ ବିଭକ୍ତ କରାଗଲେ ଭାଗଶେଷ 7 ରହିବ ।

- A 16
16
- B 48
48
- C 55
55
- D 9
9

Correct Answer

Answer Given By Candidate: Not Attempted

Question ID:10195

Topic Name:SECTION-II Mathematics

Question: Two vessels of milk contain milk and water. The first vessel contains 75% milk and the second contains 50% milk. Calculate the amount of liquid to be mixed from each container to get 12 litres of mixture, such that the new ratio of milk and water is 5:3.

ଦୁଇଟି କ୍ଷୀର ପାତ୍ର ରେ କ୍ଷୀର ଓ ପାଣି ରହିଥାଏ। ପ୍ରଥମ ପାତ୍ରରେ 75% କ୍ଷୀର ଥିବା ବେଳେ ଦ୍ୱିତୀୟ ପାତ୍ରରେ 50% କ୍ଷୀର ରହିଥାଏ । 12 ଲିଟର ମିଶ୍ରଣ ପାଇବା ପାଇଁ ପ୍ରତ୍ୟେକ ପାତ୍ରରୁ ମିଶ୍ରଣ ହେବାକୁ ଥିବା ତରଳ ପଦାର୍ଥର ପରିମାଣ ଗଣନା କରନ୍ତୁ, ଯେପରି କି କ୍ଷୀର ଏବଂ ଜଳର ନୂତନ ଅନୁପାତ 5:3 ରହିବ ।

- A 4 L, 8 L
4 L, 8 L
- B 6 L, 6 L
6 L, 6 L

Correct Answer

C 9 L, 3 L

9 L, 3 L

D 5 L, 7 L

5 L, 7 L

Answer Given By Candidate: **Not Attempted**

Question ID:10196

Topic Name:SECTION-II Mathematics

Question:

In a mixture of 100 litres, the ratio of petrol and diesel is 7:3. If 200 litres of diesel are added to the mixture, then what is the new ratio of petrol and diesel?

100 ଲିଟର ମିଶ୍ରଣରେ ପେଟ୍ରୋଲ ଓ ଡିଜେଲର ଅନୁପାତ 7:3 ରହିଛି । ଯଦି ମିଶ୍ରଣରେ 200 ଲିଟର ଡିଜେଲ ମିଶାଯାଏ, ତେବେ ପେଟ୍ରୋଲ ଏବଂ ଡିଜେଲର ନୂତନ ଅନୁପାତ କେତେ ହେବ?

A 4:5

4:5

B 7:23

Correct Answer

7:23

C 5:8

5:8

D 9:17

9:17

Answer Given By Candidate: **Not Attempted**

Question ID:10197

Topic Name:SECTION-II Mathematics

Question: In a triangle ABC, if angle B = 90 degrees and AB = 5 cm, BC = 12 cm, then AC is:

ଏକ ତ୍ରିଭୁଜ ABC ରେ, ଯଦି କୋଣ B = 90 ଡିଗ୍ରୀ ଏବଂ AB = 5 cm, BC = 12 cm, ତେବେ AC ହେଉଛି:

A 11 cm

11 cm

B 13 cm

Correct Answer

13 cm

C 17 cm

17 cm

D 25 cm

25 cm

Answer Given By Candidate: **Not Attempted**

Question ID:10198

Topic Name:SECTION-II Mathematics

Question: What is the sum of the interior angles of a hexagon?

ଏକ ଷଡ଼ଭୁଜର ଆଭ୍ୟନ୍ତର କୋଣଗୁଡ଼ିକର ସମଷ୍ଟି କେତେ?

A 180°
 180°

B 360°
 360°

C 540°
 540°

D 720°
 720°

Correct Answer

Answer Given By Candidate: Not Attempted

Question ID: 10199

Topic Name: SECTION-II Mathematics

Question: Which of the following is not a three dimensional figure?

ନିମ୍ନଲିଖିତ ମଧ୍ୟରୁ କେଉଁଟି ତ୍ରିମାତ୍ରିକ ଚିତ୍ର ନୁହେଁ?

A Cube
ଘନ

B Cone
ଧନାୟକ ଶଙ୍କୁ

C Trapezium
ତ୍ରାପିଜିୟମ୍

Correct Answer

D Cuboid
ଘନକ୍ଷେତ୍ର ସଦୃଶ

Answer Given By Candidate: Not Attempted

Question ID: 101100

Topic Name: SECTION-II Mathematics

Question: Which of the following is a linear equation in one variable?

ନିମ୍ନଲିଖିତ ମଧ୍ୟରୁ କେଉଁଟି ଏକକ ଚଳରେ ଏକ ରେଖିକ ପରିବେଶ ସମୀକରଣ ଅଟେ?

A $2x^2 + 3x - 1 = 0$
 $2x^2 + 3x - 1 = 0$

B $3x - 5 = 0$
 $3x - 5 = 0$

Correct Answer

C $x^2 + 5x + 6 = 0$
 $x^2 + 5x + 6 = 0$

D $5x + 6y = 7$
 $5x + 6y = 7$

Answer Given By Candidate: Not Attempted

Question ID: 101101

Topic Name: SECTION-II Mathematics

Question: Which of the following is not a linear equation?

ନିମ୍ନଲିଖିତ ମଧ୍ୟରୁ କେଉଁଟି ଏକକ ଚଳରେ ଏକ ରେଖିକ ପରିବେଶ ସମୀକରଣ ନୁହେଁ?

A $5x + 2y = 6$
 $5x + 2y = 6$

B $x - y^2 = 5$
 $x - y^2 = 5$

Correct Answer

C $4x - 5y + 7z = 0$
 $4x - 5y + 7z = 0$

D $9x + 3y = 7$
 $9x + 3y = 7$

Answer Given By Candidate: Not Attempted

Question ID: 101102

Topic Name: SECTION-II Mathematics

Question: If A and B are two sets such that $A \subset B$, then which of the following statements is true?

ଯଦି A ଏବଂ B ଦୁଇଟି ସେଟ୍ ଯେପରିକି $A \subset B$, ତେବେ ନିମ୍ନଲିଖିତ ବିବୃତ୍ତିଗୁଡ଼ିକ ମଧ୍ୟରୁ କେଉଁଟି ସତ୍ୟ?

A A and B have no elements in common
 A ଏବଂ B ର କୌଣସି ଉପାଦାନ ସମାନ ନାହିଁ

B A is a subset of B
 A ହେଉଛି B ର ଏକ ଉପସେଟ୍

Correct Answer

C B is a subset of A
 B ହେଉଛି A ର ଏକ ଉପସେଟ୍

D A and B are equal
 A ଏବଂ B ସମାନ ଅଟନ୍ତି

Answer Given By Candidate: Not Attempted

Question ID: 101103

Topic Name: SECTION-II Mathematics

Question: What is the symbol used to denote the empty set?

ରିକ୍ତ ସେଟ୍ କୁ ବର୍ଣ୍ଣାଇବା ପାଇଁ କେଉଁ ଚିହ୍ନ ବ୍ୟବହାର କରାଯାଏ?

A $\{\}$
 $\{\}$

Correct Answer

B $()$
 $()$

C $[]$
 $[]$

D $//$
 $//$

Answer Given By Candidate: Not Attempted

Question ID: 101104

Topic Name: SECTION-II Mathematics

Question: Which of the following is NOT a perfect square?

ନିମ୍ନଲିଖିତ ମଧ୍ୟରୁ କେଉଁଟି ଏକ ସମ ବର୍ଗ ନୁହେଁ?

A 16
16

B 81
81

C 49
49

D 66
66 **Correct Answer**

Answer Given By Candidate: **Not Attempted**

Question ID: 101105

Topic Name: SECTION-II Mathematics

Question: What is the value of $\sqrt{121}$?

$\sqrt{121}$ ର ମୂଲ୍ୟ କେତେ?

A 11
11 **Correct Answer**

B 13
13

C 14
14

D 15
15

Answer Given By Candidate: **Not Attempted**

Question ID: 101106

Topic Name: SECTION-II Social Science

Question: Which of the following is not included in the primate of hominid?

ନିମ୍ନଲିଖିତ ମଧ୍ୟରୁ କେଉଁଟି ହୋମିନିଡର ପ୍ରାଇମେଟର ଅନ୍ତର୍ଭୁକ୍ତ ନୁହେଁ?

A Chimpanzee
ସିମ୍ପାଞ୍ଜି

B Deer
ହରିଣ **Correct Answer**

C Gorillas
ଗରିଲା

D Orangutans
ଓରାଙ୍ଗଓଟାଙ୍ଗ

Answer Given By Candidate: **Not Attempted**

Question ID: 101107

Topic Name: SECTION-II Social Science

Question: The "Aranyakas " and "Upanishads" are mainly appendices to which of the following?

"ଅରଣ୍ୟକ" ଏବଂ "ଉପନିଷଦ" ମୁଖ୍ୟତଃ ନିମ୍ନଲିଖିତ ମଧ୍ୟରୁ କେଉଁଟି ପାଇଁ ଅନ୍ତର୍ଭୁକ୍ତ?

- A Brahmanas
ବ୍ରାହ୍ମଣ
- B Mantras
ମନ୍ତ୍ର
- C Shruti
ସ୍ମୃତି
- D Rigveda
ରୁକ୍ବେଦ

Correct Answer

Answer Given By Candidate: **Not Attempted**

Question ID:101108

Topic Name:SECTION-II Social Science

Question: In which year was Mangal Pandey hanged to death for attacking the officers in Barrackpore?

ବାରାକପୁରରେ ଅଧିକାରୀଙ୍କ ଉପରେ ଆକ୍ରମଣ କରିଥିବା ମଙ୍ଗଳ ପାଣ୍ଡେଙ୍କୁ କେଉଁ ବର୍ଷ ଫାଶୀ ଦିଆଯାଇଥିଲା?

- A 1857
1857
- B 1856
1856
- C 1858
1858
- D 1855
1855

Correct Answer

Answer Given By Candidate: **Not Attempted**

Question ID:101109

Topic Name:SECTION-II Social Science

Question: During Sepoy mutiny who was expected to rule the country if British would have ended the rule?

ସିପାହୀ ବିଦ୍ରୋହ ସମୟରେ ଯଦି ବ୍ରିଟିଶମାନେ ଏହି ନିୟମକୁ ସମାପ୍ତ କରିଥାନ୍ତେ ତେବେ ଦେଶକୁ କିଏ ଶାସନ କରିବ ବୋଲି ଆଶା କରାଯାଉଥିଲା?

- A Nana Saheb
ନାନା ସାହେବ

B Bahadur Shah Zafar
ବାହାଦୁର ଶାହା ଜାଫର

Correct Answer

C Birjis Qadar
ବିର୍ଜିଶ୍ କଦର

D Rani Lakshmibai
ରାଣୀ ଲକ୍ଷ୍ମୀବାଇ

Answer Given By Candidate: Not Attempted

Question ID: 101110

Topic Name: SECTION-II Social Science

Question: On which of the following dates the first meeting of the
Constituent Assembly of India was held?

ନିମ୍ନଲିଖିତ ମଧ୍ୟରୁ କେଉଁ ତାରିଖରେ ଭାରତର ସନ୍ଧ୍ୟାନ ସଭାର ପ୍ରଥମ
ବୈଠକ ଅନୁଷ୍ଠିତ ହୋଇଥିଲା?

A 9 December 1946
9 ଡିସେମ୍ବର 1946

Correct Answer

B 26 November 1949
26 ନଭେମ୍ବର 1949

C 22 July 1947
22 ଜୁଲାଇ 1947

D 13 December 1946
13 ଡିସେମ୍ବର 1946

Answer Given By Candidate: Not Attempted

Question ID: 101111

Topic Name: SECTION-II Social Science

Question: Indian Federal system is related to which of the following
countries?

ଭାରତୀୟ ସଂଘୀୟ ବ୍ୟବସ୍ଥା ନିମ୍ନଲିଖିତ ମଧ୍ୟରୁ କେଉଁ ଦେଶ ସହିତ
ସମ୍ବନ୍ଧିତ?

A Canada
କାନାଡା

Correct Answer

B United Kingdom
ଇଂଲଣ୍ଡ

C United States of America
ଯୁକ୍ତରାଷ୍ଟ୍ର ଆମେରିକା

D Ireland
ଆୟର୍ଲ୍ୟାଣ୍ଡ

Answer Given By Candidate: Not Attempted

Question ID:101112

Topic Name:SECTION-II Social Science

Question: In which year was the Constitution of India implemented?

ଭାରତର ସନ୍ଧିଧାନ କେଉଁ ବର୍ଷ କାର୍ଯ୍ୟକାରୀ ହୋଇଥିଲା?

A 26 January, 1948

26 ଜାନୁଆରୀ, 1948

B 26 January, 1950

26 ଜାନୁଆରୀ, 1950

Correct Answer

C 25 January, 1971

25 ଜାନୁଆରୀ, 1971

D 15 August, 1947

15 ଅଗଷ୍ଟ, 1947

Answer Given By Candidate:Not Attempted

Question ID:101113

Topic Name:SECTION-II Social Science

Question: Which organisation of Panchayati Raj system in Rural India makes developmental plans at district level?

ଗ୍ରାମୀଣ ଭାରତର ପଞ୍ଚାୟତିରାଜ ବ୍ୟବସ୍ଥାର କେଉଁ ସଂଗଠନ ଜିଲ୍ଲା ସ୍ତରରେ ଉନ୍ନୟନମୂଳକ ଯୋଜନା ପ୍ରସ୍ତୁତ କରେ?

A District Collectariate

ଜିଲ୍ଲାପାଳ

B Panchayat Samiti

ପଞ୍ଚାୟତ ସମିତି

C Gram Panchayat

ଗ୍ରାମ ପଞ୍ଚାୟତ

D Zila Parishad

ଜିଲ୍ଲା ପରିଷଦ

Correct Answer

Answer Given By Candidate:Not Attempted

Question ID:101114

Topic Name:SECTION-II Social Science

Question: Who is elected by the people in Rural area and sent to the Block or Panchayat Samiti as the representative of Gram Panchayat?

ଗ୍ରାମାଞ୍ଚଳର ଲୋକମାନେ କାହାକୁ ନିର୍ବାଚିତ କରି ଗ୍ରାମ ପଞ୍ଚାୟତର ପ୍ରତିନିଧି ଭାବରେ ବ୍ଲକ କିମ୍ବା ପଞ୍ଚାୟତ ସମିତିକୁ ପଠାଯାଏ?

A Sarapanch

ସରପଞ୍ଚ

B Ward member

ୱାର୍ଡ ସଭ୍ୟ

C Samiti Savya or Nominee to Block

ସମିତି ସଭ୍ୟ ବା ବ୍ଲକ ପାଇଁ ନମିନେଟ

Correct Answer

D Naib Sarapanch

ନାଏବ ସରପଞ୍ଚ

Answer Given By Candidate: Not Attempted

Question ID: 101115

Topic Name: SECTION-II Social Science

Question: Which is the region where evergreen rainforests are found?

କେଉଁ ଅଞ୍ଚଳରେ ସବୁଦିନିଆ ବର୍ଷାଜଳ ଦେଖିବାକୁ ମିଳେ?

A Equatorial

ମଧ୍ୟବର୍ତ୍ତୀ

Correct Answer

B Polar

ଧ୍ରୁବୀୟ

C Sub-polar

ଉପ-ଧ୍ରୁବୀୟ

D Temperate

ତାପକ୍ରମ

Answer Given By Candidate: Not Attempted

Question ID: 101116

Topic Name: SECTION-II Social Science

Question: "Bread Basket" of the world is:

ଦୁନିଆର "ବ୍ରେଡ ବାସ୍କେଟ" ହେଉଛି:

A Mid Latitude Grassland

ମଧ୍ୟ ଅକ୍ଷାଂଶ ଘାସଞ୍ଚଳ

Correct Answer

B Taiga

ଟାଏଗା

C Mediterranean

ଭୂମଧ୍ୟସାଗର

D Tundra

ଟୁଣ୍ଡ୍ରା

Answer Given By Candidate: Not Attempted

Question ID: 101117

Topic Name: SECTION-II Social Science

Question: Which country is the largest producer of copper in the world?

ପୃଥିବୀର କେଉଁ ଦେଶ ତମ୍ବା ଉତ୍ପାଦନକାରୀ ଦେଶ ?

A Chile

ଚିଲି

Correct Answer

B India

ଭାରତ

C USA

ଆମେରିକା

D Australia

ଅଷ୍ଟ୍ରେଲିଆ

Answer Given By Candidate: Not Attempted

Question ID:101118

Topic Name:SECTION-II Social Science

Question: The government agency which is responsible for the mapping and exploration of minerals is:

ଖଣିଜ ପଦାର୍ଥର ମ୍ୟାପିଂ ଏବଂ ଅନୁସନ୍ଧାନ ଦାୟିତ୍ବରେ ଥିବା ସରକାରୀ ଏଜେନ୍ସି ହେଉଛି:

A Archaeological Survey of India

ଭାରତୀୟ ପ୍ରତ୍ନତାତ୍ତ୍ୱିକ ସର୍ବେକ୍ଷଣ ବିଭାଗ

B The Geological Survey of India

ଭାରତର ଭୂତତ୍ତ୍ୱ ସର୍ବେକ୍ଷଣ ବିଭାଗ

Correct Answer

C National Mineral Development Corporation Ltd

ଜାତୀୟ ଖଣିଜ ଉନ୍ନୟନ ନିଗମ ଲିମିଟେଡ୍

D Survey of India

ସର୍ଭେ ଅଫ୍ ଇଣ୍ଡିଆ

Answer Given By Candidate: Not Attempted

Question ID:101119

Topic Name:SECTION-II Social Science

Question: What would be the IST when it is noon at the Greenwich Meridian, if the earth's direction of rotation is reversed?

ଗ୍ରୀନୱିଚ୍ ମେରିଡିଆନରେ ମଧ୍ୟାହ୍ନ ହେଲେ ଆଇଏସ୍ଟ ଟି କ'ଣ ହେବ, ଯଦି ପୃଥିବୀର ଘୂର୍ଣ୍ଣନ ଦିଗ ବଦଳିଯାଏ?

A 17.30 hrs

17.30 ଘଣ୍ଟା

B 05.30 hrs

05.30 ଘଣ୍ଟା

C 18.30 hrs

18.30 ଘଣ୍ଟା

D 06.30 hrs

06.30 ଘଣ୍ଟା

Correct Answer

Answer Given By Candidate: Not Attempted

Question ID: 101120

Topic Name: SECTION-II Social Science

Question: The correct sequence of the given continents in the increasing order of their percentage of Earth's land is:

ପୃଥିବୀର ଭୂମିର ପ୍ରତିଶତ ବୃଦ୍ଧି କ୍ରମରେ ଦିଆଯାଇଥିବା ମହାଦେଶଗୁଡ଼ିକର ସଠିକ୍ କ୍ରମ ହେଉଛି:

A North America – Africa – Europe – South America
ଉତ୍ତର ଆମେରିକା - ଆଫ୍ରିକା - ଯୁରୋପ - ଦକ୍ଷିଣ ଆମେରିକା

B Europe-South America-North America - Africa
ଯୁରୋପ-ଦକ୍ଷିଣ ଆମେରିକା-ଉତ୍ତର ଆମେରିକା - ଆଫ୍ରିକା

Correct Answer

C North America – Africa – South America – Europe
ଉତ୍ତର ଆମେରିକା - ଆଫ୍ରିକା - ଦକ୍ଷିଣ ଆମେରିକା - ଯୁରୋପ

D Africa – North America – Europe – South America
ଆଫ୍ରିକା - ଉତ୍ତର ଆମେରିକା - ଯୁରୋପ - ଦକ୍ଷିଣ ଆମେରିକା

Answer Given By Candidate: Not Attempted

Question ID: 101121

Topic Name: SECTION-II Science

Question: The process of conversion of matter from solid state to gaseous state directly without forming a liquid state is known as:

ଖେଳନା ସ୍ଥିତିରୁ ତରଳ ଅବସ୍ଥା ଗଠନ ନକରି ପଦାର୍ଥକୁ ସିଧାସଳଖ କଠିନ ଅବସ୍ଥାରୁ ଗ୍ୟାସୀୟ ଅବସ୍ଥାକୁ ରୂପାନ୍ତରିତ କରିବା ପ୍ରକ୍ରିୟାକୁ କୁହାଯାଏ:

A liquefaction
ଦ୍ରବଣ

B sublimation
ଉର୍ଦ୍ଧ୍ୱପାତକ

Correct Answer

C condensation
ବାଷ୍ପୀୟକରଣ

D solidification
ସ୍ୱଦୃଢୀକରଣ

Answer Given By Candidate: Not Attempted

Question ID: 101122

Topic Name: SECTION-II Science

Question: Which of the following elements does NOT exist as a gas under normal room temperature (25°C) conditions?

ନିମ୍ନଲିଖିତ ଉପାଦାନଗୁଡ଼ିକ ମଧ୍ୟରୁ କେଉଁଟି ସାଧାରଣ କୋଠରୀ ତାପମାତ୍ରା (25 ° C) ଅବସ୍ଥାରେ ଗ୍ୟାସ୍ ଭାବରେ ବିଦ୍ୟମାନ ନାହିଁ?

- A Nitrogen
ନାଇଟ୍ରୋଜେନ୍
- B Chlorine
କ୍ଲୋରାଇନ୍
- C Carbon
କାର୍ବନ୍
- D Oxygen
ଅକ୍ସିଜେନ୍

Correct Answer

Answer Given By Candidate: **Not Attempted**

Question ID:101123

Topic Name:SECTION-II Science

Question: Evaporation is _____ reaction.

ବାଷ୍ପୀୟକରଣ _____ ପ୍ରତିକ୍ରିୟା ଅଟେ ।

- A Exothermic
ଏକ୍ସୋଥର୍ମିକ୍
- B Endothermic
ଏଣ୍ଡୋଥର୍ମିକ୍
- C Thermoneutral
ଥର୍ମୋନ୍ୟୁଟ୍ରାଲ୍
- D None of the Above
ଉପରୋକ୍ତ ମଧ୍ୟରୁ କୌଣସିଟି ନୁହେଁ

Correct Answer

Answer Given By Candidate: **Not Attempted**

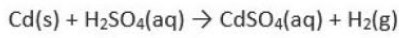
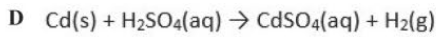
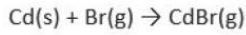
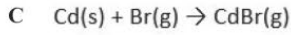
Question ID:101124

Topic Name:SECTION-II Science

Question: Which one of the following reactions is a balanced reaction?

ନିମ୍ନଲିଖିତ ପ୍ରତିକ୍ରିୟା ମଧ୍ୟରୁ କେଉଁଟି ଏକ ସନ୍ତୁଳିତ ପ୍ରତିକ୍ରିୟା ଅଟେ?

- A $\text{Cd(s)} + \text{O}_2\text{(g)} \rightarrow \text{CdO}_2\text{(s)}$
 $\text{Cd(s)} + \text{O}_2\text{(g)} \rightarrow \text{CdO}_2\text{(s)}$
- B $\text{Cd(s)} + \text{Br(g)} \rightarrow \text{CdBr}_2\text{(s)}$
 $\text{Cd(s)} + \text{Br(g)} \rightarrow \text{CdBr}_2\text{(s)}$



Correct Answer

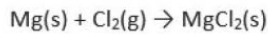
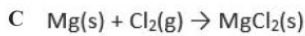
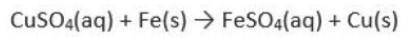
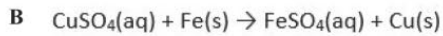
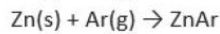
Answer Given By Candidate: **Not Attempted**

Question ID: 101125

Topic Name: SECTION-II Science

Question: Which one of the following reactions is a combination reaction?

ନିମ୍ନଲିଖିତ ପ୍ରତିକ୍ରିୟା ମଧ୍ୟରୁ କେଉଁଟି ଏକ ମିଶ୍ରିତ ପ୍ରତିକ୍ରିୟା ଅଟେ?



Correct Answer



ଉପରୋକ୍ତ ମଧ୍ୟରୁ କୌଣସିଟି ସ୍ତୁବ୍ଧ

Answer Given By Candidate: **Not Attempted**

Question ID: 101126

Topic Name: SECTION-II Science

Question:

A force $\vec{F} = 2.3\hat{i} + 3.0\hat{j}$ N acts on a particle of mass 0.3 kg. We observe that the particle is displaced by $\vec{ds} = \hat{i} - 0.5\hat{j}$.

The work done by the force will be given by:

ଏକ ବଳ $\vec{F} = 2.3\hat{i} + 3.0\hat{j}$ N 0.3 kg ର ଏକ କଣିକା ଉପରେ କାର୍ଯ୍ୟ କରେ । ଆମେ ଦେଖୁଛୁ ଯେ କଣିକାଟି $\vec{ds} = \hat{i} - 0.5\hat{j}$ ଦ୍ୱାରା ବିସ୍ଥାପିତ ହୋଇଥାଏ ।

ବଳ ଦ୍ୱାରା କରାଯାଇଥିବା କାର୍ଯ୍ୟ ନିମ୍ନଲିଖିତ ଦ୍ୱାରା ପ୍ରଦାନ କରାଯିବ:

A $\vec{W} = \vec{F} + \vec{ds}$

$\vec{W} = \vec{F} + \vec{ds}$

B $W = \frac{1}{0.3} \vec{F} \cdot \vec{ds}$

$W = \frac{1}{0.3} \vec{F} \cdot \vec{ds}$

C $W = 0.3 \times \vec{F} \cdot \vec{ds}$

$W = 0.3 \times \vec{F} \cdot \vec{ds}$

D $W = \overline{F} \cdot \overline{ds}$

Correct Answer

$W = \overline{F} \cdot \overline{ds}$

Answer Given By Candidate: **Not Attempted**

Question ID: 101127

Topic Name: SECTION-II Science

Question: The use of _____ as a source of energy, made the industrial revolution possible.

ଶକ୍ତିକୁ ଉତ୍ସ ଭାବେ _____ ର ବ୍ୟବହାର ଉଦ୍ୟୋଗିକ କ୍ରାନ୍ତିରେ ସମ୍ଭବ କରିପାରିଛି ।

A Petrol

ପେଟ୍ରୋଲ

B Wind

ପବନ

C Coal

Correct Answer

କୋଇଲା

D Sun

ସୂର୍ଯ୍ୟ

Answer Given By Candidate: **Not Attempted**

Question ID: 101128

Topic Name: SECTION-II Science

Question: A student conducted an experiment related to motion of a particle. The particle was moving along the line $y=1.0x+2.0$. The slope of the tangent at a point of the velocity time graph gives:

ଜଣେ ଛାତ୍ର ଏକ କଣିକାର ଗତି ସମ୍ବନ୍ଧୀୟ ଏକ ପରୀକ୍ଷଣ କରିଥିଲେ । କଣିକାଟି $y=1.0x+2.0$ ରେଖା ରେ ଗତି କରୁଥିଲା । ବେଗ ସମୟ ଗ୍ରାଫର ଏକ ବିନ୍ଦୁରେ ଟେଞ୍ଜେଣ୍ଟର ଢାଳ ଦିଏ:

A The average speed of the particle

କଣିକାର ହାରାହାରି ବେଗ

B The instantaneous speed of the particle

କଣିକାର ତତକ୍ଷଣାତ୍ ବେଗ

C The average acceleration of the particle

କଣିକାର ହାରାହାରି ତ୍ୱରଣ

D The instantaneous acceleration of the particle

Correct Answer

କଣିକାର ତତକ୍ଷଣାତ୍ ତ୍ୱରଣ

Answer Given By Candidate: **Not Attempted**

Question ID: 101129

Topic Name: SECTION-II Science

Question: ATP molecules are produced in _____.

ATP ଅଣ୍ଟି _____ ରେ ଉତ୍ପନ୍ନ ହୁଏ ।

A Mitochondria
ମାଇଟୋକଣ୍ଡ୍ରିଆ

Correct Answer

B Chloroplast
କ୍ଲୋରୋପ୍ଲାଷ୍ଟ

C Lysosome
ଲାଇସୋସୋମ୍

D Plastids
ପ୍ଲାଷ୍ଟିଡ୍

Answer Given By Candidate: **Not Attempted**

Question ID:101130

Topic Name:SECTION-II Science

Question: What is controlled death of a cell that is generally triggered by normal, healthy processes in the body called?

ସ୍ୱାଭାବିକ ଶରୀରରେ ସ୍ୱାଭାବିକ, ସ୍ୱସ୍ଥ ପ୍ରକ୍ରିୟା ଦ୍ୱାରା ସୃଷ୍ଟି ହେଉଥିବା କୋଷର ନିୟନ୍ତ୍ରିତ ମୃତ୍ୟୁକୁ କ'ଣ କୁହାଯାଏ?

A Necrosis
ନେକ୍ରୋସିସ୍

B Mitotic Catastrophe
ମିଟୋଟିକ୍ କାଟାଷ୍ଟ୍ରୋଫ୍

C Apoptosis
ଆପୋପ୍ଟୋସିସ୍

Correct Answer

D Cell Division
କୋଷିକା ବିଭାଜନ

Answer Given By Candidate: **Not Attempted**

Question ID:101131

Topic Name:SECTION-II Science

Question: The female parts of a flower are:

ଏକ ଫୁଲର ମାଈ ଅଂଶ ଗୁଡ଼ିକ ହେଲା:

A anther, stigma
ପରାଗକୋଷ, ଷ୍ଟିଗମା

B filament, style
ପରାଗକୋଷ, ଷ୍ଟାଇଲ୍

C style, stigma
ଷ୍ଟାଇଲ୍, ପରାଗକୋଷ

Correct Answer

D stamen, style

ଷ୍ଟାମେନ୍, ଷ୍ଟାଇଲ୍

Answer Given By Candidate: **Not Attempted**

Question ID:101132

Topic Name:SECTION-II Science

Question: The movement of a plant in response to an external stimuli is called:

ବାହ୍ୟ ଉତ୍ତେଜନାର ପ୍ରତିକ୍ରିୟାରେ ଉଦ୍ଭିଦର ଗତିକୁ କୁହାଯାଏ:

A Optimism

ଆଶାବାଦ

B Periodism

ଅବଧିବାଦ

C Prolongism

ଲମ୍ବାପଣ

D Tropism

ଟ୍ରୋପିଜିମ୍

Correct Answer

Answer Given By Candidate: **Not Attempted**

Question ID:101133

Topic Name:SECTION-II Science

Question: Xylem vessels are present in _____.

ଜାଇଲେମ୍ ବାହିକାଗୁଡ଼ିକ _____ରେ ଉପସ୍ଥିତ ଥାଏ ।

A bryophytes and pteridophytes

ବ୍ରାୟୋଫାଇଟ୍ସ ଏବଂ ପ୍ଟେରିଡୋଫାଇଟ୍ସ

B Only pteridophytes

କେବଳ ପ୍ଟେରିଡୋଫାଇଟ୍ସ

C gymnosperms

ଜିମ୍ନୋସ୍ପର୍ମ୍ସ

D all angiosperms

ସମସ୍ତ ଆଞ୍ଜିଓସ୍ପର୍ମ୍ସ

Correct Answer

Answer Given By Candidate: **Not Attempted**

Question ID:101134

Topic Name:SECTION-II Science

Question: Which of the following microbes causes pneumonia?

ନିମ୍ନଲିଖିତ ଜୀବାଣୁମଧ୍ୟରୁ କେଉଁଟି ନିମୋନିଆ ସୃଷ୍ଟି କରେ?

A Bacteria

କବକ

Correct Answer

B Virus

ଭାଇରସ୍

C Fungus

ଫଙ୍ଗସ୍

D Protozoa

ପ୍ରୋଟୋଜୋଆ

Answer Given By Candidate: **Not Attempted**

Question ID: **101135**

Topic Name: SECTION-II Science

Question: HIV, which causes AIDS, is a type of _____.

HIV, ଯାହା AIDS ସୃଷ୍ଟି କରେ, ଏକ ପ୍ରକାର _____ ଅଟେ ।

A Bacteria

ବ୍ୟାକ୍ଟେରିଆ

B Fungus

ଫଙ୍ଗସ୍

C Virus

ଭାଇରସ୍

Correct Answer

D Protozoa

ପ୍ରୋଟୋଜୋଆ

Answer Given By Candidate: **Not Attempted**

ଓଡ଼ିଶାର ସମସ୍ତ ପୁରୁଷ ବର୍ଷର ପ୍ରଶ୍ନ ଉତ୍ତର ପାଇଁ

Download “Tech Of World” App

WtsApp/Call- 8596976190

Join Us-

