



OSSC CGL 2022-23
E-BOOK- PDF
7,000 MCQ
EXPLANATION



All Important Questions & Answers

[Click Here](#)


MATH - ଓଡ଼ିଶାର
ସମସ୍ତ ପରୀକ୍ଷା ପୂର୍ବ ବର୍ଷ ପ୍ରଶ୍ନ
E-BOOK- PDF
1,800- MCQ
Topic Wise



OPSC, OSSC CGL, OSSSC, Police/Constable, B.ED, CHT, CT, OSSSC (RI, JC, LSI, OFDC, Group C)]

[Click Here](#)


ଓଡ଼ିଆ ବ୍ୟାକରଣ PYQ
ସମସ୍ତ ପରୀକ୍ଷା ପୂର୍ବ ବର୍ଷ ପ୍ରଶ୍ନ
E-BOOK- PDF
2,222 MCQ
TEST- 75



OPSC ASO, B.ED, CHT, CT, OAVS, OSSTET, OTET, ODISHA POLICE, OSSSC RI, OSSSC LSI, OSSSC OFDC, OSSSC Group C

[Click Here](#)


ENGLISH - ଓଡ଼ିଶାର
ସମସ୍ତ ପରୀକ୍ଷା ପୂର୍ବ ବର୍ଷ ପ୍ରଶ୍ନ
E-BOOK- PDF
3,600- MCQ
Topic Wise



OPSC, OSSC CGL, OSSSC, Police/Constable, B.ED, CHT, OTET, OSSTET CT, OSSSC (RI, JC, LSI, OFDC, Group C)

[Click Here](#)


REASONING - ଓଡ଼ିଶାର
ସମସ୍ତ ପରୀକ୍ଷା ପୂର୍ବ ବର୍ଷ ପ୍ରଶ୍ନ
E-BOOK- PDF
2,200- MCQ
Topic Wise



OPSC, OSSC CGL, OSSSC, Police/Constable, B.ED, CHT, OTET, OSSTET CT, OSSSC (RI, JC, LSI, OFDC, Group C)

[Click Here](#)

COMPUTER - ଓଡ଼ିଶାର
ସମସ୍ତ ପରୀକ୍ଷା ପୂର୍ବ ବର୍ଷ ପ୍ରଶ୍ନ
E-BOOK- PDF
1,100- MCQ
Topic Wise



OPSC, OSSC CGL, OSSSC, Police/Constable, CHT, OSSSC (RI, JC, LSI, OFDC, Group C)

[Click Here](#)

Tech of World

HOME VIDEOS PLAYLISTS COMMUNITY

ଆମ Channel ରେ ଦେଖନ୍ତୁ Video
ASO ଓଡ଼ିଶା ପୋଷ୍ଟାଲ CT ଓ B.Ed
ଓଡ଼ିଶା ପୋଲିସ୍ SSC GD Railway

Tech of World
 SUBSCRIBE
 315K subscribers • 928 videos

+2 କିମ୍ବା +3 ପଢ଼ିବା ପରେ କେମିତି ଜଣେ ଶିକ୍ଷକ ହେଇପାରିବେ ?
CT ଓ B.Ed ପରେ କଣ ?

How To Become A Teacher After +2 Or +3 In Odisha ? How To Get A Teacher Job In Odisha ?

[Click Here](#)

Tech Of World- (Odisha Exam CT)

Uninstall Open

Your Review

sujit kumar naik ★★★★★ 6/29/21

Developer contact

About this app

Tech Of World (Odisha Exam) Provides Mock Test & E-Books For Different Exams

Education

3.8 ★ 422 reviews 422 reviews Rated for 3+ 50K+ Downloads

[Click Here](#)

Tech Of World 4.1K subscribers

ASO English 2022 By... 8.7 MB PDF



ASO General Knowledge 2022... 4.9 MB PDF

ASO Math 2022 By Techofworld.In.pdf 4.6 MB PDF

ASO Odia Language 2022 By... 2.9 MB PDF

ASO Reasoning 2022 By... 4.6 MB PDF

[Click Here](#)

Roll No: Tech Of World App Registration No: Tech Of World App Name: Tech Of World App Exam Date: 08-Nov-2022 Exam Time: 15:30-17:30 Post Name: BSSO 22	Registered Photo 	Exam Day Photo 
Arithmetic - Arithmetic		
Question No.1 A man travels at a speed of 882 kmph and covers a certain distance in 32 seconds. Find the distance covered. (In metres) (A) <input type="radio"/> 7740 (B) <input type="radio"/> 7540 (C) <input checked="" type="radio"/> 7840 (Correct Answer) (Chosen option) (D) <input type="radio"/> 7640	Marks: 1.00 Bookmark <input type="checkbox"/>	
Question No.2 Using all the letters of the word 'FIVE', how many distinct words can be formed? (A) <input type="radio"/> 30 (B) <input type="radio"/> 22 (C) <input type="radio"/> 28 (D) <input checked="" type="radio"/> 24 (Correct Answer) (Chosen option)	Marks: 1.00 Bookmark <input type="checkbox"/>	
Question No.3 In how many ways can the letters of the word 'TREASURE' be arranged? (A) <input type="radio"/> 10180 (B) <input checked="" type="radio"/> 10080 (Correct Answer) (Chosen option) (C) <input type="radio"/> 10380 (D) <input type="radio"/> 10280	Marks: 1.00 Bookmark <input type="checkbox"/>	
Question No.4 A clock is started at 12 noon. By 1020 seconds past 5 p.m, the hour hand has turned through how many degrees? (A) <input type="radio"/> 168.5° (B) <input type="radio"/> 188.5° (C) <input checked="" type="radio"/> 158.5° (Correct Answer) (Chosen option) (D) <input type="radio"/> 178.5°	Marks: 1.00 Bookmark <input type="checkbox"/>	
Question No.5 What value should come in the place of question mark (?) in the following question? $2.4 \times (24 \times 12 \times 294.5) \div 57.6 = ?$ (A) <input checked="" type="radio"/> 3534 (Correct Answer) (Chosen option) (B) <input type="radio"/> 3434 (C) <input type="radio"/> 3334	Marks: 1.00 Bookmark <input type="checkbox"/>	

(D) 3234**Question No.6**

Marks: 1.00

Bookmark

At what rate of simple interest per annum will a sum of Rs.9200 earns Rs.2760 in 5 years?(in %)

- (A) 9
 (B) 8
 (C) 7
 (D) **6 (Correct Answer)** (Chosen option)

Question No.7

Marks: 1.00

Bookmark

Find the mid range from the given data:

189, 190, 192, 183, 191, 185, 187, 191, 181, 189, 190, 184, 188, 191, 197, 186, 190, 194, 196, 198.

- (A) 199.5
 (B) 179.5
 (C) **189.5 (Correct Answer)**
 (D) 209.5

Question No.8

Marks: 1.00

Bookmark

Find the LCM of 34/35 and 35/36.

- (A) 990
 (B) **1190 (Correct Answer)** (Chosen option)
 (C) 1290
 (D) 1090

Question No.9

Marks: 1.00

Bookmark **Direction:**

Study the following table and answer the questions.

Number of Candidates Appeared and Qualified in a Competitive Examination from different states over the years.

What is the number of candidates who appeared from State Y during the given years?

State	X		Y		Z	
	Appeared	Qualified	Appeared	Qualified	Appeared	Qualified
2001	54	43	51	40	59	48
2002	47	35	44	32	52	40
2003	90	81	87	78	95	86
2004	84	78	81	75	89	83
2005	74	52	71	49	79	57

- (A) 289
 (B) 349
 (C) 374
 (D) **334 (Correct Answer)** (Chosen option)

Question No.10

Marks: 1.00

Bookmark

Solve:

$$20.6 \times (7 \div 8) \times 16 \times 5 = ?$$



- (A) **1442 (Correct Answer)** (Chosen option)
(B) 1242
(C) 1342
(D) 1542

Question No.11

Marks: 1.00

Bookmark

Solve:

$$(24 \div 7) + (32 \div 7) = ?$$

- (A) 2
(B) 6
(C) 4
(D) **8 (Correct Answer)** (Chosen option)

Question No.12

Marks: 1.00

Bookmark

Two numbers are in the ratio of 83:84. If the HCF of the numbers is 47, find the smallest number.

- (A) 3701
(B) 3601
(C) 3801
(D) **3901 (Correct Answer)** (Chosen option)

Question No.13

Marks: 1.00

Bookmark

Suppose you randomly choose a number from 191 to 210, both inclusive. What is the probability that you chose a number which is a multiple of 3?

- (A) 9/20
(B) 3/20
(C) 11/20
(D) **7/20 (Correct Answer)** (Chosen option)

Question No.14

Marks: 1.00

Bookmark

A can do a piece of work in 321 days while B can do it in 214 days. In how many days can they complete it, if they work together?

- (A) 132.4
(B) 136.4
(C) **128.4 (Correct Answer)** (Chosen option)
(D) 124.4

Question No.15

Marks: 1.00

Bookmark

Find the area of a circle whose radius is 145 cm. (In cm^2)

- (A) 21225π
(B) 21125π
(C) 20025π
(D) **21025π (Correct Answer)** (Chosen option)

Question No.16

Marks: 1.00

Bookmark

The ratio of two numbers is 7:8 and their sum is 795. Find the greater of the two numbers.

- (A) 442
(B) 423
(C) 421
(D) **424 (Correct Answer)** (Chosen option)

Question No.17

Marks: 1.00

Bookmark

Find the value of Z:

$$\sqrt{0.1764} \times Z = 4.2$$

- (A) 14
(B) **10 (Correct Answer)** (Chosen option)
(C) 16
(D) 12

Question No.18

Marks: 1.00

Bookmark

A basket contains 98 brown shoes and 147 black shoes. A shoe is picked up at random. Find the probability of getting a black shoe.

- (A) 0.2
(B) 0.4
(C) **0.6 (Correct Answer)** (Chosen option)
(D) 0.8

Question No.19

Marks: 1.00

Bookmark

Find $a^3 - b^3$, given that $(a-b) = 7$ and $(a^2 + ab + b^2) = 2623$.

- (A) 17361 (Chosen option)
(B) **18361 (Correct Answer)**
(C) 15361
(D) 16361

Question No.20

Marks: 1.00

Bookmark

If a traveller covers a distance of 8085 metres in 33 seconds, find the speed of the traveller. (In kmph)

- (A) 892
(B) 862
(C) 872
(D) **882 (Correct Answer)** (Chosen option)

Question No.21

Marks: 1.00

Bookmark

A and B can do a piece of work in 28 days, while C and D can do the same work in 84 days. In how many days will A, B, C and D do it together?

- (A) **21 (Correct Answer)** (Chosen option)
(B) 17
(C) 19
(D) 15

Question No.22

Marks: 1.00

Bookmark

If B's age is eight times the age of A and if B's age is 48 years, find the age difference between A and B. (In years)

- (A) 44
(B) 48
(C) 42 (Correct Answer) (Chosen option)
(D) 46

Question No.23

Marks: 1.00

Bookmark

Lokesh gets a discount of 20% on his purchase bill of Rs.8300. What is the total discount he got? (In Rs.)

- (A) 1440
(B) 1550
(C) 1330
(D) 1660 (Correct Answer) (Chosen option)

Question No.24

Marks: 1.00

Bookmark

Simple interest on a sum at 20% per annum for 2 years is Rs.480. Find the amount under compound interest on the same sum for the same period. (In Rs.)

- (A) 1528
(B) 1728 (Correct Answer) (Chosen option)
(C) 1628
(D) 1828

Question No.25

Marks: 1.00

Bookmark

A pipe can fill a tank with water in 333 hours. Because of an outlet, it took 370 hours to fill the tank. How much time will it take for the outlet alone to drain all the water present in the filled water tank? (In hours)

- (A) 3130
(B) 3330 (Correct Answer)
(C) 3530
(D) 3730

Analytical and Reasoning Ability - Analytical and Reasoning Ability

Question No.1

Marks: 1.00

Bookmark

If + means \div , \times means +, \div means - & - means \times , then,
 $42 - 2 \times 20 + 4 - 3 \times 7 = ?$

- (A) 128
(B) 126
(C) 118
(D) 106 (Correct Answer) (Chosen option)

Question No.2

Marks: 1.00

Bookmark

In a certain code language, if GLOBE is coded as PKSIF, then how is RAPID coded in that language?

- (A) JOVGX

- (B) IZKRW
(C) EVTHM (Correct Answer)
(D) VETMH

Question No.3

Marks: 1.00

Bookmark

In this question, relationship between different elements is shown in the statement.
This statement is followed by two conclusions:

Statements: $C > H \geq I = P < O \leq T < L < E$

Conclusion:

- i) $H \geq P$
ii) $O < E$

Choose the appropriate one from the following options

- (A) Only conclusion i follows
(B) Only conclusion ii follows
(C) Either i or ii follows
(D) Neither i nor ii follows
(E) Both i and ii follow.
(A) E (Correct Answer) (Chosen option)
(B) A
(C) C
(D) B

Question No.4

Marks: 1.00

Bookmark

In a certain code language, if ANGLE is coded as 1147125, then how is DOING coded in that language?

- (A) 5148147
(B) 4159147 (Correct Answer) (Chosen option)
(C) 5149147
(D) 4158147

Question No.5

Marks: 1.00

Bookmark

Replace the question mark with an option that follows the same logic applied in the first pair

LG : PK :: DB : ??

- (A) HF (Correct Answer) (Chosen option)
(B) IF
(C) IG
(D) HG

Question No.6

Marks: 1.00

Bookmark

What should be written in the place of question mark in the given series?

C7, G14, K21, ?, S35

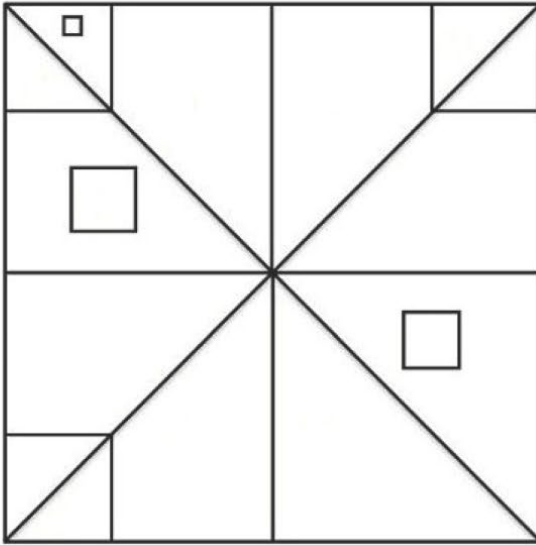
- (A) P29
(B) M29
(C) M28
(D) O28 (Correct Answer) (Chosen option)

Question No.7

Marks: 1.00

Bookmark

How many squares are there in the given figure?



- (A) 11 (Correct Answer) (Chosen option)
 (B) 12
 (C) 10
 (D) 13

Question No.8

Marks: 1.00

Bookmark

Which of the following sets of signs should be used to replace * in the following?

$$48 * 12 * 10 = 8 * 8 * 4$$

- (A) ÷ × + × (Correct Answer) (Chosen option)
 (B) × - + ×
 (C) × ÷ × +
 (D) ÷ + × -

Question No.9

Marks: 1.00

Bookmark

In this question, relationship between different elements is shown in the statement.
 This statement is followed by two conclusions:

Statements: $S < I \leq L = V > E \geq R$

Conclusion:

- i) $I < R$
 ii) $E > S$

Choose the appropriate one from the following options

- (A) Only conclusion i follows
 (B) Only conclusion ii follows
 (C) Either i or ii follows
 (D) Neither i nor ii follows
 (E) Both i and ii follow.
 (A) D (Correct Answer) (Chosen option)
 (B) C
 (C) B
 (D) A

Question No.10

Marks: 1.00

Bookmark

In the following question, few statements are given and these statements are followed by two conclusions numbered i and ii. You have to take the given statements to be true even if they seem to be at variance from commonly known facts. Read the conclusions and then decide which of the given conclusions logically follows from the given statements, disregarding commonly known facts.

Choose,

- (A) Only (i) conclusion follows
- (B) Only (ii) conclusion follows
- (C) Neither (i) nor (ii) follows
- (D) Both (i) and (ii) follow
- (E) Either (i) or (ii) follows

Statements: All seeds are fruits. Some fruits are vegetables. All vegetables are plants.

Conclusions:

- i) Some seeds are vegetables.
- ii) Some plants are seeds.

- (A) D
- (B) B
- (C) A
- (D) C (Correct Answer) (Chosen option)

Question No.11

Marks: 1.00

Bookmark

The letters of the name of a vegetable are H, S, D, I, A and R. If the letters are rearranged correctly, then what is the last letter of the word formed?

- (A) I
- (B) R
- (C) H (Correct Answer)
- (D) S

Question No.12

Marks: 1.00

Bookmark

"Each question given below consists of a statement, followed by two arguments numbered 1 and 2. You have to decide which of the arguments is a 'strong' argument and which is a 'weak' argument.

Give answer:

- (A) If only argument 1 is strong
- (B) If only argument 2 is strong
- (C) If either 1 or 2 is strong
- (D) If neither 1 nor 2 is strong and
- (E) If both 1 and 2 are strong.

Statement: Should we encourage veganism in society?

Argument:

- 1. Yes, a vegan lifestyle prevents a tremendous amount of animal slaughter and suffering.
- 2. Yes, a well-planned vegan diet can fuel the highest levels of fitness, while reducing our risk of various chronic diseases.

- (A) B
- (B) C
- (C) E (Correct Answer) (Chosen option)
- (D) A

Question No.13

Marks: 1.00

Bookmark

One morning, Sri met his friend Sara on his way to office. Sara's shadow falls exactly to the right of Sri. If they face opposite to each other, which direction is Sara facing?

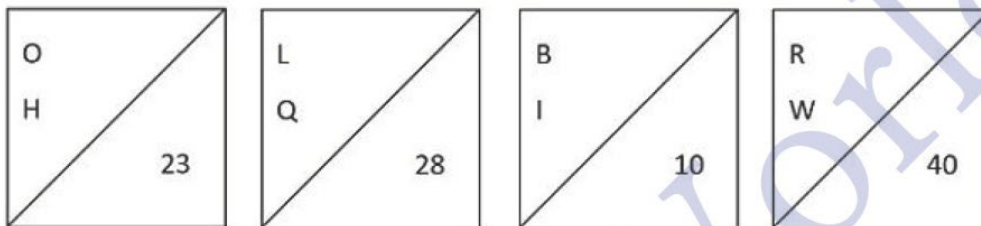
- (A) North (Correct Answer) (Chosen option)
(B) East
(C) West
(D) South

Question No.14

Marks: 1.00

Bookmark

Find the odd image out in the given series.



(1)

(2)

(3)

(4)

- (A) 1 (Correct Answer) (Chosen option)
(B) 3
(C) 2
(D) 4

Question No.15

Marks: 1.00

Bookmark

Pointing to a young girl, a lady said, "She is my husband's father-in-law's son's only son's sister." How is the girl related to the lady?

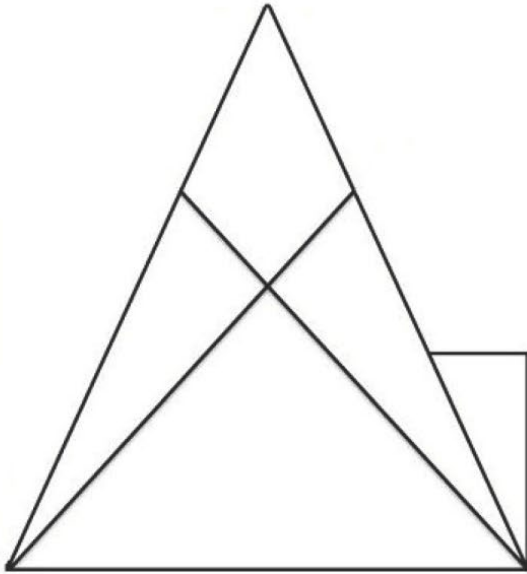
- (A) Daughter
(B) Niece (Correct Answer) (Chosen option)
(C) Granddaughter
(D) Sister

Question No.16

Marks: 1.00

Bookmark

How many triangles are there in the given figure?



- (A) 7
 (B) 6 (Chosen option)
 (C) 9 (Correct Answer)
 (D) 10

Question No.17

Marks: 1.00

Bookmark

M is the son of N whose husband is O. O is the son of P whose wife is Q. How is M related to P?

- (A) Son
 (B) Grandson (Correct Answer) (Chosen option)
 (C) Grandfather
 (D) Father-in-law

Question No.18

Marks: 1.00

Bookmark

Replace the question mark with an option that follows the same logic applied in the first pair

Expansive : Broad :: Mortal : ??

- (A) Healthy
 (B) Deadly (Correct Answer) (Chosen option)
 (C) Harmless
 (D) Permanent

Question No.19

Marks: 1.00

Bookmark

What will be written in the place of question mark in the given series?

K11R18O15N14?6

- (A) G
 (B) F (Correct Answer) (Chosen option)
 (C) J
 (D) E

Case Study - 20 to 21
 Directions :

2.00

This type of graph indicates the variation of a quantity with respect to two parameters represented on x-axis and y-axis respectively. So the candidate must carefully observe the peaks and depths of the graph to interpret the data.

x- axis: Months

y-axis: Number of cases for the month



Question No.20

Marks: 1.00

Bookmark

Which month of the following did Varanasi have the least number of cases?

- (A) Feb-20
- (B) **Mar-20 (Correct Answer)** (Chosen option)
- (C) Jan-20
- (D) Apr-20

Question No.21

Marks: 1.00

Bookmark

How many cases were registered in Varanasi and Mysore in Feb-20?

- (A) 86
- (B) 128
- (C) **119 (Correct Answer)** (Chosen option)
- (D) 120

Question No.22

Marks: 1.00

Bookmark

Choose the alternative which is an odd word/number/letter pair out of the given alternatives.

- (A) Bike
- (B) Ship
- (C) **Petrol (Correct Answer)** (Chosen option)
- (D) Aeroplane

Question No.23

Marks: 1.00

Bookmark

"Each question given below consists of a statement, followed by two arguments numbered 1 and 2. You have to decide which of the arguments is a 'strong' argument and which is a 'weak' argument.

Give answer:

- (A) If only argument 1 is strong
- (B) If only argument 2 is strong
- (C) If either 1 or 2 is strong
- (D) If neither 1 nor 2 is strong and
- (E) If both 1 and 2 are strong.

Statement: Should we promote gender equality?

Argument:

1. No, as it cannot be achieved overnight.
2. Yes, empowered women and girls contribute to the health and productivity of their families, communities, and countries, creating a ripple effect that benefits everyone.

- (A) **B (Correct Answer)** (Chosen option)
- (B) C
- (C) D
- (D) A

Question No.24

Marks: 1.00

Bookmark

Choose the alternative which is an odd word/number/letter pair out of the given alternatives.

- (A) Adapt
- (B) Modify
- (C) **Damage (Correct Answer)** (Chosen option)
- (D) Adjust

Question No.25

Marks: 1.00

Bookmark

Among 600 persons in the wedding hall, it is found that 370 people like Analog watch, 210 people like Digital watch, 200 people like Smart watch, 30 people like Analog and Digital watch but not Smart watch, 70 people like Digital and Smart watch but not Analog watch, 50 people like Analog and Smart watch but not Digital watch, 10 people do not like any of these watches.

If 20 people like all the three watches, then how many people like exactly one watch?

- (A) 590
- (B) **420 (Correct Answer)** (Chosen option)
- (C) 430
- (D) 170

General Awareness and Current Events - General Awareness and Current Events

Question No.1

Marks: 1.00

Bookmark

Mitra Shakti is a joint military Exercise between India and which of the following countries?

- (A) Bangladesh
- (B) **Sri Lanka (Correct Answer)** (Chosen option)
- (C) Nepal
- (D) China

Question No.2

Marks: 1.00

Bookmark

Which is the only major port in Odisha?

-

- (A) Chudamani
(B) Chandipur
(C) **Paradip (Correct Answer)** (Chosen option)
(D) Dhamra

Question No.3

Marks: 1.00

Bookmark

Euro is the official currency of which of the following countries?

- (A) Egypt
(B) Denmark
(C) Cuba
(D) **Finland (Correct Answer)** (Chosen option)

Question No.4

Marks: 1.00

Bookmark

Which of the following lakes is located in the borders of Tamil Nadu and Andhra Pradesh?

- (A) Vembanad Lake
(B) **Pulicat Lake (Correct Answer)**
(C) Kolleru Lake (Chosen option)
(D) Chilka Lake

Question No.5

Marks: 1.00

Bookmark

Who was the last known ruler of the Somavamsi dynasty?

- (A) Janmejaya II
(B) Anantavarman Chodagangadeva
(C) Udyotakesari Mahabhavagupta
(D) **Karnadeva (Correct Answer)** (Chosen option)

Question No.6

Marks: 1.00

Bookmark

India's first Night Sky Sanctuary will be set up in which of the following Union Territories?

- (A) Lakshadweep Islands
(B) **Ladakh (Correct Answer)** (Chosen option)
(C) Delhi
(D) Puducherry

Question No.7

Marks: 1.00

Bookmark

Who has the authority to appoint Lokayukta and Upalokayukta in a state?

- (A) **Governor of the State (Correct Answer)** (Chosen option)
(B) Chief Justice of High Court
(C) Chief Justice of India
(D) President of India

Question No.8

Marks: 1.00

Bookmark

Who is the Ex-officio Chairman of the Rajya Sabha of India?

- (A) Prime Minister of India
(B) **Vice-President of India (Correct Answer)** (Chosen option)

- (C) President of India
(D) Home Minister of India

Question No.9

Marks: 1.00

Bookmark

Where was the annual session of the Indian National Congress held in 1905?

- (A) Bombay
(B) Surat (Chosen option)
(C) Banaras (Correct Answer)
(D) Calcutta

Question No.10

Marks: 1.00

Bookmark

Which is the nodal agency, responsible for providing coordination and technical guidance for the National Family Health Survey(NFHS)?

- (A) International Institute for Population Sciences (Correct Answer)
(B) National Health Authority
(C) National Institutes of Health
(D) Indian Institute of Public Health

Question No.11

Marks: 1.00

Bookmark

Bhutan shares its border with which of the following Indian states?

- (A) Himachal Pradesh
(B) Nagaland
(C) Sikkim (Correct Answer) (Chosen option)
(D) Uttarakhand

Question No.12

Marks: 1.00

Bookmark

Sri Chaitanya gave the title of Atibadi to whom?

- (A) Yasobanta Das
(B) Achyutananda Das
(C) Balarama Das
(D) Jagannatha Das (Correct Answer) (Chosen option)

Question No.13

Marks: 1.00

Bookmark

Which among the following institutions has been created as a result of the Bretton Woods Agreement?

- (A) International Monetary Fund (Correct Answer)
(B) United Nations
(C) Food and Agricultural Organisation
(D) International Labour Organisation

Question No.14

Marks: 1.00

Bookmark

Which of the following rivers originates from the Ramgiri hills of the eastern ghats?

- (A) Subarnarekha
(B) Rushikulya
(C) Bahuda (Correct Answer)

(D) Budhabalanga

Question No.15

Marks: 1.00

Bookmark

Sourav Ghosal is a distinguished personality in which of the following sports/games?

- (A) Table Tennis
(B) Badminton (Chosen option)
(C) Lawn Tennis
(D) Squash (Correct Answer)

Question No.16

Marks: 1.00

Bookmark

In September 2022, Asian Palm Oil Alliance (APOA) was launched at the Globoil Summit held in which country?

- (A) India (Correct Answer)
(B) Iran (Chosen option)
(C) Australia
(D) New Zealand

Question No.17

Marks: 1.00

Bookmark

Who discharges its statutory obligation of being 'Banker to Government of India'?

- (A) NABARD
(B) National Housing Bank
(C) State Bank of India
(D) Reserve Bank of India (Correct Answer) (Chosen option)

Question No.18

Marks: 1.00

Bookmark

Which of the following is celebrated as Dola Purnima in Odisha?

- (A) Deepavali
(B) Holi (Correct Answer) (Chosen option)
(C) Dussehra
(D) Raksha Bandhan

Question No.19

Marks: 1.00

Bookmark

Bokaro Steel Plant is located in the state of _____.

- (A) Chhattisgarh
(B) Odisha
(C) Jharkhand (Correct Answer) (Chosen option)
(D) West Bengal

Question No.20

Marks: 1.00

Bookmark

Who among the following built the city of 'Tughlaqabad'?

- (A) Ghiasuddin Tughlaq (Correct Answer)
(B) Firuz Shah Tughlaq
(C) Khizr Khan
(D) Muhammad bin Tughluq

<p>Question No.21</p> <p>Who among the following scientists is known as 'Agni Putri'?</p> <p>(A) <input type="radio"/> Ritu Karidha</p> <p>(B) <input type="radio"/> V. R. Lalithambika</p> <p>(C) <input type="radio"/> Kalpana Chawla</p> <p>(D) <input type="radio"/> Tessy Thomas (Correct Answer)</p>	<p>Marks: 1.00</p> <p>Bookmark <input type="checkbox"/></p>
<p>Question No.22</p> <p>A regulatory body in India, "TRAI" stands for:</p> <p>(A) <input type="radio"/> Transmission Regulatory Act of India</p> <p>(B) <input type="radio"/> Telenetworking Radiation Authority of India</p> <p>(C) <input type="radio"/> Television Reporting Authority in India</p> <p>(D) <input type="radio"/> Telecom Regulatory Authority of India (Correct Answer) (Chosen option)</p>	<p>Marks: 1.00</p> <p>Bookmark <input type="checkbox"/></p>
<p>Question No.23</p> <p>Which Delhi Sultan built 'Alai Darwaza' of Delhi?</p> <p>(A) <input type="radio"/> Feroz shah Tughlaq</p> <p>(B) <input type="radio"/> Sikandar Lodi</p> <p>(C) <input type="radio"/> Iltutmish</p> <p>(D) <input type="radio"/> Ala-ud-Din Khalji (Correct Answer)</p>	<p>Marks: 1.00</p> <p>Bookmark <input type="checkbox"/></p>
<p>Question No.24</p> <p>Deposit insurance premium paid to the Deposit Insurance and Credit Guarantee Corporation (DICGC) is borne entirely by the:</p> <p>(A) <input type="radio"/> Reserve Bank of India</p> <p>(B) <input type="radio"/> Insured Depositor</p> <p>(C) <input type="radio"/> Government of India</p> <p>(D) <input type="radio"/> Insured Bank (Correct Answer)</p>	<p>Marks: 1.00</p> <p>Bookmark <input type="checkbox"/></p>
<p>Question No.25</p> <p>What is the full form of 'FTP' in computer terminology?</p> <p>(A) <input type="radio"/> Folder Transmit Protocol</p> <p>(B) <input type="radio"/> File Transmit Protocol</p> <p>(C) <input type="radio"/> Folder Transfer Protocol</p> <p>(D) <input type="radio"/> File Transfer Protocol (Correct Answer) (Chosen option)</p>	<p>Marks: 1.00</p> <p>Bookmark <input type="checkbox"/></p>
Computer and Internet Awareness - Computer and Internet Awareness	
<p>Question No.1</p> <p>Which among the following utilities from the administrative tools helps you get detailed information about your computer's hardware resource, components and software environments?</p> <p>(A) <input type="radio"/> System Information (Correct Answer)</p> <p>(B) <input type="radio"/> Task Scheduler</p> <p>(C) <input type="radio"/> System Configuration (Chosen option)</p> <p>(D) <input type="radio"/> Registry Editor</p>	<p>Marks: 1.00</p> <p>Bookmark <input type="checkbox"/></p>

<p>Question No.2</p> <p>You can open the Run command dialog box by pressing _____ key combination.</p> <p>(A) <input type="radio"/> Ctrl + Shift + R (Chosen option)</p> <p>(B) <input type="radio"/> Windows + C</p> <p>(C) <input type="radio"/> Ctrl + R</p> <p>(D) <input type="radio"/> Windows + R (Correct Answer)</p>	<p>Marks: 1.00</p> <p>Bookmark <input type="checkbox"/></p>
<p>Question No.3</p> <p>_____ is a supplementary memory system which stores frequently used instructions and data for quicker processing.</p> <p>(A) <input type="radio"/> Hard disk</p> <p>(B) <input type="radio"/> RAM</p> <p>(C) <input type="radio"/> Register</p> <p>(D) <input type="radio"/> Cache memory (Correct Answer) (Chosen option)</p>	<p>Marks: 1.00</p> <p>Bookmark <input type="checkbox"/></p>
<p>Question No.4</p> <p>In MS-Powerpoint 2007, which group allows insertion of pictures, clip art, pictures from photo album, shapes and charts?</p> <p>(A) <input type="radio"/> Text</p> <p>(B) <input type="radio"/> Links</p> <p>(C) <input type="radio"/> Illustrations (Correct Answer) (Chosen option)</p> <p>(D) <input type="radio"/> Media Clips</p>	<p>Marks: 1.00</p> <p>Bookmark <input type="checkbox"/></p>
<p>Question No.5</p> <p>What is the shortcut key used to permanently delete a file or folder?</p> <p>(A) <input type="radio"/> Ctrl + Delete</p> <p>(B) <input type="radio"/> Alt + Delete</p> <p>(C) <input type="radio"/> SHIFT + Delete (Correct Answer) (Chosen option)</p> <p>(D) <input type="radio"/> Ctrl + Alt + Delete</p>	<p>Marks: 1.00</p> <p>Bookmark <input type="checkbox"/></p>
<p>Question No.6</p> <p>_____ displays information about the currently active document.</p> <p>(A) <input type="radio"/> Ruler Bar</p> <p>(B) <input type="radio"/> Tool Bar</p> <p>(C) <input type="radio"/> Scroll Bar</p> <p>(D) <input type="radio"/> Status Bar (Correct Answer) (Chosen option)</p>	<p>Marks: 1.00</p> <p>Bookmark <input type="checkbox"/></p>
<p>Question No.7</p> <p>The key that is used to cancel dialog or pop up in windows is _____.</p> <p>(A) <input type="radio"/> Enter</p> <p>(B) <input type="radio"/> ESC (Correct Answer) (Chosen option)</p> <p>(C) <input type="radio"/> Backspace</p> <p>(D) <input type="radio"/> Tab</p>	<p>Marks: 1.00</p> <p>Bookmark <input type="checkbox"/></p>

Question No.8

Marks: 1.00

Bookmark

In Table of contents, which option decides whether to have blank space, dots, dashes or solid line between the headings and page numbers?

- (A) **Tab leader (Correct Answer)**
(B) Show levels
(C) Show page number
(D) Tab Liner

Question No.9

Marks: 1.00

Bookmark

The logical separation of a physical hard disk is called _____.

- (A) Index
(B) **Partition (Correct Answer)**
(C) Compression
(D) Encryption (Chosen option)

Question No.10

Marks: 1.00

Bookmark

The network security system that monitors and filters data packets based on a set of security policies is called _____.

- (A) **Firewall (Correct Answer)**
(B) Proxy
(C) VPN
(D) Antivirus (Chosen option)

Question No.11

Marks: 1.00

Bookmark

Which among the following is an example of a social networking site?

- (A) amazon.com
(B) **facebook.com (Correct Answer)** (Chosen option)
(C) ebay.com
(D) flipkart.com

Question No.12

Marks: 1.00

Bookmark

When table spreads across more than a page, which option can be used to automatically repeat the first row of the table on each page as a first row?

- (A) Indexing (Chosen option)
(B) Data Row Repeater
(C) Table of contents
(D) **Repeat Rows Header (Correct Answer)**

Question No.13

Marks: 1.00

Bookmark

_____ occurs when a file is broken up into pieces to fit on the disk.

- (A) Disk Formatting
(B) Disk Defragmentation
(C) **Disk Fragmentation (Correct Answer)** (Chosen option)
(D) Disk Backup

Question No.14

Marks: 1.00

Bookmark

You can keep the top row of the table visible while scrolling across the worksheet by selecting _____.

- (A) Freeze Last Row option
- (B) Freeze Sheet option
- (C) **Freeze Top Row option (Correct Answer)** (Chosen option)
- (D) Freeze Workbook option

Question No.15

Marks: 1.00

Bookmark

In Microsoft Excel, _____ allows you to apply specified formatting only when certain criteria are met.

- (A) Themes
- (B) **Conditional formatting (Correct Answer)** (Chosen option)
- (C) Dropcap
- (D) Style sheets

Question No.16

Marks: 1.00

Bookmark

ANSI stands for _____.

- (A) American Nations Symbols Institue
- (B) **American National Standards Institute (Correct Answer)**
- (C) American National Symbols Institute
- (D) American Nation Standards Institute

Question No.17

Marks: 1.00

Bookmark

You can add notes about a specific portion of a document using _____ option from the Insert tab of a Word document.

- (A) Header (Chosen option)
- (B) Equation
- (C) **Comments (Correct Answer)**
- (D) Symbols

Question No.18

Marks: 1.00

Bookmark

In Microsoft Word, _____ option will show the comments and formatting changes in print preview.

- (A) Anchors
- (B) **Track Changes (Correct Answer)**
- (C) Markers
- (D) Indents

Question No.19

Marks: 1.00

Bookmark

A delimited file contains data fields separated by _____.

- (A) Numericals
- (B) Alphabets
- (C) **Special characters (Correct Answer)**
- (D) Alpha Numericals

Question No.20

Marks: 1.00

Bookmark

The Word option that allows you to change the colour behind the selected text, paragraph and tables is:

- (A) Paint
(B) Bold
(C) Underline
(D) **Shading (Correct Answer)** (Chosen option)

Question No.21

Marks: 1.00

Bookmark

Which generation of computers introduced Parallel processing and Superconductors?

- (A) Third
(B) **Fifth (Correct Answer)**
(C) Future
(D) Fourth (Chosen option)

Question No.22

Marks: 1.00

Bookmark

You can insert process diagrams and Hierarchy diagrams using the _____ feature in Microsoft Word.

- (A) **Smart Art (Correct Answer)** (Chosen option)
(B) Word Art
(C) Pivot
(D) Dropcap

Question No.23

Marks: 1.00

Bookmark

Which among the following ports are used by devices such as pen drive, keyboard and mouse _____.

- (A) HHD
(B) DVI
(C) SSD
(D) **USB (Correct Answer)** (Chosen option)

Question No.24

Marks: 1.00

Bookmark

Which among the following is a pointing device used in computers?

- (A) Copier
(B) Printer
(C) Web cam
(D) **Mouse (Correct Answer)** (Chosen option)

Question No.25

Marks: 1.00

Bookmark

What is the full form of Mbps?

- (A) Megabytes per second (Chosen option)
(B) **Megabits per second (Correct Answer)**
(C) Morebits per second
(D) Moviebits per second