

OSSC CGL 2022-23
E-BOOK- PDF
7,000 MCQ
EXPLANATION
All Important Questions & Answers

[Click Here](#)

MATH - ଓଡ଼ିଶାର
ସମସ୍ତ ପରୀକ୍ଷା ପୂର୍ବ ବର୍ଷ ପ୍ରଶ୍ନ
E-BOOK- PDF
1,800- MCQ
Topic Wise
OPSC, OSSC CGL, OSSSC, Police/Constable, B.ED, CHT, CT, OSSSC (RI, JC, LSI, OFDC, Group C)]

[Click Here](#)

ଓଡ଼ିଆ ବ୍ୟାକରଣ PYQ
ସମସ୍ତ ପରୀକ୍ଷା ପୂର୍ବ ବର୍ଷ ପ୍ରଶ୍ନ
E-BOOK- PDF
2,222 MCQ
TEST- 75
OPSC ASO, B.ED, CHT, CT, OAVS, OSSTET, OTET, ODISHA POLICE, OSSSC RI, OSSSC LSI, OSSSC OFDC, OSSSC Group C

[Click Here](#)

ENGLISH - ଓଡ଼ିଶାର
ସମସ୍ତ ପରୀକ୍ଷା ପୂର୍ବ ବର୍ଷ ପ୍ରଶ୍ନ
E-BOOK- PDF
3,600- MCQ
Topic Wise
OPSC, OSSC CGL, OSSSC, Police/Constable, B.ED, CHT, OTET, OSSTET CT, OSSSC (RI, JC, LSI, OFDC, Group C)

[Click Here](#)

REASONING - ଓଡ଼ିଶାର
ସମସ୍ତ ପରୀକ୍ଷା ପୂର୍ବ ବର୍ଷ ପ୍ରଶ୍ନ
E-BOOK- PDF
2,200- MCQ
Topic Wise
OPSC, OSSC CGL, OSSSC, Police/Constable, B.ED, CHT, OTET, OSSTET CT, OSSSC (RI, JC, LSI, OFDC, Group C)

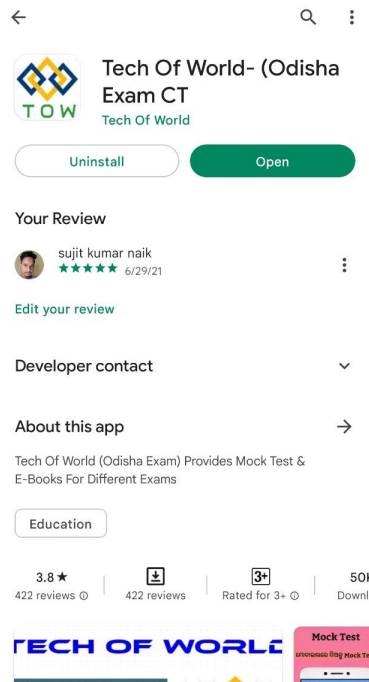
[Click Here](#)

COMPUTER - ଓଡ଼ିଶାର
ସମସ୍ତ ପରୀକ୍ଷା ପୂର୍ବ ବର୍ଷ ପ୍ରଶ୍ନ
E-BOOK- PDF
1,100- MCQ
Topic Wise
OPSC, OSSC CGL, OSSSC, Police/Constable, CHT, OSSSC (RI, JC, LSI, OFDC, Group C)

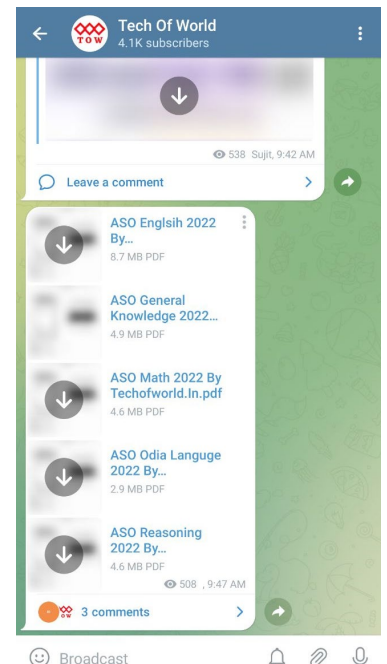
[Click Here](#)





[Click Here](#)



[Click Here](#)



[Click Here](#)

Roll No: Tech Of World App	Registered Photo	Exam Day Photo
Registration No: Tech Of World App		
Name: Tech Of World App		
Exam Date: 08-Nov-2022		
Exam Time: 12:15-14:15		
Post Name: BSSO 22		

Arithmetic - Arithmetic

Question No.1

Marks: 1.00

Bookmark

A Tours and Travel services has 136 buses available, of which 74 have A.C. What is the probability that a randomly selected vehicle will be a non A.C bus. (Upto two decimals)

- (A) 0.35
- (B) 0.65
- (C) 0.45 (Correct Answer)
- (D) 0.55

Question No.2

Marks: 1.00

Bookmark

Two numbers are in the ratio of 84:85. If the HCF of the numbers is 46, find the smallest number.

- (A) 3764
- (B) 3664
- (C) 3964
- (D) 3864 (Correct Answer) (Chosen option)

Question No.3

Marks: 1.00

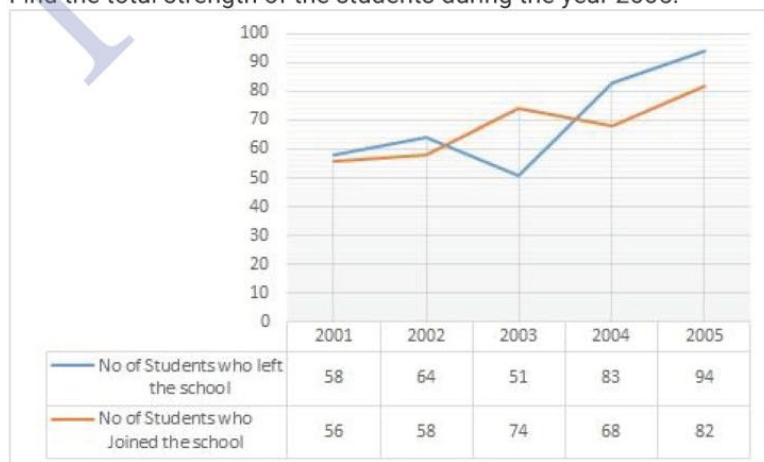
Bookmark

Direction:

Study the following line chart which gives the number of students who joined and left the school in the beginning of the year for five years, from 2001 to 2005.

Initial Strength of school in 2450

Find the total strength of the students during the year 2005.



- (A) 2538
- (B) 2738
- (C) 2438 (Correct Answer) (Chosen option)
- (D) 2638

Question No.4

Marks: 1.00

Bookmark

Find the area of the equilateral triangle whose side is 164 cm. (In cm^2)

- (A) $6624\sqrt{3}$
(B) $6714\sqrt{3}$
(C) $6724\sqrt{3}$ (Correct Answer) (Chosen option)
(D) $6704\sqrt{3}$

Question No.5

Marks: 1.00

Bookmark

Find $(a+b+c)^2$, given that $a^2 = 529$, $b^2 = 289$, $c^2 = 144$ and $2ab+2ac+2bc = 1742$.

- (A) 2704 (Correct Answer) (Chosen option)
(B) 2904
(C) 2804
(D) 2604

Question No.6

Marks: 1.00

Bookmark

What is the difference between a discount of 20% on Rs.12000 and two successive discounts of 15% and 5% on the same amount? (In Rs.)

- (A) 80
(B) 90 (Correct Answer) (Chosen option)
(C) 85
(D) 75

Question No.7

Marks: 1.00

Bookmark

A man covered a distance of 6021 km at speed of 223 kmph. Find the time taken to cover the given distance. (In hours)

- (A) 25
(B) 29
(C) 23
(D) 27 (Correct Answer) (Chosen option)

Question No.8

Marks: 1.00

Bookmark

In how many different ways can the letters of the word 'CAREFUL' be arranged in such a way that the vowels always come together?

- (A) 710
(B) 730
(C) 720 (Correct Answer)
(D) 740

Question No.9

Marks: 1.00

Bookmark

Tap A can fill a cistern in 186 hours while tap B can fill it in 279 hours. In how many hours the cistern will be filled if both A and B are opened together?

- (A) 115.6
(B) 109.6
(C) 111.6 (Correct Answer) (Chosen option)

(D) 113.6

Question No.10

Marks: 1.00

Bookmark

If A drives from X to Y at 66 kmph and then from Y to X at 112 kmph, what is the average speed for the whole journey? (In kmph - Rounding off to two decimals)

- (A) 85.06
(B) **83.06 (Correct Answer)** (Chosen option)
(C) 87.06
(D) 81.06

Question No.11

Marks: 1.00

Bookmark

Find the smallest number which when reduced by 18, is divisible 22, 25 and 20.

- (A) 1148
(B) 1128
(C) 1138
(D) **1118 (Correct Answer)** (Chosen option)

Question No.12

Marks: 1.00

Bookmark

Twenty years ago, A was half of B in age. If the ratio of their present ages is 3:4, what will be the total of their present ages? (In years)

- (A) 72
(B) 74
(C) 76
(D) **70 (Correct Answer)** (Chosen option)

Question No.13

Marks: 1.00

Bookmark

A and B can do a work in 366 days, B and C can do it in 183 days, A and C can do it in 122 days. In what time A, B and C together can do the work? (In days)

- (A) 124
(B) **122 (Correct Answer)** (Chosen option)
(C) 126
(D) 128

Question No.14

Marks: 1.00

Bookmark

What value should come in the place of question mark (?) in the following question?
 $135(4/3) + 50(3/2) - 140(3/4) = ? - 160(2/5)$

- (A) 234
(B) **214 (Correct Answer)** (Chosen option)
(C) 224
(D) 244

Question No.15

Marks: 1.00

Bookmark

Find the value of $\sqrt{19.36} + \sqrt{0.1936} + \sqrt{0.001936}$

- (A) 7.884
(B) **4.884 (Correct Answer)** (Chosen option)

(C) 5.884

(D) 6.884

Question No.16

Marks: 1.00

Bookmark

Find the sum invested at compound interest at 20% per annum which will amount to Rs.3168 in 2 years.

(A) 2300

(B) 2400

(C) 2100

(D) **2200 (Correct Answer)** (Chosen option)

Question No.17

Marks: 1.00

Bookmark

A sum of money is invested at 10% per annum compounding annually for 2 years. If the interest received is Rs.462, find the principal.(In Rs.)

(A) **2200 (Correct Answer)** (Chosen option)

(B) 2300

(C) 2500

(D) 2400

Question No.18

Marks: 1.00

Bookmark

Solve:

$$458 + (239 \div 5) = ?$$

(A) 525.8

(B) 535.8

(C) 515.8

(D) **505.8 (Correct Answer)** (Chosen option)

Question No.19

Marks: 1.00

Bookmark

There are 208 flowers in a bundle, 73 of which contain yellow flowers. What is the probability of selecting a yellow flower at random? (In % and Upto two decimals)

(A) **35.09 (Correct Answer)**

(B) 37.09

(C) 33.09

(D) 39.09

Question No.20

Marks: 1.00

Bookmark

If two numbers are in the ratio 4:7 and their sum is 1331, find the value of the smaller number.

(A) 464

(B) **484 (Correct Answer)** (Chosen option)

(C) 494

(D) 474

Question No.21

Marks: 1.00

Bookmark

In how many ways 12 different rings can be worn in 3 fingers with at most one in each finger?

(A) 1420

(B) **1320 (Correct Answer)**

(C) 1120

(D) 1220

Question No.22

Marks: 1.00

Bookmark

Find the mean for the following list of values:

113,115,123,117,115,113,115,123,117,115.

(A) 118.6

(B) 114.6

(C) 112.6

(D) **116.6 (Correct Answer)** (Chosen option)

Question No.23

Marks: 1.00

Bookmark

A works twice as fast as B. If B can complete the work in 87 days independently, the number of days in which A and B can together finish the work is:

(A) 23

(B) 27

(C) **29 (Correct Answer)** (Chosen option)

(D) 25

Question No.24

Marks: 1.00

Bookmark

Solve:

$31.65 - 49.85 - 28.75 + 75.15 = ?$

(A) 26.5

(B) **28.2 (Correct Answer)** (Chosen option)

(C) 25.2

(D) 27.2

Question No.25

Marks: 1.00

Bookmark

At what time between 3 and 4 o'clock will the hands of a clock be at right angle for the first time?

(A) 30(8/11) minutes past 3

(B) **32(8/11) minutes past 3 (Correct Answer)**

(C) 36(8/11) minutes past 3

(D) 34(8/11) minutes past 3

Analytical and Reasoning Ability - Analytical and Reasoning Ability

Question No.1

Marks: 1.00

Bookmark

What should be written in the place of question mark in the given series?

F1, H4, J9, ?, N25

(A) K16

(B) **L16 (Correct Answer)** (Chosen option)

(C) L22

(D) K11

Question No.2

Bookmark

Choose the alternative which is an odd word/number/letter pair out of the given alternatives.

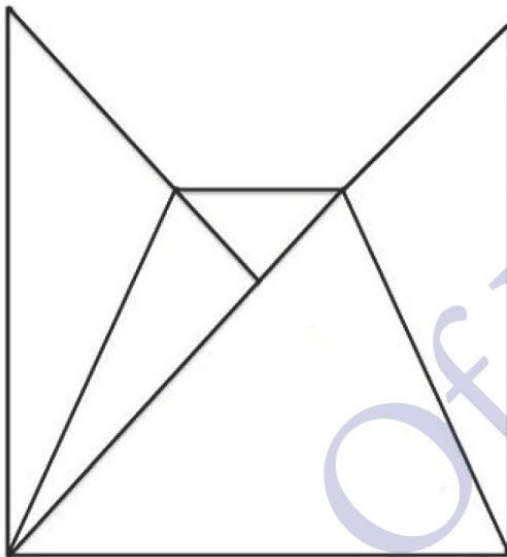
- (A) **Unclear (Correct Answer)** (Chosen option)
(B) Obvious
(C) Evident
(D) Noticeable

Question No.3

Marks: 1.00

Bookmark

How many triangles are there in the given figure?



- (A) 9
(B) 7
(C) **8 (Correct Answer)** (Chosen option)
(D) 10

Question No.4

Marks: 1.00

Bookmark

If + means \div , \times means +, \div means - & - means \times , then,
 $78 + 6 - 3 \times 12 - 3 \times 43 = ?$

- (A) 129
(B) 131
(C) **118 (Correct Answer)** (Chosen option)
(D) 127

Question No.5

Marks: 1.00

Bookmark

One evening Sri met his friend Sara on his way to office. Sara's shadow falls exactly to the left of Sri. If they face opposite to each other, which direction is Sri facing?

- (A) West
(B) East
(C) **South (Correct Answer)**
(D) North (Chosen option)

Question No.6

Marks: 1.00

Bookmark

"Each question given below consists of a statement, followed by two arguments numbered 1 and 2. You have to decide which of the arguments is a 'strong' argument and which is a 'weak' argument.

Give answer:

- (A) If only argument1 is strong
- (B) If only argument 2 is strong
- (C) If either 1 or 2 is strong
- (D) If neither 1 nor 2 is strong and
- (E) If both 1 and 2 are strong.

Statement: Should one prefer MNC to start-up?

Argument:

1. Yes, working for a large company offers more career opportunities.
2. Yes, one meets diversity while working with people from ethnically different cultures.

- (A) A (Chosen option)
- (B) B
- (C) E (Correct Answer)
- (D) C

Question No.7

Marks: 1.00

Bookmark

"Each question given below consists of a statement, followed by two arguments numbered 1 and 2. You have to decide which of the arguments is a 'strong' argument and which is a 'weak' argument.

Give answer:

- (A) If only argument1 is strong
- (B) If only argument 2 is strong
- (C) If either 1 or 2 is strong
- (D) If neither 1 nor 2 is strong and
- (E) If both 1 and 2 are strong.

Statement: Should we promote gender equality?

Argument:

1. Yes, Gender equality prevents violence against women and girls.
2. No, men do not benefit from gender equality.

- (A) A (Correct Answer) (Chosen option)
- (B) C
- (C) D
- (D) B

Question No.8

Marks: 1.00

Bookmark

Select the combination of numbers so that letters arranged accordingly will form a meaningful word.

1.E 2.V 3.R 4.I 5.R

- (A) 3, 4, 5, 2, 1
- (B) 2, 1, 4, 5, 3
- (C) 3, 4, 2, 1, 5 (Correct Answer) (Chosen option)
- (D) 2, 1, 3, 5, 4

Question No.9

Marks: 1.00

Bookmark

What will be written in the place of question mark in the given series?

G7B2L12Y25?11

- (A) M
(B) L
(C) K (Correct Answer) (Chosen option)
(D) J

Question No.10

Marks: 1.00

Bookmark

P is the brother of Q. R is the sister of Q. S is the father of R. How is P's wife related to S?

- (A) Niece
(B) Daughter
(C) Daughter-in-law (Correct Answer) (Chosen option)
(D) Mother-in-law

Question No.11

Marks: 1.00

Bookmark

In this question, relationship between different elements is shown in the statement. This statement is followed by two conclusions:

Statements: $T > H > U \leq R < S = D < A \leq Y$

Conclusion:

- i) $U < D$
ii) $Y > S$

Choose the appropriate one from the following options

- (A) Only conclusion i follows
(B) Only conclusion ii follows
(C) Either i or ii follows
(D) Neither i nor ii follows
(E) Both i and ii follow.
(A) B
(B) E (Correct Answer) (Chosen option)
(C) A
(D) C

Question No.12

Marks: 1.00

Bookmark

Which of the following sets of signs should be used to replace * in the following?

 $10 * 48 * 12 = 8 * 4 * 8$

- (A) $\div \times + \times$
(B) $\times \div \times +$ (Correct Answer) (Chosen option)
(C) $\times - + \times$
(D) $\div + \times -$

Question No.13

Marks: 1.00

Bookmark

In the following question, few statements are given and these statements are followed by two conclusions numbered i and ii. You have to take the given statements to be true even if they seem to be at variance from commonly known facts. Read the conclusions and then decide which of the given conclusions logically follows from the given statements, disregarding commonly known facts.

Choose,

- (A) Only (i) conclusion follows
 (B) Only (ii) conclusion follows
 (C) Neither (i) nor (ii) follows
 (D) Both (i) and (ii) follow
 (E) Either (i) or (ii) follows

Statements: All seeds are fruits. All fruits are vegetables. All vegetables are plants.

Conclusions:

- i) All seeds are vegetables.
 ii) All fruits are plants.

- (A) **D (Correct Answer)** (Chosen option)
 (B) B
 (C) A
 (D) C

Question No.14

Marks: 1.00

Bookmark

In a flower shop, there are 500 baskets full of flowers. 40% of the baskets contain Lily, 65% of the baskets contain Jasmine and 15% of the baskets contain both Lily and Jasmine. Some of the baskets contain neither Lily nor Jasmine.

How many baskets contain neither Lily nor Jasmine?

- (A) 100
 (B) **50 (Correct Answer)** (Chosen option)
 (C) 150
 (D) 70

Case Study - 15 to 16

2.00

Directions :

The following table gives the marks obtained by five students in four different subjects in an examination.

150 is Maximum Marks in Each Subject.

Students	Subjectwise Marks obtained in each subjects			
	Maths	Chemistry	Physics	Computer Science
Anderson	71	62	70	63
Arlo	89	80	88	81
Angelo	91	82	90	83
Andy	106	97	105	98
Alexis	98	89	97	90

Question No.15

Marks: 1.00

Bookmark

What is the overall percentage of Andy?(rounded off to one digit after decimal)

- (A) 44.3
 (B) 62.3
 (C) 57.6
 (D) **67.6 (Correct Answer)** (Chosen option)

Question No.16

Marks: 1.00

Bookmark

What is the average mark obtained by all the five students in Maths? (rounded off to one digit after decimal)

- (A) **91 (Correct Answer)** (Chosen option)
 (B) 82

- (C) 90
- (D) 83

Question No.17

Marks: 1.00

Bookmark

Pointing to a man, a lady said, "He has no siblings and his brother-in-law is my mother's husband's only daughter's brother." How is the man related to the lady?

- (A) Father-in-law
- (B) **Husband (Correct Answer)**
- (C) Brother-in-law (Chosen option)
- (D) Uncle

Question No.18

Marks: 1.00

Bookmark

In a certain code language, if GLOBE is coded as TOLYV, then how is RAPID coded in that language?

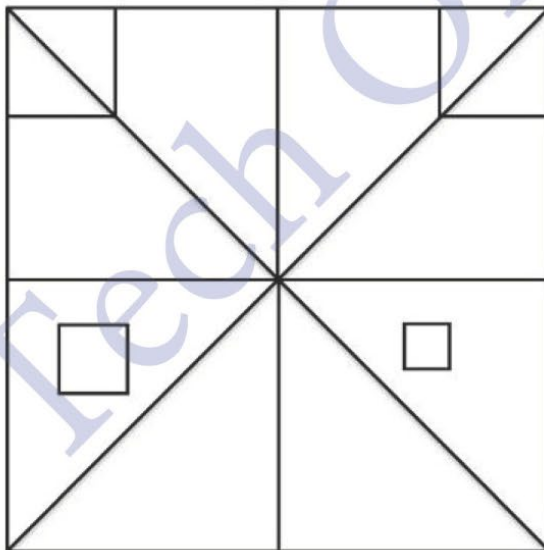
- (A) **IZKRW (Correct Answer)** (Chosen option)
- (B) JOVGX
- (C) EVTHM
- (D) VETMH

Question No.19

Marks: 1.00

Bookmark

How many squares are there in the given figure?



- (A) 5
- (B) 7
- (C) 8
- (D) **9 (Correct Answer)** (Chosen option)

Question No.20

Marks: 1.00

Bookmark

Replace the question mark with an option that follows the same logic applied in the first pair

Reserved : Quiet :: Intelligent : ??

- (A) Foolish

- (B) **Clever (Correct Answer)** (Chosen option)
(C) Idiotic
(D) Ignorant

Question No.21

Marks: 1.00

Bookmark

In a certain code language, if ANGLE is coded as DQJOH, then how is DOING coded in that language?

- (A) **GRLQJ (Correct Answer)** (Chosen option)
(B) KRMSH
(C) WLFYG
(D) RGLJQ

Question No.22

Marks: 1.00

Bookmark

Choose the alternative which is an odd word/number/letter pair out of the given alternatives.

- (A) Resist
(B) **Accept (Correct Answer)** (Chosen option)
(C) Oppose
(D) Dispute

Question No.23

Marks: 1.00

Bookmark

In this question, relationship between different elements is shown in the statement. This statement is followed by two conclusions:

Statements: $F > A = M < I \leq L < Y$

Conclusion:

- i) $F < L$
ii) $Y > F$

Choose the appropriate one from the following options

- (A) Only conclusion i follows
(B) Only conclusion ii follows
(C) Either i or ii follows
(D) Neither i nor ii follows
(E) Both i and ii follow.
(A) A
(B) B
(C) **D (Correct Answer)** (Chosen option)
(D) C

Question No.24

Marks: 1.00

Bookmark

Replace the question mark with an option that follows the same logic applied in the first pair

HNT : KQW :: ?? : MRE

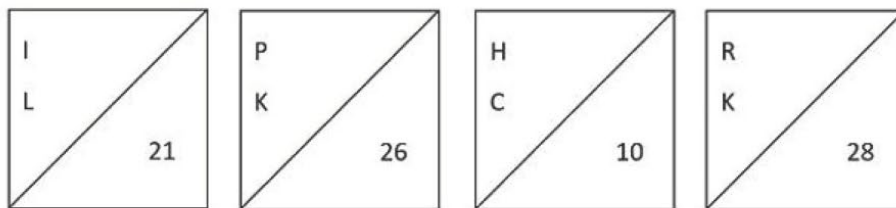
- (A) **JOB (Correct Answer)** (Chosen option)
(B) JPA
(C) KOA
(D) KPB

Question No.25

Marks: 1.00

Bookmark

Find the odd image out in the given series.



(1)

(2)

(3)

(4)

- (A) **1 (Correct Answer)** (Chosen option)
 (B) 4
 (C) 3
 (D) 2

General Awareness and Current Events - General Awareness and Current Events

Question No.1

Marks: 1.00

Bookmark

Which of the following is a harvest festival mainly observed by people of Western Odisha?

- (A) **Nuakhai (Correct Answer)** (Chosen option)
 (B) Baliyatra
 (C) Budi Thakurani Yatra
 (D) Raja Parba

Question No.2

Marks: 1.00

Bookmark

Who is known as the 'Milkman of India'?

- (A) Sam Pitroda
 (B) M.S. Swaminathan
 (C) **Vergheese Kurien (Correct Answer)** (Chosen option)
 (D) P C Mahalanobis

Question No.3

Marks: 1.00

Bookmark

What is the full form of 'HTTP' in computer terminology?

- (A) HyperText Temporary Protocol
 (B) **HyperText Transfer Protocol (Correct Answer)** (Chosen option)
 (C) HyperText Terminal Protocol
 (D) HyperText Technical Protocol

Question No.4

Marks: 1.00

Bookmark

The Phillips curve shows the relationship between:

- (A) **Inflation and Unemployment (Correct Answer)** (Chosen option)
 (B) GDP and Inflation
 (C) GDP and Poverty
 (D) Income and GDP

Question No.5

Marks: 1.00

<p>Before Indian Independence, who among the following became the president of the Indian National Congress thrice?</p> <p>(A) <input type="radio"/> Gopal krishna Gokhale</p> <p>(B) <input type="radio"/> Surendranath Banerjee</p> <p>(C) <input type="radio"/> Satyendra Prasanna Sinha</p> <p>(D) <input type="radio"/> Dadabhai Naoroji (Correct Answer) (Chosen option)</p>	Bookmark <input type="checkbox"/>
<p>Question No.6</p> <p>Which of the following dynasties of Delhi Sultanate is also called 'Mamluk Dynasty'?</p> <p>(A) <input type="radio"/> Tuqlaq Dynasty</p> <p>(B) <input type="radio"/> Khalji Dynasty</p> <p>(C) <input type="radio"/> Slave dynasty (Correct Answer) (Chosen option)</p> <p>(D) <input type="radio"/> Sayyid dynasty</p>	Marks: 1.00 Bookmark <input type="checkbox"/>
<p>Question No.7</p> <p>Which of the following rivers has a source inside Odisha, but flows through other states?</p> <p>(A) <input type="radio"/> Brahmani (Chosen option)</p> <p>(B) <input type="radio"/> Subarnarekha</p> <p>(C) <input type="radio"/> Bahudu (Correct Answer)</p> <p>(D) <input type="radio"/> Mahanadi</p>	Marks: 1.00 Bookmark <input type="checkbox"/>
<p>Question No.8</p> <p>What is the full form of 'XML' in computer terminology?</p> <p>(A) <input type="radio"/> Extendable Markup Language (Chosen option)</p> <p>(B) <input type="radio"/> Embedded Markup Language</p> <p>(C) <input type="radio"/> Effective Markup Language</p> <p>(D) <input type="radio"/> Extensible Markup Language (Correct Answer)</p>	Marks: 1.00 Bookmark <input type="checkbox"/>
<p>Question No.9</p> <p>Who was the author of a Sanskrit drama 'Parasurama Vijaya'?</p> <p>(A) <input type="radio"/> Purusottama deva (Chosen option)</p> <p>(B) <input type="radio"/> Prataprudra deva</p> <p>(C) <input type="radio"/> Krishnadevaraya</p> <p>(D) <input type="radio"/> Kapilendra deva (Correct Answer)</p>	Marks: 1.00 Bookmark <input type="checkbox"/>
<p>Question No.10</p> <p>Ken and Betwa are the tributaries of which of the following rivers?</p> <p>(A) <input type="radio"/> River Son</p> <p>(B) <input type="radio"/> River Yamuna (Correct Answer) (Chosen option)</p> <p>(C) <input type="radio"/> River Chambal</p> <p>(D) <input type="radio"/> River Ghagra</p>	Marks: 1.00 Bookmark <input type="checkbox"/>
<p>Question No.11</p> <p>Where is the headquarters of UNESCO (United Nations Educational, Scientific and</p>	Marks: 1.00 Bookmark <input type="checkbox"/>

Cultural Organisation) located?

- (A) New York, USA
(B) Geneva, Switzerland
(C) Paris, France (Correct Answer) (Chosen option)
(D) Rome, Italy

Question No.12

Marks: 1.00

Bookmark

Which city is known as the financial capital of India?

- (A) Bengaluru
(B) Surat
(C) New Delhi
(D) Mumbai (Correct Answer) (Chosen option)

Question No.13

Marks: 1.00

Bookmark

Meghalaya shares its border with which of the following countries?

- (A) Bangladesh (Correct Answer)
(B) Nepal
(C) China
(D) Myanmar (Chosen option)

Question No.14

Marks: 1.00

Bookmark

The Deposit Insurance and Credit Guarantee Corporation(DICGC) insures principal and interest up to a maximum amount of:

- (A) ₹ Two lakhs
(B) ₹ One lakh
(C) ₹ Three lakhs
(D) ₹ Five lakhs (Correct Answer)

Question No.15

Marks: 1.00

Bookmark

Dipika Pallikal is a distinguished personality in which of the following sports/games?

- (A) Squash (Correct Answer) (Chosen option)
(B) Badminton
(C) Lawn Tennis
(D) Table Tennis

Question No.16

Marks: 1.00

Bookmark

Who among the following will take oath as the 50th Chief Justice of India on November 9, 2022?

- (A) Justice Sanjay Kishan Kaul
(B) Justice D.Y. Chandrachud (Correct Answer)
(C) Justice S. Abdul Nazeer
(D) Justice Uday Umesh Lalit

Question No.17

Marks: 1.00

Bookmark

A bill introduced by any member of Parliament other than a minister is known as:

- (A) Public Bill
(B) **Private Bill (Correct Answer)**
(C) Treasury Bill
(D) Money Bill (Chosen option)

Question No.18

Marks: 1.00

Bookmark

Surya Kiran is a joint military exercise between India and which of the following countries?

- (A) **Nepal (Correct Answer)** (Chosen option)
(B) Sri Lanka
(C) China
(D) Bangladesh

Question No.19

Marks: 1.00

Bookmark

Which among the following Bhakti Saints gave the title of 'Atibadi' to Jagannatha Das?

- (A) Vallabhacharya
(B) Madhvacharya
(C) Saint Tukaram
(D) **Chaitanya Mahaprabhu (Correct Answer)** (Chosen option)

Question No.20

Marks: 1.00

Bookmark

Oslo is the capital of _____.

- (A) Russia
(B) Poland
(C) **Norway (Correct Answer)** (Chosen option)
(D) Rwanda

Question No.21

Marks: 1.00

Bookmark

How many Particularly Vulnerable Tribal Groups(PVTGs) are there in Odisha?

- (A) Ten
(B) **Thirteen (Correct Answer)**
(C) Eleven
(D) Twelve (Chosen option)

Question No.22

Marks: 1.00

Bookmark

Bihu is a folk dance form of which of the following states?

- (A) Karnataka
(B) Punjab
(C) **Assam (Correct Answer)** (Chosen option)
(D) Odisha

Question No.23

Marks: 1.00

Bookmark

Giorgia Meloni is the first female Prime Minister of which country?

- (A) **Italy (Correct Answer)** (Chosen option)
(B) Sweden

- (C) Germany
(D) Brazil

Question No.24

Marks: 1.00

Bookmark

Which of the following sectors has the highest percentage of working population in India?

- (A) Secondary Sector
(B) Quaternary Sector
(C) Tertiary Sector (Chosen option)
(D) Primary sector (Correct Answer)

Question No.25

Marks: 1.00

Bookmark

Who appoints the Chairman of State Administrative Tribunal in India?

- (A) Union Ministry of Home Affairs
(B) Chief Justice of India
(C) Governor of the State (Chosen option)
(D) President of India (Correct Answer)

Computer and Internet Awareness - Computer and Internet Awareness**Question No.1**

Marks: 1.00

Bookmark

The text alignment option that will move the text horizontally between the side margins is:

- (A) Center (Correct Answer) (Chosen option)
(B) Corner
(C) Justify
(D) Left

Question No.2

Marks: 1.00

Bookmark

You can add blurred text like 'confidential', 'Do not copy' or pictures such as logo, behind the text of a Word document using the _____ option.

- (A) Wordart
(B) Watermark (Correct Answer) (Chosen option)
(C) Borders
(D) Shading

Question No.3

Marks: 1.00

Bookmark

You can get the workbook insights such as count of sheets, cells with data, tables etc. using _____ option.

- (A) Comments
(B) Quick lookup
(C) Workbook Statistics (Correct Answer)
(D) Smart Count (Chosen option)

Question No.4

Marks: 1.00

Bookmark

Which among the following is an example of an e-Commerce website?

- (A) Facebook.com
- (B) Google.com
- (C) Gmail.com
- (D) **Amazon.com (Correct Answer)** (Chosen option)

Question No.5

Marks: 1.00

Bookmark

_____ option in Microsoft Word allows you to link a chart or graphic to other parts of the same document.

- (A) Page Layout (Chosen option)
- (B) Print Preview
- (C) **Cross reference (Correct Answer)**
- (D) Handouts

Question No.6

Marks: 1.00

Bookmark

Which electronic components are used in Fourth Generation Computers?

- (A) Vacuum Tubes
- (B) Integrated Circuits
- (C) **VLSI Microprocessors (Correct Answer)** (Chosen option)
- (D) Transistors

Question No.7

Marks: 1.00

Bookmark

The gaps created in the hard drive memory while deleting files over the period of time is called _____.

- (A) Memory reset
- (B) **Memory fragmentation (Correct Answer)** (Chosen option)
- (C) Memory restoration
- (D) Memory encryption

Question No.8

Marks: 1.00

Bookmark

_____ controls the way in which the computer system functions and provides the means by which users can interact with the computer.

- (A) **The operating system (Correct Answer)** (Chosen option)
- (B) Application software
- (C) The platform
- (D) The Motherboard

Question No.9

Marks: 1.00

Bookmark

In Microsoft Word, _____ option is used to provide additional information about a word with in a document.

- (A) Tables and Objects
- (B) Header and Footer
- (C) Word art and Object (Chosen option)
- (D) **Footnotes and Endnotes (Correct Answer)**

Question No.10

Marks: 1.00

Bookmark

In MS-Word, the Header and Footer group is available in _____ Tab.

- (A) **Insert (Correct Answer)**
(B) References
(C) Home
(D) Page Layout (Chosen option)

Question No.11

Marks: 1.00

Bookmark

What is the shortcut key to invoke font formatting in MS Word?

- (A) **Ctrl + Shift + f (Correct Answer)** (Chosen option)
(B) Ctrl + Shift + t
(C) Ctrl + Shift + g
(D) Ctrl + Shift + s

Question No.12

Marks: 1.00

Bookmark

You can lock your computer by pressing _____ shortcut keys.

- (A) Ctrl + L
(B) Windows + D
(C) Ctrl + D (Chosen option)
(D) **Windows + L (Correct Answer)**

Question No.13

Marks: 1.00

Bookmark

A cell whose value is used in other cells is called _____.

- (A) Adjacent cell
(B) **Precedent cell (Correct Answer)** (Chosen option)
(C) Merge cell
(D) Data cell

Question No.14

Marks: 1.00

Bookmark

What is the full form of HTTP?

- (A) Hyper Tool Transfer Protocol
(B) **Hyper Text Transfer Protocol (Correct Answer)** (Chosen option)
(C) Highlighted Text Transfer Protocol
(D) Hiding Text Transfer Protocol

Question No.15

Marks: 1.00

Bookmark

Which among the following is a device that is used to connect more number of LANs?

- (A) Bridge
(B) **Router (Correct Answer)**
(C) Switch (Chosen option)
(D) Repeater

Question No.16

Marks: 1.00

Bookmark

We can refresh the connection outside the web book in Excel using _____.

- (A) force update

- (B) reapply
(C) **data connections (Correct Answer)**
(D) data link (Chosen option)

Question No.17

Marks: 1.00

Bookmark

In MS PowerPoint, the 'Compare' option is available in which menu?

- (A) File
(B) Format
(C) View
(D) **Review (Correct Answer)** (Chosen option)

Question No.18

Marks: 1.00

Bookmark

ALU stands for _____.

- (A) Assembly Logic Unit
(B) Arithmetic Logical Unit
(C) Arithmetic Logical Array
(D) **Arithmetic Logic Unit (Correct Answer)** (Chosen option)

Question No.19

Marks: 1.00

Bookmark

Which among the following utilities from the administrative tools helps you choose the windows startup options such as Normal, Diagnostic and Selective startup?

- (A) Registry Editor
(B) **System Configuration (Correct Answer)**
(C) System Information
(D) Task Scheduler

Question No.20

Marks: 1.00

Bookmark

_____ is/ are a pointed arrow that represents the location on the screen that you want to select.

- (A) **Mouse cursor (Correct Answer)**
(B) Sticky notes
(C) Icons (Chosen option)
(D) Clipart

Question No.21

Marks: 1.00

Bookmark

In MS-Excel, the cell in sixth row and third column is named as _____.

- (A) 6_C
(B) 6C
(C) C_6
(D) **C6 (Correct Answer)** (Chosen option)

Question No.22

Marks: 1.00

Bookmark

Which among the following output ports gives you 4K resolution?

- (A) VGA
(B) **HDMI 2.0 (Correct Answer)**

- (C) RCA
(D) S-VIDEO

Question No.23

Marks: 1.00

Bookmark

The key combination that opens the File Explorer in Windows is:

- (A) Windows + O
(B) Windows + F (Chosen option)
(C) **Windows + E (Correct Answer)**
(D) Windows + X

Question No.24

Marks: 1.00

Bookmark

The process that antivirus software performs to isolate the files that are infected by the virus is called _____.

- (A) Encryption
(B) Compression
(C) **Quarantine (Correct Answer)**
(D) Fragmentation (Chosen option)

Question No.25

Marks: 1.00

Bookmark

Which type of section break helps to start a new section on the same page in Microsoft Word?

- (A) **Continuous (Correct Answer)**
(B) Odd page
(C) Insert page (Chosen option)
(D) Even page

