



**OSSC CGL 2022-23**  
**E-BOOK- PDF**  
**7,000 MCQ**  
**EXPLANATION**



**All Important Questions & Answers**

[Click Here](#)


**MATH - ଓଡ଼ିଶାର**  
**ସମସ୍ତ ପରୀକ୍ଷା ପୂର୍ବ ବର୍ଷ ପ୍ରଶ୍ନ**  
**E-BOOK- PDF**  
**1,800- MCQ**  
**Topic Wise**



**OPSC, OSSC CGL, OSSSC, Police/Constable, B.ED, CHT, CT, OSSSC (RI, JC, LSI, OFDC, Group C)]**

[Click Here](#)


**ଓଡ଼ିଆ ବ୍ୟାକରଣ PYQ**  
**ସମସ୍ତ ପରୀକ୍ଷା ପୂର୍ବ ବର୍ଷ ପ୍ରଶ୍ନ**  
**E-BOOK- PDF**  
**2,222 MCQ**  
**TEST- 75**



**OPSC ASO, B.ED, CHT, CT, OAVS, OSSTET, OTET, ODISHA POLICE, OSSSC RI, OSSSC LSI, OSSSC OFDC, OSSSC Group C**

[Click Here](#)


**ENGLISH - ଓଡ଼ିଶାର**  
**ସମସ୍ତ ପରୀକ୍ଷା ପୂର୍ବ ବର୍ଷ ପ୍ରଶ୍ନ**  
**E-BOOK- PDF**  
**3,600- MCQ**  
**Topic Wise**



**OPSC, OSSC CGL, OSSSC, Police/Constable, B.ED, CHT, OTET, OSSTET CT, OSSSC (RI, JC, LSI, OFDC, Group C)**

[Click Here](#)


**REASONING - ଓଡ଼ିଶାର**  
**ସମସ୍ତ ପରୀକ୍ଷା ପୂର୍ବ ବର୍ଷ ପ୍ରଶ୍ନ**  
**E-BOOK- PDF**  
**2,200- MCQ**  
**Topic Wise**



**OPSC, OSSC CGL, OSSSC, Police/Constable, B.ED, CHT, OTET, OSSTET CT, OSSSC (RI, JC, LSI, OFDC, Group C)**

[Click Here](#)

**COMPUTER - ଓଡ଼ିଶାର**  
**ସମସ୍ତ ପରୀକ୍ଷା ପୂର୍ବ ବର୍ଷ ପ୍ରଶ୍ନ**  
**E-BOOK- PDF**  
**1,100- MCQ**  
**Topic Wise**



**OPSC, OSSC CGL, OSSSC, Police/Constable, CHT, OSSSC (RI, JC, LSI, OFDC, Group C)**

[Click Here](#)

Tech of World

HOME VIDEOS PLAYLISTS COMMUNITY

**ଆମ Channel ରେ ଦେଖନ୍ତୁ Video**  
**ASO ଓଡ଼ିଶା ପୋଷ୍ଟାଲ CT ଓ B.Ed**  
**ଓଡ଼ିଶା ପୋଲିସ୍ SSC GD Railway**

**Tech of World**  
 SUBSCRIBE  
 315K subscribers • 928 videos

**+2 କିମ୍ବା +3 ପଢ଼ିବା ପରେ କେମିତି ଜଣେ ଶିକ୍ଷକ ହେଇପାରିବେ ?**  
**CT ଓ B.Ed ପରେ କଣ ?**

How To Become A Teacher After +2 Or +3 In Odisha ? How To Get A Teacher Job In Odisha ?

[Click Here](#)

Tech Of World- (Odisha Exam CT)

Uninstall Open

Your Review

sujit kumar naik ★★★★★ 6/29/21

Developer contact

About this app

Tech Of World (Odisha Exam) Provides Mock Test & E-Books For Different Exams

Education

3.8 ★ 422 reviews 422 reviews Rated for 3+ 50K+ Downloads

[Click Here](#)

Tech Of World 4.1K subscribers

ASO English 2022 By... 8.7 MB PDF



ASO General Knowledge 2022... 4.9 MB PDF

ASO Math 2022 By Techofworld.In.pdf 4.6 MB PDF

ASO Odia Language 2022 By... 2.9 MB PDF

ASO Reasoning 2022 By... 4.6 MB PDF

[Click Here](#)

Roll No: Tech Of World App Registration No: Tech Of World App Name: Tech Of World App Exam Date: 08-Nov-2022 Exam Time: 09:00-11:00 Post Name: BSSO 22	Registered Photo 	Exam Day Photo 
<b>Arithmetic - Arithmetic</b>		
<b>Question No.1</b> A train passes through a telegraph post in 72 seconds moving with a speed of 459 km per hour. Find the length of the train. (In metres) (A) <input type="radio"/> 9180 (Correct Answer) (Chosen option) (B) <input type="radio"/> 9380 (C) <input type="radio"/> 9280 (D) <input type="radio"/> 9480	Marks: 1.00 Bookmark <input type="checkbox"/>	
<b>Question No.2</b> The marked price on an item was Rs.3500 but the shopkeeper offered a double discount of 25% and 20%. How much did he finally sell the item for? (In Rs.) (A) <input type="radio"/> 1800 (B) <input type="radio"/> 2000 (C) <input type="radio"/> 1900 (D) <input type="radio"/> 2100 (Correct Answer) (Chosen option)	Marks: 1.00 Bookmark <input type="checkbox"/>	
<b>Question No.3</b> What value should come in the place of question mark (?) in the following question? $1.4 \times 2.3 + 1.8 \times 2.1 = ? - 15$ (A) <input type="radio"/> 16 (B) <input type="radio"/> 18 (C) <input type="radio"/> 20 (D) <input type="radio"/> 22 (Correct Answer) (Chosen option)	Marks: 1.00 Bookmark <input type="checkbox"/>	
<b>Question No.4</b> Find the radius of the circle whose area is $24025\pi$ . (In cm) (A) <input type="radio"/> 145 (B) <input type="radio"/> 135 (C) <input type="radio"/> 155 (Correct Answer) (Chosen option) (D) <input type="radio"/> 125	Marks: 1.00 Bookmark <input type="checkbox"/>	
<b>Question No.5</b> Pipe A can fill a tank in 333 minutes and Pipe B can empty the same tank in 666 minutes. If both pipes are opened together, how many minutes will it take to fill the empty tank? (A) <input type="radio"/> 666 (Correct Answer) (Chosen option) <input type="radio"/>	Marks: 1.00 Bookmark <input type="checkbox"/>	

- (B) 656  
(C)  646  
(D)  636

**Question No.6**

Marks: 1.00

Bookmark 

Solve:

$$111 - (111 \div 5) = ?$$

- (A)  84.8  
(B)  90.8  
(C)  86.8  
(D)  **88.8 (Correct Answer)** (Chosen option)

**Question No.7**

Marks: 1.00

Bookmark 

Using all the letters of the word 'HOSPITAL', how many distinct words can be formed?

- (A)  42320  
(B)  41320  
(C)  **40320 (Correct Answer)** (Chosen option)  
(D)  43320

**Question No.8**

Marks: 1.00

Bookmark 

A man covered a distance of 5625 km at speed of 225 kmph. Find the time taken to cover the given distance. (In hours)

- (A)  30  
(B)  35  
(C)  **25 (Correct Answer)** (Chosen option)  
(D)  20

**Question No.9**

Marks: 1.00

Bookmark 

In a team, there are 108 males and 189 females. What is the probability of a randomly selected person of the team to be a male? (In % and Upto two decimals)

- (A)  **36.36 (Correct Answer)** (Chosen option)  
(B)  38.36  
(C)  34.36  
(D)  40.36

**Question No.10**

Marks: 1.00

Bookmark 

The LCM of two numbers is 1860 and their ratio is 30:31. Find the two numbers.

- (A)  **60, 62 (Correct Answer)** (Chosen option)  
(B)  63, 65  
(C)  65, 61  
(D)  61, 63

**Question No.11**

Marks: 1.00

Bookmark What number divides  $\sqrt{0.000324}$  to give the result as 9?

- (A)  **0.002 (Correct Answer)** (Chosen option)



- (B)  0.008  
(C)  0.006  
(D)  0.004

**Question No.12**

Marks: 1.00

Bookmark 

10 students participated in the competition and each got different score. In how many ways can three different prizes be given.

- (A)  740  
(B)  710  
(C)  730  
(D)  **720 (Correct Answer)** (Chosen option)

**Question No.13**

Marks: 1.00

Bookmark 

If the arithmetic mean of 13 observations 161, 162, 164, 155, 163, 157, 159, X, 151, 159, 160, 154, 158 is 161. Find the value of "X" in the observations.

- (A)  188  
(B)  186  
(C)  **190 (Correct Answer)** (Chosen option)  
(D)  184

**Question No.14**

Marks: 1.00

Bookmark 

Find the reflex angle between the hands of a clock at 08.35.

- (A)  **312.5° (Correct Answer)** (Chosen option)  
(B)  322.5°  
(C)  332.5°  
(D)  342.5°

**Question No.15**

Marks: 1.00

Bookmark 

The product of two numbers is 2058 and their L.C.M is 294. Find the G.C.D of the numbers.

- (A)  5  
(B)  **7 (Correct Answer)** (Chosen option)  
(C)  9  
(D)  3

**Question No.16**

Marks: 1.00

Bookmark 

At the end of two years, what will be the compound interest at the rate of 10% p.a. on an amount of Rs.6500? (In Rs.)

- (A)  **1365 (Correct Answer)** (Chosen option)  
(B)  1165  
(C)  1465  
(D)  1265

**Question No.17**

Marks: 1.00

Bookmark 

A basket contains 40 black, 71 blue, and 44 red pens. Without looking, if Jerry chooses a

pen from the basket, what is the probability that he will select a black pen? (In % and Upto two decimals)

- (A)  29.8  
(B)  27.8  
(C)  **25.8 (Correct Answer)** (Chosen option)  
(D)  23.8

**Question No.18**

Marks: 1.00

Bookmark 

2 men and 3 boys can do a piece of work in 180 days while 3 men and 2 boys can do the same work in 144 days. In how many days can 5 men and 5 boys do the work?

- (A)  78  
(B)  **80 (Correct Answer)** (Chosen option)  
(C)  84  
(D)  82

**Question No.19**

Marks: 1.00

Bookmark 

The ratio of three numbers is 19:20:21 and their sum is 2460. Find the second number of the three numbers.

- (A)  805  
(B)  815  
(C)  **820 (Correct Answer)** (Chosen option)  
(D)  810

**Question No.20**

Marks: 1.00

Bookmark 

A is three years older than B who is twice as old as C. If the total of the ages of A, B and C is 38, then how old is B? (In years)

- (A)  12  
(B)  16  
(C)  18  
(D)  **14 (Correct Answer)** (Chosen option)

**Question No.21**

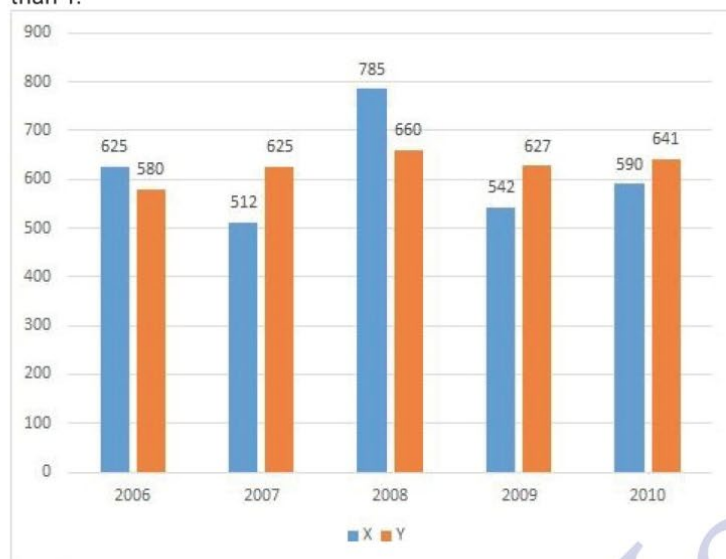
Marks: 1.00

Bookmark **Direction:**

In the given figure, the number of mobiles prepared by two different companies is given from 2006 to 2010. Answer the question based on the figure below.

For all the given years in the figure, find how many years X has prepared more mobiles

than Y.



- (A)  4  
 (B)  3 (Chosen option)  
 (C)  2 (Correct Answer)  
 (D)  1

**Question No.22**

Marks: 1.00

Bookmark

A can finish a work in 36 days and B can do the same work in 72 days. Working together, they will complete the same work in how many days?

- (A)  28  
 (B)  24 (Correct Answer) (Chosen option)  
 (C)  22  
 (D)  26

**Question No.23**

Marks: 1.00

Bookmark

Find the Principal (In Rs.) when:

Time = 15 years, Simple Interest = Rs.16200 and Rate of Interest = 9% p.a.

- (A)  15000  
 (B)  12000 (Correct Answer) (Chosen option)  
 (C)  13000  
 (D)  14000

**Question No.24**

Marks: 1.00

Bookmark

Find  $b^2$ , given that  $(a-b)^2 = 441$ ,  $a^2 = 2209$  and  $ab = 1222$ .

- (A)  646  
 (B)  676 (Correct Answer) (Chosen option)  
 (C)  666  
 (D)  656

**Question No.25**

Marks: 1.00

Bookmark

Solve:

$$589.75 + 251.75 - 479.15 = ?$$

- (A)  362.35 (Correct Answer) (Chosen option)  
 (B)  363.35  
 (C)  364.35  
 (D)  361.35

### Analytical and Reasoning Ability - Analytical and Reasoning Ability

#### Case Study - 1 to 2

2.00

#### Directions :

Study the following table and answer the questions.

Number of Candidates Appeared and Qualified in a Competitive Examination from different states over the years.

State	X		Y		Z	
	Appeared	Qualified	Appeared	Qualified	Appeared	Qualified
2001	45	34	42	31	50	39
2002	53	41	50	38	58	46
2003	78	69	75	66	83	74
2004	48	42	45	39	53	47
2005	77	55	74	52	82	60

#### Question No.1

Marks: 1.00

Bookmark 

Find the number of candidates who got Qualified from all the states during 2001 and 2005.

- (A)  293  
 (B)  285  
 (C)  271 (Correct Answer) (Chosen option)  
 (D)  269

#### Question No.2

Marks: 1.00

Bookmark 

What is the number of candidates who appeared from State Y during the given years?

- (A)  286 (Correct Answer) (Chosen option)  
 (B)  201  
 (C)  226  
 (D)  241

#### Question No.3

Marks: 1.00

Bookmark 

Choose the alternative which is an odd word/number/letter pair out of the given alternatives.

- (A)  Rapid  
 (B)  Brisk  
 (C)  Slow (Correct Answer) (Chosen option)  
 (D)  Quick

#### Question No.4

Marks: 1.00

Bookmark 

Which of the following sets of signs should be used to replace \* in the following?

$$8 * 7 * 6 = 18 * 64 * 2$$

- (A)   $\times - \div +$   
 (B)   $+ \times + \div$  (Correct Answer) (Chosen option)  
 (C)   $\times \div + \times$



(D)   $\div \times \times -$ **Question No.5**

Marks: 1.00

Bookmark 

In a certain code language, if ALTER is coded as 11220518, then how is DEPTH coded in that language?

- (A)  4506218  
 (B)  5416208  
 (C)  5406218  
 (D)  **4516208 (Correct Answer)** (Chosen option)

**Question No.6**

Marks: 1.00

Bookmark 

A is the mother of B and C. C is the father of D and E. How is E related to A?

- (A)  Granddaughter  
 (B)  **Either Grandson or Granddaughter (Correct Answer)** (Chosen option)  
 (C)  Grandmother  
 (D)  Grandson

**Question No.7**

Marks: 1.00

Bookmark 

Among 900 people in a group, 43% like football, 48% like cricket, 33% like hockey, 13% like football and cricket, 8% like cricket and hockey, 8% like football and hockey, 2% do not like any of the above games.

How many people like exactly two games?

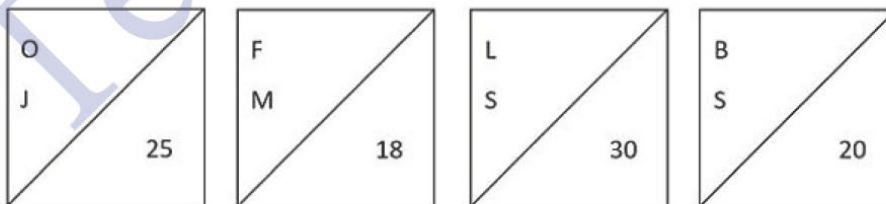
- (A)  **180 (Correct Answer)** (Chosen option)  
 (B)  72  
 (C)  117  
 (D)  27

**Question No.8**

Marks: 1.00

Bookmark 

Find the odd image out in the given series.



(1)

(2)

(3)

(4)

- (A)  3  
 (B)  4  
 (C)  2  
 (D)  **1 (Correct Answer)** (Chosen option)

**Question No.9**

Marks: 1.00

Bookmark 

Choose the alternative which is an odd word/number/letter pair out of the given alternatives.

- (A)  Vertical



- (B)  Straight  
(C)  **Circular (Correct Answer)** (Chosen option)  
(D)  Perpendicular

**Question No.10**

Marks: 1.00

Bookmark 

In this question, relationship between different elements is shown in the statement.

This statement is followed by two conclusions:

Statements:  $F < I \leq G = H < T > E \geq R > S$

Conclusion:

- i)  $I < T$   
ii)  $T > S$

Choose the appropriate one from the following options

- (A) Only conclusion i follows  
(B) Only conclusion ii follows  
(C) Either i or ii follows  
(D) Neither i nor ii follows  
(E) Both i and ii follow.  
(A)  **E (Correct Answer)** (Chosen option)  
(B)  C  
(C)  B  
(D)  A

**Question No.11**

Marks: 1.00

Bookmark 

Replace the question mark with an option that follows the same logic applied in the first pair

KT : PY :: HE : ??

- (A)  NJ  
(B)  **MJ (Correct Answer)** (Chosen option)  
(C)  NI  
(D)  MI

**Question No.12**

Marks: 1.00

Bookmark 

If + means  $\div$ ,  $\times$  means +,  $\div$  means - & - means  $\times$ , then,  
 $112 + 2 - 3 \div 20 - 2 \times 3 = ?$

- (A)  152  
(B)  147  
(C)  **131 (Correct Answer)** (Chosen option)  
(D)  143

**Question No.13**

Marks: 1.00

Bookmark 

"Each question given below consists of a statement, followed by two arguments numbered 1 and 2. You have to decide which of the arguments is a 'strong' argument and which is a 'weak' argument.

Give answer:

- (A) If only argument 1 is strong  
(B) If only argument 2 is strong  
(C) If either 1 or 2 is strong  
(D) If neither 1 nor 2 is strong and

(E) If both 1 and 2 are strong.

**Statement:** Should we avoid consuming junk food?

**Argument:**

1. No, it makes us feel so-yummy-good and makes us want to keep eating.

2. Yes, junk food is a highly processed food and contains a high amount of calories.

(A)  D

(B)  C

(C)  **B (Correct Answer)** (Chosen option)

(D)  A

**Question No.14**

Marks: 1.00

Bookmark

In a certain code language, if GRACE is coded as VKEIG, then how is RADIO coded in that language?

(A)  VOJGX

(B)  **EVHSM (Correct Answer)** (Chosen option)

(C)  IZWRL

(D)  VEHMS

**Question No.15**

Marks: 1.00

Bookmark

Select the combination of numbers so that letters arranged accordingly will form a meaningful word.

1. R 2. E 3. A 4. H 5. T

(A)  **2, 3, 1, 5, 4 (Correct Answer)** (Chosen option)

(B)  4, 1, 2, 3, 5

(C)  4, 1, 5, 2, 3

(D)  2, 4, 3, 1, 5

**Question No.16**

Marks: 1.00

Bookmark

One morning, Sri met his friend Sara on his way to office. Sara's shadow falls exactly to the left of Sri. If they face opposite to each other, which direction is Sri facing?

(A)  South (Chosen option)

(B)  West

(C)  **North (Correct Answer)**

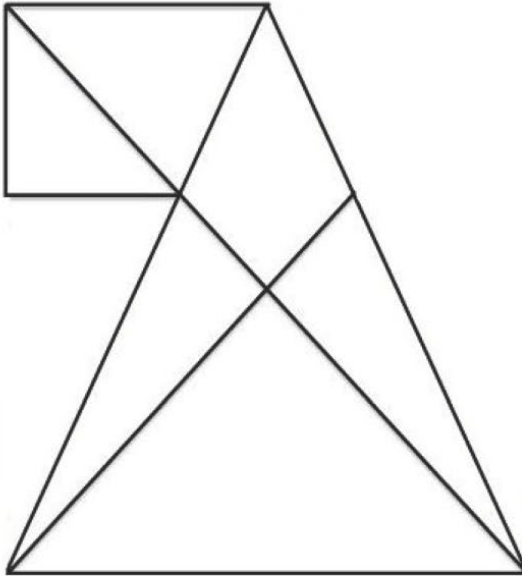
(D)  East

**Question No.17**

Marks: 1.00

Bookmark

How many triangles are there in the given figure?



- (A)  15 (Chosen option)
- (B)  10
- (C)  11 (Correct Answer)
- (D)  12

**Question No.18**

Marks: 1.00

Bookmark

"Each question given below consists of a statement, followed by two arguments numbered 1 and 2. You have to decide which of the arguments is a 'strong' argument and which is a 'weak' argument.

Give answer:

- (A) If only argument 1 is strong
- (B) If only argument 2 is strong
- (C) If either 1 or 2 is strong
- (D) If neither 1 nor 2 is strong and
- (E) If both 1 and 2 are strong.

**Statement:** Is it good to join a start-up company?

**Argument:**

- 1. No, one has to face challenges such as the likelihood of failure with respect to financial and statistical aspect.
- 2. No, it lacks job security.

- (A)  B
- (B)  C (Chosen option)
- (C)  E (Correct Answer)
- (D)  A

**Question No.19**

Marks: 1.00

Bookmark

In this question, relationship between different elements is shown in the statement. This statement is followed by two conclusions:

**Statements:**  $O < R \leq A = N < G > E$

**Conclusion:**

- i)  $G > O$
- ii)  $N > R$

Choose the appropriate one from the following options

- (A) Only conclusion i follows
- (B) Only conclusion ii follows
- (C) Either i or ii follows
- (D) Neither i nor ii follows
- (E) Both i and ii follow.

- (A)  C
- (B)  B
- (C)  D
- (D)  A (Correct Answer) (Chosen option)

**Question No.20**

Marks: 1.00

Bookmark

What should be written in the place of question mark in the given series?

B5, C10, E15, ?, L25

- (A)  H20 (Correct Answer) (Chosen option)
- (B)  I20
- (C)  J20
- (D)  G20

**Question No.21**

Marks: 1.00

Bookmark

Replace the question mark with an option that follows the same logic applied in the first pair

Seriousness : Humour :: Philanthropy : ??

- (A)  Inhumanity (Correct Answer) (Chosen option)
- (B)  Goodwill
- (C)  Patience
- (D)  Kindness

**Question No.22**

Marks: 1.00

Bookmark

In the following question, few statements are given and these statements are followed by two conclusions numbered i and ii. You have to take the given statements to be true even if they seem to be at variance from commonly known facts. Read the conclusions and then decide which of the given conclusions logically follows from the given statements, disregarding commonly known facts.

Choose,

- (A) Only (i) conclusion follows
- (B) Only (ii) conclusion follows
- (C) Neither (i) nor (ii) follows
- (D) Both (i) and (ii) follow
- (E) Either (i) or (ii) follows

**Statements:** Some seeds are fruits. All fruits are vegetables. All seeds are plants.

**Conclusions:**

- i) Some seeds are vegetables.
- ii) Some plants are fruits.

- (A)  C
- (B)  A
- (C)  D (Correct Answer) (Chosen option)
- (D)  B

**Question No.23**



Bookmark 

Pointing to a boy, a lady said, " His mother is my father's mother's only daughter's only brother's only daughter." How is the lady related to the boy?

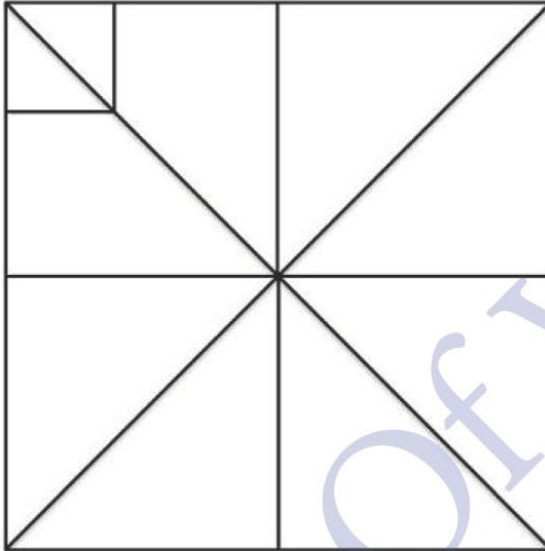
- (A)  Sister  
(B)  Aunt (Chosen option)  
(C)  **Mother (Correct Answer)**  
(D)  Grandmother

**Question No.24**

Marks: 1.00

Bookmark 

How many squares are there in the given figure?



- (A)  7  
(B)  **6 (Correct Answer)** (Chosen option)  
(C)  8  
(D)  9

**Question No.25**

Marks: 1.00

Bookmark 

What will be written in the place of question mark in the given series?

N14F6J10B2?23

- (A)  Y  
(B)  X  
(C)  **W (Correct Answer)** (Chosen option)  
(D)  V

**General Awareness and Current Events - General Awareness and Current Events****Question No.1**

Marks: 1.00

Bookmark 

Bangladesh shares its border with which of the following states of India?

- (A)  Nagaland  
(B)  Arunachal Pradesh  
(C)  Sikkim  
(D)  **Assam (Correct Answer)** (Chosen option)

**Question No.2**

Marks: 1.00

<p>Which one of the following Parliamentary Committees has no representation from 'Rajya Sabha'?</p> <p>(A) <input type="radio"/> Committee on Public Undertakings</p> <p>(B) <input type="radio"/> Public Accounts Committee (Chosen option)</p> <p>(C) <input type="radio"/> Library Committee</p> <p>(D) <input checked="" type="radio"/> Estimates Committee (Correct Answer)</p>	<p>Bookmark <input type="checkbox"/></p>
<p><b>Question No.3</b></p> <p>Who among the following has the sole right to issue banknotes in India?</p> <p>(A) <input type="radio"/> State Bank of India</p> <p>(B) <input checked="" type="radio"/> Reserve Bank of India (Correct Answer) (Chosen option)</p> <p>(C) <input type="radio"/> Finance Commission</p> <p>(D) <input type="radio"/> Federal Bank of India</p>	<p>Marks: 1.00</p> <p>Bookmark <input type="checkbox"/></p>
<p><b>Question No.4</b></p> <p>Khosta-2, recently seen in news, is a type of _____.</p> <p>(A) <input checked="" type="radio"/> Virus (Correct Answer)</p> <p>(B) <input type="radio"/> Fungus</p> <p>(C) <input type="radio"/> Bacteria (Chosen option)</p> <p>(D) <input type="radio"/> Protozoa</p>	<p>Marks: 1.00</p> <p>Bookmark <input type="checkbox"/></p>
<p><b>Question No.5</b></p> <p>Mughal miniature Painting reached its zenith under:</p> <p>(A) <input type="radio"/> Shah Jahan</p> <p>(B) <input type="radio"/> Aurangzeb</p> <p>(C) <input checked="" type="radio"/> Jahangir (Correct Answer) (Chosen option)</p> <p>(D) <input type="radio"/> Akbar</p>	<p>Marks: 1.00</p> <p>Bookmark <input type="checkbox"/></p>
<p><b>Question No.6</b></p> <p>Joshna Chinappa is a distinguished personality in which of the following sports/games?</p> <p>(A) <input type="radio"/> Table Tennis</p> <p>(B) <input type="radio"/> Lawn Tennis (Chosen option)</p> <p>(C) <input checked="" type="radio"/> Squash (Correct Answer)</p> <p>(D) <input type="radio"/> Badminton</p>	<p>Marks: 1.00</p> <p>Bookmark <input type="checkbox"/></p>
<p><b>Question No.7</b></p> <p>As on September 2022, what is the upper limit of a 'UPI LITE' Payment Transaction?</p> <p>(A) <input checked="" type="radio"/> Rs 200 (Correct Answer)</p> <p>(B) <input type="radio"/> Rs 500</p> <p>(C) <input type="radio"/> Rs 1000 (Chosen option)</p> <p>(D) <input type="radio"/> Rs 100</p>	<p>Marks: 1.00</p> <p>Bookmark <input type="checkbox"/></p>
<p><b>Question No.8</b></p> <p>The Extended Fund Facility is a lending facility of:</p>	<p>Marks: 1.00</p> <p>Bookmark <input type="checkbox"/></p>

- (A)  Asian Development Bank  
(B)  World Bank  
(C)  **International Monetary Fund (Correct Answer)** (Chosen option)  
(D)  European Central Bank

**Question No.9**

Marks: 1.00

Bookmark 

Which of the following passes connects Himachal Pradesh with China's Tibet?

- (A)  Qara Tagh Pass  
(B)  **Shipki La Pass (Correct Answer)**  
(C)  Jelep La Pass  
(D)  Nathu La Pass (Chosen option)

**Question No.10**

Marks: 1.00

Bookmark 

"Cantonment Board" functions under the administrative control of:

- (A)  Union Ministry of Rural Development  
(B)  Union Ministry of Home  
(C)  Union Ministry of Housing and Urban Affairs (Chosen option)  
(D)  **Union Ministry of Defence (Correct Answer)**

**Question No.11**

Marks: 1.00

Bookmark 

Which of the following is a tributary of Godavari originating from the state of Odisha?

- (A)  Brahmani  
(B)  Subarnarekha  
(C)  **Indravati (Correct Answer)** (Chosen option)  
(D)  Baitarani

**Question No.12**

Marks: 1.00

Bookmark 

Which of the following districts has the Highest Urban population in Odisha as per 2011 Census?

- (A)  Malkangiri  
(B)  **Khordha (Correct Answer)** (Chosen option)  
(C)  Bargarh  
(D)  Mayurbhanj

**Question No.13**

Marks: 1.00

Bookmark 

What is the full form of 'IMEI', a unique number for identifying a device on a mobile network?

- (A)  Interacted Mobile Equipment Identity (Chosen option)  
(B)  Integrated Mobile Equipment Identity  
(C)  **International Mobile Equipment Identity (Correct Answer)**  
(D)  Interchangeable Mobile Equipment Identity

**Question No.14**

Marks: 1.00

Bookmark 

Where is the headquarters of World Intellectual Property Organization (WIPO) situated?

- (A)  **Geneva (Correct Answer)** (Chosen option)

- (B)  Melbourne  
(C)  Tokyo  
(D)  New York

**Question No.15**

Marks: 1.00

Bookmark 

Who among the following rulers of Bhoi dynasty defeated the Mughal governor Ahmad Beg?

- (A)  Balabhadradeva  
(B)  Purusottamadeva  
(C)  **Narasimhadeva (Correct Answer)**  
(D)  Mukundadeva I (Chosen option)

**Question No.16**

Marks: 1.00

Bookmark 

Who publishes Gender Inequality Index?

- (A)  World Economic Forum (Chosen option)  
(B)  Oxfam International  
(C)  World Bank  
(D)  **United Nations Development Programme (Correct Answer)**

**Question No.17**

Marks: 1.00

Bookmark 

What is the full form of 'ROM' in computer terminology?

- (A)  Reference Only Memory  
(B)  Random Only Memory  
(C)  Record Only Memory  
(D)  **Read Only Memory (Correct Answer)** (Chosen option)

**Question No.18**

Marks: 1.00

Bookmark 

\_\_\_\_\_ is the capital of Ukraine.

- (A)  Abu Dhabi  
(B)  Lome  
(C)  Bangkok  
(D)  **Kyiv (Correct Answer)** (Chosen option)

**Question No.19**

Marks: 1.00

Bookmark 

The silver coin 'tanka' was introduced by which ruler of Delhi Sultanate?

- (A)  Muhammad bin Tughluq (Chosen option)  
(B)  **Iltutmish (Correct Answer)**  
(C)  Sher Shah Suri  
(D)  Akbar

**Question No.20**

Marks: 1.00

Bookmark 

Which Indian Athlete is nicknamed as "Dhing Express"?

- (A)  **Hima Das (Correct Answer)** (Chosen option)  
(B)  P.T. Usha  
(C)  Milkha Singh



(D)  Priyanka Goswami

**Question No.21**

Marks: 1.00

Bookmark 

Which of the following two rivers meet at Allahabad?

- (A)  **Ganga and Yamuna (Correct Answer)**  
(B)  Son and Kosi  
(C)  Kali and Gomati  
(D)  Alakananda and Bhagirathi (Chosen option)

**Question No.22**

Marks: 1.00

Bookmark 

The Lushai hills is also called:

- (A)  Naga Hills (Chosen option)  
(B)  Garo Hills  
(C)  Dafla Hills  
(D)  **Mizo Hills (Correct Answer)**

**Question No.23**

Marks: 1.00

Bookmark 

Which of the following is a form of battle dance (martial art) that belong to the state of Odisha?

- (A)  **Paika Nrutya (Correct Answer)** (Chosen option)  
(B)  Silambam  
(C)  Thang-Ta  
(D)  Gatka

**Question No.24**

Marks: 1.00

Bookmark 

Who among the following was the founder of the Suryavamsi Gajapati dynasty?

- (A)  Prataprudradeva (Chosen option)  
(B)  Krishnadevaraya  
(C)  Purusottamadeva  
(D)  **Kapilendradeva (Correct Answer)**

**Question No.25**

Marks: 1.00

Bookmark 

After the Battle of Buxar, the treaty of Allahabad was signed in 1765 between:

- (A)  Warren Hastings and Mir Jafar  
(B)  Warren Hastings and Siraj-Ud-Daulah  
(C)  Robert Clive and Akbar II  
(D)  **Robert Clive and Shah Alam II (Correct Answer)** (Chosen option)

**Computer and Internet Awareness - Computer and Internet Awareness****Question No.1**

Marks: 1.00

Bookmark 

What is the shortcut key to hide the selected row in MS Excel?

- (A)  **Ctrl + 9 (Correct Answer)** (Chosen option)  
(B)  Ctrl + 0  
(C)  Ctrl + 1

(D)  Ctrl + 8

**Question No.2**

Marks: 1.00

Bookmark 

The text alignment option that allows you to distribute your text evenly between the margins is \_\_\_\_\_.

- (A)  **Justify (Correct Answer)**  
(B)  Center (Chosen option)  
(C)  Bold  
(D)  Regular

**Question No.3**

Marks: 1.00

Bookmark 

What is the expansion of 'COBOL', a computer language?

- (A)  **Common Business Oriented Language (Correct Answer)** (Chosen option)  
(B)  Computer Business Oriented Language  
(C)  Computer Basic Language  
(D)  Computer Business Language

**Question No.4**

Marks: 1.00

Bookmark 

\_\_\_\_\_ category of software is primarily commercial software that can be bought, leased or licensed from its vendor/developer in terms of ownership.

- (A)  Open source (Chosen option)  
(B)  **Proprietary (Correct Answer)**  
(C)  Freeware  
(D)  Public domain Software

**Question No.5**

Marks: 1.00

Bookmark 

Which tool in Word is used when the document is done and the user is working with others to make revisions or provide feedback?

- (A)  **Review-Track Changes (Correct Answer)**  
(B)  View -> Arrange All -Edit Document (Chosen option)  
(C)  File-View Settings-Changes  
(D)  Edit-Find

**Question No.6**

Marks: 1.00

Bookmark 

Name the memory that acts as a buffer between the CPU and the main memory.

- (A)  ROM  
(B)  **Cache (Correct Answer)**  
(C)  HDD (Chosen option)  
(D)  RAM

**Question No.7**

Marks: 1.00

Bookmark 

Which among the following is the first computer with a single-circuit board?

- (A)  INTEL 1103  
(B)  IBM 1500  
(C)  BASIC

(D)  **APPLE I (Correct Answer)** (Chosen option)

**Question No.8**

Marks: 1.00

Bookmark 

In Microsoft Word, which of the following Mail merge options is used to create a single document that contains an address list?

- (A)  **CATALOGUE (Correct Answer)**  
(B)  EMAIL  
(C)  FORM LETTERS  
(D)  ENVELOPS (Chosen option)

**Question No.9**

Marks: 1.00

Bookmark 

Researchers at antivirus firms study and simulate the behaviour of viruses by using a /an\_\_\_\_\_ virtual machine based environment.

- (A)  SQLbox  
(B)  Blackbox  
(C)  **Sandbox (Correct Answer)** (Chosen option)  
(D)  Whitebox

**Question No.10**

Marks: 1.00

Bookmark 

Which among the following is a web-based storage where you can upload large files and then share with other users with their email id?

- (A)  Teams  
(B)  **Google Drive (Correct Answer)** (Chosen option)  
(C)  Skype  
(D)  Excel

**Question No.11**

Marks: 1.00

Bookmark 

\_\_\_\_\_ enables Excel to dynamically produce new outputs when one or more inputs in the referenced cells are changed.

- (A)  Queries  
(B)  **Cell References (Correct Answer)**  
(C)  Wordwrap (Chosen option)  
(D)  Pastespecial

**Question No.12**

Marks: 1.00

Bookmark 

Which among the following is a video output port found on PC?

- (A)  MIC  
(B)  SPDIF  
(C)  AUX  
(D)  **VGA (Correct Answer)** (Chosen option)

**Question No.13**

Marks: 1.00

Bookmark 

You can add a table in Microsoft Word from the \_\_\_\_\_ tab.

- (A)  Page layout  
(B)  **Insert (Correct Answer)** (Chosen option)

- (C)  Data  
(D)  Home

**Question No.14**

Marks: 1.00

Bookmark 

In MS-Word, the Footnotes group is available under \_\_\_\_\_ ribbon.

- (A)  **REFERENCES (Correct Answer)**  
(B)  FORMULAS  
(C)  DATA  
(D)  PAGELAYOUT (Chosen option)

**Question No.15**

Marks: 1.00

Bookmark 

Which among the following utilities from the administrative tools helps you access system tools, disk management and services?

- (A)  System Configuration (Chosen option)  
(B)  **Computer Management (Correct Answer)**  
(C)  Task Scheduler  
(D)  Registry Editor

**Question No.16**

Marks: 1.00

Bookmark 

You can add sequential numbers to a row of data in Excel, by using \_\_\_\_\_.

- (A)  Filter  
(B)  Auto Format  
(C)  Auto Sum (Chosen option)  
(D)  **Fill handle (Correct Answer)**

**Question No.17**

Marks: 1.00

Bookmark 

Which software utility is used to compress files in computers?

- (A)  Notepad++  
(B)  Device Manager  
(C)  **WinZip (Correct Answer)** (Chosen option)  
(D)  Anti virus

**Question No.18**

Marks: 1.00

Bookmark 

In MS Powerpoint, \_\_\_\_\_ Office button command is used to view the presentation properties, encrypt document, restrict permissions etc.,

- (A)  Present  
(B)  Send  
(C)  Publish  
(D)  **Prepare (Correct Answer)** (Chosen option)

**Question No.19**

Marks: 1.00

Bookmark 

NIC stands for \_\_\_\_\_.

- (A)  **Network Interface Card (Correct Answer)** (Chosen option)  
(B)  Network Interface Chords  
(C)  Network Interface Chord



(D)  Network Interfaced Cards

**Question No.20**

Marks: 1.00

Bookmark 

To print all of the worksheets in a workbook at one-time, select \_\_\_\_\_ option in the Print Settings.

- (A)  Print File  
(B)  Print Entire Table  
(C)  **Print Entire Workbook (Correct Answer)** (Chosen option)  
(D)  Print Current Sheet

**Question No.21**

Marks: 1.00

Bookmark 

The group of cells that you select to perform an operation is called \_\_\_\_\_.

- (A)  Cell source  
(B)  Cell information  
(C)  **Cell range (Correct Answer)** (Chosen option)  
(D)  Cell error

**Question No.22**

Marks: 1.00

Bookmark 

What kind of device is Projector?

- (A)  **Output (Correct Answer)** (Chosen option)  
(B)  Processor  
(C)  Input  
(D)  Memory

**Question No.23**

Marks: 1.00

Bookmark 

\_\_\_\_\_ is used to track all the changes made to the document.

- (A)  Tracing  
(B)  Proofing (Chosen option)  
(C)  **Tracking (Correct Answer)**  
(D)  Protect

**Question No.24**

Marks: 1.00

Bookmark 

In MS Excel, which feature helps us to color the marks as red and green for fail and pass respectively?

- (A)  **Conditional Formatting (Correct Answer)** (Chosen option)  
(B)  if() function  
(C)  format() function  
(D)  Format cells

**Question No.25**

Marks: 1.00

Bookmark 

You can delete a file permanently without moving to recycle bin by pressing \_\_\_\_\_.

- (A)  Ctrl + Delete key  
(B)  Delete key  
(C)  Ctrl + D  
(D)  **Shift + Del (Correct Answer)** (Chosen option)