

OSSC CGL 2022-23
E-BOOK- PDF
7,000 MCQ
EXPLANATION
All Important Questions & Answers

[Click Here](#)

MATH - ଓଡ଼ିଶାର
ସମସ୍ତ ପରୀକ୍ଷା ପୂର୍ବ ବର୍ଷ ପ୍ରଶ୍ନ
E-BOOK- PDF
1,800- MCQ
Topic Wise
OPSC, OSSC CGL, OSSSC, Police/Constable, B.ED, CHT, CT, OSSSC (RI, JC, LSI, OFDC, Group C)]

[Click Here](#)

ଓଡ଼ିଆ ବ୍ୟାକରଣ PYQ
ସମସ୍ତ ପରୀକ୍ଷା ପୂର୍ବ ବର୍ଷ ପ୍ରଶ୍ନ
E-BOOK- PDF
2,222 MCQ
TEST- 75
OPSC ASO, B.ED, CHT, CT, OAVS, OSSTET, OTET, ODISHA POLICE, OSSSC RI, OSSSC LSI, OSSSC OFDC, OSSSC Group C

[Click Here](#)

ENGLISH - ଓଡ଼ିଶାର
ସମସ୍ତ ପରୀକ୍ଷା ପୂର୍ବ ବର୍ଷ ପ୍ରଶ୍ନ
E-BOOK- PDF
3,600- MCQ
Topic Wise
OPSC, OSSC CGL, OSSSC, Police/Constable, B.ED, CHT, OTET, OSSTET CT, OSSSC (RI, JC, LSI, OFDC, Group C)

[Click Here](#)

REASONING - ଓଡ଼ିଶାର
ସମସ୍ତ ପରୀକ୍ଷା ପୂର୍ବ ବର୍ଷ ପ୍ରଶ୍ନ
E-BOOK- PDF
2,200- MCQ
Topic Wise
OPSC, OSSC CGL, OSSSC, Police/Constable, B.ED, CHT, OTET, OSSTET CT, OSSSC (RI, JC, LSI, OFDC, Group C)

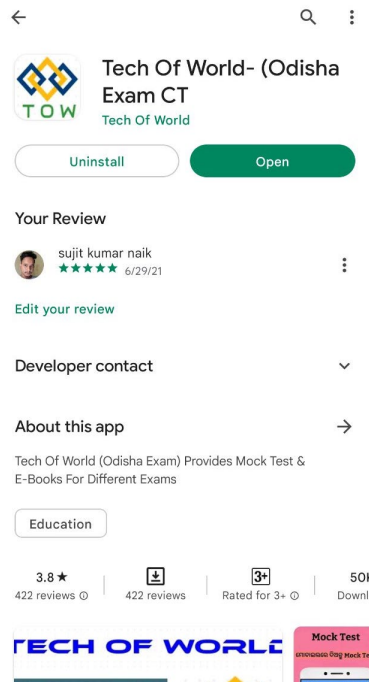
[Click Here](#)

COMPUTER - ଓଡ଼ିଶାର
ସମସ୍ତ ପରୀକ୍ଷା ପୂର୍ବ ବର୍ଷ ପ୍ରଶ୍ନ
E-BOOK- PDF
1,100- MCQ
Topic Wise
OPSC, OSSC CGL, OSSSC, Police/Constable, CHT, OSSSC (RI, JC, LSI, OFDC, Group C)

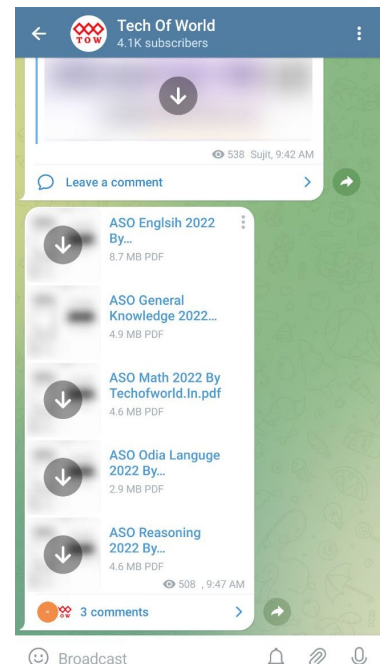
[Click Here](#)



[Click Here](#)



[Click Here](#)



[Click Here](#)

Roll No: Tech Of World App

Registration No: Tech Of World App

Name: Tech Of World App

Exam Date: 07-Nov-2022

Exam Time: 15:30-17:30

Post Name: BSSO 22

Registered Photo



Exam Day Photo

**Arithmetic - Arithmetic****Question No.1**

Marks: 1.00

Bookmark

Let's consider the data: 163, 180, 137, 147, 191, 156. What is the median?

- (A) 155.5
(B) 153.5
(C) 159.5 (Correct Answer)
(D) 157.5

Question No.2

Marks: 1.00

Bookmark Find the value of $\sqrt{24.01} + \sqrt{0.2401} + \sqrt{0.002401}$

- (A) 5.439 (Correct Answer)
(B) 6.439 (Chosen option)
(C) 7.439
(D) 4.439

Question No.3

Marks: 1.00

Bookmark

Solve:

$$(22 \div 9) + (32 \div 9) = ?$$

- (A) 5
(B) 6 (Correct Answer)
(C) 8 (Chosen option)
(D) 7

Question No.4

Marks: 1.00

Bookmark

Using all the letters of the word 'BACK', how many distinct words can be formed in such a way that the vowels always come together?

- (A) 26
(B) 24 (Correct Answer) (Chosen option)
(C) 28
(D) 22

Question No.5

Marks: 1.00

Bookmark Find the area of the square whose diagonal is 84 cm. (In cm^2)

- (A) 3528 (Correct Answer)
(B) 3328 (Chosen option)
(C) 3228
(D) 3428

Question No.6

Marks: 1.00

Bookmark

At present, the ratio between the ages of A and B is 6:5. After 5 years, A's age will be 35 years. What is the present age of B? (In years)

- (A) 29
(B) 27
(C) 25 (Correct Answer) (Chosen option)
(D) 31

Question No.7

Marks: 1.00

Bookmark

A bag contains 5 red, 5 green and 4 blue pens. Two pens are drawn at random. What is the probability that none of the pen drawn is blue?

- (A) 25/91
(B) 45/91 (Correct Answer) (Chosen option)
(C) 35/91
(D) 55/91

Question No.8

Marks: 1.00

Bookmark

Set A = {3,4,5,6,7}

Set B = {5,6,7,8,9}

Two integers will be randomly selected from the sets above, one integer from Set A and one integer from Set B.

What is the probability that the sum of the two integers will equal 15?

- (A) 1/25 (Chosen option)
(B) 2/25 (Correct Answer)
(C) 4/25
(D) 3/25

Question No.9

Marks: 1.00

Bookmark

A clock is started at 12 noon. By 960 seconds past 4 p.m, the hour hand has turned through how many degrees?

- (A) 148°
(B) 138°
(C) 128° (Correct Answer)
(D) 158° (Chosen option)

Question No.10

Marks: 1.00

Bookmark

The salaries of A, B and C are in the ratio of 9:6:10. If their total salary is Rs.3200, find the salary received by C.(in Rs.)

- (A) 1580
(B) 1380
(C) 1480
(D) 1280 (Correct Answer) (Chosen option)

Question No.11

Marks: 1.00

Bookmark

Find the interest on Rs.9200 for 1 year at 11% per annum, compounded annually.(In Rs.)

- (A) 1012 (Correct Answer)
 (B) 1112 (Chosen option)
 (C) 1312
 (D) 1212

Question No.12

Marks: 1.00

Bookmark

X can do a piece of work in 280 days. X worked at it for 60 days and then Y finished the remaining work in 220 days. In how many days can X and Y together finish the work?

- (A) 150 (Chosen option)
 (B) 170
 (C) 160
 (D) 140 (Correct Answer)

Question No.13

Marks: 1.00

Bookmark **Directions:**

Study the following table and answer the questions.

Number of Candidates Appeared and Qualified in a Competitive Examination from different states over the years.

Find the number of candidates who got Qualified from all the states during 2004 and 2005.

State	X		Y		Z	
	Appeared	Qualified	Appeared	Qualified	Appeared	Qualified
2001	54	43	51	40	59	48
2002	47	35	44	32	52	40
2003	90	81	87	78	95	86
2004	84	78	81	75	89	83
2005	74	52	71	49	79	57

- (A) 386
 (B) 374
 (C) 394 (Correct Answer) (Chosen option)
 (D) 378

Question No.14

Marks: 1.00

Bookmark

EPL Football team decided their selection process on various category, Liverpool club has 16 players for the Squad and they need only 11 players for the playing eleven. How many ways the selectors can select the team of 11?

- (A) 4468 (Chosen option)
 (B) 4568
 (C) 4368 (Correct Answer)
 (D) 4668

Question No.15

Marks: 1.00

Bookmark

Find (a+b), given that (a-b) = 9 and $a^2 - b^2 = 369$.

- (A) 47
 (B) 43
 (C) 45 (Chosen option)
 (D) 41 (Correct Answer)

Question No.16

Marks: 1.00

<p>A sum of money at simple interest amounts to Rs.9940 in 4 years and to Rs.10650 in 5 years. Find the sum. (In Rs.)</p> <p>(A) <input type="radio"/> 7300</p> <p>(B) <input type="radio"/> 7200 (Chosen option)</p> <p>(C) <input type="radio"/> 7400</p> <p>(D) <input type="radio"/> 7100 (Correct Answer)</p>	Bookmark <input type="checkbox"/>
<p>Question No.17</p> <p>The LCM of two numbers is 114 and their H.C.F is 19, find the product of two numbers.</p> <p>(A) <input type="radio"/> 1966 (Chosen option)</p> <p>(B) <input type="radio"/> 2266</p> <p>(C) <input type="radio"/> 2166 (Correct Answer)</p> <p>(D) <input type="radio"/> 2066</p>	Marks: 1.00 Bookmark <input type="checkbox"/>
<p>Question No.18</p> <p>If A drives from X to Y at 48 kmph and then from Y to X at 100 kmph, what is the average speed for the whole journey? (In kmph - upto two decimals)</p> <p>(A) <input type="radio"/> 68.86</p> <p>(B) <input type="radio"/> 66.86 (Chosen option)</p> <p>(C) <input type="radio"/> 64.86 (Correct Answer)</p> <p>(D) <input type="radio"/> 62.86</p>	Marks: 1.00 Bookmark <input type="checkbox"/>
<p>Question No.19</p> <p>Solve: $448 \times 2.95 = ?$</p> <p>(A) <input type="radio"/> 1121.6</p> <p>(B) <input type="radio"/> 1421.6</p> <p>(C) <input type="radio"/> 1221.6 (Chosen option)</p> <p>(D) <input type="radio"/> 1321.6 (Correct Answer)</p>	Marks: 1.00 Bookmark <input type="checkbox"/>
<p>Question No.20</p> <p>What value should come in the place of question mark (?) in the following question? $336 \div 12 + 875 \div 25 = ?$</p> <p>(A) <input type="radio"/> 59</p> <p>(B) <input type="radio"/> 61</p> <p>(C) <input type="radio"/> 57</p> <p>(D) <input type="radio"/> 63 (Correct Answer) (Chosen option)</p>	Marks: 1.00 Bookmark <input type="checkbox"/>
<p>Question No.21</p> <p>How many seconds will a train take to cover a distance of 4860 meters, if it runs at a speed of 324 km/hr?</p> <p>(A) <input type="radio"/> 56</p> <p>(B) <input type="radio"/> 50</p> <p>(C) <input type="radio"/> 52</p> <p>(D) <input type="radio"/> 54 (Correct Answer) (Chosen option)</p>	Marks: 1.00 Bookmark <input type="checkbox"/>

Question No.22

Marks: 1.00

Bookmark

Ayden can finish a work in 57 days and Bryce can do the same work in 114 days. On working together, they will complete the same work in how many days?

- (A) 42 (Chosen option)
(B) 38 (Correct Answer)
(C) 50
(D) 46

Question No.23

Marks: 1.00

Bookmark

A pipe can fill a tank with water in 369 hours. Because of an outlet, it took 410 hours to fill the tank. How much time will it take for the outlet alone to drain all the water present in the filled water tank? (In hours)

- (A) 3590
(B) 3890 (Chosen option)
(C) 3690 (Correct Answer)
(D) 3790

Question No.24

Marks: 1.00

Bookmark

Prakash gets successive discounts of 20% and then 30% on his food bill of Rs.4850. What is the amount paid by Prakash? (In Rs.)

- (A) 2716 (Correct Answer)
(B) 2516 (Chosen option)
(C) 2616
(D) 2416

Question No.25

Marks: 1.00

Bookmark

What will be the HCF of 592, 976 and 925, 1525 ?

- (A) 18, 23
(B) 16, 25 (Correct Answer) (Chosen option)
(C) 19, 22
(D) 17, 24

Analytical and Reasoning Ability - Analytical and Reasoning Ability

Question No.1

Marks: 1.00

Bookmark

In this question, relationship between different elements is shown in the statement. This statement is followed by two conclusions:

Statements: $S < A \leq N < D = W > I \geq C > H$

Conclusion:

- i) $N > I$
ii) $C < A$

Choose the appropriate one from the following options

- (A) Only conclusion i follows
(B) Only conclusion ii follows
(C) Either i or ii follows
(D) Neither i nor ii follows
(E) Both i and ii follow.
(A) D (Correct Answer)

- (B) B (Chosen option)
(C) C
(D) A

Question No.2

Marks: 1.00

Bookmark

In the following question, few statements are given and these statements are followed by two conclusions numbered i and ii. You have to take the given statements to be true even if they seem to be at variance from commonly known facts. Read the conclusions and then decide which of the given conclusions logically follows from the given statements, disregarding commonly known facts.

Choose,

- (A) Only (i) conclusion follows
(B) Only (ii) conclusion follows
(C) Neither (i) nor (ii) follows
(D) Both (i) and (ii) follow
(E) Either (i) or (ii) follows

Statements: All apples are oranges. Some oranges are carrots. No carrot is bean.

Conclusions:

- i) Some apples are carrots.
ii) No apple is bean.

- (A) A
(B) D
(C) C (Correct Answer) (Chosen option)
(D) B

Question No.3

Marks: 1.00

Bookmark

Replace the question mark with an option that follows the same logic applied in the first pair

TK : YP :: EH : ??

- (A) JM (Correct Answer)
(B) JN (Chosen option)
(C) IN
(D) IM

Question No.4

Marks: 1.00

Bookmark

In this question, relationship between different elements is shown in the statement. This statement is followed by two conclusions:

Statements: $D > O \geq N < A \leq T = E$

Conclusion:

- i) $N < T$
ii) $A \leq E$

Choose the appropriate one from the following options

- (A) Only conclusion i follows
(B) Only conclusion ii follows
(C) Either i or ii follows
(D) Neither i nor ii follows
(E) Both i and ii follow.
(A) A
(B) E (Correct Answer) (Chosen option)
(C) B

(D) C

Question No.5

Marks: 1.00

Bookmark

Which of the following sets of signs should be used to replace * in the following?

$$7 * 6 * 8 = 62 * 2 * 3$$

- (A) $\times - \div +$ (Correct Answer)
(B) $\times \div + \times$ (Chosen option)
(C) $\div \times \times -$
(D) $+ \times + \div$

Question No.6

Marks: 1.00

Bookmark

Replace the question mark with an option that follows the same logic applied in the first pair

Terminal : Last :: Prepare : ??

- (A) Break
(B) Arrange (Correct Answer) (Chosen option)
(C) Disorganise
(D) Disturb

Question No.7

Marks: 1.00

Bookmark

Pointing to a girl, a boy said, "Her mother is my father's mother's only daughter's only brother's daughter." How is the girl related to the boy?

- (A) Cousin
(B) Daughter (Chosen option)
(C) Sister
(D) Niece (Correct Answer)

Question No.8

Marks: 1.00

Bookmark

What will be written in the place of question mark in the given series?

M13F6015E5?22

- (A) X (Chosen option)
(B) V (Correct Answer)
(C) W
(D) Y

Question No.9

Marks: 1.00

Bookmark

What should be written in the place of question mark in the given series?

E11, H13, K17, ?, Q23

- (A) O20
(B) M20
(C) M19
(D) N19 (Correct Answer) (Chosen option)

Question No.10

Marks: 1.00

Bookmark

In a certain code language, if GRACE is coded as TIZXV, then how is RADIO coded in that



language?

- (A) EVHSM
(B) VOJGX
(C) IZWRL (Correct Answer) (Chosen option)
(D) VEHMS

Question No.11

Marks: 1.00

Bookmark

Choose the alternative which is an odd word/number/letter pair out of the given alternatives.

- (A) Worry
(B) Praise (Correct Answer)
(C) Regret
(D) Apologise (Chosen option)

Question No.12

Marks: 1.00

Bookmark

If + means \div , \times means +, \div means - & - means \times , then,
 $72 + 2 - 4 \div 15 \times 5 - 2 = ?$

- (A) 149
(B) 143
(C) 139 (Correct Answer)
(D) 152 (Chosen option)

Question No.13

Marks: 1.00

Bookmark

Choose the alternative which is an odd word/number/letter pair out of the given alternatives.

- (A) Scarce
(B) Deficient (Chosen option)
(C) Abundant (Correct Answer)
(D) Lacking

Question No.14

Marks: 1.00

Bookmark

Each question given below consists of a statement, followed by two arguments numbered 1 and 2. You have to decide which of the arguments is a 'strong' argument and which is a 'weak' argument.

Give answer:

- (A) If only argument 1 is strong
(B) If only argument 2 is strong
(C) If either 1 or 2 is strong
(D) If neither 1 nor 2 is strong and
(E) If both 1 and 2 are strong.

Statement: Is quitting sugar a healthy option?

Argument:

1. No, refined sugar which is harmful can be replaced with natural sugar as quitting sugar completely might be harmful too.
2. No, natural sugar's lactose and fructose have protein and fibre to contribute to the body.

- (A) E (Correct Answer)
(B) A (Chosen option)

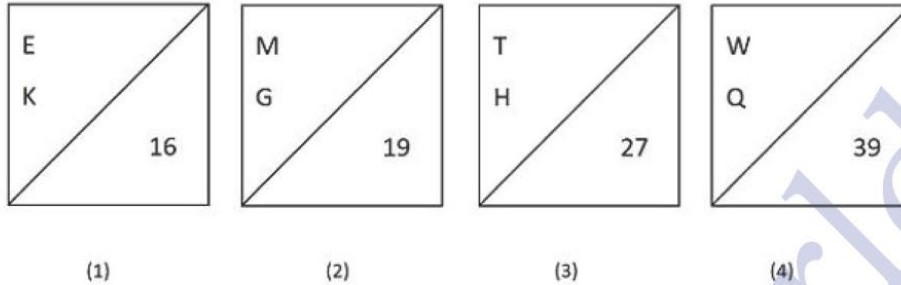
- (C) B
- (D) C

Question No.15

Marks: 1.00

Bookmark

Find the odd image out in the given series.



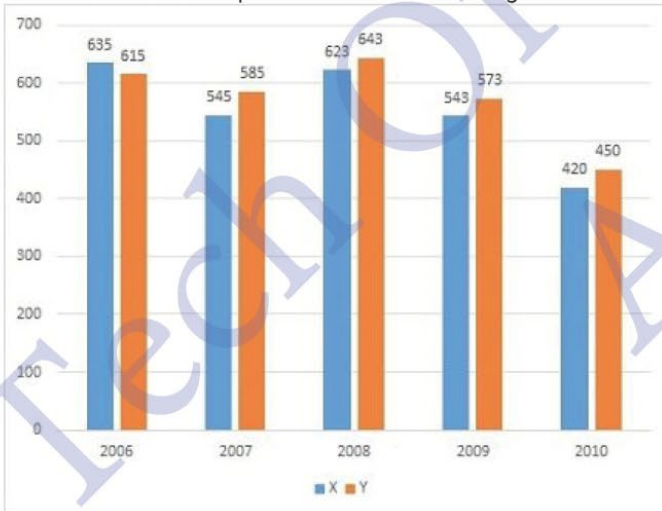
- (A) 3
- (B) 4 (Chosen option)
- (C) 2
- (D) 1 (Correct Answer)

Case Study - 16 to 17

2.00

Directions:

In the given figure, the number of mobiles prepared by two different companies is given from 2006 to 2010. Answer the questions based on the figure below.



Question No.16

Marks: 1.00

Bookmark

For all the given years in the figure, what is the total number of mobiles made by both the companies?

- (A) 2866
- (B) 5432
- (C) 5632 (Correct Answer) (Chosen option)
- (D) 2766

Question No.17

Marks: 1.00

Bookmark

For all the given years in the figure, find how many years Y has prepared more mobiles than X.

- (A) 3
(B) 4 (Correct Answer)
(C) 2 (Chosen option)
(D) 1

Question No.18

Marks: 1.00

Bookmark

Select the combination of numbers so that letters arranged accordingly will form a meaningful word.

1.E 2. T 3. G 4. I 5. R

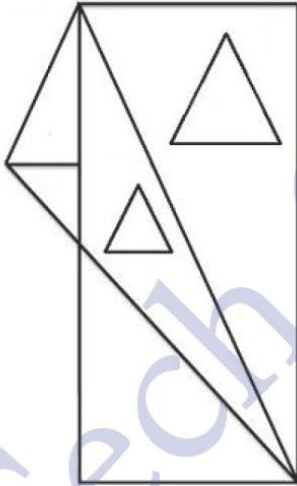
- (A) 4,1, 5, 2, 3
(B) 2, 3, 1, 5, 4 (Chosen option)
(C) 2, 4, 3, 1, 5 (Correct Answer)
(D) 4, 1, 2, 3, 5

Question No.19

Marks: 1.00

Bookmark

How many triangles are there in the given figure?



- (A) 10 (Correct Answer) (Chosen option)
(B) 15
(C) 9
(D) 11

Question No.20

Marks: 1.00

Bookmark

A child is standing in a lawn facing West direction. If the child turns 152.5 degrees in anti-clockwise direction and 62.5 degrees in clockwise direction, which direction will he face now?

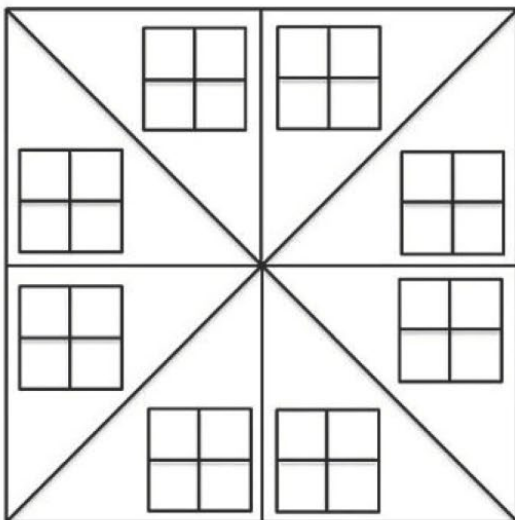
- (A) East (Chosen option)
(B) South (Correct Answer)
(C) North
(D) West

Question No.21

Marks: 1.00

Bookmark

How many squares are there in the given figure?



- (A) 46
 (B) 47
 (C) 48
 (D) 45 (Correct Answer) (Chosen option)

Question No.22

Marks: 1.00

Bookmark

In a certain code language, if ALTER is coded as DOWHU, then how is DEPTH coded in that language?

- (A) GHSWK (Correct Answer)
 (B) WVKGS
 (C) HGSKW (Chosen option)
 (D) LXTIH

Question No.23

Marks: 1.00

Bookmark

A college has 2000 students. Of those students, 1200 are History majors. 25% of those History majors are also Civics majors. The number of civics majors is equal to two-third of number of students who are only history majors.

How many students have majors other than History and Civics?

- (A) 100
 (B) 300 (Chosen option)
 (C) 500 (Correct Answer)
 (D) 0

Question No.24

Marks: 1.00

Bookmark

A man said to his wife, "The lady in the photograph is your husband's mother's only son's wife's mother." How is the man related to the lady in the photograph?

- (A) Cousin
 (B) Son-in-law (Correct Answer)
 (C) Grandfather (Chosen option)
 (D) Nephew

Question No.25

Marks: 1.00

Bookmark

"Each question given below consists of a statement, followed by two arguments numbered 1 and 2. You have to decide which of the arguments is a 'strong' argument and which is a 'weak' argument.

Give answer:

- (A) If only argument 1 is strong
- (B) If only argument 2 is strong
- (C) If either 1 or 2 is strong
- (D) If neither 1 nor 2 is strong and
- (E) If both 1 and 2 are strong.

Statement: Is it good to join a start-up company?

Argument:

1. Yes, start-ups offer much more scope of learning to their employees.
2. No, start-ups do not have many people involved in day to day work.

- (A) **A (Correct Answer)** (Chosen option)
- (B) D
- (C) B
- (D) C

General Awareness and Current Events - General Awareness and Current Events

Question No.1

Marks: 1.00

Bookmark

Who gave the title Utkalmani (The jewel of Odisha) to Gopabandhu das?

- (A) Meghnad Saha
- (B) Satyendra Nath Bose (Chosen option)
- (C) **Prefulla Chandra Roy (Correct Answer)**
- (D) Jagadish Chandra Bose

Question No.2

Marks: 1.00

Bookmark

What is the composition of G-7 countries besides UK, USA, Germany and Japan?

- (A) **Canada, France and Italy (Correct Answer)** (Chosen option)
- (B) Canada, France and Greece
- (C) Canada, Italy and Russia
- (D) Australia, Italy and Russia

Question No.3

Marks: 1.00

Bookmark

Who was the first ruler of the Lodi dynasty of the Delhi Sultanate?

- (A) **Bahlul Lodi (Correct Answer)**
- (B) Daulat Khan Lodi (Chosen option)
- (C) Sikandar Khan Lodi
- (D) Ibrahim Lodi

Question No.4

Marks: 1.00

Bookmark

Pakistan shares its border with which of the following states of India?

- (A) Haryana
- (B) Himachal Pradesh (Chosen option)

- (C) Uttarakhand
(D) Gujarat (Correct Answer)

Question No.5

Marks: 1.00

Bookmark

Who fixes the Statutory Liquidity Ratio in India?

- (A) Finance Commission
(B) NITI Aayog
(C) Reserve Bank of India (Correct Answer) (Chosen option)
(D) Union Ministry of Finance

Question No.6

Marks: 1.00

Bookmark

What is the full form of 'IMPS' in banking terminology?

- (A) Integrated Payment System
(B) Integrated Payment Service
(C) Immediate Payment System (Chosen option)
(D) Immediate Payment Service (Correct Answer)

Question No.7

Marks: 1.00

Bookmark

Which among the following states has a 'bicameral legislature'?

- (A) Uttar Pradesh (Correct Answer)
(B) Tamil Nadu
(C) Kerala
(D) Assam (Chosen option)

Question No.8

Marks: 1.00

Bookmark

Who publishes the Global Gender Gap Report?

- (A) World Bank
(B) World Economic Forum (Correct Answer)
(C) United Nations Development Programme (Chosen option)
(D) UNESCO

Question No.9

Marks: 1.00

Bookmark

Which among the following is the smallest neighbouring country of India in terms of area?

- (A) Bhutan (Correct Answer) (Chosen option)
(B) Pakistan
(C) Bangladesh
(D) Sri Lanka

Question No.10

Marks: 1.00

Bookmark

Yogeshwar Dutt is a distinguished personality in which of the following sports/games?

- (A) Boxing (Chosen option)
(B) Badminton
(C) Wrestling (Correct Answer)
(D) Shooting



<p>Question No.11</p> <p>The river Sabarmati and Saraswati join to form which of the following rivers?</p> <p>(A) <input type="radio"/> River Narmada (Chosen option)</p> <p>(B) <input checked="" type="radio"/> River Luni (Correct Answer)</p> <p>(C) <input type="radio"/> River Mahi</p> <p>(D) <input type="radio"/> River Tapi</p>	<p>Marks: 1.00</p> <p>Bookmark <input type="checkbox"/></p>
<p>Question No.12</p> <p>Bhaichung Bhutia is a distinguished personality in which of the following sports/games?</p> <p>(A) <input checked="" type="radio"/> Football (Correct Answer) (Chosen option)</p> <p>(B) <input type="radio"/> Volleyball</p> <p>(C) <input type="radio"/> Hockey</p> <p>(D) <input type="radio"/> Basketball</p>	<p>Marks: 1.00</p> <p>Bookmark <input type="checkbox"/></p>
<p>Question No.13</p> <p>Who among the following was the founder of the Bhoi dynasty in Odisha?</p> <p>(A) <input type="radio"/> Narasimha Jena</p> <p>(B) <input type="radio"/> Chakrapratapa</p> <p>(C) <input checked="" type="radio"/> Govinda Vidyadhara (Correct Answer)</p> <p>(D) <input type="radio"/> Raghurama Chhotaraya (Chosen option)</p>	<p>Marks: 1.00</p> <p>Bookmark <input type="checkbox"/></p>
<p>Question No.14</p> <p>Which of the following is a folk dance form in India?</p> <p>(A) <input type="radio"/> Manipuri (Chosen option)</p> <p>(B) <input type="radio"/> Mohiniyattam</p> <p>(C) <input checked="" type="radio"/> Bhangra (Correct Answer)</p> <p>(D) <input type="radio"/> Kuchipudi</p>	<p>Marks: 1.00</p> <p>Bookmark <input type="checkbox"/></p>
<p>Question No.15</p> <p>The Government of India has set a new target of a ____ % reduction in particulate matter concentration in cities covered under the National Clean Air Programme (NCAP) by 2026.</p> <p>(A) <input checked="" type="radio"/> 40 (Correct Answer)</p> <p>(B) <input type="radio"/> 20 (Chosen option)</p> <p>(C) <input type="radio"/> 50</p> <p>(D) <input type="radio"/> 30</p>	<p>Marks: 1.00</p> <p>Bookmark <input type="checkbox"/></p>
<p>Question No.16</p> <p>Which city is known as 'Silicon Valley of India'?</p> <p>(A) <input type="radio"/> Pune (Chosen option)</p> <p>(B) <input checked="" type="radio"/> Bengaluru (Correct Answer)</p> <p>(C) <input type="radio"/> Mumbai</p> <p>(D) <input type="radio"/> Chennai</p>	<p>Marks: 1.00</p> <p>Bookmark <input type="checkbox"/></p>

Question No.17	Marks: 1.00 Bookmark <input type="checkbox"/>
Which of the following districts has the highest forest cover in Odisha?(In terms of area) (A) <input type="radio"/> Kandhamal (Correct Answer) (Chosen option) (B) <input type="radio"/> Dhenkanal (C) <input type="radio"/> Malkangiri (D) <input type="radio"/> Jagatsinghapur	
Question No.18	Marks: 1.00 Bookmark <input type="checkbox"/>
Who among the following appoints the chairperson and other members of the National Commission for Scheduled Castes? (A) <input type="radio"/> Union Minister of Social Justice & Empowerment (Chosen option) (B) <input type="radio"/> Chief Justice of India (C) <input type="radio"/> Prime Minister of India (D) <input type="radio"/> President of India (Correct Answer)	
Question No.19	Marks: 1.00 Bookmark <input type="checkbox"/>
Which of the following is the official currency of Greece? (A) <input type="radio"/> Franc (Chosen option) (B) <input type="radio"/> Euro (Correct Answer) (C) <input type="radio"/> Cedi (D) <input type="radio"/> Lari	
Question No.20	Marks: 1.00 Bookmark <input type="checkbox"/>
Which is India's first White Label ATM? (A) <input type="radio"/> Money Spot ATM (Chosen option) (B) <input type="radio"/> Vakrangee (C) <input type="radio"/> Indicash (Correct Answer) (D) <input type="radio"/> India1ATM	
Question No.21	Marks: 1.00 Bookmark <input type="checkbox"/>
Salandi is a tributary of which of the following rivers? (A) <input type="radio"/> Indravati (B) <input type="radio"/> Baitarani (Correct Answer) (C) <input type="radio"/> Brahmani (D) <input type="radio"/> Subarnarekha (Chosen option)	
Question No.22	Marks: 1.00 Bookmark <input type="checkbox"/>
Which of the following is the typical classical dance form of Odisha? (A) <input type="radio"/> Danda nacha (B) <input type="radio"/> Chaitee Ghoda (C) <input type="radio"/> Odissi dance (Correct Answer) (Chosen option) (D) <input type="radio"/> Paika dance	
Question No.23	Marks: 1.00 Bookmark <input type="checkbox"/>

What is the full form of 'RAM' in computer terminology?

- (A) Read Access Memory
(B) Record Access Memory
(C) Real Access Memory
(D) **Random Access Memory (Correct Answer)** (Chosen option)

Question No.24

Marks: 1.00

Bookmark

Who among the following won the Nobel Prize in Literature 2022?

- (A) Salman Rushdie
(B) Amitav Ghosh
(C) Peter Handke (Chosen option)
(D) **Annie Ernaux (Correct Answer)**

Question No.25

Marks: 1.00

Bookmark

Which of the following newspapers was published by Annie Besant?

- (A) **New India (Correct Answer)** (Chosen option)
(B) Kesari
(C) Rast Goftar
(D) Hitavada

Computer and Internet Awareness - Computer and Internet Awareness

Question No.1

Marks: 1.00

Bookmark

_____ show the comments and formatting changes in print preview.

- (A) Formats (Chosen option)
(B) Markers
(C) **Balloons (Correct Answer)**
(D) Indents

Question No.2

Marks: 1.00

Bookmark

The video output format HDMI stands for _____.

- (A) High Definition Multitasking Interface
(B) High Dynamic Multimedia Interface (Chosen option)
(C) **High Definition Multimedia Interface (Correct Answer)**
(D) High Definition Memory Interface

Question No.3

Marks: 1.00

Bookmark

In MS Word, the SPLIT table option is available under:

- (A) LAYOUT Ribbon -> EMAIL group
(B) FORMAT Ribbon -> TABLE group
(C) **LAYOUT Ribbon -> MERGE group (Correct Answer)** (Chosen option)
(D) LAYOUT Ribbon -> FORMAT group

Question No.4

Marks: 1.00

Bookmark

What is the shortcut key to go to next slide in MS PowerPoint?

-

- (A) Ctrl+down arrow (Chosen option)
(B) Ctrl+up arrow
(C) **Page down (Correct Answer)**
(D) Page up

Question No.5

Marks: 1.00

Bookmark

The file system supported by Windows operating system is _____.

- (A) FAT 1024
(B) WFS (Chosen option)
(C) **FAT 32 (Correct Answer)**
(D) HDFS

Question No.6

Marks: 1.00

Bookmark

_____ is a way of emphasizing the text with the first letter being made big enough to run in 2 to 3 lines.

- (A) **Drop cap (Correct Answer)**
(B) Change case (Chosen option)
(C) Auto Format
(D) Dash style

Question No.7

Marks: 1.00

Bookmark

Which type of software is used for creating slide shows?

- (A) **Presentation Software (Correct Answer)**
(B) Web Design Software (Chosen option)
(C) Word-Processing Software
(D) Spreadsheet Software

Question No.8

Marks: 1.00

Bookmark

Which among the following options will give you the details of the file size when you right-click on a file?

- (A) Share
(B) **Properties (Correct Answer)**
(C) Send To (Chosen option)
(D) Rename

Question No.9

Marks: 1.00

Bookmark

To prevent Excel from changing the cell references in a formula, you need to place _____ sign before and after the column letter.

- (A) & (Chosen option)
(B) *
(C) **\$ (Correct Answer)**
(D) +

Question No.10

Marks: 1.00

Bookmark

Which tab contains commands for formatting the text, editing the documents and to

perform operations such as cut, copy and paste?

- (A) Home (Correct Answer) (Chosen option)
(B) Page Layout
(C) Reference
(D) Insert

Question No.11

Marks: 1.00

Bookmark

Magnetic disk is divided into concentric circle known as _____.

- (A) Sectors
(B) Pages (Chosen option)
(C) Tracks (Correct Answer)
(D) Cylinder

Question No.12

Marks: 1.00

Bookmark

Consistently monitoring and scanning application audit logs to prevent malicious activity or policy violations is called _____.

- (A) ID Administration
(B) Intrusion Detection System (Correct Answer) (Chosen option)
(C) Guardian
(D) Gatekeeper System

Question No.13

Marks: 1.00

Bookmark

In MS-Word, _____ document view shows the entire page the user is working on including margins, header and footer information.

- (A) Web Layout
(B) Full Screen Reading (Chosen option)
(C) Print Layout (Correct Answer)
(D) Outline

Question No.14

Marks: 1.00

Bookmark

You can view and change your system settings using _____.

- (A) Windows Defender
(B) Outlook
(C) Microsoft Store (Chosen option)
(D) Control panel (Correct Answer)

Question No.15

Marks: 1.00

Bookmark

The device that is used to convert printed documents into digital images is _____.

- (A) Printer
(B) Fax (Chosen option)
(C) Web cam
(D) Scanner (Correct Answer)

Question No.16

Marks: 1.00

Bookmark

In MS Excel, to wrap an extra long text into multiple lines, we use:

- (A) Page Layout -> Wrap text
(B) **Home -> wrap Text (Correct Answer)**
(C) Insert -> wrap Text (Chosen option)
(D) View -> wrap text

Question No.17

Marks: 1.00

Bookmark

Which shortcut key is used to select the text from current position to the end of the line?

- (A) **Shift+End (Correct Answer)** (Chosen option)
(B) Ctrl+End
(C) Shift+Insert
(D) Alt+End

Question No.18

Marks: 1.00

Bookmark

You are receiving reports from many branch offices, and you want to create a summary of all these reports for your head office. Which of the following will help you in MS Excel?

- (A) VLOOKUP
(B) SUBTOTAL (Chosen option)
(C) SUMMARIZE
(D) **CONSOLIDATE (Correct Answer)**

Question No.19

Marks: 1.00

Bookmark

The two University of Pennsylvania professors Jhon Mauchly and J.Presper Eckart built the device:

- (A) MARK ENGINE
(B) **ENIAC (Correct Answer)** (Chosen option)
(C) COBOL
(D) ASCC

Question No.20

Marks: 1.00

Bookmark

In MS PowerPoint, Ctrl+A is used to:

- (A) Select Only current slide of presentation
(B) Select only all tables of current slide
(C) **Select all slides in a presentation (Correct Answer)**
(D) Select only all shapes of current slide (Chosen option)

Question No.21

Marks: 1.00

Bookmark

In Microsoft Word, the STYLES group is available in which ribbon?

- (A) DATA Ribbon
(B) **HOME Ribbon (Correct Answer)**
(C) PAGE LAYOUT Ribbon (Chosen option)
(D) INSERT Ribbon

Question No.22

Marks: 1.00

Bookmark

_____ refers to software or technology which people can modify and share because its design is publicly accessible.

- (A) **Open Source (Correct Answer)**
- (B) Vendor singed
- (C) Proprietary (Chosen option)
- (D) Closed Source

Question No.23

Marks: 1.00

Bookmark

Which among the following is a cloud storage service offered by Microsoft?

- (A) **One Drive (Correct Answer)** (Chosen option)
- (B) mCloud
- (C) Dropbox
- (D) Skype

Question No.24

Marks: 1.00

Bookmark

What kind of device is BarCodeReader?

- (A) Memory
- (B) Processor (Chosen option)
- (C) **Input (Correct Answer)**
- (D) Output

Question No.25

Marks: 1.00

Bookmark

What is MUD in computer communication?

- (A) Multi-Fact Dimension
- (B) **Multi-User Dimension (Correct Answer)**
- (C) Multi-User Direction (Chosen option)
- (D) Multi-Network Dimension