

OSSC CGL 2022-23
E-BOOK- PDF
7,000 MCQ
EXPLANATION
All Important Questions & Answers

[Click Here](#)

MATH - ଓଡ଼ିଶାର
ସମସ୍ତ ପରୀକ୍ଷା ପୂର୍ବ ବର୍ଷ ପ୍ରଶ୍ନ
E-BOOK- PDF
1,800- MCQ
Topic Wise
OPSC, OSSC CGL, OSSSC, Police/Constable, B.ED, CHT, CT, OSSSC (RI, JC, LSI, OFDC, Group C)]

[Click Here](#)

ଓଡ଼ିଆ ବ୍ୟାକରଣ PYQ
ସମସ୍ତ ପରୀକ୍ଷା ପୂର୍ବ ବର୍ଷ ପ୍ରଶ୍ନ
E-BOOK- PDF
2,222 MCQ
TEST- 75
OPSC ASO, B.ED, CHT, CT, OAVS, OSSTET, OTET, ODISHA POLICE, OSSSC RI, OSSSC LSI, OSSSC OFDC, OSSSC Group C

[Click Here](#)

ENGLISH - ଓଡ଼ିଶାର
ସମସ୍ତ ପରୀକ୍ଷା ପୂର୍ବ ବର୍ଷ ପ୍ରଶ୍ନ
E-BOOK- PDF
3,600- MCQ
Topic Wise
OPSC, OSSC CGL, OSSSC, Police/Constable, B.ED, CHT, OTET, OSSTET CT, OSSSC (RI, JC, LSI, OFDC, Group C)

[Click Here](#)

REASONING - ଓଡ଼ିଶାର
ସମସ୍ତ ପରୀକ୍ଷା ପୂର୍ବ ବର୍ଷ ପ୍ରଶ୍ନ
E-BOOK- PDF
2,200- MCQ
Topic Wise
OPSC, OSSC CGL, OSSSC, Police/Constable, B.ED, CHT, OTET, OSSTET CT, OSSSC (RI, JC, LSI, OFDC, Group C)

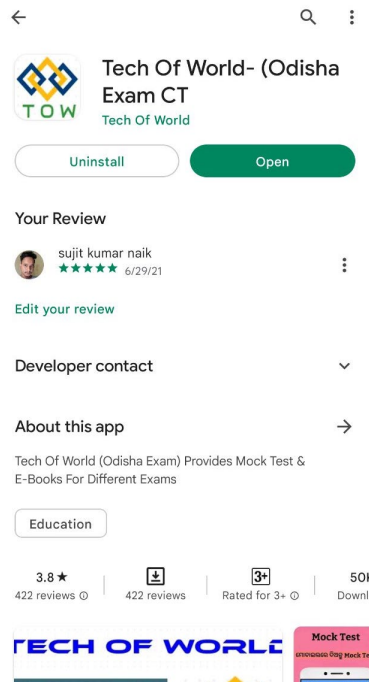
[Click Here](#)

COMPUTER - ଓଡ଼ିଶାର
ସମସ୍ତ ପରୀକ୍ଷା ପୂର୍ବ ବର୍ଷ ପ୍ରଶ୍ନ
E-BOOK- PDF
1,100- MCQ
Topic Wise
OPSC, OSSC CGL, OSSSC, Police/Constable, CHT, OSSSC (RI, JC, LSI, OFDC, Group C)

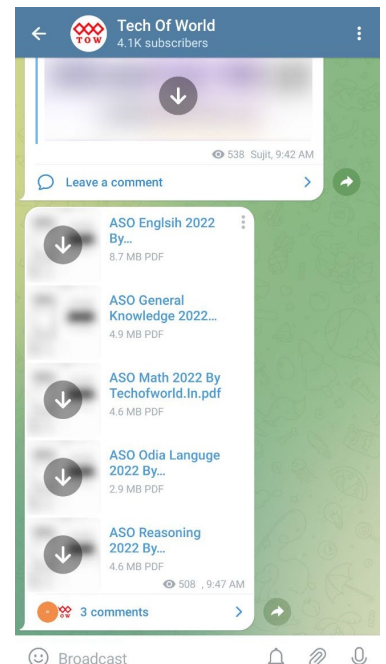
[Click Here](#)



[Click Here](#)



[Click Here](#)



[Click Here](#)

Roll No: Tech Of World App

Registration No: Tech Of World App

Name: Tech Of World App

Exam Date: 07-Nov-2022

Exam Time: 12:15-14:15

Post Name: BSSO 22

Registered Photo



Exam Day Photo

**Arithmetic - Arithmetic****Question No.1**

Marks: 1.00

Bookmark

Find the mid range from the given data:

161, 162, 164, 155, 163, 157, 159, 161, 151, 159, 160, 154, 158, 170.

- (A) 140.5
(B) 130.5
(C) 150.5
(D) **160.5 (Correct Answer)** (Chosen option)

Question No.2

Marks: 1.00

Bookmark

At the end of three years what will be the compound interest at the rate of 10% p.a. on an amount of Rs.55000? (In Rs.)

- (A) 16205
(B) **18205 (Correct Answer)** (Chosen option)
(C) 15205
(D) 17205

Question No.3

Marks: 1.00

Bookmark

A train passes through a telegraph post in 76 seconds moving with a speed of 468 km per hour. Find the length of the train.(in metres)

- (A) 9780
(B) 9580
(C) 9680
(D) **9880 (Correct Answer)** (Chosen option)

Question No.4

Marks: 1.00

Bookmark

Find the perimeter of the rectangle, whose length and breadth are 135 cm and 145 cm. (In cm)

- (A) **560 (Correct Answer)** (Chosen option)
(B) 552
(C) 556
(D) 548

Question No.5

Marks: 1.00

Bookmark

Philip is twice good a workman as Roy and together they can finish the same work in 50 days. In how many days will Philip alone finish the same work?

- (A) 80
(B) 85
(C) 90
(D) **75 (Correct Answer)** (Chosen option)

Question No.6

Marks: 1.00

Bookmark

Solve:

$$453 + (233 \div 5) = ?$$

- (A) 495.6
(B) **499.6 (Correct Answer)** (Chosen option)
(C) 497.6
(D) 493.6

Question No.7

Marks: 1.00

Bookmark

Find the value of $\sqrt{22.09} + \sqrt{0.2209} + \sqrt{0.002209}$

- (A) 7.217
(B) 6.217
(C) **5.217 (Correct Answer)** (Chosen option)
(D) 4.217

Question No.8

Marks: 1.00

Bookmark

Bhanvi travels at a speed of 135 kmph and she reaches the destination in 17 hours. Find the distance she covers.(in km)

- (A) 2285
(B) 2305
(C) 2275
(D) **2295 (Correct Answer)** (Chosen option)

Question No.9

Marks: 1.00

Bookmark

12 students participated in the competition and each got different score. In how many ways can three different prizes be given?

- (A) 1310
(B) 1340
(C) **1320 (Correct Answer)** (Chosen option)
(D) 1330

Question No.10

Marks: 1.00

Bookmark

Two numbers are in the ratio of 86:87. If the HCF of the numbers is 44, find the smallest

number.

- (A) 3784 (Correct Answer) (Chosen option)
 (B) 3584
 (C) 3984
 (D) 3684

Question No.11

Marks: 1.00

Bookmark

Direction:

This type of graph indicates the variation of a quantity with respect to two parameters represented on x - axis and y - axis respectively. So the candidate must carefully observe the peaks and depths of the graph to interpret the data.

x- axis: Months

y- axis: Number of cases for the month

Which month of the following did Chennai have the least number of cases?



- (A) Feb-20
 (B) May-20
 (C) Jan-20 (Correct Answer) (Chosen option)
 (D) Mar-20

Question No.12

Marks: 1.00

Bookmark

Find $(a+b+c)^2$, given that $a^2 = 625$, $b^2 = 361$, $c^2 = 196$ and $2ab+2ac+2bc = 2182$.

- (A) 3164
 (B) 3264
 (C) 3464
 (D) 3364 (Correct Answer) (Chosen option)

Question No.13

Marks: 1.00

Bookmark

If B's age is six times the age of A and if B's age is 36 years, find the age difference

between A and B. (In years)

- (A) 36
(B) 30 (Correct Answer) (Chosen option)
(C) 34
(D) 32

Question No.14

Marks: 1.00

Bookmark

A sum of Rs.6200 earns an interest of Rs.3720 in 6 years at what rate of simple interest?

- (A) 10 (Correct Answer) (Chosen option)
(B) 15
(C) 25
(D) 20

Question No.15

Marks: 1.00

Bookmark

A and B can do a piece of work in 48 days, while C and D can do the same work in 16 days. In how many days will A, B, C and D do it together?

- (A) 8
(B) 6
(C) 10
(D) 12 (Correct Answer) (Chosen option)

Question No.16

Marks: 1.00

Bookmark

Solve:

$$1.712 - (0.4 \times 0.6 \times 0.7) = ?$$

- (A) 1.644
(B) 1.844
(C) 1.744
(D) 1.544 (Correct Answer) (Chosen option)

Question No.17

Marks: 1.00

Bookmark

Tap A can fill a cistern in 182 hours while tap B can empty it in 273 hours. In how many hours the cistern will be filled if both A and B are opened together?

- (A) 546 (Correct Answer) (Chosen option)
(B) 550
(C) 544
(D) 548

Question No.18

Marks: 1.00

Bookmark

A shopkeeper has box which contains 150 black pens, 157 green pens and 162 blue pens. A pen is drawn at random, what is the probability that the pen drawn is either black or green?

- (A) 317/469

- (B) 327/469
(C) **307/469 (Correct Answer)** (Chosen option)
(D) 297/469

Question No.19

Marks: 1.00

Bookmark

What value should come in the place of question mark (?) in the following question?
 $375 \div 15 + 779 \div 19 = ?$

- (A) **66 (Correct Answer)** (Chosen option)
(B) 64
(C) 60
(D) 62

Question No.20

Marks: 1.00

Bookmark

If A and B divide Rs.45000 in the ratio 7:8, find the amount received by B. (In Rs.)

- (A) **24000 (Correct Answer)** (Chosen option)
(B) 26000
(C) 22000
(D) 28000

Question No.21

Marks: 1.00

Bookmark

From the given options, at what time between 6 o'clock and 7 o'clock will the hands of a clock be at right angle?

- (A) 6 past 26(4/11) minutes (Chosen option)
(B) **6 past 16(4/11) minutes (Correct Answer)**
(C) 6 past 6(4/11) minutes
(D) 6 past 36(4/11) minutes

Question No.22

Marks: 1.00

Bookmark

Using all the letters of the word 'ALSO' how many distinct words can be formed?

- (A) 30
(B) **24 (Correct Answer)** (Chosen option)
(C) 22
(D) 28

Question No.23

Marks: 1.00

Bookmark

When an article is sold at Rs.3445 after a discount of 35%, find its marked price. (In Rs.)

- (A) 5200
(B) 5000
(C) **5300 (Correct Answer)** (Chosen option)
(D) 5100

Question No.24

Marks: 1.00

Bookmark

When Two dice are thrown simultaneously, what is the probability of getting two numbers whose product is 21?

- (A) 1.5
(B) 0.5
(C) 0 (Correct Answer) (Chosen option)
(D) 1

Question No.25

Marks: 1.00

Bookmark

A number when divided by 26, 39 and 52, leaves the remainder 10 in each case. Find the smallest possible number.

- (A) 166 (Correct Answer) (Chosen option)
(B) 176
(C) 186
(D) 196

Analytical and Reasoning Ability - Analytical and Reasoning Ability

Question No.1

Marks: 1.00

Bookmark

"Each question given below consists of a statement, followed by two arguments numbered 1 and 2. You have to decide which of the arguments is a 'strong' argument and which is a 'weak' argument.

Give answer:

- (A) If only argument 1 is strong
(B) If only argument 2 is strong
(C) If either 1 or 2 is strong
(D) If neither 1 nor 2 is strong and
(E) If both 1 and 2 are strong.

Statement: Is adopting pets better than buying them?

Argument:

1. Yes, when you buy a dog or rabbit from a pet store, you're actually supporting the cruel puppy mills that are literally "breeding factories" that put profits way before the welfare of dogs.
2. Yes, adopted pets show better care and compassion towards owners.

- (A) D
(B) B
(C) A (Correct Answer) (Chosen option)
(D) C

Question No.2

Marks: 1.00

Bookmark

What should be written in the place of question mark in the given series?

D6, H12, L18, ?, T30

- (A) N22
(B) O22

- (C) P24 (Correct Answer) (Chosen option)
(D) N24

Question No.3

Marks: 1.00

Bookmark

Choose the alternative which is an odd word/number/letter pair out of the given alternatives.

- (A) Show (Correct Answer) (Chosen option)
(B) Hide
(C) Cover
(D) Mask

Question No.4

Marks: 1.00

Bookmark

In this question, relationship between different elements is shown in the statement. This statement is followed by two conclusions:

Statements: $T > H > O \geq U = S < A < N \leq D$

Conclusion:

- i) $H > A$
ii) $N > O$

Choose the appropriate one from the following options

- (A) Only conclusion i follows
(B) Only conclusion ii follows
(C) Either i or ii follows
(D) Neither i nor ii follows
(E) Both i and ii follow.
(A) D (Correct Answer) (Chosen option)
(B) A
(C) C
(D) B

Question No.5

Marks: 1.00

Bookmark

Replace the question mark with an option that follows the same logic applied in the first pair

OM : QO :: CU : ??

- (A) EW (Correct Answer) (Chosen option)
(B) FV
(C) EV
(D) FW

Question No.6

Marks: 1.00

Bookmark

If + means \div , \times means +, \div means - & - means \times , then,
 $56 + 4 - 7 \times 14 - 2 \times 17 = ?$

- (A) 163
(B) 172

- (C) 155
(D) **143 (Correct Answer)** (Chosen option)

Question No.7

Marks: 1.00

Bookmark

In a college of 1385 students, 620 play Cricket and 468 play Football and 481 play Hockey, 104 play Cricket and Football and 109 play Football and Hockey and 114 play Hockey and Cricket. 80 play all three games.

Find the number of students who play only Football.

- (A) 495
(B) 338
(C) 482
(D) **335 (Correct Answer)** (Chosen option)

Question No.8

Marks: 1.00

Bookmark

In a certain code language, if GRANT is coded as VKEXR, then how is ROUGH coded in that language?

- (A) **SVYLK (Correct Answer)** (Chosen option)
(B) VSYKL
(C) ILFTS
(D) NMAUX

Question No.9

Marks: 1.00

Bookmark

Pointing to an old lady, my grandfather told me, "She is the sister-in-law of mother of your mother's husband." How is the old lady related to my grandfather?

- (A) Mother
(B) Wife
(C) **Sister (Correct Answer)** (Chosen option)
(D) Daughter-in-law

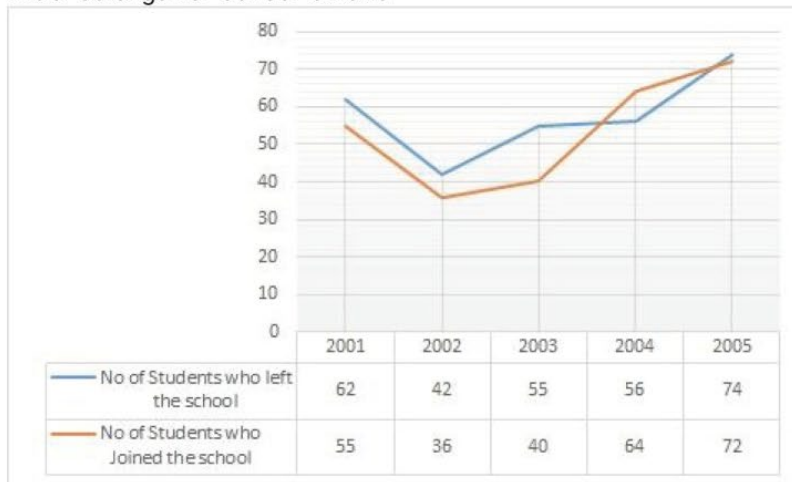
Case Study - 10 to 11

2.00

Directions :

Study the following line chart which gives the number of students who joined and left the school in the beginning of the year for five years, from 2001 to 2005.

Initial Strength of school is 2320



Question No.10

Marks: 1.00

Bookmark

In how many years, the number of students who left the school is more than the number of students who joined the school?

- (A) 2
 (B) 4 (Correct Answer) (Chosen option)
 (C) 3
 (D) 1

Question No.11

Marks: 1.00

Bookmark

Find the total strength of the students during the year 2005.

- (A) 2298 (Correct Answer)
 (B) 2313
 (C) 2300
 (D) 2292 (Chosen option)

Question No.12

Marks: 1.00

Bookmark

In the following question, few statements are given and these statements are followed by two conclusions numbered i and ii. You have to take the given statements to be true even if they seem to be at variance from commonly known facts. Read the conclusions and then decide which of the given conclusions logically follows from the given statements, disregarding commonly known facts. Choose,

- (A) Only (i) conclusion follows
 (B) Only (ii) conclusion follows
 (C) Neither (i) nor (ii) follows
 (D) Both (i) and (ii) follow
 (E) Either (i) or (ii) follows

Statements: Some apples are oranges. All oranges are carrots. Some carrots are beans.

Conclusions:

- i) Some apples are carrots.
 ii) Some beans are oranges.

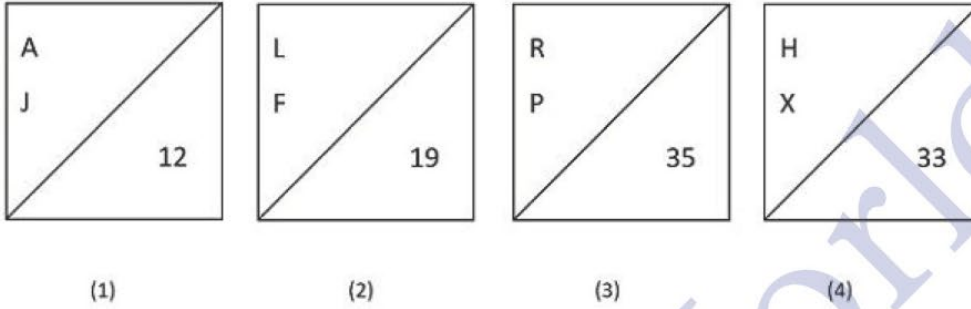
- (A) A (Correct Answer) (Chosen option)
- (B) B
- (C) C
- (D) E

Question No.13

Marks: 1.00

Bookmark

Find the odd image out in the given series.



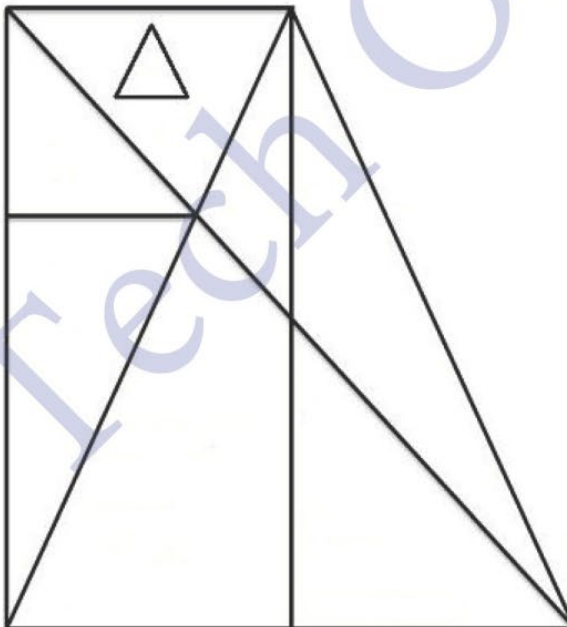
- (A) 2 (Chosen option)
- (B) 3
- (C) 1 (Correct Answer)
- (D) 4

Question No.14

Marks: 1.00

Bookmark

How many triangles are there in the given figure?



- (A) 16 (Correct Answer) (Chosen option)
- (B) 14
- (C) 15
- (D) 12

Question No.15

Marks: 1.00

Bookmark

Replace the question mark with an option that follows the same logic applied in the first pair

Ordinary : Uncommon :: Excellent : ??

- (A) Funny
(B) Cheerful
(C) Comical
(D) **Awful (Correct Answer)** (Chosen option)

Question No.16

Marks: 1.00

Bookmark

In a certain code language, if ALLOW is coded as 112121523, then how is DELAY coded in that language?

- (A) 5412135
(B) **4512125 (Correct Answer)** (Chosen option)
(C) 4512135
(D) 5412125

Question No.17

Marks: 1.00

Bookmark

A child is standing in a lawn facing North direction. If the child turns 152.5 degrees in anti-clockwise direction and 62.5 degrees in clockwise direction, which direction will he face now?

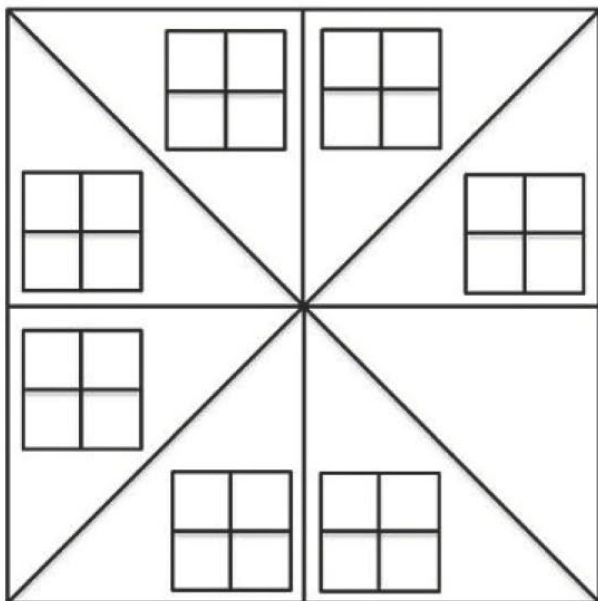
- (A) South
(B) East
(C) **West (Correct Answer)** (Chosen option)
(D) North

Question No.18

Marks: 1.00

Bookmark

How many squares are there in the given figure?



- (A) 43
 (B) 42
 (C) 40 (Correct Answer) (Chosen option)
 (D) 45

Question No.19

Marks: 1.00

Bookmark

Pointing to a photograph of a man, a boy said, "He is my mother's brother's wife's father-in-law's only daughter's husband." How is the man related to the boy?

- (A) Grandfather
 (B) Brother
 (C) Cousin
 (D) Father (Correct Answer) (Chosen option)

Question No.20

Marks: 1.00

Bookmark

The letters of the name of a vegetable are P, A, C, I, U, M, S and C. If the letters are rearranged correctly, then what is the last letter of the word formed?

- (A) U
 (B) M (Correct Answer) (Chosen option)
 (C) P
 (D) I

Question No.21

Marks: 1.00

Bookmark

In this question, relationship between different elements is shown in the statement. This statement is followed by two conclusions:

Statements: $T < H < I > R > F = Y$

Conclusion:

i) $R > Y$

ii) $I > Y$

Choose the appropriate one from the following options

- (A) Only conclusion i follows
- (B) Only conclusion ii follows
- (C) Either i or ii follows
- (D) Neither i nor ii follows
- (E) Both i and ii follow.

- (A) C
- (B) A
- (C) **E (Correct Answer)** (Chosen option)
- (D) B

Question No.22

Marks: 1.00

Bookmark

Choose the alternative which is an odd word/number/letter pair out of the given alternatives.

- (A) Get
- (B) **Lose (Correct Answer)** (Chosen option)
- (C) Acquire
- (D) Obtain

Question No.23

Marks: 1.00

Bookmark

What will be written in the place of question mark in the given series?

C3N14S19G7?25

- (A) X
- (B) **Y (Correct Answer)** (Chosen option)
- (C) W
- (D) V

Question No.24

Marks: 1.00

Bookmark

"Each question given below consists of a statement, followed by two arguments numbered 1 and 2. You have to decide which of the arguments is a 'strong' argument and which is a 'weak' argument.

Give answer:

- (A) If only argument 1 is strong
- (B) If only argument 2 is strong
- (C) If either 1 or 2 is strong
- (D) If neither 1 nor 2 is strong and
- (E) If both 1 and 2 are strong.

Statement: Is quitting sugar a healthy option?

Argument:

1. Yes, regular consumption of sugar may cause diabetes, obesity and other health issues
2. No, the food doesn't taste good without sugar.

- (A) B
- (B) C

- (C) A (Correct Answer) (Chosen option)
(D) D

Question No.25

Marks: 1.00

Bookmark

Which of the following sets of signs should be used to replace * in the following?

$$6 * 42 * 7 = 6 * 2 * 15$$

- (A) + × + ÷
(B) × ÷ + × (Correct Answer) (Chosen option)
(C) × - ÷ +
(D) ÷ × × -

General Awareness and Current Events - General Awareness and Current Events**Question No.1**

Marks: 1.00

Bookmark

Which of the following Committees recommended 'flexible Inflation Targeting' in India?

- (A) Raja Chelliah Committee (Chosen option)
(B) Malegam Committee
(C) Tarapore Committee
(D) Urjit Patel Committee (Correct Answer)

Question No.2

Marks: 1.00

Bookmark

Who among the following is popularly known as the 'Father of India's Missile Programme'?

- (A) Vikram Ambalal Sarabhai
(B) A.P.J. Abdul Kalam (Correct Answer)
(C) Homi Jehangir Bhabha (Chosen option)
(D) Satyendra Nath Bose

Question No.3

Marks: 1.00

Bookmark

Which of the following countries is separated from India by the Gulf of Mannar and Palk Strait?

- (A) Nepal
(B) Maldives
(C) Bangladesh
(D) Sri Lanka (Correct Answer) (Chosen option)

Question No.4

Marks: 1.00

Bookmark

What are the three words added to the preamble of the Indian Constitution by the 42nd Constitutional Amendment Act 1976?

- (A) Socialist, Secular, Integrity (Correct Answer) (Chosen option)
(B) Sovereign, Secular, Integrity
(C) Socialist, Secular, Republic
(D) Socialist, Democratic, Integrity

<p>Question No.5</p> <p>What is the rank of India in terms of population in the world?</p> <p>(A) <input type="radio"/> Three</p> <p>(B) <input type="radio"/> Four</p> <p>(C) <input type="radio"/> Two (Correct Answer) (Chosen option)</p> <p>(D) <input type="radio"/> One</p>	<p>Marks: 1.00</p> <p>Bookmark <input type="checkbox"/></p>
<p>Question No.6</p> <p>Who founded the Eastern Ganga dynasty?</p> <p>(A) <input type="radio"/> Devendravarman Rajarajadeva</p> <p>(B) <input type="radio"/> Anantavarman Chodagangadeva (Correct Answer) (Chosen option)</p> <p>(C) <input type="radio"/> Narasimhadeva IV</p> <p>(D) <input type="radio"/> Anantavaraman Vajrahast a V</p>	<p>Marks: 1.00</p> <p>Bookmark <input checked="" type="checkbox"/></p>
<p>Question No.7</p> <p>In July 2022, on which of the following sectors has the Union Government of India levied windfall tax?</p> <p>(A) <input type="radio"/> Banking</p> <p>(B) <input type="radio"/> Gold exporters</p> <p>(C) <input type="radio"/> Domestic crude oil production (Correct Answer) (Chosen option)</p> <p>(D) <input type="radio"/> Domestic rice production</p>	<p>Marks: 1.00</p> <p>Bookmark <input type="checkbox"/></p>
<p>Question No.8</p> <p>Leander Paes is a distinguished personality in which of the following sports/games?</p> <p>(A) <input type="radio"/> Weight Lifting</p> <p>(B) <input type="radio"/> Tennis (Correct Answer) (Chosen option)</p> <p>(C) <input type="radio"/> Badminton</p> <p>(D) <input type="radio"/> Squash</p>	<p>Marks: 1.00</p> <p>Bookmark <input checked="" type="checkbox"/></p>
<p>Question No.9</p> <p>The Monetary Policy Committee of the Reserve Bank of India consists of how many members?</p> <p>(A) <input type="radio"/> Five</p> <p>(B) <input type="radio"/> Four</p> <p>(C) <input type="radio"/> Six (Correct Answer) (Chosen option)</p> <p>(D) <input type="radio"/> Three</p>	<p>Marks: 1.00</p> <p>Bookmark <input type="checkbox"/></p>
<p>Question No.10</p> <p>Where is the headquarters of the Organisation for the Prohibition of Chemical Weapons (OPCW) located?</p>	<p>Marks: 1.00</p> <p>Bookmark <input checked="" type="checkbox"/></p>

- (A) Paris, France (Chosen option)
(B) **The Hague, Netherlands (Correct Answer)**
(C) New York, USA
(D) Brussels, Belgium

Question No.11

Marks: 1.00

Bookmark

Who among the following started a voluntary organization "Puri Seva Samiti" to help the cholera victims?

- (A) **Gopabandhu Das (Correct Answer)**
(B) Bhagirathi Mahapatra
(C) Jagabandhu Singh
(D) Acharya Prafulla Chandra Roy (Chosen option)

Question No.12

Marks: 1.00

Bookmark

Muscat is the capital of _____.

- (A) Serbia
(B) **Oman (Correct Answer)** (Chosen option)
(C) Saudi Arabia
(D) Qatar

Question No.13

Marks: 1.00

Bookmark

What is the full form of 'PDF', a digital file format?

- (A) Printable Document Format
(B) Programmable Document Format
(C) Personal Document Format
(D) **Portable Document Format (Correct Answer)** (Chosen option)

Question No.14

Marks: 1.00

Bookmark

Who among the following won the UNHCR Nansen Refugee Award 2022?

- (A) Volodymyr Zelensky (Chosen option)
(B) **Angela Merkel (Correct Answer)**
(C) Barack Obama
(D) Greta Thunberg

Question No.15

Marks: 1.00

Bookmark

Which of the following districts has the lowest literacy rate in Odisha as per Census 2011?

- (A) **Nabarangpur (Correct Answer)** (Chosen option)
(B) Boudh
(C) Koraput
(D) Malkangiri

<p>Question No.16</p> <p>What is the full form of 'RTGS' in banking terminology?</p> <p>(A) <input type="radio"/> Real Time Gross Service</p> <p>(B) <input type="radio"/> Real Time Gross Standard</p> <p>(C) <input checked="" type="radio"/> Real Time Gross Settlement (Correct Answer) (Chosen option)</p> <p>(D) <input type="radio"/> Real Time Gross Statutory</p>	<p>Marks: 1.00</p> <p>Bookmark <input type="checkbox"/></p>
<p>Question No.17</p> <p>The River Alakananda and Bhagirathi Join at which of the following places?</p> <p>(A) <input checked="" type="radio"/> Devprayag (Correct Answer)</p> <p>(B) <input type="radio"/> Vishnu Prayag (Chosen option)</p> <p>(C) <input type="radio"/> Karnaprayag</p> <p>(D) <input type="radio"/> Rudraprayag</p>	<p>Marks: 1.00</p> <p>Bookmark <input checked="" type="checkbox"/></p>
<p>Question No.18</p> <p>Pal Ghat is located in which of the following Mountain Ranges?</p> <p>(A) <input checked="" type="radio"/> Western Ghats (Correct Answer) (Chosen option)</p> <p>(B) <input type="radio"/> Aravalli Range</p> <p>(C) <input type="radio"/> Mahabharat Range</p> <p>(D) <input type="radio"/> Eastern Ghats</p>	<p>Marks: 1.00</p> <p>Bookmark <input checked="" type="checkbox"/></p>
<p>Question No.19</p> <p>The Brahmani River is formed by the confluence of the rivers Shankh and the South Koel at:</p> <p>(A) <input type="radio"/> Chandabali</p> <p>(B) <input checked="" type="radio"/> Vedavyas (Correct Answer) (Chosen option)</p> <p>(C) <input type="radio"/> Gopalpur</p> <p>(D) <input type="radio"/> Chandipur</p>	<p>Marks: 1.00</p> <p>Bookmark <input checked="" type="checkbox"/></p>
<p>Question No.20</p> <p>Who has the authority to reserve certain types of bills passed by the 'State Legislature' for the consideration of the President of India?</p> <p>(A) <input checked="" type="radio"/> Governor of the state (Correct Answer) (Chosen option)</p> <p>(B) <input type="radio"/> Chief Minister of the state</p> <p>(C) <input type="radio"/> Chief Justice of the High Court</p> <p>(D) <input type="radio"/> Advocate General of the state</p>	<p>Marks: 1.00</p> <p>Bookmark <input type="checkbox"/></p>
<p>Question No.21</p> <p>Which Delhi Sultan moved the capital from Delhi to Agra?</p> <p>(A) <input checked="" type="radio"/> Sikandar Lodi (Correct Answer)</p>	<p>Marks: 1.00</p> <p>Bookmark <input checked="" type="checkbox"/></p>

- (B) Alauddin Khalji (Chosen option)
(C) Ibrahim Lodi
(D) Muhammad bin Tughluq

Question No.22

Marks: 1.00

Bookmark

Who among the following translated Bhagavata Purana to Odia?

- (A) Sarala Dasa (Chosen option)
(B) **Jagannatha Dasa (Correct Answer)**
(C) Balarama Dasa
(D) Bhima Bhoi

Question No.23

Marks: 1.00

Bookmark

Who among the following was the founder of Naujawan Bharat Sabha?

- (A) Bal Gangadhar Tilak
(B) Gopal Krishna Gokale
(C) Lala Lajpat Rai (Chosen option)
(D) **Bhagat Singh (Correct Answer)**

Question No.24

Marks: 1.00

Bookmark

Sampriti is a joint military exercise between India and which of the following countries?

- (A) Sri Lanka
(B) Pakistan
(C) Nepal (Chosen option)
(D) **Bangladesh (Correct Answer)**

Question No.25

Marks: 1.00

Bookmark

Ghoomar is a traditional folk dance of which of the following Indian States?

- (A) **Rajasthan (Correct Answer)** (Chosen option)
(B) Uttarakhand
(C) Meghalaya
(D) Jharkhand

Computer and Internet Awareness - Computer and Internet Awareness**Question No.1**

Marks: 1.00

Bookmark

In Microsoft PowerPoint, _____ gallery displays the combination of effects that is applied to shapes on the slides by each of the themes.

- (A) Edits
(B) **Effects (Correct Answer)** (Chosen option)
(C) Fonts
(D) Styles

Question No.2

Marks: 1.00

Bookmark

_____ is an electronic device for registering and calculating transactions connected to computers running inventory or sales computer applications.

- (A) Sales Register (Chosen option)
- (B) Cash Register (Correct Answer)
- (C) Query System
- (D) Data Machine

Question No.3

Marks: 1.00

Bookmark

_____ Virus has been named after the Greek mythology story of the siege of Troy.

- (A) Trap door
- (B) Logic Bomb
- (C) Worm
- (D) Trojan horse (Correct Answer) (Chosen option)

Question No.4

Marks: 1.00

Bookmark

What is the advantage of https over http?

- (A) insecurity
- (B) sophisticated
- (C) social
- (D) security (Correct Answer) (Chosen option)

Question No.5

Marks: 1.00

Bookmark

In Microsoft Word, the page break options are available under which ribbon?

- (A) Print Layout ribbon -> Line break group
- (B) Review ribbon -> Page set up group
- (C) Review ribbon -> Print preview group
- (D) Print Layout ribbon -> Page setup group (Correct Answer) (Chosen option)

Question No.6

Marks: 1.00

Bookmark

What is the short cut key to end a presentation?

- (A) Alt
- (B) Ctrl
- (C) Home
- (D) Esc (Correct Answer) (Chosen option)

Question No.7

Marks: 1.00

Bookmark

In MS Word, _____ menu allows insertion of citations and bibliography.

- (A) Footnotes (Chosen option)
- (B) References (Correct Answer)

- (C) Captions
(D) Index

Question No.8

Marks: 1.00

Bookmark

Which among the following operating systems uses Protected memory architecture and is developed by Apple?

- (A) **Mac OS X (Correct Answer)** (Chosen option)
(B) Apple OS
(C) MS DOS
(D) Unix OS

Question No.9

Marks: 1.00

Bookmark

The computer storage concept RAID stands for _____.

- (A) **Redundant Array of Independent Disks (Correct Answer)**
(B) Random Array of Independent Disks (Chosen option)
(C) Redundant Array of Input Disks
(D) Random Array of Independent Devices

Question No.10

Marks: 1.00

Bookmark

The spelling and grammar feature uses _____ to indicate spelling mistake.

- (A) wavy green underline
(B) **Wavy red underline (Correct Answer)** (Chosen option)
(C) italicized
(D) all capital letters

Question No.11

Marks: 1.00

Bookmark

The file system developed by Microsoft is _____.

- (A) HDFS
(B) ASCII
(C) UTF
(D) **NTFS (Correct Answer)**

Question No.12

Marks: 1.00

Bookmark

EEPROM is also known as _____.

- (A) Flash Card
(B) **Flash Memory (Correct Answer)**
(C) Memory Power (Chosen option)
(D) Pseudo memory

Question No.13

Marks: 1.00

Bookmark

Which short cut is used to select the entire text?

- (A) Ctrl + *
- (B) Ctrl + I
- (C) Ctrl + S
- (D) **Ctrl + A (Correct Answer)** (Chosen option)

Question No.14

Marks: 1.00

Bookmark

Which among the following options is used to launch a power point in full screen mode?

- (A) Slide sorter
- (B) Page layout (Chosen option)
- (C) **Slide show (Correct Answer)**
- (D) Handouts

Question No.15

Marks: 1.00

Bookmark

While working in MS Excel, you want to keep certain columns and rows as fixed so that you can scroll other rows and columns. Which feature of MS Excel will help?

- (A) Split
- (B) Freeze Rows
- (C) Arrange All
- (D) **Freeze Panes (Correct Answer)** (Chosen option)

Question No.16

Marks: 1.00

Bookmark

What is IRC in computer communication?

- (A) Internet Relay chain (Chosen option)
- (B) Internet resource change
- (C) **Internet relay Chat (Correct Answer)**
- (D) Intranet Relay change

Question No.17

Marks: 1.00

Bookmark

_____ are miniature charts that summarize worksheet data in a single cell.

- (A) Gridlines
- (B) Pivot tables (Chosen option)
- (C) illustrations
- (D) **Sparklines (Correct Answer)**

Question No.18

Marks: 1.00

Bookmark

In Ms Excel, to format cells based on some condition, we use:

- (A) **Home -> Conditional Formatting (Correct Answer)**
- (B) View -> Conditional Formatting
- (C) Data -> Conditional Formatting
- (D) Insert -> Conditional Formatting (Chosen option)