

OSSC CGL 2022-23
E-BOOK- PDF
7,000 MCQ
EXPLANATION
All Important Questions & Answers

[Click Here](#)

MATH - ଓଡ଼ିଶାର
ସମସ୍ତ ପରୀକ୍ଷା ପୂର୍ବ ବର୍ଷ ପ୍ରଶ୍ନ
E-BOOK- PDF
1,800- MCQ
Topic Wise
OPSC, OSSC CGL, OSSSC, Police/Constable, B.ED, CHT, CT, OSSSC (RI, JC, LSI, OFDC, Group C)]

[Click Here](#)

ଓଡ଼ିଆ ବ୍ୟାକରଣ PYQ
ସମସ୍ତ ପରୀକ୍ଷା ପୂର୍ବ ବର୍ଷ ପ୍ରଶ୍ନ
E-BOOK- PDF
2,222 MCQ
TEST- 75
OPSC ASO, B.ED, CHT, CT, OAVS, OSSTET, OTET, ODISHA POLICE, OSSSC RI, OSSSC LSI, OSSSC OFDC, OSSSC Group C

[Click Here](#)

ENGLISH - ଓଡ଼ିଶାର
ସମସ୍ତ ପରୀକ୍ଷା ପୂର୍ବ ବର୍ଷ ପ୍ରଶ୍ନ
E-BOOK- PDF
3,600- MCQ
Topic Wise
OPSC, OSSC CGL, OSSSC, Police/Constable, B.ED, CHT, OTET, OSSTET CT, OSSSC (RI, JC, LSI, OFDC, Group C)

[Click Here](#)

REASONING - ଓଡ଼ିଶାର
ସମସ୍ତ ପରୀକ୍ଷା ପୂର୍ବ ବର୍ଷ ପ୍ରଶ୍ନ
E-BOOK- PDF
2,200- MCQ
Topic Wise
OPSC, OSSC CGL, OSSSC, Police/Constable, B.ED, CHT, OTET, OSSTET CT, OSSSC (RI, JC, LSI, OFDC, Group C)

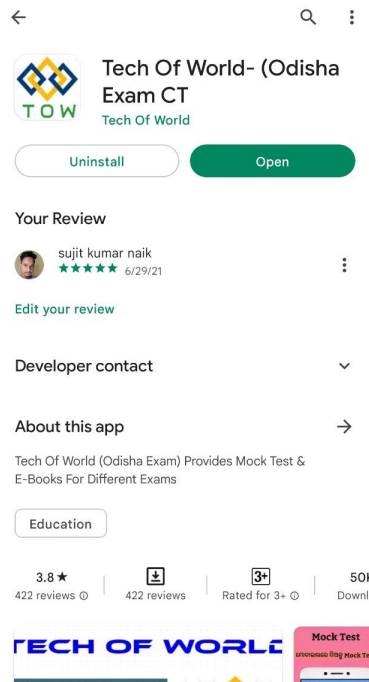
[Click Here](#)

COMPUTER - ଓଡ଼ିଶାର
ସମସ୍ତ ପରୀକ୍ଷା ପୂର୍ବ ବର୍ଷ ପ୍ରଶ୍ନ
E-BOOK- PDF
1,100- MCQ
Topic Wise
OPSC, OSSC CGL, OSSSC, Police/Constable, CHT, OSSSC (RI, JC, LSI, OFDC, Group C)

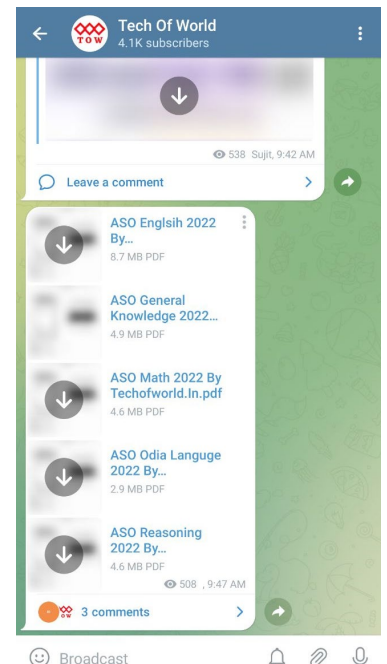
[Click Here](#)



[Click Here](#)



[Click Here](#)



[Click Here](#)

Roll No: Tech Of World App

Registration No: Tech Of World App

Name: Tech Of World App

Exam Date: 07-Nov-2022

Exam Time: 09:00-11:00

Post Name: BSSO 22

Registered Photo



Exam Day Photo

**Arithmetic - Arithmetic****Question No.1**

Marks: 1.00

Bookmark

A train of length 825 m which travels at a speed of 144 kmph crosses a Tunnel in 62 seconds. Find the length of the Tunnel. (In metres)

- (A) 1855
(B) 1655 (Correct Answer) (Chosen option)
(C) 1555
(D) 1755

Question No.2

Marks: 1.00

Bookmark

What value should come in the place of question mark (?) in the following question?

$$364 \div 14 + 819 \div 21 = ?$$

- (A) 61
(B) 63
(C) 59
(D) 65 (Correct Answer) (Chosen option)

Question No.3

Marks: 1.00

Bookmark

Find the smallest number which when reduced by 11, is divisible 18, 24 and 44.

- (A) 843
(B) 803 (Correct Answer) (Chosen option)
(C) 813
(D) 823

Question No.4

Marks: 1.00

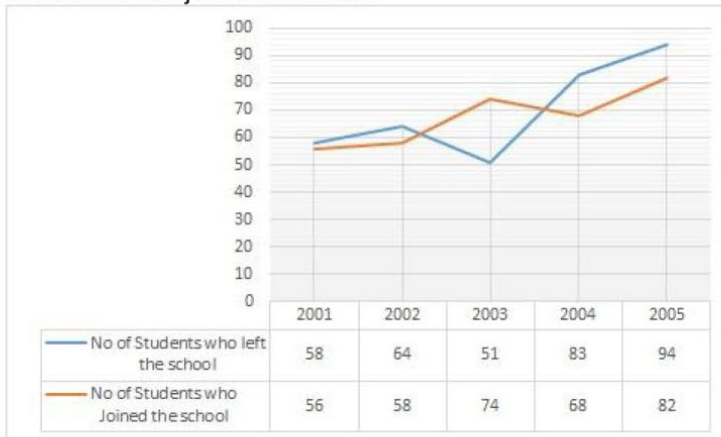
Bookmark **Direction:**

Study the following line chart which gives the number of students who joined and left the school in the beginning of year for five years, from 2001 to 2005.

Initial Strength of school in 2450

In how many years the number of students who left the school is more than the number

of students who joined the school?



- (A) 4 (Correct Answer) (Chosen option)
- (B) 3
- (C) 2
- (D) 1

Question No.5

Marks: 1.00

Bookmark

What is the difference between a discount of 25% on Rs.40000 and two successive discounts of 19% and 6% on the same amount? (In Rs.)

- (A) 426
- (B) 456 (Correct Answer) (Chosen option)
- (C) 436
- (D) 446

Question No.6

Marks: 1.00

Bookmark

A sum of Rs.4350 earns an interest of Rs.2610 in 10 years at what rate of simple interest?

- (A) 6% (Correct Answer) (Chosen option)
- (B) 4%
- (C) 10%
- (D) 8%

Question No.7

Marks: 1.00

Bookmark

Solve:

$$114 - (114 \div 5) = ?$$

- (A) 93.2
- (B) 94.2
- (C) 92.2
- (D) 91.2 (Correct Answer) (Chosen option)

Question No.8

Marks: 1.00

Bookmark

If two numbers are in the ratio 3:4. If 29 is added to both of the numbers then the ratio becomes 4:5, then find the smallest number.

- (A) 87 (Correct Answer) (Chosen option)
- (B) 89

- (C) 83
(D) 85

Question No.9

Marks: 1.00

Bookmark

Find the area of a circle whose radius is 185 cm. (In cm^2)

- (A) 32225π
(B) 34225π (Correct Answer) (Chosen option)
(C) 33225π
(D) 31225π

Question No.10

Marks: 1.00

Bookmark

11 students participated in the competition and each got different score. In how many ways can three different prizes be given?

- (A) 980
(B) 960
(C) 970
(D) 990 (Correct Answer) (Chosen option)

Question No.11

Marks: 1.00

Bookmark

Solve:

$$(1 \div 14) - (1 \div 15) = ?$$

- (A) $1/212$
(B) $1/210$ (Correct Answer) (Chosen option)
(C) $1/213$
(D) $1/211$

Question No.12

Marks: 1.00

Bookmark

Suppose you randomly choose a number from 161 to 195, both inclusive. What is the probability that you chose a number which is a multiple of 3?

- (A) $14/35$
(B) $11/35$
(C) $12/35$ (Correct Answer) (Chosen option)
(D) $13/35$

Question No.13

Marks: 1.00

Bookmark

A travels from X to Y at a speed of 132 kmph and reaches 180 minutes late. If he travels at a speed of 231 kmph and reaches early by 180 minutes, find the distance between X and Y. (In km)

- (A) 1948
(B) 2048
(C) 2148
(D) 1848 (Correct Answer) (Chosen option)

Question No.14

Marks: 1.00

Bookmark

The total age of X and Y is 61 years more than the total age of Y and Z. Z is how many years younger than X?

- (A) 61 (Correct Answer) (Chosen option)
(B) 65
(C) 67
(D) 63

Question No.15

Marks: 1.00

Bookmark

Find $a^3 - b^3$, given that $(a-b) = 12$ and $(a^2 + ab + b^2) = 1488$.

- (A) 17856 (Correct Answer) (Chosen option)
(B) 18856
(C) 19856
(D) 16856

Question No.16

Marks: 1.00

Bookmark

2 men and 3 boys can do a piece of work in 180 days while 3 men and 2 boys can do the same work in 144 days. In how many days can 5 men and 5 boy do the work?

- (A) 78
(B) 82
(C) 84
(D) 80 (Correct Answer) (Chosen option)

Question No.17

Marks: 1.00

Bookmark

A clock is started at 12 noon. By 840 seconds past 5 p.m, the hour hand has turned through how many degrees?

- (A) 157° (Correct Answer) (Chosen option)
(B) 167°
(C) 187°
(D) 177°

Question No.18

Marks: 1.00

Bookmark

A basket contains 92 brown shoes and 138 black shoes. A shoe is picked up at random. Find the probability of getting a brown shoe.

- (A) 0.4 (Correct Answer) (Chosen option)
(B) 0.6
(C) 0.5
(D) 0.3

Question No.19

Marks: 1.00

Bookmark

The difference between simple interest and compound interest at the same rate for Rs.6400 for 2 years is Rs.144. Find the rate of interest.

- (A) 25%
(B) 10%
(C) 20%
(D) 15% (Correct Answer) (Chosen option)

Question No.20

Marks: 1.00

Bookmark

Find the least number with which you would divide 450, to get a perfect square.

- (A) 6
(B) 4
(C) 2 (Correct Answer) (Chosen option)
(D) 8

Question No.21

Marks: 1.00

Bookmark

Pipe A can fill a tank in 321 minutes and Pipe B can empty the same tank in 642 minutes. If both pipes are opened together, how many minutes will it take to fill the empty tank?

- (A) 642 (Correct Answer) (Chosen option)
(B) 662
(C) 652
(D) 672

Question No.22

Marks: 1.00

Bookmark

Using all the letters of the word 'LINKED', how many distinct words can be formed?

- (A) 24
(B) 720 (Correct Answer) (Chosen option)
(C) 120
(D) 36

Question No.23

Marks: 1.00

Bookmark

The following represents age distribution of students in an elementary class. Find the mode values: 63, 65, 66, 69, 67, 63, 65, 75, 68, 67, 65, 63, 65, 66, 67.

- (A) 67
(B) 65 (Correct Answer) (Chosen option)
(C) 63
(D) 61

Question No.24

Marks: 1.00

Bookmark

A works twice as fast as B. If B can complete the work in 90 days independently, the number of days in which A and B can together finish the work is:

- (A) 35
(B) 20
(C) 25
(D) 30 (Correct Answer) (Chosen option)

Question No.25

Marks: 1.00

Bookmark

Find the HCF of two numbers, if the LCM of two number is 414 and its product is 9522.

- (A) 23 (Correct Answer) (Chosen option)
(B) 27
(C) 21
(D) 25

Analytical and Reasoning Ability - Analytical and Reasoning Ability

Question No.1

Marks: 1.00

Bookmark

Choose the alternative which is an odd word/number/letter pair out of the given alternatives.

- (A) Establish
(B) Initiate
(C) Create
(D) **Finish (Correct Answer)** (Chosen option)

Question No.2

Marks: 1.00

Bookmark

If + means \div , \times means +, \div means - & - means \times , then,
 $29 - 5 \times 20 + 5 - 2 \times 11 = ?$

- (A) 174
(B) 143
(C) 157
(D) **164 (Correct Answer)** (Chosen option)

Question No.3

Marks: 1.00

Bookmark

"Each question given below consists of a statement, followed by two arguments numbered 1 and 2. You have to decide which of the arguments is a 'strong' argument and which is a 'weak' argument.

Give answer:

- (A) If only argument 1 is strong
(B) If only argument 2 is strong
(C) If either 1 or 2 is strong
(D) If neither 1 nor 2 is strong and
(E) If both 1 and 2 are strong.

Statement: Is adopting pets better than buying them?

Argument:

1. Yes, pets are a source of immense joy to people.
2. No, when you adopt, you cannot see the grow.

- (A) A
(B) **D (Correct Answer)** (Chosen option)
(C) C
(D) B

Question No.4

Marks: 1.00

Bookmark

Which of the following sets of signs should be used to replace * in the following?

$$42 * 7 * 6 = 2 * 21 * 6$$

- (A) **$\div \times \times -$ (Correct Answer)** (Chosen option)
(B) $\times - \div +$
(C) $+ \times + \div$
(D) $\times \div + \times$

Question No.5

Marks: 1.00

Bookmark

In a class, there are 75 students who like litchi drink. 105 students like Mojito drink. 20 students like neither. There are 170 people in the class.

How many students like exactly one drink?

- (A) 150
(B) 130
(C) **120 (Correct Answer)** (Chosen option)
(D) 140

Question No.6

Marks: 1.00

Bookmark

Choose the alternative which is an odd word/number/letter pair out of the given alternatives.

- (A) Forget
(B) **Note (Correct Answer)** (Chosen option)
(C) Avoid
(D) Ignore

Question No.7

Marks: 1.00

Bookmark

In this question, relationship between different elements is shown in the statement. This statement is followed by two conclusions:

Statements: $C > H \geq I = P < O \leq T < L < E$

Conclusion:

- i) $H < T$
ii) $E \geq P$

Choose the appropriate one from the following options

- (A) Only conclusion i follows
(B) Only conclusion ii follows
(C) Either i or ii follows
(D) Neither i nor ii follows
(E) Both i and ii follow.
(A) B
(B) **D (Correct Answer)** (Chosen option)
(C) C
(D) A

Question No.8

Marks: 1.00

Bookmark

In a certain code language, if GRANT is coded as TIZMG, then how is ROUGH coded in that language?

- (A) NMAUX
(B) SVYLK
(C) **ILFTS (Correct Answer)** (Chosen option)
(D) VSYKL

Question No.9

Marks: 1.00

Bookmark

Replace the question mark with an option that follows the same logic applied in the first pair

Flexible : Stretchable :: Grudge : ??

- (A) **Bad (Correct Answer)** (Chosen option)
(B) Satisfaction
(C) Gentle

(D) Friendliness**Question No.10**

Marks: 1.00

Bookmark

In the following question, few statements are given and these statements are followed by two conclusions numbered i and ii. You have to take the given statements to be true even if they seem to be at variance from commonly known facts. Read the conclusions and then decide which of the given conclusions logically follows from the given statements, disregarding commonly known facts.

Choose,

- (A) Only (i) conclusion follows
 (B) Only (ii) conclusion follows
 (C) Neither (i) nor (ii) follows
 (D) Both (i) and (ii) follow
 (E) Either (i) or (ii) follows

Statements: All apples are oranges. Some oranges are carrots. All carrots are beans.**Conclusions:**

- i) Some apples are carrots.
 ii) Some beans are apples.

- (A) A
 (B) C (Correct Answer) (Chosen option)
 (C) D
 (D) B

Question No.11

Marks: 1.00

Bookmark

Pointing to a boy, a man said, "He is my mother's father's son's daughter's brother." How is the man related to the boy?

- (A) Brother
 (B) Nephew
 (C) Uncle
 (D) Cousin (Correct Answer) (Chosen option)

Question No.12

Marks: 1.00

Bookmark

What should be written in the place of question mark in the given series?

M13, O18, Q23, ?, U33

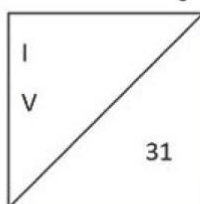
- (A) S28 (Correct Answer) (Chosen option)
 (B) R27
 (C) R28
 (D) S27

Question No.13

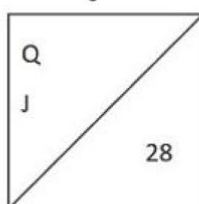
Marks: 1.00

Bookmark

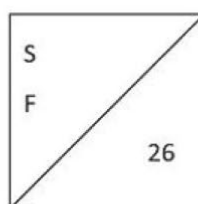
Find the odd image out in the given series.



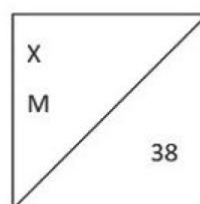
(1)



(2)



(3)



(4)

- (A) 1 (Correct Answer) (Chosen option)
 (B) 3
 (C) 4
 (D) 2

Case Study - 14 to 15

2.00

Directions :

This type of graph indicates the variation of a quantity with respect to two parameters represented on x-axis and y-axis respectively. So the candidate must carefully observe the peaks and depths of the graph to interpret the data.

x-axis: Months

y-axis: Number of cases for the month

**Question No.14**

Marks: 1.00

Bookmark

Which month of the following did Delhi have the least number of cases?

- (A) Apr-20
 (B) Jan-20 (Correct Answer) (Chosen option)
 (C) Feb-20
 (D) Mar-20

Question No.15

Marks: 1.00

Bookmark

How many cases were registered in Jaipur and Delhi in Jan-20?

- (A) 72 (Correct Answer) (Chosen option)
 (B) 100
 (C) 103
 (D) 115

Question No.16

Marks: 1.00

Bookmark

Pointing to a lady, Vijay said to his mother, "She is the wife of brother of your mother's daughter." How is the lady related to Vijay's mother?

- (A) Mother
 (B) Sister
 (C) Cousin
 (D) Sister-in-law (Correct Answer) (Chosen option)

Question No.17

Marks: 1.00

Bookmark

In a certain code language, if ALLOW is coded as DOORZ, then how is DELAY coded in that language?

- (A) WVOZB
 (B) GHODB (Correct Answer) (Chosen option)
 (C) HGOBD
 (D) CEPIH

Question No.18

Marks: 1.00

Bookmark

Select the combination of numbers so that letters arranged accordingly will form a meaningful word.

1. R 2. A 3. M 4. D 5. E

- (A) 4, 1, 3, 2, 5
 (B) 4, 1, 5, 2, 3 (Correct Answer) (Chosen option)
 (C) 2, 4, 3, 1, 5
 (D) 2, 3, 1, 5, 4

Question No.19

Marks: 1.00

Bookmark

Replace the question mark with an option that follows the same logic applied in the first pair

MO : OQ :: UC : ??

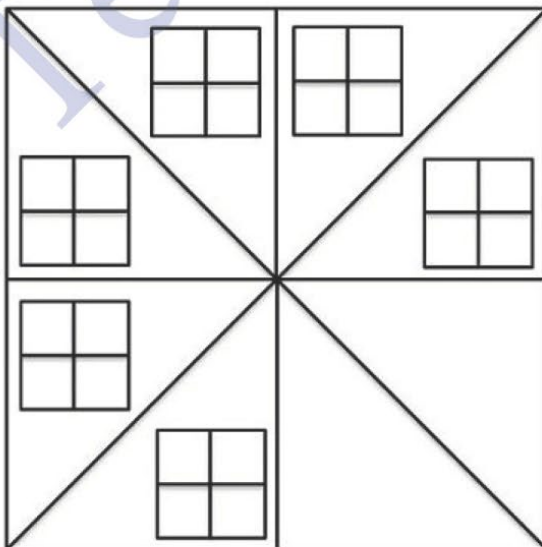
- (A) VF
 (B) WF
 (C) VE
 (D) WE (Correct Answer) (Chosen option)

Question No.20

Marks: 1.00

Bookmark

How many squares are there in the given figure?



- (A) 33
 (B) 35 (Correct Answer) (Chosen option)

(C) 37

(D) 39

Question No.21

Marks: 1.00

Bookmark

A child is standing in a lawn facing South-West direction. If the child turns 152.5 degrees in clockwise direction and 62.5 degrees in anti-clockwise direction, which direction will he face now?

(A) South-West

(B) North-East

(C) South-East

(D) **North-West (Correct Answer)** (Chosen option)

Question No.22

Marks: 1.00

Bookmark

"Each question given below consists of a statement, followed by two arguments numbered 1 and 2. You have to decide which of the arguments is a 'strong' argument and which is a 'weak' argument.

Give answer:

(A) If only argument 1 is strong

(B) If only argument 2 is strong

(C) If either 1 or 2 is strong

(D) If neither 1 nor 2 is strong and

(E) If both 1 and 2 are strong.

Statement: Should we avoid consuming junk food?

Argument:

1. Yes, eating junk food on a regular basis can lead to an increased risk of obesity and chronic diseases like cardiovascular disease, type 2 diabetes, etc.,

2. Yes, junk food is taking the place of other more nutritious foods in our diets.

(A) A (Chosen option)

(B) **E (Correct Answer)**

(C) C

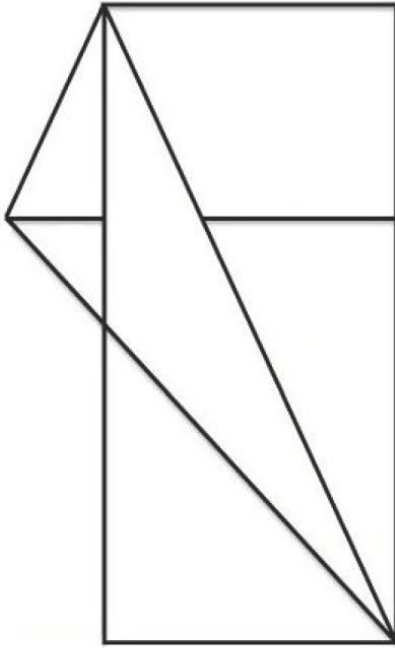
(D) B

Question No.23

Marks: 1.00

Bookmark

How many triangles are there in the given figure?



- (A) 10
 (B) 8
 (C) 9 (Correct Answer) (Chosen option)
 (D) 7

Question No.24

Marks: 1.00

Bookmark

In this question, relationship between different elements is shown in the statement.
 This statement is followed by two conclusions:

Statements: $S < I \leq L = V > E \geq R$

Conclusion:

- i) $L > R$
 ii) $V > S$

Choose the appropriate one from the following options

- (A) Only conclusion i follows
 (B) Only conclusion ii follows
 (C) Either i or ii follows
 (D) Neither i nor ii follows
 (E) Both i and ii follow.

- (A) A
 (B) B
 (C) C
 (D) E (Correct Answer) (Chosen option)

Question No.25

Marks: 1.00

Bookmark

What will be written in the place of question mark in the given series?

B2F6M13R18?24

- (A) Y
 (B) X (Correct Answer) (Chosen option)
 (C) V
 (D) W

General Awareness and Current Events - General Awareness and Current Events

Question No.1

Marks: 1.00

Bookmark

Which of the following is an official language of the United Nations Organization?

- (A) Hindi
(B) Arabic (Correct Answer)
(C) Japanese
(D) Greek

Question No.2

Marks: 1.00

Bookmark

"Sarva Shiksha Abhiyan" is a significant step towards providing elementary education to all children in the age group of _____.

- (A) 6-18 years
(B) 6-14 years (Correct Answer) (Chosen option)
(C) 9-18 Years
(D) 3-14 years

Question No.3

Marks: 1.00

Bookmark

Which of the following rivers originates from the eastern slopes of the Similipal massif?

- (A) Brahmani
(B) Mahanadi
(C) Subarnarekha
(D) Budhabalanga (Correct Answer) (Chosen option)

Question No.4

Marks: 1.00

Bookmark

What is the full form of 'CPI' in economics?

- (A) Consumer Price Instrument
(B) Consumer Price Income
(C) Consumer Price Inflation
(D) Consumer Price Index (Correct Answer) (Chosen option)

Question No.5

Marks: 1.00

Bookmark

Sania Mirza is a distinguished personality in which of the following disciplines?

- (A) Squash
(B) Weight Lifting
(C) Badminton
(D) Tennis (Correct Answer) (Chosen option)

Question No.6

Marks: 1.00

Bookmark

The Nine Degree Channel Separates:

- (A) Minicoy and Maldives Islands
(B) Andaman and Nicobar Islands
(C) Laccadive and Minicoy Islands (Correct Answer) (Chosen option)
(D) India and Sri Lanka

<p>Question No.7</p> <p>Who among the following has the authority to create a "Joint State Public Service Commission" for two or more states?</p> <p>(A) <input type="radio"/> Cabinet Committee on Appointments</p> <p>(B) <input type="radio"/> Prime Minister of India</p> <p>(C) <input type="radio"/> Chairman of Union Public Service Commission</p> <p>(D) <input type="radio"/> Parliament of India (Correct Answer) (Chosen option)</p>	<p>Marks: 1.00</p> <p>Bookmark <input type="checkbox"/></p>
<p>Question No.8</p> <p>Which of the following districts has the highest literacy rate in Odisha as per Census 2011?</p> <p>(A) <input type="radio"/> Nabarangpur</p> <p>(B) <input type="radio"/> Mayurbhanj</p> <p>(C) <input type="radio"/> Khordha (Correct Answer) (Chosen option)</p> <p>(D) <input type="radio"/> Kandhamal</p>	<p>Marks: 1.00</p> <p>Bookmark <input type="checkbox"/></p>
<p>Question No.9</p> <p>Which of the following terms refers to buying and selling government securities by the Reserve Bank of India(RBI)?</p> <p>(A) <input type="radio"/> Open Market Operations (Correct Answer) (Chosen option)</p> <p>(B) <input type="radio"/> Marginal Standing Facility</p> <p>(C) <input type="radio"/> Standing Deposit Operations</p> <p>(D) <input type="radio"/> Liquidity Adjustment Facility</p>	<p>Marks: 1.00</p> <p>Bookmark <input type="checkbox"/></p>
<p>Question No.10</p> <p>What is the full form of 'NEFT' in banking terminology?</p> <p>(A) <input type="radio"/> New Electronic Funds Transfer</p> <p>(B) <input type="radio"/> Net Electronic Funds Transfer</p> <p>(C) <input type="radio"/> Nominal Electronic Funds Transfer</p> <p>(D) <input type="radio"/> National Electronic Funds Transfer (Correct Answer) (Chosen option)</p>	<p>Marks: 1.00</p> <p>Bookmark <input type="checkbox"/></p>
<p>Question No.11</p> <p>In which among the following places, the river Brahmaputra takes a 'U' turn and enters India in Arunachal Pradesh through a gorge?</p> <p>(A) <input type="radio"/> Nanga Parbat</p> <p>(B) <input type="radio"/> Kamet</p> <p>(C) <input type="radio"/> Kangchenjunga</p> <p>(D) <input type="radio"/> Namcha Barwa (Correct Answer) (Chosen option)</p>	<p>Marks: 1.00</p> <p>Bookmark <input type="checkbox"/></p>
<p>Question No.12</p> <p>What is the minimum age for contesting Panchayat Elections in India?</p> <p>(A) <input type="radio"/> 25 years</p> <p>(B) <input type="radio"/> 21 years (Correct Answer) (Chosen option)</p> <p>(C) <input type="radio"/> 23 years</p> <p>(D) <input type="radio"/> 18 years</p>	<p>Marks: 1.00</p> <p>Bookmark <input type="checkbox"/></p>

<p>Question No.13</p> <p>Who became the first Indian to win a Diamond League title after winning the Men's Javelin event at the Zurich Diamond League Final 2022?</p> <p>(A) <input type="radio"/> Naveen Kumar (B) <input type="radio"/> Ravi Kumar Dahiya (C) <input type="radio"/> Mirabai Chanu (D) <input checked="" type="radio"/> Neeraj Chopra (Correct Answer) (Chosen option)</p>	<p>Marks: 1.00</p> <p>Bookmark <input type="checkbox"/></p>
<p>Question No.14</p> <p>Which was the only session of the Indian National Congress presided over by Mahatma Gandhi?</p> <p>(A) <input type="radio"/> Lahore session, 1929 (B) <input checked="" type="radio"/> Belgaum session, 1924 (Correct Answer) (Chosen option) (C) <input type="radio"/> Lucknow session, 1916 (D) <input type="radio"/> Calcutta session, 1901</p>	<p>Marks: 1.00</p> <p>Bookmark <input type="checkbox"/></p>
<p>Question No.15</p> <p>The Reserve Bank of India was set up on the basis of the recommendations of:</p> <p>(A) <input checked="" type="radio"/> Hilton Young Commission (Correct Answer) (B) <input type="radio"/> Babington Smith Commission (C) <input type="radio"/> Mansfield Commission (D) <input type="radio"/> Simon Commission</p>	<p>Marks: 1.00</p> <p>Bookmark <input type="checkbox"/></p>
<p>Question No.16</p> <p>Kanjirankulam Bird Sanctuary, recently added to Ramsar sites, is located in which state?</p> <p>(A) <input type="radio"/> Uttar Pradesh (B) <input type="radio"/> Gujarat (C) <input checked="" type="radio"/> Tamil Nadu (Correct Answer) (Chosen option) (D) <input type="radio"/> West Bengal</p>	<p>Marks: 1.00</p> <p>Bookmark <input type="checkbox"/></p>
<p>Question No.17</p> <p>Who is known as the 'Father of White Revolution' in India?</p> <p>(A) <input type="radio"/> P C Mahalanobis (B) <input checked="" type="radio"/> Verghese Kurien (Correct Answer) (Chosen option) (C) <input type="radio"/> Sam Pitroda (D) <input type="radio"/> M.S. Swaminathan</p>	<p>Marks: 1.00</p> <p>Bookmark <input type="checkbox"/></p>
<p>Question No.18</p> <p>Who among the following wrote the State Song of Odisha 'Bande Utkala Janani'?</p> <p>(A) <input checked="" type="radio"/> Laxmikanta Mohapatra (Correct Answer) (Chosen option) (B) <input type="radio"/> Radhanath Ray (C) <input type="radio"/> Nilakantha Das (D) <input type="radio"/> Gopabandhu Das</p>	<p>Marks: 1.00</p> <p>Bookmark <input type="checkbox"/></p>

<p>Question No.19</p> <p>Which of the following countries shares the longest border with India?</p> <p>(A) <input type="radio"/> China</p> <p>(B) <input type="radio"/> Nepal</p> <p>(C) <input checked="" type="radio"/> Bangladesh (Correct Answer) (Chosen option)</p> <p>(D) <input type="radio"/> Pakistan</p>	<p>Marks: 1.00</p> <p>Bookmark <input type="checkbox"/></p>
<p>Question No.20</p> <p>Gatka is a traditional martial art form associated with which of the following States?</p> <p>(A) <input checked="" type="radio"/> Punjab (Correct Answer)</p> <p>(B) <input type="radio"/> Manipur</p> <p>(C) <input type="radio"/> Karnataka</p> <p>(D) <input type="radio"/> Bihar</p>	<p>Marks: 1.00</p> <p>Bookmark <input type="checkbox"/></p>
<p>Question No.21</p> <p>The Indus Water Treaty between India and Pakistan, was brokered by which of the following Organizations?</p> <p>(A) <input type="radio"/> World Trade Organization</p> <p>(B) <input type="radio"/> United Nations</p> <p>(C) <input checked="" type="radio"/> World Bank (Correct Answer)</p> <p>(D) <input type="radio"/> Bank of China</p>	<p>Marks: 1.00</p> <p>Bookmark <input type="checkbox"/></p>
<p>Question No.22</p> <p>Amman is the capital city of _____.</p> <p>(A) <input type="radio"/> Libya</p> <p>(B) <input type="radio"/> Kuwait</p> <p>(C) <input checked="" type="radio"/> Jordan (Correct Answer)</p> <p>(D) <input type="radio"/> Madagascar</p>	<p>Marks: 1.00</p> <p>Bookmark <input type="checkbox"/></p>
<p>Question No.23</p> <p>Who patronised "Beer Bikram Theatre" of Khariar, the first permanent Odia Stage in Odisha?</p> <p>(A) <input checked="" type="radio"/> Raja Artatran Deo (Correct Answer)</p> <p>(B) <input type="radio"/> Raja Vir Vikram Deo (Chosen option)</p> <p>(C) <input type="radio"/> Raja Padma Deo</p> <p>(D) <input type="radio"/> Raja Brajraj Deo</p>	<p>Marks: 1.00</p> <p>Bookmark <input type="checkbox"/></p>
<p>Question No.24</p> <p>Which Delhi Sultan sent a large army under Malik Kafur to invade Kingdoms in South India?</p> <p>(A) <input type="radio"/> Sikandar Lodi</p> <p>(B) <input type="radio"/> Muhammad bin Tughluq</p> <p>(C) <input checked="" type="radio"/> Alauddin Khalji (Correct Answer) (Chosen option)</p> <p>(D) <input type="radio"/> Ghiyas ud din Balban</p>	<p>Marks: 1.00</p> <p>Bookmark <input type="checkbox"/></p>

Question No.25

Marks: 1.00

Bookmark

Who among the following was known as Utkalmani?

- (A) Jagabandhu Singh
(B) Bhagirathi Mahapatra
(C) Acharya Prafulla Chandra Roy
(D) **Pandit Gopabandhu Das (Correct Answer)** (Chosen option)

Computer and Internet Awareness - Computer and Internet Awareness

Question No.1

Marks: 1.00

Bookmark

The solid line that represents the outer edge of a document is called _____.

- (A) Drop cap
(B) Word art
(C) **Border (Correct Answer)** (Chosen option)
(D) Pivot

Question No.2

Marks: 1.00

Bookmark

_____ command in office button is used to send a copy of the document to e-mail or to Internet Fax.

- (A) **Send (Correct Answer)**
(B) Publish (Chosen option)
(C) Open
(D) Prepare

Question No.3

Marks: 1.00

Bookmark

In Mail Merge, which of the following options is used to prepare a batch of letters for a mass mailing?

- (A) Email
(B) Catalogue (Chosen option)
(C) **Form letters (Correct Answer)**
(D) Printer

Question No.4

Marks: 1.00

Bookmark

What does EIS stand for?

- (A) **Executive Information System (Correct Answer)**
(B) Enterprise Information System
(C) Enhanced Information System (Chosen option)
(D) Executive Interactive System

Question No.5

Marks: 1.00

Bookmark

What is the shortcut key to duplicate a slide in MS PowerPoint?

- (A) **Ctrl+D (Correct Answer)** (Chosen option)
(B) Ctrl+B
(C) Ctrl+C
(D) Ctrl+A

<p>Question No.6</p> <p>Dividing the physical hard disk memory into logical memory is called _____.</p> <p>(A) <input type="radio"/> Indexing</p> <p>(B) <input type="radio"/> Aggregation</p> <p>(C) <input type="radio"/> Database</p> <p>(D) <input checked="" type="radio"/> Partitions (Correct Answer) (Chosen option)</p>	<p>Marks: 1.00</p> <p>Bookmark <input type="checkbox"/></p>
<p>Question No.7</p> <p>The term ISP in computer network stands for _____.</p> <p>(A) <input type="radio"/> Internal service provider</p> <p>(B) <input type="radio"/> Internet software provider</p> <p>(C) <input type="radio"/> Internet service protocol</p> <p>(D) <input checked="" type="radio"/> Internet service provider (Correct Answer) (Chosen option)</p>	<p>Marks: 1.00</p> <p>Bookmark <input type="checkbox"/></p>
<p>Question No.8</p> <p>In MS Word, which group contains commands to view the ruler, gridlines, thumbnails, etc.,?</p> <p>(A) <input type="radio"/> Macros (Chosen option)</p> <p>(B) <input type="radio"/> Window</p> <p>(C) <input checked="" type="radio"/> Show/Hide (Correct Answer)</p> <p>(D) <input type="radio"/> Document View</p>	<p>Marks: 1.00</p> <p>Bookmark <input type="checkbox"/></p>
<p>Question No.9</p> <p>In MS Excel, a group of cells are called as _____.</p> <p>(A) <input type="radio"/> PivotTable</p> <p>(B) <input type="radio"/> Macro (Chosen option)</p> <p>(C) <input type="radio"/> Chart</p> <p>(D) <input checked="" type="radio"/> Range (Correct Answer)</p>	<p>Marks: 1.00</p> <p>Bookmark <input type="checkbox"/></p>
<p>Question No.10</p> <p>The second generation of computers is known as _____.</p> <p>(A) <input type="radio"/> Era of Vacuum Tubes</p> <p>(B) <input type="radio"/> Era of Microchips</p> <p>(C) <input type="radio"/> Era of Circuits</p> <p>(D) <input checked="" type="radio"/> Era of Transistors (Correct Answer) (Chosen option)</p>	<p>Marks: 1.00</p> <p>Bookmark <input type="checkbox"/></p>
<p>Question No.11</p> <p>Where can you find Slide Master option in MS Powerpoint?</p> <p>(A) <input checked="" type="radio"/> View-SlideMaster (Correct Answer) (Chosen option)</p> <p>(B) <input type="radio"/> Design-SlideMaster</p> <p>(C) <input type="radio"/> Animation-SlideMaster</p> <p>(D) <input type="radio"/> Home-SlideMaster</p>	<p>Marks: 1.00</p> <p>Bookmark <input type="checkbox"/></p>
<p>Question No.12</p>	<p>Marks: 1.00</p> <p>Bookmark <input type="checkbox"/></p>

_____ is a standard network protocol used for the transfer of computer files between a client and server on a computer network.

- (A) **FTP (Correct Answer)** (Chosen option)
(B) UTP
(C) SNPF
(D) SMTP

Question No.13

Marks: 1.00

Bookmark

To find the maximum of a range of marks named Maths, the formula will be _____.

- (A) MAXIMUM(Maths)
(B) MAX AS(Maths)
(C) MIN(Maths)
(D) **MAX(Maths) (Correct Answer)** (Chosen option)

Question No.14

Marks: 1.00

Bookmark

Which memory requires power to maintain the stored information?

- (A) Memory card
(B) ROM (Chosen option)
(C) **RAM (Correct Answer)**
(D) Hard disk

Question No.15

Marks: 1.00

Bookmark

The component that contains the pin which prints a dot in an impact printer is called _____.

- (A) sprockets
(B) **Print head (Correct Answer)** (Chosen option)
(C) Print ribbon
(D) Ink spray

Question No.16

Marks: 1.00

Bookmark

Which among the following operating systems is command line based?

- (A) Windows Xp
(B) Mac OS
(C) **MS DOS (Correct Answer)** (Chosen option)
(D) Windows 7

Question No.17

Marks: 1.00

Bookmark

_____ function is used to determine the number of cells in a range that contain a numeric entry.

- (A) SUM
(B) **COUNT (Correct Answer)** (Chosen option)
(C) TOTAL
(D) CALC

Question No.18

Marks: 1.00

Bookmark

_____ helps to expose identified and unidentified vulnerabilities that can be used by the Virus to spread in the system .

- (A) Regression testing
(B) **Penetration testing (Correct Answer)**
(C) Filter Testing
(D) Performance testing (Chosen option)

Question No.19

Marks: 1.00

Bookmark

What will Shift+F7 do in a Word application?

- (A) Open the webpage
(B) Open the hyperlink
(C) **Open the thesaurus (Correct Answer)** (Chosen option)
(D) Open the image

Question No.20

Marks: 1.00

Bookmark

Which wizard will help you to create charts in Microsoft Excel?

- (A) **Chart Wizard (Correct Answer)** (Chosen option)
(B) Data Wizard
(C) Pie Wizard
(D) Excel Wizard

Question No.21

Marks: 1.00

Bookmark

The file extension of a compressed file in the Windows operating system is:

- (A) **zip (Correct Answer)** (Chosen option)
(B) txt
(C) doc
(D) xls

Question No.22

Marks: 1.00

Bookmark

In Microsoft PowerPoint, you can display the slides as thumbnails to apply transitions and timings easily using the _____ view option.

- (A) Review
(B) Reding
(C) **Slide sorter (Correct Answer)** (Chosen option)
(D) Slide show

Question No.23

Marks: 1.00

Bookmark

Which orientation that allows you to print text-based documents with a vertical layout?

- (A) Cloudscape
(B) Background
(C) **Portrait (Correct Answer)** (Chosen option)
(D) Landscape

Question No.24

Marks: 1.00

Bookmark

To forward the email from one user as an attachment to another user in Outlook we use:

- (A) Send -> Attach file
- (B) **More -> Forward as attachment (Correct Answer)** (Chosen option)
- (C) Send/receive -> Forward as attachment
- (D) New email -> Send as attachment

Question No.25

Marks: 1.00

Bookmark

The pointing device that is embedded in the laptop is called _____.

- (A) Printer
- (B) **Touch pad (Correct Answer)** (Chosen option)
- (C) Ethernet
- (D) Wifi

