

OSSC CGL 2022-23
E-BOOK- PDF
7,000 MCQ
EXPLANATION
All Important Questions & Answers

[Click Here](#)

MATH - ଓଡ଼ିଶାର
ସମସ୍ତ ପରୀକ୍ଷା ପୂର୍ବ ବର୍ଷ ପ୍ରଶ୍ନ
E-BOOK- PDF
1,800- MCQ
Topic Wise
OPSC, OSSC CGL, OSSSC, Police/Constable, B.ED, CHT, CT, OSSSC (RI, JC, LSI, OFDC, Group C)]

[Click Here](#)

ଓଡ଼ିଆ ବ୍ୟାକରଣ PYQ
ସମସ୍ତ ପରୀକ୍ଷା ପୂର୍ବ ବର୍ଷ ପ୍ରଶ୍ନ
E-BOOK- PDF
2,222 MCQ
TEST- 75
OPSC ASO, B.ED, CHT, CT, OAVS, OSSTET, OTET, ODISHA POLICE, OSSSC RI, OSSSC LSI, OSSSC OFDC, OSSSC Group C

[Click Here](#)

ENGLISH - ଓଡ଼ିଶାର
ସମସ୍ତ ପରୀକ୍ଷା ପୂର୍ବ ବର୍ଷ ପ୍ରଶ୍ନ
E-BOOK- PDF
3,600- MCQ
Topic Wise
OPSC, OSSC CGL, OSSSC, Police/Constable, B.ED, CHT, OTET, OSSTET CT, OSSSC (RI, JC, LSI, OFDC, Group C)

[Click Here](#)

REASONING - ଓଡ଼ିଶାର
ସମସ୍ତ ପରୀକ୍ଷା ପୂର୍ବ ବର୍ଷ ପ୍ରଶ୍ନ
E-BOOK- PDF
2,200- MCQ
Topic Wise
OPSC, OSSC CGL, OSSSC, Police/Constable, B.ED, CHT, OTET, OSSTET CT, OSSSC (RI, JC, LSI, OFDC, Group C)

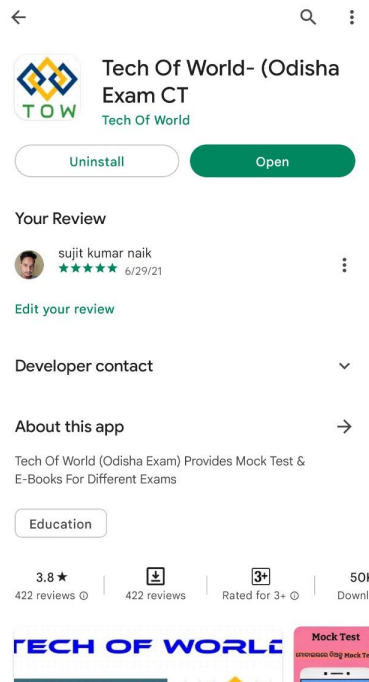
[Click Here](#)

COMPUTER - ଓଡ଼ିଶାର
ସମସ୍ତ ପରୀକ୍ଷା ପୂର୍ବ ବର୍ଷ ପ୍ରଶ୍ନ
E-BOOK- PDF
1,100- MCQ
Topic Wise
OPSC, OSSC CGL, OSSSC, Police/Constable, CHT, OSSSC (RI, JC, LSI, OFDC, Group C)

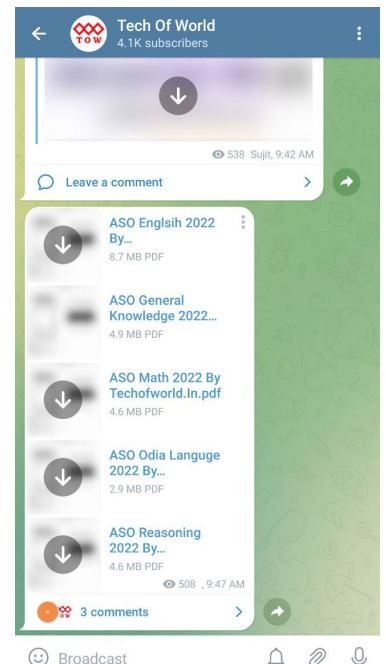
[Click Here](#)



[Click Here](#)



[Click Here](#)



[Click Here](#)

Roll No: Tech Of World App
Registration No: Tech Of World App
Name: Tech Of World App
Exam Date: 06-Nov-2022 Exam Time:
15:30-17:30 Post Name: BSSO 22

**Arithmetic - Arithmetic****Question No.1**

Marks: 1.00

Bookmark

Find the area of the square whose side is 174 cm. (In cm^2)

- (A) 32276
(B) 33276
(C) 31276
(D) 30276 (Correct Answer) (Chosen option)

Question No.2

Marks: 1.00

Bookmark

The following represents age distribution of students in an elementary class. Find the mode of the values: 47, 49, 50, 53, 51, 47, 49, 59, 52, 51, 49, 47, 49, 50, 51.

- (A) 45
(B) 49 (Correct Answer) (Chosen option)
(C) 47
(D) 43

Question No.3

Marks: 1.00

Bookmark

The calendar for the year 2027 will be the same for the year:

- (A) 2037
(B) 2040
(C) 2038 (Correct Answer) (Chosen option)
(D) 2039

Question No.4

Marks: 1.00

Bookmark

A fraction is greater than its reciprocal by $\frac{47}{552}$. What is the fraction?

- (A) $\frac{26}{25}$
(B) $\frac{25}{24}$
(C) $\frac{27}{26}$
(D) $\frac{24}{23}$ (Correct Answer)

Question No.5

Marks: 1.00

Bookmark

The ratio of two numbers is 7:8 and their sum is 525. Find the greater of the two numbers.

- (A) 280 (Correct Answer) (Chosen option)



- (B) 260
(C) 250
(D) 270

Question No.6

Marks: 1.00

Bookmark

2 men and 3 boys can do a piece of work in 630 days while 3 men and 2 boys can do the same work in 504 days. In how many days can 5 men and 5 boy do the work?

- (A) **280 (Correct Answer)**
(B) 260
(C) 270
(D) 250

Question No.7

Marks: 1.00

Bookmark

When an article is sold at Rs.4060 after a discount of 30%, find its marked price.(in Rs)

- (A) 5700
(B) 5500
(C) **5800 (Correct Answer)**
(D) 5600

Question No.8

Marks: 1.00

Bookmark

In how many ways 13 different rings can be worn in 3 fingers with at most one in each finger?

- (A) 1816
(B) 1516
(C) 1616
(D) **1716 (Correct Answer) (Chosen option)**

Question No.9

Marks: 1.00

Bookmark

Tap A can empty a cistern in 282 hours while tap B can fill it in 423 hours. In how many hours the filled cistern will be emptied if both A and B are opened together?

- (A) 866
(B) 836
(C) **846 (Correct Answer)**
(D) 856

Question No.10

Marks: 1.00

Bookmark

Find a^2 , given that $b^2 = 729$, $ab = 702$ and $(a+b)^2 = 2809$.

- (A) 646
(B) **676 (Correct Answer) (Chosen option)**
(C) 666
(D) 656

Question No.11

Marks: 1.00

Bookmark

What value should come in the place of question mark (?) in the following question?
 $153(4/3) + 62(3/2) - 164(3/4) = ? - 130(2/5)$

- (A) 224
(B) **226 (Correct Answer)** (Chosen option)
(C) 222
(D) 220

Question No.12

Marks: 1.00

Bookmark

Twelve years ago, A was half of B in age. If the ratio of their present ages is 4:5, what will be the total of their present ages? (In years)

- (A) 40
(B) **36 (Correct Answer)** (Chosen option)
(C) 34
(D) 38

Question No.13

Marks: 1.00

Bookmark

In how many different ways can the letters of the word 'DIAMOND' be arranged in such a way that the vowels always come together?

- (A) 380
(B) **360 (Correct Answer)** (Chosen option)
(C) 390
(D) 370

Question No.14

Marks: 1.00

Bookmark

Q completes a journey in 69 hours. She travels first half of the journey at the rate of 66 kmph and second half at the rate of 72 kmph. Find the total distance of the entire journey. (In km)

- (A) 4652
(B) **4752 (Correct Answer)**
(C) 4952
(D) 4852

Question No.15

Marks: 1.00

Bookmark

Find the simple interest on Rs.6900 at 10% per annum for 4 years. (In Rs.)

- (A) 2860
(B) 2660
(C) 2960
(D) **2760 (Correct Answer)** (Chosen option)

Question No.16

Marks: 1.00

Bookmark

27.4343 divided by 0.251 gives:

- (A) 105.3
(B) **109.3 (Correct Answer)** (Chosen option)

(C) 103.3

(D) 107.3

Question No.17

Marks: 1.00

Bookmark

There are 168 flowers in a bundle, 67 of which contain yellow flowers. What is the probability of selecting a yellow flower at random? (In % and Upto two decimals)

(A) 43.88

(B) **39.88 (Correct Answer)**

(C) 37.88

(D) 41.88

Question No.18

Marks: 1.00

Bookmark

Find the sum invested at compound interest at 20% per annum which will amount to Rs.4464 in 2 years. (In Rs.)

(A) 3200

(B) 3300

(C) **3100 (Correct Answer)**

(D) 3000

Question No.19

Marks: 1.00

Bookmark

Find the least number with which you would divide 432, to get a perfect square.

(A) 7

(B) 5

(C) **3 (Correct Answer)** (Chosen option)

(D) 9

Question No.20

Marks: 1.00

Bookmark

Lisa travels at a speed of 129 kmph and she reaches the destination in 31 hours. Find the distance she travelled. (In km)

(A) 3699

(B) **3999 (Correct Answer)**

(C) 3799

(D) 3899 (Chosen option)

Question No.21

Marks: 1.00

Bookmark

What will be the HCF of 459, 2241 and 833, 4067?

(A) 31, 53

(B) 29, 51

(C) 33, 55

(D) **27, 49 (Correct Answer)** (Chosen option)

Question No.22

Marks: 1.00

Bookmark

A Tours and Travel services has 130 buses available, of which 80 have A.C. What is the

probability that a randomly selected vehicle will be a non A.C bus? (Upto two decimals)

- (A) 0.48
(B) 0.58
(C) 0.28
(D) **0.38 (Correct Answer)** (Chosen option)

Question No.23

Marks: 1.00

Bookmark **Direction:**

This type of graph indicates the variation of a quantity with respect to two parameters represented on x-axis and y-axis respectively. So the candidate must carefully observe the peaks and depths of the graph to interpret the data.

x-axis: Months

y-axis: Number of cases for the month

How many cases were registered in Chennai and Bangalore in Mar-20?



- (A) **128 (Correct Answer)** (Chosen option)
(B) 90
(C) 100
(D) 110

Question No.24

Marks: 1.00

Bookmark

A number when divided by 44, 66 and 88, leaves the remainder 19 in each case. Find the smallest possible number.

- (A) 303
(B) 313
(C) **283 (Correct Answer)** (Chosen option)
(D) 293

Question No.25

Marks: 1.00

Bookmark

A can finish a work in 27 days and B can do the same work in 54 days. Working together, they will complete the same work in how many days?

- (A) 16
(B) 18 (Correct Answer) (Chosen option)
(C) 12
(D) 14

Analytical and Reasoning Ability - Analytical and Reasoning Ability**Question No.1**

Marks: 1.00

Bookmark

Which of the following sets of signs should be used to replace * in the following?

$$3 * 48 * 8 = 3 * 7 * 12$$

- (A) $\times + + \times$
(B) $\times - \div +$
(C) $+ \times \times +$
(D) $+ \div \times -$ (Correct Answer) (Chosen option)

Question No.2

Marks: 1.00

Bookmark

If + means \div , \times means +, \div means - & - means \times , then,
 $28 - 5 \times 60 + 15 \div 5 \times 11 = ?$

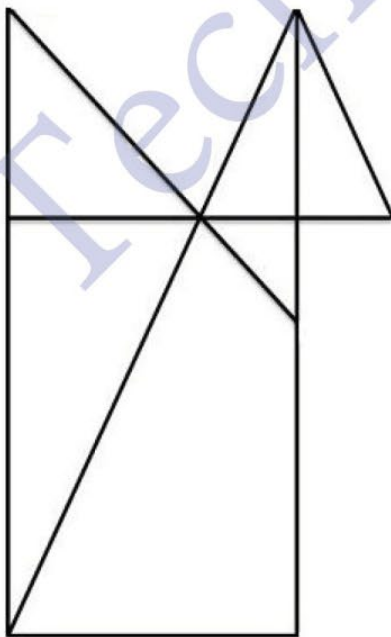
- (A) 145
(B) 150 (Correct Answer) (Chosen option)
(C) 160
(D) 155

Question No.3

Marks: 1.00

Bookmark

How many triangles are there in the given figure?



- (A) 6
(B) 10
(C) 7

(D) 9 (Correct Answer) (Chosen option)

Question No.4

Marks: 1.00

Bookmark

"Each question given below consists of a statement, followed by two arguments numbered 1 and 2. You have to decide which of the arguments is a 'strong' argument and which is a 'weak' argument.

Give answer:

- (A) If only argument1 is strong
- (B) If only argument 2 is strong
- (C) If either 1 or 2 is strong
- (D) If neither 1 nor 2 is strong and
- (E) If both 1 and 2 are strong.

Statement: Is adopting pets better than buying them?

Argument:

1. Yes, adoption might give you the peace of mind and also give the pet a second chance
2. No, they are abandoned animals.

- (A) A (Correct Answer) (Chosen option)
- (B) B
- (C) C
- (D) D

Question No.5

Marks: 1.00

Bookmark

"Each question given below consists of a statement, followed by two arguments numbered 1 and 2. You have to decide which of the arguments is a 'strong' argument and which is a 'weak' argument.

Give answer:

- (A) If only argument1 is strong
- (B) If only argument 2 is strong
- (C) If either 1 or 2 is strong
- (D) If neither 1 nor 2 is strong and
- (E) If both 1 and 2 are strong.

Statement: Should video games be considered a sport?

Argument:

1. No, it not only lacks physical exertion, but also the application of athletic ability.
2. No, most video games do not encourage children to be active but sedentary.

- (A) A
- (B) E (Correct Answer) (Chosen option)
- (C) C
- (D) B

Question No.6

Marks: 1.00

Bookmark

In this question, relationship between different elements is shown in the statement. This statement is followed by two conclusions:

Statements: $F > A = M < I \leq L < Y$

Conclusion:

- i) $A < Y$
 ii) $M < Y$

Choose the appropriate one from the following options

- (A) Only conclusion i follows
 (B) Only conclusion ii follows
 (C) Either i or ii follows
 (D) Neither i nor ii follows
 (E) Both i and ii follow.
- (A) A
 (B) E (Correct Answer) (Chosen option)
 (C) C
 (D) B

Question No.7

Marks: 1.00

Bookmark

Select the combination of numbers so that letters arranged accordingly will form a meaningful word.

1. O 2. W 3. N 4. M 5. A

- (A) 3, 4, 2, 1, 5
 (B) 2, 1, 4, 5, 3 (Correct Answer) (Chosen option)
 (C) 2, 1, 3, 5, 4
 (D) 3, 4, 5, 2, 1

Question No.8

Marks: 1.00

Bookmark

"She is the only daughter of my only daughter's brother", said a lady pointing to a girl. How is the girl related to the old lady?

- (A) Mother
 (B) Daughter (Chosen option)
 (C) Granddaughter (Correct Answer)
 (D) Grandmother

Case Study - 9 to 10

2.00

Directions :

The following table gives the marks obtained by five students in four different subjects in an examination.

150 is Maximum Marks in Each Subject.

Students	Subjectwise Marks obtained in each subjects			
	Maths	Chemistry	Physics	Computer Science
August	68	59	67	60
Andres	84	75	83	76
Arthur	89	80	88	81
Archer	110	101	109	102
Amari	100	91	99	92

Question No.9

Marks: 1.00

Bookmark

What is the average mark obtained by all the five students in Chemistry? (rounded off to one digit after decimal)

- (A) 81.2 (Correct Answer) (Chosen option)

- (B) 84.2
 (C) 83.2
 (D) 82.2

Question No.10

Marks: 1.00

Bookmark

What is the overall percentage of Amari?(rounded off to one digit after decimal)

- (A) 53.6
 (B) **63.6 (Correct Answer)** (Chosen option)
 (C) 46.3
 (D) 75.6

Question No.11

Marks: 1.00

Bookmark

A child is standing in a lawn facing North direction. If the child turns 152.5 degrees in clockwise direction and 62.5 degrees in anti-clockwise direction, which direction will he face now?

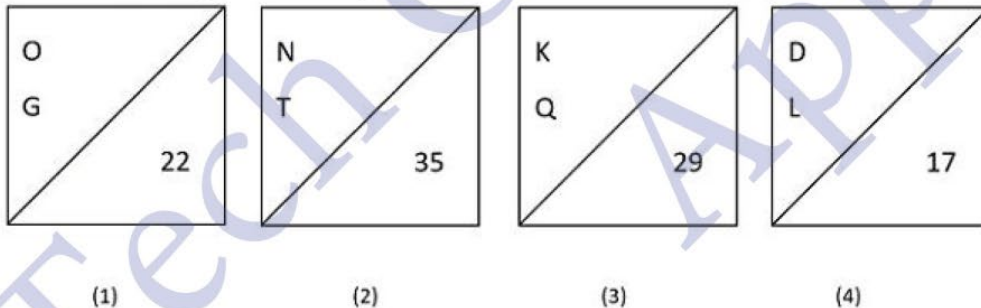
- (A) South
 (B) North
 (C) West
 (D) **East (Correct Answer)** (Chosen option)

Question No.12

Marks: 1.00

Bookmark

Find the odd image out in the given series.



- (A) 3
 (B) **1 (Correct Answer)** (Chosen option)
 (C) 2
 (D) 4

Question No.13

Marks: 1.00

Bookmark

In a certain code language, if AHEAD is coded as 18514, then how is DEATH coded in that language?

- (A) **451208 (Correct Answer)** (Chosen option)
 (B) 451218
 (C) 541218
 (D) 541208

Question No.14

Marks: 1.00

Bookmark

In a certain code language, if GRADE is coded as VKEIH, then how is RIVAL coded in that language?

- (A) RBOX
(B) MVZPE (Correct Answer)
(C) IREZO (Chosen option)
(D) VMZEP

Question No.15

Marks: 1.00

Bookmark

What will be written in the place of question mark in the given series?

A1C3M13I9?16

- (A) P (Correct Answer) (Chosen option)
(B) O
(C) N
(D) M

Question No.16

Marks: 1.00

Bookmark

In this question, relationship between different elements is shown in the statement. This statement is followed by two conclusions:

Statements: $T > H > U \leq R < S = D < A \leq Y$

Conclusion:

- i) $H > S$
ii) $Y \geq S$

Choose the appropriate one from the following options

- (A) Only conclusion i follows
(B) Only conclusion ii follows
(C) Either i or ii follows
(D) Neither i nor ii follows
(E) Both i and ii follow.
(A) B
(B) A
(C) D (Correct Answer) (Chosen option)
(D) C

Question No.17

Marks: 1.00

Bookmark

What should be written in the place of question mark in the given series?

B2, E3, H5, ?, N11

- (A) K7 (Correct Answer)
(B) K8 (Chosen option)
(C) J8
(D) J7

Question No.18

Marks: 1.00

Bookmark

Choose the alternative which is an odd word/number/letter pair out of the given alternatives.

- (A) Execute

- (B) **Cancel (Correct Answer)** (Chosen option)
 (C) Implement
 (D) Perform

Question No.19

Marks: 1.00

Bookmark

Choose the alternative which is an odd word/number/letter pair out of the given alternatives.

- (A) **Bright (Correct Answer)** (Chosen option)
 (B) Dusky
 (C) Dim
 (D) Dark

Question No.20

Marks: 1.00

Bookmark

Replace the question mark with an option that follows the same logic applied in the first pair

Available : Existing :: Evil : ??

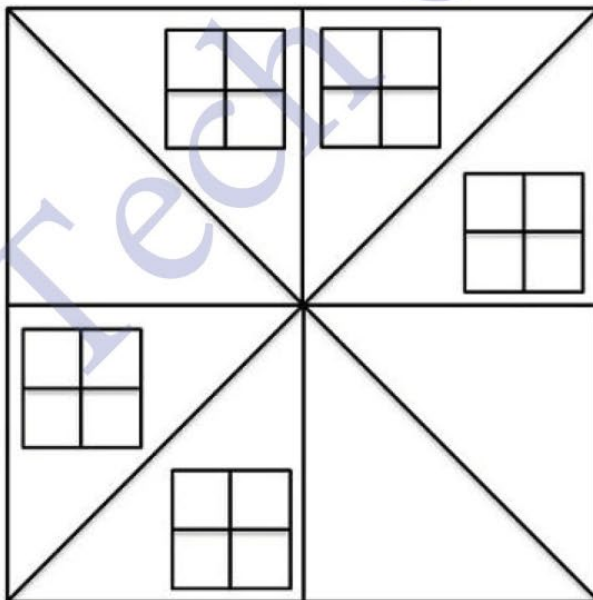
- (A) Noble
 (B) **Sinful (Correct Answer)** (Chosen option)
 (C) Worthy
 (D) Moral

Question No.21

Marks: 1.00

Bookmark

How many squares are there in the given figure?



- (A) 31 (Chosen option)
 (B) 33
 (C) 29
 (D) **30 (Correct Answer)**

Question No.22

Marks: 1.00

Bookmark

In a town of 833 people, 320 speak Hindi and 324 speak Spanish and 337 speak French, 80 speak Hindi and Spanish and 85 speak Spanish and French and 90 speak French and Hindi . 56 speak all three languages.

Find the number of people who speak only French.

- (A) 218 (Correct Answer)
(B) 210
(C) 215
(D) 206

Question No.23

Marks: 1.00

Bookmark

Replace the question mark with an option that follows the same logic applied in the first pair

KM : NP :: MC : ??

- (A) PG
(B) OG
(C) OF
(D) PF (Correct Answer) (Chosen option)

Question No.24

Marks: 1.00

Bookmark

Pointing to an old man, Thiru said, "He is the brother of father of my brother's sister." How is the old man related to Thiru?

- (A) Father
(B) Uncle (Correct Answer) (Chosen option)
(C) Grandfather
(D) Father-in-law

Question No.25

Marks: 1.00

Bookmark

In the following question, few statements are given and these statements are followed by two conclusions numbered i and ii. You have to take the given statements to be true even if they seem to be at variance from commonly known facts. Read the conclusions and then decide which of the given conclusions logically follows from the given statements, disregarding commonly known facts.

Choose,

- (A) Only (i) conclusion follows
(B) Only (ii) conclusion follows
(C) Neither (i) nor (ii) follows
(D) Both (i) and (ii) follow
(E) Either (i) or (ii) follows

Statements: All apples are oranges. All oranges are carrots. All carrots are beans.

Conclusions:

- i) All apples are carrots.
ii) All oranges are beans.

- (A) C
(B) A
(C) D (Correct Answer) (Chosen option)
(D) B

General Awareness and Current Events - General Awareness and Current Events

Question No.1

Marks: 1.00

Bookmark

In Odisha, Raksha Bandhan is also called _____.

- (A) **Gamha purnima (Correct Answer)** (Chosen option)
(B) Rasa Purnima
(C) Dola Purnima
(D) Kumar Purnima

Question No.2

Marks: 1.00

Bookmark

Which of the following countries will host the 2023 Men's FIH Hockey World Cup?

- (A) Spain
(B) **India (Correct Answer)** (Chosen option)
(C) England
(D) Germany

Question No.3

Marks: 1.00

Bookmark

What is the full form of 'CBSE' related to Indian education system?

- (A) Central Board of Social Education
(B) Central Board of Special Education
(C) Central Board of Scientific Education
(D) **Central Board of Secondary Education (Correct Answer)** (Chosen option)

Question No.4

Marks: 1.00

Bookmark

What is the full form of 'WPI' in economics?

- (A) Wholesale Price Income
(B) **Wholesale Price Index (Correct Answer)** (Chosen option)
(C) Wholesale Price Instrument
(D) Wholesale Price Inflation

Question No.5

Marks: 1.00

Bookmark

Who is known as the 'Frontier Gandhi'?

- (A) Zakir Husain
(B) J.C. Kumarappa
(C) Vinoba Bhave
(D) **Khan Abdul Ghaffar Khan (Correct Answer)** (Chosen option)

Question No.6

Marks: 1.00

Bookmark

Which of the following two rivers join at Rudraprayag?

- (A) Vishnu Ganga and Dhauliganga
(B) **Alaknanda and Mandakini (Correct Answer)**
(C) Alaknanda and Bhagirathi (Chosen option)
(D) Alaknanda and Pindar

Question No.7

Marks: 1.00

Bookmark

Which of the following is the right bank tributary of river Mahanadi?

- (A) Ib (Chosen option)
(B) Hasdeo
(C) Mand
(D) Jonk (Correct Answer)

Question No.8

Marks: 1.00

Bookmark

Sarala Dasa started writing his Mahabharata during the reign of which of the following Gajapati rulers?

- (A) Purusottama Deva
(B) Prataparudradeva
(C) Kapilendra Deva (Correct Answer) (Chosen option)
(D) Bhanudeva IV

Question No.9

Marks: 1.00

Bookmark

In India, who releases the Periodic Labour Force Survey?

- (A) Finance Commission
(B) National Statistical Office (Correct Answer)
(C) NITI Aayog (Chosen option)
(D) Reserve Bank of India

Question No.10

Marks: 1.00

Bookmark

Lord Dalhousie was the Governor-General of India from:

- (A) 1875 to 1881 (Chosen option)
(B) 1865 to 1869
(C) 1848 to 1856 (Correct Answer)
(D) 1837 to 1844

Question No.11

Marks: 1.00

Bookmark

Ravi Kumar Dahiya is a distinguished personality in which of the following Sports/games?

- (A) Tennis
(B) Hockey
(C) Squash
(D) Wrestling (Correct Answer) (Chosen option)

Question No.12

Marks: 1.00

Bookmark

Which of the following international organisations releases the World Investment Report annually?

- (A) New Development Bank
(B) Shanghai Cooperation Organisation

- (C) Asian Development Bank
(D) **United Nations Conference on Trade and Development (Correct Answer)**
(Chosen option)

Question No.13

Marks: 1.00

Bookmark

Which kind of inflation shows price rise in all goods and services except those from the food and energy sectors?

- (A) **Core Inflation (Correct Answer)** (Chosen option)
(B) Headline Inflation
(C) Skewflation
(D) Bottleneck Inflation

Question No.14

Marks: 1.00

Bookmark

Who was the founder of 'Servants of Indian Society'?

- (A) **Gopal Krishna Gokhale (Correct Answer)** (Chosen option)
(B) Lala Lajpat Rai
(C) Dadabhai Naoroji
(D) Bal Gangadhar Tilak

Question No.15

Marks: 1.00

Bookmark

Ankara is the capital of which of the following countries?

- (A) Uganda
(B) **Turkey (Correct Answer)**
(C) Ukraine
(D) Uruguay

Question No.16

Marks: 1.00

Bookmark

Who founded a branch of the Servants of the People Society at Cuttack?

- (A) Gouri Shankar Roy
(B) **Gopabandhu Das (Correct Answer)** (Chosen option)
(C) Madhusudan Das
(D) Bhagirathi Mahapatra

Question No.17

Marks: 1.00

Bookmark

Who described the Preamble of the Indian Constitution as the "political horoscope of the constitution"?

- (A) Alladi Krishnaswami Ayyar
(B) **K. M. Munshi (Correct Answer)**
(C) N. Madhava Rao
(D) Dr. B. R. Ambedkar (Chosen option)

Question No.18

Marks: 1.00

Bookmark

The concept of "Fundamental Rights" in the Indian Constitution is borrowed from:

- (A) Canadian Constitution
(B) Australian Constitution
(C) **USA Constitution (Correct Answer)** (Chosen option)
(D) South African Constitution

Question No.19

Marks: 1.00

Bookmark

Who has the authority to authorise non-bank entities to set up White Label ATMs?

- (A) **Reserve Bank of India (Correct Answer)**
(B) National Payment Corporation of India (Chosen option)
(C) Ministry of Corporate Affairs
(D) State Bank of India

Question No.20

Marks: 1.00

Bookmark

According to the Indus Water Treaty (1960), western rivers include Indus, Chenab and _____.

- (A) Ravi
(B) **Jhelum (Correct Answer)** (Chosen option)
(C) Sutlej
(D) Beas

Question No.21

Marks: 1.00

Bookmark

Which of the following types of soils has self ploughing character?

- (A) **Regur Soil (Correct Answer)**
(B) Alluvial soil (Chosen option)
(C) Peaty soil
(D) Arid Soil

Question No.22

Marks: 1.00

Bookmark

The book 'Brihat Samhita' was written by _____.

- (A) **Varahamihira (Correct Answer)**
(B) Madhava
(C) Bhaskara
(D) Pingala

Question No.23

Marks: 1.00

Bookmark

Which of the following districts has the highest female literacy rate in Odisha as per Census 2011?

- (A) Koraput
(B) Boudh
(C) **Khordha (Correct Answer)** (Chosen option)
(D) Malkangiri

Question No.24

Marks: 1.00

Bookmark

Who has become the first Indian woman wrestler to win Gold medal at Under-20 World Wrestling Championship?

- (A) Sonam Malik (Chosen option)
(B) Antim Panghal (Correct Answer)
(C) Sito
(D) Reetika

Question No.25

Marks: 1.00

Bookmark

Which of the following is a land-locked country that shares its border with India?

- (A) Myanmar
(B) China (Chosen option)
(C) Bhutan (Correct Answer)
(D) Pakistan

Computer and Internet Awareness - Computer and Internet Awareness**Question No.1**

Marks: 1.00

Bookmark

_____ is a measure of computer performance, useful in fields of scientific computations that require floating-point calculations.

- (A) FLOPS (Correct Answer)
(B) KPBS
(C) MIPS (Chosen option)
(D) MBPS

Question No.2

Marks: 1.00

Bookmark

The website that is available only within the office network is called _____.

- (A) Social media sites
(B) Internet sites (Chosen option)
(C) Intranet sites (Correct Answer)
(D) e-Commerce sites

Question No.3

Marks: 1.00

Bookmark

_____ is/ are used for built-in filters and functions to quickly organize, summarize and filter large amounts of records.

- (A) Data tables
(B) Pivot Tables (Correct Answer)
(C) GreyCell Tables
(D) Excel Tables (Chosen option)

Question No.4

Marks: 1.00

Bookmark

Which table style, has alternating rows of color added to make it easier to see rows of data in Excel?

- (A) Last column
(B) Banded rows (Correct Answer)

- (C) First column
(D) Filter button (Chosen option)

Question No.5

Marks: 1.00

Bookmark

In MS Word, the option used to save a document under a different name is

- (A) Save
(B) Save As (Correct Answer) (Chosen option)
(C) Copy
(D) New

Question No.6

Marks: 1.00

Bookmark

What is the shortcut key to close a powerpoint using shortcut?

- (A) Shift+Q
(B) Shift+D
(C) Ctrl+Q (Correct Answer)
(D) Ctrl+D (Chosen option)

Question No.7

Marks: 1.00

Bookmark

In Microsoft Excel, the Smart lookup tool, which is used to get more information on calculations like percentages, is available under the _____ ribbon.

- (A) Insert
(B) Review (Correct Answer)
(C) View (Chosen option)
(D) Data

Question No.8

Marks: 1.00

Bookmark

_____ feature of Excel will dynamically produce new outputs when one or more inputs in the referenced cells are changed.

- (A) Cell linking
(B) WordConnect
(C) Cell referencing (Correct Answer)
(D) Queries

Question No.9

Marks: 1.00

Bookmark

Which option under 'Table of Content' will enable you to choose whether to have blank space, dots, dashes etc.?

- (A) INTENDING
(B) SHOW LEVELS
(C) SPACING (Chosen option)
(D) TAB LEADER (Correct Answer)

Question No.10

Marks: 1.00

Bookmark

What does DSS stand for?

- (A) Data Systems Support (Chosen option)
- (B) **Decision Support System (Correct Answer)**
- (C) Data Storage Server
- (D) Domain Sap Service

Question No.11

Marks: 1.00

Bookmark

_____ virus is more marketing-focused and may pop up advertisements or redirect a user's web browser.

- (A) Macro
- (B) Logic bomb
- (C) **Adware (Correct Answer)**
- (D) Spyware (Chosen option)

Question No.12

Marks: 1.00

Bookmark

In Mail merge, the _____ block is a combination of several fields such as firstname, lastname, street, city and postal code.

- (A) Column
- (B) Greet
- (C) Row
- (D) **Address (Correct Answer)**

Question No.13

Marks: 1.00

Bookmark

The component on a printer that enables to write, spray or put ink on the paper is called _____.

- (A) Printer resolution
- (B) Printer Punch
- (C) Printer orientation
- (D) **Printer head (Correct Answer) (Chosen option)**

Question No.14

Marks: 1.00

Bookmark

Which is called the brain of computer?

- (A) I/O
- (B) Memory unit
- (C) **Central Processing Unit (CPU) (Correct Answer) (Chosen option)**
- (D) Output unit

Question No.15

Marks: 1.00

Bookmark

The output device that takes images generated by a computer and displays them onto a big screen is called _____.

- (A) **Projector (Correct Answer) (Chosen option)**
- (B) Printer
- (C) Plotter
- (D) Monitor

Question No.16

Marks: 1.00

Bookmark

To duplicate a slide in Powerpoint, choose _____ option.

- (A) New slide
(B) **Duplicate selected slide (Correct Answer)** (Chosen option)
(C) Copy current slide
(D) Clone selected slide

Question No.17

Marks: 1.00

Bookmark

To copy series of values in a row and paste it in column format, we use _____ in MS Excel.

- (A) Paste->Vertical
(B) **Paste Special->Transpose (Correct Answer)**
(C) Paste Special->Format
(D) Paste->value

Question No.18

Marks: 1.00

Bookmark

The RAM that we use today as solid state memory was invented by _____.

- (A) John Mauchly
(B) **Robert Dennard (Correct Answer)**
(C) Frederick Viehe
(D) Grace Hopper

Question No.19

Marks: 1.00

Bookmark

The video output port VGA stands for _____.

- (A) **Visual Graphics Array (Chosen option)**
(B) Video Graphics Audio
(C) Visual Graphics Architecture
(D) **Video Graphics Array (Correct Answer)**

Question No.20

Marks: 1.00

Bookmark

The list of reference or source which is consulted or cited in creating the document can be displayed using the feature called _____.

- (A) Hint
(B) **Bibliography (Correct Answer)**
(C) Autography
(D) Synonyms (Chosen option)

Question No.21

Marks: 1.00

Bookmark

The 'Hide Slide' option in PowerPoint will hide _____ during the slide show.

- (A) first slide
(B) last slide
(C) all the slides

(D) **selected slides (Correct Answer)** (Chosen option)

Question No.22

Marks: 1.00

Bookmark

Data in _____ memory cannot be modified.

- (A) SSD
(B) RAM (Chosen option)
(C) HDD
(D) **ROM (Correct Answer)**

Question No.23

Marks: 1.00

Bookmark

The drive encryption feature built into Windows computer is _____.

- (A) Anti virus
(B) Key logger
(C) Firewall
(D) **Bit locker (Correct Answer)**

Question No.24

Marks: 1.00

Bookmark

Which among the following is an Operating system?

- (A) **MS Dos (Correct Answer)**
(B) Oracle
(C) Html
(D) Java (Chosen option)

Question No.25

Marks: 1.00

Bookmark

What will happen when you press Windowkey+M ?

- (A) **It will minimize all open applications (Correct Answer)** (Chosen option)
(B) It will uninstall all open applications
(C) It will duplicate all open applications
(D) It will maximize all open applications

