

**OSSC CGL 2022-23**  
**E-BOOK- PDF**  
**7,000 MCQ**  
**EXPLANATION**  
**All Important Questions & Answers**

[Click Here](#)

**MATH - ଓଡ଼ିଶାର**  
**ସମସ୍ତ ପରୀକ୍ଷା ପୂର୍ବ ବର୍ଷ ପ୍ରଶ୍ନ**  
**E-BOOK- PDF**  
**1,800- MCQ**  
**Topic Wise**  
**OPSC, OSSC CGL, OSSSC, Police/Constable, B.ED, CHT, CT, OSSSC (RI, JC, LSI, OFDC, Group C)]**

[Click Here](#)

**ଓଡ଼ିଆ ବ୍ୟାକରଣ PYQ**  
**ସମସ୍ତ ପରୀକ୍ଷା ପୂର୍ବ ବର୍ଷ ପ୍ରଶ୍ନ**  
**E-BOOK- PDF**  
**2,222 MCQ**  
**TEST- 75**  
**OPSC ASO, B.ED, CHT, CT, OAVS, OSSTET, OTET, ODISHA POLICE, OSSSC RI, OSSSC LSI, OSSSC OFDC, OSSSC Group C**

[Click Here](#)

**ENGLISH - ଓଡ଼ିଶାର**  
**ସମସ୍ତ ପରୀକ୍ଷା ପୂର୍ବ ବର୍ଷ ପ୍ରଶ୍ନ**  
**E-BOOK- PDF**  
**3,600- MCQ**  
**Topic Wise**  
**OPSC, OSSC CGL, OSSSC, Police/Constable, B.ED, CHT, OTET, OSSTET CT, OSSSC (RI, JC, LSI, OFDC, Group C)**

[Click Here](#)

**REASONING - ଓଡ଼ିଶାର**  
**ସମସ୍ତ ପରୀକ୍ଷା ପୂର୍ବ ବର୍ଷ ପ୍ରଶ୍ନ**  
**E-BOOK- PDF**  
**2,200- MCQ**  
**Topic Wise**  
**OPSC, OSSC CGL, OSSSC, Police/Constable, B.ED, CHT, OTET, OSSTET CT, OSSSC (RI, JC, LSI, OFDC, Group C)**

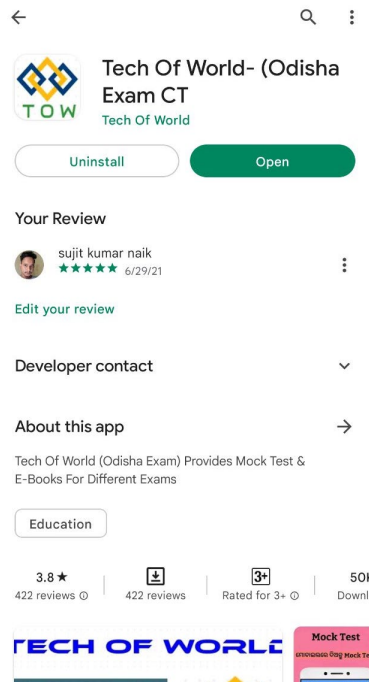
[Click Here](#)

**COMPUTER - ଓଡ଼ିଶାର**  
**ସମସ୍ତ ପରୀକ୍ଷା ପୂର୍ବ ବର୍ଷ ପ୍ରଶ୍ନ**  
**E-BOOK- PDF**  
**1,100- MCQ**  
**Topic Wise**  
**OPSC, OSSC CGL, OSSSC, Police/Constable, CHT, OSSSC (RI, JC, LSI, OFDC, Group C)**

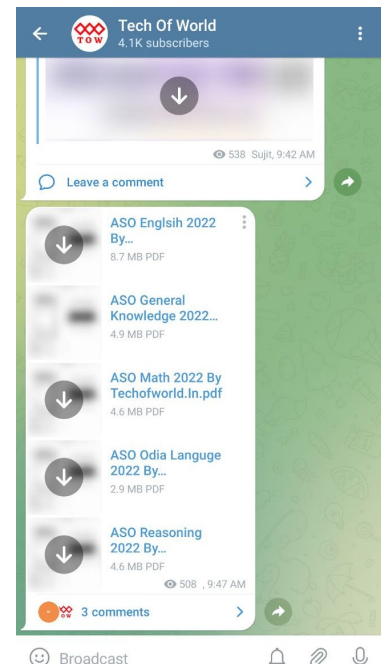
[Click Here](#)



[Click Here](#)



[Click Here](#)



[Click Here](#)

Roll No: Tech Of World App

Registration No: Tech Of World App

Name: Tech Of World App

Exam Date: 05-Nov-2022

Exam Time: 15:30-17:30

Post Name: BSSO 22

Registered Photo



Exam Day Photo



## Arithmetic - Arithmetic

## Question No.1

Marks: 1.00

Bookmark Find  $(a+b+c)^2$ , given that  $a^2 = 676$ ,  $b^2 = 400$ ,  $c^2 = 225$  and  $2ab+2ac+2bc = 2420$ .

- (A)  3921  
(B)  3721 (Correct Answer) (Chosen option)  
(C)  3621  
(D)  3821

## Question No.2

Marks: 1.00

Bookmark 

A pipe can fill a tank with water in 261 hours. Because of an outlet, it took 290 hours to fill the tank. How much time will it take for the outlet alone to drain all the water present in the filled water tank? (In hours)

- (A)  2710  
(B)  2610 (Correct Answer) (Chosen option)  
(C)  2810  
(D)  2510

## Question No.3

Marks: 1.00

Bookmark 

A fraction is greater than twice its reciprocal by  $97/120$ . What is the fraction?

- (A)   $18/11$   
(B)   $15/8$  (Correct Answer) (Chosen option)  
(C)   $17/10$   
(D)   $16/9$

## Question No.4

Marks: 1.00

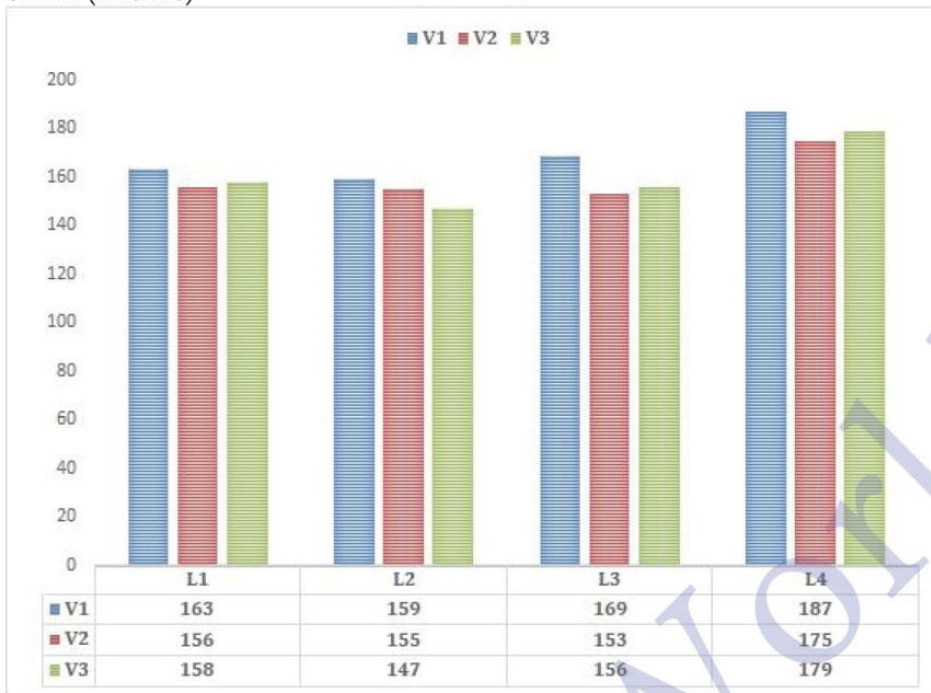
Bookmark **Directions:**

Study the following graph carefully and answer the question that follows.

Number of units of three different variant (V1, V2 and V3) produced (units in hundreds) at four different locations (L1, L2, L3 and L4) of a factory in 2020.

If the production cost of each product is Rs.1.2L, then what is the total production cost

of V2? (In lakhs)



- (A)  76780  
 (B)  **76680 (Correct Answer)** (Chosen option)  
 (C)  76980  
 (D)  76880

**Question No.5**

Marks: 1.00

Bookmark 

Find the mean for the following list of values:  
 137,139,147,141,139,137,139,147,141,139.

- (A)  144.6  
 (B)  **140.6 (Correct Answer)** (Chosen option)  
 (C)  146.6  
 (D)  142.6

**Question No.6**

Marks: 1.00

Bookmark 

The LCM of two numbers is 1404 and their ratio is 26:27. Find the two numbers.

- (A)  58, 60  
 (B)  **52, 54 (Correct Answer)** (Chosen option)  
 (C)  56, 58  
 (D)  54, 56

**Question No.7**

Marks: 1.00

Bookmark 

By selling a table for Rs.2640, a shopkeeper loses 40%. At what price should he sell it to gain 40%? (In Rs.)

- (A)  6360  
 (B)  6260

- (C)  **6160 (Correct Answer)** (Chosen option)  
(D)  6460

**Question No.8**

Marks: 1.00

Bookmark 

When two dice are thrown simultaneously, what is the probability of getting two numbers whose product is 35?

- (A)  0.5  
(B)  1  
(C)  **0 (Correct Answer)** (Chosen option)  
(D)  0.75

**Question No.9**

Marks: 1.00

Bookmark 

Find the perimeter of the rectangle, whose length and breadth are 131 cm and 141 cm.

(In cm)

- (A)  534  
(B)  514  
(C)  524  
(D)  **544 (Correct Answer)** (Chosen option)

**Question No.10**

Marks: 1.00

Bookmark 

What will come in place of question mark(?) in the following equation?

$$204.021 + 368.705 - 164.701 = 150.6 + ?$$

- (A)  253.425  
(B)  255.425  
(C)  259.425  
(D)  **257.425 (Correct Answer)** (Chosen option)

**Question No.11**

Marks: 1.00

Bookmark 

A shopkeeper has a box which contains 210 black pens, 217 green pens and 212 blue pens. If a pen is drawn at random, what is the probability that the pen drawn is either black or green?

- (A)  437/639  
(B)  417/639  
(C)  **427/639 (Correct Answer)** (Chosen option)  
(D)  447/639

**Question No.12**

Marks: 1.00

Bookmark 

Using all the letters of the word 'ALSO', how many distinct words can be formed?

- (A)  22  
(B)  30  
(C)  **24 (Correct Answer)** (Chosen option)  
(D)  28

## Question No.13

Marks: 1.00

Bookmark 

Two numbers are in the ratio of 88:89. If the HCF of the numbers is 42, find the smallest number.

- (A)  **3696 (Correct Answer)** (Chosen option)  
(B)  3596  
(C)  3796  
(D)  3896

## Question No.14

Marks: 1.00

Bookmark 

Ram lists down all possible arrangements of the word RANK in alphabetical order. How many words will precede the word RANK?

- (A)  22  
(B)  20  
(C)  **19 (Correct Answer)**  
(D)  21 (Chosen option)

## Question No.15

Marks: 1.00

Bookmark 

How many seconds will a train take to cover a distance of 4655 meters, if it runs at a speed of 342 km/hr?

- (A)  47  
(B)  45  
(C)  51  
(D)  **49 (Correct Answer)** (Chosen option)

## Question No.16

Marks: 1.00

Bookmark 

What value should come in the place of question mark (?) in the following question?

$$1.6 \times 2.5 + 2 \times 2.3 = ? - 15.4$$

- (A)  8  
(B)  20  
(C)  16  
(D)  **24 (Correct Answer)** (Chosen option)

## Question No.17

Marks: 1.00

Bookmark 

The difference between simple interest and compound interest at the same rate for Rs.6000 for 2 years is Rs.375. Find the rate of interest.

- (A)  **25% (Correct Answer)** (Chosen option)  
(B)  29%  
(C)  21%  
(D)  34%

## Question No.18

Marks: 1.00

Bookmark 

The ratio of number of girls and boys in a school of 780 students is 6:7. How many more girls should be admitted to make the ratio 1:1?

- (A)  64  
(B)  66  
(C)  62  
(D)  **60 (Correct Answer)** (Chosen option)

**Question No.19**

Marks: 1.00

Bookmark 

X can do a piece of work in 288 days. X worked at it for 64 days and then Y finished the remaining work in 224 days. In how many days, can X and Y together finish the work?

- (A)  164  
(B)  174  
(C)  **144 (Correct Answer)** (Chosen option)  
(D)  154

**Question No.20**

Marks: 1.00

Bookmark 

A sum of money at simple interest amounts to Rs.6670 in 3 years and to Rs.7360 in 4 years. Find the sum. (In Rs.)

- (A)  4800  
(B)  4700 (Chosen option)  
(C)  4500  
(D)  **4600 (Correct Answer)**

**Question No.21**

Marks: 1.00

Bookmark 

A and B can do a piece of work in 12 days, while C and D can do the same work in 60 days. In how many days will A, B, C and D do it together?

- (A)  12  
(B)  **10 (Correct Answer)** (Chosen option)  
(C)  16  
(D)  14

**Question No.22**

Marks: 1.00

Bookmark 

From the given options, at what time between 1 o'clock and 2 o'clock will the hands of a clock be at right angle?

- (A)  1 past 25(9/11) minutes  
(B)  1 past 23(9/11) minutes  
(C)  **1 past 21(9/11) minutes (Correct Answer)**  
(D)  1 past 27(9/11) minutes

**Question No.23**

Marks: 1.00

Bookmark 

If A drives from X to Y at 72 kmph and then from Y to X at 116 kmph, what is the average

speed for the whole journey? (In kmph - upto two decimals)

- (A)  87.85  
(B)  89.85  
(C)  90.85  
(D)  **88.85 (Correct Answer)** (Chosen option)

**Question No.24**

Marks: 1.00

Bookmark

Find the value of  $\sqrt{18.49} + \sqrt{0.1849} + \sqrt{0.001849}$

- (A)  6.773  
(B)  7.773  
(C)  5.773  
(D)  **4.773 (Correct Answer)** (Chosen option)

**Question No.25**

Marks: 1.00

Bookmark

Twenty-two years ago, A was two-third of B in age. If the ratio of their present ages is 4:5, what will be the total of their present ages? (In years)

- (A)  69  
(B)  **99 (Correct Answer)** (Chosen option)  
(C)  79  
(D)  89

**Analytical and Reasoning Ability - Analytical and Reasoning Ability**

**Question No.1**

Marks: 1.00

Bookmark

Pointing to a young girl, a lady said, "She is my husband's father-in-law's son's only son's sister." How is the lady related to the girl?

- (A)  Niece  
(B)  **Aunt (Correct Answer)** (Chosen option)  
(C)  Daughter  
(D)  sister

**Question No.2**

Marks: 1.00

Bookmark

Introducing a girl, Vignesh said to Kirthi, "She is my wife's father-in-law's daughter's daughter." How is Vignesh related to the girl?

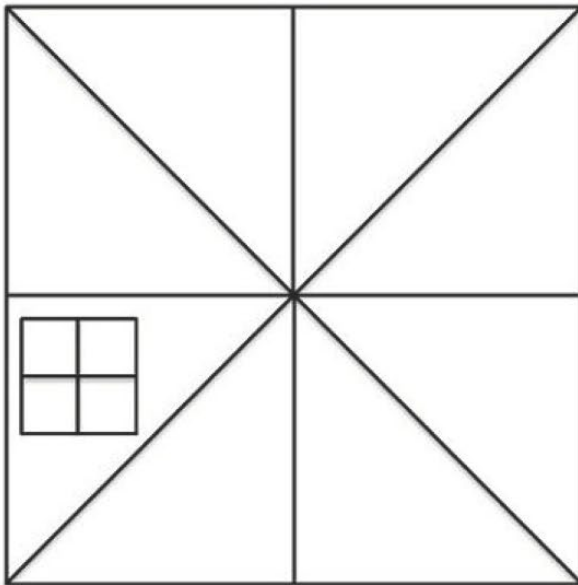
- (A)  Brother  
(B)  Cousin  
(C)  **Uncle (Correct Answer)** (Chosen option)  
(D)  Father

**Question No.3**

Marks: 1.00

Bookmark

How many squares are there in the given figure?



- (A)  12  
 (B)  10 (Correct Answer) (Chosen option)  
 (C)  9  
 (D)  11

## Question No.4

Marks: 1.00

Bookmark 

Replace the question mark with an option that follows the same logic applied in the first pair

Arid : Dry :: Crude : ??

- (A)  Dirty (Correct Answer)  
 (B)  Nice  
 (C)  Decent  
 (D)  Clean (Chosen option)

## Question No.5

Marks: 1.00

Bookmark 

Replace the question mark with an option that follows the same logic applied in the first pair

QCG : VHL :: ?? : UIS

- (A)  PEM  
 (B)  QDM  
 (C)  QEN  
 (D)  PDN (Correct Answer) (Chosen option)

## Question No.6

Marks: 1.00

Bookmark 

"Each question given below consists of a statement, followed by two arguments numbered 1 and 2. You have to decide which of the arguments is a 'strong' argument and which is a 'weak' argument.

Give answer:



- (A) If only argument 1 is strong
- (B) If only argument 2 is strong
- (C) If either 1 or 2 is strong
- (D) If neither 1 nor 2 is strong and
- (E) If both 1 and 2 are strong.

**Statement:** Should the religious slaughter of animals be encouraged in all countries?

**Argument:**

1. Yes, no country has overtly restricted the practice of animal slaughtering for religious purpose.
2. Yes, they don't have a voice to raise against the torture on them.

- (A)  A
- (B)  **D (Correct Answer)** (Chosen option)
- (C)  C
- (D)  B

#### Question No.7

Marks: 1.00

Bookmark

In this question, relationship between different elements is shown in the statement. This statement is followed by two conclusions:

**Statements:**  $T < H < I > R > F = Y$

**Conclusion:**

- i)  $T > R$
- ii)  $I > F$

Choose the appropriate one from the following options

- (A) Only conclusion i follows
  - (B) Only conclusion ii follows
  - (C) Either i or ii follows
  - (D) Neither i nor ii follows
  - (E) Both i and ii follow.
- (A)  A
  - (B)  **B (Correct Answer)** (Chosen option)
  - (C)  C
  - (D)  D

#### Question No.8

Marks: 1.00

Bookmark

In the following question, few statements are given and these statements are followed by two conclusions numbered i and ii. You have to take the given statements to be true even if they seem to be at variance from commonly known facts. Read the conclusions and then decide which of the given conclusions logically follows from the given statements, disregarding commonly known facts.

**Choose,**

- (A) Only (i) conclusion follows
- (B) Only (ii) conclusion follows
- (C) Neither (i) nor (ii) follows
- (D) Both (i) and (ii) follow
- (E) Either (i) or (ii) follows

**Statements:** Some cats are rats. All rats are rabbits. Some rabbits are bats.

**Conclusions:**

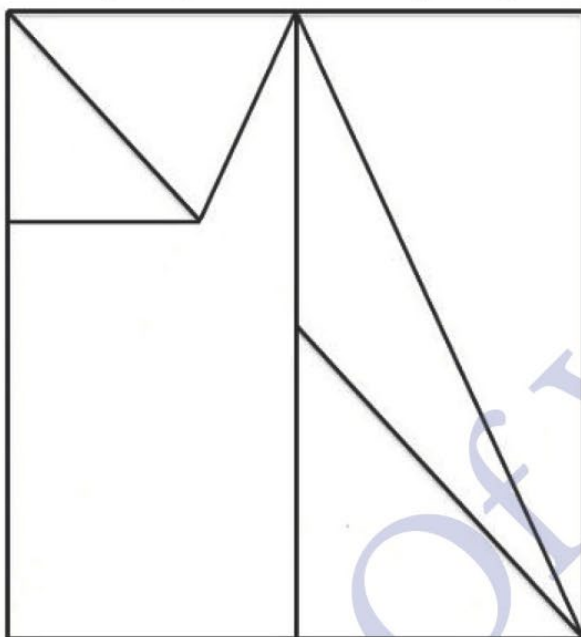
- i) Some cats are rabbits.  
ii) Some bats are rats.
- (A)  E  
(B)  A (Correct Answer) (Chosen option)  
(C)  C  
(D)  B

**Question No.9**

Marks: 1.00

Bookmark 

How many triangles are there in the given figure?



- (A)  6 (Correct Answer) (Chosen option)  
(B)  7  
(C)  5  
(D)  4

**Question No.10**

Marks: 1.00

Bookmark 

Which of the following sets of signs should be used to replace \* in the following?

$$23 * 12 * 2 = 9 * 4 * 11$$

- (A)   $\times - \div +$   
(B)   $+ \div \times -$   
(C)   $+ \times \times +$  (Correct Answer) (Chosen option)  
(D)   $\times + + \times$

**Question No.11**

Marks: 1.00

Bookmark 

In a group of 160 members, 75 like Reading, 81 like Listening and 64 like Writing. 102 members like only one of these and 47 like exactly two of these. 3 members do not like any of these.

Find the number of members who like at least two of these.

- (A)  45  
(B)  47  
(C)  58  
(D)  55 (Correct Answer)

**Question No.12**

Marks: 1.00

Bookmark 

Select the combination of numbers so that letters arranged accordingly will form a meaningful word.

1.N 2. A 3. P 4. I 5. O

- (A)  2, 1, 4, 5, 3  
(B)  3, 4, 2, 1, 5 (Correct Answer) (Chosen option)  
(C)  3, 4, 5, 2, 1  
(D)  2, 1, 3, 5, 4

**Question No.13**

Marks: 1.00

Bookmark 

"Each question given below consists of a statement, followed by two arguments numbered 1 and 2. You have to decide which of the arguments is a 'strong' argument and which is a 'weak' argument.

Give answer:

- (A) If only argument 1 is strong  
(B) If only argument 2 is strong  
(C) If either 1 or 2 is strong  
(D) If neither 1 nor 2 is strong and  
(E) If both 1 and 2 are strong.

**Statement:** Should the Olympics play on in a pandemic?

**Argument:**

1. Yes, the Olympic Games are considered to be the world's most prestigious sports competition  
2. Yes, all participants and spectators will remain safe and healthy during the ongoing Covid-19 pandemic

- (A)  D (Correct Answer) (Chosen option)  
(B)  C  
(C)  A  
(D)  B

**Question No.14**

Marks: 1.00

Bookmark 

Choose the alternative which is an odd word/number/letter pair out of the given alternatives.

- (A)  Replay  
(B)  Redo  
(C)  Repeat

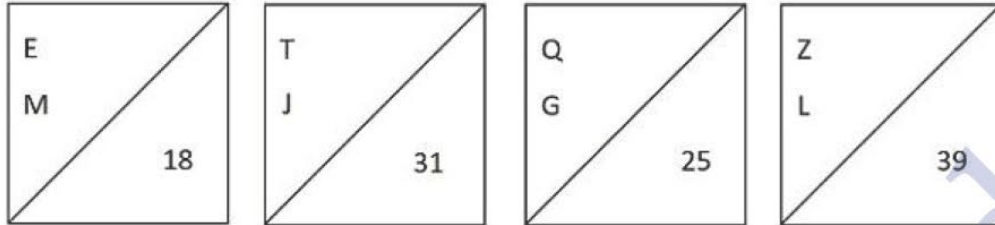
(D)  Stop (Correct Answer) (Chosen option)

**Question No.15**

Marks: 1.00

Bookmark

Find the odd image out in the given series.



(1)

(2)

(3)

(4)

- (A)  2
- (B)  4
- (C)  3
- (D)  1 (Correct Answer) (Chosen option)

**Question No.16**

Marks: 1.00

Bookmark

In a certain code language, if GREAT is coded as TIVZG, then how is RIVEN coded in that language?

- (A)  IREVM (Correct Answer) (Chosen option)
- (B)  UKBOX
- (C)  MVZSI
- (D)  VMZIS

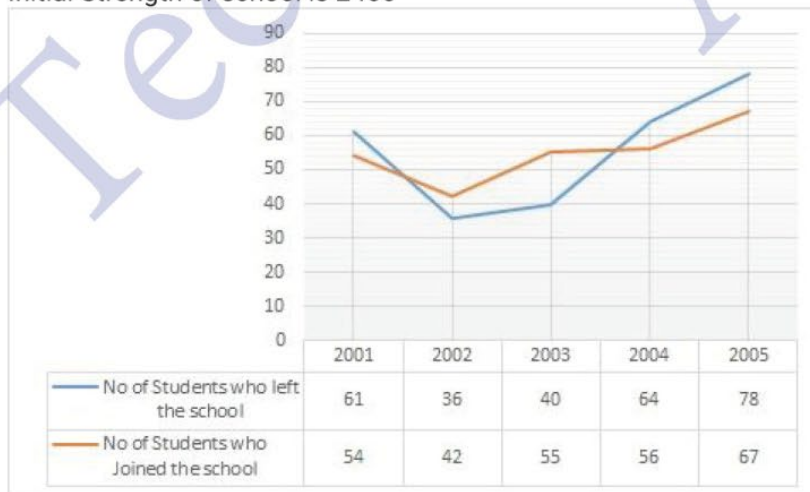
**Case Study - 17 to 18**

2.00

**Directions:**

Study the following line chart which gives the number of students who joined and left the school in the beginning of the year for five years, from 2001 to 2005.

Initial Strength of school is 2400



**Question No.17**

Marks: 1.00

Bookmark 

Find the total strength of the students during the year 2001.

- (A)  2399  
(B)  2406  
(C)  2400  
(D)  **2393 (Correct Answer)** (Chosen option)

**Question No.18**

Marks: 1.00

Bookmark 

In how many years the number of students who left the school is more than the number of students who joined the school?

- (A)  4  
(B)  2  
(C)  **3 (Correct Answer)** (Chosen option)  
(D)  5

**Question No.19**

Marks: 1.00

Bookmark 

A lady is facing North direction. If she turns 58 degrees in anti-clockwise direction and 122 degrees in the same direction, which direction will she face now?

- (A)  **South (Correct Answer)** (Chosen option)  
(B)  East  
(C)  North  
(D)  West

**Question No.20**

Marks: 1.00

Bookmark 

What will be written in the place of question mark in the given series?

G7L12C3Y25?10

- (A)  **J (Correct Answer)** (Chosen option)  
(B)  O  
(C)  N  
(D)  P

**Question No.21**

Marks: 1.00

Bookmark 

In a certain code language, if AGAIN is coded as DJDLQ, then how is DEALT coded in that language?

- (A)  HGDWO  
(B)  **GHDOW (Correct Answer)** (Chosen option)  
(C)  WVZOG  
(D)  XPEIH

**Question No.22**

Marks: 1.00

Bookmark 

Choose the alternative which is an odd word/number/letter pair out of the given alternatives.



- (A)  Fly  
(B)  Climb  
(C)  **Fall (Correct Answer)**  
(D)  Rise (Chosen option)

**Question No.23**

Marks: 1.00

Bookmark 

If + means  $\div$ ,  $\times$  means +,  $\div$  means - & - means  $\times$ , then,  
 $23 - 5 \times 62 + 2 \div 23 \times 14 = ?$

- (A)  157  
(B)  152  
(C)  **137 (Correct Answer)** (Chosen option)  
(D)  143

**Question No.24**

Marks: 1.00

Bookmark 

In this question, relationship between different elements is shown in the statement.  
This statement is followed by two conclusions:

**Statements:**  $T > H > O \geq U = S < A < N \leq D$

**Conclusion:**

- i)  $O > A$   
ii)  $U < N$

Choose the appropriate one from the following options

- (A) Only conclusion i follows  
(B) Only conclusion ii follows  
(C) Either i or ii follows  
(D) Neither i nor ii follows  
(E) Both i and ii follow.  
(A)  C  
(B)  D  
(C)  A  
(D)  **B (Correct Answer)** (Chosen option)

**Question No.25**

Marks: 1.00

Bookmark 

What should be written in the place of question mark in the given series?

G3, I6, ?, M12, O15

- (A)  L10  
(B)  J10  
(C)  **K9 (Correct Answer)** (Chosen option)  
(D)  L9

**General Awareness and Current Events - General Awareness and Current Events****Question No.1**

Marks: 1.00

Bookmark 

What is the full form of 'GIF', a digital file format?

- (A)  Graphics Interleave Format

- (B)  Graphics Input Format  
(C)  **Graphics Interchange Format (Correct Answer)** (Chosen option)  
(D)  Graphics Intergrated Format

**Question No.2**

Marks: 1.00

Bookmark 

What is the full form of "FAO", a United Nations Specialized Agency?

- (A)  Federal Arms Organization  
(B)  **Food and Agriculture Organization (Correct Answer)** (Chosen option)  
(C)  Federal Agricultural Organization  
(D)  Finland Army Organization

**Question No.3**

Marks: 1.00

Bookmark 

What is the eligible entry age to join the scheme Pradhan Mantri Shram Yogi Maan-Dhan (PM-SYM) Pension Yojana?

- (A)  18 to 70 years  
(B)  18 to 60 years (Chosen option)  
(C)  **18 to 40 years (Correct Answer)**  
(D)  18 to 50 years

**Question No.4**

Marks: 1.00

Bookmark 

To neutralise the negative impact of inflation, the Indian government provides dearness allowance to its employees \_\_\_\_\_ a year.

- (A)  **Twice (Correct Answer)** (Chosen option)  
(B)  Quadruple  
(C)  Thrice  
(D)  Once

**Question No.5**

Marks: 1.00

Bookmark 

Which Article of the Indian Constitution guarantees the equality of opportunity in matters of public employment?

- (A)  **Article 16 (Correct Answer)**  
(B)  Article 13  
(C)  Article 20  
(D)  Article 14

**Question No.6**

Marks: 1.00

Bookmark 

M.S. Swaminathan is a distinguished personality in which of the following fields?

- (A)  **Agriculture (Correct Answer)**  
(B)  Mountaineering  
(C)  Painting (Chosen option)  
(D)  Medicine

**Question No.7**

Marks: 1.00

Bookmark 

India shares its international borders with which of the following countries?

- (A)  Thailand  
(B)  Vietnam  
(C)  Cambodia  
(D)  **Bhutan (Correct Answer)** (Chosen option)

**Question No.8**

Marks: 1.00

Bookmark 

Which of the following temples is known as 'The Gem of Odia Temple architecture'?

- (A)  **Mukteswara Temple, Bhubaneswar (Correct Answer)** (Chosen option)  
(B)  Ananta Vasudeva Temple, Bhubaneswar  
(C)  Brahmeshwar Temple, Bhubaneswar  
(D)  Rajarani Temple, Bhubaneswar

**Question No.9**

Marks: 1.00

Bookmark 

\_\_\_\_\_ is the oldest oil field in India.

- (A)  Mangala  
(B)  Barauni  
(C)  Mumbai High  
(D)  **Digboi (Correct Answer)** (Chosen option)

**Question No.10**

Marks: 1.00

Bookmark 

Hindustan Socialist Republican Association(HSRA) was a revolutionary organisation established in 1928 at which of the following Places?

- (A)  Bombay  
(B)  Madras  
(C)  Lucknow  
(D)  **Delhi (Correct Answer)**

**Question No.11**

Marks: 1.00

Bookmark 

Who among the following defeated Mughal Emperor Humayun in 1540 AD?

- (A)  Nadir Shah  
(B)  Ahmad Shah Abdali  
(C)  Alauddin Khalji  
(D)  **Sher Shah Suri (Correct Answer)**

**Question No.12**

Marks: 1.00

Bookmark 

Wangala festival is celebrated in which of the following states?

- (A)  Chhattisgarh  
(B)  Odisha



- (C)  Meghalaya (Correct Answer) (Chosen option)  
(D)  Bihar

**Question No.13**

Marks: 1.00

Bookmark 

Which of the following Banks was formed by BRICS?

- (A)  Asian Development Bank  
(B)  Asian Infrastructure Investment Bank  
(C)  World Bank (Chosen option)  
(D)  New Development Bank (Correct Answer)

**Question No.14**

Marks: 1.00

Bookmark 

Which of the following is the left bank tributary of river mahanadi?

- (A)  Ong  
(B)  Jonk  
(C)  Tel  
(D)  Mand (Correct Answer) (Chosen option)

**Question No.15**

Marks: 1.00

Bookmark 

In August 2022, India's first truly indigenously developed Hydrogen Fuel Cell Bus developed by KPIT-CSIR has been unveiled in which city?

- (A)  Srinagar  
(B)  Guwahati (Chosen option)  
(C)  Chennai  
(D)  Pune (Correct Answer)

**Question No.16**

Marks: 1.00

Bookmark 

Where is the headquarters of Defence Research and Development Organisation(DRDO) of India located?

- (A)  New Delhi (Correct Answer)  
(B)  Bengaluru  
(C)  Pune  
(D)  Chennai (Chosen option)

**Question No.17**

Marks: 1.00

Bookmark 

In September 2022, who among the following was elected as the Britain's Prime Minister?

- (A)  Rishi Sunak (Chosen option)  
(B)  David Davis  
(C)  Penny Mordaunt  
(D)  Liz Truss (Correct Answer)

## Question No.18

Marks: 1.00

Bookmark 

"Indus Water Treaty 1960" was signed between the Government of India and \_\_\_\_\_.

- (A)  China (Chosen option)  
(B)  Bangladesh  
(C)  **Pakistan (Correct Answer)**  
(D)  Afghanistan

## Question No.19

Marks: 1.00

Bookmark 

What is the rank of Odisha in Steel Production in India?

- (A)  **One (Correct Answer)**  
(B)  Two (Chosen option)  
(C)  Three  
(D)  Four

## Question No.20

Marks: 1.00

Bookmark 

Which of the following rivers originates in Brahmagiri Hills of Karnataka?

- (A)  Vaigai  
(B)  **Kaveri (Correct Answer)**  
(C)  Krishna  
(D)  Godavari

## Question No.21

Marks: 1.00

Bookmark 

When was the Utkal Pradesh Congress Committee formed?

- (A)  1933 (Chosen option)  
(B)  1917  
(C)  1941  
(D)  **1921 (Correct Answer)**

## Question No.22

Marks: 1.00

Bookmark 

Who among following personalities is popularly known as the 'Father of Indian Cinema'?

- (A)  Bimal Roy  
(B)  Satyajit Ray  
(C)  **Dadasaheb Phalke (Correct Answer)**  
(D)  Guru Dutt

## Question No.23

Marks: 1.00

Bookmark 

Manama is the capital of which of the following countries?

- (A)  **Bahrain (Correct Answer)** (Chosen option)  
(B)  Belgium

- (C)  Bangladesh  
(D)  Austria

**Question No.24**

Marks: 1.00

Bookmark 

Who among the following founded the weekly newspaper 'The Samaja' in 1919?

- (A)  Bhagirathi Mahapatra  
(B)  Jagabandhu Singh  
(C)  **Pandit Gopabandhu Das (Correct Answer)** (Chosen option)  
(D)  Acharya Prafulla Chandra Roy

**Question No.25**

Marks: 1.00

Bookmark 

Who is the Ex-officio Chairperson of the 'State Disaster Management Authority'?

- (A)  **Chief Minister of the State (Correct Answer)**  
(B)  Governor of the State  
(C)  Home Minister of the State  
(D)  Chief Secretary of the State (Chosen option)

**Computer and Internet Awareness - Computer and Internet Awareness****Question No.1**

Marks: 1.00

Bookmark 

\_\_\_\_\_ layout arranges the controls vertically with labels to the left of the control used in forms.

- (A)  Form  
(B)  **Stacked (Correct Answer)** (Chosen option)  
(C)  Tabular  
(D)  Control

**Question No.2**

Marks: 1.00

Bookmark 

\_\_\_\_\_ series type in the Autofill feature, calculates the series values by adding the value you enter in the Step Value box to each cell in the series.

- (A)  Growth  
(B)  Progressive  
(C)  Aggregate  
(D)  **Linear (Correct Answer)**

**Question No.3**

Marks: 1.00

Bookmark 

When the computer is turned on, the operating system is loaded into computer memory through a process called as \_\_\_\_\_.

- (A)  **Booting (Correct Answer)** (Chosen option)  
(B)  Deleting  
(C)  Writing  
(D)  Starting

**Question No.4**

Marks: 1.00

Bookmark 

MKV is the extension of which file format?

- (A)  Matroska Merger Centre
- (B)  **Matroska Multimedia Container (Correct Answer)**
- (C)  Multimedia Knowledge Centre (Chosen option)
- (D)  Multimedia Kubernet Container

**Question No.5**

Marks: 1.00

Bookmark 

What will F11 do in MS Excel?

- (A)  **Creates Chart (Correct Answer)**
- (B)  Creates Pivot Table (Chosen option)
- (C)  Creates Sort
- (D)  Creates Filter

**Question No.6**

Marks: 1.00

Bookmark 

How many types of document views are there in MS Word?

- (A)  6 Layout
- (B)  3 Layout
- (C)  **5 Layout (Correct Answer)**
- (D)  4 Layout

**Question No.7**

Marks: 1.00

Bookmark 

\_\_\_\_\_ displays thumbnail views of your slides.

- (A)  Slide show view
- (B)  **Slide sorter view (Correct Answer)** (Chosen option)
- (C)  Normal view
- (D)  Notes page view

**Question No.8**

Marks: 1.00

Bookmark 

In 1971, Alan Shugart led a team of IBM engineers who invented \_\_\_\_\_.

- (A)  Tape drive
- (B)  **Floppy disk (Correct Answer)**
- (C)  VRAM
- (D)  Hard disk drive

**Question No.9**

Marks: 1.00

Bookmark 

The objects of the visited websites are stored in the local disk in \_\_\_\_\_ folder.

- (A)  Personal
- (B)  Temp
- (C)

- (C) Object  
(D)  **Cache (Correct Answer)** (Chosen option)

**Question No.10**

Marks: 1.00

Bookmark 

The light grey lines across the rows and columns on a spreadsheet is called \_\_\_\_\_.

- (A)  **Gridlines (Correct Answer)** (Chosen option)  
(B)  Borders  
(C)  Formulas  
(D)  Headings

**Question No.11**

Marks: 1.00

Bookmark 

Which option in Microsoft Word enables you to setup newspaper like snaking effect?

- (A)  **Columns (Correct Answer)**  
(B)  Review  
(C)  Indents (Chosen option)  
(D)  Clipboard

**Question No.12**

Marks: 1.00

Bookmark 

The places on the slide where we can click and type text for the presentation are called \_\_\_\_\_.

- (A)  Slide Layout  
(B)  **Placeholders (Correct Answer)**  
(C)  Slide Design  
(D)  Slide Sort (Chosen option)

**Question No.13**

Marks: 1.00

Bookmark 

The technology in your computer that helps you connect with the internet without a wired connection is \_\_\_\_\_.

- (A)  Compiling  
(B)  **Wi-Fi (Correct Answer)** (Chosen option)  
(C)  Webcam  
(D)  Location

**Question No.14**

Marks: 1.00

Bookmark 

\_\_\_\_\_ are computer virus programs that will start or stop functioning after a predetermined date or time is reached.

- (A)  Worms  
(B)  Macro viruses  
(C)  Boot-sector viruses  
(D)  **Time bombs (Correct Answer)** (Chosen option)

**Question No.15**

Marks: 1.00

Bookmark 

In MS Word, 'Table of contents' group is available under \_\_\_\_\_ ribbon.

- (A)  DATA (Chosen option)
- (B)  PAGE LAYOUT
- (C)  REFERENCES (Correct Answer)
- (D)  INSERT

**Question No.16**

Marks: 1.00

Bookmark 

The input device that captures the image or video into the computer is called \_\_\_\_\_.

- (A)  Printer
- (B)  Webcam (Correct Answer) (Chosen option)
- (C)  Webpage
- (D)  Plotter

**Question No.17**

Marks: 1.00

Bookmark 

What is the shortcut key for finding and replacing text in a document?

- (A)  Ctrl + F (Correct Answer) (Chosen option)
- (B)  Ctrl + F4
- (C)  Ctrl + F5
- (D)  Ctrl + F7

**Question No.18**

Marks: 1.00

Bookmark 

\_\_\_\_\_ refers to a weakness in a computer that can be exploited by viruses to deliver a successful attack.

- (A)  Risk (Chosen option)
- (B)  Vulnerability (Correct Answer)
- (C)  Threat
- (D)  Consequence

**Question No.19**

Marks: 1.00

Bookmark 

What is the term for a temporary storage area that compensates for differences in data rate and data flow between devices?

- (A)  Bus
- (B)  Buffer (Correct Answer)
- (C)  USB (Chosen option)
- (D)  Channel

**Question No.20**

Marks: 1.00

Bookmark 

Which option in Microsoft Excel will help you arrange, summarize and group large sets of data?

- (A)  Filter

- (B)  **Pivot table (Correct Answer)** (Chosen option)  
(C)  Illustrations  
(D)  Sparkline

**Question No.21**

Marks: 1.00

Bookmark 

An electronic component that executes programming instruction called as CPU stands for \_\_\_\_\_.

- (A)  **Central processing unit (Correct Answer)** (Chosen option)  
(B)  Clock processing unit  
(C)  Computer programming unit  
(D)  Common processing unit

**Question No.22**

Marks: 1.00

Bookmark 

The feature in Microsoft Word which helps in organizing and maintaining a long document by dividing them into several sub documents is \_\_\_\_\_.

- (A)  **Master Document (Correct Answer)** (Chosen option)  
(B)  Page Layout  
(C)  Print Preview  
(D)  Handouts

**Question No.23**

Marks: 1.00

Bookmark 

In which memory the speed of the read and write operations is same?

- (A)  PROM  
(B)  ROM  
(C)  BIOS  
(D)  **RAM (Correct Answer)** (Chosen option)

**Question No.24**

Marks: 1.00

Bookmark 

The default file extension of a document that you have created using Word pad is \_\_\_\_\_.

- (A)  .txt (Chosen option)  
(B)  .csv  
(C)  **.rtf (Correct Answer)**  
(D)  .exe

**Question No.25**

Marks: 1.00

Bookmark 

In Microsoft Excel, \_\_\_\_\_ key combination can be used to display the formulas entered in a cell.

- (A)  Ctrl key + \* symbol (Chosen option)  
(B)  Ctrl key + ) symbol  
(C)  Ctrl key + ] symbol

- (D)  **Ctrl key + ` symbol (Correct Answer)**