

OSSC CGL 2022-23
E-BOOK- PDF
7,000 MCQ
EXPLANATION
All Important Questions & Answers

[Click Here](#)

MATH - ଓଡ଼ିଶାର
ସମସ୍ତ ପରୀକ୍ଷା ପୂର୍ବ ବର୍ଷ ପ୍ରଶ୍ନ
E-BOOK- PDF
1,800- MCQ
Topic Wise
OPSC, OSSC CGL, OSSSC, Police/Constable, B.ED, CHT, CT, OSSSC (RI, JC, LSI, OFDC, Group C)]

[Click Here](#)

ଓଡ଼ିଆ ବ୍ୟାକରଣ PYQ
ସମସ୍ତ ପରୀକ୍ଷା ପୂର୍ବ ବର୍ଷ ପ୍ରଶ୍ନ
E-BOOK- PDF
2,222 MCQ
TEST- 75
OPSC ASO, B.ED, CHT, CT, OAVS, OSSTET, OTET, ODISHA POLICE, OSSSC RI, OSSSC LSI, OSSSC OFDC, OSSSC Group C

[Click Here](#)

ENGLISH - ଓଡ଼ିଶାର
ସମସ୍ତ ପରୀକ୍ଷା ପୂର୍ବ ବର୍ଷ ପ୍ରଶ୍ନ
E-BOOK- PDF
3,600- MCQ
Topic Wise
OPSC, OSSC CGL, OSSSC, Police/Constable, B.ED, CHT, OTET, OSSTET CT, OSSSC (RI, JC, LSI, OFDC, Group C)

[Click Here](#)

REASONING - ଓଡ଼ିଶାର
ସମସ୍ତ ପରୀକ୍ଷା ପୂର୍ବ ବର୍ଷ ପ୍ରଶ୍ନ
E-BOOK- PDF
2,200- MCQ
Topic Wise
OPSC, OSSC CGL, OSSSC, Police/Constable, B.ED, CHT, OTET, OSSTET CT, OSSSC (RI, JC, LSI, OFDC, Group C)

[Click Here](#)

COMPUTER - ଓଡ଼ିଶାର
ସମସ୍ତ ପରୀକ୍ଷା ପୂର୍ବ ବର୍ଷ ପ୍ରଶ୍ନ
E-BOOK- PDF
1,100- MCQ
Topic Wise
OPSC, OSSC CGL, OSSSC, Police/Constable, CHT, OSSSC (RI, JC, LSI, OFDC, Group C)

[Click Here](#)

Tech of World
 HOME VIDEOS PLAYLISTS COMMUNITY
ଆମ Channel ରେ ଦେଖନ୍ତୁ Video
ASO ଓଡ଼ିଶା ପୋଷ୍ଟାଲ CT ଓ B.Ed
ଓଡ଼ିଶା ପୋଲିସ୍ SSC GD Railway
TOW
Tech of World
SUBSCRIBE
 315K subscribers • 928 videos
 Hello ପାଇଁ ମନେ !! ଆମେ ଏହି Channel ରେ ସବୁ ପ୍ରକାରର Educational Video
 Free ରେ ଯେତେବେଳେ ଯେତେ ଦେଖିବାକୁ ମିଳେ ଏହି "Tech Of World" Channel ରୁ ...
+2 କିମ୍ବା +3 ପଢ଼ିବା ପରେ
କେମିତି ଜଣେ ଶିକ୍ଷକ
ହେଇପାରିବେ ?
CT ଓ B.Ed ପରେ କଣ ?
 18:50
 How To Become A Teacher After +2 Or +3 In Odisha ? How To Get A Teacher Job In Odisha ?
 Tech of World - 176K views - 3 years ago
 Home Shorts Subscriptions Library

[Click Here](#)

Tech Of World- (Odisha Exam CT)
 Tech Of World
 Uninstall Open
 Your Review
 sujit kumar naik
 ★★★★★ 6/29/21
 Edit your review
 Developer contact
 About this app
 Tech Of World (Odisha Exam) Provides Mock Test & E-Books For Different Exams
 Education
 3.8 ★
 422 reviews 422 reviews Rated for 3+ 50K Downloads
TECH OF WORLD
 Mock Test

[Click Here](#)

Tech Of World
 4.1K subscribers
 538 Sujit, 9:42 AM
 Leave a comment
 ASO English 2022 By...
 8.7 MB PDF
 ASO General Knowledge 2022...
 4.9 MB PDF
 ASO Math 2022 By Techofworld.in.pdf
 4.6 MB PDF
 ASO Odia Language 2022 By...
 2.9 MB PDF
 ASO Reasoning 2022 By...
 4.6 MB PDF
 508, 9:47 AM
 3 comments
 Broadcast

[Click Here](#)

Roll No: Tech Of World App

Registration No: Tech Of World App

Name: Tech Of World App

Exam Date: 05-Nov-2022

Exam Time: 12:15-14:15

Post Name: BSSO 22

Registered Photo



Exam Day Photo



Arithmetic - Arithmetic

Question No.1

Marks: 1.00

Bookmark ☐

A and B can do a piece of work in 45 days, while C and D can do the same work in 30 days. In how many days will A, B, C and D do it together?

- (A) ☐ 16
 (B) ☐ 14
 (C) ☐ 18 (Correct Answer) (Chosen option)
 (D) ☐ 12

Question No.2

Marks: 1.00

Bookmark ☐

In how many ways, 14 different rings can be worn in 3 fingers with at most one in each finger?

- (A) ☐ 2484
 (B) ☐ 2384
 (C) ☐ 2284
 (D) ☐ 2184 (Correct Answer)

Question No.3

Marks: 1.00

Bookmark ☐

In how many ways can the letters of the word 'FOOTBALL' be arranged?

- (A) ☐ 10180
 (B) ☐ 10280
 (C) ☐ 10380
 (D) ☐ 10080 (Correct Answer) (Chosen option)

Question No.4

Marks: 1.00

Bookmark ☐

An article is bought for Rs.31000 and sold at a loss of 30%. Find its selling price. (In Rs.)

- (A) ☐ 23700
 (B) ☐ 22700
 (C) ☐ 21700 (Correct Answer) (Chosen option)
 (D) ☐ 24700

Question No.5

Marks: 1.00

Bookmark ☐

Simple interest on a sum at 20% per annum for 2 years is Rs.760. Find the amount under compound interest on the same sum for the same period and same rate of interest. (In Rs.)

- (A) ☐ 2336
(B) ☒ 2736 (Correct Answer) (Chosen option)
(C) ☐ 2536
(D) ☐ 2936

Question No.6

Marks: 1.00

Bookmark ☐

Find the largest scale size to measure accurately, the three equilateral triangles with sides measuring 138 cm, 184 cm and 230 cm. (In cm)

- (A) ☐ 48
(B) ☐ 45
(C) ☐ 47
(D) ☒ 46 (Correct Answer) (Chosen option)

Question No.7

Marks: 1.00

Bookmark ☐

Find the Principal (Rs) when simple interest = Rs.3810, rate = 6% p.a. and time = 5 years.

- (A) ☒ 12700 (Correct Answer) (Chosen option)
(B) ☐ 13700
(C) ☐ 11700
(D) ☐ 14700

Question No.8

Marks: 1.00

Bookmark ☐

A basket contains 30 black, 59 blue, and 36 red pens. Without looking, if Akil chooses a pen from the basket, what is the probability that he will select a black pen?

- (A) ☒ 24% (Correct Answer) (Chosen option)
(B) ☐ 22%
(C) ☐ 26%
(D) ☐ 28%

Question No.9

Marks: 1.00

Bookmark ☐

The calendar for the year 2029 will be the same for the year:

- (A) ☐ 2034
(B) ☐ 2036
(C) ☐ 2037 (Chosen option)
(D) ☒ 2035 (Correct Answer)

Question No.10

Marks: 1.00

Bookmark ☐

What digit will come in place of question mark in the following equation?

$$53.(?)9 + 627 + 6.27 = 687.26$$

- (A) ☐ 5



- (B) ☐ 3
 (C) ☐ 7
 (D) ☒ 9 (Correct Answer) (Chosen option)

Question No.11

Marks: 1.00

Bookmark ☐

Aravind had some pebbles in his treasure. His friend said that he could arrange all the 20449 pebbles in a two dimensional square matrix. How many rows did he make?

- (A) ☐ 145
 (B) ☐ 142
 (C) ☒ 143 (Correct Answer)
 (D) ☐ 144

Question No.12

Marks: 1.00

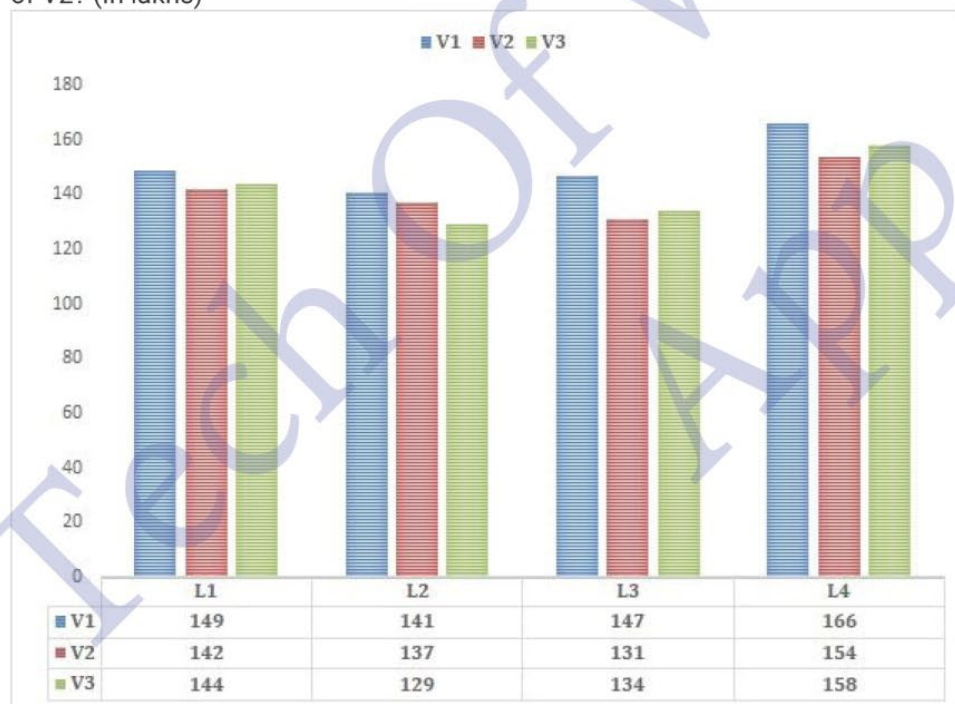
Bookmark ☐

Directions:

Study the following graph carefully and answer the question that follows.

Number of units of three different variant (V1, V2 and V3) produced (units in hundreds) at four different locations (L1, L2, L3 and L4) of a factory in 2020.

If the production cost of each product is Rs.1.2L, then what is the total production cost of V2? (In lakhs)



- (A) ☐ 67880
 (B) ☐ 67980
 (C) ☐ 67780
 (D) ☒ 67680 (Correct Answer) (Chosen option)

Question No.13

Marks: 1.00

Bookmark ☐

When 2.52 is written in the simplest form, the sum of the numerator and the

denominator is:

- (A) ☐ 86
(B) ☐ 84
(C) ☒ 88 (Correct Answer) (Chosen option)
(D) ☐ 82

Question No.14

Marks: 1.00

Bookmark ☐

A train of length 800 m which travels at a speed of 126 kmph crosses a Tunnel in 61 seconds. Find the length of the Tunnel? (In metres)

- (A) ☒ 1335 (Correct Answer) (Chosen option)
(B) ☐ 1435
(C) ☐ 1235
(D) ☐ 1535

Question No.15

Marks: 1.00

Bookmark ☐

The following represents age distribution of students in an elementary class. Find the mode values: 71, 73, 74, 77, 75, 71, 73, 83, 76, 75, 73, 71, 73, 74, 75.

- (A) ☐ 77
(B) ☒ 73 (Correct Answer) (Chosen option)
(C) ☐ 71
(D) ☐ 75

Question No.16

Marks: 1.00

Bookmark ☐

Nazir is twice good a workman as Maverick and together they can finish the same work in 24 days. In how many days will Nazir alone finish the same work?

- (A) ☐ 38
(B) ☒ 36 (Correct Answer) (Chosen option)
(C) ☐ 42
(D) ☐ 40

Question No.17

Marks: 1.00

Bookmark ☐

What value should come in the place of question mark (?) in the following question?

$$1.9 \times (19 \times 22 \times 175.5) \div 36.1 = ?$$

- (A) ☐ 3661
(B) ☒ 3861 (Correct Answer) (Chosen option)
(C) ☐ 3761
(D) ☐ 3561

Question No.18

Marks: 1.00

Bookmark ☐

The LCM of two numbers is 1200 and their ratio is 24:25. Find the two numbers.

- (A) ☐ 51, 48
(B) ☐ 46, 50



- (C) ☐ 48, 46
(D) ☐ **48, 50 (Correct Answer)** (Chosen option)

Question No.19

Marks: 1.00

Bookmark ☐

The ratio of two numbers is 6:7 and their sum is 663. Find the greater of the two numbers.

- (A) ☐ 347
(B) ☐ 327
(C) ☐ 337
(D) ☐ **357 (Correct Answer)** (Chosen option)

Question No.20

Marks: 1.00

Bookmark ☐

If B's age is eight times the age of A and if B's age is 32 yrs, find the age difference between A and B. (In years)

- (A) ☐ 24
(B) ☐ 30
(C) ☐ **28 (Correct Answer)** (Chosen option)
(D) ☐ 26

Question No.21

Marks: 1.00

Bookmark ☐

Find the area of the equilateral triangle whose side is 156 cm. (In cm^2)

- (A) ☐ $6071\sqrt{3}$
(B) ☐ **$6084\sqrt{3}$ (Correct Answer)** (Chosen option)
(C) ☐ $6081\sqrt{3}$
(D) ☐ $6074\sqrt{3}$

Question No.22

Marks: 1.00

Bookmark ☐

Find $a^3 - b^3$, given that $(a - b) = 8$ and $(a^2 + ab + b^2) = 2368$.

- (A) ☐ 16944
(B) ☐ 17944
(C) ☐ 19944
(D) ☐ **18944 (Correct Answer)** (Chosen option)

Question No.23

Marks: 1.00

Bookmark ☐

A train travels from Delhi to Amristar at a speed of 84 km/hr and returns at a speed of 86 km/hr. If it takes 170 hours for total travel, then find the distance between Delhi and Amristar. (In km)

- (A) ☐ **7224 (Correct Answer)** (Chosen option)
(B) ☐ 7444
(C) ☐ 7334
(D) ☐ 7114

Question No.24

Marks: 1.00

Bookmark ☐

In a team there are 120 males and 72 females. What is the probability of a randomly selected person of the team to be a female? (In % and Upto two decimals)

- (A) ☒ 37.50% (Correct Answer) (Chosen option)
- (B) ☐ 39.50%
- (C) ☐ 41.50%
- (D) ☐ 35.50%

Question No.25

Marks: 1.00

Bookmark ☐

Tap A can fill a cistern in 188 hours while tap B can empty it in 282 hours. In how many hours the cistern will be filled if both A and B are opened together?

- (A) ☐ 566
- (B) ☐ 568
- (C) ☐ 562
- (D) ☒ 564 (Correct Answer) (Chosen option)

Analytical and Reasoning Ability - Analytical and Reasoning Ability

Question No.1

Marks: 1.00

Bookmark ☐

Pointing to a man, a lady said, "He has no siblings and his brother-in-law is my mother's husband's only daughter's brother." How is the lady related to the man?

- (A) ☒ Wife (Correct Answer) (Chosen option)
- (B) ☐ Aunt
- (C) ☐ Sister-in-law
- (D) ☐ Mother-in-law

Question No.2

Marks: 1.00

Bookmark ☐

In the following question, few statements are given and these statements are followed by two conclusions numbered i and ii. You have to take the given statements to be true even if they seem to be at variance from commonly known facts. Read the conclusions and then decide which of the given conclusions logically follows from the given statements, disregarding commonly known facts.

Choose,

- (A) Only (i) conclusion follows
- (B) Only (ii) conclusion follows
- (C) Neither (i) nor (ii) follows
- (D) Both (i) and (ii) follow
- (E) Either (i) or (ii) follows

Statements: All cats are rats. Some rats are rabbits. All rabbits are bats.

Conclusions:

- i) Some cats are rabbits.
- ii) Some bats are cats.

- (A) ☐ A
- (B) ☒ C (Correct Answer) (Chosen option)
- (C) ☐ B
- (D) ☐ D

Question No.3

Marks: 1.00

Bookmark ☐

The letters of the name of a vegetable are L, N, B, I, J, R and A. If the letters are rearranged correctly, then what is the last letter of the word formed?

- (A) ☐ J
(B) ☐ R
(C) ☒ L (Correct Answer) (Chosen option)
(D) ☐ N

Question No.4

Marks: 1.00

Bookmark ☐

If + means \div , \times means +, \div means - & - means \times , then,
 $225 + 25 - 26 \div 14 - 2 \times 20 = ?$

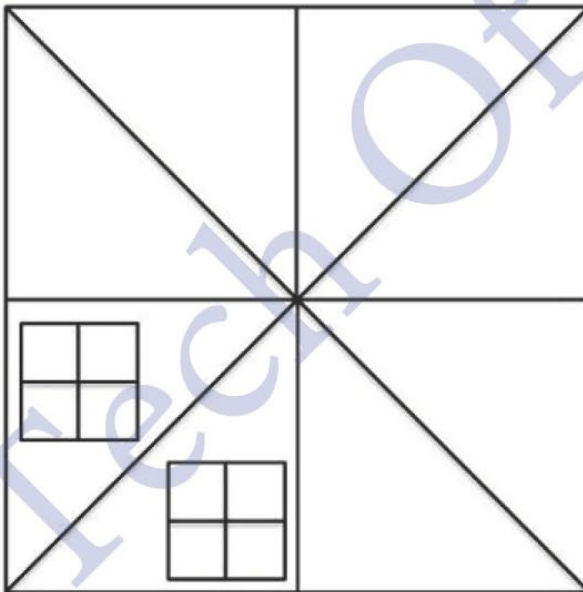
- (A) ☒ 226 (Correct Answer) (Chosen option)
(B) ☐ 248
(C) ☐ 222
(D) ☐ 243

Question No.5

Marks: 1.00

Bookmark ☐

How many squares are there in the given figure?



- (A) ☒ 15 (Correct Answer) (Chosen option)
(B) ☐ 13
(C) ☐ 16
(D) ☐ 17

Case Study - 6 to 7

2.00

Directions:

This type of graph indicates the variation of a quantity with respect to two parameters represented on x-axis and y-axis respectively. So the candidate must carefully observe the peaks and depths

of the graph to interpret the data.

x- axis: Months

y-axis: Number of cases for the month



Question No.6

Marks: 1.00

Bookmark ☐

Which month of the following did Varanasi have the least number of cases?

- (A) ☒ **May-20 (Correct Answer)** (Chosen option)
 (B) ☐ Mar-20
 (C) ☐ Jan-20
 (D) ☐ Feb-20

Question No.7

Marks: 1.00

Bookmark ☐

How many cases were registered in Agra and Varanasi in May-20?

- (A) ☐ 92
 (B) ☒ **80 (Correct Answer)** (Chosen option)
 (C) ☐ 112
 (D) ☐ 84

Question No.8

Marks: 1.00

Bookmark ☐

Replace the question mark with an option that follows the same logic applied in the first pair

VRE : ZVI :: ?? : NPR

- (A) ☐ JLM
 (B) ☐ KMN
 (C) ☐ KNM
 (D) ☒ **JLN (Correct Answer)** (Chosen option)

Question No.9

Marks: 1.00

Bookmark ☐

Meenu said to Janani, "You are the daughter of my only brother's mother's brother." How is Janani related to Meenu?

- (A) ☐ Daughter
 (B) ☐ Sister
 (C) ☒ **Cousin (Correct Answer)** (Chosen option)
 (D) ☐ Aunt

Question No.10

Marks: 1.00

Bookmark ☐

Choose the alternative which is an odd word/number/letter pair out of the given alternatives.

- (A) ☒ **Damage (Correct Answer)** (Chosen option)
 (B) ☐ Devise
 (C) ☐ Prepare
 (D) ☐ Plan

Question No.11

Marks: 1.00

Bookmark ☐

Which of the following sets of signs should be used to replace * in the following?

$$20 * 4 * 15 = 25 * 80 * 2$$

- (A) ☐ $\times \div + \times$
 (B) ☐ $\times + \times \times$
 (C) ☒ **$\times - + \div$ (Correct Answer)** (Chosen option)
 (D) ☐ $\times + - \times$

Question No.12

Marks: 1.00

Bookmark ☐

"Each question given below consists of a statement, followed by two arguments numbered 1 and 2. You have to decide which of the arguments is a 'strong' argument and which is a 'weak' argument.

Give answer:

- (A) If only argument 1 is strong
 (B) If only argument 2 is strong
 (C) If either 1 or 2 is strong
 (D) If neither 1 nor 2 is strong and
 (E) If both 1 and 2 are strong.

Statement: Should the religious slaughter of animals be banned in all countries?

Argument:

1. Yes, it is already banned in Belgium.
 2. Yes, mammals and birds also experience fear and pain, as well as being deprived of their lives.

- (A) ☐ C
 (B) ☐ A (Chosen option)
 (C) ☒ **B (Correct Answer)**
 (D) ☐ D

Question No.13

Marks: 1.00

Bookmark ☐

"Each question given below consists of a statement, followed by two arguments numbered 1 and 2. You have to decide which of the arguments is a 'strong' argument and which is a 'weak' argument.

Give answer:

- (A) If only argument 1 is strong
- (B) If only argument 2 is strong
- (C) If either 1 or 2 is strong
- (D) If neither 1 nor 2 is strong and
- (E) If both 1 and 2 are strong.

Statement: Should there be limits on freedom of speech?

Argument:

1. Yes, the right to freedom of speech and expression is not an ultimate license to defame another person and hinder their reputation.
2. No, there should be no boundaries in democratic countries.

- (A) ☒ **A (Correct Answer)** (Chosen option)
- (B) ☐ B
- (C) ☐ C
- (D) ☐ D

Question No.14

Marks: 1.00

Bookmark ☐

Choose the alternative which is an odd word/number/letter pair out of the given alternatives.

- (A) ☒ **Final (Correct Answer)** (Chosen option)
- (B) ☐ First
- (C) ☐ Starting
- (D) ☐ Initial

Question No.15

Marks: 1.00

Bookmark ☐

What should be written in the place of question mark in the given series?

C7, G14, ?, O28, S35

- (A) ☐ I21
- (B) ☐ K20
- (C) ☐ I20
- (D) ☒ **K21 (Correct Answer)** (Chosen option)

Question No.16

Marks: 1.00

Bookmark ☐

In this question, relationship between different elements is shown in the statement. This statement is followed by two conclusions:

Statements: $C > H \geq I = P < O \leq T < L < E$

Conclusion:

- i) $H > O$
- ii) $O < L$

Choose the appropriate one from the following options

- (A) Only conclusion i follows
- (B) Only conclusion ii follows
- (C) Either i or ii follows
- (D) Neither i nor ii follows
- (E) Both i and ii follow.

- (A) ☐ C
- (B) ☐ D
- (C) ☐ A
- (D) ☐ **B (Correct Answer)** (Chosen option)

Question No.17

Marks: 1.00

Bookmark ☐

In Expo 2020, 1569 students from India participated, 720 students are from Delhi and 516 students are from Maharashtra and 529 students are from Hyderabad, 112 students are from Delhi and Maharashtra and 117 students are from Maharashtra and Hyderabad, and 122 students are from Hyderabad and Delhi. 88 students are from all three states.

Find the number of people who participated only from Delhi and Maharashtra.

- (A) ☐ 29
- (B) ☐ 27
- (C) ☐ 33
- (D) ☐ **24 (Correct Answer)** (Chosen option)

Question No.18

Marks: 1.00

Bookmark ☐

A girl is facing North direction. If she turns 72 degrees in clockwise direction and 63 degrees in the same direction, which direction will she face now?

- (A) ☐ North-East
- (B) ☐ **South-East (Correct Answer)** (Chosen option)
- (C) ☐ South-West
- (D) ☐ North-West

Question No.19

Marks: 1.00

Bookmark ☐

In a certain code language, if GROUP is coded as VKSTY, then how is RATIO coded in that language?

- (A) ☐ **EVXSM (Correct Answer)** (Chosen option)
- (B) ☐ IZGRL
- (C) ☐ VEXMS
- (D) ☐ UOZGX

Question No.20

Marks: 1.00

Bookmark ☐

Replace the question mark with an option that follows the same logic applied in the first pair

Arrest : Capture :: Mention : ??

- (A) ☐ **State (Correct Answer)** (Chosen option)

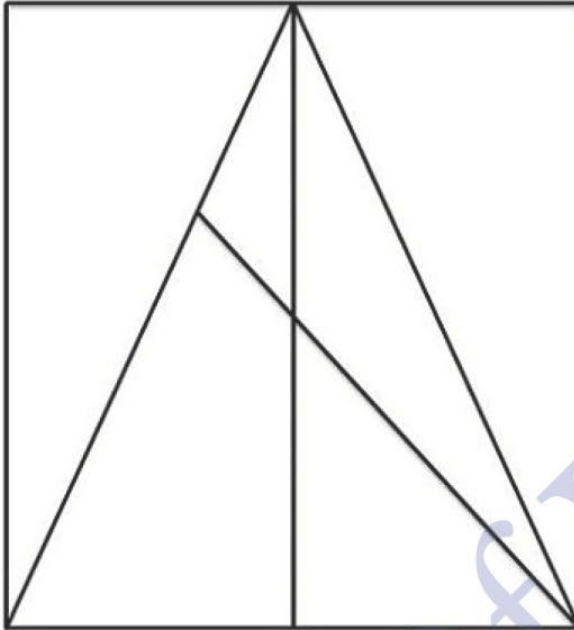
- (B) ☐ Neglect
 (C) ☐ Ignore
 (D) ☐ Hide

Question No.21

Marks: 1.00

Bookmark ☐

How many triangles are there in the given figure?



- (A) ☒ 10 (Correct Answer) (Chosen option)
 (B) ☐ 5
 (C) ☐ 8
 (D) ☐ 6

Question No.22

Marks: 1.00

Bookmark ☐

In a certain code language, if ADOPT is coded as 14151620, then how is DATED coded in that language?

- (A) ☐ 411054
 (B) ☐ 412045
 (C) ☒ 412054 (Correct Answer) (Chosen option)
 (D) ☐ 411045

Question No.23

Marks: 1.00

Bookmark ☐

In this question, relationship between different elements is shown in the statement.
 This statement is followed by two conclusions:

Statements: $S < I \leq L = V > E \geq R$

Conclusion:

- i) $S > E$
 ii) $V > R$

Choose the appropriate one from the following options

- (A) Only conclusion i follows
 (B) Only conclusion ii follows
 (C) Either i or ii follows
 (D) Neither i nor ii follows
 (E) Both i and ii follow.

- (A) ☐ A
 (B) ☒ B (Correct Answer) (Chosen option)
 (C) ☐ D
 (D) ☐ C

Question No.24

Marks: 1.00

Bookmark ☐

What will be written in the place of question mark in the given series?

N14S19C3E5?9

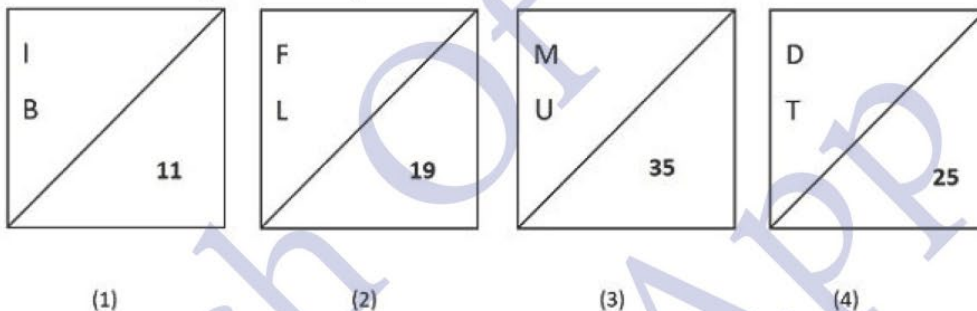
- (A) ☒ I (Correct Answer) (Chosen option)
 (B) ☐ J
 (C) ☐ G
 (D) ☐ H

Question No.25

Marks: 1.00

Bookmark ☐

Find the odd image out in the given series.



- (A) ☐ 2
 (B) ☐ 3
 (C) ☐ 4
 (D) ☒ 1 (Correct Answer) (Chosen option)

General Awareness and Current Events - General Awareness and Current Events

Question No.1

Marks: 1.00

Bookmark ☒

Under the Indus Water Treaty, India has been given the exclusive right over the rivers of _____, _____, and _____.

- (A) ☐ Ganga, Ravi, Jhelum
 (B) ☐ Yamuna, Sutlej, Indus
 (C) ☐ Beas, Jhelum, Chenab
 (D) ☒ Ravi, Beas, Sutlej (Correct Answer)

Question No.2

Marks: 1.00

Bookmark ☐

Which of the following is the capital city of Saudi Arabia?

- (A) ☒ **Riyadh (Correct Answer)**
- (B) ☐ Baghdad (Chosen option)
- (C) ☐ Muscat
- (D) ☐ Doha

Question No.3

Marks: 1.00

Bookmark ☐

Where is the headquarters of BRICS 'New Development Bank' located?

- (A) ☐ Cape Town, South Africa
- (B) ☐ Bengaluru, India
- (C) ☐ Moscow, Russia
- (D) ☐ **Shanghai, China (Correct Answer)** (Chosen option)

Question No.4

Marks: 1.00

Bookmark ☐

What is the eligible age to join the scheme Pradhan Mantri Suraksha Bima Yojana (PMSBY)?

- (A) ☐ 18 to 60 years (Chosen option)
- (B) ☐ 18 to 40 years
- (C) ☐ 18 to 50 years
- (D) ☐ **18 to 70 years (Correct Answer)**

Question No.5

Marks: 1.00

Bookmark ☐

Who was the first Vice-President of Utkal Pradesh Congress Committee?

- (A) ☐ Bhagirathi Mahapatra
- (B) ☐ Gopabandhu Choudhury
- (C) ☐ Jagabandhu Singh
- (D) ☐ **Ekram Rasool (Correct Answer)** (Chosen option)

Question No.6

Marks: 1.00

Bookmark ☒

M.S. Subbulakshmi is a distinguished personality in which of the following fields?

- (A) ☐ Classical Dance
- (B) ☐ **Carnatic Music (Correct Answer)**
- (C) ☐ Architecture
- (D) ☐ Painting

Question No.7

Marks: 1.00

Bookmark ☐

Ekamra Kshetra is the ancient name of which of the following cities of Odisha?

- (A) ☐ Puri
- (B) ☐ Bhadrak
- (C) ☐ **Bhubaneswar (Correct Answer)** (Chosen option)

(D) ☐ Baleswar**Question No.8**

Marks: 1.00

Bookmark ☐

What is the full form of 'NPA' in banking terminology?

- (A) ☐ Net Performing Asset
- (B) ☐ Net Performing Account
- (C) ☐ **Non Performing Asset (Correct Answer)** (Chosen option)
- (D) ☐ Non Performing Account

Question No.9

Marks: 1.00

Bookmark ☐

Who was the Chairman of 'Second Backward Classes Commission'?

- (A) ☐ K. Kasturirangan
- (B) ☐ Indira Sawhney (Chosen option)
- (C) ☐ **B.P. Mandal (Correct Answer)**
- (D) ☐ V.P. Singh

Question No.10

Marks: 1.00

Bookmark ☐

What is the full form of 'AIDS', a disease caused by Virus?

- (A) ☐ Active Immunodeficiency Syndrome
- (B) ☐ **Acquired Immunodeficiency Syndrome (Correct Answer)**
- (C) ☐ Abnormal Immunodeficiency Syndrome (Chosen option)
- (D) ☐ Acute Immunodeficiency Syndrome

Question No.11

Marks: 1.00

Bookmark ☐

Which of the following districts has the highest Male Literacy rate in Odisha as per Census 2011?

- (A) ☐ **Jagatsinghpur (Correct Answer)** (Chosen option)
- (B) ☐ Sonepur
- (C) ☐ Nuapada
- (D) ☐ Cuttack

Question No.12

Marks: 1.00

Bookmark ☐

The Qadam-I-Rasool is a monument of beauty built by:

- (A) ☐ Murshid Quli Khan (Chosen option)
- (B) ☐ Sarfaraz Khan
- (C) ☐ Alivardi Khan
- (D) ☐ **Shujaddin Khan (Correct Answer)**

Question No.13

Marks: 1.00

Bookmark ☐

Which Indian Athlete is popularly called as 'Payyoli Express'?

- (A) ☐ Priyanka Goswami
(B) ☐ **P.T. Usha (Correct Answer)**
(C) ☐ Milkha Singh (Chosen option)
(D) ☐ Hima Das

Question No.14

Marks: 1.00

Bookmark ☐

The famous Barabar caves is located in which of the following states of India?

- (A) ☐ Assam
(B) ☐ Rajasthan
(C) ☐ Uttar Pradesh
(D) ☐ **Bihar (Correct Answer)**

Question No.15

Marks: 1.00

Bookmark ☐

Anang Tal Lake, which was recently declared as a monument of national importance under Ancient Monuments and Archaeological Sites and Remains (AMASR) Act, 1958, is located in which Union Territory of India?

- (A) ☐ Puducherry
(B) ☐ **Delhi (Correct Answer)**
(C) ☐ Lakshadweep Islands
(D) ☐ Andaman and Nicobar Islands (Chosen option)

Question No.16

Marks: 1.00

Bookmark ☐

Which arab traveller wrote the detailed description of the condition of India under Muhammad-bin-Tughlaq?

- (A) ☐ Al-Biruni (Chosen option)
(B) ☐ **Ibn Battuta (Correct Answer)**
(C) ☐ Abdur Razzak
(D) ☐ Afanasy Nikitin

Question No.17

Marks: 1.00

Bookmark ☐

Which country will host the Shanghai Cooperation Organization (SCO) Summit 2023?

- (A) ☐ Uzbekistan
(B) ☐ Russia
(C) ☐ **India (Correct Answer) (Chosen option)**
(D) ☐ China

Question No.18

Marks: 1.00

Bookmark ☐

Nepal shares its border with which of the following states of India?

- (A) ☐ Assam
(B) ☐ Madhya Pradesh
(C) ☐ **West Bengal (Correct Answer) (Chosen option)**

(D) ☐ Meghalaya**Question No.19**

Marks: 1.00

Bookmark ☐

Deposit Insurance and Credit Guarantee Corporation (DICGC) is a wholly-owned subsidiary of:

- (A) ☐ Government of India
 (B) ☐ Insurance Regulatory and Development Authority (Chosen option)
 (C) ☐ **Reserve Bank of India (Correct Answer)**
 (D) ☐ Life Insurance Corporation

Question No.20

Marks: 1.00

Bookmark ☐

Which is the oldest steel plant in India?

- (A) ☐ IISCO Steel Plant, Burnpur
 (B) ☐ Rashtriya Ispat Nigam Limited(RINL) Steel Plant, Visakhapatnam
 (C) ☐ Bhilai Iron and Steel Plant(SAIL),Bhilai
 (D) ☐ **Tata Iron and Steel Company (TISCO), Jamshedpur (Correct Answer)** (Chosen option)

Question No.21

Marks: 1.00

Bookmark ☐

Amaravati, Bhavani and Hemavati are the tributaries of which of the following rivers?

- (A) ☐ River Mahanadi
 (B) ☐ River Krishna (Chosen option)
 (C) ☐ River Godavari
 (D) ☐ **River Kaveri (Correct Answer)**

Question No.22

Marks: 1.00

Bookmark ☐

Who publishes All-India Consumer Price Index for Industrial Workers (CPI-IW)?

- (A) ☐ Office of Economic Adviser
 (B) ☐ National Statistical Office (Chosen option)
 (C) ☐ Chief Economic Advisor
 (D) ☐ **Labour Bureau (Correct Answer)**

Question No.23

Marks: 1.00

Bookmark ☐

Which schedule was added to the Indian Constitution by the 73rd Constitutional Amendmen Act?

- (A) ☐ **Eleventh Schedule (Correct Answer)** (Chosen option)
 (B) ☐ Fifth Schedule
 (C) ☐ Seventh Schedule
 (D) ☐ Third Schedule

Question No.24

Marks: 1.00



Bookmark ☐

Atri is one of the most famous picnic spots in Odisha and is known for its _____.

- (A) ☐ **perennial hot spring (Correct Answer)** (Chosen option)
 (B) ☐ biosphere reserve
 (C) ☐ beach
 (D) ☐ National Park

Question No.25

Marks: 1.00

Bookmark ☐

Who formed the East India Association in 1866?

- (A) ☐ Badruddin Tyabji
 (B) ☐ Anandha Charlu
 (C) ☐ **Dadabhai Naoroji (Correct Answer)**
 (D) ☐ E V Ramsamy

Computer and Internet Awareness - Computer and Internet Awareness**Question No.1**

Marks: 1.00

Bookmark ☐

What is the function of F1 in MSWord?

- (A) ☐ File Open
 (B) ☐ **Opens Help (Correct Answer)** (Chosen option)
 (C) ☐ Go to 1st Line
 (D) ☐ Go to 1st Page

Question No.2

Marks: 1.00

Bookmark ☐

_____ is a basic unit of memory.

- (A) ☐ **bit (Correct Answer)** (Chosen option)
 (B) ☐ byte
 (C) ☐ word
 (D) ☐ nibble

Question No.3

Marks: 1.00

Bookmark ☐

The input device that can capture your voice is _____.

- (A) ☐ Speaker
 (B) ☐ Web cam
 (C) ☐ USB drive
 (D) ☐ **Microphone (Correct Answer)** (Chosen option)

Question No.4

Marks: 1.00

Bookmark ☐

In Microsoft Excel, which function allows you to make logical comparisons between a value and what you expect?

- (A) ☐ **IF Function (Correct Answer)** (Chosen option)
 (B) ☐ AutoSum Function



- (C) ☐ Number Function
(D) ☐ Choice Function

Question No.5

Marks: 1.00

Bookmark ☐

The run command used to open calculator application is _____.

- (A) ☐ Winword (Chosen option)
(B) ☐ **Calc (Correct Answer)**
(C) ☐ MsConfig
(D) ☐ Openc

Question No.6

Marks: 1.00

Bookmark ☐

The windows utility which is used to capture image of the screen and save them to your computer is:

- (A) ☐ WinZip (Chosen option)
(B) ☐ Sound recorder
(C) ☐ **Snipping tool (Correct Answer)**
(D) ☐ Remote desktop connection

Question No.7

Marks: 1.00

Bookmark ☐

_____ method tries every possible combination of keys or algorithms to break a cipher.

- (A) ☐ Social Engineering
(B) ☐ Eavesdropping (Chosen option)
(C) ☐ Phishing
(D) ☐ **Brute Force (Correct Answer)**

Question No.8

Marks: 1.00

Bookmark ☐

In 1642, the calculating machine "Pascaline" was built by _____.

- (A) ☐ Joseph Mark
(B) ☐ Roman koheller
(C) ☐ **Blaise Pascal (Correct Answer)** (Chosen option)
(D) ☐ Adam Pascal

Question No.9

Marks: 1.00

Bookmark ☐

_____ is any value or expression that can be evaluated to True or False in Excel.

- (A) ☐ Cell_expression
(B) ☐ Choice_expression
(C) ☐ **Logical_test (Correct Answer)** (Chosen option)
(D) ☐ Result_expression

Question No.10

Marks: 1.00

Bookmark ☐

The frequently visited websites are saved under _____ for quick access.

- (A) ☐ Status Bar
(B) ☒ **Bookmarks Bar (Correct Answer)** (Chosen option)
(C) ☐ Address Bar
(D) ☐ Progress Bar

Question No.11

Marks: 1.00

Bookmark ☐

The file extension of power point presentation is _____.

- (A) ☒ **.ppt (Correct Answer)** (Chosen option)
(B) ☐ .pvt
(C) ☐ .pow
(D) ☐ .jpg

Question No.12

Marks: 1.00

Bookmark ☐

_____ option in view menu is used by the presenter to make notes for each slide which can be used while presenting.

- (A) ☐ Status Bar
(B) ☐ Scroll Bar
(C) ☒ **Notes Page (Correct Answer)** (Chosen option)
(D) ☐ Slide Pane

Question No.13

Marks: 1.00

Bookmark ☐

The component on the Operating system, that translates user commands into machine language is _____.

- (A) ☐ API
(B) ☐ XML
(C) ☐ Packets
(D) ☒ **Kernel (Correct Answer)** (Chosen option)

Question No.14

Marks: 1.00

Bookmark ☐

Ransomware is an example of _____, intentionally designed to cause damage to a computer, server, client, or computer network.

- (A) ☐ Adware
(B) ☐ AdSense
(C) ☐ Spyware
(D) ☒ **Malware (Correct Answer)** (Chosen option)

Question No.15

Marks: 1.00

Bookmark ☐

Which option from the 'Layout Ribbon' helps to combine the contents of selected adjacent cells into a single cell?

- (A) ☒ **Merge Cells (Correct Answer)** (Chosen option)
(B) ☐ Split Cells

- (C) ☐ Borders
(D) ☐ Tables

Question No.16

Marks: 1.00

Bookmark ☐

In Network services, WINS stands for _____.

- (A) ☐ Wireless Internet Name Service
(B) ☐ Wireless Internet Network Service (Chosen option)
(C) ☐ **Windows Internet Name Service (Correct Answer)**
(D) ☐ Windows Internet Node Service

Question No.17

Marks: 1.00

Bookmark ☐

The freeze pane option in Excel is available under _____ Ribbon.

- (A) ☐ **View (Correct Answer)** (Chosen option)
(B) ☐ Page Layout
(C) ☐ Review
(D) ☐ Insert

Question No.18

Marks: 1.00

Bookmark ☐

In MS Office, Word Spelling and Grammar button is available in _____ tab.

- (A) ☐ OUTLINE
(B) ☐ **REVIEW (Correct Answer)** (Chosen option)
(C) ☐ INSERT
(D) ☐ DEVELOPER

Question No.19

Marks: 1.00

Bookmark ☐

The Windows file system FAT stands for _____.

- (A) ☐ **File Allocation Table (Correct Answer)** (Chosen option)
(B) ☐ File Application Table
(C) ☐ File Association Table
(D) ☐ File Assessment Table

Question No.20

Marks: 1.00

Bookmark ☐

What will Ctrl+S do in Paint?

- (A) ☐ Set as desktop background
(B) ☐ Send in email
(C) ☐ Open
(D) ☐ **Save (Correct Answer)** (Chosen option)

Question No.21

Marks: 1.00

Bookmark ☐

_____ is used as reference points for cross references, index and macros.

- (A) ☐ Citation
(B) ☒ **Bookmark (Correct Answer)**
(C) ☐ Caption
(D) ☐ Hyperlink (Chosen option)

Question No.22

Marks: 1.00

Bookmark ☐

The default alignment in MS Word is _____.

- (A) ☒ **Left (Correct Answer)** (Chosen option)
(B) ☐ Justify
(C) ☐ Right
(D) ☐ Centre

Question No.23

Marks: 1.00

Bookmark ☐

For printing a page that is taller than its width and has vertical orientation you need to select _____ orientation option from the page layout dialog box.

- (A) ☐ Watermark
(B) ☒ **Portrait (Correct Answer)** (Chosen option)
(C) ☐ Dropcap
(D) ☐ Landscape

Question No.24

Marks: 1.00

Bookmark ☐

Which of the following will help you ensure that all tracked changes have been removed from your document?

- (A) ☐ Comments pane (Chosen option)
(B) ☐ Master pane
(C) ☐ Compare pane
(D) ☒ **Reviewing pane (Correct Answer)**

Question No.25

Marks: 1.00

Bookmark ☐

_____ is the process of preparing the disk for its initial use and create new file systems.

- (A) ☒ **Formatting (Correct Answer)** (Chosen option)
(B) ☐ Recording
(C) ☐ Provisioning
(D) ☐ Allotting