

OSSC CGL 2022-23
E-BOOK- PDF
7,000 MCQ
EXPLANATION
All Important Questions & Answers

[Click Here](#)

MATH - ଓଡ଼ିଶାର
ସମସ୍ତ ପରୀକ୍ଷା ପୂର୍ବ ବର୍ଷ ପ୍ରଶ୍ନ
E-BOOK- PDF
1,800- MCQ
Topic Wise
OPSC, OSSC CGL, OSSSC, Police/Constable, B.ED, CHT, CT, OSSSC (RI, JC, LSI, OFDC, Group C)]

[Click Here](#)

ଓଡ଼ିଆ ବ୍ୟାକରଣ PYQ
ସମସ୍ତ ପରୀକ୍ଷା ପୂର୍ବ ବର୍ଷ ପ୍ରଶ୍ନ
E-BOOK- PDF
2,222 MCQ
TEST- 75
OPSC ASO, B.ED, CHT, CT, OAVS, OSSTET, OTET, ODISHA POLICE, OSSSC RI, OSSSC LSI, OSSSC OFDC, OSSSC Group C

[Click Here](#)

ENGLISH - ଓଡ଼ିଶାର
ସମସ୍ତ ପରୀକ୍ଷା ପୂର୍ବ ବର୍ଷ ପ୍ରଶ୍ନ
E-BOOK- PDF
3,600- MCQ
Topic Wise
OPSC, OSSC CGL, OSSSC, Police/Constable, B.ED, CHT, OTET, OSSTET CT, OSSSC (RI, JC, LSI, OFDC, Group C)

[Click Here](#)

REASONING - ଓଡ଼ିଶାର
ସମସ୍ତ ପରୀକ୍ଷା ପୂର୍ବ ବର୍ଷ ପ୍ରଶ୍ନ
E-BOOK- PDF
2,200- MCQ
Topic Wise
OPSC, OSSC CGL, OSSSC, Police/Constable, B.ED, CHT, OTET, OSSTET CT, OSSSC (RI, JC, LSI, OFDC, Group C)

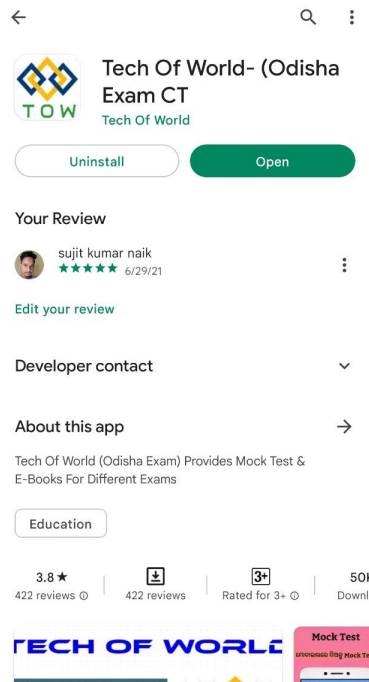
[Click Here](#)

COMPUTER - ଓଡ଼ିଶାର
ସମସ୍ତ ପରୀକ୍ଷା ପୂର୍ବ ବର୍ଷ ପ୍ରଶ୍ନ
E-BOOK- PDF
1,100- MCQ
Topic Wise
OPSC, OSSC CGL, OSSSC, Police/Constable, CHT, OSSSC (RI, JC, LSI, OFDC, Group C)

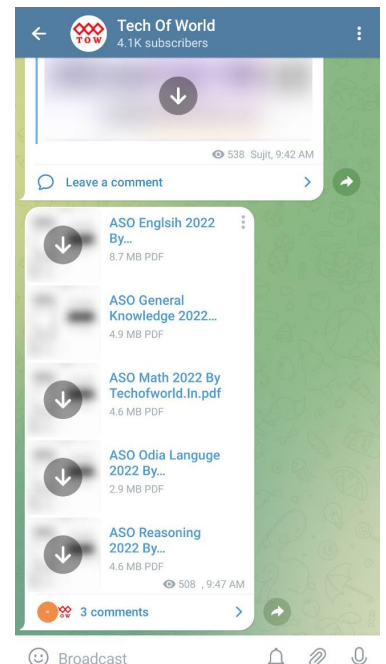
[Click Here](#)



[Click Here](#)



[Click Here](#)



[Click Here](#)

Roll No: Tech Of World App
Registration No: Tech Of World App
Name: Tech Of World App
Exam Date: 04-Nov-2022
Exam Time: 15:30-17:30
Post Name: BSSO 22

Arithmetic - Arithmetic**Question No.1**

Marks: 1.00

Bookmark

A pipe can fill a tank with water in 405 hours. Because of an outlet, it took 450 hours to fill the tank. How much time will it take for the outlet alone to drain all the water present in the filled water tank? (In hours)

- (A) 4350
(B) 4050 (Correct Answer) (Chosen option)
(C) 4250
(D) 4150

Question No.2

Marks: 1.00

Bookmark

Three numbers are in the ratio 30:31:32. The smallest number is 2100. Find the difference between the smallest and the largest number.

- (A) 120
(B) 130
(C) 140 (Correct Answer) (Chosen option)
(D) 110

Question No.3

Marks: 1.00

Bookmark

A mobile is bought for Rs.4200 and sold at Rs.4620. Find the gain percentage.

- (A) 20
(B) 15
(C) 25
(D) 10 (Correct Answer) (Chosen option)

Question No.4

Marks: 1.00

Bookmark

7 girls can dig a pit in 252 days. If a boy is twice as efficient as a girl, then 5 girls and 1 boy can dig a similar pit in how many days?

- (A) 252 (Correct Answer) (Chosen option)
(B) 258
(C) 254
(D) 256

Question No.5

Marks: 1.00

Bookmark

Find the another diagonal of rhombus whose area is 6216 cm^2 and one diagonal is 111 cm. (In cm)

- (A) 116

- (B) **112 (Correct Answer)**
(C) 110
(D) 108

Question No.6

Marks: 1.00

Bookmark

Thilak can do a piece of work in 97.5 days. Erik is 25% more efficient than Thilak. Find the number of days taken by Erik to do the same piece of work.

- (A) 76
(B) 72
(C) **78 (Correct Answer)** (Chosen option)
(D) 74

Question No.7

Marks: 1.00

Bookmark

A man travels at a speed of 180 kmph and covers a certain distance in 33 minutes. Find the distance covered in metres.

- (A) 97000
(B) **99000 (Correct Answer)** (Chosen option)
(C) 96000
(D) 98000

Question No.8

Marks: 1.00

Bookmark

A Tours and Travel services has 121 buses available, of which 89 have Non A.C. What is the probability that a randomly selected vehicle will be an A.C bus? (Upto two decimals)

- (A) 0.36
(B) 0.16
(C) **0.26 (Correct Answer)**
(D) 0.46

Question No.9

Marks: 1.00

Bookmark

The product of two numbers is 1512 and their L.C.M is 252. Find the G.C.D of the numbers.

- (A) 4
(B) 5
(C) **6 (Correct Answer)** (Chosen option)
(D) 7

Question No.10

Marks: 1.00

Bookmark

There are 147 flowers in a bundle, 58 of which contain yellow flowers. What is the probability of selecting a yellow flower at random? (In % and rounding off to two decimals)

- (A) 37.46
(B) 41.46
(C) 35.46
(D) **39.46 (Correct Answer)**

Question No.11

Marks: 1.00

Bookmark

A sum of Rs.4500 earns an interest of Rs.1800 in 10 years at what rate of simple interest?

- (A) 8%
 (B) 6%
 (C) 4% (Correct Answer) (Chosen option)
 (D) 2%

Question No.12

Marks: 1.00

Bookmark

Liya travels at a speed of 127 kmph and she reaches the destination in 33 hours. Find the distance she travelled. (In km)

- (A) 4491
 (B) 4191 (Correct Answer) (Chosen option)
 (C) 4391
 (D) 4291

Question No.13

Marks: 1.00

Bookmark

Find the value of $\sqrt{20.25} + \sqrt{0.2025} + \sqrt{0.002025}$

- (A) 5.995
 (B) 7.995
 (C) 4.995 (Correct Answer) (Chosen option)
 (D) 6.995

Question No.14

Marks: 1.00

Bookmark

When 2.12 is written in the simplest form, the sum of the numerator and the denominator is:

- (A) 74
 (B) 72
 (C) 78 (Correct Answer) (Chosen option)
 (D) 76

Question No.15Marks:
1.00Bookmark **Directions:**

Study the following data carefully and answer the question that follows.

Details mentioned are for the state qualifying exam conducted by respective states A, B, C and their qualified percentage.

Find the number of candidates from state C who are not qualified during the years 2016, 2018 and 2020.

Year	A		B		C	
	Appeared	Qualified(%)	Appeared	Qualified(%)	Appeared	Qualified(%)
2016	255	60	285	80	270	60
2017	335	60	365	60	350	70
2018	315	80	345	60	330	60
2019	435	80	465	80	450	80
2020	505	60	535	60	520	75

- (A) 350

- (B) 380
(C) **370 (Correct Answer)** (Chosen option)
(D) 360

Question No.16

Marks: 1.00

Bookmark

8 students participated in the competition and each got different scores. In how many ways can three different prizes be given?

- (A) 326 (Chosen option)
(B) 346
(C) **336 (Correct Answer)**
(D) 316

Question No.17

Marks: 1.00

Bookmark

What was the day of the week on 25th December, 2003?

- (A) Wednesday (Chosen option)
(B) Tuesday
(C) Friday
(D) **Thursday (Correct Answer)**

Question No.18

Marks: 1.00

Bookmark

Let's consider the data: 183, 200, 157, 167, 211, 176. What is the median?

- (A) **179.5 (Correct Answer)**
(B) 175.5
(C) 173.5
(D) 177.5

Question No.19

Marks: 1.00

Bookmark

A is six years older than B who is twice as old as C. If the total of the ages of A, B and C is 46, then how old is B? (In years)

- (A) 12
(B) 18
(C) **16 (Correct Answer)** (Chosen option)
(D) 14

Question No.20

Marks: 1.00

Bookmark

What value should come in the place of question mark (?) in the following question?

$$147(4/3) + 58(3/2) - 156(3/4) = ? - 140(2/5)$$

- (A) 202
(B) 192
(C) 212
(D) **222 (Correct Answer)** (Chosen option)

Question No.21

Marks: 1.00

Bookmark

Find the smallest number which when reduced by 24, is divisible 25, 26 and 65.

- (A) 704

- (B) 674 (Correct Answer) (Chosen option)
(C) 684
(D) 694

Question No.22

Marks: 1.00

Bookmark

Using all the letters of the word EQUATION, how many distinct words can be formed?

- (A) 41320
(B) 40320 (Correct Answer)
(C) 42320
(D) 43320

Question No.23

Marks: 1.00

Bookmark

At the end of two years, what will be the compound interest at the rate of 10% p.a. on an amount of Rs.6200? (In Rs.)

- (A) 1402
(B) 1302 (Correct Answer) (Chosen option)
(C) 1502
(D) 1202

Question No.24

Marks: 1.00

Bookmark

Find b^2 , given that $(a-b)^2 = 441$, $a^2 = 1764$ and $ab = 882$.

- (A) 441 (Correct Answer)
(B) 451
(C) 421
(D) 431

Question No.25

Marks: 1.00

Bookmark

0.341 x 0.0407 is equal to:

- (A) 0.0138687
(B) 0.0138787 (Correct Answer) (Chosen option)
(C) 0.0138587
(D) 0.0138887

Analytical and Reasoning Ability - Analytical and Reasoning Ability**Question No.1**

Marks: 1.00

Bookmark

If + means \div , \times means +, \div means - & - means \times , then,
 $112 - 2 \times 125 + 5 \div 176 + 2 = ?$

- (A) 173
(B) 157
(C) 161 (Correct Answer) (Chosen option)
(D) 169

Question No.2

Marks: 1.00

Bookmark

Pointing to a photo of a boy, a lady said, "His father is my husband's sister's father's only son." How is the boy related to the lady?

- (A) Father-in-law
 (B) Husband
 (C) Son (Correct Answer)
 (D) Uncle

Case Study - 3 to 4

2.00

Directions:

Study the following table and answer the questions.

Number of Candidates Appeared and Qualified in a Competitive Examination from different states over the years.

State	X		Y		Z	
	Appeared	Qualified	Appeared	Qualified	Appeared	Qualified
2001	48	37	45	34	53	42
2002	54	42	51	39	59	47
2003	82	73	79	70	87	78
2004	48	42	45	39	53	47
2005	84	62	81	59	89	67

Question No.3

Marks: 1.00

Bookmark

Find the number of candidates who got Qualified from all the states during 2001 and 2003.

- (A) 356
 (B) 341
 (C) 422
 (D) 334 (Correct Answer) (Chosen option)

Question No.4

Marks: 1.00

Bookmark

What is the number of candidates who appeared from State X during the given years?

- (A) 316 (Correct Answer) (Chosen option)
 (B) 341
 (C) 256
 (D) 301

Question No.5

Marks: 1.00

Bookmark

What should be written in the place of question mark in the given series?

B5, C10, ?, H20, L25

- (A) E15 (Correct Answer) (Chosen option)
 (B) D20
 (C) D15
 (D) F15

Question No.6

Marks: 1.00

Bookmark

"Each question given below consists of a statement, followed by two arguments numbered 1 and 2. You have to decide which of the arguments is a 'strong' argument and which is a 'weak' argument.

Give answer:

- (A) If only argument 1 is strong
 (B) If only argument 2 is strong

- (C) If either 1 or 2 is strong
 (D) If neither 1 nor 2 is strong and
 (E) If both 1 and 2 are strong.

Statement: Should the Olympics play on in a pandemic?

Argument:

- Yes, as the prestigious event only occurs once every four years.
- No, conducting these games will facilitate the spread of the virus both domestically and internationally.

- (A) A
 (B) D
 (C) C
 (D) **B (Correct Answer)** (Chosen option)

Question No.7

Marks: 1.00

Bookmark

A boy is standing in a lawn facing North-East direction. If the boy turns 65 degrees in clockwise direction and 155 degrees in anti-clockwise direction, which direction will he face now?

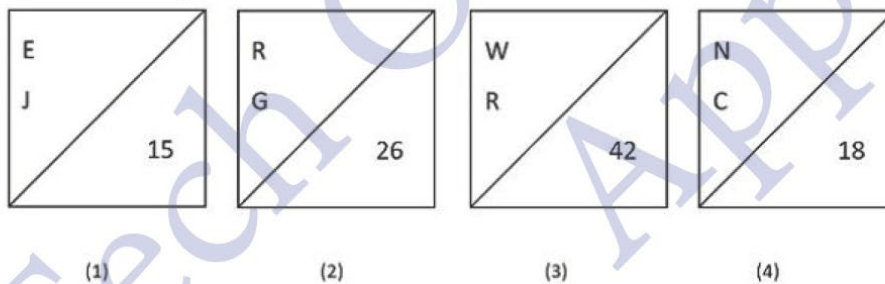
- (A) **North-West (Correct Answer)** (Chosen option)
 (B) North-East
 (C) South-West
 (D) South-East

Question No.8

Marks: 1.00

Bookmark

Find the odd image out in the given series.



- (A) 4
 (B) 3
 (C) **1 (Correct Answer)** (Chosen option)
 (D) 2

Question No.9

Marks: 1.00

Bookmark

Pointing to a girl, a man said, "Her mother is my father's mother's only daughter's only brother's daughter." How is the man related to the girl?

- (A) **Uncle (Correct Answer)**
 (B) Cousin
 (C) Brother
 (D) Father

Question No.10

Marks: 1.00

Bookmark

"Each question given below consists of a statement, followed by two arguments numbered 1 and 2. You have to decide which of the arguments is a 'strong' argument

and which is a 'weak' argument.

Give answer:

- (A) If only argument 1 is strong
- (B) If only argument 2 is strong
- (C) If either 1 or 2 is strong
- (D) If neither 1 nor 2 is strong and
- (E) If both 1 and 2 are strong.

Statement: Should there be a ban on animal testing?

Argument:

1. No, animals are lower species than humans and therefore they have no rights.
2. No, the harm that is committed against animals should not be minimized because they are not considered to be "human."

- (A) B
- (B) **D (Correct Answer)** (Chosen option)
- (C) A
- (D) C

Question No.11

Marks: 1.00

Bookmark

Choose the alternative which is an odd word/number/letter pair out of the given alternatives.

- (A) **Mismanage (Correct Answer)** (Chosen option)
- (B) Control
- (C) Conduct
- (D) Direct

Question No.12

Marks: 1.00

Bookmark

Select the combination of numbers so that letters arranged accordingly will form a meaningful word.

1. E 2. A 3. T 4. D 5. H

- (A) 2, 3, 1, 5, 4
- (B) 2, 4, 3, 1, 5
- (C) **4, 1, 2, 3, 5 (Correct Answer)** (Chosen option)
- (D) 4, 1, 5, 2, 3

Question No.13

Marks: 1.00

Bookmark

Replace the question mark with an option that follows the same logic applied in the first pair

Cease : Finish :: Applaud : ??

- (A) Blame
- (B) **Cheer (Correct Answer)** (Chosen option)
- (C) Criticize
- (D) Discourage

Question No.14

Marks: 1.00

Bookmark

What will be written in the place of question mark in the given series?

A1D4M13S19?8

- (A) G

- (B) J
(C) H (Correct Answer) (Chosen option)
(D) I

Question No.15

Marks: 1.00

Bookmark

Which of the following sets of signs should be used to replace * in the following?

$$13 * 5 * 5 = 5 * 7 * 2$$

- (A) $\times + \times \times$ (Correct Answer) (Chosen option)
(B) $\times - + \div$
(C) $\times + - \times$
(D) $\times \div + \times$

Question No.16

Marks: 1.00

Bookmark

In a school of 180 students, 72 students play cricket, 57 students play football, 64 students play tennis. 15 students play both cricket and football, 12 students play both football and tennis, 16 students play both cricket and tennis. 7 students play all three games.

Find the number of students who play only cricket.

- (A) 48 (Correct Answer)
(B) 55
(C) 57 (Chosen option)
(D) 72

Question No.17

Marks: 1.00

Bookmark

In this question, relationship between different elements is shown in the statement. This statement is followed by two conclusions:

Statements: $O < R \leq A = N < G > E$

Conclusion:

- i) $A > E$
ii) $R \leq N$

Choose the appropriate one from the following options

- (A) Only conclusion i follows
(B) Only conclusion ii follows
(C) Either i or ii follows
(D) Neither i nor ii follows
(E) Both i and ii follow.
(A) D
(B) C
(C) A
(D) B (Correct Answer) (Chosen option)

Question No.18

Marks: 1.00

Bookmark

In the following question, few statements are given and these statements are followed by two conclusions numbered i and ii. You have to take the given statements to be true even if they seem to be at variance from commonly known facts. Read the conclusions and then decide which of the given conclusions logically follows from the given statements, disregarding commonly known facts.

Choose,

- (A) Only (i) conclusion follows
 (B) Only (ii) conclusion follows
 (C) Neither (i) nor (ii) follows
 (D) Both (i) and (ii) follow
 (E) Either (i) or (ii) follows

Statements: Some cats are rats. All rats are rabbits. All cats are bats.

Conclusions:

- i) Some cats are rabbits.
 ii) Some bats are rats.

- (A) C
 (B) A
 (C) D (Chosen option)
 (D) B (Correct Answer)

Question No.19

Marks: 1.00

Bookmark

Choose the alternative which is an odd word/number/letter pair out of the given alternatives.

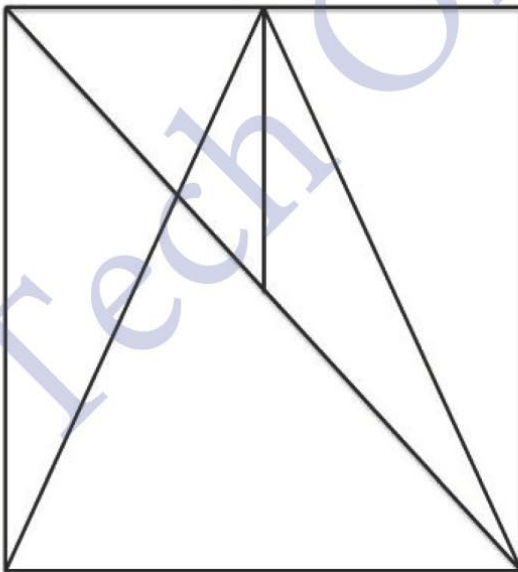
- (A) Warm
 (B) Hot
 (C) Mild
 (D) Cold (Correct Answer) (Chosen option)

Question No.20

Marks: 1.00

Bookmark

How many triangles are there in the given figure?



- (A) 12 (Correct Answer)
 (B) 9
 (C) 10
 (D) 13 (Chosen option)

Question No.21

Marks: 1.00

Bookmark

Replace the question mark with an option that follows the same logic applied in the first pair

QMC : TPF :: ?? : SOM

- (A) QMJ
 (B) PLJ (Correct Answer) (Chosen option)
 (C) QMK
 (D) PLK

Question No.22

Marks: 1.00

Bookmark

In a certain code language, if GUIDE is coded as YKMIH, then how is RAISE coded in that language?

- (A) VEMWI
 (B) EVMIW (Correct Answer) (Chosen option)
 (C) KYOGX
 (D) IZRHV

Question No.23

Marks: 1.00

Bookmark

In this question, relationship between different elements is shown in the statement.

This statement is followed by two conclusions:

Statements: $F < I \leq G = H < T > E \geq R > S$

Conclusion:

- i) $E > S$
 ii) $I < H$

Choose the appropriate one from the following options

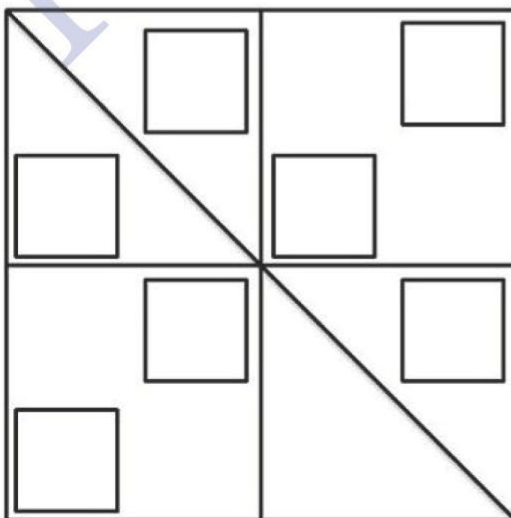
- (A) Only conclusion i follows
 (B) Only conclusion ii follows
 (C) Either i or ii follows
 (D) Neither i nor ii follows
 (E) Both i and ii follow.
 (A) A (Correct Answer) (Chosen option)
 (B) D
 (C) B
 (D) C

Question No.24

Marks: 1.00

Bookmark

How many squares are there in the given figure?



- (A) 9

- (B) 12 (Correct Answer)
(C) 11
(D) 10 (Chosen option)

Question No.25

Marks: 1.00

Bookmark

In a certain code language, if ACTOR is coded as 13201518, then how is DANCE coded in that language?

- (A) 412435
(B) 411435 (Correct Answer) (Chosen option)
(C) 412425
(D) 411425

General Awareness and Current Events - General Awareness and Current Events**Question No.1**

Marks: 1.00

Bookmark

Which of the following cities is located on the banks of river Mahanadi?

- (A) Balasore
(B) Koraput
(C) Bhadrak
(D) Sambalpur (Correct Answer) (Chosen option)

Question No.2

Marks: 1.00

Bookmark

Which of the following countries is geographically located in Asia?

- (A) Mali (Chosen option)
(B) Mexico
(C) Morocco
(D) Israel (Correct Answer)

Question No.3

Marks: 1.00

Bookmark

In 1908, who among the following National leaders was arrested and deported to Burma for six years?

- (A) V. O. Chidambaram Pillai
(B) Surendranath Banerjee
(C) Sri Aurobindo
(D) Bal Gangadhar Tilak (Correct Answer) (Chosen option)

Question No.4

Marks: 1.00

Bookmark

What is the title of Agriculture Policy 2020 of Odisha?

- (A) Samrudhi-2020 (Correct Answer) (Chosen option)
(B) Mo Upakari Bagicha-2020
(C) Balaram-2020
(D) Kalia-2020

Question No.5

Marks: 1.00

Bookmark

Which state has been awarded Ayushmann Utkrishta award 2022 for adding various health facilities to National health facility register?

- (A) Rajasthan
(B) **Uttar Pradesh (Correct Answer)**
(C) Telangana (Chosen option)
(D) Tamil Nadu

Question No.6

Marks: 1.00

Bookmark

Ministry of Labour & Employment has developed eSHRAM portal for creating a National Database of _____.

- (A) Organised Workers
(B) White Collar Workers
(C) Skilled Workers
(D) **Unorganized Workers (Correct Answer)** (Chosen option)

Question No.7

Marks: 1.00

Bookmark

Losar festival is associated with which of the following religions?

- (A) Jainism
(B) **Buddhism (Correct Answer)** (Chosen option)
(C) Hinduism
(D) Sikhism

Question No.8

Marks: 1.00

Bookmark

India signed 'agreement on the Prohibition of Attack against Nuclear Installations and Facilities' with which of the following countries?

- (A) China
(B) Afghanistan
(C) **Pakistan (Correct Answer)**
(D) Sri Lanka (Chosen option)

Question No.9

Marks: 1.00

Bookmark

Which of the following states of India shares its boundaries with Myanmar?

- (A) Sikkim
(B) Meghalaya (Chosen option)
(C) Assam
(D) **Nagaland (Correct Answer)**

Question No.10

Marks: 1.00

Bookmark

'ICRC' is a humanitarian organization based in Geneva, Switzerland. What does "ICRC" stand for?

- (A) **International Committee of the Red Cross (Correct Answer)**
(B) International Council on Reserved Community
(C) International Council for Research and Community (Chosen option)
(D) International Council for River Conservation

Question No.11

Marks: 1.00

Bookmark

In India, the first Five-year Plan was launched in the year:

- (A) 1950
(B) **1951 (Correct Answer)**
(C) 1952 (Chosen option)
(D) 1953

Question No.12

Marks: 1.00

Bookmark

In 1920, soon after the Nagpur Indian National Congress session, the Utkal Union Conference was held at Chakradharpur under the presidentship of:

- (A) Bhagirathi Mahapatra
(B) Gopabandhu Das (Chosen option)
(C) **Jagabandhu Singh (Correct Answer)**
(D) Acharya Prafulla Chandra Roy

Question No.13

Marks: 1.00

Bookmark

Which city is known as 'Diamond city of India'?

- (A) Kanpur
(B) Coimbatore
(C) **Surat (Correct Answer)** (Chosen option)
(D) Ludhiana

Question No.14

Marks: 1.00

Bookmark

Sunil Chhetri is a distinguished player in which of the following sports/games?

- (A) Hockey
(B) Shooting
(C) Badminton
(D) **Football (Correct Answer)** (Chosen option)

Question No.15

Marks: 1.00

Bookmark

Who designates an Officer of the State Government as the District Election Officer in consultation with the State Government?

- (A) Prime Minister of India
(B) President of India
(C) **Election Commission of India (Correct Answer)** (Chosen option)
(D) Union Home Minister

Question No.16

Marks: 1.00

Bookmark

Which delhi sultan introduced 'token' coins in brass and copper?

- (A) Firoz Shah Tughlaq
(B) **Muhammad-bin-Tughlaq (Correct Answer)** (Chosen option)
(C) Iltutmish
(D) Alauddin Khalji

Question No.17

Marks: 1.00

Bookmark

Which country topped in the WIPO's Global Innovation Index 2022?

- (A) Brazil

- (B) **Switzerland (Correct Answer)** (Chosen option)
(C) India
(D) Russia

Question No.18

Marks: 1.00

Bookmark

Who among the following was the founder of Utkal Sammilani?

- (A) **Madhusudan Das (Correct Answer)** (Chosen option)
(B) Biswanath Kar
(C) Babu Janakinath Bose
(D) Dhirendera Nath Choudhury

Question No.19

Marks: 1.00

Bookmark

Zakir Hussain is famous for playing which musical instrument?

- (A) Guitar (Chosen option)
(B) **Tabla (Correct Answer)**
(C) Violin
(D) Flute

Question No.20

Marks: 1.00

Bookmark

How many times was the Preamble of the Indian Constitution amended so far?

- (A) Two
(B) Four
(C) **One (Correct Answer)**
(D) Three (Chosen option)

Question No.21

Marks: 1.00

Bookmark

In India, T-bills are short term debt instruments issued by _____.

- (A) **Government of India (Correct Answer)**
(B) Corporates
(C) Non Banking Financial Company (Chosen option)
(D) Scheduled Commercial Banks

Question No.22

Marks: 1.00

Bookmark

Which of the following temples of Odisha is also known as 'white pagoda'?

- (A) Ananta Vasudeva Temple, Bhubaneswar
(B) **Sri Jagannath Temple, Puri (Correct Answer)** (Chosen option)
(C) Rajarani Temple, Bhubaneswar
(D) Brahmeshwar Temple, Bhubaneswar

Question No.23

Marks: 1.00

Bookmark

Which of the following is an antecedent river?

- (A) River Godavari (Chosen option)
(B) River Kaveri
(C) **River Kosi (Correct Answer)**

(D) River Krishna

Question No.24

Marks: 1.00

Bookmark

The Indian Space Research Organisation is the national space agency of India, headquartered in _____.

- (A) Pune
(B) **Bengaluru (Correct Answer)** (Chosen option)
(C) Kolkata
(D) Chennai

Question No.25

Marks: 1.00

Bookmark

What is the full form of 'CPU', a key component in computer system?

- (A) Control Processing Unit
(B) **Central Processing Unit (Correct Answer)** (Chosen option)
(C) Cache Processing Unit
(D) Connection Processing Unit

Computer and Internet Awareness - Computer and Internet Awareness**Question No.1**

Marks: 1.00

Bookmark

_____ option in Microsoft Word, allows you to easily type in Complex mathematical and scientific formulas.

- (A) Maps
(B) Charts
(C) Textbox (Chosen option)
(D) **Equations (Correct Answer)**

Question No.2

Marks: 1.00

Bookmark

Which of the following lists the headings and their corresponding page numbers?

- (A) **Table of contents (Correct Answer)** (Chosen option)
(B) Master Table
(C) Bibliography
(D) Index

Question No.3

Marks: 1.00

Bookmark

In Microsoft Word, you can enhance the look of an entire document by applying _____.

- (A) **Themes (Correct Answer)**
(B) Watermark
(C) Word art (Chosen option)
(D) Master pages

Question No.4

Marks: 1.00

Bookmark

_____ device can scan items and retrieve instant information at the customers shop for faster checkout.

- (A) **Barcode scanner (Correct Answer)** (Chosen option)



- (B) Biometric scanner
(C) Photo scanner
(D) Retina scanner

Question No.5

Marks: 1.00

Bookmark

Which of the following options in Microsoft Excel can be used to print only a specific area or range of cells on a worksheet?

- (A) Tables
(B) Format painter
(C) Print preview (Chosen option)
(D) **Print Area (Correct Answer)**

Question No.6

Marks: 1.00

Bookmark

Name the application under MS Office software bundle, that we use to create audio-visual presentation.

- (A) MS Access
(B) MS Word
(C) **MS Powerpoint (Correct Answer)** (Chosen option)
(D) MS Excel

Question No.7

Marks: 1.00

Bookmark

The application service that manages the print jobs in windows is _____.

- (A) Device Spooler
(B) Disk Manager (Chosen option)
(C) Print Orientation
(D) **Print Spooler (Correct Answer)**

Question No.8

Marks: 1.00

Bookmark

_____ is the range of cells where the lookup values you want to return by the function are located.

- (A) Col_index
(B) **Table_array (Correct Answer)** (Chosen option)
(C) Range_lookup
(D) Lookup_value

Question No.9

Marks: 1.00

Bookmark

To select the content of the entire Word document you can press _____ key combination.

- (A) Ctrl + S
(B) Ctrl + C
(C) Ctrl + V (Chosen option)
(D) **Ctrl + A (Correct Answer)**

Question No.10

Marks: 1.00

Bookmark

_____ function in Excel is used to remove decimal or fractional part of the number.

- (A) Avg
(B) Sum
(C) Roundup (Chosen option)
(D) **Trunc (Correct Answer)**

Question No.11

Marks: 1.00

Bookmark

Laser, Dot Matrix, Ink Jet, Line are some of the types of:

- (A) Mouse
(B) Plotter (Chosen option)
(C) Speaker
(D) **Printer (Correct Answer)**

Question No.12

Marks: 1.00

Bookmark

_____ Generation Computers were able to reduce computational time from microseconds to nanoseconds.

- (A) **Third (Correct Answer)**
(B) Second
(C) Fourth (Chosen option)
(D) First

Question No.13

Marks: 1.00

Bookmark

An optical storage such as a Compact disk is labelled _____ acronym represents that the disk is erasable and reusable.

- (A) CD-EP
(B) **CD-RW (Correct Answer)**
(C) CD-R (Chosen option)
(D) CD-BW

Question No.14

Marks: 1.00

Bookmark

Background color of a document is not visible in _____.

- (A) Reading view
(B) Web layout (Chosen option)
(C) Print Layout view
(D) **Print preview (Correct Answer)**

Question No.15

Marks: 1.00

Bookmark

The concept of getting the value from a different cell in to the current cell is called _____.

- (A) Cell Styles (Chosen option)
(B) Conditional Formatting
(C) Cell Clear
(D) **Cell Referencing (Correct Answer)**

Question No.16

Marks: 1.00

Bookmark

What is a program in execution called?

- (A) System command
(B) **Process (Correct Answer)**
(C) Entry point
(D) Security provider (Chosen option)

Question No.17

Marks: 1.00

Bookmark

In computers, CAD stands for _____.

- (A) **Computer Aided Design (Correct Answer)**
(B) Computer Assisted Design (Chosen option)
(C) Computer Assisted Diagram
(D) Computer Aided Diagram

Question No.18

Marks: 1.00

Bookmark

_____ is a malware type that consists of a payload and trigger. The payload is triggered when the specific condition is met to infect the computer.

- (A) **Logic Bomb (Correct Answer)**
(B) Denial of Service
(C) Back Door
(D) Trojan Horse (Chosen option)

Question No.19

Marks: 1.00

Bookmark

_____ is a connection from one slide to another or a connection to a web page, or a file.

- (A) **Hyperlink (Correct Answer)** (Chosen option)
(B) Join
(C) Link
(D) WebLink

Question No.20

Marks: 1.00

Bookmark

What will Ctrl+A do in Notepad?

- (A) **Select the entire content of notepad (Correct Answer)**
(B) Copy the selected text
(C) Select a portion of the text (Chosen option)
(D) Cut the selected text

Question No.21

Marks: 1.00

Bookmark

The _____ option under the insert menu in Microsoft Word is used to create basic venn diagrams and organization chart.

- (A) **smart art (Correct Answer)**
(B) store
(C) screen shot (Chosen option)
(D) chart

Question No.22

Marks: 1.00

Bookmark

_____ is RAM that is stored on a Hard disk by extending portion of its available disk

capacity.

- (A) Volatile Memory
- (B) USB Memory (Chosen option)
- (C) Non Volatile Memory
- (D) **Virtual Memory (Correct Answer)**

Question No.23

Marks: 1.00

Bookmark

Safari web browser was developed by:

- (A) Google (Chosen option)
- (B) **Apple (Correct Answer)**
- (C) Linux Corpn
- (D) Microsoft

Question No.24

Marks: 1.00

Bookmark

The computer that shares data and resources to client computers is called _____.

- (A) Scanner
- (B) **Server (Correct Answer)** (Chosen option)
- (C) Service
- (D) Smartphone

Question No.25

Marks: 1.00

Bookmark

The computer network LAN stands for _____.

- (A) **Local Area Network (Correct Answer)** (Chosen option)
- (B) Least Area Network
- (C) Limited Area Network
- (D) Language Area Network