

**OSSC CGL 2022-23**  
**E-BOOK- PDF**  
**7,000 MCQ**  
**EXPLANATION**  
**All Important Questions & Answers**

[Click Here](#)

**MATH - ଓଡ଼ିଶାର**  
**ସମସ୍ତ ପରୀକ୍ଷା ପୂର୍ବ ବର୍ଷ ପ୍ରଶ୍ନ**  
**E-BOOK- PDF**  
**1,800- MCQ**  
**Topic Wise**  
**OPSC, OSSC CGL, OSSSC, Police/Constable, B.ED, CHT, CT, OSSSC (RI, JC, LSI, OFDC, Group C)]**

[Click Here](#)

**ଓଡ଼ିଆ ବ୍ୟାକରଣ PYQ**  
**ସମସ୍ତ ପରୀକ୍ଷା ପୂର୍ବ ବର୍ଷ ପ୍ରଶ୍ନ**  
**E-BOOK- PDF**  
**2,222 MCQ**  
**TEST- 75**  
**OPSC ASO, B.ED, CHT, CT, OAVS, OSSTET, OTET, ODISHA POLICE, OSSSC RI, OSSSC LSI, OSSSC OFDC, OSSSC Group C**

[Click Here](#)

**ENGLISH - ଓଡ଼ିଶାର**  
**ସମସ୍ତ ପରୀକ୍ଷା ପୂର୍ବ ବର୍ଷ ପ୍ରଶ୍ନ**  
**E-BOOK- PDF**  
**3,600- MCQ**  
**Topic Wise**  
**OPSC, OSSC CGL, OSSSC, Police/Constable, B.ED, CHT, OTET, OSSTET CT, OSSSC (RI, JC, LSI, OFDC, Group C)**

[Click Here](#)

**REASONING - ଓଡ଼ିଶାର**  
**ସମସ୍ତ ପରୀକ୍ଷା ପୂର୍ବ ବର୍ଷ ପ୍ରଶ୍ନ**  
**E-BOOK- PDF**  
**2,200- MCQ**  
**Topic Wise**  
**OPSC, OSSC CGL, OSSSC, Police/Constable, B.ED, CHT, OTET, OSSTET CT, OSSSC (RI, JC, LSI, OFDC, Group C)**

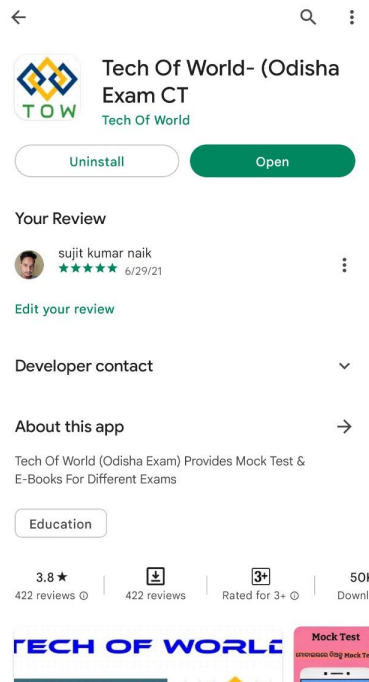
[Click Here](#)

**COMPUTER - ଓଡ଼ିଶାର**  
**ସମସ୍ତ ପରୀକ୍ଷା ପୂର୍ବ ବର୍ଷ ପ୍ରଶ୍ନ**  
**E-BOOK- PDF**  
**1,100- MCQ**  
**Topic Wise**  
**OPSC, OSSC CGL, OSSSC, Police/Constable, CHT, OSSSC (RI, JC, LSI, OFDC, Group C)**

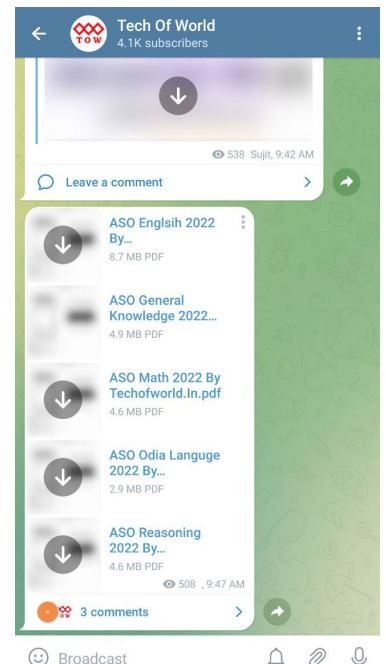
[Click Here](#)



[Click Here](#)



[Click Here](#)



[Click Here](#)

Roll No: Tech Of World App

Registration No: Tech Of World App

Name: Tech Of World App

Exam Date: 04-Nov-2022

Exam Time: 12:15-14:15

Post Name: BSSO 22

Registered Photo

Exam Day Photo

## Arithmetic - Arithmetic

## Question No.1

Marks: 1.00

Bookmark 

A man travels at a speed of 540 kmph and covers a certain distance in 45 minutes. Find the distance covered in metres.

- (A)  415000  
(B)  405000 (Correct Answer) (Chosen option)  
(C)  385000  
(D)  395000

## Question No.2

Marks: 1.00

Bookmark 

What number divides  $\sqrt{0.000529}$  to give the result as 11.5?

- (A)  0.002 (Correct Answer)  
(B)  0.008  
(C)  0.006 (Chosen option)  
(D)  0.004

## Question No.3

Marks: 1.00

Bookmark 

A clock is started at 12 noon. By 780 seconds past 4 p.m, the hour hand has turned through how many degrees?

- (A)  126.5° (Correct Answer) (Chosen option)  
(B)  156.5°  
(C)  136.5°  
(D)  146.5°

## Question No.4

Marks: 1.00

Bookmark 

A basket contain 110 red Jelly chocolates, 117 green Jelly chocolates and 112 blue Jelly chocolates. A Jelly chocolate is drawn at random. What is the probability that the Jelly chocolate drawn is either red or green?

- (A)  217/339  
(B)  247/339  
(C)  237/339  
(D)  227/339 (Correct Answer) (Chosen option)

## Question No.5

Marks: 1.00

Bookmark 

Two dice are thrown simultaneously. What is the probability of getting two numbers whose product is 28?

- (A)  0.7 (Chosen option)



- (B)  0.5  
(C)  1  
(D)  0 (Correct Answer)

**Question No.6**

Marks: 1.00

Bookmark 

Using all the letters of the word 'ACID', how many distinct words can be formed in such a way that the vowels always come together?

- (A)  10 (Chosen option)  
(B)  14  
(C)  12 (Correct Answer)  
(D)  16

**Question No.7**

Marks: 1.00

Bookmark 

Find  $(a+b)$ , given that  $(a-b) = 11$  and  $a^2 - b^2 = 517$ .

- (A)  43  
(B)  47 (Correct Answer) (Chosen option)  
(C)  49  
(D)  45

**Question No.8**

Marks: 1.00

Bookmark 

A is thrice as good as workman as B and therefore is able to finish a job in 190 days less than B. Then A can do it in how many days?

- (A)  97  
(B)  93  
(C)  95 (Correct Answer) (Chosen option)  
(D)  91

**Question No.9**

Marks: 1.00

Bookmark 

If the arithmetic mean of 13 observations 217, 218, 220, 211, 219, 213, 215, X, 211, 219, 220, 214, 218 is 221. Find the value of "X" in the observations.

- (A)  272 (Chosen option)  
(B)  274  
(C)  276  
(D)  278 (Correct Answer)

**Question No.10**

Marks: 1.00

Bookmark 

Find the HCF of two numbers, if the LCM of two number is 429 and its product is 14157.

- (A)  33 (Correct Answer)  
(B)  37 (Chosen option)  
(C)  31  
(D)  35

**Question No.11**

Marks: 1.00

Bookmark 

Find the radius of the circle whose area is  $30625\pi$ . (In cm)

- (A)  155



- (B)  175 (Correct Answer) (Chosen option)  
 (C)  145  
 (D)  165

**Question No.12**Marks:  
1.00Bookmark **Directions:**

Study the following data carefully and answer the question that follows.

Details mentioned are for the state qualifying exam conducted by respective states A, B, C and their qualified percentage.

Find the number of candidates from state C who are not qualified during the years 2016, 2018 and 2020.

Year	A		B		C	
	Appeared	Qualified(%)	Appeared	Qualified(%)	Appeared	Qualified(%)
2016	270	60	300	80	285	60
2017	350	60	380	60	365	80
2018	330	80	360	60	345	60
2019	450	80	480	80	465	80
2020	520	60	550	60	535	60

- (A)  496  
 (B)  466 (Correct Answer)  
 (C)  486 (Chosen option)  
 (D)  476

**Question No.13**

Marks: 1.00

Bookmark 

In how many ways can the letters of the word 'EDITOR' be rearranged such that the vowels occupy even places?

- (A)  40 (Chosen option)  
 (B)  36 (Correct Answer)  
 (C)  38  
 (D)  34

**Question No.14**

Marks: 1.00

Bookmark 

The ratio of two numbers is 6:7 and their sum is 741. Find the greater of the two numbers.

- (A)  399 (Correct Answer)  
 (B)  379  
 (C)  389 (Chosen option)  
 (D)  369

**Question No.15**

Marks: 1.00

Bookmark 

A dealer bought a washing machine for Rs.18500 and sold at a gain of 25%. Find its selling price. (In Rs.)

- (A)  23325  
 (B)  23225  
 (C)  23425  
 (D)  23125 (Correct Answer) (Chosen option)

## Question No.16

Marks: 1.00

Bookmark 

At the end of three years, what will be the amount invested under compound interest at the rate of 10% p.a. on a principal of Rs.32000? (In Rs.)

- (A)  43592 (Chosen option)  
(B)  44592  
(C)  42592 (Correct Answer)  
(D)  41592

## Question No.17

Marks: 1.00

Bookmark 

A and B can do a work in 390 days, B and C can do it in 130 days, A and C can do it in 65 days. In what time A, B and C together can do the work? (In days)

- (A)  78 (Correct Answer) (Chosen option)  
(B)  76  
(C)  74  
(D)  72

## Question No.18

Marks: 1.00

Bookmark 

When 1.72 is written in the simplest form, the sum of the numerator and the denominator is:

- (A)  70  
(B)  68 (Correct Answer) (Chosen option)  
(C)  66  
(D)  64

## Question No.19

Marks: 1.00

Bookmark 

Tap A can fill a cistern in 212 hours while tap B can empty it in 318 hours. In how many hours the cistern will be filled if both A and B are opened together?

- (A)  634  
(B)  636 (Correct Answer) (Chosen option)  
(C)  640  
(D)  638

## Question No.20

Marks: 1.00

Bookmark 

Z1 express and X1 Express are two trains of 735 m and 705 m long, run at the rate of 167 km/h and 157 km/h respectively on parallel rails. How many seconds will it take for the second train to pass the first train if they run in the opposite direction?

- (A)  22  
(B)  20 (Chosen option)  
(C)  18  
(D)  16 (Correct Answer)

## Question No.21

Marks: 1.00

Bookmark 

Find the amount on Rs.7600 for 2 years at 10% per annum, compounded annually. (In Rs.)

- (A)  9496

- (B)  9296 (Chosen option)  
(C)  9196 (Correct Answer)  
(D)  9396

**Question No.22**

Marks: 1.00

Bookmark 

What value should come in the place of question mark (?) in the following question?  
 $391 \div 17 + 675 \div 15 = ?$

- (A)  68 (Correct Answer) (Chosen option)  
(B)  62  
(C)  66  
(D)  64

**Question No.23**

Marks: 1.00

Bookmark 

At present, the ratio between the ages of A and B is 5:4. After 7 years, A's age will be 32 years. What is the present age of B? (In years)

- (A)  22  
(B)  24  
(C)  26 (Chosen option)  
(D)  20 (Correct Answer)

**Question No.24**

Marks: 1.00

Bookmark 

Find the greatest three digit number which is divisible by 13, 39 and 52.

- (A)  956  
(B)  946  
(C)  936 (Correct Answer) (Chosen option)  
(D)  966

**Question No.25**

Marks: 1.00

Bookmark 

What will come in place of question mark(?) in the following equation?  
 $1391.58 - 665.31 = 1267.84 - ?$

- (A)  547.57 (Chosen option)  
(B)  545.57  
(C)  543.57  
(D)  541.57 (Correct Answer)

**Analytical and Reasoning Ability - Analytical and Reasoning Ability****Question No.1**

Marks: 1.00

Bookmark 

In a test in which 150 students appeared, 57 passed in Science, 49 passed in Maths and 77 passed in English. 104 students passed in only one subject and 32 students only in two. 9 students failed in all subjects.

Find the number of students who passed in at least two subjects.

- (A)  40  
(B)  35  
(C)  37 (Correct Answer) (Chosen option)  
(D)  45

## Question No.2

Marks: 1.00

Bookmark 

Choose the alternative which is an odd word/number/letter pair out of the given alternatives.

- (A)  **Join (Correct Answer)** (Chosen option)  
(B)  Break  
(C)  Crack  
(D)  Split

## Question No.3

Marks: 1.00

Bookmark 

Replace the question mark with an option that follows the same logic applied in the first pair

Vague : Unclear :: Essential : ??

- (A)  Minor  
(B)  **Important (Correct Answer)** (Chosen option)  
(C)  Extra  
(D)  Needless

## Question No.4

Marks: 1.00

Bookmark 

Replace the question mark with an option that follows the same logic applied in the first pair

MO : QS :: UC : ??

- (A)  XH  
(B)  XG  
(C)  **YG (Correct Answer)** (Chosen option)  
(D)  YH

## Question No.5

Marks: 1.00

Bookmark 

"Each question given below consists of a statement, followed by two arguments numbered 1 and 2. You have to decide which of the arguments is a 'strong' argument and which is a 'weak' argument.

Give answer:

- (A) If only argument1 is strong  
(B) If only argument 2 is strong  
(C) If either 1 or 2 is strong  
(D) If neither 1 nor 2 is strong and  
(E) If both 1 and 2 are strong.

**Statement:** Should there be a ban on animal testing?

**Argument:**

1. Yes, making humans' lives better should not be justification for torturing and exploiting animals.  
2. Yes, the value that humans place on their own lives should be extended to the lives of animals as well.

- (A)  C  
(B)  B  
(C)  **E (Correct Answer)** (Chosen option)  
(D)  A



Bookmark 

A boy is standing in a lawn facing North direction. If the boy turns 65 degrees in clockwise direction and 155 degrees in anti-clockwise direction, which direction will he face now?

- (A)  South  
(B)  North  
(C)  East  
(D)  **West (Correct Answer)** (Chosen option)

**Question No.7**

Marks: 1.00

Bookmark 

In a certain code language, if ACTOR is coded as DFWRU, then how is DANCE coded in that language?

- (A)  **GDQFH (Correct Answer)** (Chosen option)  
(B)  IGREH  
(C)  DGQHF  
(D)  WZMXV

**Question No.8**

Marks: 1.00

Bookmark 

In this question, relationship between different elements is shown in the statement. This statement is followed by two conclusions:

**Statements:**  $S < A \leq N < D = W > I \geq C > H$

**Conclusion:**

- i)  $S < N$   
ii)  $D \geq A$

Choose the appropriate one from the following options

- (A) Only conclusion i follows  
(B) Only conclusion ii follows  
(C) Either i or ii follows  
(D) Neither i nor ii follows  
(E) Both i and ii follow.  
(A)  D  
(B)  C  
(C)  **A (Correct Answer)** (Chosen option)  
(D)  B

**Case Study - 9 to 10**

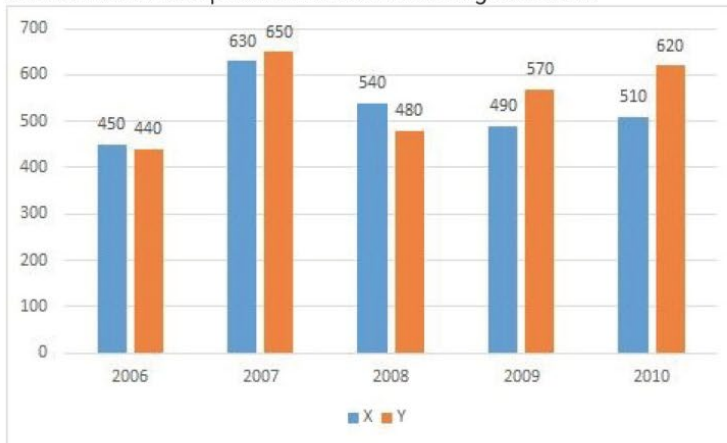
2.00

**Directions:**

In the given figure number of mobiles prepared by two different companies is given from 2006 to



2010. Answer the questions based on the figure below.



**Question No.9**

Marks: 1.00

Bookmark

For all the given years in the figure, what is the total number of mobiles made by both the companies?

- (A)  **5380 (Correct Answer)** (Chosen option)  
 (B)  2620  
 (C)  5490  
 (D)  2760

**Question No.10**

Marks: 1.00

Bookmark

For all the given years in the figure, find how many years X has prepared more mobiles than Y.

- (A)  **2 (Correct Answer)**  
 (B)  4  
 (C)  3 (Chosen option)  
 (D)  5

**Question No.11**

Marks: 1.00

Bookmark

Pointing to a lady, a woman said, " She is the daughter-in-law of wife of my husband's father." How is the lady related to the woman's husband?

- (A)  Mother  
 (B)  Aunt  
 (C)  **Sister-in-law (Correct Answer)** (Chosen option)  
 (D)  Cousin

**Question No.12**

Marks: 1.00

Bookmark

Pointing to a girl, a man said, "She is my maternal grandmother's son's only sister's daughter's daughter." How is the girl related to the man?

- (A)  Daughter  
 (B)  Cousin (Chosen option)  
 (C)  Granddaughter  
 (D)  **Niece (Correct Answer)**

**Question No.13**

Marks: 1.00

Bookmark 

In a certain code language, if GUIDE is coded as TFRWV, then how is RAISE coded in that language?

- (A)  IZRHV (Correct Answer)  
(B)  KYOGX  
(C)  VEMWI  
(D)  EVMIW (Chosen option)

**Question No.14**

Marks: 1.00

Bookmark 

In the following question, few statements are given and these statements are followed by two conclusions numbered i and ii. You have to take the given statements to be true even if they seem to be at variance from commonly known facts. Read the conclusions and then decide which of the given conclusions logically follows from the given statements, disregarding commonly known facts.

Choose,

- (A) Only (i) conclusion follows  
(B) Only (ii) conclusion follows  
(C) Neither (i) nor (ii) follows  
(D) Both (i) and (ii) follow  
(E) Either (i) or (ii) follows

**Statements:** All lions are tigers. Some tigers are goats. No goat is animal.

**Conclusions:**

- i) Some lions are goats.  
ii) No lion is animal.

- (A)  D (Chosen option)  
(B)  A  
(C)  C (Correct Answer)  
(D)  B

**Question No.15**

Marks: 1.00

Bookmark 

Which of the following sets of signs should be used to replace \* in the following?

$$35 * 2 * 5 = 2 * 4 * 3$$

- (A)   $\times \div + \times$  (Correct Answer)  
(B)   $\times - + \div$  (Chosen option)  
(C)   $\times + \times \times$   
(D)   $\times + - \times$

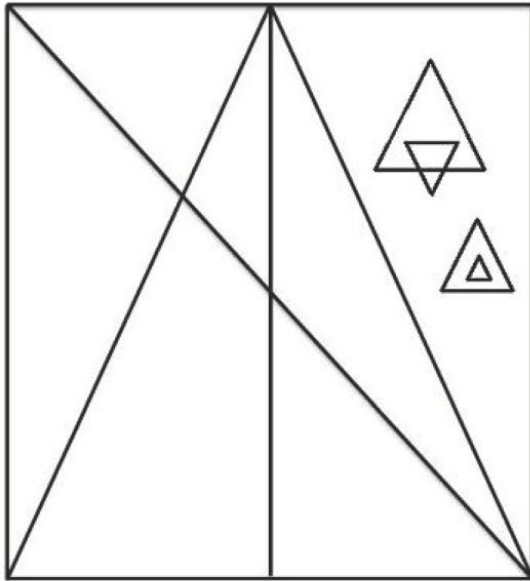
**Question No.16**

Marks: 1.00

Bookmark 

How many triangles are there in the given figure?





- (A)  19  
 (B)  13  
 (C)  17 (Chosen option)  
 (D)  20 (Correct Answer)

## Question No.17

Marks: 1.00

Bookmark 

What will be written in the place of question mark in the given series?

B2Y25O15D4?7

- (A)  I  
 (B)  G (Correct Answer)  
 (C)  J (Chosen option)  
 (D)  H

## Question No.18

Marks: 1.00

Bookmark 

"Each question given below consists of a statement, followed by two arguments numbered 1 and 2. You have to decide which of the arguments is a 'strong' argument and which is a 'weak' argument.

Give answer:

- (A) If only argument 1 is strong  
 (B) If only argument 2 is strong  
 (C) If either 1 or 2 is strong  
 (D) If neither 1 nor 2 is strong and  
 (E) If both 1 and 2 are strong.

**Statement:** Should there be stronger limits on immigration?

**Argument:**

1. Yes, immigrants are more ambitious than native workers.  
 2. Yes, immigrants have higher possibility of committing crimes.

- (A)  B  
 (B)  A  
 (C)  C (Chosen option)  
 (D)  D (Correct Answer)

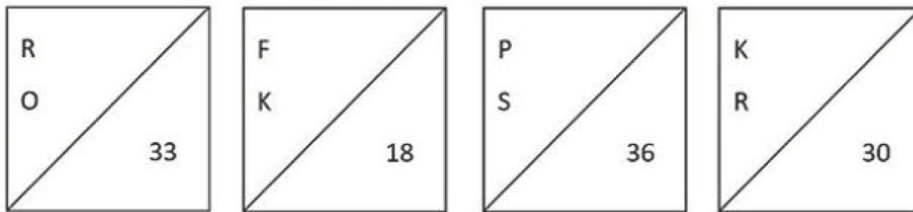


## Question No.19

Marks: 1.00

Bookmark 

Find the odd image out in the given series.



(1)

(2)

(3)

(4)

- (A)  4  
 (B)  2 (Chosen option)  
 (C)  1 (Correct Answer)  
 (D)  3

## Question No.20

Marks: 1.00

Bookmark 

In this question, relationship between different elements is shown in the statement.  
 This statement is followed by two conclusions:

Statements:  $D > O \geq N < A \leq T = E$ 

Conclusion:

- i)  $D > N$   
 ii)  $O \leq T$

Choose the appropriate one from the following options

- (A) Only conclusion i follows  
 (B) Only conclusion ii follows  
 (C) Either i or ii follows  
 (D) Neither i nor ii follows  
 (E) Both i and ii follow.  
 (A)  C  
 (B)  B (Chosen option)  
 (C)  A (Correct Answer)  
 (D)  D

## Question No.21

Marks: 1.00

Bookmark 

What should be written in the place of question mark in the given series?

E11, H13, ?, N19, Q23

- (A)  K15  
 (B)  K17 (Correct Answer) (Chosen option)  
 (C)  L17  
 (D)  J15

## Question No.22

Marks: 1.00

Bookmark 

If + means  $\div$ ,  $\times$  means +,  $\div$  means - & - means  $\times$ , then,  
 $82 - 3 \div 98 \times 2 \times 18 + 2 = ?$

- (A)  173  
 (B)  167 (Chosen option)  
 (C)  159 (Correct Answer)

(D)  146

**Question No.23**

Marks: 1.00

Bookmark

Choose the alternative which is an odd word/number/letter pair out of the given alternatives.

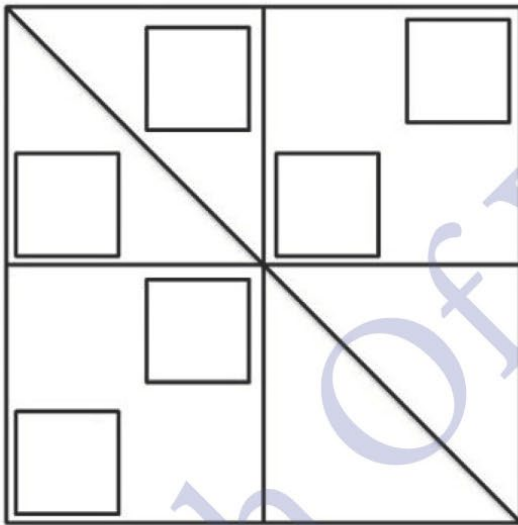
- (A)  **Warm (Correct Answer)** (Chosen option)  
(B)  Cool  
(C)  Chill  
(D)  icy

**Question No.24**

Marks: 1.00

Bookmark

How many squares are there in the given figure?



- (A)  9  
(B)  12  
(C)  10 (Chosen option)  
(D)  **11 (Correct Answer)**

**Question No.25**

Marks: 1.00

Bookmark

Select the combination of numbers so that letters arranged accordingly will form a meaningful word.

1. N 2. E 3. L 4. A 5. G

- (A)  2, 4, 3, 1, 5  
(B)  4, 1, 2, 3, 5  
(C)  **4, 1, 5, 2, 3 (Correct Answer)** (Chosen option)  
(D)  2, 3, 1, 5, 4

**General Awareness and Current Events - General Awareness and Current Events**

**Question No.1**

Marks: 1.00

Bookmark

Havana is the capital city of which of the following countries?

- (A)  Finland  
(B)  **Cuba (Correct Answer)**

- (C)  Germany  
(D)  Ghana (Chosen option)

**Question No.2**

Marks: 1.00

Bookmark 

Which of the following temples in Odisha has no presiding deity?

- (A)  Brahmeshwar Temple, Bhubaneswar (Chosen option)  
(B)  Ananta Vasudeva Temple, Bhubaneswar  
(C)  **Rajarani Temple, Bhubaneswar (Correct Answer)**  
(D)  Lingaraja temple, Bhubaneswar

**Question No.3**

Marks: 1.00

Bookmark 

What is the name of India's indigenously built Light Combat Helicopter?

- (A)  Nag  
(B)  Trishul (Chosen option)  
(C)  **Prachand (Correct Answer)**  
(D)  Agni

**Question No.4**

Marks: 1.00

Bookmark 

The Slave dynasty was succeeded by a new dynasty of kings in Delhi Sultanate in 1290 called:

- (A)  **Khaljis (Correct Answer)** (Chosen option)  
(B)  Mamluks  
(C)  Tughlaqs  
(D)  Lodis

**Question No.5**

Marks: 1.00

Bookmark 

Which of the following Sectors is the largest contributor to Odisha's GSDP in FY 2021-22?

- (A)  Construction Sector  
(B)  Industry Sector  
(C)  **Service Sector (Correct Answer)**  
(D)  Agriculture & allied sector (Chosen option)

**Question No.6**

Marks: 1.00

Bookmark 

Who among the following is known as 'Nightingale of India'?

- (A)  Lata Mangeshkar  
(B)  **Sarojini Naidu (Correct Answer)** (Chosen option)  
(C)  Vijaya Lakshmi Pandit  
(D)  Sarla Behn

**Question No.7**

Marks: 1.00

Bookmark 

In which session of the Indian National Congress was the resolution of "Purna Swaraj" adopted?

- (A)  Calcutta Session, 1928  
(B)  Bombay Session, 1934



- (C)  Surat Session, 1907  
(D)  **Lahore Session, 1929 (Correct Answer)** (Chosen option)

**Question No.8**

Marks: 1.00

Bookmark 

Which country is hosting the ICC Men's T20 World Cup 2022?

- (A)  England  
(B)  **Australia (Correct Answer)** (Chosen option)  
(C)  South Africa  
(D)  India

**Question No.9**

Marks: 1.00

Bookmark 

What is the full form of "ISRO", a national space agency of India?

- (A)  Indian Space for Revenue Organization  
(B)  Indian Satellite Research Organization  
(C)  Indian Spatial Research Organization  
(D)  **Indian Space Research Organization (Correct Answer)** (Chosen option)

**Question No.10**

Marks: 1.00

Bookmark 

Which of the following is the World's Largest Mangrove Forest?

- (A)  **Sundarbans (Correct Answer)** (Chosen option)  
(B)  Pichavaram  
(C)  Vembanad  
(D)  Bhitarkanika

**Question No.11**

Marks: 1.00

Bookmark 

BIMSTEC - a regional organization came into being after \_\_\_\_\_

- (A)  **Bangkok Declaration (Correct Answer)**  
(B)  Geneva Declaration  
(C)  Kyoto Declaration (Chosen option)  
(D)  Helsinki Declaration

**Question No.12**

Marks: 1.00

Bookmark 

Who was the first Chairman of the Planning Commission in India?

- (A)  **Jawaharlal Nehru (Correct Answer)** (Chosen option)  
(B)  Indira Gandhi  
(C)  Subash Chandra Bose  
(D)  Morarji Desai

**Question No.13**

Marks: 1.00

Bookmark 

If unemployment continues to be a long-term feature of a country, it is called:

- (A)  Structural Unemployment (Chosen option)  
(B)  Casual Unemployment  
(C)  Disguised Unemployment  
(D)  **Chronic Unemployment (Correct Answer)**

<p><b>Question No.14</b></p> <p>Marks: 1.00 Bookmark <input type="checkbox"/></p> <p>In 1836, the British government opened the first English School in Odisha at which of the following places?</p> <p>(A) <input type="radio"/> Bhadrak (B) <input type="radio"/> Bhubaneswar (C) <input type="radio"/> Balasore (Chosen option) (D) <input checked="" type="radio"/> Puri (Correct Answer)</p>
<p><b>Question No.15</b></p> <p>Marks: 1.00 Bookmark <input type="checkbox"/></p> <p>Pangsau Pass connects Arunachal Pradesh in India with which of the following countries?</p> <p>(A) <input type="radio"/> Pakistan (B) <input checked="" type="radio"/> Myanmar (Correct Answer) (C) <input type="radio"/> Bangladesh (D) <input type="radio"/> China (Chosen option)</p>
<p><b>Question No.16</b></p> <p>Marks: 1.00 Bookmark <input type="checkbox"/></p> <p>What is the full form of "CRR" in economics?</p> <p>(A) <input type="radio"/> Cash Return Ratio (B) <input checked="" type="radio"/> Cash Reserve Ratio (Correct Answer) (Chosen option) (C) <input type="radio"/> Cash Rating Ratio (D) <input type="radio"/> Cash Risk Reserve</p>
<p><b>Question No.17</b></p> <p>Marks: 1.00 Bookmark <input type="checkbox"/></p> <p>ATMs set up, owned and operated by non-banks are called:</p> <p>(A) <input checked="" type="radio"/> White Label ATMs (Correct Answer) (B) <input type="radio"/> Orange Label ATMs (C) <input type="radio"/> Brown Label ATMs (D) <input type="radio"/> Yellow Label ATMs (Chosen option)</p>
<p><b>Question No.18</b></p> <p>Marks: 1.00 Bookmark <input type="checkbox"/></p> <p>Srinagar, the capital city of Jammu and Kashmir is located on the banks of which river?</p> <p>(A) <input checked="" type="radio"/> River Jhelum (Correct Answer) (Chosen option) (B) <input type="radio"/> River Ravi (C) <input type="radio"/> River Beas (D) <input type="radio"/> River Sutlej</p>
<p><b>Question No.19</b></p> <p>Marks: 1.00 Bookmark <input type="checkbox"/></p> <p>Bihar shares its boundary with which of the following countries?</p> <p>(A) <input checked="" type="radio"/> Nepal (Correct Answer) (Chosen option) (B) <input type="radio"/> China (C) <input type="radio"/> Bhutan (D) <input type="radio"/> Bangladesh</p>

<p><b>Question No.20</b></p> <p>At present, how many languages are there in the Eighth Schedule of the Indian Constitution?</p> <p>(A) <input type="radio"/> Fifteen</p> <p>(B) <input type="radio"/> Sixteen</p> <p>(C) <input type="radio"/> <b>Twenty Two (Correct Answer)</b> (Chosen option)</p> <p>(D) <input type="radio"/> Seventeen</p>	<p>Marks: 1.00</p> <p>Bookmark <input type="checkbox"/></p>
<p><b>Question No.21</b></p> <p>Who among the following was the second disciple of Mahima Gosain?</p> <p>(A) <input type="radio"/> <b>Bhima Bhoi (Correct Answer)</b> (Chosen option)</p> <p>(B) <input type="radio"/> Bhagirathi Bhramarbar Bahadur</p> <p>(C) <input type="radio"/> Sarala Dasa</p> <p>(D) <input type="radio"/> Govinda Das</p>	<p>Marks: 1.00</p> <p>Bookmark <input type="checkbox"/></p>
<p><b>Question No.22</b></p> <p>Which of the following rivers originates from the Sinkaran hills of the eastern Ghats in Koraput district?</p> <p>(A) <input type="radio"/> <b>Kolab (Correct Answer)</b> (Chosen option)</p> <p>(B) <input type="radio"/> Salandi</p> <p>(C) <input type="radio"/> Banshadhara</p> <p>(D) <input type="radio"/> Indravati</p>	<p>Marks: 1.00</p> <p>Bookmark <input type="checkbox"/></p>
<p><b>Question No.23</b></p> <p>Warli Painting is originated in which of the following States of India?</p> <p>(A) <input type="radio"/> Jharkhand</p> <p>(B) <input type="radio"/> Uttar Pradesh</p> <p>(C) <input type="radio"/> Tamil Nadu (Chosen option)</p> <p>(D) <input type="radio"/> <b>Maharashtra (Correct Answer)</b></p>	<p>Marks: 1.00</p> <p>Bookmark <input type="checkbox"/></p>
<p><b>Question No.24</b></p> <p>The famous Russian sportsperson Maria Sharapova is related to which of the following sports/games?</p> <p>(A) <input type="radio"/> <b>Tennis (Correct Answer)</b></p> <p>(B) <input type="radio"/> Badminton (Chosen option)</p> <p>(C) <input type="radio"/> Chess</p> <p>(D) <input type="radio"/> Wrestling</p>	<p>Marks: 1.00</p> <p>Bookmark <input type="checkbox"/></p>
<p><b>Question No.25</b></p> <p>Under whose Chairmanship the 'Commission on Centre-State Relations' was appointed in 1983?</p> <p>(A) <input type="radio"/> Morarji Desai (Chosen option)</p> <p>(B) <input type="radio"/> Dr.P.V. Rajamannar</p> <p>(C) <input type="radio"/> <b>R.S. Sarkaria (Correct Answer)</b></p> <p>(D) <input type="radio"/> M.M. Punchhi</p>	<p>Marks: 1.00</p> <p>Bookmark <input type="checkbox"/></p>



## Computer and Internet Awareness - Computer and Internet Awareness

## Question No.1

Marks: 1.00

Bookmark 

\_\_\_\_\_ group under the Home tab in Microsoft Powerpoint allows you to select a theme and layout for a slide, reset a slide or delete a slide.

- (A)  Editing  
(B)  **Slides (Correct Answer)** (Chosen option)  
(C)  Drawing  
(D)  Paragraph

## Question No.2

Marks: 1.00

Bookmark 

A \_\_\_\_\_ is a short length of conductor that is used to close, open or bypass part of an electronic circuit in a Mother board.

- (A)  Usb  
(B)  Heatsink (Chosen option)  
(C)  CMOS  
(D)  **Jumper (Correct Answer)**

## Question No.3

Marks: 1.00

Bookmark 

\_\_\_\_\_ option in Microsoft Word can be used to apply uniform formatting of text and headings across the document.

- (A)  **Themes (Correct Answer)**  
(B)  Wordart (Chosen option)  
(C)  Table of contents  
(D)  Clipart

## Question No.4

Marks: 1.00

Bookmark 

\_\_\_\_\_ represent data by varying the widths and spacing of parallel lines, which can be scanned to obtain the information within.

- (A)  Magnetic tapes  
(B)  ASCII codes  
(C)  OCRs  
(D)  **Bar codes (Correct Answer)** (Chosen option)

## Question No.5

Marks: 1.00

Bookmark 

In Powerpoint, which of the following views displays the slides of the presentation that are displayed as thumbnails so that you can easily reorganize them and apply transitions and timings?

- (A)  **Slide sorter (Correct Answer)**  
(B)  Reading view  
(C)  Review view (Chosen option)  
(D)  Slide show

## Question No.6

Marks: 1.00

Bookmark 

Which is the section of document that appears in the top margin?

- (A)  **Header (Correct Answer)** (Chosen option)

- (B)  Footer  
(C)  Foot area  
(D)  Head area

**Question No.7**

Marks: 1.00

Bookmark 

Which of the following features of MS Excel allows us to give different color shades for the cells based on their values?

- (A)  **Conditional Formatting (Correct Answer)** (Chosen option)  
(B)  Sort  
(C)  Forecast  
(D)  Filter

**Question No.8**

Marks: 1.00

Bookmark 

\_\_\_\_\_ was the first personal computer with a graphical user interface.

- (A)  IBM Image (Chosen option)  
(B)  **Apple's LISA (Correct Answer)**  
(C)  Microsoft DOS  
(D)  AT&T GUI

**Question No.9**

Marks: 1.00

Bookmark 

In standard keyboard the keys Alt, Shift and Ctrl are called as \_\_\_\_\_.

- (A)  **Special purpose keys (Correct Answer)**  
(B)  Numeric keys  
(C)  Navigation keys (Chosen option)  
(D)  Function keys

**Question No.10**

Marks: 1.00

Bookmark 

\_\_\_\_\_ is a non-volatile primary memory.

- (A)  Magnetic Disk  
(B)  RAM  
(C)  **ROM (Correct Answer)** (Chosen option)  
(D)  CD-ROM

**Question No.11**

Marks: 1.00

Bookmark 

The \_\_\_\_\_ feature of Microsoft Word helps you to create professional formats.

- (A)  Gallery  
(B)  mail merge  
(C)  **Template (Correct Answer)** (Chosen option)  
(D)  formatting tools

**Question No.12**

Marks: 1.00

Bookmark 

\_\_\_\_\_ feature in Microsoft Excel automatically adjusts the cell reference when the formula is copied and pasted into the rest of the cell.

- (A)  Consistent reference (Chosen option)  
(B)  **Relative reference (Correct Answer)**

- (C)  Absolute reference  
(D)  Linked reference

**Question No.13**

Marks: 1.00

Bookmark 

In MS Excel, the combination of Row number and Column alphabet is called \_\_\_\_\_.

- (A)  **cell address (Correct Answer)** (Chosen option)  
(B)  cell  
(C)  row address  
(D)  column address

**Question No.14**

Marks: 1.00

Bookmark 

Internet Explorer stores cached pages in a folder called \_\_\_\_\_.

- (A)  Cookie (Chosen option)  
(B)  Personal  
(C)  File Allocation Table  
(D)  **Temporary Internet Files (Correct Answer)**

**Question No.15**

Marks: 1.00

Bookmark 

In Microsoft Word, which of the following menus is used to add Headings that are displayed automatically in the top margin of all pages?

- (A)  Format Menu  
(B)  **Insert Menu (Correct Answer)** (Chosen option)  
(C)  View Menu  
(D)  Tools Menu

**Question No.16**

Marks: 1.00

Bookmark 

How many rows are available per sheet in Microsoft Excel 2010?

- (A)  **1048576 (Correct Answer)** (Chosen option)  
(B)  1048575  
(C)  1049576  
(D)  1048676

**Question No.17**

Marks: 1.00

Bookmark 

The software or application that you download for windows will have \_\_\_\_\_ file extension.

- (A)  .apk (Chosen option)  
(B)  **.exe (Correct Answer)**  
(C)  .rtf  
(D)  .txt

**Question No.18**

Marks: 1.00

Bookmark 

In computer technology, the term AR stands for \_\_\_\_\_.

- (A)  Artificial Reality  
(B)  Artificial Resemblances (Chosen option)  
(C)  **Augmented Reality (Correct Answer)**



(D)  Augmented Realization

**Question No.19**

Marks: 1.00

Bookmark 

What is the shortcut key used to Superscript in MS-Word?

- (A)  **Ctrl + Shift + Plus sign (Correct Answer)** (Chosen option)  
(B)  Ctrl + Shift + R  
(C)  Ctrl + Shift + B  
(D)  Ctrl + Shift + Equal sign

**Question No.20**

Marks: 1.00

Bookmark 

The windows file system NTFS stands for \_\_\_\_\_.

- (A)  Network Technology File System (Chosen option)  
(B)  New Technology Firewall System  
(C)  New Treading File System  
(D)  **New Technology File System (Correct Answer)**

**Question No.21**

Marks: 1.00

Bookmark 

To open a new document you can press \_\_\_\_\_ key combination.

- (A)  Ctrl + D  
(B)  **Ctrl + N (Correct Answer)** (Chosen option)  
(C)  Shift + N  
(D)  Tab + N

**Question No.22**

Marks: 1.00

Bookmark 

\_\_\_\_\_ is any mechanism which bypasses a normal security check or encryption in a computer.

- (A)  Trojan Horse (Chosen option)  
(B)  Virus  
(C)  Logic bomb  
(D)  **Backdoor (Correct Answer)**

**Question No.23**

Marks: 1.00

Bookmark 

After finishing your edits on a document you need to perform \_\_\_\_\_ action to make the changes permanent.

- (A)  Close  
(B)  **Save (Correct Answer)** (Chosen option)  
(C)  Minimize  
(D)  Open

**Question No.24**

Marks: 1.00

Bookmark 

The computer initial diagnostic test POST stands for \_\_\_\_\_.

- (A)  Power On System Tracking (Chosen option)  
(B)  Preparation On System Testing  
(C)  **Power On Self Test (Correct Answer)**  
(D)  Portable On Switch Test

**Question No.25**

Marks: 1.00

Bookmark

Multiple processes that access and manipulate the same data concurrently, in the order of process execution is \_\_\_\_\_.

- (A)  Order Condition
- (B)  Preemptive condition
- (C)  Queue condition (Chosen option)
- (D)  **Race condition (Correct Answer)**

