



OSSC CGL 2022-23
E-BOOK- PDF
7,000 MCQ
EXPLANATION



All Important Questions & Answers

[Click Here](#)


MATH - ଓଡ଼ିଶାର
ସମସ୍ତ ପରୀକ୍ଷା ପୂର୍ବ ବର୍ଷ ପ୍ରଶ୍ନ
E-BOOK- PDF
1,800- MCQ
Topic Wise



OPSC, OSSC CGL, OSSSC, Police/Constable, B.ED, CHT, CT, OSSSC (RI, JC, LSI, OFDC, Group C)]

[Click Here](#)


ଓଡ଼ିଆ ବ୍ୟାକରଣ PYQ
ସମସ୍ତ ପରୀକ୍ଷା ପୂର୍ବ ବର୍ଷ ପ୍ରଶ୍ନ
E-BOOK- PDF
2,222 MCQ
TEST- 75



OPSC ASO, B.ED, CHT, CT, OAVS, OSSTET, OTET, ODISHA POLICE, OSSSC RI, OSSSC LSI, OSSSC OFDC, OSSSC Group C

[Click Here](#)


ENGLISH - ଓଡ଼ିଶାର
ସମସ୍ତ ପରୀକ୍ଷା ପୂର୍ବ ବର୍ଷ ପ୍ରଶ୍ନ
E-BOOK- PDF
3,600- MCQ
Topic Wise



OPSC, OSSC CGL, OSSSC, Police/Constable, B.ED, CHT, OTET, OSSTET CT, OSSSC (RI, JC, LSI, OFDC, Group C)

[Click Here](#)


REASONING - ଓଡ଼ିଶାର
ସମସ୍ତ ପରୀକ୍ଷା ପୂର୍ବ ବର୍ଷ ପ୍ରଶ୍ନ
E-BOOK- PDF
2,200- MCQ
Topic Wise



OPSC, OSSC CGL, OSSSC, Police/Constable, B.ED, CHT, OTET, OSSTET CT, OSSSC (RI, JC, LSI, OFDC, Group C)

[Click Here](#)

COMPUTER - ଓଡ଼ିଶାର
ସମସ୍ତ ପରୀକ୍ଷା ପୂର୍ବ ବର୍ଷ ପ୍ରଶ୍ନ
E-BOOK- PDF
1,100- MCQ
Topic Wise



OPSC, OSSC CGL, OSSSC, Police/Constable, CHT, OSSSC (RI, JC, LSI, OFDC, Group C)

[Click Here](#)

Tech of World

HOME VIDEOS PLAYLISTS COMMUNITY

ଆମ Channel ରେ ଦେଖନ୍ତୁ Video
ASO ଓଡ଼ିଶା ପୋଷ୍ଟାଲ CT ଓ B.Ed
ଓଡ଼ିଶା ପୋଲିସ୍ SSC GD Railway

TOW

Tech of World
 SUBSCRIBE
 315K subscribers • 928 videos

Hello ପାଇଁ ମନେ !! ଆମେ ଏହି Channel ରେ ସବୁ ପ୍ରକାରର Educational Video Free ରେ ଯୋଗାଇ ଦେବା, କେବଳ ଏହି "Tech Of World" Channel ରୁ ...

+2 କିମ୍ବା +3 ପଢ଼ିବା ପରେ କେମିତି ଜଣେ ଶିକ୍ଷକ ହେଇପାରିବେ ?
CT ଓ B.Ed ପରେ କଣ ? 18:50

How To Become A Teacher After +2 Or +3 In Odisha ? How To Get A Teacher Job In Odisha ?
 Tech of World - 176K views - 3 years ago

Home Shorts Subscriptions Library

[Click Here](#)

Tech Of World- (Odisha Exam CT)

Uninstall Open

Your Review

sujit kumar naik ★★★★★ 6/29/21

Edit your review

Developer contact

About this app

Tech Of World (Odisha Exam) Provides Mock Test & E-Books For Different Exams

Education

3.8 ★ 422 reviews 422 reviews Rated for 3+ 50K+ Downloads

TECH OF WORLD Mock Test

[Click Here](#)

Tech Of World 4.1K subscribers

538 Sujit, 9:42 AM

Leave a comment

ASO English 2022 By... 8.7 MB PDF

ASO General Knowledge 2022... 4.9 MB PDF

ASO Math 2022 By Techofworld.In.pdf 4.6 MB PDF

ASO Odia Language 2022 By... 2.9 MB PDF

ASO Reasoning 2022 By... 4.6 MB PDF

3 comments

Broadcast

[Click Here](#)

Roll No: Tech Of World App

Registration No: Tech Of World App

Registered Photo

Exam Day Photo

Name: Tech Of World App

Exam Date: 03-Nov-2022

Exam Time: 15:30-17:30

Post Name: BSSO 22

Arithmetic - Arithmetic

Question No.1

Marks: 1.00

Bookmark If $a:b = 3:5$ and $b:c = 7:9$, find $a:b:c$.

- (A) 21:35:45 (Correct Answer) (Chosen option)
- (B) 21:33:45
- (C) 23:35:45
- (D) 21:35:47

Question No.2

Marks: 1.00

Bookmark Find the area of rhombus whose diagonals are 123 cm and 124 cm. (In cm^2)

- (A) 7326
- (B) 7526
- (C) 7626 (Correct Answer) (Chosen option)
- (D) 7426

Question No.3

Marks: 1.00

Bookmark

A clock is started at 12 noon. By 660 seconds past 4 p.m, the hour hand has turned through how many degrees?

- (A) 145.5°
- (B) 135.5°
- (C) 125.5° (Correct Answer)
- (D) 155.5°

Question No.4

Marks: 1.00

Bookmark

In how many ways 15 different rings can be worn in 3 fingers with at most one in each finger?

- (A) 2630
- (B) 2430
- (C) 2730 (Correct Answer) (Chosen option)
- (D) 2530

Question No.5

Marks: 1.00

Bookmark $65/8$ divided by 2 is

- (A) 4.0625 (Correct Answer) (Chosen option)
- (B) 4.2625
- (C) 4.3625



(D) 4.1625

Question No.6

Marks: 1.00

Bookmark

20.4179 divided by 0.191 gives:

- (A) 104.9
(B) **106.9 (Correct Answer)** (Chosen option)
(C) 110.9
(D) 108.9

Question No.7

Marks: 1.00

Bookmark

A Tours and Travel services has 118 buses available, of which 92 have A.C. What is the probability that a randomly selected vehicle will be a non A.C bus. (Upto two decimals)

- (A) 0.12
(B) 0.42
(C) **0.22 (Correct Answer)** (Chosen option)
(D) 0.32

Question No.8

Marks: 1.00

Bookmark

Find the mean for the following list of values:

125,127,135,129,127,125,127,135,129,127.

- (A) 124.6
(B) 126.6
(C) **128.6 (Correct Answer)** (Chosen option)
(D) 122.6

Question No.9

Marks: 1.00

Bookmark

What value should come in the place of question mark (?) in the following question?

$351 \div 13 + 851 \div 23 = ?$

- (A) **64 (Correct Answer)** (Chosen option)
(B) 52
(C) 60
(D) 56

Question No.10

Marks: 1.00

Bookmark

In how many ways can the letters of the word 'MEMORIES' be arranged?

- (A) 10280
(B) 10180
(C) **10080 (Correct Answer)** (Chosen option)
(D) 10380

Question No.11

Marks: 1.00

Bookmark

Find the value of $\sqrt{23.04} + \sqrt{0.2304} + \sqrt{0.002304}$

- (A) 7.328
(B) 6.328
(C) **5.328 (Correct Answer)** (Chosen option)

(D) 4.328

Question No.12

Marks: 1.00

Bookmark

How many seconds will a train take to cover a distance of 5040 meters, if it runs at a speed of 216 km/hr?

- (A) 86
(B) **84 (Correct Answer)** (Chosen option)
(C) 82
(D) 80

Question No.13

Marks: 1.00

Bookmark

A and B can do a piece of work in 12 days, while C and D can do the same work in 36 days. In how many days will A, B, C and D do it together?

- (A) 5
(B) 7
(C) 3
(D) **9 (Correct Answer)** (Chosen option)

Question No.14

Marks: 1.00

Bookmark

Tap A can empty a cistern in 266 hours while tap B can fill it in 399 hours. In how many hours the filled cistern will be emptied if both A and B are opened together?

- (A) **798 (Correct Answer)** (Chosen option)
(B) 788
(C) 778
(D) 808

Question No.15

Marks: 1.00

Bookmark

Find $a^3 - b^3$, given that $(a - b) = 9$ and $(a^2 + ab + b^2) = 2127$.

- (A) **19143 (Correct Answer)** (Chosen option)
(B) 17143
(C) 16143
(D) 18143

Question No.16

Marks: 1.00

Bookmark

The LCM of two numbers is 741 and their H.C.F is 3, find the product of two numbers.

- (A) 2203
(B) 2233
(C) 2213
(D) **2223 (Correct Answer)** (Chosen option)

Question No.17

Marks: 1.00

Bookmark

An article is bought for Rs.23000 and sold at a loss of 10%. Find its selling price. (In Rs.)

- (A) 21700
(B) 22700
(C) 23700

(D) 20700 (Correct Answer) (Chosen option)

Question No.18

Marks: 1.00

Bookmark

There are 140 flowers in a bundle, 55 of which contain yellow flowers. What is the probability of selecting a yellow flower at random? (In % and Rounding two decimals)

- (A) 37.29
(B) 39.29 (Correct Answer) (Chosen option)
(C) 43.29
(D) 41.29

Question No.19

Marks: 1.00

Bookmark

Two numbers are in the ratio of 81:82. If the HCF of the numbers is 49, find the smallest number.

- (A) 3969 (Correct Answer) (Chosen option)
(B) 3769
(C) 3669
(D) 3869

Question No.20

Marks: 1.00

Bookmark

A sum of money at simple interest amounts to Rs.6860 in 4 years and to Rs.7350 in 5 years. Find the sum. (In Rs.)

- (A) 4900 (Correct Answer) (Chosen option)
(B) 5000
(C) 4700
(D) 4800

Question No.21

Marks: 1.00

Bookmark

Simple interest on a sum at 20% per annum for 2 years is Rs.960. Find the amount under compound interest on the same sum for the same period and same rate of interest. (In Rs.)

- (A) 3156
(B) 3356
(C) 3456 (Correct Answer) (Chosen option)
(D) 3256

Question No.22

Marks: 1.00

Bookmark

Preston is twice good a workman as Rex and together they can finish the same work in 46 days. In how many days will Preston alone finish the same work?

- (A) 75
(B) 73
(C) 71
(D) 69 (Correct Answer) (Chosen option)

Question No.23Marks:
1.00Bookmark **Directions:**

Study the following data carefully and answer the question that follows.

Details mentioned are for the state qualifying exam conducted by respective states A, B, C and their qualified percentage.

Find the number of candidates from state B who are not qualified during the years 2016, 2018 and 2020.

Year	A		B		C	
	Appeared	Qualified(%)	Appeared	Qualified(%)	Appeared	Qualified(%)
2016	210	70	240	55	225	60
2017	290	60	320	65	305	80
2018	270	80	300	75	285	60
2019	390	70	420	85	405	80
2020	460	75	490	60	475	60

- (A) 389
 (B) 369
 (C) 359
 (D) 379 (Correct Answer) (Chosen option)

Question No.24

Marks: 1.00

Bookmark

If A drives from X to Y at 60 kmph and then from Y to X at 108 kmph, what is the average speed for the whole journey?(In kmph - upto two decimals)

- (A) 77.14 (Correct Answer) (Chosen option)
 (B) 79.14
 (C) 75.14
 (D) 81.14

Question No.25

Marks: 1.00

Bookmark

A is two years older than B who is twice as old as C. If the total of the ages of A, B and C is 62, then how old is C? (In years)

- (A) 13
 (B) 12 (Correct Answer) (Chosen option)
 (C) 14
 (D) 11

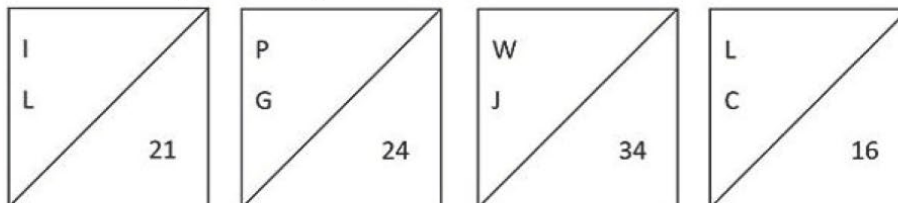
Analytical and Reasoning Ability - Analytical and Reasoning Ability

Question No.1

Marks: 1.00

Bookmark

Find the odd image out in the given series.



(1)

(2)

(3)

(4)

- (A) 3
 (B) 4
 (C) 2

(D) 1 (Correct Answer) (Chosen option)

Question No.2

Marks: 1.00

Bookmark

If + means \div , \times means +, \div means - & - means \times , then,
 $23 - 6 \times 12 + 4 - 20 \div 32 = ?$

- (A) 108
(B) 132
(C) 98
(D) 166 (Correct Answer) (Chosen option)

Question No.3

Marks: 1.00

Bookmark

Pointing to a girl, a lady said, "She is my mother's husband's second son's wife's daughter." How is the girl related to the lady?

- (A) Cousin
(B) Daughter
(C) Nephew
(D) Niece (Correct Answer) (Chosen option)

Question No.4

Marks: 1.00

Bookmark

In the following question, few statements are given and these statements are followed by two conclusions numbered i and ii. You have to take the given statements to be true even if they seem to be at variance from commonly known facts. Read the conclusions and then decide which of the given conclusions logically follows from the given statements, disregarding commonly known facts.

Choose,

- (A) Only (i) conclusion follows
(B) Only (ii) conclusion follows
(C) Neither (i) nor (ii) follows
(D) Both (i) and (ii) follow
(E) Either (i) or (ii) follows

Statements: All lions are tigers. Some tigers are goats. All goats are animals.

Conclusions:

- i) Some lions are goats.
ii) Some animals are lions.

- (A) B
(B) A
(C) C (Correct Answer) (Chosen option)
(D) D

Question No.5

Marks: 1.00

Bookmark

In this question, relationship between different elements is shown in the statement. This statement is followed by two conclusions:

Statements: $C > H \geq I = P < O \leq T < L < E$

Conclusion:

- i) $C > I$
ii) $O \leq E$

Choose the appropriate one from the following options

- (A) Only conclusion i follows
(B) Only conclusion ii follows
(C) Either i or ii follows

- (D) Neither i nor ii follows
 (E) Both i and ii follow.
 (A) B
 (B) C
 (C) D
 (D) **A (Correct Answer)** (Chosen option)

Question No.6

Marks: 1.00

Bookmark

Choose the alternative which is an odd word/number/letter pair out of the given alternatives.

- (A) Short
 (B) **Long (Correct Answer)** (Chosen option)
 (C) Crisp
 (D) Brief

Case Study - 7 to 8

2.00

Directions:

This type of graph indicates the variation of a quantity with respect to two parameters represented on x-axis and y-axis respectively. So the candidate must carefully observe the peaks and depths of the graph to interpret the data.

x-axis: Months

y-axis: Number of cases for the month

**Question No.7**

Marks: 1.00

Bookmark

How many cases were registered in Delhi and Mumbai in Apr-20?

- (A) 106
 (B) 68
 (C) **112 (Correct Answer)** (Chosen option)
 (D) 88

Question No.8

Marks: 1.00

Bookmark

Which month of the following did Mumbai have the maximum number of cases?

- (A) Feb-20
 (B) **Mar-20 (Correct Answer)** (Chosen option)

(C) Jan-20

(D) Apr-20

Question No.9

Marks: 1.00

Bookmark

What should be written in the place of question mark in the given series?

M13, O18, ?, S28, U33

(A) R22

(B) P22

(C) R24

(D) **Q23 (Correct Answer)** (Chosen option)

Question No.10

Marks: 1.00

Bookmark

"Each question given below consists of a statement, followed by two arguments numbered 1 and 2. You have to decide which of the arguments is a 'strong' argument and which is a 'weak' argument.

Give answer:

(A) If only argument1 is strong

(B) If only argument 2 is strong

(C) If either 1 or 2 is strong

(D) If neither 1 nor 2 is strong and

(E) If both 1 and 2 are strong.

Statement: Should there be stronger limits on immigration?

Argument:

1. Yes, the people who immigrate will find it difficult to adapt to the country's culture.

2. No, immigrants have a lower probability of ending up in prison and committing crimes.

(A) B

(B) A

(C) C

(D) **D (Correct Answer)**

Question No.11

Marks: 1.00

Bookmark

At Vicky's housewarming function, 290 persons chose to have icecream and 330 persons chose to have Fruit Juice. 60 persons chose to have both. Everyone who came to the function had at least one of those.

How many persons chose only icecream at the function?

(A) 290

(B) **230 (Correct Answer)**

(C) 330

(D) 270

Question No.12

Marks: 1.00

Bookmark

In a certain code language, if ALERT is coded as DOHUW, then how is DEBUT coded in that language?

(A) XYFIH

(B) WVYFG

(C) **GHEXW (Correct Answer)** (Chosen option)

(D) HGEWX



Question No.13

Marks: 1.00

Bookmark

A man is standing in a lawn facing North direction. If the man turns 45 degrees in anti-clockwise direction and 135 degrees in clockwise direction, which direction will he face now?

- (A) East (Correct Answer) (Chosen option)
(B) North
(C) West
(D) South

Question No.14

Marks: 1.00

Bookmark

Which of the following sets of signs should be used to replace * in the following?

$$10 * 5 * 7 = 3 * 8 * 5$$

- (A) × - + × (Correct Answer) (Chosen option)
(B) × + + ×
(C) ÷ + × +
(D) ÷ + × -

Question No.15

Marks: 1.00

Bookmark

Pointing to a girl, a woman said, "She is my mother's only daughter's husband's son-in-law's daughter's only sister." How is the girl related to the woman?

- (A) Mother
(B) Niece (Chosen option)
(C) Daughter
(D) Granddaughter (Correct Answer)

Question No.16

Marks: 1.00

Bookmark

Select the combination of numbers so that letters arranged accordingly will form a meaningful word.

1. R 2. E 3. W 4. A 5. T

- (A) 3, 4, 2, 1, 5
(B) 2, 1, 3, 5, 4
(C) 2, 1, 4, 5, 3
(D) 3, 4, 5, 2, 1 (Correct Answer) (Chosen option)

Question No.17

Marks: 1.00

Bookmark

Replace the question mark with an option that follows the same logic applied in the first pair

HNT : IOU :: ?? : MRE

- (A) MQE
(B) LOE
(C) LQD (Correct Answer) (Chosen option)
(D) MOD

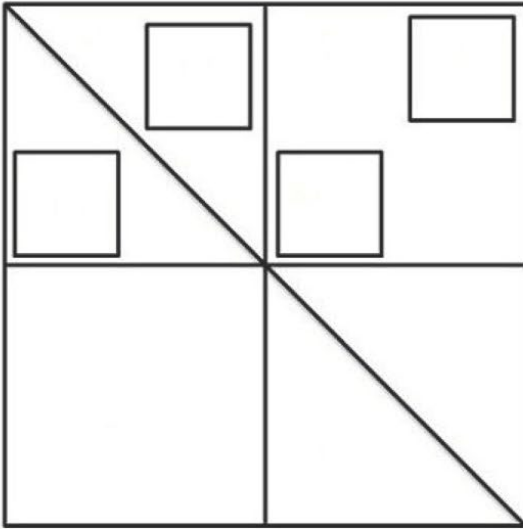
Question No.18

Marks: 1.00



Bookmark

How many squares are there in the given figure?



- (A) 6
- (B) 7
- (C) 9 (Correct Answer) (Chosen option)
- (D) 10

Question No.19

Marks: 1.00

Bookmark

In a certain code language, if GUEST is coded as TFMHG, then how is ROMAN coded in that language?

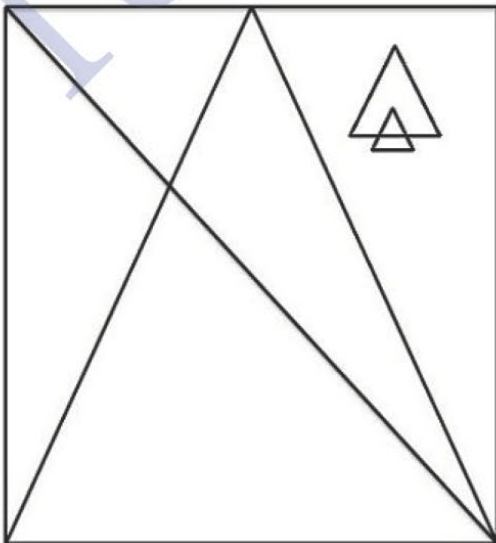
- (A) VSQER
- (B) TGSUX
- (C) ILNZM (Correct Answer) (Chosen option)
- (D) SVQRE

Question No.20

Marks: 1.00

Bookmark

How many triangles are there in the given figure?



- (A) 10

- (B) 11 (Chosen option)
(C) 13 (Correct Answer)
(D) 12

Question No.21

Marks: 1.00

Bookmark

Choose the alternative which is an odd word/number/letter pair out of the given alternatives.

- (A) Little (Correct Answer) (Chosen option)
(B) Big
(C) Large
(D) Great

Question No.22

Marks: 1.00

Bookmark

Replace the question mark with an option that follows the same logic applied in the first pair

Vacate : Empty :: Delay : ??

- (A) Hurry
(B) Advance
(C) Holdback (Correct Answer)
(D) Rush (Chosen option)

Question No.23

Marks: 1.00

Bookmark

What will be written in the place of question mark in the given series?

C3A1F6K11?17

- (A) Q (Correct Answer) (Chosen option)
(B) S
(C) T
(D) R

Question No.24

Marks: 1.00

Bookmark

"Each question given below consists of a statement, followed by two arguments numbered 1 and 2. You have to decide which of the arguments is a 'strong' argument and which is a 'weak' argument.

Give answer:

- (A) If only argument1 is strong
(B) If only argument 2 is strong
(C) If either 1 or 2 is strong
(D) If neither 1 nor 2 is strong and
(E) If both 1 and 2 are strong.

Statement: Should animal testing be encouraged?

Argument:

1. No, the testing of products on animals is completely unnecessary because viable alternatives are available.
2. No, the development of products that "use natural ingredients, like bananas and Basil nut oil, as well as others with a long history of safe human usage" is advocated instead of testing on animals

- (A) C
(B) E (Correct Answer)

- (C) B
(D) A

Question No.25

Marks: 1.00

Bookmark

In this question, relationship between different elements is shown in the statement.
This statement is followed by two conclusions:

Statements: $S < I \leq L = V > E \geq R$

Conclusion:

- i) $S < L$
ii) $I > R$

Choose the appropriate one from the following options

- (A) Only conclusion i follows
(B) Only conclusion ii follows
(C) Either i or ii follows
(D) Neither i nor ii follows
(E) Both i and ii follow.
(A) **A (Correct Answer)** (Chosen option)
(B) C
(C) B
(D) D

General Awareness and Current Events - General Awareness and Current Events**Question No.1**

Marks: 1.00

Bookmark

Which of the following States is also known as the 'Molassis Basin' that is made up of soft Unconsolidated deposits?

- (A) **Mizoram (Correct Answer)**
(B) Manipur
(C) Nagaland
(D) Sikkim

Question No.2

Marks: 1.00

Bookmark

Which among the following personalities is the only female Prime minister of India?

- (A) Sonia Gandhi
(B) Menaka Gandhi
(C) Sarojini Naidu
(D) **Indira Gandhi (Correct Answer)** (Chosen option)

Question No.3

Marks: 1.00

Bookmark

The first English Settlement of Odisha came into existence in Balasore region in 1634 A.D. while _____ was the Mughal emperor at Delhi.

- (A) Jahangir
(B) Bahadur Shah Zafar (Chosen option)
(C) Aurangzeb
(D) **Shah Jahan (Correct Answer)**

Question No.4

Marks: 1.00

Bookmark

Nathu la Pass serves as the trade link between India and _____.

- (A) Pakistan
(B) **China (Correct Answer)**
(C) Bangladesh
(D) Nepal

Question No.5

Marks: 1.00

Bookmark

Which State has the longest coastline in India?

- (A) Andhra Pradesh
(B) Tamil Nadu
(C) Kerala
(D) **Gujarat (Correct Answer)** (Chosen option)

Question No.6

Marks: 1.00

Bookmark

The Second Battle of Panipat was fought between the armies of Hemu and _____ in 1556.

- (A) Jahangir
(B) Babur
(C) Jahandar Shah
(D) **Akbar (Correct Answer)** (Chosen option)

Question No.7

Marks: 1.00

Bookmark

Which of the following is the boundary line between India and China?

- (A) Radcliffe Line
(B) **McMahon Line (Correct Answer)** (Chosen option)
(C) Durand Line
(D) Oder-Neisse Line

Question No.8

Marks: 1.00

Bookmark

What is the full form of 'IPCC', the United Nations body for assessing the science related to climate change?

- (A) Intragovernmental Panel on Climate Change
(B) Intellectual Panel on Climate Change (Chosen option)
(C) **Intergovernmental Panel on Climate Change (Correct Answer)**
(D) International Panel on Climate Change

Question No.9

Marks: 1.00

Bookmark

In August 2022, who among the following sworn in as the 49th Chief Justice of India?

- (A) **Justice Uday Umesh Lalit (Correct Answer)** (Chosen option)
(B) Justice Sanjay Kishan Kaul
(C) Justice Dhananjaya Y. Chandrachud
(D) Justice S. Abdul Nazeer

Question No.10

Marks: 1.00

Bookmark

What is the full form of 'FDI', in economics terminology?

- (A) Foreign Deficit Investment
(B) Foreign Debt Investment
(C) Foreign Demand Investment
(D) **Foreign Direct Investment (Correct Answer)** (Chosen option)

Question No.11

Marks: 1.00

Bookmark

In India, Housing Finance Companies are regulated by the:

- (A) Securities and Exchange Board of India
(B) National Bank for Agriculture and Rural Development
(C) **Reserve Bank of India (Correct Answer)**
(D) Union Ministry of Corporate Affairs (Chosen option)

Question No.12

Marks: 1.00

Bookmark

Bajrang Punia is a distinguished personality in which of the following Sports/games?

- (A) Foot Ball
(B) Fencing
(C) **Wrestling (Correct Answer)** (Chosen option)
(D) Hockey

Question No.13

Marks: 1.00

Bookmark

Daringbadi, popularly known as Kashmir of Odisha is located in which of the following districts of Odisha?

- (A) Puri
(B) Sambalpur
(C) **Kandhamal (Correct Answer)** (Chosen option)
(D) Bhadrak

Question No.14

Marks: 1.00

Bookmark

Who among the following led the Champaran Satyagraha?

- (A) Bal Gangadhar Tilak
(B) **Mahatma Gandhi (Correct Answer)** (Chosen option)
(C) Anandha Charlu
(D) E V Ramsamy

Question No.15

Marks: 1.00

Bookmark

Which constitutional amendment act reduced the voting age from 21 years to 18 years in India?

- (A) 44th Constitutional Amendment Act
(B) **61st Constitutional Amendment Act (Correct Answer)** (Chosen option)
(C) 73rd Constitutional Amendment Act
(D) 31st Constitutional Amendment Act

Question No.16

Marks: 1.00

Bookmark

Who among the following wrote 'Vilanka Ramayana'?

- (A) Dinakrushna Das

- (B) Bhima Bhoi
(C) Sarala Das (Correct Answer)
(D) Upendra Bhanja

Question No.17

Marks: 1.00

Bookmark

Who among the following Indian writers is the recipient of Hermann Kesten Prize by Germany-based PEN Center this year(2022)?

- (A) Vikram Seth
(B) Jhumpa Lahiri (Chosen option)
(C) Salman Rushdie
(D) Meena Kandasamy (Correct Answer)

Question No.18

Marks: 1.00

Bookmark

The Gandhian Plan was formulated by:

- (A) Shriman Narayan Agarwal (Correct Answer)
(B) Jawaharlal Nehru
(C) Jaiprakash Narayan (Chosen option)
(D) M.N. Roy

Question No.19

Marks: 1.00

Bookmark

How can we calculate per capita income of a country?

- (A) Dividing the country's national income by its total Value of Goods and Services
(B) Dividing the country's national income by its total population (Correct Answer) (Chosen option)
(C) Total Income of working Population
(D) Total income of population plus export of the country

Question No.20

Marks: 1.00

Bookmark

The Constitution of India derives its ultimate authority from:

- (A) the Supreme Court of India (Chosen option)
(B) the People of India (Correct Answer)
(C) the President of India
(D) the Parliament of India

Question No.21

Marks: 1.00

Bookmark

Which of the following is the capital city of Egypt?

- (A) San Salvador
(B) Cairo (Correct Answer) (Chosen option)
(C) Berlin
(D) Havana

Question No.22

Marks: 1.00

Bookmark

Which of the following districts has the lowest density of population in Odisha as per Census 2011?

- (A) Deogarh

- (B) **Kandhamal (Correct Answer)**
(C) Balasore
(D) Koraput

Question No.23

Marks: 1.00

Bookmark

Who among the following is called the 'Father of Odia Prose'?

- (A) Gourishankar Ray
(B) Radhanath Ray
(C) **Fakir Mohan Senapati (Correct Answer)** (Chosen option)
(D) Gopabandhu Das

Question No.24

Marks: 1.00

Bookmark

_____ is the second largest intergovernmental organization after the United Nations with a membership of 57 states.

- (A) **Organisation of Islamic Cooperation (Correct Answer)**
(B) European Union
(C) African Union
(D) Shanghai Cooperation Organisation

Question No.25

Marks: 1.00

Bookmark

The famous 'Ellora Caves' is situated in which state?

- (A) Rajasthan
(B) Uttar Pradesh
(C) **Maharashtra (Correct Answer)** (Chosen option)
(D) Jharkhand

Computer and Internet Awareness - Computer and Internet Awareness**Question No.1**

Marks: 1.00

Bookmark

The programs installed on your windows Operating System can be accessed via _____.

- (A) Properties Menu
(B) **Start Menu (Correct Answer)** (Chosen option)
(C) Context Menu
(D) System Menu

Question No.2

Marks: 1.00

Bookmark

Every web page has a unique address called _____.

- (A) HTTP
(B) DNS
(C) **URL (Correct Answer)**
(D) IMAP

Question No.3

Marks: 1.00

Bookmark

_____ is a non-impact printer.

- (A) Toy printer

- (B) Laser printer (Correct Answer)
(C) Rock and scissor
(D) Dot-matrix printer (Chosen option)

Question No.4

Marks: 1.00

Bookmark

Which function in Excel calculates the largest value in a set of numbers?

- (A) Count()
(B) Large()
(C) Max() (Correct Answer) (Chosen option)
(D) Min()

Question No.5

Marks: 1.00

Bookmark

_____ option in mail merge is used to preview your merged document before printing.

- (A) PREVIEW RECEIPIENT
(B) MATCHED RESULTS
(C) PRINT PREVIEW (Chosen option)
(D) PREVIEW RESULTS (Correct Answer)

Question No.6

Marks: 1.00

Bookmark

What is the shortcut key used to open new document?

- (A) Shift + N
(B) Ctrl + O
(C) Shift + O
(D) Ctrl + N (Correct Answer) (Chosen option)

Question No.7

Marks: 1.00

Bookmark

Every cell in an Excel worksheet contains an address, which is defined by _____.

- (A) a column number followed by row letter
(B) a column letter followed by a row number (Correct Answer) (Chosen option)
(C) a row number
(D) a row number followed by a special character

Question No.8

Marks: 1.00

Bookmark

Which feature in Microsoft Word allows a person to do proofing a document and mark suggested editing and deletions?

- (A) Proofing (Chosen option)
(B) Validation
(C) Track Changes (Correct Answer)
(D) Compare

Question No.9

Marks: 1.00

Bookmark

The short cut key to italicize your selected text is _____.

- (A) Ctrl + J
(B) Ctrl + B
(C) Ctrl + I (Correct Answer) (Chosen option)

(D) Ctrl + U

Question No.10

Marks: 1.00

Bookmark

_____ is referred to as discovering patterns based on a large set of previous year's data.

- (A) Data sampling
(B) **Data mining (Correct Answer)**
(C) Data validation
(D) Data collection

Question No.11

Marks: 1.00

Bookmark

DVD stands for _____.

- (A) Data Visual Disk
(B) Digital Visual Disk (Chosen option)
(C) **Digital Video Disc (Correct Answer)**
(D) Data and Video Disc

Question No.12

Marks: 1.00

Bookmark

_____ is an example for volatile memory in computers.

- (A) ROM
(B) Flash memory
(C) Hard disks
(D) **RAM (Correct Answer)** (Chosen option)

Question No.13

Marks: 1.00

Bookmark

A/ An _____ is a list of sources, usually placed at the end of the document, which you consulted or cited in creating the document.

- (A) Headings
(B) Table of contents
(C) Index
(D) **Bibliography (Correct Answer)** (Chosen option)

Question No.14

Marks: 1.00

Bookmark

The _____ function key is used for spell check in MS Excel.

- (A) F1
(B) **F7 (Correct Answer)** (Chosen option)
(C) F2
(D) F11

Question No.15

Marks: 1.00

Bookmark

Suppose there is a text in a document that is Bold, Red in Color with Green Background. We want to apply all of these formatting to another paragraph in one go. Which option will we use?

- (A) Format Menu
(B) **Format Painter (Correct Answer)** (Chosen option)

- (C) Format Button
(D) Format Macro

Question No.16

Marks: 1.00

Bookmark

_____ wizards help the presentation to run it on another computer.

- (A) Page Setup
(B) Send To
(C) **Pack and Go (Correct Answer)**
(D) Properties

Question No.17

Marks: 1.00

Bookmark

_____ in the CPU carries out all arithmetic operations plus AND/OR functions.

- (A) Storage Unit
(B) Control Unit
(C) Backup Unit
(D) **Arithmetic Logic Unit (Correct Answer)** (Chosen option)

Question No.18

Marks: 1.00

Bookmark

_____ was the first Electronic programmable computer and was similar but faster than the Colossus.

- (A) **ENIAC (Correct Answer)** (Chosen option)
(B) Abacus
(C) Differential Analyser
(D) Analog Computer

Question No.19

Marks: 1.00

Bookmark

In Powerpoint, which of the following views will display each slide at the top of a page where you can add speaker notes?

- (A) 3D view
(B) Reading view
(C) Speaker page
(D) **Notes page (Correct Answer)**

Question No.20

Marks: 1.00

Bookmark

\$C\$2 in MS Excel refers to _____.

- (A) **Absolute cell reference which refers 2nd row 3rd column (Correct Answer)** (Chosen option)
(B) Relative cell reference which refers 2nd row 2nd column
(C) Absolute cell reference which refers 2nd row 2nd column
(D) Relative cell reference which will change

Question No.21

Marks: 1.00

Bookmark

The computer application that helps you store and manipulate numerical data in tabular form is _____.

- (A) **Spreadsheet (Correct Answer)** (Chosen option)

- (B) Word
- (C) Photoshop
- (D) Notepad

Question No.22

Marks: 1.00

Bookmark

In Microsoft Word, the word document orientation is set _____ by default.

- (A) **Portrait (Correct Answer)**
- (B) Landscape
- (C) Printview
- (D) North

Question No.23

Marks: 1.00

Bookmark

_____ is a type of attack where the hacker sends a fraudulent designed website to trick a person to reveal sensitive information.

- (A) Web crawling
- (B) SQL injection
- (C) **Phishing (Correct Answer)** (Chosen option)
- (D) Denial of service

Question No.24

Marks: 1.00

Bookmark

The command line operating system DOS stands for _____.

- (A) **Disk Operating System (Correct Answer)** (Chosen option)
- (B) Driver Operating System
- (C) Desktop Operating System
- (D) Digital Operating System

Question No.25

Marks: 1.00

Bookmark

_____ is a powder mixture used in laser printers and photocopiers to form the printed text and images on the paper.

- (A) Carbon paper
- (B) Sprayer
- (C) **Toner (Correct Answer)**
- (D) Ink Charger

