



OSSC CGL 2022-23
E-BOOK- PDF
7,000 MCQ
EXPLANATION



All Important Questions & Answers

[Click Here](#)


MATH - ଓଡ଼ିଶାର
ସମସ୍ତ ପରୀକ୍ଷା ପୂର୍ବ ବର୍ଷ ପ୍ରଶ୍ନ
E-BOOK- PDF
1,800- MCQ
Topic Wise



OPSC, OSSC CGL, OSSSC, Police/Constable, B.ED, CHT, CT, OSSSC (RI, JC, LSI, OFDC, Group C)]

[Click Here](#)


ଓଡ଼ିଆ ବ୍ୟାକରଣ PYQ
ସମସ୍ତ ପରୀକ୍ଷା ପୂର୍ବ ବର୍ଷ ପ୍ରଶ୍ନ
E-BOOK- PDF
2,222 MCQ
TEST- 75



OPSC ASO, B.ED, CHT, CT, OAVS, OSSTET, OTET, ODISHA POLICE, OSSSC RI, OSSSC LSI, OSSSC OFDC, OSSSC Group C

[Click Here](#)


ENGLISH - ଓଡ଼ିଶାର
ସମସ୍ତ ପରୀକ୍ଷା ପୂର୍ବ ବର୍ଷ ପ୍ରଶ୍ନ
E-BOOK- PDF
3,600- MCQ
Topic Wise



OPSC, OSSC CGL, OSSSC, Police/Constable, B.ED, CHT, OTET, OSSTET CT, OSSSC (RI, JC, LSI, OFDC, Group C)

[Click Here](#)


REASONING - ଓଡ଼ିଶାର
ସମସ୍ତ ପରୀକ୍ଷା ପୂର୍ବ ବର୍ଷ ପ୍ରଶ୍ନ
E-BOOK- PDF
2,200- MCQ
Topic Wise



OPSC, OSSC CGL, OSSSC, Police/Constable, B.ED, CHT, OTET, OSSTET CT, OSSSC (RI, JC, LSI, OFDC, Group C)

[Click Here](#)

COMPUTER - ଓଡ଼ିଶାର
ସମସ୍ତ ପରୀକ୍ଷା ପୂର୍ବ ବର୍ଷ ପ୍ରଶ୍ନ
E-BOOK- PDF
1,100- MCQ
Topic Wise



OPSC, OSSC CGL, OSSSC, Police/Constable, CHT, OSSSC (RI, JC, LSI, OFDC, Group C)

[Click Here](#)

Tech of World

HOME VIDEOS PLAYLISTS COMMUNITY

ଆମ Channel ରେ ଦେଖନ୍ତୁ Video
ASO ଓଡ଼ିଶା ପୋଷ୍ଟାଲ CT ଓ B.Ed
ଓଡ଼ିଶା ପୋଲିସ୍ SSC GD Railway

Tech of World
 SUBSCRIBE
 315K subscribers • 928 videos

+2 କିମ୍ବା +3 ପଢ଼ିବା ପରେ କେମିତି ଜଣେ ଶିକ୍ଷକ ହେଇପାରିବେ ?
CT ଓ B.Ed ପରେ କଣ ?

How To Become A Teacher After +2 Or +3 In Odisha ? How To Get A Teacher Job In Odisha ?
 Tech of World • 176K views • 3 years ago

[Click Here](#)

Tech Of World- (Odisha Exam CT)

Uninstall Open

Your Review

sujit kumar naik ★★★★★ 6/29/21

Developer contact

About this app

Tech Of World (Odisha Exam) Provides Mock Test & E-Books For Different Exams

Education

3.8 ★ 422 reviews | 422 reviews | Rated for 3+ | 50K- Downlo

TECH OF WORLDE Mock Test

[Click Here](#)

Tech Of World 4.1K subscribers

ASO English 2022 By... 8.7 MB PDF

ASO General Knowledge 2022... 4.9 MB PDF

ASO Math 2022 By Techofworld.In.pdf 4.6 MB PDF

ASO Odia Language 2022 By... 2.9 MB PDF

ASO Reasoning 2022 By... 4.6 MB PDF

3 comments

[Click Here](#)

Roll No: Tech Of World App

Registration No: Tech Of World App

Name: Tech Of World App

Exam Date: 03-Nov-2022

Exam Time: 12:15-14:15

Post Name: BSSO 22

Registered Photo

Exam Day Photo

Arithmetic - Arithmetic

Question No.1

Marks: 1.00

Bookmark

Tap A can fill a cistern in 218 hours while tap B can empty it in 327 hours. In how many hours the cistern will be filled if both A and B are opened together?

- (A) 674
(B) 664
(C) 654 (Correct Answer) (Chosen option)
(D) 644

Question No.2

Marks: 1.00

Bookmark

Find the value of $\sqrt{17.64} + \sqrt{0.1764} + \sqrt{0.001764}$

- (A) 7.662
(B) 6.662
(C) 4.662 (Correct Answer) (Chosen option)
(D) 5.662

Question No.3

Marks: 1.00

Bookmark

A flight covers a distance between A and B in 26 hours. If the speed of the flight is reduced by 270 km/hr, then the same distance is covered in 31 hours. Find the distance between A and B. (In km)

- (A) 46524
(B) 44524
(C) 43524 (Correct Answer) (Chosen option)
(D) 45524

Question No.4

Marks: 1.00

Bookmark

Find the sum invested at compound interest at 10% per annum which will amount to Rs.3267 in 2 years. (In Rs.)

- (A) 2600
(B) 2700 (Correct Answer) (Chosen option)
(C) 2900
(D) 2800

Question No.5

Marks: 1.00

Bookmark

Find the largest scale size to measure accurately, the three equilateral triangles with sides measuring 147 cm, 196 cm and 245 cm. (In cm.)

- (A) 43



- (B) 47
(C) 49 (Correct Answer) (Chosen option)
(D) 45

Question No.6

Marks: 1.00

Bookmark

If a traveller covers a distance of 7425 metres in 55 seconds, find the speed of the traveller. (In kmph)

- (A) 466
(B) 476
(C) 496
(D) 486 (Correct Answer) (Chosen option)

Question No.7

Marks: 1.00

Bookmark

In how many different ways can the letters of the word 'CLIMATE' be arranged in such a way that the vowels always come together?

- (A) 740
(B) 710
(C) 720 (Correct Answer) (Chosen option)
(D) 730

Question No.8

Marks: 1.00

Bookmark

What value should come in the place of question mark (?) in the following question?
 $(1952+330-598+527) \div (71+28-45+13) = ?$

- (A) 27
(B) 24
(C) 33 (Correct Answer) (Chosen option)
(D) 30

Question No.9

Marks: 1.00

Bookmark

In a team, there are 202 males and 303 females. What is the probability of a randomly selected person of the team to be a male?

- (A) 40% (Correct Answer) (Chosen option)
(B) 35%
(C) 45%
(D) 50%

Question No.10

Marks: 1.00

Bookmark

Find a^2 , given that $b^2 = 576$, $ab = 552$ and $(a+b)^2 = 2209$.

- (A) 519
(B) 529 (Correct Answer) (Chosen option)
(C) 549
(D) 539

Question No.11

Marks: 1.00

Bookmark

If B's age is five times the age of A and if B's age is 25 yrs, find the age difference

between A and B. (In years)

- (A) 26
(B) 24
(C) 22
(D) 20 (Correct Answer) (Chosen option)

Question No.12

Marks: 1.00

Bookmark

If $24190/2.95 = 8200$, what is the value of $48380/29.5$?

- (A) 1640 (Correct Answer) (Chosen option)
(B) 1700
(C) 1680
(D) 1660

Question No.13

Marks: 1.00

Bookmark

Three numbers are in the ratio 32:33:34. The smallest number is 2176. Find the difference between the smallest and the largest number.

- (A) 136 (Correct Answer) (Chosen option)
(B) 116
(C) 126
(D) 106

Question No.14

Marks: 1.00

Bookmark

Find the area of a circle whose radius is 115 cm. (In cm^2)

- (A) 13225π (Correct Answer) (Chosen option)
(B) 13125π
(C) 13215π
(D) 13205π

Question No.15

Marks: 1.00

Bookmark

2 men and 3 boys can do a piece of work in 225 days while 3 men and 2 boys can do the same work in 180 days. In how many days can 5 men and 5 boys do the work?

- (A) 80
(B) 70
(C) 90
(D) 100 (Correct Answer) (Chosen option)

Question No.16

Marks: 1.00

Bookmark

The following represents age distribution of students in an elementary class. Find the mode values: 59, 61, 62, 65, 63, 59, 61, 71, 64, 63, 61, 59, 61, 62, 63.

- (A) 65
(B) 61 (Correct Answer) (Chosen option)
(C) 67
(D) 63

Question No.17

Marks: 1.00

Bookmark

A and B, working together can finish a piece of work in 150 days, while B alone can do it in 375 days. How many days will A alone take to finish it?

- (A) 250 (Correct Answer) (Chosen option)
 (B) 270
 (C) 240
 (D) 260

Question No.18

Marks: 1.00

Bookmark

A monitor for personal computer is bought for Rs.21000 and sold at Rs.12600. Find its loss percentage.

- (A) 44
 (B) 46
 (C) 42
 (D) 40 (Correct Answer) (Chosen option)

Question No.19

Marks: 1.00

Bookmark

7 students participated a competition and each got different score. In how many ways can three different prizes be given?

- (A) 220
 (B) 210 (Correct Answer)
 (C) 240
 (D) 230

Question No.20

Marks: 1.00

Bookmark

A basket contains 21 black, 49 blue, and 35 red pens. Without looking, if Adit chooses a pen from the basket, what is the probability that he will select a black pen?

- (A) 40%
 (B) 25%
 (C) 15%
 (D) 20% (Correct Answer) (Chosen option)

Question No.21

Marks:

1.00

Bookmark **Directions:**

Study the following data carefully and answer the question that follows.

Details mentioned are for the state qualifying exam conducted by respective states A, B, C and their qualified percentage.

Find the number of candidates from state A who are not qualified during the years 2016, 2018 and 2020.

Year	A		B		C	
	Appeared	Qualified(%)	Appeared	Qualified(%)	Appeared	Qualified(%)
2016	195	80	225	60	210	60
2017	275	60	305	60	290	80
2018	255	60	285	60	270	60
2019	375	80	405	80	390	80
2020	445	60	475	60	460	60

- (A) 339

- (B) 309
(C) 329
(D) **319 (Correct Answer)** (Chosen option)

Question No.22

Marks: 1.00

Bookmark

What was the day of the week on 15th March, 2001?

- (A) **Thursday (Correct Answer)**
(B) Wednesday
(C) Saturday
(D) Friday (Chosen option)

Question No.23

Marks: 1.00

Bookmark

0.212 x 0.0302 is equal to:

- (A) 0.0064224
(B) **0.0064024 (Correct Answer)** (Chosen option)
(C) 0.0064124
(D) 0.0064324

Question No.24

Marks: 1.00

Bookmark

A number when divided by 36, 54 and 72, leaves the remainder 15 in each case. Find the smallest possible number.

- (A) 251
(B) **231 (Correct Answer)** (Chosen option)
(C) 241
(D) 261

Question No.25

Marks: 1.00

Bookmark

Find the Principal (Rs) when simple interest = Rs.3795, rate = 10% p.a. and time = 3 years.

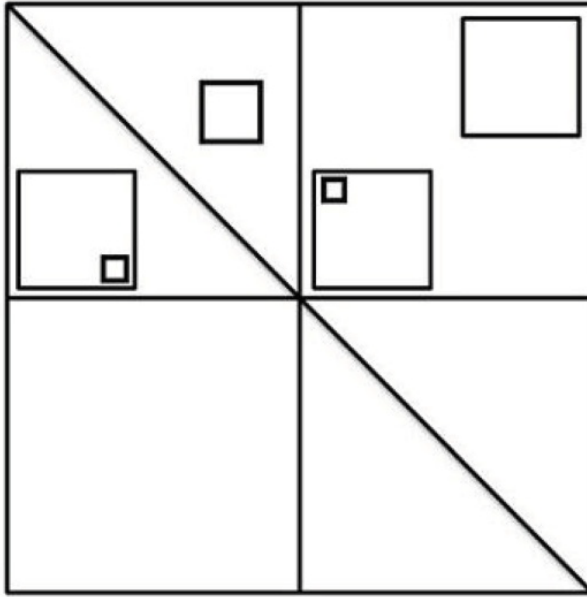
- (A) **12650 (Correct Answer)** (Chosen option)
(B) 14650
(C) 11650
(D) 13650

Analytical and Reasoning Ability - Analytical and Reasoning Ability**Question No.1**

Marks: 1.00

Bookmark

How many squares are there in the given figure?



- (A) 13
 (B) 12
 (C) 10
 (D) 11 (Correct Answer) (Chosen option)

Question No.2

Marks: 1.00

Bookmark

In the following question, few statements are given and these statements are followed by two conclusions numbered i and ii. You have to take the given statements to be true even if they seem to be at variance from commonly known facts. Read the conclusions and then decide which of the given conclusions logically follows from the given statements, disregarding commonly known facts.

Choose,

- (A) Only (i) conclusion follows
 (B) Only (ii) conclusion follows
 (C) Neither (i) nor (ii) follows
 (D) Both (i) and (ii) follow
 (E) Either (i) or (ii) follows

Statements: All lions are tigers. All tigers are goats. All goats are animals.

Conclusions:

- i) All lions are goats.
 ii) All tigers are animals.

- (A) C
 (B) D (Correct Answer) (Chosen option)
 (C) B
 (D) A

Case Study - 3 to 4

2.00

Directions:

The following table gives the marks obtained by five students in four different subjects in an examination.

150 is Maximum Marks in Each Subject.

Students	Subjectwise Marks obtained in each subjects			
	Maths	Chemistry	Physics	Computer Science
Alexander	62	53	61	54
Anthony	74	65	73	66
Aaron	85	76	84	77
Asher	118	109	117	110
Austin	104	95	103	96

Question No.3

Marks: 1.00

Bookmark

What is the overall percentage of Alexander?(rounded off to two digit after decimal)

- (A) 39
 (B) 29.5
 (C) **38.3 (Correct Answer)** (Chosen option)
 (D) 37

Question No.4

Marks: 1.00

Bookmark

What is the average mark obtained by all the five students in Chemistry? (rounded off to one digit after decimal)

- (A) 90.7
 (B) 78.5
 (C) 91
 (D) **79.6 (Correct Answer)** (Chosen option)

Question No.5

Marks: 1.00

Bookmark

In a certain code language, if GIANT is coded as MKEXR, then how is ROUTE coded in that language?

- (A) VSYXI
 (B) **SVYIX (Correct Answer)** (Chosen option)
 (C) KZAUX
 (D) ILFGV

Question No.6

Marks: 1.00

Bookmark

Choose the alternative which is an odd word/number/letter pair out of the given alternatives.

- (A) Single
 (B) Alone
 (C) **Together (Correct Answer)** (Chosen option)
 (D) Solo

Question No.7

Marks: 1.00

Bookmark

Choose the alternative which is an odd word/number/letter pair out of the given alternatives.

- (A) Inexpensive
 (B) **Costly (Correct Answer)** (Chosen option)
 (C) Scanty
 (D) Cheap

Question No.8

Marks: 1.00

Bookmark

Replace the question mark with an option that follows the same logic applied in the first pair

TLB : VND :: ?? : QOG

- (A) OMF
(B) QNE
(C) QNF
(D) OME (Correct Answer) (Chosen option)

Question No.9

Marks: 1.00

Bookmark

"Each question given below consists of a statement, followed by two arguments numbered 1 and 2. You have to decide which of the arguments is a 'strong' argument and which is a 'weak' argument.

Give answer:

- (A) If only argument1 is strong
(B) If only argument 2 is strong
(C) If either 1 or 2 is strong
(D) If neither 1 nor 2 is strong and
(E) If both 1 and 2 are strong.

Statement: Should there be a Universal Basic Income?

Argument:

1. Yes, it leads to positive job growth and lower school dropout rates.
2. Yes, it reduces poverty and income inequality.

- (A) C
(B) E (Correct Answer) (Chosen option)
(C) A
(D) B

Question No.10

Marks: 1.00

Bookmark

In a certain code language, if ABOUT is coded as 12152120, then how is DAILY coded in that language?

- (A) 4181225
(B) 4191225 (Correct Answer) (Chosen option)
(C) 4191325
(D) 4181325

Question No.11

Marks: 1.00

Bookmark

Shiny walks 7km towards West and takes a left turn and walks 4km. She then takes another left turn to cover 4km and after covering, she walks 2km towards South. She then finally walks 3km towards East. How far is she from the starting point?

- (A) 10km
(B) 6km (Correct Answer) (Chosen option)
(C) 12km
(D) 7km

Question No.12

Marks: 1.00

Bookmark

Which of the following sets of signs should be used to replace * in the following?

$$40 * 2 * 5 = 5 * 4 * 5$$

- (A) $\times + + \times$
 (B) $\div + \times -$
 (C) $\div + \times +$ (Correct Answer) (Chosen option)
 (D) $\times - + \times$

Question No.13

Marks: 1.00

Bookmark

In this question, relationship between different elements is shown in the statement.
 This statement is followed by two conclusions:

Statements: $T > H > U \leq R < S = D < A \leq Y$

Conclusion:

- i) $T > R$
 ii) $D < Y$

Choose the appropriate one from the following options

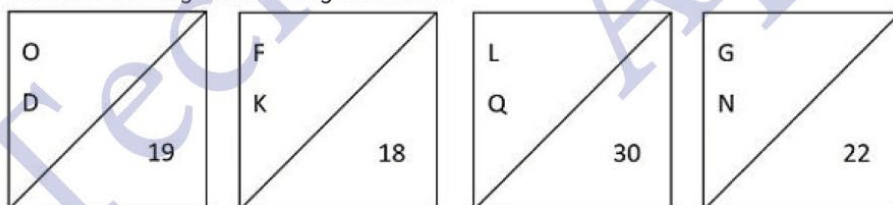
- (A) Only conclusion i follows
 (B) Only conclusion ii follows
 (C) Either i or ii follows
 (D) Neither i nor ii follows
 (E) Both i and ii follow.
 (A) B (Correct Answer) (Chosen option)
 (B) D
 (C) A
 (D) C

Question No.14

Marks: 1.00

Bookmark

Find the odd image out in the given series.



(1)

(2)

(3)

(4)

- (A) 3
 (B) 4
 (C) 2
 (D) 1 (Correct Answer) (Chosen option)

Question No.15

Marks: 1.00

Bookmark

What will be written in the place of question mark in the given series?

B2E5Q17G7?20

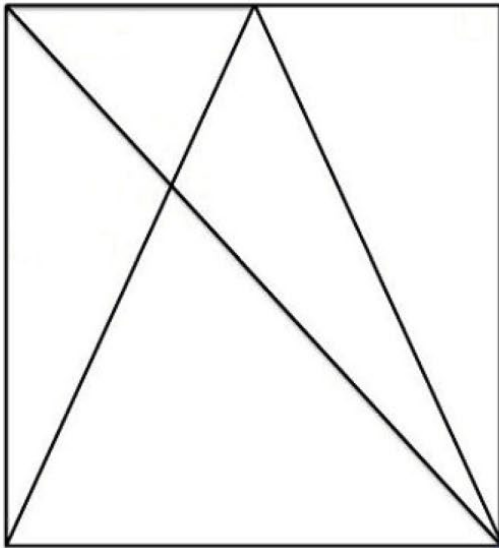
- (A) Q
 (B) T (Correct Answer) (Chosen option)
 (C) R
 (D) S

Question No.16

Marks: 1.00

Bookmark

How many triangles are there in the given figure?



- (A) 9
(B) 10 (Correct Answer) (Chosen option)
(C) 12
(D) 11

Question No.17

Marks: 1.00

Bookmark

Replace the question mark with an option that follows the same logic applied in the first pair

Quit : Leave :: Clarify : ??

- (A) Question
(B) Confuse
(C) Complicate
(D) Explain (Correct Answer) (Chosen option)

Question No.18

Marks: 1.00

Bookmark

What should be written in the place of question mark in the given series?

B2, E3, ?, K7, N11

- (A) G6
(B) G5
(C) H5 (Correct Answer) (Chosen option)
(D) H4

Question No.19

Marks: 1.00

Bookmark

The letters of the name of a vegetable are N, P, I, R, T and U. If the letters are rearranged correctly, then what is the third letter of the word formed?

- (A) I
(B) T
(C) P

(D) R (Correct Answer) (Chosen option)

Question No.20

Marks: 1.00

Bookmark

Pointing to a lady, a girl said, "She is my mother's father's wife's mother-in-law." How is the lady related to the girl?

- (A) Great Grandmother (Correct Answer)
(B) Grandmother
(C) Grand aunt (Chosen option)
(D) Mother

Question No.21

Marks: 1.00

Bookmark

In this question, relationship between different elements is shown in the statement. This statement is followed by two conclusions:

Statements: $F > A = M < I \leq L < Y$

Conclusion:

- i) $F > M$
ii) $A > Y$

Choose the appropriate one from the following options

- (A) Only conclusion i follows
(B) Only conclusion ii follows
(C) Either i or ii follows
(D) Neither i nor ii follows
(E) Both i and ii follow.
(A) D
(B) C
(C) B
(D) A (Correct Answer) (Chosen option)

Question No.22

Marks: 1.00

Bookmark

In a school of 100 students 38 students play cricket, 41 students play football, 41 students play tennis. 8 students play both cricket and football, 11 students play both football and tennis, 9 students play both cricket and tennis. 3 students play all three games.

Find the number of students who are not playing any of the games.

- (A) 13
(B) 8
(C) 11 (Chosen option)
(D) 5 (Correct Answer)

Question No.23

Marks: 1.00

Bookmark

Looking at a photograph of a boy, a man said, "He is my son's sister's mother's husband's father-in-law." How is the man related to the boy?

- (A) Nephew
(B) Uncle
(C) Son-in-law (Correct Answer) (Chosen option)
(D) Father

Question No.24

Marks: 1.00

Bookmark

If + means \div , \times means +, \div means - & - means \times , then,
 $45 + 9 \times 16 - 2 \times 3 - 30 = ?$

- (A) 127 (Correct Answer) (Chosen option)
(B) 153
(C) 97
(D) 75

Question No.25

Marks: 1.00

Bookmark

"Each question given below consists of a statement, followed by two arguments numbered 1 and 2. You have to decide which of the arguments is a 'strong' argument and which is a 'weak' argument.

Give answer:

- (A) If only argument 1 is strong
(B) If only argument 2 is strong
(C) If either 1 or 2 is strong
(D) If neither 1 nor 2 is strong and
(E) If both 1 and 2 are strong.

Statement: Should there be a ban on animal testing?

Argument:

1. No, the pain, the suffering, and the deaths of animals are worth the possible human benefits.
2. Yes, animals are subjected to tests that are often painful or cause permanent damage or death, and they are never given the option of not participating in the experiment.

- (A) A
(B) C
(C) B (Correct Answer) (Chosen option)
(D) D

General Awareness and Current Events – General Awareness and Current Events

Question No.1

Marks: 1.00

Bookmark

Who among the following edited the newspaper Utkala Dipika?

- (A) Fakir Mohan Senapati
(B) Gourishankar Ray (Correct Answer) (Chosen option)
(C) Radhanath Ray
(D) Gopabandhu Das

Question No.2

Marks: 1.00

Bookmark

The speciality of the Baripada Car festival is that only ladies can pull the chariot of:

- (A) Maa Subhadra (Correct Answer) (Chosen option)
(B) Maa Samaleswari
(C) Lord Jagannath
(D) Lord Balabhadra

Question No.3

Marks: 1.00

Bookmark

Which of the following countries' Parliament Building was constructed by India?

- (A) Iran
(B) **Afghanistan (Correct Answer)** (Chosen option)
(C) Bangladesh
(D) Myanmar

Question No.4

Marks: 1.00

Bookmark

Who is the regulatory authority for Merchant Banking in India?

- (A) **Securities and Exchange Board of India (Correct Answer)** (Chosen option)
(B) Reserve Bank of India
(C) Union Ministry of Corporate Affairs
(D) Union Ministry of Finance

Question No.5

Marks: 1.00

Bookmark

Which of the following cities is also known as the Millennium City of Odisha?

- (A) Berhampur
(B) Rourkela
(C) Baripada
(D) **Cuttack (Correct Answer)** (Chosen option)

Question No.6

Marks: 1.00

Bookmark

The Livestock Census in India is carried out at an interval of:

- (A) Ten Years
(B) **Five Years (Correct Answer)**
(C) Four Years
(D) Three Years

Question No.7

Marks: 1.00

Bookmark

Koyna river is a tributary of which of the following rivers?

- (A) Sabarmati
(B) **Krishna (Correct Answer)**
(C) Tapi
(D) Narmada

Question No.8

Marks: 1.00

Bookmark

Who is known as the Father of Green Revolution in India?

- (A) Norman Borlaug
(B) **M.S. Swaminathan (Correct Answer)** (Chosen option)
(C) Verghese Kurien
(D) R.S. Sodhi

Question No.9

Marks: 1.00

Bookmark

Libya is geographically located in which of the following continents?

- (A) Europe
(B) North America

- (C) Africa (Correct Answer) (Chosen option)
(D) Asia

Question No.10

Marks: 1.00

Bookmark

Which of the following organisations has launched its first hackathon named 'Bima Manthan 2022'?

- (A) DRDO
(B) ISRO
(C) SEBI
(D) IRDAI (Correct Answer) (Chosen option)

Question No.11

Marks: 1.00

Bookmark

Who among the following was the founder of the Lingayat movement in Karnataka?

- (A) Appar
(B) Basava (Correct Answer) (Chosen option)
(C) Ramanuja
(D) Sambandar

Question No.12

Marks: 1.00

Bookmark

Which of the following countries won the men's Asia Cup cricket tournament held in 2022?

- (A) India
(B) Sri Lanka (Correct Answer) (Chosen option)
(C) Pakistan
(D) Bangladesh

Question No.13

Marks: 1.00

Bookmark

Where is the Shore temple of Mahabalipuram located?

- (A) Tamil Nadu (Correct Answer) (Chosen option)
(B) Kerala
(C) Andhra Pradesh
(D) Odisha

Question No.14

Marks: 1.00

Bookmark

_____ is the headquarters of Shanghai Cooperation Organisation (SCO), an intergovernmental international organisation.

- (A) Milan, Italy
(B) Moscow, Russia
(C) Beijing, China (Correct Answer)
(D) Shanghai, China (Chosen option)

Question No.15

Marks: 1.00

Bookmark

The concept of "Public Interest Litigation" originated in which of the following Countries?

- (A) United States of America (Correct Answer) (Chosen option)
(B) France

- (C) United Kingdom
(D) India

Question No.16

Marks: 1.00

Bookmark

What is the full form of 'HTML' in computer terminology?

- (A) **HyperText Markup Language (Correct Answer)** (Chosen option)
(B) HyperTransmit Markup Language
(C) HyperTarget Markup Language
(D) HyperTransfer Markup Language

Question No.17

Marks: 1.00

Bookmark

When did the Paika Bidroha (Paika Rebellion) take place?

- (A) 1822 A.D.
(B) 1804 A.D.
(C) 1857 A.D.
(D) **1817 A.D. (Correct Answer)** (Chosen option)

Question No.18

Marks: 1.00

Bookmark

Which of the following Articles of the Indian Constitution guarantees "equality before law"?

- (A) Article 20
(B) Article 29
(C) Article 23
(D) **Article 14 (Correct Answer)** (Chosen option)

Question No.19

Marks: 1.00

Bookmark

A synthetic Polymer "PVC" stands for:

- (A) Primary Virtual Council
(B) Polygon Vinyl Chlorine
(C) Poly Vinyl Carbon
(D) **Poly Vinyl Chloride (Correct Answer)** (Chosen option)

Question No.20

Marks: 1.00

Bookmark

The McMahon Line is the boundary line between India and _____.

- (A) Bangladesh
(B) **China (Correct Answer)** (Chosen option)
(C) Myanmar
(D) Pakistan

Question No.21

Marks: 1.00

Bookmark

Which is the most densely inhabited district in Odisha as per Census 2011?

- (A) Puri
(B) Nayagarh
(C) Gajapati
(D) **Khordha (Correct Answer)** (Chosen option)

Question No.22

Marks: 1.00

Bookmark

Which city is known as 'Orange city of India'?

- (A) **Nagpur (Correct Answer)** (Chosen option)
(B) Cochin
(C) Jaipur
(D) Bangalore

Question No.23

Marks: 1.00

Bookmark

The famous personality Lionel Messi is related to which of the following sports/games?

- (A) Cricket
(B) Golf
(C) **Football (Correct Answer)** (Chosen option)
(D) Tennis

Question No.24

Marks: 1.00

Bookmark

Where did the Indian National Congress(INC) Split of 1907 happen?

- (A) **Surat (Correct Answer)** (Chosen option)
(B) Bombay
(C) Calcutta
(D) Madras

Question No.25

Marks: 1.00

Bookmark

Which of the following institutions estimates the National Income of India?

- (A) NITI Aayog
(B) **National Statistical Office (Correct Answer)** (Chosen option)
(C) Reserve Bank of India
(D) Economic Advisory Council

Computer and Internet Awareness - Computer and Internet Awareness**Question No.1**

Marks: 1.00

Bookmark

In Powerpoint, which of the following views displays each slide filling the screen and delivers the presentation to the audience?

- (A) Slide sorter
(B) **Slide show (Correct Answer)** (Chosen option)
(C) Slide presentation
(D) Reading view

Question No.2

Marks: 1.00

Bookmark

_____ memory can be erased by electric charge and re-programmed.

- (A) MROM
(B) **EEPROM (Correct Answer)** (Chosen option)
(C) ROM
(D) PROM

<p>Question No.3</p> <p>In MS Excel, combining two or more cells together is called _____ .</p> <p>(A) <input type="radio"/> Splitting</p> <p>(B) <input type="radio"/> Wrapping</p> <p>(C) <input type="radio"/> Deleting</p> <p>(D) <input checked="" type="radio"/> Merging (Correct Answer) (Chosen option)</p>	<p>Marks: 1.00</p> <p>Bookmark <input type="checkbox"/></p>
<p>Question No.4</p> <p>_____ is a single-user operating system.</p> <p>(A) <input checked="" type="radio"/> MS DOS (Correct Answer) (Chosen option)</p> <p>(B) <input type="radio"/> Unix</p> <p>(C) <input type="radio"/> Windows Xp</p> <p>(D) <input type="radio"/> Mainframes</p>	<p>Marks: 1.00</p> <p>Bookmark <input type="checkbox"/></p>
<p>Question No.5</p> <p>The program that initializes the operating system on the system startup is _____.</p> <p>(A) <input type="radio"/> Driver (Chosen option)</p> <p>(B) <input checked="" type="radio"/> Bootstrap (Correct Answer)</p> <p>(C) <input type="radio"/> Jar</p> <p>(D) <input type="radio"/> Control-M</p>	<p>Marks: 1.00</p> <p>Bookmark <input type="checkbox"/></p>
<p>Question No.6</p> <p>Emails that are created but not sent to the recipients are saved under _____ folder of the mailbox.</p> <p>(A) <input type="radio"/> Spam</p> <p>(B) <input type="radio"/> Inbox</p> <p>(C) <input checked="" type="radio"/> Draft (Correct Answer) (Chosen option)</p> <p>(D) <input type="radio"/> Sent</p>	<p>Marks: 1.00</p> <p>Bookmark <input type="checkbox"/></p>
<p>Question No.7</p> <p>_____ contains supplemental functionality that adds custom commands and specialized features to MS-PowerPoint.</p> <p>(A) <input type="radio"/> Tab</p> <p>(B) <input checked="" type="radio"/> Add-Ins tab (Correct Answer)</p> <p>(C) <input type="radio"/> Built-in tab (Chosen option)</p> <p>(D) <input type="radio"/> Tab+</p>	<p>Marks: 1.00</p> <p>Bookmark <input type="checkbox"/></p>
<p>Question No.8</p> <p>The bar that runs on the bottom of windows that displays the currently running application and system clock is called _____.</p> <p>(A) <input type="radio"/> Activity bar</p> <p>(B) <input checked="" type="radio"/> Task bar (Correct Answer) (Chosen option)</p> <p>(C) <input type="radio"/> Menu bar</p> <p>(D) <input type="radio"/> Tool bar</p>	<p>Marks: 1.00</p> <p>Bookmark <input type="checkbox"/></p>

Question No.9

Marks: 1.00

Bookmark

_____ command is used to set page orientation, width, height, number of slides in the presentation.

- (A) Save as Web page
- (B) **Page Setup (Correct Answer)** (Chosen option)
- (C) Print
- (D) Pack and Go

Question No.10

Marks: 1.00

Bookmark

In MS Excel, restricting the number of rows that are being displayed based on a condition is called _____.

- (A) Breaks
- (B) Sorting
- (C) **Filtering (Correct Answer)** (Chosen option)
- (D) Orientation

Question No.11

Marks: 1.00

Bookmark

_____ is the engineering of building electronic components and devices measured in extremely tiny size and structure.

- (A) Artificial intelligence
- (B) Micro technology
- (C) Computer forensics
- (D) **Nano technology (Correct Answer)** (Chosen option)

Question No.12

Marks: 1.00

Bookmark

_____ actually separates the logical memory as perceived by users from physical memory on a computer.

- (A) Primary Memory
- (B) **Virtual Memory (Correct Answer)**
- (C) Memory Cache
- (D) Kernel Memory

Question No.13

Marks: 1.00

Bookmark

Portrait and Landscape options are types of _____ in the page setup dialog box.

- (A) Breaks
- (B) Background
- (C) **Orientation (Correct Answer)** (Chosen option)
- (D) Effects

Question No.14

Marks: 1.00

Bookmark

Which Freeze pane option will keep the top row of the table visible while scrolling through the rest of the worksheet?

- (A) Freeze Sheet
- (B) Freeze first column
- (C) **Freeze Top Row (Correct Answer)**
- (D)

(D) Lock Top Row (Chosen option)

Question No.15

Marks: 1.00

Bookmark

\$A1 in MS Excel refers to _____.

- (A) **Mixed Cell reference of Row and Column (Correct Answer)**
- (B) Relative Cell reference of both row and column
- (C) Temporary Cell reference of both row and column
- (D) Absolute Cell reference of both row and column (Chosen option)

Question No.16

Marks: 1.00

Bookmark

DHCP stands for _____.

- (A) Dynamic Hypertext configuration protocol
- (B) Dynamic Host Connect Protocol (Chosen option)
- (C) Digital Host Connect protocol
- (D) **Dynamic Host Configuration Protocol (Correct Answer)**

Question No.17

Marks: 1.00

Bookmark

_____ was the first spreadsheet program available for personal computers.

- (A) **VisiCalc (Correct Answer)**
- (B) Excel
- (C) Spreadsheet
- (D) Lotus 1-2-3 (Chosen option)

Question No.18

Marks: 1.00

Bookmark

Shortcut key command for printing a document, while working in MSWord, is _____.

- (A) **Ctrl + P (Correct Answer) (Chosen option)**
- (B) Alt + K
- (C) Ctrl + O
- (D) Alt + P

Question No.19

Marks: 1.00

Bookmark

In Microsoft Word, the default theme font for headings and body text is _____.

- (A) Arial narrow
- (B) **Calibri (Correct Answer) (Chosen option)**
- (C) Cambria
- (D) Times New Roman

Question No.20

Marks: 1.00

Bookmark

The term SATA used in the Hard disk technology stands for _____.

- (A) Serial Advanced Technology Array
- (B) Synchronous Advanced Technology Attachment
- (C) Serial Advanced Transport Array (Chosen option)
- (D) **Serial Advanced Technology Attachment (Correct Answer)**

Question No.21

Marks: 1.00

Bookmark

Which Alignment is used to change the text to align in both left and right hand side?

- (A) Left
(B) Right
(C) **Justify (Correct Answer)** (Chosen option)
(D) Center

Question No.22

Marks: 1.00

Bookmark

What is the shortcut key used to move the cursor one word to the right side?

- (A) Right arrow key
(B) Alt + Right arrow key
(C) **Ctrl + Right arrow key (Correct Answer)**
(D) Shift + Right arrow key

Question No.23

Marks: 1.00

Bookmark

_____ is the device that gives you surge protection and power back up during a power outage.

- (A) Battery strip
(B) Wriststrap
(C) USB
(D) **UPS (Correct Answer)** (Chosen option)

Question No.24

Marks: 1.00

Bookmark

_____ allows you to create standard calculations, formatting, and charts very quickly.

- (A) Publishing Tool
(B) **Quick Analysis Tool (Correct Answer)**
(C) Formula Tool
(D) Quick Chart Tool (Chosen option)

Question No.25

Marks: 1.00

Bookmark

_____ are known as memory viruses which do not infect the file system. Instead, it runs whenever the system is booted.

- (A) File Viruses
(B) Macro Viruses
(C) **Boot sector Viruses (Correct Answer)** (Chosen option)
(D) Source code Viruses