



OSSC CGL 2022-23
E-BOOK- PDF
7,000 MCQ
EXPLANATION



All Important Questions & Answers

[Click Here](#)


MATH - ଓଡ଼ିଶାର
ସମସ୍ତ ପରୀକ୍ଷା ପୂର୍ବ ବର୍ଷ ପ୍ରଶ୍ନ
E-BOOK- PDF
1,800- MCQ
Topic Wise



OPSC, OSSC CGL, OSSSC, Police/Constable, B.ED, CHT, CT, OSSSC (RI, JC, LSI, OFDC, Group C)]

[Click Here](#)


ଓଡ଼ିଆ ବ୍ୟାକରଣ PYQ
ସମସ୍ତ ପରୀକ୍ଷା ପୂର୍ବ ବର୍ଷ ପ୍ରଶ୍ନ
E-BOOK- PDF
2,222 MCQ
TEST- 75



OPSC ASO, B.ED, CHT, CT, OAVS, OSSTET, OTET, ODISHA POLICE, OSSSC RI, OSSSC LSI, OSSSC OFDC, OSSSC Group C

[Click Here](#)


ENGLISH - ଓଡ଼ିଶାର
ସମସ୍ତ ପରୀକ୍ଷା ପୂର୍ବ ବର୍ଷ ପ୍ରଶ୍ନ
E-BOOK- PDF
3,600- MCQ
Topic Wise



OPSC, OSSC CGL, OSSSC, Police/Constable, B.ED, CHT, OTET, OSSTET CT, OSSSC (RI, JC, LSI, OFDC, Group C)

[Click Here](#)


REASONING - ଓଡ଼ିଶାର
ସମସ୍ତ ପରୀକ୍ଷା ପୂର୍ବ ବର୍ଷ ପ୍ରଶ୍ନ
E-BOOK- PDF
2,200- MCQ
Topic Wise



OPSC, OSSC CGL, OSSSC, Police/Constable, B.ED, CHT, OTET, OSSTET CT, OSSSC (RI, JC, LSI, OFDC, Group C)

[Click Here](#)

COMPUTER - ଓଡ଼ିଶାର
ସମସ୍ତ ପରୀକ୍ଷା ପୂର୍ବ ବର୍ଷ ପ୍ରଶ୍ନ
E-BOOK- PDF
1,100- MCQ
Topic Wise



OPSC, OSSC CGL, OSSSC, Police/Constable, CHT, OSSSC (RI, JC, LSI, OFDC, Group C)

[Click Here](#)

Tech of World

HOME VIDEOS PLAYLISTS COMMUNITY

ଆମ Channel ରେ ଦେଖନ୍ତୁ Video
ASO ଓଡ଼ିଶା ପୋଷ୍ଟାଲ CT ଓ B.Ed
ଓଡ଼ିଶା ପୋଲିସ୍ SSC GD Railway

Tech of World
 SUBSCRIBE
 315K subscribers • 928 videos

+2 କିମ୍ବା +3 ପଢ଼ିବା ପରେ କେମିତି ଜଣେ ଶିକ୍ଷକ ହେଇପାରିବେ ?
CT ଓ B.Ed ପରେ କଣ ?

How To Become A Teacher After +2 Or +3 In Odisha ? How To Get A Teacher Job In Odisha ?

Home Shorts Subscriptions Library

[Click Here](#)

Tech Of World- (Odisha Exam CT)

Uninstall Open

Your Review

sujit kumar naik ★★★★★ 6/29/21

Developer contact

About this app

Tech Of World (Odisha Exam) Provides Mock Test & E-Books For Different Exams

Education

3.8 ★ 422 reviews | 422 reviews | Rated for 3+ | 50K- Downlo

TECH OF WORLDE Mock Test

[Click Here](#)

Tech Of World 4.1K subscribers

ASO English 2022 By... 8.7 MB PDF

ASO General Knowledge 2022... 4.9 MB PDF

ASO Math 2022 By Techofworld.In.pdf 4.6 MB PDF

ASO Odia Language 2022 By... 2.9 MB PDF

ASO Reasoning 2022 By... 4.6 MB PDF

3 comments

Broadcast

[Click Here](#)

Roll No: Tech Of World App
Registration No: Tech Of World App
Name: Tech Of World App
Exam Date: 03-Nov-2022
Exam Time: 09:00-11:00
Post Name: BSSO 22

**Arithmetic - Arithmetic****Question No.1**

Marks: 1.00

Bookmark

Suppose you randomly choose a number from 101 to 150, both inclusive. What is the probability that you chose a number which is the multiple of 3?

- (A) 13/50
(B) 19/50
(C) 17/50 (Correct Answer) (Chosen option)
(D) 21/50

Question No.2

Marks: 1.00

Bookmark

At the end of two years, what will be the compound interest at the rate of 10% p.a. on an amount of Rs.7300? (In Rs.)

- (A) 1733
(B) 1433
(C) 1533 (Correct Answer) (Chosen option)
(D) 1633

Question No.3

Marks: 1.00

Bookmark

Using all the letters of the word CHILDREN, how many distinct words can be formed?

- (A) 43320
(B) 42320
(C) 40320 (Correct Answer) (Chosen option)
(D) 41320

Question No.4

Marks: 1.00

Bookmark

A and B, working together can finish a piece of work in 330 days, while A alone can do it in 550 days. How many days will B alone take to finish it?

- (A) 835
(B) 845
(C) 825 (Correct Answer) (Chosen option)
(D) 815

Question No.5

Marks: 1.00

Bookmark

Find the area of the equilateral triangle whose side is 136 cm. (In cm^2)

- (A) $4624\sqrt{3}$ (Correct Answer) (Chosen option)
(B) $4424\sqrt{3}$
(C) $4524\sqrt{3}$

(D) 4324√3

Question No.6

Marks: 1.00

Bookmark

If a man travels at a speed of 144 kmph and covers a distance of 1416 meters, find the time taken to cover the distance. (In seconds)

- (A) **35.4 (Correct Answer)** (Chosen option)
(B) 33.4
(C) 37.4
(D) 31.4

Question No.7

Marks: 1.00

Bookmark

9 girls can dig a pit in 306 days. If a boy is twice as efficient as a girl, then 1 girl and 4 boys can dig a similar pit in how many days?

- (A) **306 (Correct Answer)** (Chosen option)
(B) 310
(C) 304
(D) 308

Question No.8

Marks: 1.00

Bookmark

Find b^2 , given that $(a-b)^2 = 441$, $a^2 = 2304$ and $ab = 1296$.

- (A) 739
(B) 719
(C) **729 (Correct Answer)** (Chosen option)
(D) 749

Question No.9

Marks: 1.00

Bookmark

Pipe A can fill a tank in 335 minutes and Pipe B can empty the same tank in 670 minutes. If both pipes are opened together, how many minutes will it take to fill the empty tank?

- (A) 710
(B) 680
(C) 690
(D) **670 (Correct Answer)** (Chosen option)

Question No.10

Marks: 1.00

Bookmark

Eladevi travels at a speed of 139 kmph and she reaches the destination in 15 hours. Find the distance she covers. (In km)

- (A) 2185
(B) 1885
(C) **2085 (Correct Answer)** (Chosen option)
(D) 1985

Question No.11

Marks: 1.00

Bookmark

In how many ways can 3 different boxes be distributed to 5 different containers, when each of the containers can hold any no. of boxes?

- (A) 135

- (B) 115
(C) 145
(D) **125 (Correct Answer)**

Question No.12

Marks: 1.00

Bookmark

What will come in place of question mark(?) in the following equation?

$$171.015 + 355.343 - 155.503 = 137.1 + ?$$

- (A) 235.755
(B) 231.755
(C) 237.755
(D) **233.755 (Correct Answer)** (Chosen option)

Question No.13

Marks: 1.00

Bookmark

What value should come in the place of question mark (?) in the following question?

$$3.2 \times (32 \times 19 \times 189) \div 102.4 = ?$$

- (A) **3591 (Correct Answer)** (Chosen option)
(B) 3291
(C) 3491
(D) 3391

Question No.14

Marks: 1.00

Bookmark

The salaries of A, B and C are in the ratio of 7:15:8. If their total salary is Rs.3960, find the salary received by C.(In Rs.)

- (A) **1056 (Correct Answer)** (Chosen option)
(B) 1036
(C) 1026
(D) 1046

Question No.15

Marks: 1.00

Bookmark

A basket contains 82 brown shoes and 123 black shoes. A shoe is picked up at random. Find the probability of getting a black shoe.

- (A) 0.8
(B) 0.4
(C) 0.2
(D) **0.6 (Correct Answer)** (Chosen option)

Question No.16

Marks: 1.00

Bookmark

What number divides $\sqrt{0.000441}$ to give the result as 10.5?

- (A) **0.002 (Correct Answer)** (Chosen option)
(B) 0.006
(C) 0.008
(D) 0.004

Question No.17

Marks: 1.00

Bookmark

The total age of X and Y is 69 years more than the total age of Y and Z. Z is how many

years younger than X?

- (A) 67
(B) 63
(C) **69 (Correct Answer)** (Chosen option)
(D) 65

Question No.18

Marks: 1.00

Bookmark

If $18988/2.35 = 8080$, what is the value of $37976/23.5$?

- (A) **1616 (Correct Answer)** (Chosen option)
(B) 1316
(C) 1516
(D) 1416

Question No.19

Marks: 1.00

Bookmark

The LCM of two numbers is 2244 and their ratio is 33:34. Find the two numbers.

- (A) **66, 68 (Correct Answer)** (Chosen option)
(B) 70, 72
(C) 68, 70
(D) 72, 74

Question No.20

Marks: 1.00

Bookmark

The runs scored in a cricket match by 11 players are as follows:

79, 88, 193, 123, 173, 153, 73, 88, 81, 83, 88. Find the median of this data.

- (A) 86
(B) 84
(C) 82
(D) **88 (Correct Answer)** (Chosen option)

Question No.21

Marks: 1.00

Bookmark

A sum of Rs.4700 earns an interest of Rs.1410 in 6 years at what rate of simple interest?

- (A) 3%
(B) 9%
(C) 7%
(D) **5% (Correct Answer)** (Chosen option)

Question No.22

Marks: 1.00

Bookmark

An article is bought for Rs.43000 and sold at a loss of 20%. Find its selling price. (In Rs.)

- (A) 37400
(B) 35400
(C) **34400 (Correct Answer)** (Chosen option)
(D) 36400

Question No.23

Marks: 1.00

Bookmark

At what time between 6 o'clock and 7 o'clock will the hands of a clock coincide?

- (A) 6 past 33(8/11)

- (B) 6 past 32(8/11) (Correct Answer)
 (C) 6 past 35(8/11)
 (D) 6 past 34(8/11)

Question No.24

Marks: 1.00

Bookmark

Find the HCF of two numbers, if the LCM of two number is 434 and its product is 13454.

- (A) 31 (Correct Answer) (Chosen option)
 (B) 34
 (C) 32
 (D) 33

Question No.25

Marks:

1.00

Bookmark **Directions:**

Study the following data carefully and answer the question that follows.

Details mentioned are for the state qualifying exam conducted by respective states A, B, C and their qualified percentage.

Find number of candidates from state A who are not qualified during the years 2016, 2018 and 2020.

Year	A		B		C	
	Appeared	Qualified(%)	Appeared	Qualified(%)	Appeared	Qualified(%)
2016	180	65	210	60	195	60
2017	260	70	290	70	275	80
2018	240	75	270	60	255	60
2019	360	80	390	80	375	80
2020	430	60	460	60	445	60

- (A) 325
 (B) 305
 (C) 315
 (D) 295 (Correct Answer) (Chosen option)

Analytical and Reasoning Ability - Analytical and Reasoning Ability**Question No.1**

Marks: 1.00

Bookmark

In the following question, few statements are given and these statements are followed by two conclusions numbered i and ii. You have to take the given statements to be true even if they seem to be at variance from commonly known facts. Read the conclusions and then decide which of the given conclusions logically follows from the given statements, disregarding commonly known facts.

Choose,

- (A) Only (i) conclusion follows
 (B) Only (ii) conclusion follows
 (C) Neither (i) nor (ii) follows
 (D) Both (i) and (ii) follow
 (E) Either (i) or (ii) follows

Statements: Some lions are tigers. All tigers are goats. All lions are animals.

Conclusions:

- i) Some lions are goats.
 ii) Some animals are tigers.

- (A) C
 (B) D (Correct Answer)

- (C) B
(D) A

Question No.2

Marks: 1.00

Bookmark

Which of the following sets of signs should be used to replace * in the following?

$$15 * 3 * 5 = 8 * 2 * 6$$

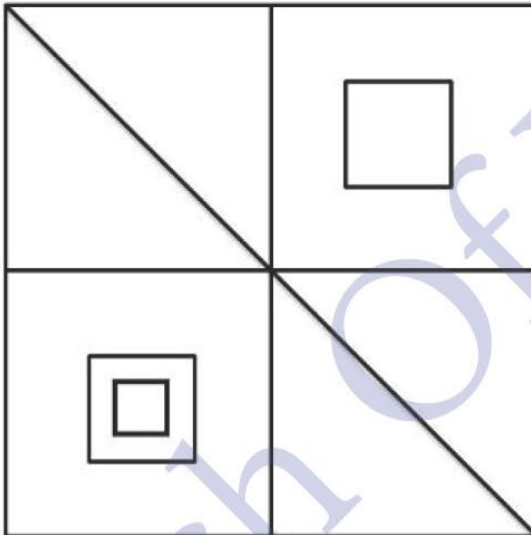
- (A) $\div + \times -$ (Correct Answer) (Chosen option)
(B) $\times - + \times$
(C) $\div + \times +$
(D) $\times + + \times$

Question No.3

Marks: 1.00

Bookmark

How many squares are there in the given figure?



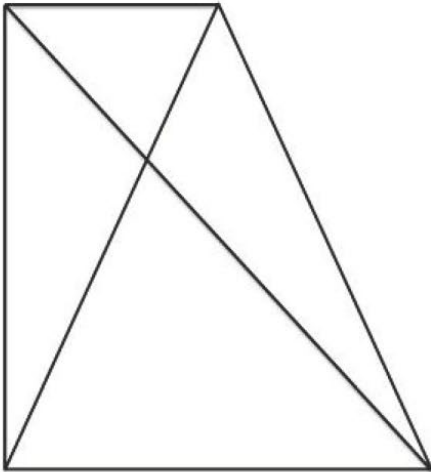
- (A) 9
(B) 10
(C) 7
(D) 8 (Correct Answer) (Chosen option)

Question No.4

Marks: 1.00

Bookmark

How many triangles are there in the given figure?



- (A) 6
 (B) 7
 (C) 5
 (D) 8 (Correct Answer) (Chosen option)

Question No.5

Marks: 1.00

Bookmark

If + means \div , \times means +, \div means - & - means \times , then,
 $25 - 5 \div 60 + 4 \times 15 - 2 = ?$

- (A) 97
 (B) 110
 (C) 140 (Correct Answer) (Chosen option)
 (D) 83

Question No.6

Marks: 1.00

Bookmark

"Each question given below consists of a statement, followed by two arguments numbered 1 and 2. You have to decide which of the arguments is a 'strong' argument and which is a 'weak' argument.

Give answer:

- (A) If only argument 1 is strong
 (B) If only argument 2 is strong
 (C) If either 1 or 2 is strong
 (D) If neither 1 nor 2 is strong and
 (E) If both 1 and 2 are strong.

Statement: Should one believe in astrology?

Argument:

1. Yes, if one is ready to accept criticism and mockery.
 2. Yes, if one wants to lead a perfect life.

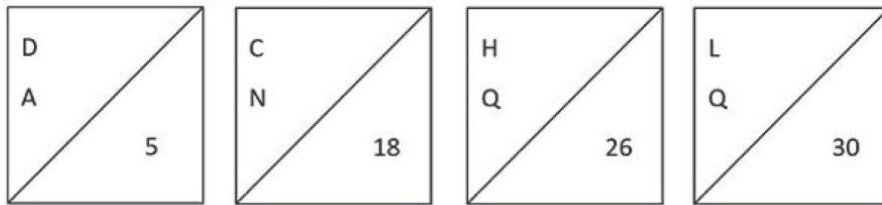
- (A) C
 (B) D (Correct Answer)
 (C) A (Chosen option)
 (D) B

Question No.7

Marks: 1.00

Bookmark

Find the odd image out in the given series.



(1)

(2)

(3)

(4)

- (A) 4
 (B) 2
 (C) 1 (Correct Answer) (Chosen option)
 (D) 3

Question No.8

Marks: 1.00

Bookmark

What should be written in the place of question mark in the given series?

C3M13D4N14?18

- (A) S
 (B) R (Correct Answer) (Chosen option)
 (C) Q
 (D) T

Question No.9

Marks: 1.00

Bookmark

In this question, relationship between different elements is shown in the statement.
 This statement is followed by two conclusions:

Statements: $O < R \leq A = N < G > E$

Conclusion:

- i) $O < A$
 ii) $N < E$

Choose the appropriate one from the following options

- (A) Only conclusion i follows
 (B) Only conclusion ii follows
 (C) Either i or ii follows
 (D) Neither i nor ii follows
 (E) Both i and ii follow.
 (A) D
 (B) A (Correct Answer) (Chosen option)
 (C) C
 (D) B

Question No.10

Marks: 1.00

Bookmark

What should be written in the place of question mark in the given series?

A3, C6, ?, G12, I15

- (A) E9 (Correct Answer) (Chosen option)
 (B) D8
 (C) F8
 (D) F9

<p>Question No.11</p> <p>A man is standing in a lawn facing North direction. If the man turns 45 degrees in clockwise direction and 135 degrees in anti-clockwise direction, which direction will he face now?</p> <p>(A) <input type="radio"/> South (B) <input type="radio"/> North (C) <input type="radio"/> East (D) <input checked="" type="radio"/> West (Correct Answer) (Chosen option)</p>	<p>Marks: 1.00</p> <p>Bookmark <input type="checkbox"/></p>
<p>Question No.12</p> <p>In a certain code language, if ABOUT is coded as DERXW, then how is DAILY coded in that language?</p> <p>(A) <input type="radio"/> CPMEH (B) <input type="radio"/> DGLBO (C) <input checked="" type="radio"/> GDLOB (Correct Answer) (Chosen option) (D) <input type="radio"/> WZROB</p>	<p>Marks: 1.00</p> <p>Bookmark <input type="checkbox"/></p>
<p>Question No.13</p> <p>In this question, relationship between different elements is shown in the statement. This statement is followed by two conclusions: Statements: $F < I \leq G = H < T > E \geq R > S$ Conclusion: i) $F \leq G$ ii) $T > R$</p> <p>Choose the appropriate one from the following options</p> <p>(A) Only conclusion i follows (B) Only conclusion ii follows (C) Either i or ii follows (D) Neither i nor ii follows (E) Both i and ii follow.</p> <p>(A) <input checked="" type="radio"/> B (Correct Answer) (Chosen option) (B) <input type="radio"/> D (C) <input type="radio"/> C (D) <input type="radio"/> A</p>	<p>Marks: 1.00</p> <p>Bookmark <input type="checkbox"/></p>
<p>Question No.14</p> <p>Choose the alternative which is an odd word/number/letter pair out of the given alternatives.</p> <p>(A) <input checked="" type="radio"/> Receive (Correct Answer) (B) <input type="radio"/> Give (C) <input type="radio"/> Grant (Chosen option) (D) <input type="radio"/> Offer</p>	<p>Marks: 1.00</p> <p>Bookmark <input type="checkbox"/></p>
<p>Question No.15</p> <p>In a certain code language, if GIANT is coded as TRZMG, then how is ROUTE coded in that language?</p> <p>(A) <input type="radio"/> KZAUX (B) <input checked="" type="radio"/> ILFGV (Correct Answer) (Chosen option)</p>	<p>Marks: 1.00</p> <p>Bookmark <input type="checkbox"/></p>

- (C) VSYI
(D) SVYIX

Question No.16

Marks: 1.00

Bookmark

Replace the question mark with an option that follows the same logic applied in the first pair

Bad : Inferior :: Good : ??

- (A) Unlucky
(B) Poor
(C) Pleasant (Correct Answer) (Chosen option)
(D) Nasty

Question No.17

Marks: 1.00

Bookmark

Looking at a photograph of a boy, a man said, "He is my son's sister's mother's husband's father-in-law." How is the boy related to the man?

- (A) Son
(B) Father-in-law (Correct Answer) (Chosen option)
(C) Uncle
(D) Nephew

Case Study - 18 to 19

2.00

Directions:

Study the following table and answer the questions.

Number of Candidates Appeared and Qualified in a Competitive Examination from different states over the years.

State	X		Y		Z	
Year	Appeared	Qualified	Appeared	Qualified	Appeared	Qualified
2001	45	34	42	31	50	39
2002	56	44	53	41	61	49
2003	78	69	75	66	83	74
2004	36	30	33	27	41	35
2005	84	62	81	59	89	67

Question No.18

Marks: 1.00

Bookmark

What is the number of candidates who qualified from State Y during the given years?

- (A) 224 (Correct Answer) (Chosen option)
(B) 214
(C) 244
(D) 234

Question No.19

Marks: 1.00

Bookmark

Find the number of candidates who got qualified from all the states during 2001 and 2002.

- (A) 249
(B) 238 (Correct Answer) (Chosen option)
(C) 284
(D) 324

Question No.20

Marks: 1.00

Bookmark

Out of 157 girls in a class, 65 students have been to Ooty, 80 students have been to Mysore, 52 students have been to Mumbai. 18 have been to both Ooty and Mysore; 15 have been to Mysore and Mumbai; 10 have been to both Mumbai and Ooty. 3 have been to all the 3 places.

Find the number of girls who have been to both Mysore and Mumbai only.

- (A) 15
(B) 12 (Correct Answer)
(C) 7
(D) 18

Question No.21

Marks: 1.00

Bookmark

Replace the question mark with an option that follows the same logic applied in the first pair

BLT : DNV :: ?? : GOQ

- (A) EMO (Correct Answer) (Chosen option)
(B) FNQ
(C) FMO
(D) ENQ

Question No.22

Marks: 1.00

Bookmark

"Each question given below consists of a statement, followed by two arguments numbered 1 and 2. You have to decide which of the arguments is a 'strong' argument and which is a 'weak' argument.

Give answer:

- (A) If only argument 1 is strong
(B) If only argument 2 is strong
(C) If either 1 or 2 is strong
(D) If neither 1 nor 2 is strong and
(E) If both 1 and 2 are strong.

Statement: Can social media influence health promotion?

Argument:

1. No, Social media is not a cost-effective tool for health promotions.
2. Yes, Social media is a key way to raise public awareness about new, emerging, and annual health concerns.

- (A) A
(B) B (Correct Answer)
(C) C (Chosen option)
(D) D

Question No.23

Marks: 1.00

Bookmark

Select the combination of numbers so that letters arranged accordingly will form a meaningful word.

1.L 2. R 3. W 4. O 5. D

- (A) 2, 1, 3, 5, 4
(B) 3, 4, 5, 2, 1
(C) 3, 4, 2, 1, 5 (Correct Answer) (Chosen option)
(D) 2, 1, 4, 5, 3

Question No.24

Marks: 1.00

Bookmark

Pointing to a boy, a girl said, "He is my father's sister's husband's daughter's brother."
How is the girl related to the boy?

- (A) Sister
(B) Nephew
(C) **Cousin (Correct Answer)** (Chosen option)
(D) Niece

Question No.25

Marks: 1.00

Bookmark

Choose the alternative which is an odd word/number/letter pair out of the given alternatives.

- (A) Blue
(B) Black
(C) **Peas (Correct Answer)** (Chosen option)
(D) Green

General Awareness and Current Events - General Awareness and Current Events**Question No.1**

Marks: 1.00

Bookmark

The institution of Speaker and Deputy speaker originated in India under the provision of:

- (A) **Government of India Act of 1919 (Correct Answer)**
(B) Indian Councils Act of 1909
(C) Government of India Act of 1935 (Chosen option)
(D) Indian Independence Act of 1947

Question No.2

Marks: 1.00

Bookmark

Who was the only President to be elected unopposed in Independent India?

- (A) **Neelam Sanjeeva Reddy (Correct Answer)** (Chosen option)
(B) Giani Zail Singh
(C) V V Giri
(D) Dr A P J Abdul Kalam

Question No.3

Marks: 1.00

Bookmark

Which of the following Cities of Odisha is also called Silver City due to its history of famous silver filigree works?

- (A) **Cuttack (Correct Answer)** (Chosen option)
(B) Berhampur
(C) Rourkela
(D) Sambalpur

Question No.4

Marks: 1.00

Bookmark

Who among the following was the first woman Prime Minister of United Kingdom?

- (A) **Margaret Thatcher (Correct Answer)**
(B) Angela Merkel
(C) Mary Robinson

(D) Julia Gillard

Question No.5

Marks: 1.00

Bookmark

A regulatory body in India, "SEBI" stands for?

- (A) **Securities and Exchange Board of India (Correct Answer)** (Chosen option)
(B) State Emission Board Of India
(C) Staff Engagement Board of India
(D) Stock and Equity Board Investment

Question No.6

Marks: 1.00

Bookmark

Kabul is the capital of which of the following countries?

- (A) Bangladesh
(B) Pakistan
(C) Kazakhstan
(D) **Afghanistan (Correct Answer)** (Chosen option)

Question No.7

Marks: 1.00

Bookmark

The UNESCO World Heritage Site "Agra Fort" is located in which state?

- (A) **Uttar Pradesh (Correct Answer)** (Chosen option)
(B) Rajasthan
(C) West Bengal
(D) Chhattisgarh

Question No.8

Marks: 1.00

Bookmark

What is the rank of India in the UNDP Human Development Index 2021-2022?

- (A) 151
(B) 191
(C) 101
(D) **132 (Correct Answer)** (Chosen option)

Question No.9

Marks: 1.00

Bookmark

Which of the following is the only active volcano in India?

- (A) Pamban Island
(B) Agatti Island
(C) Majuli Island
(D) **Barren Island (Correct Answer)** (Chosen option)

Question No.10

Marks: 1.00

Bookmark

Who among the following was popularly known as "Lokmanya"?

- (A) Anandha Charlu
(B) Dadabhai Naoroji
(C) **Bal Gangadhar Tilak (Correct Answer)** (Chosen option)
(D) E.V. Ramasamy

<p>Question No.11</p> <p>Which of the following kingdoms was founded by Harihara and Bukka?</p> <p>(A) <input checked="" type="radio"/> Kingdom of Vijayanagara (Correct Answer)</p> <p>(B) <input type="radio"/> Kingdom of Cholas</p> <p>(C) <input type="radio"/> Kingdom of Bahmani</p> <p>(D) <input type="radio"/> Kingdom of Pandyas</p>	<p>Marks: 1.00</p> <p>Bookmark <input type="checkbox"/></p>
<p>Question No.12</p> <p>Shyok river is a tributary of which river?</p> <p>(A) <input type="radio"/> Ganges</p> <p>(B) <input type="radio"/> Brahmaputra (Chosen option)</p> <p>(C) <input type="radio"/> Yamuna</p> <p>(D) <input checked="" type="radio"/> Indus (Correct Answer)</p>	<p>Marks: 1.00</p> <p>Bookmark <input type="checkbox"/></p>
<p>Question No.13</p> <p>Who was the last Ganga king of Odisha, who ascended the throne following Narasimhadeva IV's death in 1414 A.D.?</p> <p>(A) <input type="radio"/> Vajrahasta V</p> <p>(B) <input type="radio"/> Devendravarman V</p> <p>(C) <input checked="" type="radio"/> Bhanudeva IV (Correct Answer) (Chosen option)</p> <p>(D) <input type="radio"/> Anangabhima Deva III</p>	<p>Marks: 1.00</p> <p>Bookmark <input type="checkbox"/></p>
<p>Question No.14</p> <p>An International organization, "WTO" stands for:</p> <p>(A) <input type="radio"/> World Anti-Terrorism Organization</p> <p>(B) <input type="radio"/> World Tuberculosis Organization</p> <p>(C) <input checked="" type="radio"/> World Trade Organization (Correct Answer) (Chosen option)</p> <p>(D) <input type="radio"/> World Technology Organization</p>	<p>Marks: 1.00</p> <p>Bookmark <input type="checkbox"/></p>
<p>Question No.15</p> <p>Amartya Sen is an eminent person in which of the following fields?</p> <p>(A) <input type="radio"/> Physiology</p> <p>(B) <input type="radio"/> Astrophysics</p> <p>(C) <input type="radio"/> Athletics</p> <p>(D) <input checked="" type="radio"/> Economics (Correct Answer) (Chosen option)</p>	<p>Marks: 1.00</p> <p>Bookmark <input type="checkbox"/></p>
<p>Question No.16</p> <p>As on May 2022, which country is the largest supplier of crude oil to India?</p> <p>(A) <input type="radio"/> UAE</p> <p>(B) <input type="radio"/> Saudi Arabia (Chosen option)</p> <p>(C) <input checked="" type="radio"/> Iraq (Correct Answer)</p> <p>(D) <input type="radio"/> USA</p>	<p>Marks: 1.00</p> <p>Bookmark <input type="checkbox"/></p>
<p>Question No.17</p>	<p>Marks: 1.00</p> <p>Bookmark <input type="checkbox"/></p>

Jelep La Pass is the trade route between Sikkim and _____.

- (A) Nepal
(B) **China (Correct Answer)** (Chosen option)
(C) Bangladesh
(D) Bhutan

Question No.18

Marks: 1.00

Bookmark

The Radcliffe Line is the boundary demarcation line between India and _____.

- (A) Myanmar
(B) Afghanistan
(C) China
(D) **Pakistan (Correct Answer)** (Chosen option)

Question No.19

Marks: 1.00

Bookmark

Which of the following was the capital of King Kharavela?

- (A) Pishtapura
(B) Viraja
(C) Simhapura
(D) **Kalinganagara (Correct Answer)** (Chosen option)

Question No.20

Marks: 1.00

Bookmark

Which of the following is the birth place of Saint Vallabhacharya, the reformer and founder of the Vallabh Sect?

- (A) Pipili
(B) Raghurajpur
(C) Odagaon
(D) **Champaranya (Correct Answer)**

Question No.21

Marks: 1.00

Bookmark

Which of the following is the most Urbanised district of Odisha as per the 2011 Census?

- (A) **Khordha (Correct Answer)** (Chosen option)
(B) Angul
(C) Jharsuguda
(D) Kandhamal

Question No.22

Marks: 1.00

Bookmark

Which of the following states hosted the 36th National Games of India in 2022?

- (A) Maharashtra
(B) West Bengal
(C) **Gujarat (Correct Answer)** (Chosen option)
(D) Tamil Nadu

Question No.23

Marks: 1.00

Bookmark

United Nations Security Council consists of how many member Countries?

- (A) Ten

- (B) Nine
(C) Fourteen
(D) **Fifteen (Correct Answer)** (Chosen option)

Question No.24

Marks: 1.00

Bookmark

In India, the Venture Capital Fund(VCF) is regulated by:

- (A) Ministry of Corporate Affairs
(B) **Securities and Exchange Board of India (Correct Answer)**
(C) Respective State Governments
(D) Reserve Bank of India (Chosen option)

Question No.25

Marks: 1.00

Bookmark

The Sarvodaya Plan was drafted by:

- (A) Jawaharlal Nehru
(B) Sardar Vallabhbhai Patel
(C) **Jaiprakash Narayan (Correct Answer)** (Chosen option)
(D) M.N. Roy

Computer and Internet Awareness - Computer and Internet Awareness**Question No.1**

Marks: 1.00

Bookmark

In MS Word, placing a large capital letter at the beginning of a paragraph can be achieved by using _____.

- (A) Wordwrap
(B) WordStyle (Chosen option)
(C) **Dropcap (Correct Answer)**
(D) DropLetter

Question No.2

Marks: 1.00

Bookmark

_____ represents 4 bits or half a byte of memory.

- (A) Hexa
(B) Gigabyte
(C) Binary
(D) **Nibble (Correct Answer)** (Chosen option)

Question No.3

Marks: 1.00

Bookmark

_____ tab in MS Word contains commands to create envelopes and labels.

- (A) Page Layout
(B) Insert (Chosen option)
(C) Reference
(D) **Mailings (Correct Answer)**

Question No.4

Marks: 1.00

Bookmark

Where can you find the "Word Count" option in MS Word?

- (A) View-Word Count

- (B) Reference-Word Count (Chosen option)
(C) Insert-Word Count
(D) **Review-Word Count (Correct Answer)**

Question No.5

Marks: 1.00

Bookmark

_____ is the shortcut key to end a powerpoint presentation prematurely.

- (A) **Esc (Correct Answer) (Chosen option)**
(B) Ctrl + B
(C) Alt + C
(D) Ctrl + A

Question No.6

Marks: 1.00

Bookmark

_____ is used to store data and instructions permanently.

- (A) Temporary memory
(B) Primary memory
(C) **Secondary memory (Correct Answer)**
(D) Main memory

Question No.7

Marks: 1.00

Bookmark

_____ device can scan items and retrieve instant information as the customers shop for faster checkout.

- (A) **Barcode scanner (Correct Answer) (Chosen option)**
(B) Retina scanner
(C) Photo scanner
(D) Biometric scanner

Question No.8

Marks: 1.00

Bookmark

Combining the contents of selected adjacent cells into a single cell in Excel can be done using _____ function.

- (A) **CONCATENATE (Correct Answer)**
(B) GROUP
(C) SPLIT
(D) MERGE (Chosen option)

Question No.9

Marks: 1.00

Bookmark

_____ is a malicious software bundle designed to give an unauthorized access to a computer to remotely access and steal data.

- (A) **Rootkit (Correct Answer)**
(B) Worm (Chosen option)
(C) Denial-of-Service
(D) Cookie sniffing

Question No.10

Marks: 1.00

Bookmark

Which feature of Microsoft Excel is used to automate the data entered in a defined sequence?

- (A) Intending
(B) Styles
(C) **Autofill (Correct Answer)** (Chosen option)
(D) Alignment

Question No.11

Marks: 1.00

Bookmark

Remove duplicates option which can be used to delete duplicate values in the selected range of cells is available under _____ tab in Excel.

- (A) View
(B) Filter (Chosen option)
(C) **Data (Correct Answer)**
(D) Review

Question No.12

Marks: 1.00

Bookmark

BIOS stands for _____.

- (A) Basic Input Operating System
(B) Basic Input Output Structure
(C) **Basic Input Output System (Correct Answer)**
(D) Basic Input Operating Structure (Chosen option)

Question No.13

Marks: 1.00

Bookmark

The systems which allows only one process execution at a time are called _____.

- (A) Multitasking systems
(B) Multiprocessing systems
(C) **Uniprogramming systems (Correct Answer)** (Chosen option)
(D) Mon-tasking systems

Question No.14

Marks: 1.00

Bookmark

_____ is a blinking bar that indicates the location where the next character can be typed in.

- (A) Scrollbar
(B) Pointer
(C) Hour glass
(D) **Cursor (Correct Answer)** (Chosen option)

Question No.15

Marks: 1.00

Bookmark

The connectivity port, USB stands for _____.

- (A) Universal Storage Bus
(B) **Universal Serial Bus (Correct Answer)**
(C) Unique Storage Bus (Chosen option)
(D) Unique Serial Bus

Question No.16

Marks: 1.00

Bookmark

A collection of related web pages is known as _____.

- (A) webinar

- (B) **website (Correct Answer)** (Chosen option)
(C) web browser
(D) html

Question No.17

Marks: 1.00

Bookmark

In Microsoft Word, if you are working with a file and want to open the last autosaved draft you need to enable _____.

- (A) File->Version->Manage Versions
(B) **File->Info->Manage Versions (Correct Answer)**
(C) File->Info->Recovery
(D) File->Save->Manage Versions (Chosen option)

Question No.18

Marks: 1.00

Bookmark

_____ is the center of your internet network that serves as the point of contact for all your connected devices.

- (A) Cable
(B) **Router (Correct Answer)** (Chosen option)
(C) Node
(D) Modem

Question No.19

Marks: 1.00

Bookmark

In 1983, Chester Carlson invented the electrophotographic dry printing process known as _____.

- (A) Laser
(B) **Xerox (Correct Answer)** (Chosen option)
(C) Daisy wheel
(D) Dotmatrix

Question No.20

Marks: 1.00

Bookmark

_____ in Microsoft PowerPoint allows the user to see all the slides in the presentation in a single view.

- (A) Normal view
(B) **Slide sorter view (Correct Answer)** (Chosen option)
(C) Notes page view
(D) Image view

Question No.21

Marks: 1.00

Bookmark

What is the shortcut key used to go to the beginning of a line?

- (A) Shift + Home
(B) Ctrl + Home
(C) Alt + Home
(D) **Home (Correct Answer)** (Chosen option)

Question No.22

Marks: 1.00

Bookmark

In MS Word, the Zoom is placed on _____.

- (A) Insert tab
- (B) Review Tab
- (C) Home tab
- (D) **View tab (Correct Answer)** (Chosen option)

Question No.23

Marks: 1.00

Bookmark

In Excel, _____ chart is used to show a percent of total for a data set at a specific point in time.

- (A) Line
- (B) Legend
- (C) Bar
- (D) **Pie (Correct Answer)**

Question No.24

Marks: 1.00

Bookmark

_____ is a device that selects between several analog or digital input signals and forwards the selected input to a single output line.

- (A) Modulator
- (B) Router
- (C) **Multiplexer (Correct Answer)**
- (D) LAN (Chosen option)

Question No.25

Marks: 1.00

Bookmark

In MS-Powerpoint, _____ contains the slide default settings for colors, bullet types and graphics.

- (A) **Template (Correct Answer)**
- (B) Wizard
- (C) Animations (Chosen option)
- (D) Slide Show