


OSSC CGL 2022-23

E-BOOK- PDF

7,000 MCQ

EXPLANATION

All Important Questions & Answers



[Click Here](#)

Tech of World

HOME VIDEOS PLAYLISTS COMMUNITY

ଆମ Channel ରେ ଦେଖନ୍ତୁ Video
ASO ଓଡ଼ିଶା ପୋଷ୍ଟାଲ CT ଓ B.Ed
ଓଡ଼ିଶା ପୋଲିସ SSC GD Railway

Tech of World

SUBSCRIBE

315K subscribers • 928 videos

Hello ସାଙ୍ଗ ମାନେ !! ଆମେ ଏହି Channel ରେ ସବୁ ପ୍ରକାରର Educational Video
Free ରେ ଯେଉଁପାରିବେ ତେଣୁ ଦେଖିବେକି ଜାଣିବି ଏହି "Tech Of World" Channel ରୁ ...

**+2 କିମ୍ବା +3 ପଢ଼ିବା ପରେ
କେମିତି ଜଣେ ଶିକ୍ଷକ
ହେଇପାରିବେ ?
CT ଓ B.Ed ପରେ କଣ ?**

How To Become A Teacher After +2 Or +3 In
Odisha ? How To Get A Teacher Job In Odisha ?

Tech of World · 176K views · 3 years ago

Home Shorts Subscriptions Library

[Click Here](#)

Tech Of World- (Odisha Exam CT)

Uninstall Open

Your Review

sujit kumar naik
★★★★★ 6/29/21

Edit your review

Developer contact

About this app

Tech Of World (Odisha Exam) Provides Mock Test & E-Books For Different Exams

Education

3.8 ★
422 reviews

422 reviews
Rated for 3+
50K+ Downlo.

TECH OF WORLD

Mock Test

[Click Here](#)

Tech Of World
4.1K subscribers

ASO English 2022 By...
8.7 MB PDF

ASO General Knowledge 2022...
4.9 MB PDF

ASO Math 2022 By Techofworld.in.pdf
4.6 MB PDF



ASO Odia Language 2022 By...
2.9 MB PDF

ASO Reasoning 2022 By...
4.6 MB PDF

3 comments

Broadcast

[Click Here](#)

Roll No: Techofworld.In Registration No: Techofworld.In Name: Techofworld.In Exam Date: 12-Oct-2022 Exam Time: 14:00-17:00 Post Name: Combined Graduate Level Examination - 2021	Registered Photo 	Exam Day Photo 
Mathematics - Mathematics		
Question No.1 What will come in place of question mark(?) in the following equation? $933.58 - 317.31 = 864.84 - ?$ (A) <input type="radio"/> 244.57 (B) <input type="radio"/> 242.57 (C) <input type="radio"/> 246.57 (D) <input type="radio"/> 248.57 (Correct Answer) (Chosen option)	Marks: 1.00 Bookmark <input type="checkbox"/>	
Question No.2 What is 30% of 40% of 150% of 200% of 360? (A) <input type="radio"/> 12.96 (B) <input type="radio"/> 1296 (C) <input type="radio"/> 129.6 (Correct Answer) (Chosen option) (D) <input type="radio"/> 1.296	Marks: 1.00 Bookmark <input type="checkbox"/>	
Question No.3 A boat goes 155 km upstream in 31 hours and a distance of 224 km downstream in 32 hours. Find the speed of the boat in still water. (In kmph) (A) <input type="radio"/> 6 (Correct Answer) (B) <input type="radio"/> 12 (Chosen option) (C) <input type="radio"/> 8 (D) <input type="radio"/> 10	Marks: 1.00 Bookmark <input type="checkbox"/>	
Question No.4 A and B can do a work in 225 days, B and C can do it in 150 days, A and C can do it in 90 days. In what time A, B and C together can do the work?(in days) (A) <input type="radio"/> 90 (Correct Answer) (Chosen option) (B) <input type="radio"/> 75 (C) <input type="radio"/> 85 (D) <input type="radio"/> 80	Marks: 1.00 Bookmark <input type="checkbox"/>	
Question No.5 Ajay, Baku, Chettu enter into a partnership. Ajay contributes one-third of the whole capital while Baku contributes as much as the contribution of Ajay and Chettu together. If the profit at the end of the year is Rs.90,000, how much would Chettu receive? (In Rs.) (A) <input type="radio"/> 14000	Marks: 1.00 Bookmark <input type="checkbox"/>	

- (B) 45000
(C) 15000 (Correct Answer) (Chosen option)
(D) 28000

Question No.6

Marks: 1.00

Bookmark

If 81% of a number is added to 380, then the result is the number itself. Find the number.

- (A) 2400
(B) 1800
(C) 2200
(D) 2000 (Correct Answer) (Chosen option)

Question No.7

Marks: 1.00

Bookmark

The ratio of two numbers is 8:9 and their sum is 935. Find the greater of the two numbers.

- (A) 495 (Correct Answer) (Chosen option)
(B) 505
(C) 515
(D) 525

Question No.8

Marks: 1.00

Bookmark

The marked price on an item was Rs.3700 but the shopkeeper offered a double discount of 20% and 15%. How much did he finally sell the item for? (In Rs.)

- (A) 2216
(B) 2416
(C) 2516 (Correct Answer) (Chosen option)
(D) 2316

Question No.9

Marks: 1.00

Bookmark

Erick covered 1652 km in 59 hours. Find the speed at which he travelled.(in kmph)

- (A) 30
(B) 24
(C) 28 (Correct Answer) (Chosen option)
(D) 26

Question No.10

Marks: 1.00

Bookmark

A lent a part of Rs.26000 to X at 9% simple interest and the rest to Y at 4% simple interest. After 5 years, if he got an amount of Rs.33800 in total, then what is the amount lent to Y? (In Rs.)

- (A) 15800
(B) 15500
(C) 15600 (Correct Answer) (Chosen option)
(D) 15700

Question No.11

Marks: 1.00

Bookmark

If the average of three consecutive even numbers is 270, find the largest of these

numbers.

- (A) 272 (Correct Answer) (Chosen option)
(B) 276
(C) 270
(D) 274

Question No.12

Marks: 1.00

Bookmark

280 litres of a mixture of milk and water contains 60% water. How much water should be added so that the mixture has 80% water? (In litres)

- (A) 282
(B) 280 (Correct Answer) (Chosen option)
(C) 286
(D) 284

Question No.13

Marks: 1.00

Bookmark

A can do a piece of work in 2175 days. B is 25% more efficient than A. Find the number of days taken by B to do the same piece of work.

- (A) 1760
(B) 1740 (Correct Answer) (Chosen option)
(C) 1730
(D) 1750

Question No.14

Marks: 1.00

Bookmark

If the average marks of three classes of 75, 80 and 85 students are 75, 80, 85 respectively, find the average marks of all the students. (Approximately)

- (A) 80.20 (Correct Answer) (Chosen option)
(B) 82.20
(C) 84.20
(D) 86.20

Question No.15

Marks: 1.00

Bookmark

From a group of 31 men and 19 women, 3 persons are selected at random. Find the probability that out of the selected three persons, two are women and one is a man. (Approximately in %)

- (A) 27.04 (Correct Answer)
(B) 33.04
(C) 31.04
(D) 29.04

Question No.16

Marks: 1.00

Bookmark

Q completes a journey in 81 hours. She travels first half of the journey at the rate of 78 kmph and second half at the rate of 84 kmph. Find the total distance of the entire journey. (In km)

- (A) 6772
(B) 6662
(C) 6552 (Correct Answer) (Chosen option)
(D) 6442

Question No.17

Marks: 1.00

Bookmark

If $18a=19b$ and $21b=18c$, find $a:b:c$.

- (A) 18:19:21
(B) 21:18:19
(C) 18:21:19
(D) 19:18:21 (Correct Answer) (Chosen option)

Question No.18

Marks: 1.00

Bookmark

The average weight of all the 11 players of Real Madrid is 71 kg. If the average of first six light weight players of Real Madrid is 69 kg and that of the six heavy weight players of Real Madrid is 73 kg, find the weight of the player which lies in the sixth position in the list of players when all the 11 players of Real Madrid are arranged in the order of increasing or decreasing weights. (In kg)

- (A) 73
(B) 77
(C) 75
(D) 71 (Correct Answer) (Chosen option)

Question No.19

Marks: 1.00

Bookmark

The difference between simple interest and compound interest at the same rate for Rs.5700 for 2 years is Rs.57. Find the rate of interest.

- (A) 20%
(B) 15%
(C) 5%
(D) 10% (Correct Answer) (Chosen option)

Question No.20

Marks: 1.00

Bookmark

If the arithmetic mean of 13 observations 427, 428, 430, 421, 429, 423, 425, 420, 428, 429, X, 423, 427 is 414. Find the value of "X" in the observations.

- (A) 276
(B) 274
(C) 278
(D) 272 (Correct Answer) (Chosen option)

Question No.21

Marks: 1.00

Bookmark

The average of 11 numbers is 116.9. If the average of first six is 116.3 and that of the last six is 117.5, then the sixth number is:

- (A) 112.9
(B) 116.9 (Correct Answer) (Chosen option)
(C) 110.9
(D) 114.9

Question No.22

Marks: 1.00

Bookmark

What value should come in the place of question mark (?) in the following question?
 $657/900-557/900+457/900 = ?$

- (A) 0.518888
(B) 0.418888
(C) **0.618888 (Correct Answer)** (Chosen option)
(D) 0.718888

Question No.23

Marks: 1.00

Bookmark

Milk and water are in the ratio of 3:2 in a mixture of 150 liters. How much water should be added so that the ratio of milk and water becomes 2:3? (In litres)

- (A) 81
(B) 77
(C) **75 (Correct Answer)** (Chosen option)
(D) 79

Question No.24

Marks: 1.00

Bookmark

Three friends A, B, C invested in a business in the ratio of 3:2:6. After 6 months, C withdraw half his capital. If the total profit earned for the year is Rs.53010, then find the profit earned by A. (In Rs.)

- (A) 17740
(B) **16740 (Correct Answer)** (Chosen option)
(C) 19740
(D) 18740

Question No.25

Marks: 1.00

Bookmark

0.126 x 0.0232 is equal to:

- (A) 0.0029332
(B) **0.0029232 (Correct Answer)** (Chosen option)
(C) 0.0029432
(D) 0.0029132

Question No.26

Marks: 1.00

Bookmark

Find the fraction of 0.5055555...

- (A) **455/900 (Correct Answer)** (Chosen option)
(B) 453/900
(C) 457/900
(D) 555/900

Question No.27

Marks: 1.00

Bookmark

Find the simple interest on Rs.12200 at 45% per annum for 6 months. (In Rs)

- (A) **2745 (Correct Answer)**
(B) 2845 (Chosen option)
(C) 2645
(D) 2545

Question No.28

Marks: 1.00

Bookmark

A can do a piece of work in 82 days, B can do in 123 days and C can do the same work

alone in 164 days. If, on the first day, A worked alone and on the second day, B and C worked together and on the third day, A and C worked together and if they repeat the cycle, then in how many days, the total work can be completed?

- (A) 61(2/7)
(B) 63(2/7)
(C) 67(2/7) (Correct Answer) (Chosen option)
(D) 65(2/7)

Question No.29

Marks: 1.00

Bookmark

A sum of money invested at simple interest triples itself in 19 years. In how many years will it become 21 times itself at the same rate of interest?

- (A) 195
(B) 190 (Correct Answer) (Chosen option)
(C) 197
(D) 185

Question No.30

Marks: 1.00

Bookmark

In what ratio must a grocer mix two varieties of pulses costing Rs.72 and Rs.96 per kg respectively so as to get a mixture worth Rs.83 per kg?

- (A) 11:13
(B) 13:10
(C) 10:13
(D) 13:11 (Correct Answer) (Chosen option)

Question No.31

Marks: 1.00

Bookmark

What is the difference between a discount of 25% on Rs.22000 and two successive discounts of 15% and 10% on the same amount? (In Rs.)

- (A) 300
(B) 330 (Correct Answer) (Chosen option)
(C) 310
(D) 320

Question No.32

Marks: 1.00

Bookmark

Simple interest on a sum at 20% per annum for 2 years is Rs.560. Find the amount under compound interest on the same sum for the same period and same rate of interest. (In Rs)

- (A) 2016 (Correct Answer) (Chosen option)
(B) 2036
(C) 2006
(D) 2026

Question No.33

Marks: 1.00

Bookmark

A five digit number is formed with the digits 5, 6, 7, 8 and 9 without repetition. Find the probability that the number is divisible by 5.

- (A) 4/5
(B) 3/5
(C) 2/5

(D) 1/5 (Correct Answer) (Chosen option)

Question No.34

Marks: 1.00

Bookmark

A can contains 108 litres of rose milk at Rs.22.5 per litre. How much water which is free of cost must be added to this can so that the cost of rose milk reduces to Rs.18 per litre? (In litres)

- (A) 29
(B) 31
(C) 33
(D) 27 (Correct Answer) (Chosen option)

Question No.35

Marks: 1.00

Bookmark

2 men and 3 boys can do a piece of work in 765 days while 3 men and 2 boys can do the same work in 612 days. In how many days can 5 men and 5 boy do the work?

- (A) 310
(B) 330
(C) 340 (Correct Answer) (Chosen option)
(D) 320

Question No.36

Marks: 1.00

Bookmark

Akash and Babu started a partnership business investing some amount in the ratio of 4 : 7. Charan joined them after six months with an amount equal to that of Babu. In what proportion should the profit at the end of one year be distributed amount Akash, Babu and Charan?

- (A) 8:7:14
(B) 7:8:14
(C) 8:14:7 (Correct Answer) (Chosen option)
(D) 14:7:8

Question No.37

Marks: 1.00

Bookmark

A train takes 59 seconds to cross a bridge of length 55 m. If the same train takes 54 seconds to cross a man standing on the bridge, find the length of the train. (In m)

- (A) 584
(B) 594 (Correct Answer) (Chosen option)
(C) 564
(D) 574

Question No.38

Marks: 1.00

Bookmark

45/8 divided by 2 is:

- (A) 2.8125 (Correct Answer) (Chosen option)
(B) 2.9125
(C) 2.6125
(D) 2.7125

Question No.39

Marks: 1.00

Bookmark

XYZ mixes 48 kg of rice worth Rs.55 per kg with 52 kg of rice worth Rs.75 per kg. At

what rate should he sell the mixture to gain 20%? (In Rs.)

- (A) **78.48 (Correct Answer)** (Chosen option)
(B) 82.48
(C) 80.48
(D) 84.48

Question No.40

Marks: 1.00

Bookmark

The printed price of a system monitor is Rs.15500. If a sales tax of 8% is realised from the buyer, find the price at which the system monitor is sold. (In Rs.)

- (A) **16740 (Correct Answer)** (Chosen option)
(B) 16780
(C) 16800
(D) 16760

Question No.41

Marks: 1.00

Bookmark

The price of a CPU is Rs.19266 inclusive of sales tax. If the rate of sales tax is 14%, find the printed price of the CPU. (In Rs.)

- (A) **16900 (Correct Answer)** (Chosen option)
(B) 16800
(C) 16700
(D) 16600

Question No.42

Marks: 1.00

Bookmark

If a traveller covers a distance of 8225 metres in 47 seconds, find the speed of the traveller.(in kmph)

- (A) 640
(B) 620
(C) **630 (Correct Answer)**
(D) 610 (Chosen option)

Question No.43

Marks: 1.00

Bookmark

The length, breadth and height of a room in the shape of a cuboid are increased by 15%, 20% and 30% respectively. Find the percentage change in the volume of the cuboid.

- (A) **79.4% increase (Correct Answer)** (Chosen option)
(B) 83.4% increase
(C) 79.4% decrease
(D) 83.4% decrease

Question No.44

Marks: 1.00

Bookmark

Antonio can finish a work in 66 days and Brady can do the same work in 132 days. On working together, they will complete the same work in how many days?

- (A) **44 (Correct Answer)** (Chosen option)
(B) 46
(C) 50
(D) 48

Question No.45

Marks: 1.00

Bookmark

Srithar donates 18% of his savings to an old age home, 18% of the savings to an orphanage and 18% of his savings to foundations for medical help. The remaining amount Rs.9200 of savings is deposited in bank. Find the salary of Srithar, if 80% of the salary is his savings amount. (In Rs.)

- (A) 20000
(B) 35000
(C) 25000 (Correct Answer) (Chosen option)
(D) 40000

Question No.46

Marks: 1.00

Bookmark

In a moderately asymmetrical series, the values of arithmetic mean and median are 149 and 149.5 respectively. What is the value of the mode?

- (A) 152.5
(B) 150.5 (Correct Answer) (Chosen option)
(C) 154.5
(D) 156.5

Question No.47

Marks: 1.00

Bookmark

The average height of 33 telecom towers which are arranged in an ascending order is 286 m. If the average height of first 16 telecom towers is 286 m and that of last 16 telecom towers is 286 m, then what is the height of 17th telecom tower? (In m)

- (A) 306
(B) 276
(C) 296
(D) 286 (Correct Answer) (Chosen option)

Question No.48

Marks: 1.00

Bookmark

A dealer bought a washing machine for Rs.19100 and sold at a gain of 5%. Find its selling price. (In Rs)

- (A) 20055 (Correct Answer) (Chosen option)
(B) 21055
(C) 22055
(D) 23055

Question No.49

Marks: 1.00

Bookmark

A 595 litre of mixture contains milk and water in the ratio 17:18. How much milk must be added to the mixture so that it contains milk and water in the proportion of 3:2? (In litres)

- (A) 180
(B) 170 (Correct Answer) (Chosen option)
(C) 190
(D) 160

Question No.50

Marks: 1.00

What is 25% of 50% of 75% of 80% of 4520?

- (A) 329



- (B) 339 (Correct Answer) (Chosen option)
(C) 359
(D) 349

Reasoning - Reasoning**Question No.1**

Marks: 1.00

Bookmark

If every alternate letter starting from the left end of the word REPRODUCTION is written in capital letters, rest all are written in small letters, the new word thus formed is reversed, which letter will be fifth to the left of the letter third from the right?

- (A) c (Correct Answer) (Chosen option)
(B) d
(C) U
(D) O

Question No.2

Marks: 1.00

Bookmark

What will be written in the place of question mark in the given series?
F6M13Z26E5?23

- (A) W (Correct Answer) (Chosen option)
(B) X
(C) Z
(D) Y

Question No.3

Marks: 1.00

Bookmark

In this question, a statement is given followed by two conclusions numbered i and ii. You have to assume everything in the statement to be true, then consider the two conclusions together and decide which of them logically follows beyond a reasonable doubt from the information given in the statement.

Statement: It rains every Monday. It rains today.

Conclusion:

- i) It must be a rainy season.
ii) Today is Monday

Choose the appropriate one from the following options

- (A) Only conclusion i follows
(B) Only conclusion ii follows
(C) Either i or ii follows
(D) Neither i nor ii follows and
(E) Both i and ii follow.
(A) C
(B) A
(C) B
(D) D (Correct Answer) (Chosen option)

Question No.4

Marks: 1.00

Bookmark

A stands in the 3rd position from the front of the queue and there are 3 persons between A and B. B stands after A. If the first two person are removed from the queue then what is the position of B from the front of the queue?

- (A) 6
(B) 3

- (C) 4
(D) 5 (Correct Answer) (Chosen option)

Question No.5

Marks: 1.00

Bookmark

In this question, relationship between different elements is shown in the statement.
This statement is followed by two conclusions:

Statements: $T < H < I > R > F = Y$

Conclusion:

- i) $R > Y$
ii) $I > Y$

Choose the appropriate one from the following options

- (A) Only conclusion i follows
(B) Only conclusion ii follows
(C) Either i or ii follows
(D) Neither i nor ii follows
(E) Both i and ii follow.
(A) B
(B) E (Correct Answer) (Chosen option)
(C) A
(D) C

Question No.6

Marks: 1.00

Bookmark

Find the next term in given series.
GENERATION, ERAT, ENERATIO, RA, ?

- (A) NERATI (Correct Answer) (Chosen option)
(B) NERATIO
(C) RATIO
(D) ERATIO

Question No.7

Marks: 1.00

Bookmark

The statement given below is followed by assumptions numbered as 1 and 2. Look at the statements and decide which of the assumptions is/are implicit.
Give your answer as per below options:

- A) If only assumption 1 is implicit.
B) If only assumption 2 is implicit.
C) If neither 1 nor 2 is implicit.
D) If both 1 and 2 are implicit.

Statement: Demonetisation pushed people to opt for cashless transactions.

Assumptions:

1. There was scarcity of liquid cash available to the public.
2. People are accepting this process due to smoothness, clarity and more active bank transactions.

- (A) D (Correct Answer)
(B) B
(C) A (Chosen option)
(D) C

Case Study - 8 to 11

4.00

Directions: Read the given information carefully and answer the questions that follow.

Four students P, Q, R and S are sitting in a row facing North(not necessarily in same order). All four of them like four different subjects namely Maths, Physics, History and Biology.

- i) One who likes Maths and History sit in the extreme ends of the line.
- ii) R sits second to the right of the one who likes History.
- iii) R doesn't like Biology and S doesn't like Maths.
- iv) P and S are not neighbours.
- v) Q and the one who likes Biology are neighbours.

Question No.8

Marks: 1.00

Bookmark

Which of the following statements is true with respect to the arrangement?

- (A) **One who likes Biology sits between Q and R (Correct Answer)** (Chosen option)
- (B) Q likes Physics
- (C) R and Q are neighbours
- (D) S sits between R and P

Question No.9

Marks: 1.00

Bookmark

Who likes Biology?

- (A) Q (Chosen option)
- (B) **S (Correct Answer)**
- (C) R
- (D) P

Question No.10

Marks: 1.00

Bookmark

Who sit at an extreme end of the row?

- (A) One who likes Physics
- (B) **Q (Correct Answer)**
- (C) One who likes Biology
- (D) S (Chosen option)

Question No.11

Marks: 1.00

Bookmark

Who sits between S and R?

- (A) **None (Correct Answer)**
- (B) Q (Chosen option)
- (C) One who likes Physics
- (D) P

Question No.12

Marks: 1.00

Bookmark

Find the next term in the given series.

G4, K12, O20, S28, ?

- (A) W35
- (B) U36
- (C) V35
- (D) **W36 (Correct Answer)** (Chosen option)

Question No.13

Marks: 1.00

Bookmark

In a certain code language, if GODARD is coded as OGDADR, then how is SILVER coded

in that language?

- (A) SVEILR
(B) ISLVRE (Correct Answer) (Chosen option)
(C) SLIEVR
(D) ISVLRE

Question No.14

Marks: 1.00

Bookmark

Suppose the first and the second letters of the word SUPERNATURAL changed places, also the third and the fourth, the fifth and the sixth, and so on. In the new word, thus formed, which letter would be the 6th from left?

- (A) N
(B) R (Correct Answer) (Chosen option)
(C) P
(D) A

Question No.15

Marks: 1.00

Bookmark

In this question, relationship between different elements is shown in the statement. This statement is followed by two conclusions:

Statement: $T > H > O \geq U = S < A < N \leq D$

Conclusions:

- i) $T > O$
ii) $D \geq A$

Choose the appropriate one from the following options

- (A) Only conclusion i follows
(B) Only conclusion ii follows
(C) Either i or ii follows
(D) Neither i nor ii follows
(E) Both i and ii follow
(A) A (Correct Answer) (Chosen option)
(B) D
(C) C
(D) B

Question No.16

Marks: 1.00

Bookmark

Pointing to a girl, a man said, "She is the daughter of my grandmother's only child's only child." How is the man related to the girl?

- (A) Brother
(B) Father (Correct Answer) (Chosen option)
(C) Cousin
(D) Uncle

Question No.17

Marks: 1.00

Bookmark

The statement given below is followed by assumptions numbered as 1 and 2. Look at the statements and decide which of the assumptions is/are implicit.

Give your answer as per below options:

- A) If only assumption 1 is implicit.
B) If only assumption 2 is implicit.
C) If neither 1 nor 2 is implicit.



D) If both 1 and 2 are implicit.

Statement: Move older products to the front of your fridge and new ones to the back.

Assumptions:

1. Food gets forgotten about is because it's left in the back of the fridge or blocked by other items.
2. The chances of food spoiling in your fridge can be reduced.

- (A) A (Chosen option)
 (B) C
 (C) B
 (D) D (Correct Answer)

Question No.18

Marks: 1.00

Bookmark

In this question, relationship between different elements is shown in the statement. This statement is followed by two conclusions:

Statement: $E < Q = U > A \geq T = I < O \leq N$

Conclusions:

- i) $A > I$
- ii) $O > A$

Choose the appropriate one from the following options

- (A) Only conclusion i follows
 (B) Only conclusion ii follows
 (C) Either i or ii follows
 (D) Neither i nor ii follows
 (E) Both i and ii follow
 (A) A
 (B) D (Correct Answer)
 (C) C
 (D) B (Chosen option)

Question No.19

Marks: 1.00

Bookmark

In this question, relationship between different elements is shown in the statement. This statement is followed by two conclusions:

Statement: $S < A \leq N < D = W > I \geq C > H$

Conclusions:

- i) $H \leq I$
- ii) $A < W$

Choose the appropriate one from the following options

- (A) Only conclusion i follows
 (B) Only conclusion ii follows
 (C) Either i or ii follows
 (D) Neither i nor ii follows
 (E) Both i and ii follow
 (A) A
 (B) B (Correct Answer) (Chosen option)
 (C) D
 (D) C

Question No.20

Marks: 1.00

Bookmark

If in the number sequence 2 3 4 5 6 1 2 3 5 4 6 6 7 8, all the odd numbers are increased

by two and all the even numbers are decreased by two, then the new number sequence is arranged in descending order, which will be the fifth digit from the left?

- (A) 7
(B) 5 (Correct Answer) (Chosen option)
(C) 4
(D) 6

Question No.21

Marks: 1.00

Bookmark

Pointing to a boy, a man said, "He is my father's sister's husband's only son." How is the man related to the boy?

- (A) Cousin (Correct Answer) (Chosen option)
(B) Brother
(C) Uncle
(D) Nephew

Question No.22

Marks: 1.00

Bookmark

The statement given below is followed by assumptions numbered as 1 and 2. Look at the statements and decide which of the assumptions is/are implicit.

Give your answer as per below options:

- A) If only assumption 1 is implicit.
B) If only assumption 2 is implicit.
C) If neither 1 nor 2 is implicit.
D) If both 1 and 2 are implicit.

Statement: Equality ensures that every individual has an equal opportunity to make the most of their lives and talents.

Assumptions:

1. No one should have poorer life chances because of the way they were born or where they come from.
2. Equality is important as it is the foundation of any fair society.

- (A) C (Chosen option)
(B) A
(C) B
(D) D (Correct Answer)

Question No.23

Marks: 1.00

Bookmark

Find the next term in the given series.

ACCOMPLISHMENTS, OMPLISHME, CCOMPLISHMENT, MPLISHM, COMPLISHMEN, ?

- (A) OMPLISH
(B) PLISH (Correct Answer) (Chosen option)
(C) OMPLISHM
(D) PLISHM

Question No.24

Marks: 1.00

Bookmark

B is the granddaughter of C who has only one child. D is C's husband who has a brother E and daughter A. How is B related to D?

- (A) Daughter
(B) Granddaughter (Correct Answer) (Chosen option)
(C) Daughter-in-law

(D) Niece

Case Study - 25 to 29

5.00

Directions:

In each of the following questions, a few statements have been given. Analyse the given statements and answer whether the data given in the statements are sufficient to answer the question or not.

Give answer

- A) If data in the statement I alone is sufficient to answer the question.
B) If data in the statement II alone is sufficient to answer the question.
C) If data either in the statement I alone or statement II alone are sufficient to answer the question.
D) If data given in both I & II together are not sufficient to answer the question.
E) If data in both statements I & II together are necessary to answer the question.

Question No.25

Marks: 1.00

Bookmark

Question: Who among the Kim's children is the eldest?

Statements:

I: Kim has 4 sons: Joe, Jim, Fet and Tim.

II: Fet is younger to Joe who is younger to all other brothers.

- (A) D (Correct Answer) (Chosen option)
(B) B
(C) C
(D) A

Question No.26

Marks: 1.00

Bookmark

Question: What is the profit of earned by selling a mobile at Rs.25800?

Statements:

I: The cost price of 3 mobiles is equal to selling price of 2 mobiles.

II: 20% profit is earned by selling a mobile at 21500.

- (A) E
(B) C (Correct Answer)
(C) A (Chosen option)
(D) D

Question No.27

Marks: 1.00

Bookmark

Question: In a certain code language, how is ONE coded?

Statements:

I: In the same language, NOT is coded as 423

II: In the same language, PEN is coded as 674

- (A) C
(B) B
(C) E (Correct Answer) (Chosen option)
(D) A

Question No.28

Marks: 1.00

Bookmark

Question: What is the rate of interest per annum?

Statements:

I: The difference between the SI and CI at same rate of interest is 30.

II: The amount doubles itself in 5 years under simple interest.



- (A) D
(B) A
(C) **B (Correct Answer)** (Chosen option)
(D) E

Question No.29

Marks: 1.00

Bookmark

Question: What is the area of rectangle?

Statements:

I: The perimeter of the rectangle is 100 sq. mts.

II: The length of the rectangle is 20m.

- (A) A
(B) D
(C) C
(D) **E (Correct Answer)** (Chosen option)

Question No.30

Marks: 1.00

Bookmark

A, who is the son of F, is married to B whose brother is C. D is the wife of C and daughter of E. E is married to F. How is D related to A?

- (A) **Sister (Correct Answer)**
(B) Mother
(C) Aunt
(D) Sister-in-law (Chosen option)

Question No.31

Marks: 1.00

Bookmark

In a certain code language, if BREATH is coded as HTAERB, then how is BROKEN coded in that language?

- (A) OBRENK
(B) **NEKORB (Correct Answer)** (Chosen option)
(C) RBKONE
(D) ORBNEK

Question No.32

Marks: 1.00

Bookmark

In a certain code language:

'clean and neat' is written as 'so ra ni',

'neat white floor' is written as 'ju pa ra',

'bright clean floor' is written as 'ni ju ma'.

What does the code 'ma' stand for?

- (A) clean
(B) neat
(C) floor
(D) **bright (Correct Answer)** (Chosen option)

Question No.33

Marks: 1.00

Bookmark

In a certain code language, if ADOPT is coded as 14151620, then how is DATED coded in that language?

- (A) **412054 (Correct Answer)** (Chosen option)
(B) 411054



(C) 411045

(D) 412045

Question No.34

Marks: 1.00

Bookmark

All persons in a row are facing North, A is 10th to the left of B who is at the extreme right. A has 3 persons on the left. What is the total number of persons in the row?

(A) 14 (Correct Answer) (Chosen option)

(B) 11

(C) 12

(D) 13

Case Study - 35 to 38

4.00

Directions: In the following questions, few statements are given and these statements are followed by two conclusions numbered i and ii. You have to take the given statements to be true even if they seem to be at variance from commonly known facts. Read the conclusions and then decide which of the given conclusions logically follows from the given statements, disregarding commonly known facts.

Choose,

(A) Only (i) conclusion follows

(B) Only (ii) conclusion follows

(C) Neither (i) nor (ii) follows

(D) Both (i) and (ii) follow

(E) Either (i) or (ii) follows

Question No.35

Marks: 1.00

Bookmark

Statements: All cities are towns. Some towns are states. All states are continents.

Conclusions:

i) Some cities are states.

ii) Some continents are cities.

(A) A

(B) B (Chosen option)

(C) D

(D) C (Correct Answer)

Question No.36

Marks: 1.00

Bookmark

Statements: All Bats are balls. Some balls are Balloons.

Conclusions:

i) Some Bats are Balloons.

ii) Some balls are Bats.

(A) E

(B) B (Correct Answer)

(C) C

(D) A

Question No.37

Marks: 1.00

Bookmark

Statements: All oaks are banyans. All banyans are palms. All palms are trees.

Conclusions:

i) All oaks are palms.

ii) All banyans are trees.

(A) A

(B) D (Correct Answer) (Chosen option)



- (C) B
(D) C

Question No.38

Marks: 1.00

Bookmark

Statements: No song is lyric. No lyric is good.

Conclusions:

- i) All songs are goods.
ii) Some goods are songs.

- (A) B
(B) C (Correct Answer) (Chosen option)
(C) A
(D) D

Case Study - 39 to 43

5.00

Directions: Read the given information carefully and answer the questions that follow.

Six friends Arun, Bala, Celin, Dinu, Esha and Felix sit around a circular table facing centre.

- i) Esha sits second to the right of Arun.
ii) Bala doesn't sit opposite to Esha.
iii) Dinu and Celin are neighbours and there are two people between Arun and Dinu.

Question No.39

Marks: 1.00

Bookmark

If Arun interchanges his position with Bala, Dinu interchanges his position with Esha, who sits third to the right of Celin?

- (A) Arun (Correct Answer) (Chosen option)
(B) Dinu
(C) Esha
(D) Bala

Question No.40

Marks: 1.00

Bookmark

How many people sit between Bala and Dinu, counting to the right of Dinu?

- (A) 3 (Correct Answer) (Chosen option)
(B) 2
(C) 1
(D) 4

Question No.41

Marks: 1.00

Bookmark

Who sits exactly opposite to Esha?

- (A) Celin
(B) Felix (Correct Answer) (Chosen option)
(C) Dinu
(D) Arun

Question No.42

Marks: 1.00

Bookmark

Who sits second to the left of Dinu?

- (A) Felix
(B) Bala (Correct Answer) (Chosen option)
(C) Arun

(D) Esha

Question No.43

Marks: 1.00

Bookmark

Who sits to the immediate right of Felix?

- (A) Dinu
(B) Arun (Correct Answer) (Chosen option)
(C) Bala
(D) Celin

Question No.44

Marks: 1.00

Bookmark

What will be written in the place of question mark in the given series?

N14S19C3E5?9

- (A) G
(B) I (Correct Answer) (Chosen option)
(C) H
(D) J

Question No.45

Marks: 1.00

Bookmark

In a certain code language, if GLOBE is coded as TOLYV, then how is RAPID coded in that language?

- (A) EVTHM
(B) IZKRW (Correct Answer) (Chosen option)
(C) VETMH
(D) JOVGX

Question No.46

Marks: 1.00

Bookmark

In this question, a statement is given followed by two conclusions numbered i and ii. You have to assume everything in the statement to be true, then consider the two conclusions together and decide which of them logically follows beyond a reasonable doubt from the information given in the statement.

Statement: Only Automobiles and Auto parts, are considered as luxury goods. ABC Ltd., produces luxury goods.

Conclusions:

- i) ABC Ltd., produces only automobiles.
ii) ABC Ltd., produces only auto parts.

Choose the appropriate one from the following options

- (A) Only conclusion i follows
(B) Only conclusion ii follows
(C) Either i or ii follows
(D) Neither i nor ii follows
(E) Both i and ii follow.
(A) D (Correct Answer) (Chosen option)
(B) C
(C) B
(D) A

Question No.47

Marks: 1.00

Bookmark 

In this question, a statement is given followed by two conclusions numbered i and ii. You have to assume everything in the statement to be true, then consider the two conclusions together and decide which of them logically follows beyond a reasonable doubt from the information given in the statement.

Statement: Sunil always eats vegetarian food whenever he goes to XYZ restaurant.

Conclusion:

- i) Sunil likes vegetarian food prepared in XYZ restaurant.
- ii) XYZ is a restaurant famous for vegetarian food.

Choose the appropriate one from the following options

- (A) Only conclusion i follows
 - (B) Only conclusion ii follows
 - (C) Either i or ii follows
 - (D) Neither i nor ii follows
 - (E) Both i and ii follow.
- (A) D (Correct Answer)
- (B) C
- (C) A (Chosen option)
- (D) B

Question No.48

Marks: 1.00

Bookmark

A is the only daughter of B whose wife is C. D is the son-in-law of C. How is C related to A's kids?

- (A) Grandmother (Correct Answer) (Chosen option)
- (B) Aunt
- (C) Mother
- (D) Granddaughter

Question No.49

Marks: 1.00

Bookmark

In this question, a statement is given followed by two conclusions numbered i and ii. You have to assume everything in the statement to be true, then consider the two conclusions together and decide which of them logically follows beyond a reasonable doubt from the information given in the statement.

Statement: Mary's teacher gifts a pilot pen whenever she scores centum in Mathematics. Mary has 2 pilot pens.

Conclusion:

- i) Mary should have scored centum twice in Mathematics.
- ii) Mary's teacher gifted her those pens.

Choose the appropriate one from the following options

- (A) Only conclusion i follows
 - (B) Only conclusion ii follows
 - (C) Either i or ii follows
 - (D) Neither i nor ii follows
 - (E) Both i and ii follow.
- (A) B
- (B) A
- (C) D (Correct Answer) (Chosen option)
- (D) C

Question No.50

Marks: 1.00

Bookmark

The statement given below is followed by assumptions numbered as 1 and 2. Look at

the statements and decide which of the assumptions is/are implicit.
Give your answer as per below options:

- A) If only assumption 1 is implicit.
B) If only assumption 2 is implicit.
C) If neither 1 nor 2 is implicit.
D) If both 1 and 2 are implicit.

Statement: One should strictly avoid wasting food.

Assumptions:

1. Reducing food loss and waste is essential in a world where millions of people go hungry every day.
2. Preparing nutritious food every day is challenging.

- (A) D
(B) B
(C) C
(D) A (Correct Answer) (Chosen option)

Odia - Odia

Question No.1

Marks: 1.00

Bookmark

'ପବିତ୍ର' ଶବ୍ଦର ସଂଧିବିଚ୍ଛେଦ କର ।

- (A) ପବି+ଇତ୍ର
(B) ପୋ+ଇତ୍ର (Correct Answer) (Chosen option)
(C) ପୌ+ଇତ୍ର
(D) ପଦ୍+ବିତ୍ର

Question No.2

Marks: 1.00

Bookmark

'ଅନଶନ' ଶବ୍ଦଟି କେଉଁ ସମାସର ଦୃଷ୍ଟାନ୍ତ?

- (A) ଦ୍ୱିତୀୟ ଚତୁର୍ଥୀ
(B) ଚତୁର୍ଥୀ ଚତୁର୍ଥୀ
(C) ନିଃସଂସ୍କୃତ (Correct Answer) (Chosen option)
(D) ଉପପଦ ଚତୁର୍ଥୀ

Question No.3

Marks: 1.00

Bookmark

କେଉଁଠିରେ ବୈଦେଶିକ ଉପସର୍ଗ ବ୍ୟବହୃତ ହୋଇଛି?

- (A) ବେହୋସ (Correct Answer) (Chosen option)
(B) ଉପକୂଳ
(C) ଦୁସ୍ତର
(D) ବିଫଳ

Question No.4

Marks: 1.00

Bookmark

'ତରଳେଇବା' ଶବ୍ଦଟି କି ପ୍ରକାର କ୍ରିୟା?

- (A) ଦେଶଜ କ୍ରିୟା
(B) ପ୍ରେରଣାର୍ଥକ କ୍ରିୟା
(C) ନାମଧାରୁ କ୍ରିୟା (Correct Answer) (Chosen option)
(D)

ମୌଳିକ କ୍ରିୟା

Question No.5

Marks: 1.00

Bookmark

କେଉଁଟି ଏକବଚନର ଚିହ୍ନ ନୁହେଁ?

- (A) ଖଣ୍ଡି
 (B) ଟିଏ
 (C) ଟି
 (D) ଚୟ (Correct Answer)

Question No.6

Marks: 1.00

Bookmark

'ତତ୍' ଏବଂ 'ରୂପ' ଶବ୍ଦ ଦ୍ଵୟର ସଂଧି କଲେ କ'ଣ ହେବ?

- (A) ତତ୍ତ୍ଵ (Correct Answer)
 (B) ତତ୍ତ୍ଵ (Chosen option)
 (C) ତତ୍ତ୍ଵ
 (D) ତତ୍ତ୍ଵ

Question No.7

Marks: 1.00

Bookmark

ସୁଭଦ୍ରା ଧାନ ଛାଟୁଛି । କ୍ରିୟାଟି କେଉଁ କାଳରେ ଅଛି?

- (A) ସଂପନ୍ନ ବର୍ତ୍ତମାନ
 (B) ସଂପନ୍ନାସଂପନ୍ନ ବର୍ତ୍ତମାନ
 (C) ସାଧାରଣ ବର୍ତ୍ତମାନ
 (D) ଅସଂପନ୍ନ ବର୍ତ୍ତମାନ (Correct Answer) (Chosen option)

Question No.8

Marks: 1.00

Bookmark

କେଉଁଟି ପୁଂଲିଙ୍ଗାଦାତକ ଶବ୍ଦ?

- (A) ବାଳୁରା (Correct Answer) (Chosen option)
 (B) ମଧ୍ୟମା
 (C) କୁଟିଳା
 (D) ଉତ୍ତରା

Question No.9

Marks: 1.00

Bookmark

ସଂସ୍କୃତ ଉପସର୍ଗ ବା ପୂର୍ବପ୍ରତ୍ୟୟ ଗୁଡ଼ିକର ସଂଖ୍ୟା କେତେ?

- (A) 22
 (B) 20 (Correct Answer)
 (C) 19 (Chosen option)
 (D) 21

Question No.10

Marks: 1.00

Bookmark

ଯଥା, ତଥା, ପରି ଭଳି ଶବ୍ଦଗୁଡ଼ିକ କି ପ୍ରକାର ଅବ୍ୟୟ?

- (A) ବିଯୋଜକ
 (B)

ସଂଯୋଜକ

- (C) ସଂଭାବନାସୂଚକ
 (D) ସାଦୃଶ୍ୟବୋଧକ (Correct Answer) (Chosen option)

Question No.11

Marks: 1.00

Bookmark

ବଚନ ପ୍ରୟୋଗ ଦୃଷ୍ଟିରୁ କେଉଁଟି ଠିକ୍?

- (A) ବିବିଧ ପ୍ରକାର ପଶୁ (Chosen option)
 (B) ଚାରି ପ୍ରକାର ରକମର ପଶୁ
 (C) ଚତୁର୍ବିଧପଶୁ (Correct Answer)
 (D) ଚତୁର୍ବିଧ ପ୍ରକାର ପଶୁ

Question No.12

Marks: 1.00

Bookmark

ଆଚାରକୁ ଅତି କ୍ରମ କରି- ଏକ ପଦରେ ପ୍ରକାଶ କର ।

- (A) ପ୍ରତ୍ୟାଚାର
 (B) ଯଥାଚାର
 (C) ଅତ୍ୟାଚାର (Correct Answer) (Chosen option)
 (D) ଉପାଚାର

Question No.13

Marks: 1.00

Bookmark

ନିଃ+ମମ =?

- (A) ନିମର୍ମ
 (B) ନିରମ
 (C) ନିର୍ମମ (Correct Answer) (Chosen option)
 (D) ନିମମ

Question No.14

Marks: 1.00

Bookmark

ନାରି ନୁହାଣି ଅଗଣା ଦୋଷ । ରେଖାଙ୍କିତ ପଦଟି କି ପ୍ରକାର କ୍ରିୟା?

- (A) ସମାପିକା
 (B) ନାମଧାତୁ
 (C) ପ୍ରେରଣାର୍ଥକ
 (D) ଅସମାପିକା (Correct Answer) (Chosen option)

Question No.15

Marks: 1.00

Bookmark

କେଉଁଟି ସପ୍ତମୀ ବିଭକ୍ତିର ଉଦାହରଣ ନୁହେଁ ?

- (A) ସଜିନ୍ ବେଟିଂରେ ନିପୁଣ
 (B) ଶିଶୁଟି ଭୋକରେ କାନ୍ଦୁଛି (Correct Answer) (Chosen option)
 (C) ପୁସ୍ତକ ପ୍ରକାଶନରେ ଲେଖକ ଆନନ୍ଦିତ
 (D) କବିମାନଙ୍କରେ କାଳିଦାସ

Case Study - 16 to 20

5.00

ଓଡ଼ିଆ ଭାଷାରେ ବିଶେଷ୍ୟ, ସର୍ବନାମ ଓ ବିଶେଷଣ ପଦର ଲିଙ୍ଗ ବିଚାର କରାଯାଏ । ବିଶେଷ୍ୟ ପଦର ଅର୍ଥକୁ ନେଇ ତାହା ଚାରୋଟି ଶ୍ରେଣୀର

ଲିଙ୍ଗ ମଧ୍ୟରୁ କେଉଁ ଶ୍ରେଣୀୟ ସ୍ତ୍ରୀର କରାଯାଏ, ଅର୍ଥାତ ପଦର ପ୍ରକୃତି ଗତ ଲିଙ୍ଗକୁ ଅନୁସରଣ କରି ଲିଙ୍ଗ ନିର୍ଣ୍ଣୟ କରାଯାଇଥାଏ । ଏହି ଲିଙ୍ଗଭେଦ ଦ୍ୱାରା ବାକ୍ୟରେ ଥିବା ଅନ୍ୟପଦମାନଙ୍କର ଯଥା -ସର୍ବନାମ, କ୍ରିୟା ପ୍ରଭୃତିରେ କୌଣସି ପରିବର୍ତ୍ତନ ଘଟେ ନାହିଁ । ଓଡ଼ିଆ ଭାଷାରେ ବଡ଼, ଯାନ, ଛୋଟ ପ୍ରଭୃତି କେତେକ ବିଶେଷଣ ପଦ ବିଶେଷ୍ୟ ପଦ ପୂର୍ବରୁ ବ୍ୟବହୃତ ହୁଏ । ସେହି ପଦଗୁଡ଼ିକ ଆକାରରେ ପରିବର୍ତ୍ତିତ ନହେଲେ ପୁଲିଙ୍ଗ, ସ୍ତ୍ରୀଲିଙ୍ଗ ଓ କ୍ଳୀବଲିଙ୍ଗରେ ବିଶେଷଣ ରୂପ ବ୍ୟବହୃତ ହୁଅନ୍ତି । ସର୍ବନାମ ପଦ ବିଶେଷ୍ୟ ପଦ ପରିବର୍ତ୍ତେ ବ୍ୟବହୃତ ହେଉଥିବାରୁ ତାହା ବିଶେଷ୍ୟର ଲିଙ୍ଗ ଗ୍ରହଣ କରେ ।

Question No.16

Marks: 1.00

Bookmark

ବଧୂ ବରାଦ କରିଥିବା ଶଙ୍ଖା ଆଣିବାରେ ବୁଢ଼ାର ତେରି ହେଲା କାହିଁକି?

- (A) ଅସୁଗୁଡ଼ା (Correct Answer)
- (B) ଅତ୍ୟଧିକ ଖରା
- (C) ମୁଣ୍ଡ ଖରାପ
- (D) ମୃତ୍ୟୁ

Question No.17

Marks: 1.00

Bookmark

'ବୁଢ଼ା ଶଙ୍ଖାରି' ଗଳ୍ପଟି କେଉଁ ଗଳ୍ପ ଦ୍ୱାରା ପ୍ରଭାବିତ?

- (A) ବୁଢ଼ିବାଲା (Correct Answer)
- (B) ବୁଢ଼ିବାଲି
- (C) ଶଙ୍ଖାରି
- (D) ବେଲୁନବାଲା

Question No.18

Marks: 1.00

Bookmark

'କାବୁଲିବାଲା' ର ରଚୟିତା କିଏ ?

- (A) ପ୍ରେମଚନ୍ଦ
- (B) ରବୀନ୍ଦ୍ରନାଥ (Correct Answer)
- (C) ଜିତେନ୍ଦ୍ରନାଥ
- (D) ରାଜୁଚାନ୍ଦ

Question No.19

Marks: 1.00

Bookmark

ନୂଆବଧୂକୁ ଦେଖି ବୁଢ଼ା ମନରେ କି ପ୍ରେମ ଜାଗ୍ରତ ହୋଇଛି ?

- (A) କଳୁଷିତ
- (B) ଅପତ୍ୟ (Correct Answer)
- (C) ଦାମ୍ପତ୍ୟ
- (D) ଶାଶ୍ୱତ

Question No.20

Marks: 1.00

Bookmark

ବଧୂ ବରାଦ କରିଥିବା ଶଙ୍ଖା ଆଣି ବୁଢ଼ା କ'ଣ ଦେଖିଛି?

- (A) ବଧୂର ମୃତ୍ୟୁ
- (B) ବଧୂର ପିଲା
- (C) ବଧୂର ଅନୁପସ୍ଥିତି
- (D) ବଧୂର ବିଧବା ବେଶ (Correct Answer)

English - English

Question No.1

Marks: 1.00

Bookmark

Convert the given direct/ indirect speech to indirect/ direct speech with the help of the given options.

Karan said, "We are playing a game today."

- (A) Karan said to that they were playing a game that day.
(B) Karan said that they were playing a game today.
(C) Karan said that they are playing a game that day.
(D) **Karan said that they were playing a game that day. (Correct Answer)** (Chosen option)

Question No.2

Marks: 1.00

Bookmark

She missed her flight ____ heavy traffic.

- (A) moreover
(B) since
(C) **due to (Correct Answer)** (Chosen option)
(D) because

Question No.3

Marks: 1.00

Bookmark

Find the correct active voice for the given sentence in passive voice from the given alternatives.

The elephant herds were being led by their female heads.

- (A) Their female heads are leading the elephant herds.
(B) Their female heads leading the elephant herds.
(C) **Their female heads were leading the elephant herds. (Correct Answer)** (Chosen option)
(D) Their female heads were being led the elephant herds.

Question No.4

Marks: 1.00

Bookmark

Choose the best preposition from the given alternatives for the blank in the given question

He is ready to move _____ his pets.

- (A) within
(B) along
(C) **with (Correct Answer)** (Chosen option)
(D) through

Question No.5

Marks: 1.00

Bookmark

Find the correct active/ passive voice for the given sentence in passive/ active voice from the given alternatives.

They will declare holiday, in case of floods.

- (A) Holiday will declared by them, in case of floods.
(B) **Holiday will be declared by them, in case of floods. (Correct Answer)** (Chosen option)
(C) Holiday would be declared by them, in case of floods.
(D) Holiday will declare by them, in case of floods.

Question No.6

Marks: 1.00

Bookmark

Add ____ bowl of sugar to the water to make syrup.

- (A) the
(B) this
(C) an
(D) a (Correct Answer) (Chosen option)

Question No.7

Marks: 1.00

Bookmark

Fill in the blank with suitable tense.

I _____ for this book since Monday.

- (A) has been searching
(B) has searched
(C) have been searching (Correct Answer) (Chosen option)
(D) had searched

Case Study - 8 to 12

5.00

Directions - Read the short passage below and answer the questions that follow.

On the 10th or 11th of January, after being declared an outlaw by the Senate following the expulsion of the tribunes, Caesar crossed the Rubicon, a small river marking the boundary between Cisalpine Gaul and Italy. Caesar became a rebel against the Gallic forces. On both sides, the rank-and-file soldiers followed their leaders: "the Gallic legions obeyed their patron and benefactor, others followed Pompey.

Caesar made sure to address his ~~meding to~~ his own account, he spoke of injustices done to him by his political enemies, how Pompey had betrayed him, and focused mostly on how the rights of tribunes had been trampled by the senate's ignoring tribunician vetoes, parading the tribunes who had fled the city before the troops in their disguises. On the *senatus consultum ultimum*, Caesar argued it was unnecessary and should be confined only to circumstances in which Rome was under direct threat. For most Romans, the choice of what side to pick was difficult. Only a small number of people were committed to one side or the other at the onset of **hostilities**. Caesar's most trusted lieutenant in Gaul, Titus Labienus defected from Caesar to Pompey, possibly due to Caesar's hoarding of military glories or an earlier loyalty to Pompey, resulting in the fall of regime of Caesar and Rome.

Question No.8

Marks: 1.00

Bookmark

Who was branded an outlaw?

- (A) Titus
(B) Caesar (Correct Answer) (Chosen option)
(C) Pompey
(D) Plutarch

Question No.9

Marks: 1.00

Bookmark

Who declared the person an outlaw?

- (A) the senate (Correct Answer)
(B) the tribunes
(C) Meander
(D) Gallic forces (Chosen option)

Question No.10

Marks: 1.00

Bookmark

Choose the right meaning for the highlighted word 'hostilities.'

- (A) agreement (Chosen option)
(B) anger
(C) **enmity (Correct Answer)**
(D) violence

Question No.11

Marks: 1.00

Bookmark

The suitable title for the passage is_____.

- (A) The tribunes
(B) **The fall of Rome (Correct Answer)** (Chosen option)
(C) The Gallic forces
(D) Caesar and his men

Question No.12

Marks: 1.00

Bookmark

Name the river which was crossed by Caesar.

- (A) Tribunes
(B) Pompey's land
(C) **Rubicon (Correct Answer)** (Chosen option)
(D) Ultimium

Question No.13

Marks: 1.00

Bookmark

The whole family _____ come together during festivals, when we lived in the village.

- (A) **used to (Correct Answer)** (Chosen option)
(B) ought to
(C) have to
(D) need to

Question No.14

Marks: 1.00

Bookmark

Advertisements are a help because they tell _____ about a new product.

- (A) we
(B) **us (Correct Answer)** (Chosen option)
(C) whom
(D) this

Question No.15

Marks: 1.00

Bookmark

Fill in the blank with the appropriate article a, an, or the, or select the option 'No article' if no article is needed.

Steyn was out of action for _____ past six weeks due to a fracture on his right hand.

- (A) **the (Correct Answer)** (Chosen option)
(B) an
(C) a
(D) No article

Question No.16

Marks: 1.00

Bookmark

The cattle _____ on the grasslands.

- (A) grazes
(B) will graze
(C) **graze (Correct Answer)** (Chosen option)
(D) would graze

Question No.17

Marks: 1.00

Bookmark

Fill in the blank with suitable tense.

He _____ physics for a year now.

- (A) have been studying
(B) have studied
(C) studied
(D) **has been studying (Correct Answer)** (Chosen option)

Question No.18

Marks: 1.00

Bookmark

Choose the correct article to complete the following sentence.

What does she usually have for _____ dinner?

- (A) an
(B) a
(C) **No article (Correct Answer)** (Chosen option)
(D) the

Question No.19

Marks: 1.00

Bookmark

Fill in the blanks with suitable Preposition from the given alternatives.

She agreed _____ the idea of our chief cook yesterday.

- (A) for
(B) **to (Correct Answer)** (Chosen option)
(C) since
(D) in

Question No.20

Marks: 1.00

Bookmark

Fill in the blank with appropriate verb in agreement with its subject.

The kid as well as their parents _____ missing.

- (A) **is (Correct Answer)** (Chosen option)
(B) have
(C) are
(D) has

General Knowledge - General Knowledge**Question No.1**

Marks: 1.00

Bookmark

What is the rank of Odisha in the recently released State Ranking Index for National Food Security Act (NFSA) by the Department of Food and Public Distribution, Government of India?

-

(A) **One (Correct Answer)**

- (B) Four
(C) Three
(D) Two

Question No.2

Marks: 1.00

Bookmark

Where is the Bandipur National Park located?

- (A) Bihar
(B) **Karnataka (Correct Answer)** (Chosen option)
(C) Kerala
(D) Assam

Question No.3

Marks: 1.00

Bookmark

Who among the following is famously called as 'Utkal Gourav'?

- (A) Biswanath Kar
(B) Dhirendera Nath Choudhury
(C) Babu Janakinath Bose
(D) **Madhusudan Das (Correct Answer)** (Chosen option)

Question No.4

Marks: 1.00

Bookmark

Who among the following heads the six-member Monetary Policy Committee (MPC) of the Reserve Bank of India?

- (A) Union Finance Minister
(B) **RBI Governor (Correct Answer)** (Chosen option)
(C) Prime Minister of India
(D) CEO of NITI Aayog

Question No.5

Marks: 1.00

Bookmark

Which is the least populated state in India as per Census 2011?

- (A) **Sikkim (Correct Answer)** (Chosen option)
(B) Goa
(C) Manipur
(D) Tripura

Question No.6

Marks: 1.00

Bookmark

Where is the headquarters of United Nations International Children's Emergency Fund (UNICEF) located?

- (A) Gland
(B) **New York (Correct Answer)** (Chosen option)
(C) Vienna
(D) Geneva

Question No.7

Marks: 1.00

Bookmark

Which of the following novels has been written by R.K. Narayan?

- (A) A Suitable Boy

- (B) The White Tiger (Chosen option)
(C) Padmavat
(D) **A Tiger for Malgudi (Correct Answer)**

Question No.8

Marks: 1.00

Bookmark

Who was the first Indian to win an individual medal in Olympics after Indian Independence?

- (A) **K.D. Jadhav (Correct Answer)** (Chosen option)
(B) Sushil Kumar
(C) P.V.Sindhu
(D) Karnam Malleshwari

Question No.9

Marks: 1.00

Bookmark

The tallest peak in the Maliya Range of Eastern Ghats is:

- (A) Malayagiri
(B) Turia Konda
(C) Deomali
(D) **Mahendragiri (Correct Answer)** (Chosen option)

Question No.10

Marks: 1.00

Bookmark

Whose birth anniversary is celebrated as National Milk Day every year in India?

- (A) Lal Bahadur Shastri
(B) **Vergheese Kurien (Correct Answer)** (Chosen option)
(C) M.S.Swaminathan
(D) I.K.Gujral

Question No.11

Marks: 1.00

Bookmark

Who among following wrote 'Rajatarangini'?

- (A) Bilhana
(B) Jayadeva
(C) **Kalhana (Correct Answer)** (Chosen option)
(D) Malik Muhammad Jayasi

Question No.12

Marks: 1.00

Bookmark

Rivers Chandra and Bhaga are tributaries of which of the following rivers?

- (A) River Ravi
(B) River Jhelum
(C) **River Chenab (Correct Answer)** (Chosen option)
(D) River Sutlej

Question No.13

Marks: 1.00

Bookmark

Who wrote the famous book 'Hind Swaraj'?

- (A) Jawaharlal Nehru
(B) Martin Luther King Jr.
(C) Nelson Mandela

(D) **Mahatma Gandhi (Correct Answer)** (Chosen option)

Question No.14

Marks: 1.00

Bookmark

Who was the first Indian female athlete to win two individual Olympic medals?

- (A) Mirabhai Chanu
(B) Sania Mirza
(C) P.T. Usha
(D) **P.V. Sindhu (Correct Answer)** (Chosen option)

Question No.15

Marks: 1.00

Bookmark

Which of the following becomes the first 'Har Ghar Jal Certified' state in India?

- (A) Madhya Pradesh
(B) Maharashtra
(C) Uttar Pradesh
(D) **Goa (Correct Answer)** (Chosen option)

Question No.16

Marks: 1.00

Bookmark

Which of the following is one of the official languages of United Nations?

- (A) Tamil
(B) Hebrew
(C) German
(D) **Arabic (Correct Answer)** (Chosen option)

Question No.17

Marks: 1.00

Bookmark

Which is known as Asia's version of Nobel Prize awards?

- (A) The Abel Prize
(B) Earthshot Prize
(C) **Ramon Magsaysay Award (Correct Answer)** (Chosen option)
(D) Laurel Awards

Question No.18

Marks: 1.00

Bookmark

In India, the Finance Commission is constituted by:

- (A) Union Minister of Finance
(B) Governor of Reserve Bank of India
(C) **President of India (Correct Answer)** (Chosen option)
(D) Prime Minister of India

Question No.19

Marks: 1.00

Bookmark

Mohiniyattam is a classical dance form of which of the following states of India?

- (A) **Kerala (Correct Answer)**
(B) Karnataka (Chosen option)
(C) Andhra Pradesh
(D) Tamil Nadu

Question No.20

Marks: 1.00

Bookmark

What is the full form of 'SIDBI' in banking terminology?

- (A) **Small Industries Development Bank of India (Correct Answer)** (Chosen option)
(B) Scheduled Industries Development Bank of India
(C) Startup Industries Development Bank of India
(D) Standard Industries Development Bank of India

Question No.21

Marks: 1.00

Bookmark

India's first-of-its-kind 'National Maritime Heritage Complex (NMHC)' will be setup in which of the following states?

- (A) Haryana
(B) Madhya Pradesh
(C) **Gujarat (Correct Answer)** (Chosen option)
(D) Punjab

Question No.22

Marks: 1.00

Bookmark

In which of the following places of Odisha, "Central Cattle Breeding Farm" is located?

- (A) **Laxmipur (Chosen option)**
(B) Damanjodi
(C) Sunabeda (Correct Answer)
(D) Kotpad

Question No.23

Marks: 1.00

Bookmark

Which of the following reactions is the energy source of Sun?

- (A) Combustion Reaction
(B) Fission Reaction
(C) Diffusion Reaction
(D) **Fusion Reaction (Correct Answer)** (Chosen option)

Question No.24

Marks: 1.00

Bookmark

Who has the power to remove the Advocate General of the state?

- (A) **President of India (Chosen option)**
(B) Chief Justice of Supreme Court
(C) Governor of the state (Correct Answer)
(D) Prime Minister of India

Question No.25

Marks: 1.00

Bookmark

The Raman Effect deals with which of the following properties of light?

- (A) **Diffraction of Light (Chosen option)**
(B) Dispersion of Light
(C) Interference of Light
(D) Scattering of Light (Correct Answer)

Question No.26

Marks: 1.00

Bookmark 

Which of the following is the most abundant gas in the earth's atmosphere?

- (A) **Nitrogen (Correct Answer)** (Chosen option)
(B) Sulphur Dioxide
(C) Oxygen
(D) Carbon Dioxide

Question No.27

Marks: 1.00

Bookmark

The antibiotic Penicillin is obtained from _____.

- (A) Virus
(B) **Fungus (Correct Answer)**
(C) Protozoa
(D) Bacteria (Chosen option)

Question No.28

Marks: 1.00

Bookmark

The World Water Day is celebrated on _____.

- (A) 10th December
(B) 5th June
(C) **22nd March (Correct Answer)** (Chosen option)
(D) 2nd February

Question No.29

Marks: 1.00

Bookmark

The Hathigumpha inscription is found in which of the following hills?

- (A) Khandagiri hills (Chosen option)
(B) Chandragiri hills
(C) Dhauligiri Hills
(D) **Udayagiri hills (Correct Answer)**

Question No.30

Marks: 1.00

Bookmark

Who among the following discovered bacteria?

- (A) Alexander Fleming (Chosen option)
(B) Gregor Mendel
(C) **Antonie van Leeuwenhoek (Correct Answer)**
(D) Jean-Baptiste Lamarck

Question No.31

Marks: 1.00

Bookmark

In the Commonwealth Games 2022, Lakshya Sen won the gold medal in which of the following sports?

- (A) Weightlifting
(B) Wrestling
(C) Table Tennis
(D) **Badminton (Correct Answer)** (Chosen option)

Question No.32

Marks: 1.00

Bookmark

Who among the following was proclaimed as the Emperor of India during Great Revolt of 1857?

(A) <input type="radio"/> Bahadur Shah II (Correct Answer) (Chosen option) (B) <input type="radio"/> Shah Alam II (C) <input type="radio"/> Bahadur Shah I (D) <input type="radio"/> Akbar II	
Question No.33 The Charaka Samhita is a Sanskrit text related to _____. (A) <input type="radio"/> Administration (B) <input type="radio"/> Dance (C) <input type="radio"/> Ayurveda (Correct Answer) (Chosen option) (D) <input type="radio"/> Astronomy	Marks: 1.00 Bookmark <input type="checkbox"/>
Question No.34 Which of the following wetlands of Odisha has been designated as wetlands of international importance under Ramsar Convention in August 2022? (A) <input type="radio"/> Balimela reservoir (B) <input type="radio"/> Kanjia Lake (Chosen option) (C) <input type="radio"/> Kolab Lake (D) <input type="radio"/> Hirakud reservoir (Correct Answer)	Marks: 1.00 Bookmark <input type="checkbox"/>
Question No.35 Which is India's highest peacetime award for gallantry? (A) <input type="radio"/> Ashoka Chakra (Correct Answer) (Chosen option) (B) <input type="radio"/> Shaurya Chakra (C) <input type="radio"/> Param Vir Chakra (D) <input type="radio"/> Mahavir Chakra	Marks: 1.00 Bookmark <input type="checkbox"/>
Question No.36 In May 2022, where was the first-ever National Conference of Women Legislators held? (A) <input type="radio"/> Kerala (Correct Answer) (B) <input type="radio"/> Rajasthan (C) <input type="radio"/> Andhra Pradesh (D) <input type="radio"/> Punjab	Marks: 1.00 Bookmark <input type="checkbox"/>
Question No.37 In May 2022, India signed an 'Investment Incentive Agreement' with which of the following countries? (A) <input type="radio"/> Russia (B) <input type="radio"/> Australia (Chosen option) (C) <input type="radio"/> United States of America (Correct Answer) (D) <input type="radio"/> China	Marks: 1.00 Bookmark <input type="checkbox"/>
Question No.38 Which among the following is not a Constitutional body in India? (A) <input type="radio"/> State Information Commission (Correct Answer) (Chosen option)	Marks: 1.00 Bookmark <input type="checkbox"/>

- (B) State Election Commission
(C) State Finance Commission
(D) State Public Service Commission

Question No.39

Marks: 1.00

Bookmark

Which is the only snake in the world that builds nests?

- (A) Pythons
(B) Vipers (Chosen option)
(C) **King Cobra (Correct Answer)**
(D) Anacondas

Question No.40

Marks: 1.00

Bookmark

Which of the following is the highest peak in South India?

- (A) **Anamudi Peak (Correct Answer)** (Chosen option)
(B) Mukurthi Peak
(C) Doddabetta Peak
(D) Mahendragiri Peak

Computer Awareness - Computer Awareness**Question No.1**

Marks: 1.00

Bookmark

What is the full form of DSL?

- (A) **Digital Subscriber Line (Correct Answer)**
(B) Digital Sub connector Line
(C) Digital Superior Line
(D) Digital Sub Line

Question No.2

Marks: 1.00

Bookmark

Which type of operating system is UNIX?

- (A) Single-tasking (Chosen option)
(B) **Multitasking (Correct Answer)**
(C) Mobile OS
(D) Single-user

Question No.3

Marks: 1.00

Bookmark Which of the following denotes the associativity of \wedge ?

- (A) $(\alpha \wedge \beta) \equiv (\beta \wedge \alpha)$
(B) $(\alpha \vee \beta) \equiv (\beta \vee \alpha)$
(C) $((\alpha \vee \beta) \vee \gamma) \equiv (\alpha \vee (\beta \vee \gamma))$ (Chosen option)
(D) $((\alpha \wedge \beta) \wedge \gamma) \equiv (\alpha \wedge (\beta \wedge \gamma))$ (Correct Answer)

Question No.4

Marks: 1.00

Bookmark

Which feature is used in Ms Word to make the selected sentence to All Capital Letters or All Small Letters?

- (A) **Change case (Correct Answer)** (Chosen option)

- (B) Change Capital
(C) Change Sentence
(D) Change letter

Question No.5

Marks: 1.00

Bookmark

The recently visited website URLs are stored under _____ option on the browser.

- (A) **History (Correct Answer)** (Chosen option)
(B) Autofill
(C) Search engine
(D) Downloads

Question No.6

Marks: 1.00

Bookmark

Which key in windows explorer allows you to view properties?

- (A) Alt+p
(B) Alt+e
(C) Alt+Del
(D) **Alt+enter (Correct Answer)** (Chosen option)

Question No.7

Marks: 1.00

Bookmark

_____ is a social networking site designed specifically for the business community and professional career explorers.

- (A) Bing
(B) Meta
(C) Instagram
(D) **LinkedIn (Correct Answer)** (Chosen option)

Question No.8

Marks: 1.00

Bookmark

What is the maximum number of sheets that can be added to an Excel workbook?

- (A) 253
(B) **255 (Correct Answer)** (Chosen option)
(C) 225
(D) 250

Question No.9

Marks: 1.00

Bookmark

_____ is/are a collection of elements of similar data type placed in a contiguous memory location.

- (A) Paging
(B) **Array (Correct Answer)** (Chosen option)
(C) Segmentation
(D) Functions

Question No.10

Marks: 1.00

Bookmark

Which layer in OSI architecture is considered as Heart of OSI model?

- (A) Data Link Layer
(B) Session Layer

- (C) Transport Layer (Correct Answer)
(D) Network Layer

Question No.11

Marks: 1.00

Bookmark

In Microsoft Word, word wrap allows you to type words in paragraph continually without pressing _____ key at the end of each line.

- (A) Space bar (Chosen option)
(B) Alt
(C) Shift
(D) Enter (Correct Answer)

Question No.12

Marks: 1.00

Bookmark

_____ provides the ability to insert tuples into, delete tuples from, and modify tuples in the database.

- (A) Data Definition Language (DDL)
(B) Transaction Control Language (TCL)
(C) Data Manipulation Language (DML) (Correct Answer)
(D) Data Control Language (DCL)

Question No.13

Marks: 1.00

Bookmark

Which of the following domain names is used by university websites?

- (A) .com (Chosen option)
(B) .gov
(C) .edu (Correct Answer)
(D) .org

Question No.14

Marks: 1.00

Bookmark

In Excel, _____ shows the quick count, sum, avg of the selected range of cells without entering any formula.

- (A) Status bar (Correct Answer)
(B) Zoom bar
(C) Formula bar (Chosen option)
(D) Data bar

Question No.15

Marks: 1.00

Bookmark

Which of the following functions of Operating System includes a program known as I/O controller?

- (A) Memory Management
(B) Device Management (Correct Answer)
(C) File Management (Chosen option)
(D) Processor Management

Question No.16

Marks: 1.00

Bookmark

Corporate organizations using platforms such as LinkedIn for hiring employees is called _____.

- (A) Contractual Hiring

- (B) **Social Media Hiring (Correct Answer)** (Chosen option)
(C) Walk-in Hiring
(D) Direct Hiring

Question No.17

Marks: 1.00

Bookmark

What does Smishing stand for?

- (A) System Phishing
(B) Software Phishing
(C) Systematic Phishing
(D) **SMS Phishing (Correct Answer)** (Chosen option)

Question No.18

Marks: 1.00

Bookmark

To process large transactions that can run without end user interaction you can use _____.

- (A) **Batch Processing (Correct Answer)** (Chosen option)
(B) Online processing
(C) Once-a-day Processing
(D) End-of-day processing

Question No.19

Marks: 1.00

Bookmark

_____ is Microsoft's new browser, created for a faster and more stable browser that works well with modern websites and adds new capabilities to the browsing experience.

- (A) Safari
(B) Chrome
(C) **Edge (Correct Answer)** (Chosen option)
(D) Power

Question No.20

Marks: 1.00

Bookmark

What is the shortcut to jump to the first line in Word document?

- (A) Enter+Home
(B) Shift+Home
(C) Alt+Home (Chosen option)
(D) **Ctrl+Home (Correct Answer)**