

←

**CHT- TGT ARTS 2022**

**E-BOOK-PDF**

**6,000 MCQ**

**EXPLANATION**

**1,500 ଟି ପୂର୍ବ ବର୍ଷର ପ୍ରଶ୍ନ**

**100% ସଫଳତା**



CHT- CONTRACTUAL TEACHER (TGT ARTS) 2022 EXAM !! E-BOOK (PDF) 6,000 BEST MCQ !! CHAPTER WISE QUESTIONS & ANSWER

more

₹199.00 ₹99.00

Validity- 1 Year

English- 1500 (MCQ)...

more

ADD TO CART BUY NOW

[Click Here](#)

←

**CHT- TGT CBZ 2022**


**E-BOOK-PDF**

**6,000 MCQ**

**EXPLANATION**

**750 ଟି ପୂର୍ବ ବର୍ଷର ପ୍ରଶ୍ନ**

**100% ସଫଳତା**



CHT- CONTRACTUAL TEACHER (TGT CBZ SCIENCE) 2022 EXAM !! E-BOOK (PDF) 6,000 BEST MCQ !! CHAPTER WISE QUESTIONS & ANSWER

more

₹199.00 ₹99.00

Validity- 1 Year

Previous Year Question- 750 (2022, 2021 & 2019 Year)...

more

ADD TO CART BUY NOW

[Click Here](#)

←

**CHT- TGT PCM 2022**


**E-BOOK-PDF**

**6,000 MCQ**

**EXPLANATION**

**1,350 ଟି ପୂର୍ବ ବର୍ଷର ପ୍ରଶ୍ନ**

**100% ସଫଳତା**



CHT- CONTRACTUAL TEACHER (TGT PCM SCIENCE) 2022 EXAM !! E-BOOK (PDF) 6,000 BEST MCQ !! CHAPTER WISE QUESTIONS & ANSWER

more

₹199.00 ₹99.00

Validity- 1 Year

Previous Year Question- 1,350 (2022, 2021 & 2019 Year)...

more

ADD TO CART BUY NOW

[Click Here](#)

← Tech of World

HOME VIDEOS PLAYLISTS COMMUNITY

**ଆମ Channel ରେ ଦେଖନ୍ତୁ Video**

**ASO** ଓଡ଼ିଶା ପୋଷାଳ **CT ଓ B.Ed**

ଓଡ଼ିଶା ପୋଲିସ **SSC GD Railway**



**Tech of World**

SUBSCRIBE

315K subscribers • 928 videos

Hello ସାଙ୍ଗ ମାନେ !! ଆମେ ଏହି Channel ରେ ପ୍ରଚାରଣ Educational Video Free ରେ ଯୋଗାଇଦେବେ ଯେଉଁ ଚେତନାକରି ନିଜର ଏହି "Tech Of World" Channel କୁ ...

**+2 କିମ୍ବା +3 ପଢ଼ିବା ପରେ କେମିତି ଜଣେ ଶିକ୍ଷକ ହେଇପାରିବେ ? CT ଓ B.Ed ପରେ କଣ ?**

18:50

How To Become A Teacher After +2 Or +3 In Odisha ? How To Get A Teacher Job In Odisha ?

Tech of World · 176K views · 3 years ago

Home Shorts Subscriptions Library

[Click Here](#)

←

**Tech Of World- (Odisha Exam CT)**

Tech Of World

Uninstall Open

Your Review

sujit kumar naik ★★★★★ 6/29/21

Edit your review

Developer contact

About this app

Tech Of World (Odisha Exam) Provides Mock Test & E-Books For Different Exams

Education

3.8 ★ 422 reviews 422 reviews Rated for 3+ 50K+ Downlo.

TECH OF WORLD Mock Test

[Click Here](#)

← Tech Of World 4.1K subscribers

538 Sujit, 9:42 AM

Leave a comment

ASO English 2022 By... 8.7 MB PDF

ASO General Knowledge 2022... 4.9 MB PDF

ASO Math 2022 By Techofworld.in.pdf 4.6 MB PDF

ASO Odia Language 2022 By... 2.9 MB PDF

ASO Reasoning 2022 By... 4.6 MB PDF

508 · 9:47 AM

3 comments

Broadcast

[Click Here](#)

Section 1 - Paper I General Knowledge and Current Affairs

No. of Questions: 20

---

1) In June 2021, Odisha Government has partnered with which organization of United Nations to improve household food and nutritional security by strengthening the livelihood initiatives and reaching the thousands of state-supported Women's Self-Help Groups (WSHGs)?

- A) World Health Organization
- B) World Bank Group
- C) Food and Agriculture Organization
- D) World Food Programme

---

2) In August 2021, who among the following hockey players was conferred with the prestigious Biju Patnaik Sports Award for outstanding performance in sports?

- A) Amit Rohidas
- B) Kalu Charan Choudhary
- C) Birendra Lakra
- D) Namita Toppo

---

3) In 2020, a workshop on "Enabling Procedures for Increase of Steel Usage for the Growth of Economy" was organised at Bhubaneshwar by the Ministry of Steel in partnership with Confederation of Indian Industries (CII) and which of the following countries?

- A) France
- B) Australia
- C) South Korea
- D) Japan

---

4) Which of the following options includes machinery, work plants, equipment, new technology, factories, buildings and goods that are designed to increase the productive potential of the economy?

- A) Fixed Capital

- B) Working Capital
  - C) Capital Productivity
  - D) Infrastructure
- 

5) Different countries are classified at different levels of development. On which of the following criteria is a countries are classified as a developed countries?

- A) High per capita income
  - B) High level of unemployment
  - C) High incidence rate of poverty
  - D) Low standard of living
- 

6) Which of the following document was submitted by Government of India before COP21 in Paris?

- A) Intended Nationally Determined Contributions
  - B) Climate Change and Determined Nation
  - C) Collective Contribution and Rejuvenate Nature
  - D) Nation's Intention and purpose for Revitalization
- 

7) Arrange the given events in the History of Odisha in the CORRECT chronological order.

(i) In the Second Round Table Conference held in London, it was decided that Orissa would be a separate province.

(ii) Baji Rout, the youngest martyr from Odisha in the history of the freedom movement of India was killed by British police.

(iii) Orissa Tenancy Act was passed.

(iv) Bihar-Orissa were separated from Bengal province.

- A) (iii) - (iv) - (i) - (ii)
  - B) (iv) - (iii) - (ii) - (i)
  - C) (iv) - (iii) - (i) - (ii)
  - D) (ii) - (iv) - (i) - (iii)
- 

8) Choose the CORRECT option for the given statements.

(i) The swadeshi idea provoked Madhusudan Das to set up Utkal Tannery and an Art Ware at Cuttack.

(ii) At a meeting in the Cuttack Municipal Hall Madhusudan Das gave a clarion call to the people of Odisha to boycott the foreign goods.

- A) Statement (i) is True and (ii) is False
  - B) Statement (i) is False and (ii) is True
  - C) Both the statements (i) and (ii) are True
  - D) Both the statements (i) and (ii) are False
- 

9) During which of the following events did Pandit Gopabandhu Das start a forceful movement for separation of Odisha from Bengal?

- A) Simon Commission
  - B) First Round Table Conference
  - C) First World War
  - D) Quit India Movement
- 

10) How many types of Writs are mentioned in the Article 32 of the Indian Constitution?

- A) 4
  - B) 5
  - C) 6
  - D) 7
- 

11) As per the Constitution, which among the following options is one of the Fundamental Duty of the citizens of India?

- A) To promote international peace and security
  - B) To uphold and protect the sovereignty, unity and integrity of India
  - C) To maintain just and honourable relations between nations
  - D) To encourage settlement of international disputes by arbitration
- 

12) As per the Constitution of India, who among the following is elected by an electoral college consisting of members of both the Houses of Parliament of India?

- A) Vice President of India
- B) Chief Justice of India
- C) Governor of the State
- D) Attorney General of India

13) The separation of visible light into its different colours by a prism is known as:

- A) Refraction
  - B) Dispersion
  - C) Reflection
  - D) Interference
- 

14) The branch of medicine which deals with the study of the digestive system and disorders associated with it, is:

- A) Oncology
  - B) Entomology
  - C) Gastroenterology
  - D) Genealogy
- 

15) Which one of the following waves CANNOT pass through vacuum?

- A) Sound waves
  - B) Gamma rays
  - C) Ultraviolet waves
  - D) Microwaves
- 

16) Which one of the following gases is used to extinguish fire?

- A) Ethanol
  - B) Gasoline
  - C) Methane
  - D) Carbon dioxide
- 

17) River Godavari originates from which of the following states in India?

- A) Maharashtra

- B) Tamil Nadu
  - C) Andhra Pradesh
  - D) Telangana
- 

18) In which of the following countries is Lake Baikal, one of the deepest lakes in the world, located?

- A) China
  - B) Egypt
  - C) Russia
  - D) Ukraine
- 

19) Which of the following options is the highest mountain peak in African Continent?

- A) Mount Vinson Massif
  - B) Mount Kilimanjaro
  - C) Atlas Mountain
  - D) Mount Aconcagua
- 

20) In which of the following neighbouring countries of India is the highest fresh water lake Manasarovar located?

- A) China
- B) Nepal
- C) Bhutan
- D) Afghanistan

Section 2 - Paper I Reasoning Ability

No. of Questions: 20

---

21) Given below a set of inequalities given as statements. Choose the conclusion(s) that logically follows the statements by selecting a relevant option.

Statements:  $X > P \geq R, O = N > S \leq R$

Conclusions:

I.  $P > O$

II.  $X > S$

- A) Only I follows
- B) Only II follows
- C) Neither I nor II follows
- D) Both I and II follow

---

22) Select one of the following four options that will make the 2nd pair analogous to the 1st pair given.

BUGS : UBSG :: RING : ?

- A) IRNG
- B) RIGN
- C) RGIN
- D) IRGN

---

23) Given below a set of inequalities given as statements. Choose the conclusion(s) that logically follows the statements by selecting a relevant option.

Statement:  $F > R \geq I > D \geq G < E$

Conclusion:

- I.  $G > R$
- II.  $R > G$
- III.  $G \geq R$

- A) Only I follows
- B) Only II follows

- C) Only III follows
  - D) Only II and III follows
- 

24) Select one of the following four options that will make the 2nd pair analogous to the 1st pair given

6942 : 2496 :: 4175 : ?

- A) 5741
  - B) 5714
  - C) 1457
  - D) 1475
- 

25) Arun, Barun and Chetan can together complete a piece of work in 8 days. Arun alone can complete it in 15 days and Barun alone in 18 days. How many days will be taken by Chetan to complete it alone?

- A) 256 days
  - B) 268 days
  - C) 360 days
  - D) 320 days
- 

26) What must be added to each of the numbers 7 and 13 so that the resultant ratio becomes 2:3 ?

- A) 1
  - B) 2
  - C) 3
  - D) 5
- 

27) A radio was purchased for ₹ 490 and sold for ₹ 465.50. What was the loss percentage?

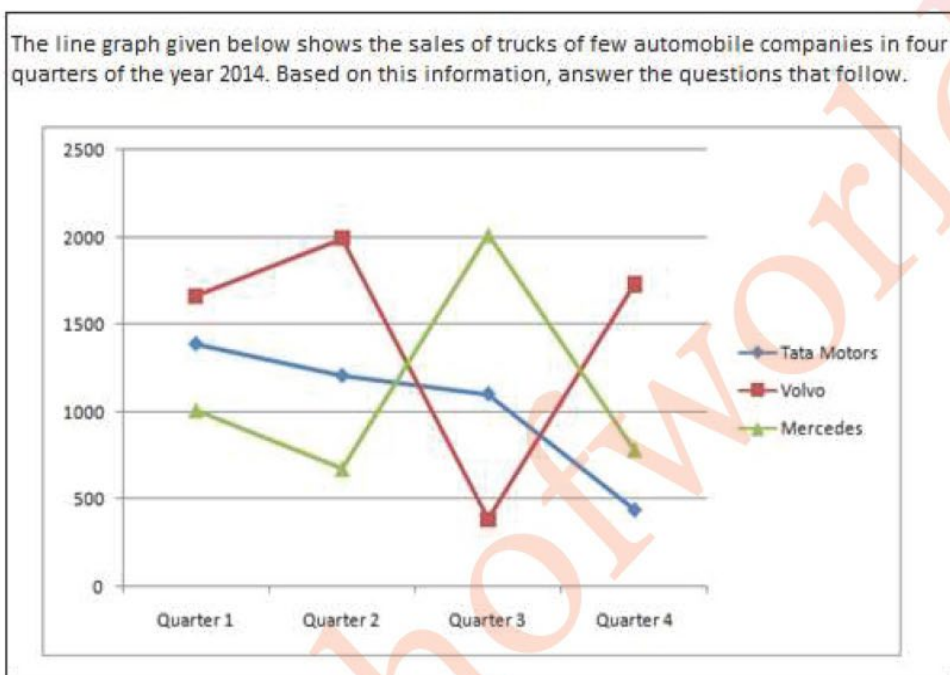
- A) 6%
- B) 7%
- C) 5%
- D) 4%



28) A person incurs a loss of 5% by selling a watch for ₹ 1,140. At what price should the watch be sold to earn a 5% profit?

- A) ₹ 1,260
- B) ₹ 1,150
- C) ₹ 1,355
- D) ₹ 1,420

29)



In which quarter the sale of Mercedes was the lowest?

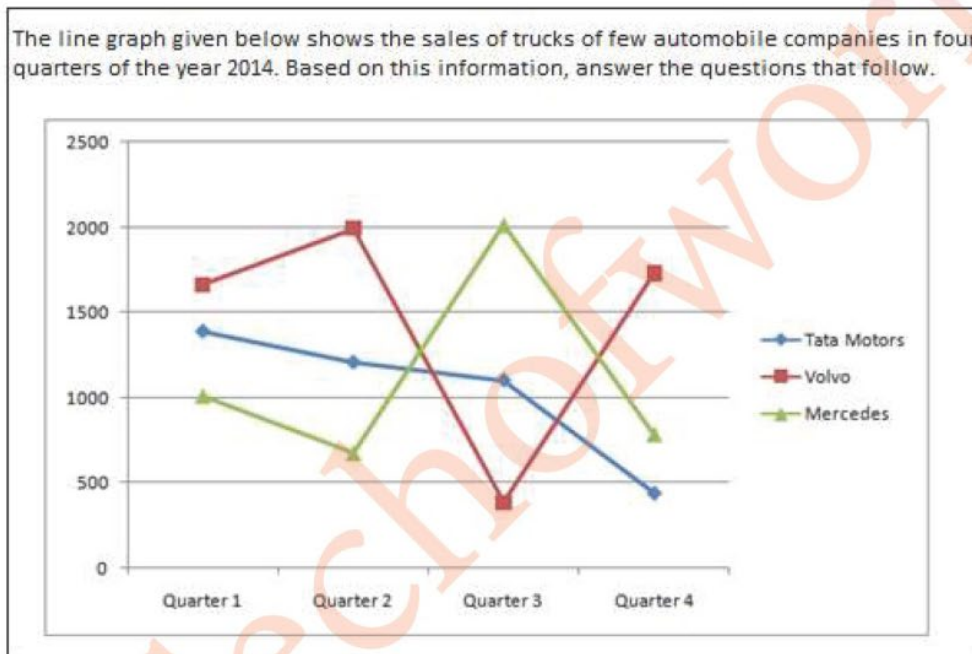
- A) Quarter 1
- B) Quarter 2
- C) Quarter 3
- D) Quarter 4

30) In which match Rohit scored same number of runs as the number of balls faced?

	Kohli		Rohit		Rahane	
	Runs scored	Balls faced	Runs scored	Balls faced	Runs scored	Balls faced
Match 1	32	50	17	12	112	98
Match 2	0	3	97	78	12	27
Match 3	43	41	28	28	90	91
Match 4	2	8	19	12	47	52

- A) Match 1
- B) Match 2
- C) Match 3
- D) Match 4

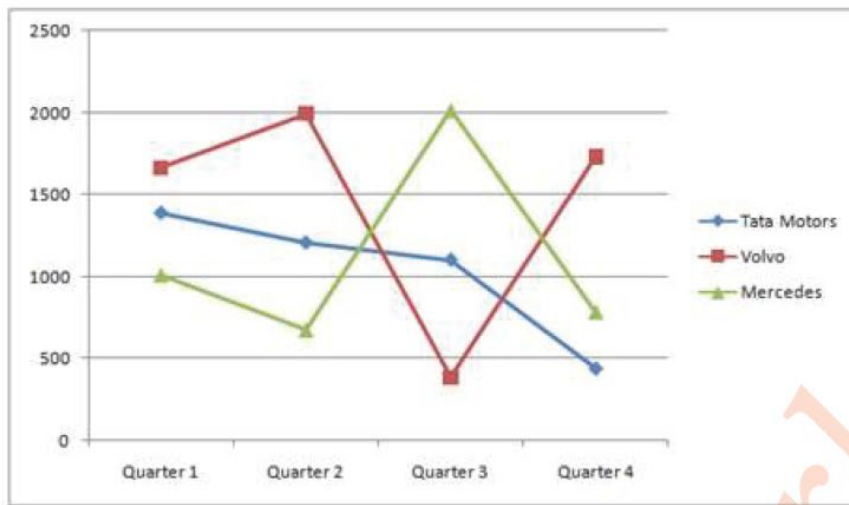
31)



How many trucks did Tata Motors sell in the complete year approximately?

- A) 3600
- B) 4100
- C) 4500
- D) 4900

The line graph given below shows the sales of trucks of few automobile companies in four quarters of the year 2014. Based on this information, answer the questions that follow.



What is the ratio of sales in second quarter by Volvo to sales in first quarter by Mercedes?

- A) 2:1
- B) 3:2
- C) 4:3
- D) 5:4

33) Select one of the following four options that will make the second pair analogous to the first pair given :

Pentagon : 5 :: Decagon : ?

- A) 15
- B) 20
- C) 25
- D) 35

34) In a certain code language, if "LIFE" is coded as "6294" and "DEATH" is coded as "74018", then what group of letters is coded as "2106489"?

- B) ITALEHF
  - C) ITAELHF
  - D) ITALFHE
- 

35) Select one of the following four options that will make the second pair analogous to the first pair given:

$$(3 + 4 + 5) : 60 :: (4 + 5 + 6) : ?$$

- A) 90
  - B) 100
  - C) 120
  - D) 180
- 

36) Select one of the following four options that will make the second pair analogous to the first pair given:

LATERAL : TALELAR :: POINT : ?

- A) OTNPI
  - B) OPITN
  - C) OIPNT
  - D) NTOPI
- 

37) Ram's father's sister's mother's only daughter in law is Urvashi. How is Urvashi related to Ram?

- A) Niece
  - B) Grandmother
  - C) Sister
  - D) Mother
- 

38) Vijay is the son in law of Rajeev's father Suman. How is Rajeev's only sister related to Vijay?

- A) Wife
- B) Sister
- C) Sister in law
- D) Mother

39) A man walks 2 km towards north from point A and turns to his right and walks 4 km. He turns right and walks 3 km and again turns right and walks 4 km to reach point B. How far is he from his starting point?

- A) 1 km
- B) 2 km
- C) 13 km
- D) 3 km

---

40) Pointing to a photograph of a person, Rajan said that the person in the photograph is my father's brother's son. How is that person related to Rajan's sister?

- A) Father
- B) Uncle
- C) Son
- D) Cousin



Section 3 - Paper I Computer Literacy

No. of Questions: 10

---

41) Choose the option that is temporary location for deleted files or folders

- A) This PC
- B) Trash
- C) Documents
- D) Recyclebin

---

42) The Capslock key is not working in the keyboard.If A user wants to type a capital letter then what is the other method to do the same

- A) Spacebar+character
- B) Alt+character
- C) Shift+character
- D) Fn+character

---

43) "Browser is loading web pages very slowly" If the above needs an immediate resolution, then which of the following will not be a choice to resolve it

- A) Clear the cache content
- B) Antivirus installation
- C) Disabling unwanted browser extensions
- D) Change of Keyboard

---

44) Which of the following option will allow multiple users to work on same word document at a time instead of multiple documents?

- A) Word document sharing through mail
- B) Splitting and Collaborating a word document
- C) Place the doc in onedrive/google drive and share with the users
- D) None of the given options

---

45) Identify the option that is different from others

- A) Speakers
- B) Joystick
- C) OCR
- D) Trackball

---

46) In magnetic disc the tracks further divided into

- A) Disks
- B) Cylinders
- C) Platters
- D) Sectors

---

47) Mr.X is started communication over the internet using credentials of Mr.Y.This is known as

- A) Identity theft
- B) Phishing
- C) Man in the middle attack
- D) Denial of service attack

---

48) The Physical address of a device is also known as \_\_\_\_\_

- A) Source address
- B) Logical address
- C) MAC address
- D) Virtual Address

---

49) Which protocol is used in world wide web to transfer the data?

- A) HTTP/HTTPS
- B) FTP
- C) CDMA
- D) DSL

---

50) Which Social Networking site is explicitly used by working professionals for sharing job related information and vacancies?

- A) Instagram
- B) LinkedIn
- C) Twitter
- D) YouTube

Section 4 - Paper I Pedagogy Educational Management Policies and Evaluation

No. of Questions: 40

---

51) What is the purpose of evaluation?

- A) To measure the achievement of students
  - B) To test the students in a subject
  - C) To make reliable decisions about educational planning
  - D) To assign a mark to a student
- 

52) Evaluation helps to make judgments about educational:

- A) Quantity
  - B) Time period
  - C) Quality
  - D) Age
- 

53) Which of the following is a feature of learner-centred assessment?

- A) Learners are actively involved in assessment process.
  - B) Learner-centred assessment is a single imodal
  - C) Learner-centred assessment relates to managemet's goals
  - D) Learner-centred assessment involves narrow data
- 

54) Match the marks range and grade in CBSE 9 point grading system for the secondary stage classes

Marks	Grade
a) 51-60	1) A1
b) 81-90	2) A2
c) 21-32	3) B1
d) 71-80	4) B2
e) 33-40	5) C1
	6) C2
	7) D
	8) E1
	9) E2

- A) a)6 b)1 c)4 d) 2 e)9
- B) a)5 b)2 c)8 d) 3 e)7



- C) a)3 b)5 c)6 d)3 e)8  
D) a)6 b)3 c)7 d)4 e)9
- 

55) All of the following are merits of a semester system EXCEPT:

- A) Semester system keeps the students engaged in studies throughout the year
  - B) Semester system increases the workload on teachers and students
  - C) Semester system increases transparency in the assessment
  - D) Semester system allows greater interaction with teachers and students
- 

56) In order to reduce subjectivity and increase transparency in scoring oral presentations and speeches, it's best to use

- A) Criteria
  - B) Multiple evaluations
  - C) Rubrics
  - D) Compiled scores
- 

57) A question stem with alternatives for answers is

- A) Matching questions
  - B) Multiple-choice questions
  - C) Fill-in-the blank questions
  - D) Complex questions
- 

58) A questionnaire seeking students reflection on their progress in their lesson including on how they feel is a

- A) Standard assessment
  - B) Diagnostic assessment
  - C) Constructed assessment
  - D) Self-assessment
- 

59) Which of the following is TRUE about determining the weightage to different instructional objectives?

- A) All the arrays of instructional objectives can be included in a standardised test
- B) In a written test we cannot measure the psychomotor domain and affective domain
- C) All the subjects contain different learning objectives like knowledge, understanding, application and skill in equal proportion
- D) While deciding weightage we need not keep in mind the importance of the particular objective for that subject or chapter.

60) The essential qualities or criteria of an effective tool do NOT include

- A) Reliability
  - B) Validity
  - C) Objectivity
  - D) Popularity
- 

61) Identify the correct sequence of the four main steps of a standardized test.

- A. 1. Planning the test 2. Trying out the test 3. Preparing the test 4. Evaluating the test
- B. 1. Preparing the test 2. Planning the test 3. Evaluating the test 4. Trying out the test
- C. 1. Preparing the test 2. Trying out the test 3. Evaluating the test 4. Planning the test
- D. 1. Planning the test 2. Preparing the test 3. Trying out the test 4. Evaluating the test

- A) D
  - B) A
  - C) C
  - D) B
- 

62) Development is lifelong, i.e. it takes place across all age groups starting from conception to old age. It includes both gains and losses. This is an assumption in which of the following perspectives?

- A) Large-Span Perspective
  - B) Long-Span Perspective
  - C) Life-Span Perspective
  - D) Little-Span Perspective
- 

63) The physical changes that take place during adolescence are

- A) Universal
  - B) Dimensional
  - C) Habitual
  - D) Susceptable
- 

64) Learning to drive a car with gear and then shifting to driving a car with an automatic gear system requires

- A) Assimilation
  - B) Accommodation
  - C) Adaptation
  - D) Acclimatisation
- 

65) The orderly, durable changes in learners resulting from a combination of experience, learning, and maturation' can be defined as

- A) Child Development
  - B) Mental Cognition
  - C) Innate Learning
  - D) Compulsive Socialisation
- 

66) A child presumes earth to be flat based on her direct experience of the landscape around her. This is an example of

- A) Schemas
  - B) Concepts
  - C) Experience
  - D) Deduction
- 

67) Small children are sometimes seen to demand that they be given a chance to drive. This is clearly indicative of

- A) Lack of organisation
  - B) Lack of schemes
  - C) Lack of adaptation
  - D) Lack of accommodation
- 

68) "Bullying involves undesirable and aggressive behavior among school aged children which involves a real or a perceived power imbalance." Which type of bullying involves purposefully excluding someone from a group, or embarrassing someone on purpose ?

- A) Mental bullying
  - B) Verbal bullying
  - C) Social bullying
  - D) Physical bullying
- 

69) 'Let's see, what kind of answer is the problem asking for?' Is a kind of self-talk individuals could exhibit while solving a problem. This kind of self-talk that guides thinking and action is called as

- A) Self- Speech

- B) PEP Speech
  - C) Private Speech
  - D) Guided Thinking
- 

70) Planning includes

- A) Authority and accountability patterns
  - B) Appropriate leadership
  - C) Goal setting
  - D) Functional decision-making
- 

71) The Sarva Shiksha Abhiyan is

- a. A programme with a clear time frame for universal elementary education.
- b. A response to the demand for quality basic education all over the country.
- c. An opportunity for promoting social justice through higher education.

- A) Only b & c
  - B) Only c & a
  - C) Only a & b
  - D) Only a
- 

72) The principal target of this mission is to impart functional literacy to 70 million

- A) Sarva Shiksha Abhiyan
  - B) Saakshar Bharat
  - C) National Literacy Mission
  - D) Padhe Bharat Badhe Bharat
- 

73) The goal of Sarva Shiksha Abhiyan Mission is to

- A) Provide Mid day Meals
  - B) Retention of all children in school
  - C) Providing Grants to Schools
  - D) Provide play ground in all schools
- 

74) One of the reasons for revision of the National Educational Policy, 1986 in the year 1992 is

- A) New reality in the form of economic liberalisation in 1990's
- B) Change in government and consequently their priorities
- C) Shift in the focus of the nation due to multiple governments
- D) Substantial errors were noticed in the policy of 1986

75) With reference to the emphasis on digital transformation and initiation of courses like coding, the main issue with NEP, 2020 would be to manage

- A) Creating a legal framework for the syllabus on IT
  - B) A network of schools that can interact and excel
  - C) Developing a unique curriculum suitable to India
  - D) The extent of digital divide that exists in India
- 

76) 10+2+3 structure was recommended by which educational commission

- A) Radhakrishna Commission
  - B) Kothari commission
  - C) Yash Pal Committee Report
  - D) New Education Policy, 1986
- 

77) The educational policy in India that had an imbalanced importance on the English language is ascribed to which education commission?

- A) The Reforms Act of 1813
  - B) Hunter Commission
  - C) Macaulay's Minutes
  - D) The Reforms Act of 1935
- 

78) Transfer of learning may take place in three ways. Identify them

- A) Positive, Negative, Neutral
  - B) Plus, Minus, Zero
  - C) Positive, Negative, Zero
  - D) Addictive, Consecutive, Zero
- 

79) Which of the following kinds of learning is NOT based on type of activity?

- A) Motor Learning
  - B) Verbal Learning
  - C) Discrimination Learning
  - D) Individual Learning
- 

80) The cerebral cortex in the human brain is particularly significant because

- A) It is unique to humans alone
- B) It makes possible neural plasticity

- C) It helps in planning and logical thinking
  - D) It helps in emotional thinking
- 

81) Small children are sometimes seen to demand that they be given a chance to drive. This is clearly indicative of

- A) Lack of organisation
  - B) Lack of schemes
  - C) Lack of adaptation
  - D) Lack of accommodation
- 

82) The challenge to any classroom structure is to provide right challenge to the students. An appropriate design of the classroom that allows students to work at their own level of ability and also have access to teacher's expertise is best described by

- A) Multiple-choice tests
  - B) Projects that are open-ended
  - C) Verbatim competitions
  - D) Recalling form memory tests
- 

83) Children's behaviour in the classroom is determined by several kinds of reasoning as per Nancy Eisenberg. Which of the following behaviours exhibits the 'approval-oriented' reasoning?

- A) Expectation fo fun in the party
  - B) Assessment of need for help in the situation
  - C) Considering how teachers would respond to her action
  - D) Considering the most decent thing to do
- 

84) Designing a classroom so that enough practice can take place in order to master a skill or become clear of procedure helps in the thickening of

- A) Myelin sheath
  - B) Axon
  - C) Dendrite
  - D) Synapse
- 

85) Which of the following research methods would be most suitable to assess the impact of homework submissions on learning?

- A) Descriptive
- B) Correlational
- C) Experimental

D) Action

---

86) A school in a democratic society can demonstrate the ideals of democracy when the teacher in the class acts as a

- A) Guide who facilitates learning
  - B) Authority who has all the power
  - C) Person of wisdom who has all the information
  - D) Dictator who directs everything
- 

87) Which among the following is an objective of affective domain?

- A) Procedural knowledge
  - B) Perceptual abilities
  - C) Organising
  - D) Conceptual knowledge
- 

88) The ability to think abstractly about the role of concepts like democracy, human rights and justice for a fair society as per Piaget's stages of development is a characteristic of

- A) Sensorimotor stage
  - B) Pre-operational stage
  - C) Concrete operational stage
  - D) Formal operational stage
- 

89) A teacher asks her students to read a passage. She then observes them and records her observations about their reading skills. She then gives them feedback. Which form of assessment is the teacher following?

- A) Formative assessment
  - B) CCE
  - C) Summative assessment
  - D) Research
- 

90) While planning a lesson, time management must include

- A) Only the lesson objectives
- B) Time for assessing learning
- C) Learning objectives and non-instruction routines
- D) Sufficient time for humour and entertainment

Section 5 - Paper II History and Political Science

No. of Questions: 10

---

91) Under which title the National Anthem of India 'Jana-Gana-Mana' was first published in the 'Tatva Bodhini Patrika' in January 1912, which was composed by Rabindra Nath Tagore?

- A) Bharat Bidhata
- B) Jay He Jay Ho
- C) Bharatiya Gaan
- D) Rashtra Jan Jagriti

---

92) From which Upanishad the Government of India has adopted the State Emblem the words, Satyameva Jayate?

- A) Mundaka Upanishad
- B) Chandogya Upanishad
- C) Taittiriya Upanishad
- D) Kausitaki Upanishad

---

93) A new calendar, a new system of coinage, and new scales of weights and measures were introduced during the reign of which ruler, approximately during the years (1782- 1799)?

- A) Siraj ud-Daulah
- B) Mohammad Bin-Tughlaq
- C) Tipu Sultan
- D) Raghunath Rao

---

94) When was the Rowlatt Act passed by the Imperial Legislative Council ?

- A) 1909
- B) 1919
- C) 1922
- D) 1929

---

95) Which of the remains that was excavated in Indus Valley indicates its Commercial and Economic Development?

- A) The boats
- B) Seals
- C) The Pottery
- D) The houses



---

96) Which among the following options was the first reform movement which started in the 19th Century?

- A) Arya Samaj
  - B) Rama Krishna Mission
  - C) Brahmo Samaj
  - D) Prathana Samaj
- 

97) The CORRECT relationship between Rights and Duties in the context of India Constitution, is indicated in which of the following options?

- A) Duties, not Rights, are important for the stability of the State
  - B) Directive Principles of State Policy
  - C) Rights and Duties are correlative and inseparable
  - D) Prohibition of traffic in human beings and forced labours
- 

98) The power of Judicial review is most clearly expressed in which of the two provisions of the Indian Constitution?

- A) Article 32 and Article 300
  - B) Article 51 and Article 250
  - C) Article 12 and Article 226
  - D) Article 32 and Article 226
- 

99) In which part of the Indian Constitution, the mind of the makers is reflected?

- A) Figures in the Preamble
  - B) The Preamble
  - C) Socialism and Secularism
  - D) Fundamental Rights
- 

100) Special provisions with respect to the State of Andhra Pradesh or the State of Telangana is mentioned in which article of the Indian Constitution?

- A) Article 341
- B) Article 351
- C) Article 361 D
- D) Article 371 D

Section 6 - Paper II Geography and Economics

No. of Questions: 10

---

101) The soil which is mostly confined to river basins and coastal plains of India?

- A) Red soils
- B) Laterite soils
- C) Alluvial soils
- D) Black soils

---

102) Near which of the following ranges is the highest point of Panchmadhi situated?

- A) Satpuras
- B) Nandadevi
- C) Nanga Parbat
- D) Kanchenjunga

---

103) A very large area with less details is shown by the map of

- A) Sketches
- B) Large scale
- C) Small scale
- D) Statements

---

104) The eastern and western edges of the Deccan plateau are formed by the mountains of

- A) Andes Mountains
- B) Himalayan Mountains
- C) Nilgiri Hills
- D) Eastern and Western Ghats

---

105) The magnetic compass is generally used for :

- A) showing symbols
- B) measuring distance
- C) finding large area distances
- D) finding the directions

106) As per India 2017, which Indian state has the minimum total forest cover?

- A) Haryana
  - B) Assam
  - C) Sikkim
  - D) Punjab
- 

107) Which one among the following options is the main objective of National Literacy Mission?

- A) Abroad education
  - B) Adult education
  - C) Computer education
  - D) Primary education
- 

108) What is the initial adopted model of the Planned Economy in India called?

- A) Socialist system
  - B) Gandhian system
  - C) Mixed Economy system
  - D) Capitalist system
- 

109) Which one among the following activities comes under the Agriculture Sector?

- A) Tertiary sector
  - B) Dairy
  - C) Mineral excavation
  - D) Basket weaver
- 

110) Which among the following options was NOT a high value indicator of Social Backwardness during the British rule in India?

- A) Civil laws and courts
- B) Female Literacy
- C) Life Expectancy
- D) Literacy Rate

Section 7 - Paper II English

No. of Questions: 20

---

**Read the following passage and answer the questions: (111-115)**

Because I feel that, in the Heavens above,  
The angels, whispering to one another,  
Can find, among their burning terms of love,  
None so devotional as that of "Mother,"  
Therefore, by that dear name I long have called you—  
You who are more than mother unto me,  
And fill my heart of hearts, where Death installed you  
In setting my Virginia's spirit free.  
My mother—my own mother, who died early,  
Was but the mother of myself; but you  
Are mother to the one I loved so dearly,  
And thus, are dearer than the mother I knew  
By that infinity with which my wife  
Was dearer to my soul than its soul-life.

---

111) Whom do the angels consider as most devotional?

- A) Love
- B) The poet
- C) Death
- D) Mother

---

112) Which of the following statements find support in the poem?

- A) The poet's mother is still alive
- B) The angels are talking about the poet
- C) The poet called his wife's mother as mother
- D) The poet loved his wife and mother equally

113) The poet is holding his wife dearer than

- A) Heavens
  - B) His mother
  - C) His soul
  - D) Angels
- 

114) Which of the following is the gist of the poem?

- A) Nothing is more devotional than a mother
  - B) Own mother is not so dear as one's wife's mother
  - C) All mothers go to heaven because they are angels
  - D) One should love a wife more than one's mother
- 

115) The term 'burning terms of love' means

- A) Discussion as to who represents the term love the best
  - B) The burning topic of interest among angels and mothers
  - C) The term love is a contentious term even for the angels
  - D) In heaven the term love is burning among angels
- 

116) Identify the word which has similar pronunciation as the given word: EASY

- A) Lazy
  - B) Dizzy
  - C) Crazy
  - D) Teasy
- 

117) Identify the word which has similar pronunciation as the given word: DISH

- A) Wish
  - B) Crush
  - C) Blush
  - D) Smash
- 

"Shere Khan does us great honor," said Father Wolf, but his eyes were very angry. "What does Shere Khan need?"

"My quarry. A man's cub went this way," said Shere Khan. "Its parents have run off. Give it to me." Shere Khan had jumped at a woodcutter's campfire, as Father Wolf had said, and was furious from the pain of his burned feet. But Father Wolf knew that the mouth of the cave was too narrow for a tiger to come in by. Even where he was, Shere Khan's shoulders and forepaws were cramped for want of room, as a man's would be if he tried to fight in a barrel.

“The Wolves are a free people,” said Father Wolf. “They take orders from the Head of the Pack, and not from any striped cattle-killer. The man’s cub is ours—to kill if we choose.”

“Ye choose and ye do not choose! What talk is this of choosing? By the bull that I killed, am I to stand nosing into your dog’s den for my fair dues? It is I, Shere Khan, who speak!”

(118-122)

---

118) What did Shere Khan want?

- A) Food as he was hungry
- B) To be the king of the pack
- C) The father wolf
- D) The man cub

---

119) Why was Shere Khan furious?

- A) He wanted the man cub
- B) His feet were burnt
- C) He wanted more food
- D) He was being opposed

---

120) What was Shere Khan's physical position?

- A) Like a majestic tiger
- B) Like a man fighting in a barrel
- C) Like a wounded animal
- D) Like a child in danger

---

121) Who was protecting the man cub?

- A) Shere Khan
- B) The animal children
- C) The animals
- D) Father wolf

---

122) Whose order did the wolves follow?

- A) Shere Khan
- B) The people
- C) Pack leader
- D) President

123) Fill in the blanks with correct option:  
We stayed \_\_\_\_\_ Singapore for one week.

- A) at
  - B) to
  - C) inside
  - D) in
- 

124) You will find a sentence using direct speech (words actually spoken) followed by four options. You are required to choose the one that is the correct form of the sentence in indirect/reported speech.  
Jack said, "We had very heavy showers last night."

- A) Jack said that they had had very heavy showers the previous night
  - B) Jack said we had very heavy showers the previous night
  - C) Jack said they have very heavy showers the previous night
  - D) Jack said they had very heavy showers last night
- 

125) Fill in the blanks with correct option:  
Deepa worked \_\_\_\_\_ great sincerity.

- A) for
  - B) in
  - C) with
  - D) by
- 

126) Fill in the blanks with correct option:

I jumped \_\_\_\_\_ the fence and ran after the thief.

- A) above
  - B) over
  - C) under
  - D) to
- 

127) Fill in the blanks with the correct form of verb:  
The referee \_\_\_\_\_ the final whistle.

- A) blow
- B) blew

- C) have blown
  - D) must blown
- 

128) Fill in the blanks with the correct form of verb:  
Birds \_\_\_\_\_ the natural enemies of many insect pests.

- A) is
  - B) was
  - C) are
  - D) have
- 

129) Fill in the blanks with the correct form of verb:  
The disease \_\_\_\_\_ to wipe out the entire population.

- A) threatens
  - B) threaten
  - C) threatening
  - D) was threatened
- 

130) Chose the word that is spelt correctly and fill the blanks:  
The kite \_\_\_\_\_ high.

- A) soered
- B) soured
- C) sored
- D) soared



## Section 8 - Paper II Odia

No. of Questions: 20

131) "କବୀ ଚି କାରାଗାରରୁ ମୁକ୍ତି ପାଇଲା" ରେଖାଙ୍କିତ ଶବ୍ଦ କେଉଁ କାରକକୁ ସୂଚାଏ?

- A) କର୍ତ୍ତା କାରକ
- B) କର୍ମ କାରକ
- C) ଅଧିକରଣ କାରକ
- D) ଅପାଦାନ କାରକ

132) 'ନିର୍ଦ୍ଦେଶ' ଶବ୍ଦଟିର ପ୍ରକୃତି ପ୍ରତ୍ୟୟ ନିର୍ଦ୍ଦେଶ କର।

- A) ନିଃ-ଦିଶ୍ଵ+ତ
- B) ନିର୍-ଦିଶ୍ଵ+ତ
- C) ନିର୍-ଦିଶ୍ଵ+ତ
- D) ନିଃ-ଦିଶ୍ଵ+ତ

133) "ଲକ୍ଷ୍ମଣଟି ମିଞ୍ଜିମିଞ୍ଜି ଜଳୁଛି" ରେଖାଙ୍କିତ ପଦଟି କି ପ୍ରକାର ବିଶେଷଣ ନିର୍ଣ୍ଣୟ କର।

- A) ସାର୍ବନାମିକ
- B) କ୍ରିୟା ବାଚକ
- C) ଗୁଣ ବାଚକ
- D) ଅବସ୍ଥା ବାଚକ

134) 'ନିଷ୍ଠା'- ବିଶେଷ୍ୟ ପଦର ବିଶେଷଣ କ'ଣ ହେବ?

- A) ନୈଷ୍ଠିକ
- B) ନିଷ୍ଠିକ
- C) ନିଷ୍ଠାକର
- D) ନିଷ୍ଠାପର

135) "ଯାହା ଅନ୍ୟର କ୍ଷତିକାରକ, ତାହା ହିଁ ଅମଙ୍ଗଳ"- ରେଖାଙ୍କିତ ପଦସ୍ତୟ କେଉଁ ପ୍ରକାର ସର୍ବନାମ ଅଟେ?

- A) ପୁରୁଷ ବାଚକ
  - B) ନିର୍ଦ୍ଦେଶାତ୍ମକ
  - C) ନିର୍ଣ୍ଣାୟକ
  - D) ଆପେକ୍ଷିକ
- 

136) 'କୁହୁଡ଼ି ପହଁରିବା' - ଉକ୍ତ ରୂପର ଅର୍ଥ କ'ଣ?

- A) ଉପରେ ଉପରେ ଭାସିବା
  - B) ମିଛ କଥା କହିବା
  - C) କିଛି ନଜାଣି କହିବା
  - D) ମୂଲ୍ୟହୀନ ପରିଶ୍ରମ କରିବା
- 

137) ନିମ୍ନଲିଖିତ ମଧ୍ୟରୁ ଶୁଦ୍ଧ ଶବ୍ଦଟିକୁ ଚୟନ କର।

- A) ଇଷତ୍
  - B) ଲିଖିତ୍
  - C) ଇଷତ୍
  - D) ଲିପିତ୍
- 

138) ଭିନ୍ନଧର୍ମୀ ଶବ୍ଦକୁ ଚିହ୍ନଟ କର ।

- A) ରୂପକ
  - B) ଉପପଦ
  - C) ଉପନିତ
  - D) ଉପମାନ
- 

139) 'ଚିର ଦୁଃଖ' ର ସମାସ ନିର୍ଣ୍ଣୟ କର।

- A) ଦ୍ୱିତୀୟା
- B) ତୃତୀୟା
- C) ଚତୁର୍ଥୀ
- D) ପଞ୍ଚମୀ

140) 'ପିତୃ+ଇଚ୍ଛା' ଏହାକୁ ସନ୍ଧି କଲେ କଣ ହେବ?

- A) ପିତୃଛା
- B) ପିତୃଛା
- C) ପିତୃଇଚ୍ଛା
- D) ପିତରିଚ୍ଛା

141) 'ପୌଷ' - ଏଠାରେ ଥିବା ମୂଳ ଶବ୍ଦଟିକୁ ବାଛ।

- A) ପୁଷ
- B) ପୁଷ୍ୟା
- C) ପୁଷ
- D) ପୁଷ୍ୟ

142) 'ଏ ବର୍ଷର ଶୀତ ଅସହ୍ୟ' ଏହା କି ପ୍ରକାର ବାକ୍ୟ?

- A) ବିସ୍ମୟ ସୂଚକ
- B) ଅଦେଶ ସୂଚକ
- C) ବିବୃତ୍ତି ସୂଚକ
- D) ପ୍ରଶ୍ନ ସୂଚକ

143) "ଲକ୍ଷ୍ମର ବିନା ମୁକ୍ତି ନାହିଁ" ରେଖାଙ୍କିତ ପଦଟି କେଉଁ ବିଭକ୍ତି ଅଟେ?

- A) ଚତୁର୍ଥୀ
- B) ପଞ୍ଚମୀ
- C) ଷଷ୍ଠୀ
- D) ସପ୍ତମୀ

ଦେଶଛାଡ଼ି ଜଣେ ବ୍ୟକ୍ତି ଯଦି ବିଦେଶରେ କୋଡ଼ିଏବର୍ଷ ରହିଯାଏ ତେବେ ସେହି ବିଦେଶଟା ତାଙ୍କର ଦ୍ଵିତୀୟ ଘର ହୋଇଯାଏ। ମହାତ୍ମା ଗାନ୍ଧୀଙ୍କ କ୍ଷେତ୍ରରେ ଦକ୍ଷିଣ ଆଫ୍ରିକା ତାଙ୍କର ଦ୍ଵିତୀୟ ଘର ପାଲଟିଯାଇଥିଲା। ସେଠାରେ ସେ ଇଂରେଜ ମାନଙ୍କର ବିଭିନ୍ନ ପ୍ରକାର ଦାଉ ସହି ଭାରତୀୟ ମାନଙ୍କର ସ୍ଵଭାବିକାର ନିମନ୍ତେ ନିର୍ଭୟରେ ଲଢ଼େଇ କରୁଥିଲେ । ଏଥିପାଇଁ ସେ ଦୃଢ଼ପ୍ରତିଜ୍ଞ ହୋଇ ଅହର୍ନିଶ ପରିଶ୍ରମ କରୁଥିଲେ । ପରିଶେଷରେ ସଫଳତା ହାସଲ କରି ନିଜ ଦେଶକୁ ପ୍ରତ୍ୟା ବର୍ତ୍ତନ କଲେ।

(Questions from 144-148)

144) "ମହାତ୍ମା"- ଉକ୍ତ ପଦର ସମାସ ନିରୂପଣ କର।

- A) ଅବ୍ୟୟୀଭାବ
- B) ନିତ୍ୟ
- C) କର୍ମ ଧାରଣ
- D) ବହୁବ୍ରୀହି

145) "ଅହର୍ନିଶ" ର ଶୁଦ୍ଧ ବନାନ ନିର୍ଣ୍ଣୟ କର ।

- A) ଅହର୍ନିଶ
- B) ଅହର୍ନିଶି
- C) ଅହର୍ନୀଶି
- D) ଅହର୍ନିଷ

146) "ଦୃଢ଼ ପ୍ରତିଜ୍ଞା"- ଉକ୍ତ ସମାସର ବିଗ୍ରହ ବାକ୍ୟ ନିର୍ଣ୍ଣୟ କର।

- A) ଦୃଢ଼ ଅଟେ ପ୍ରତିଜ୍ଞା
- B) ପ୍ରତିଜ୍ଞାରେ ଦୃଢ଼
- C) ଦୃଢ଼ତାର ସହ ପ୍ରତିଜ୍ଞା
- D) ଦୃଢ଼ ପ୍ରତିଜ୍ଞା ଯାହାର

147) "ସ୍ଵଭାବିକାର" - ଉକ୍ତ ଶବ୍ଦର ସଠିକ୍ ଶୁଦ୍ଧ ରୂପଟି ଚୟନ କର।

- A) ସ୍ଵଭାବିକାର
- B) ସ୍ଵତ୍ୟାବିକାର
- C) ସ୍ଵଭାବିକାର
- D) ସ୍ଵଭାବିକାର

148) "ନିର୍ଭୟ"- ଏହା କେଉଁ ଅର୍ଥରେ ଅବ୍ୟୟୀଭାବ ସମାସ ହୋଇଛି ଦର୍ଶାଅ ।

- A) ନ୍ୟୁନ
- B) ଅଭାବ
- C) ବିପରୀତ
- D) ଯୋଗ୍ୟତା



149) ନିମ୍ନଲିଖିତ ଲେଖକଙ୍କ ମଧ୍ୟରୁ କିଏ 'କୋଟି ବ୍ରହ୍ମାଣ୍ଡ ସୁନ୍ଦରୀ' ର ରଚୟିତା ଅଟନ୍ତି?

- A) ଆଭିମନ୍ୟୁ ସାମନ୍ତ ସିଂହାର
- B) ଉପେନ୍ଦ୍ରଭଞ୍ଜ
- C) ବ୍ରଜନାଥ ବଡ଼ଜେନା
- D) ନନ୍ଦ କିଶୋର ବଳ

150) ନିମ୍ନଲିଖିତ ମଧ୍ୟରୁ କେଉଁଟି ମଧୁସୂଦନ ରାଓଙ୍କ ଶ୍ରେଷ୍ଠ ରଚନା?

- A) ପ୍ରଣୟ ବଳରା
- B) କୁସୁମାଞ୍ଜଳି
- C) ନିର୍ଦ୍ଦେଶିଣୀ
- D) ସମର ତରଙ୍ଗ

www.tow.in



Question Paper No:

72710\_33

Answer Key

1	D	31	B	61	A	91	A	121	D
2	A	32	A	62	C	92	A	122	C
3	D	33	D	63	A	93	C	123	D
4	A	34	B	64	C	94	B	124	A
5	A	35	C	65	A	95	B	125	C
6	A	36	B	66	A	96	C	126	B
7	C	37	D	67	A	97	C	127	B
8	C	38	A	68	C	98	D	128	C
9	C	39	A	69	C	99	B	129	A
10	B	40	D	70	C	100	D	130	D
11	B	41	D	71	C	101	C	131	D
12	A	42	C	72	B	102	A	132	C
13	B	43	D	73	B	103	C	133	B
14	C	44	C	74	A	104	D	134	A
15	A	45	A	75	D	105	D	135	D
16	D	46	D	76	B	106	A	136	D
17	A	47	A	77	C	107	B	137	C
18	C	48	C	78	C	108	C	138	B
19	B	49	A	79	D	109	B	139	A
20	A	50	B	80	B	110	A	140	A
21	B	51	C	81	A	111	D	141	B
22	D	52	C	82	B	112	C	142	C
23	B	53	A	83	C	113	C	143	C
24	B	54	B	84	A	114	A	144	C
25	C	55	B	85	D	115	A	145	A
26	D	56	C	86	A	116	D	146	D
27	C	57	B	87	C	117	A	147	C
28	A	58	D	88	D	118	D	148	B
29	B	59	B	89	A	119	B	149	B
30	C	60	D	90	C	120	B	150	B

