

←

CHT- TGT ARTS 2022

E-BOOK-PDF

6,000 MCQ

EXPLANATION

1,500 ଟି ପୂର୍ବ ବର୍ଷର ପ୍ରଶ୍ନ

100% ସଫଳତା



CHT- CONTRACTUAL TEACHER (TGT ARTS) 2022 EXAM !! E-BOOK (PDF) 6,000 BEST MCQ !! CHAPTER WISE QUESTIONS & ANSWER

more

₹199.00 ₹99.00

Validity- 1 Year

English- 1500 (MCQ)...

more

ADD TO CART BUY NOW

[Click Here](#)

←

CHT- TGT CBZ 2022


E-BOOK-PDF

6,000 MCQ

EXPLANATION

750 ଟି ପୂର୍ବ ବର୍ଷର ପ୍ରଶ୍ନ

100% ସଫଳତା



CHT- CONTRACTUAL TEACHER (TGT CBZ SCIENCE) 2022 EXAM !! E-BOOK (PDF) 6,000 BEST MCQ !! CHAPTER WISE QUESTIONS & ANSWER

more

₹199.00 ₹99.00

Validity- 1 Year

Previous Year Question- 750 (2022, 2021 & 2019 Year)...

more

ADD TO CART BUY NOW

[Click Here](#)

←

CHT- TGT PCM 2022


E-BOOK-PDF

6,000 MCQ

EXPLANATION

1,350 ଟି ପୂର୍ବ ବର୍ଷର ପ୍ରଶ୍ନ

100% ସଫଳତା



CHT- CONTRACTUAL TEACHER (TGT PCM SCIENCE) 2022 EXAM !! E-BOOK (PDF) 6,000 BEST MCQ !! CHAPTER WISE QUESTIONS & ANSWER

more

₹199.00 ₹99.00

Validity- 1 Year

Previous Year Question- 1,350 (2022, 2021 & 2019 Year)...

more

ADD TO CART BUY NOW

[Click Here](#)

← Tech of World

HOME VIDEOS PLAYLISTS COMMUNITY

ଆମ Channel ରେ ଦେଖନ୍ତୁ Video

ASO ଓଡ଼ିଶା ପୋଷାଳ **CT ଓ B.Ed**

ଓଡ଼ିଶା ପୋଲିସ **SSC GD Railway**



Tech of World

SUBSCRIBE

315K subscribers • 928 videos

Hello ସାଙ୍ଗ ମାନେ !! ଆମେ ଏହି Channel ରେ ପ୍ରଚାରଣ Educational Video

Free ଲେ ଶେଷପାଇବେ ଯେଉଁ ଚେନେଲର ନାମଟି ଏହି "Tech Of World" Channel କୁ ...

+2 କିମ୍ବା +3 ପଢ଼ିବା ପରେ

କେମିତି ଜଣେ ଶିକ୍ଷକ

ହେଇପାରିବେ ?

CT ଓ B.Ed ପରେ କଣ ?



How To Become A Teacher After +2 Or +3 In Odisha ? How To Get A Teacher Job In Odisha ?

Tech of World · 176K views · 3 years ago

Home Shorts Subscriptions Library

[Click Here](#)

←

Tech Of World- (Odisha Exam CT)

Tech Of World

Uninstall Open

Your Review

sujit kumar naik ★★★★★ 6/29/21

Edit your review

Developer contact

About this app

Tech Of World (Odisha Exam) Provides Mock Test & E-Books For Different Exams

Education

3.8 ★ 422 reviews 422 reviews Rated for 3+ 50K+ Downlo.

TECH OF WORLD Mock Test

[Click Here](#)

← Tech Of World 4.1K subscribers

ASO English 2022 By... 8.7 MB PDF

ASO General Knowledge 2022... 4.9 MB PDF

ASO Math 2022 By Techofworld.In.pdf 4.6 MB PDF

ASO Odia Language 2022 By... 2.9 MB PDF

ASO Reasoning 2022 By... 4.6 MB PDF

3 comments

Broadcast

[Click Here](#)

Section 1 - Paper I General Knowledge and Current Affairs

No. of Questions: 20

1) Read the following statements and choose the CORRECT answer.

(i) In August 2021, Odisha Chief Minister Naveen Patnaik launched Smart Health Cards to 3.5 crore people in the state under the Biju Swasthya Kalyan Yojana.

(ii) The beneficiaries of National and State Food Security Schemes and Annapurna and Antodaya beneficiaries will get Smart Health Cards.

- A) (i) - TRUE and (ii) - FALSE
 - B) (i) - TRUE and (ii) - TRUE
 - C) (i) - FALSE and (ii) - FALSE
 - D) (i) - FALSE and (ii) - TRUE
-

2) As announced in August 2021, which State Government will continue to sponsor Indian Hockey Teams for another 10 years?

- A) Maharashtra Government
 - B) Odisha Government
 - C) Bihar Government
 - D) Assam Government
-

3) Identify the scheme launched by Government of Odisha in September 2020, which aims to ensure the economic safety and social dignity of core sanitation workers in the state.

- A) AMRUT
 - B) GRAMEEN
 - C) GARIMA
 - D) BALRAM
-

4) NITI Aayog by the Government of India has launched the program providing 'Sustainable Action for Transforming Human capital' with the State Governments. The acronym for this program is:

- A) SFTHC
 - B) SATC
 - C) SATH
 - D) SFTCC
-

5) Read the following statements and choose the CORRECT option.

(i) Integrated Child Development Services (ICDS) scheme launched in 1975 is a community based programme aimed at providing early childhood care and development.

(ii) ICDS scheme is targeted at children up to the age of 6 years, pregnant and lactating mothers and women of 15-45 years of age.

- A) (i) is TRUE and (ii) is TRUE
 - B) (i) is TRUE and (ii) is FALSE
 - C) (i) is FALSE and (ii) is TRUE
 - D) (i) is FALSE and (ii) is FALSE
-

6) Read the following statements and choose the CORRECT option:

(i) Sustainable development is a development that meets the needs of the present without compromising the ability of future generations to meet their own needs.

(ii) Intra generational equity and inter generational equity are two important aspects in Sustainable development.

- A) (i) is FALSE and (ii) is TRUE
 - B) (i) is TRUE and (ii) is FALSE
 - C) (i) and (ii) are FALSE
 - D) (i) and (ii) are TRUE
-

7) Generally, metals are hard. Which of the following metals is an exception and can be cut with a knife?

- A) Aluminium
- B) Copper
- C) Potassium
- D) Gold

8) A stainless steel spoon at room temperature is dipped in a cup of ice cream. Its other end

- A) becomes cold by the process of conduction
 - B) becomes cold by the process of convection
 - C) becomes cold by the process of radiation
 - D) does not become cold
-

9) Since it appears in the eastern sky before sunrise, we call it Morning star. Morning star is the name given to which of the following planets?

- A) Saturn
 - B) Earth
 - C) Jupiter
 - D) Venus
-

10) Which of the following liquids does NOT conduct electricity when a potential difference is applied?

- A) Distilled water
 - B) Lemon juice
 - C) Tap water
 - D) Vinegar
-

11) Who among the following was the first Governor of Odisha post independence of India in 1947?

- A) Kailash Nath Katju
 - B) Sir John Macpherson
 - C) Asif Ali
 - D) John Shore
-

12) Read the following statements and choose the CORRECT answer.

(i) In the year 1912, the coastal section was separated from Bengal Presidency and made into the Province of Bihar and Odisha.

(ii) It was in response to local agitation for a separate state for the Odia-speaking people.

- A) Statement (i) is True and (ii) is False
 - B) Statement (i) is False and (ii) is True
 - C) Both the statements (i) and (ii) are True
 - D) Both the statements (i) and (ii) are False
-

13) The Salt Satyagraha movement of Mahatma Gandhi started at which of the following places in Odisha?

- A) Samalaipadar
 - B) Daruthenga
 - C) Panimara
 - D) Inchudi
-

14) Which among the following is the important line of latitude passing through India?

- A) Equator
 - B) Tropic of Cancer
 - C) Tropic of Capricorn
 - D) Arctic Circle
-

15) Which of the following options is CORRECT with reference to the states of India bordering the country of Myanmar?

- A) Meghalaya, Manipur and Assam
 - B) Nagaland, Sikkim and Arunachal Pradesh
 - C) Arunachal Pradesh, Nagaland and Manipur
 - D) Arunachal Pradesh, West Bengal and Assam
-

16) Which of the following options form a physiographic boundary between the continents of Asia and Europe?

- A) Ural Mountains
 - B) Alps Mountains
 - C) Mediterranean Sea
 - D) Atlantic Ocean
-

17) The Malwa Plateau spreads across which of the following group of states in India?

- A) Gujarat, Rajasthan and Madhya Pradesh
- B) Jammu and Kashmir, Himachal Pradesh and Punjab
- C) Sikkim, Bihar and West Bengal
- D) Karnataka, Kerala and Tamil Nadu

18) According to Indian Constitution, who has power to make any law for the whole or any part of the territory of India implementing any treaty or agreement with any other country or countries ?

- A) Parliament
 - B) Niti Aayog
 - C) Finance Department
 - D) Supreme Court
-

19) As per the Constitution of India, how many members of Rajya Sabha are nominated by the President?

- A) 10
 - B) 12
 - C) 15
 - D) 20
-

20) In the Preamble of the Indian Constitution, a term describes a fundamental nature of the Republic of India. The term means that the people of India have the supreme right to make decisions on India's internal and external matters and that no external power can dictate terms to India. Identify the term.

- A) Secular
- B) Sovereign
- C) Democratic
- D) Socialist



Section 2 - Paper I Reasoning Ability

No. of Questions: 20

21) Nilesh borrows ₹ x at simple interest. The rate of interest was 4% per annum for first 6 years, 6% per annum for next two years and 2% per annum for next 4 years. If he paid ₹ 35,200 as interest, then the value of x is

- A) ₹ 60,000
 - B) ₹ 80,000
 - C) ₹ 90,000
 - D) ₹ 1,00,000
-

22) Five years ago, the average age of a group of 6 friends was 22 years. A new person joined the group 5 years ago. The present average age of the group is 28 years. What is the present age of the new member who joined the group?

- A) 15 years
 - B) 25 years
 - C) 29 years
 - D) 34 years
-

23) The speed of trains Q and W are in the ratio 7 : 8. What is the speed of the train Q, if train W runs 480 kms 5 hours?

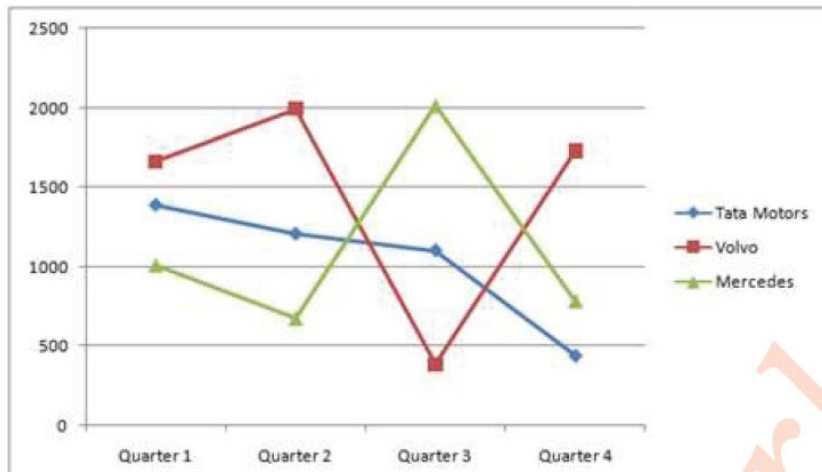
- A) 72 kmph
 - B) 84 kmph
 - C) 90 kmph
 - D) 96 kmph
-

24) A well is dug by certain number of boys in 40 days. If there were 15 boys more, it would have taken 20 days less to finish the task. How many boys are employed in the beginning?

- A) 12
- B) 15
- C) 20
- D) 24

25)

The line graph given below shows the sales of trucks of few automobile companies in four quarters of the year 2014. Based on this information, answer the questions that follow.



How many trucks did Tata Motors sell in the complete year approximately?

- A) 3600
- B) 4100
- C) 4500
- D) 4900

26) Study the following table carefully to answer the questions. The table gives the number of people visiting six different malls and the percentage distribution of men, women and children who are visiting. What is the respective ratio of number of men visiting mall N and P to the total number of women and children visiting mall L and N?

Names of Malls	Total num of people	Percentage Of		
		Men	Women	Children
L	6000	52%	40%	8%
N	5600	30%	68%	2%
P	4800	35%	50%	15%
R	4400	48%	38%	14%
T	7200	40%	50%	10%

- A) 20 : 97
- B) 24 : 79
- C) 35 : 48
- D) 42 : 85

27) In match 3, if these three scored 50% of the total runs scored by the team, then how many runs did the team score?

	Kohli		Rohit		Rahane	
	Runs scored	Balls faced	Runs scored	Balls faced	Runs scored	Balls faced
Match 1	32	50	17	12	112	98
Match 2	0	3	97	78	12	27
Match 3	43	41	28	28	90	91
Match 4	2	8	19	12	47	52

- A) 288
- B) 306
- C) 318
- D) 322

28) Study the following table carefully to answer the questions. The table gives the number of people visiting six different malls and the percentage distribution of men, women and children who are visiting. What is the ratio $x : y : z$, if x denotes the number of men visiting mall T and z denotes thrice the number of women visiting mall P

Names of Malls	Total num of people	Percentage Of		
		Men	Women	Children
L	6000	52%	40%	8%
N	5600	30%	68%	2%
P	4800	35%	50%	15%
R	4400	48%	38%	14%
T	7200	40%	50%	10%

- A) 4 : 7 : 35
- B) 4 : 14 : 35
- C) 5 : 24 : 30
- D) 5 : 12 : 60

29) Read the instructions and answer the question that follows

Joy, Tim, Lim, Kim, Sim, Ron, Wim and Nil are sitting around a round table, facing the center. Each one of them has a different profession. Sim, who is a doctor sits third to the left of the Tailor and third to the right of Nil, who is neither a Teacher nor a chef. Ron, who is a designer, sits between a doctor and a chef. Kim sits to the immediate right of Sim. Joy isn't a Banker. Wim is a chef. Tim, who is a tailor, sits second to the right of the engineer. Wim isn't the neighbor of Tim. Ron is fifth to the right of Lim, who is a lawyer. There is one banker and one teacher in the group.

Who sits fourth to the right of the Chef?

- A) Kim
- B) Lim
- C) Tim
- D) Joy

30) Read the instructions and answer the question that follows

Joy, Tim, Lim, Kim, Sim, Ron, Wim and Nil are sitting around a round table, facing the center. Each one of them has a different profession. Sim, who is a doctor sits third to the left of the Tailor and third to the right of Nil, who is neither a Teacher nor a chef. Ron, who is a designer, sits between a doctor and a chef. Kim sits to the immediate right of Sim. Joy isn't a Banker. Wim is a chef. Tim, who is a tailor, sits second to the right of the engineer. Wim isn't the neighbor of Tim. Ron is fifth to the right of Lim, who is a lawyer.

There is one banker and one teacher in the group. Who sits opposite to the Banker?

- A) Wim
 - B) Tim
 - C) Kim
 - D) Ron
-

31) Read the instructions and answer the question that follows

Joy, Tim, Lim, Kim, Sim, Ron, Wim and Nil are sitting around a round table, facing the center. Each one of them has a different profession. Sim, who is a doctor sits third to the left of the Tailor and third to the right of Nil, who is neither a Teacher nor a chef. Ron, who is a designer, sits between a doctor and a chef. Kim sits to the immediate right of Sim. Joy isn't a Banker. Wim is a chef. Tim, who is a tailor, sits second to the right of the engineer. Wim isn't the neighbor of Tim. Ron is fifth to the right of Lim, who is a lawyer. There is one banker and one teacher in the group.

Which pair of people given below doesn't sit together?

- A) Lim and Kim
 - B) Sim and Lim
 - C) Tim and Lim
 - D) Ron and Sim
-

32) Read the instructions and answer the question that follows

Joy, Tim, Lim, Kim, Sim, Ron, Wim and Nil are sitting around a round table, facing the center. Each one of them has a different profession. Sim, who is a doctor sits third to the left of the Tailor and third to the right of Nil, who is neither a Teacher nor a chef. Ron, who is a designer, sits between a doctor and a chef. Kim sits to the immediate right of Sim. Joy isn't a Banker. Wim is a chef. Tim, who is a tailor, sits second to the right of the engineer. Wim isn't the neighbor of Tim. Ron is fifth to the right of Lim, who is a lawyer. There is one banker and one teacher in the group.

Which of the following is a pair of an Engineer & a Teacher?

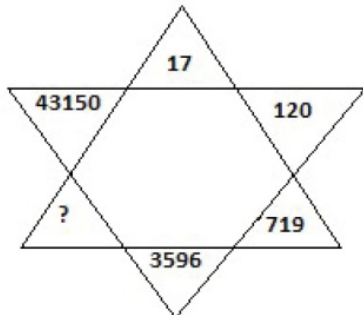
- A) Joy - Lim
 - B) Nil - Lim
 - C) Kim - Joy
 - D) Wim - Joy
-

33) Which is the odd one out among the four?

- A) Moscow
- B) Kabul
- C) Jordan

D) Ottawa

34) Which is the missing number?



- A) 14393
- B) 14383
- C) 14382
- D) 14392

35) Which set of letters when sequentially placed at the gaps in the given letter series shall complete it. M _ P _ R M O _ Q R _ O P _ _

- A) OQPMQP
- B) OPRMQQ
- C) OPQMRQ
- D) OQPMQR

36) Which is the missing number?

7	19	12	62
33	17	- 16	2
22	46	24	?
46	29	- 17	24

- A) 110

- B) 120
 - C) 130
 - D) 140
-

37) Given below are three statements followed by two conclusions. Choose the conclusion(s) that logically follows the given statements by selecting a relevant option.

Statements: All helmets are rubbers. No rubber is a cup. All cups are helicopters.

Conclusions:

- I. All rubbers are helmets.
- II. All helicopters are cups

- A) Neither I nor II follows
 - B) Both I and II follow
 - C) Only I follows
 - D) Only II follows
-

38) Gautam is 11 metre to the West of Farhad and 7 metre to the West of Ellie. Andy is 6 metre to the North of Bell, who is 4 metre to the West of Candy. Farhad is 5 metre to the North-East of Candy. Donald is 4 metre to the East of Andy. In which direction is Bell with respect to Donald?

- A) East
 - B) North-East
 - C) West
 - D) South-West
-

39) In a certain coding language, 'internet is essential' is coded as 'en fa li', 'intranet is private network' is coded as 'li vi ro mo', and 'essential network access' is coded as 'fa mo su'. What could be the sentence corresponding to the code 'vi ro su'?

- A) private internet access
 - B) private intranet access
 - C) essential network is
 - D) essential private is
-

40) Given below are three statements followed by two conclusions. Choose the conclusion(s) that logically follows the given statements by selecting a relevant option.

Statements: No bottle is a car. Some pipes are biscuits. No biscuit is a bottle.

Conclusions:

I.All cars are biscuits.

II.No car is a bottle.

- A) Neither I nor II follows
- B) Both I and II follow
- C) Only I follows
- D) Only II follows



Section 3 - Paper I Computer Literacy

No. of Questions: 10

41) Which of the statements are correct about system tray?

- i) System tray is located on the windows taskbar.
- ii) System tray features different types of notifications alerts
- iii) System tray is uncustomizable to display different notifications appear here other than internet connection.

- A) Only i
 - B) Only ii
 - C) Only i and ii
 - D) All i, ii and iii
-

42) Which part of CPU is responsible to perform decision related operations

- A) CMOS
 - B) ALU
 - C) SMPS
 - D) SIC
-

43) Quad core ,dual core and single core terms are related to

- A) Main memory
 - B) Hard disk
 - C) Processor
 - D) Flash drive
-

44) Which of the following options will NOT allow an user to share their photos to other users?

- A) Whatsapp
 - B) Google Drive
 - C) Dropbox
 - D) Notepad
-

45) The Process of loading Operating system to primary memory is known as

- A) Booting
- B) Defragmentation



- C) Restoring
 - D) Backup
-

46) Identify the keys that are belongs to modifier group keys in the keyboard

- i) F12
 - ii) Alt key
 - iii) Ctrl Key
 - iv) Numlock
-
- A) Only i and ii
 - B) Only ii and iii
 - C) Only iii and iv
 - D) Only i and iv
-

47) Which of the following actions shows that a person is not a good digital citizen?

- A) Installing antivirus in the system which he is using for internet
 - B) Creating fake account to secure himself
 - C) Scanning any file before downloading
 - D) Enhancing the knowledge doing online courses
-

48) In which transmission mode, the information flow is in both directions between the connected devices but only one connected device sends the data at a time?

- A) Simplex
 - B) Half Duplex
 - C) Full Duplex
 - D) Two way sending
-

49) In IPv6 the number of bits used to create a single unique network is

- A) 32
 - B) 128
 - C) 64
 - D) 256
-

50) Which one among the following is NOT a social networking site?

- A) Google



- B) Instagram
- C) Facebook
- D) Twitter



Section 4 - Paper I Pedagogy Educational Management Policies and Evaluation

No. of Questions: 40

51) To measure the sample of the behavior which of the following tools can be used?

- A) Assessment
- B) Testing
- C) Test
- D) Examination

52) Ideally evaluation is to make:

- A) Judgment
- B) Prediction
- C) Decision
- D) Opinion

53) The prevailing examination system has which of the following ills?

- a) subjectivity
- b) fair means
- c) favouritism
- d) neutrality
- e) teacher-centric

- A) b,d,
- B) a,c,e
- C) c,e
- D) b,c,d,

54) Which of the following types of evaluation is used to know entry behaviour?

- A) Placement assessment
- B) Summative assessment
- C) Formative assessment
- D) Diagnostic assessment

55) Which of the following statements indicate 'Constructivist perspective of assessment'?

- A) Constructivism believes in active involvement of teacher in the process of learning
 - B) Constructivism believes in active involvement of society in the process of learning
 - C) Constructivism believes in active involvement of learner in the process of learning
 - D) Constructivism believes in active involvement of school management in the process of learning
-

56) The format of testing most suitable to assess students' ability to judge the validity of the statement is

- A) True or false questions
 - B) Essay type questions
 - C) Complete the statement questions
 - D) Single sentence questions
-

57) In order to correlate test scores with teacher's estimates a teacher could

- A) Correlate with other test scores and classroom observations
 - B) Conduct tests under strict vigilance and mark stringently
 - C) Ask parents to validate the scores in tests
 - D) Allow for multiple choice questions to be answered
-

58) A teacher teaching decimals asks students to visit supermarkets and compare prices of household items. This is an example for

- A) Using alternative assessments to corroborate conclusions based on test scores
 - B) Involving parents and community in learning
 - C) Innovative adoption of a new topic to generate interest
 - D) Making assessment more interesting than usual
-

59) Commonly, five types of validity are used in preparing tools. Which of the following is NOT one of them?

- A) Face Validity
 - B) Content validity
 - C) Construct validity
 - D) Productive validity
-

60) According to National curriculum 2005, which of the following is an achievement that the system of education has achieved?

- A) 82 per cent of habitations have a primary school within a radius of one kilometre
- B) India is successfully following the same course structure and syllabus since the time of Independence
- C) Indian Education system has made it to the top 34 education system in the world.
- D) In India Sports, Photography, Acting, Music etc. are considered as essential part of education system.

61) Framework, 2000 was initiated specifically to address

- A) the problem of co-curricular activities load on children
- B) the problem of financial load on parents
- C) the problem of work load on teachers
- D) the problem of curriculum load on children

62) The integrated nature of growth and maturation is largely maintained by a constant interaction of

- A) school, teacher, religion and society
- B) genes, hormones, nutrients and other factors.
- C) environment, economic status, empathy, emotions
- D) morality, values, culture, norms

63) Which of the following is applicable to the psychological development of children between the ages 6 and 12?

- A) initiative versus guilt
- B) Identity versus confusion
- C) Industry versus inferiority
- D) Trust versus mistrust

64) Development strongly depends on language' - is one of the principles adopted in child development processes. This implies that

- A) Language is a medium for thought and hence is least important
- B) Language is a vehicle for ideas and experiences and offers leverage to only teachers
- C) Opportunities to express freely and exploring language is critical for schools
- D) Students should be never be exposed to grammar and vocabulary from early age

65) Which of the following is applicable for secondary and higher secondary students?

- A) Adolescents should be exposed to moderate levels of intellectual and physical difficulty
- B) It's important to compare adolescents to others so that growth can be accelerated
- C) Adolescents need presence of emotionally supportive adults other than parents
- D) Adolescents try to conform to the standard set by parents and teachers

66) Discussion held by a teacher with her students on ways of improving the student's work refers to which of the following theories?

- A) Expectancy and value theory of motivation

- B) Goals and goal-orientation theory of motivation
 - C) Attribution Theory of motivation
 - D) Cognitive theory of motivation
-

67) Development of foetus in mother's womb till delivery of fully formed fetus is referred to as prenatal stage. This is for

- A) 250 days
 - B) 260 days
 - C) 220 days
 - D) 280 days
-

68) If three different kinds of meat, cheese, and bread are given, a student can determine the many different sandwiches that could be cooked. This capacity relates to

- A) Thinking combinatorially in solving abstract, hypothetical problems
 - B) Operating logically with concrete material and concluding
 - C) Goal-oriented behaviour based on memory
 - D) thinking symbolically dominated by perception
-

69) Which of the following learning theories suggest change in behaviour due to the acquisition, reinforcement and application of associations between stimuli from the environment and observable responses of the individual.?

- A) Behaviourism
 - B) Experimentalism
 - C) Constructivism
 - D) Naturalism
-

70) Classroom management is a function that requires a teacher to perform all of the following activities EXCEPT

- A) communicating
 - B) coordinating
 - C) nurturing
 - D) staffing and recruiting
-

71) The SDP will be prepared by

- A) Principal
- B) Board of Trustees
- C) A sub-committee of the SMC

D) Schools Teachers Committee

72) As a school teacher Seema is entitled to:

- A) providing human resources
 - B) providing legal action and legislation
 - C) get only positive feedback from supervisors
 - D) adopting collaborative and cooperative teaching
-

73) Educational management as a field of study and practice was mainly started in

- A) United Kingdom
 - B) Germany
 - C) United States
 - D) Norway
-

74) National Curricular Framework, 2005 emphasised on participatory democracy as one of the cores of educational reform. An example that could reflect this in schools is

- A) A culture of deliberation, implementation and review of curriculum, budget and other priorities
 - B) Teaching politics and civic subjects more extensively and with strikingly relevant examples
 - C) Making the subject of 'Our Constitution' mandatory upto the higher secondary level
 - D) Ensuring adequate and equitable compensation for all stakeholders in a school
-

75) One of the criticisms levelled on RTE, 2009 was that it

- A) Held elaborate consultations to draft it
 - B) Included orphans in its implementation
 - C) Stands for the state's duty to its citizens
 - D) Was an infringement on the rights of private schools
-

76) Rashtriya Madhyamik Shiksha Abhiyan is a critical element to over all educational implementation because

- A) Tremendous increase in basic literacy across the country due to educational drives
 - B) Elementary schools do not score well and need the expertise of higher grade schools
 - C) Girls, especially from the weaker parts of society, need separate schools that are safe
 - D) There is a felt need for developing model schools across the country in each district
-

77) Many educational institutions charge their fees separately for the tuitions and also for the relevant stationery material. The latter sometimes amounts to a substantial amount. This poses a problem to

- A) The implementation of Sarva Shiksha Abhiyan
 - B) Appropriately account with state officials
 - C) Admissions for the poor under RTE,2009
 - D) Dissemination of state sponsored textbooks
-

78) Learning is development that comes from exercise and effort. Through learning, children acquire competence in using their hereditary resources' was said by

- A) Hurlock (1942)
 - B) Woodworth (1945)
 - C) Smith (1962)
 - D) Murphy (1968)
-

79) A new born bird's behaviour is attached to the first large moving object this is called as

- A) Reflex
 - B) Innate Behaviour
 - C) Imprinting
 - D) New Born Instinct
-

80) An almost reflex like response to a statement like '7 X 8 is _____' is an example of

- A) Contiguity
 - B) Schema
 - C) Concept
 - D) Creativity
-

81) Cognitive theories emphasise on limiting the pressure of reducing working memory. One of the methods to reduce information pressure is CHUNKING which is defined as

- A) Combining separate large items into meaningful units
 - B) Analysing large units into discrete constitute elements
 - C) Memorising huge units of information verbatim without understanding
 - D) The capacity to regurgitate huge volumes of information
-

82) Which of the following is true about class management of the elementary, middle and the high schools?

- A) They are to be the same
- B) Adopted as per situation and subject

- C) Depends on the school leader
 - D) Will be different as different principles govern learning
-

83) A teacher reinforces the rules that forbid students ridicule each other, particularly when they are in a discussion. Respect for one another is high priority. Such reinforcement is an example of

- A) Classical Conditioning
 - B) Constructivist Learning
 - C) Sensory Approach to Learning
 - D) Mentoring Children
-

84) Formal learning is a reality of the modern age. Which of the following statements best describes the need of formal schools for the modern society?

- A) Innate - learning is no longer sufficient to adapt to changes of the digital age
 - B) It provides discipline and regimentation required for the modern age
 - C) It provides appropriate social space for learning to happen
 - D) Natural ways of learning is no longer available to the modern human
-

85) In designing the curriculum it's important to keep in mind that the primary years of schooling should focus on real - life experiences that surround children. Learning about animals and their habitats, numbers and operations on them, about family structure etc. become the content of the material students learn during these years. This is because children in these stages exhibit

- A) An ability to think logically about concrete objects
 - B) An ability to think abstractly and generalise the results
 - C) Perception dominating children's thinking
 - D) Usage of the senses and motor capacity to make sense of the world
-

86) A young father helping his toddler learn to walk could hold hands for while, leave it to be by the child's side and hold the hand again when the road is bumpy. This support provided to learn is called as

- A) Practical learning
- B) Support system
- C) Practical instruction
- D) Scaffolding

87) In order to develop a concept thoroughly in a topic, it's critical for teachers to provide challenging situations and variables that the children's schemes no longer can explain and justify. This is appropriate as per the

- A) The drive for advanced thinking
 - B) The drive to have pleasure
 - C) The drive for equilibrium
 - D) The drive for adaptation
-

88) Behaviourist theories define learning as

- A) Knowledge that we possess
 - B) Set of skills that humans master
 - C) Change in behaviour due to experience
 - D) The ability to solve problems
-

89) Very young students while learning floating objects may conclude that 'anything heavy sinks; anything light floats'. This is an example for

- A) Thinking with reference to single variable only
 - B) Inability to activate relevant schema
 - C) Fitting new information into the existing schema
 - D) Lack of instructional support
-

90) Many studies suggest the modelling adopted from television influences behaviour. The modelled behaviour in turn influences the classroom learning. Which of these can be a healthy form of television viewing?

- A) Alternate between indiscriminate watching and total avoidance
- B) Avoid television and media altogether at home
- C) Let children decide what is right for them on television
- D) Watch prosocial and informative programs on television

Section 5 - Paper II History and Political Science

No. of Questions: 10

91) What was the North of the Ganges in Bihar called during the ancient time?

- A) Vajji
 - B) Vatsa
 - C) Surasena
 - D) Avanti
-

92) The Ghadar Party, initially named the Pacific Coast Hindustan Association was formed on 15 July 1913 in the United States under the leadership of

- A) Tej Bahadur Sapru
 - B) Lala Har Dayal
 - C) Rabindranath Tagore
 - D) Bhulabhai Desai
-

93) The grand contract signed for the Permanent Settlement is vested as

- A) Land ownership rights to zamindars
 - B) Customary rights to peasants
 - C) Land ownership rights to the state
 - D) Revenue collecting rights to zamindars
-

94) The leader of the Bardoli Satyagraha was:

- A) J.B. Kriplani
 - B) Sardar Vallabh Bhai Patel
 - C) Vinoba Bhave
 - D) Mahatma Gandhi
-

95) The largest number of inscriptions were inscribed by which of the Gupta emperors?

- A) Buddhagupta
 - B) Chandragupta II
 - C) Samudragupta
 - D) Kumargupta I
-

96) A system of ranking the government officials and determined their civil and military duties, along with their remunerations is known as

- A) Mansabdari system
 - B) Zamindari system
 - C) Mahalwari system
 - D) Ryotwari settlement
-

97) In accordance to the Indian Constitution, the Residuary powers of legislation lies in the hands of

- A) Parliament
 - B) Local Government
 - C) State Assembly
 - D) District Administration
-

98) The soul of Indian constitution is:

- A) Right to Constitutional Remedies
 - B) Fundamental Rights
 - C) The Preamble
 - D) Directive principles of state policy
-

99) Which of the following statements are TRUE with respect to Emergency provisions?

Statement I: When a national emergency is declared on the grounds of 'war', it is known as 'External Emergency'

Statement II: When a national emergency is declared on the grounds of 'armed rebellion', it is known as 'Internal Emergency'

- A) Statement I: TRUE Statement II: TRUE
 - B) Statement I: TRUE Statement II: FALSE
 - C) Statement I: FALSE Statement II: TRUE
 - D) Statement I: FALSE Statement II: FALSE
-

100) In which Article of the Constitution, procedure about creation of legislative council in states has been described in?

- A) Article 69
- B) Article 169
- C) Article 269
- D) Article 369

Section 6 - Paper II Geography and Economics

No. of Questions: 10

101) The monetary value of an asset decreases over time due to use, wear and tear or obsolescence. This decrease is measured as

- A) Dead-weight loss
- B) Depreciation
- C) Production cost
- D) Capital loss

102) By the year 2022, India aims to achieve the target usage of 175 GW. What is the target usage for bio-power?

- A) 10 GW
- B) 20 GW
- C) 5 GW
- D) 8 GW

103) In terms of Section 22 of the Act, which among the following has the sole right to issue banknotes in India?

- A) State Bank of India
- B) Ministry of Urban Development
- C) Reserve Bank of India
- D) Ministry of Finance

104) What may the Central Bank do in order to encourage investment in the economy?.

- A) Increase Bank Rate
- B) Sell Government securities in the open market
- C) Reduce Cash Reserve Ratio
- D) Increase Cash Reserve Ratio

105) Which of the following are a part of Himalayas located between the Satluj and Kali rivers?

- A) Mount Everest
- B) Assam Himalayas
- C) Kumaon Himalayas
- D) Kanchenjunga

106) The mining at jaduguda is associated with

- A) Mica mine
 - B) Uranium mine
 - C) Iron mine
 - D) Copper mine
-

107) The tilt in the axis of the Earth is called as?

- A) Stromboli
 - B) Volcano
 - C) Obliquity
 - D) Extinct
-

108) Maps showing natural features of the earth such as mountains, plateaus, plains, rivers, oceans etc. are called as

- A) Political maps
 - B) Physical maps
 - C) Thematic maps
 - D) Natural maps
-

109) Which type of resource is the Uranium found in Ladakh?

- A) Actual resources
 - B) Biotic resources
 - C) Potential resources
 - D) Unnatural resources
-

110) Which mountain range submerged the Andaman and Nikobar islands?

- A) Arakan Yoma
- B) Pegu Yoma
- C) Askai Chin
- D) Tien Shan

Section 7 - Paper II English

No. of Questions: 20

Read the following passage and answer the questions: (111-115)

I have a little shadow that goes in and out with me,
And what can be the use of him is more than I can see.
He is very, very like me from the heels up to the head;
And I see him jump before me, when I jump into my bed.

The funniest thing about him is the way he likes to grow—
Not at all like proper children, which is always very slow;
For he sometimes shoots up taller like an India-rubber ball,
And he sometimes gets so little that there's none of him at all.

He hasn't got a notion of how children ought to play,
And can only make a fool of me in every sort of way.
He stays so close beside me, he's a coward you can see;
I'd think shame to stick to nurse as that shadow sticks to me!

One morning, very early, before the sun was up,
I rose and found the shining dew on every buttercup;
But my lazy little shadow, like an errant sleepy-head,
Had stayed at home behind me and was fast asleep in bed.

111) Which of the following is the main purpose of the poem?

- A) Showcase the excitement of a child on seeing his shadow
 - B) Portray how a shadow grows big and small with every child
 - C) Describe the childishness of a child towards his shadow
 - D) Explain why human beings are fascinated with their shadows
-

112) 'He hasn't got a notion of how children ought to play'. In this line 'He' refers to which of the following?

- A) A fool

- B) The narrator
 - C) The shadow
 - D) A child
-

113) Which of the following statements is TRUE of the last stanza?

- A) The shadow is normally never up and about even when the sun rises
 - B) The narrator for a change left his shadow behind in bed
 - C) The climate was not conducive for a shadow to form on that day
 - D) The shadow is always lazy and erratic in its appearance on most days.
-

114) From the second stanza of the poem we understand that

- A) Unlike children shadows are always funny
 - B) Children unlike a shadow grow at a slower pace
 - C) Shadows resemble children and Indian rubber ball
 - D) Shadows can grow taller in the absence of a child
-

115) The narrator in the first stanza is suggesting that

- A) he knows how the shadow is useful to him
 - B) his shadow either follows him or is ahead of him
 - C) shadows can sleep just like children sleep
 - D) although his shadow follows him it is not like him
-

116) Identify the word which has similar pronunciation as the given word:PEACE

- A) Pies
 - B) piece
 - C) dice
 - D) knee
-

117) Identify the word which has similar pronunciation as the given word: CALLER

- A) Spoiler
 - B) Taller
 - C) Railer
 - D) Mailer
-

(Passage Questions from 118-122)

Mrs. Darling loved to have everything just so, and Mr. Darling had a passion for being exactly like his neighbours; so, of course, they had a nurse. As they were poor, owing to the amount of milk the children drank, this nurse was a prim Newfoundland dog, called Nana, who had belonged to no one in particular until the Darlings engaged her. She had always thought children important, however, and the Darlings had become acquainted with her in Kensington Gardens, where she spent most of her spare time peeping into perambulators, and was much hated by careless nursemaids, whom she followed to their homes and complained of to their mistresses. She proved to be quite a treasure of a nurse. How thorough she was at bath-time, and up at any moment of the night if one of her charges made the slightest cry. Of course her kennel was in the nursery. She had a genius for knowing when a cough is a thing to have no patience with and when it needs stocking around your throat.

118) Which breed was Nana?

- A) Labrador
- B) Newfoundland
- C) Darling
- D) Pariah

119) Nana belonged to no one in particular until ----- engaged her.

- A) the nurses
- B) the darlings
- C) the children
- D) the doctor

120) Where did Nana live?

- A) In the nursery
- B) Kensington gardens
- C) In the forest
- D) With the nurses

121) Who disliked Nana?

- A) The children
- B) The nurses
- C) The Darlings
- D) Other people

122) What kind of a nurse was Nana?

- A) Thorough

- B) Lazy
 - C) Under-rated
 - D) Punctual
-

123) Fill in the blanks with correct option:

_____ his children, all his nephews and nieces attended the function.

- A) At
 - B) Beside
 - C) Beyond
 - D) Besides
-

124) Chose the word that is spelt correctly and fill the blanks:
The _____ shows us the direction of the wind.

- A) vein
 - B) vane
 - C) vain
 - D) wane
-

125) Chose the word that is spelt correctly and fill the blanks:
Our _____ believes in strict discipline.

- A) Principle
 - B) Principal
 - C) Peincipal
 - D) Prencipal
-

126) Fill in the blanks with correct option:

He slept _____ eight and missed the bus.

- A) till
 - B) by
 - C) at
 - D) in
-

127) Chose the word that is spelt correctly and fill the blanks:

The song was sung by a youth _____ .

- A) choirr
 - B) choire
 - C) coir
 - D) choir
-

128) You will find a sentence using direct speech (words actually spoken) followed by four options. You are required to choose the one that is the correct form of the sentence in indirect/reported speech
Rita said, "Rise above the storm and you will find sunshine."

- A) Rita said that if we rise above the storm we will find sunshine.
 - B) Rita said that if we rose above the storm we will find sunshine.
 - C) Rita said that if we were to rise above the storm we would find sunshine.
 - D) Rita said that if we rise above the storm we could find sunshine.
-

129) You will find a sentence using direct speech (words actually spoken) followed by four options. You are required to choose the one that is the correct form of the sentence in indirect/reported speech
John said, "Do not worry about what you cannot control; focus your energy on what you can create."

- A) John said that we should not worry about what we could not control, we should focus our energy to what we could create
 - B) John said that we should not worry about what we cannot control, we should focus our energy on what we can create
 - C) John said that we should not worry about what we cannot control, we should focus our energy to what we can create
 - D) John said that we should not worry about what we could not control, we should focus our energy to what we can create
-

130) You will find a sentence using direct speech (words actually spoken) followed by four options. You are required to choose the one that is the correct form of the sentence in indirect/reported speech
Peter said, "The moon is the Earth's only natural satellite."

- A) Peter said that the moon was the Earth's only natural satellite.
- B) Peter said that the moon would be the Earth's only natural satellite.
- C) Peter said that the moon will be the Earth's only natural satellite.
- D) Peter said that the moon is the Earth's only natural satellite.

Section 8 - Paper II Odia

No. of Questions: 20

131) "ତା ସାଥରେ କାହାର ପଡେ ନାହିଁ" ରେଖାଙ୍କିତ ପଦଟି କେଉଁ କାରକ ଅଟେ?

- A) ସପ୍ତମୀ
- B) ଚତୁର୍ଥୀ
- C) ତୃତୀୟା
- D) ଦ୍ୱିତୀୟା

132) "ଶାନ୍ତି" - ଏହି ଶବ୍ଦରେ ଥିବା ଧାତୁଟି କିଏ?

- A) ଶାନ୍
- B) ଶମ୍
- C) ଶାନ୍ତ
- D) ଶନ୍

133) 'ଗରିବ ଲୋକଙ୍କୁ ସାହାଯ୍ୟ କର।' ରେଖାଙ୍କିତ ପଦ କି ପ୍ରକାର ଶବ୍ଦ ଅଟେ?

- A) ବିଶେଷ୍ୟ
- B) ବିଶେଷଣ
- C) ସର୍ବନାମ
- D) କ୍ରିୟା

134) 'ଶୋଇଲା ପୁଅର ଭାଗ ନାହିଁ।' ଏଠାରେ ଶୋଇଲା କି ପ୍ରକାର ପଦ?

- A) ବିଶେଷଣ
- B) ବିଶେଷ
- C) କ୍ରିୟା
- D) ଅବ୍ୟୟ

135) 'ପଞ୍ଚ ପାଣ୍ଡବଙ୍କ ମଧ୍ୟରେ ସହଦେବ ପଞ୍ଚମ ପାଣ୍ଡବ ଅଟନ୍ତି।' ରେଖାଙ୍କିତ ପଦଟି କି ପ୍ରକାର ବିଶେଷଣ ଅଟେ?

- A) ସଂଖ୍ୟା ବାଚକ

- B) ପରିମାଣ ବାଚକ
C) ଅବସ୍ଥା ବାଚକ
D) ପୂରଣ ବାଚକ
-

136) "ଲୋକ କର୍ମ ଅନୁରୂପ ଫଳ ପାଏ।"- ଉକ୍ତ ବାକ୍ୟଟି କେଉଁ ଶ୍ରେଣୀର ଦର୍ଶାଏ।

- A) ସରଳ ବାକ୍ୟ
B) କର୍ତ୍ତୃ ବାଚ୍ୟ ବାକ୍ୟ
C) ବିଷୟ ସୂଚକ ବାକ୍ୟ
D) ଜଟିଳ ବାକ୍ୟ
-

137) "ବିଲୋକା ଅତି ଚତୁର ଅଟେ।" ରେଖାଙ୍କିତ ଶବ୍ଦର ସଂକ୍ଷିପ୍ତ ବିଚ୍ଛେଦଟି ହେବ

- A) ବିଲ+ଉକା
B) ବଳି+ଐକା
C) ବିଃ+ଲୋକା
D) ବିଲ+ଓକା
-

138) "କଷ୍ଟେ ମଷ୍ଟେ ବଞ୍ଚି ରହିବ" ଅର୍ଥ ସୂଚାଉଥିବା ରୂପଟିକୁ ଚିହ୍ନଟ କର।

- A) ଠେକିଏ ପାଣି ପିଇବା
B) ଢୋକେ ପି' ଦଣ୍ଡେ ଜି
C) ଛାତିକୁ ପଥର କରିବା
D) ଡହଳ ବିକଳ ହେବା
-

139) "ଗ୍ରାମାନ୍ତର" ର ବ୍ୟାସ ବାକ୍ୟ ଉଲ୍ଲେଖ କର।

- A) ଗ୍ରାମରୁ ଅନ୍ତର
B) ଗ୍ରାମ ଠାରୁ ଅନ୍ତର
C) ଅନ୍ୟ ଗ୍ରାମ
D) ଗ୍ରାମ ସହିତ ଅନ୍ତର
-

140) "ଗାଡ଼ି ପେଟ୍ରୋଲରେ ଚାଲୁଛି।" ରେଖାଙ୍କିତ ପଦଟି କେଉଁ କାରକ ଅଟେ?

- A) କର୍ତ୍ତା କାରକ
- B) କର୍ମ କାରକ
- C) କରଣ କାରକ
- D) ଅପାଦାନ କାରକ

141) "ଆୟୁଷ୍ମାନ" - ଉକ୍ତ ଡକ୍ଟିଟ ଶବ୍ଦର ପ୍ରକୃତି ପ୍ରତ୍ୟୟ ନିର୍ଣ୍ଣୟ କର।

- A) ଆୟୁଃ+ମାନ
- B) ଆୟୁ+ମାନ
- C) ଆୟୁଃ+ଆନ୍
- D) ଆୟୁଃ+ମର୍

142) "ଯେ ସତ କହେ ସେ ନିର୍ଭୀକ ଅଟେ" ଉକ୍ତ ବାକ୍ୟଟି କି ପ୍ରକାର ବାକ୍ୟ ଅଟେ?

- A) ସରଳ
- B) ଯୌଗିକ
- C) ଜଟିଳ
- D) ଭାବ ବାଚକ ବାକ୍ୟ

143) "ବିଦ୍ୟାଧନ" - ଉକ୍ତ ସମସ୍ତପଦ କି ପ୍ରକାର କର୍ମ ଧାରଣ ସମାସ ଅଟେ?

- A) ଉପମାନ
- B) ଉପନିତ
- C) ମଧ୍ୟପଦଲୋପୀ
- D) ରୂପକ

(Questions No 144-148)

ପୁରାତନ ଭାରତର ସାମୁଦ୍ରିକ ବାଣିଜ୍ୟ ଦେଶର ଐତିହ୍ୟକୁ ସମୃଦ୍ଧ କରିଛି। ପୂର୍ବେ ଏ ଦେଶର ବଣିକମାନେ ବୋଇତରେ ସମୁଦ୍ର ଯାତ୍ରା କରି ବାଣିଜ୍ୟ କାରବାର କରୁଥିଲେ। ମୋଗଲ ଶାସନ କାଳରୁ ଅଦ୍ୟାବଧି ଭାରତ ଓ ଦକ୍ଷିଣ-ପୂର୍ବ ଏସୀୟ ଦେଶ ମାନଙ୍କର ପରସ୍ପର ସହିତ ସାଂସ୍କୃତିକ ସମ୍ପର୍କ ରହିଛି। ଏହି ସମୟରେ ବଣିକମାନେ କୃଷିଜାତ ଦ୍ରବ୍ୟ ଏବଂ ହସ୍ତଶିଳ୍ପ ପ୍ରସ୍ତୁତ ସାମଗ୍ରୀ ଗୁଡ଼ିକୁ ବିକ୍ରୟ କରି ଅନେକ ଧନରତ୍ନ ଆଣି ଆମ ଦେଶକୁ ଧନଶାଳୀ କରୁଥିଲେ।

144) "କାରବାର" - ଉକ୍ତ ଶବ୍ଦଟି କେଉଁ ବୈଦେଶିକ ଶବ୍ଦାବଳୀରୁ ଆସିଛି?

- A) ଆରବୀ

- B) ପାର୍ସୀ
 - C) ପର୍ତ୍ତୁଗୀଜ
 - D) ତୁର୍କୀ
-

145) "ଧନଶାଳା" - ଶବ୍ଦଟିର ପ୍ରକୃତି ପ୍ରତ୍ୟୟ ନିର୍ଦ୍ଦେଶ କର।

- A) ଶାଳା
 - B) ଶାଳୀନ୍
 - C) ଧନ୍
 - D) ଶଳ୍
-

146) 'ପ୍ରାଚୀନ ଭାରତର ଅଧିବାସୀମାନେ ବୋଇତରେ ସମୁଦ୍ର ଯାତ୍ରା କରୁଥିଲେ।' ରେଖାଙ୍କିତ ଶବ୍ଦଟିର ବିଭକ୍ତି ଚିହ୍ନଟ କର।

- A) ସପ୍ତମୀ
 - B) ପଞ୍ଚମୀ
 - C) ତୃତୀୟା
 - D) ଚତୁର୍ଥୀ
-

147) "ଧନରତ୍ନ"- ଉକ୍ତ ପଦଟି କେଉଁ ପ୍ରକାର ଶବ୍ଦ ଅଟେ?

- A) ସମାନାର୍ଥକ
 - B) ବିପରୀତ ବୋଧକ
 - C) ସାର୍ଥକ ଓ ନିରାର୍ଥକ
 - D) କ୍ରିୟା ଜାତୀୟ
-

148) ନିମ୍ନଲିଖିତ ମଧ୍ୟରୁ କେଉଁଟି ସମୁଦ୍ରର ଅନ୍ୟ ନାମ ନୁହେଁ?

- A) ପାରାବାର
 - B) ପୟୋଧି
 - C) ସରସୀ
 - D) ଅର୍ଶ୍ୱବ
-

149) ନିମ୍ନଲିଖିତ କାବ୍ୟ ମଧ୍ୟରୁ କେଉଁଟି ଭକ୍ତଚରଣ ଦାସଙ୍କ ଦ୍ୱାରା ରଚିତ?

- A) ଲାବଣ୍ୟବତୀ
 - B) ବୈଦେହୀଶ ବିଳାସ
 - C) ବିଦଗ୍ଧ ଚିନ୍ତାମଣି
 - D) ମଥୁରା ମଙ୍ଗଳ
-

150) ନିମ୍ନଲିଖିତ କବିତା ମଧ୍ୟରୁ କେଉଁଟି ନନ୍ଦକିଶୋର ବଳଙ୍କ କୃତି ଅଟେ?

- A) ଚିଲିକା
- B) କିଟକ ବଧ
- C) ବସନ୍ତ ଗାଥା
- D) କନକଲତା



Question Paper No:

72690_18

Answer Key

1	B	31	B	61	D	91	A	121	B
2	B	32	C	62	B	92	B	122	A
3	C	33	C	63	C	93	D	123	D
4	C	34	B	64	C	94	B	124	B
5	A	35	D	65	C	95	D	125	B
6	D	36	D	66	A	96	A	126	A
7	C	37	A	67	D	97	A	127	D
8	A	38	D	68	A	98	C	128	C
9	D	39	B	69	A	99	A	129	B
10	A	40	D	70	D	100	B	130	D
11	A	41	C	71	C	101	B	131	C
12	C	42	B	72	D	102	A	132	B
13	D	43	C	73	C	103	C	133	B
14	B	44	D	74	A	104	C	134	A
15	C	45	A	75	D	105	C	135	D
16	A	46	B	76	A	106	B	136	A
17	A	47	B	77	C	107	C	137	D
18	A	48	B	78	A	108	B	138	B
19	B	49	B	79	C	109	C	139	C
20	B	50	A	80	A	110	A	140	C
21	B	51	C	81	A	111	A	141	D
22	C	52	B	82	D	112	C	142	C
23	B	53	B	83	A	113	C	143	D
24	B	54	A	84	A	114	B	144	B
25	B	55	C	85	A	115	B	145	B
26	D	56	A	86	D	116	B	146	C
27	D	57	A	87	C	117	B	147	A
28	C	58	A	88	C	118	B	148	C
29	B	59	D	89	A	119	B	149	D
30	C	60	A	90	D	120	B	150	D