

**Odisha Police SI**

**E-BOOK- PDF**

**7,500 MCQ**

**EXPLANATION**

**8596976190**

**All Important Questions & Answers**

ODISHA POLICE SI 2022 E-Books (Chapter Wise) 7,500+ MCQ

more

₹250.00 ₹99.00

Odisha Police SI 2021 E-Books (PDF) Contains The New Syllabus & Question Answers

more

ADD TO CART BUY NOW

[Click Here](#)

**ଓଡିଶା ଜିଲ୍ଲା କନେଷ୍ଟବଲ**

**E-BOOK- PDF**

**8,000 MCQ**

**EXPLANATION**

**ସମସ୍ତ ପୂର୍ବ ବର୍ଷ ପ୍ରଶ୍ନ**

**100% ସଫଳତା**

ODISHA DISTRICT (CIVIL) CONSTABLE (1905 Post) 2022 !! 8,000+ MCQ !! (Chapter Wise Question Paper) !! All Previous Year Questions Paper

more

₹199.00 ₹99.00

Validity- 1 Year Demo-

more

ADD TO CART BUY NOW

[Click Here](#)

**ଓଡିଶା ବାଟାଲିୟନ ପରୀକ୍ଷା**

**E-BOOK- PDF**

**7,000 MCQ**

**EXPLANATION**

**100% ସଫଳତା**

**All Chapter Wise Important Question & Answer**

ODISHA BATTALION 2022 !! E-BOOK PDF - 7,000 MCQ !! CHAPTER WISE QUESTIONS & ANSWER

more

₹199.00 ₹99.00

Validity- 1 Year Demo-

more

ADD TO CART BUY NOW

[Click Here](#)

Tech of World

HOME VIDEOS PLAYLISTS COMMUNITY

**ଆମ Channel ରେ ଦେଖନ୍ତୁ Video**

**ASO ଓଡ଼ିଶା ପୋଷ୍ଟାଲ CT ଓ B.Ed**

**ଓଡ଼ିଶା ପୋଲିସ SSC GD Railway**

**Tech of World**

SUBSCRIBE

315K subscribers • 928 videos

Hello ସାଙ୍ଗ ମାନେ !! ଆମେ ଏହି Channel ରେ ସବୁ ପ୍ରକାରର Educational Video Free ରେ ଯୋଗାଇଦେବେ ଯେଉଁ ଚେତନାକରି ଲାଭ କରି ଏହି "Tech Of World" Channel କୁ ...

**+2 କିମ୍ବା +3 ପଢ଼ିବା ପରେ କେମିତି ଜଣେ ଶିକ୍ଷକ ହେଇପାରିବେ ?**

**CT ଓ B.Ed ପରେ କଣ ?**

How To Become A Teacher After +2 Or +3 In Odisha ? How To Get A Teacher Job In Odisha ?

Tech of World · 176K views · 3 years ago

Home Shorts Subscriptions Library

[Click Here](#)

Tech Of World- (Odisha Exam CT)

Uninstall Open

Your Review

sujit kumar naik ★★★★★ 6/29/21

Edit your review

Developer contact

About this app

Tech Of World (Odisha Exam) Provides Mock Test & E-Books For Different Exams

Education

3.8 ★ 422 reviews 422 reviews Rated for 3+ 50K+ Downlo.

TECH OF WORLD Mock Test

[Click Here](#)

Tech Of World 4.1K subscribers

ASO English 2022 By... 8.7 MB PDF

ASO General Knowledge 2022... 4.9 MB PDF

ASO Math 2022 By Techofworld.In.pdf 4.6 MB PDF

ASO Odia Language 2022 By... 2.9 MB PDF

ASO Reasoning 2022 By... 4.6 MB PDF

3 comments

Broadcast

[Click Here](#)

8/6/22, 7:39 PM

https://reports.merittracpari

.m/rpsdob/rps/resreport.php?canid=397738667&amp;ac=A034582\_E234873

Candidate Name  
Set Code  
Mobile Number

Assessment Name  
Candidate Id

\* Correct Answer is in Bold and slightly bigger  
\* Candidate selected option is Underlined

### General English

Q2894968 Select the synonym for the word given below.  
Tendentiousness

Score Obtained : -0.25 / 1.0

- A) Objectivity  
B) Neutrality  
C) Propensity  
D) Liberalism

Q2895335 Fill the blanks with the correct option  
A geological survey revealed the presence of oil \_\_\_\_\_ the ground.

Score Obtained : 1.0 / 1.0

- A) over  
B) above  
C) beneath  
D) among

Q2894959 Identify the complex sentence among the following:

Score Obtained : 0.0 / 1.0

- A) Come back this afternoon to get the report.  
B) Dr.Sinha, who is a reputed surgeon, is going to perform the operation.  
C) He lives in the suburbs and spends a lot of time commuting.  
D) The builders were unable to deliver the apartment on time.

Q2894969 Select the synonym for the word given below.  
Pedagogy

Score Obtained : 1.0 / 1.0

- A) Examining  
B) Teaching  
C) Questioning  
D) Interviewing

Q2894942 Fill in the blanks with one of the words given below.  
Your score in Physics is really low. \_\_\_\_\_, your Chemistry score is excellent.

Score Obtained : 1.0 / 1.0

- A) However  
B) Furthermore  
C) Also  
D) Moreover

Q2894980 Which of the following is the indirect form of the following sentence:  
He said, "I play tennis every day."

Score Obtained : -0.25 / 1.0

- A) He said he had been playing tennis every day.  
B) He said that he was playing tennis every day.  
C) He said he is playing tennis every day.  
D) He said that he plays tennis every day.

https://reports.merittracpariksha.com/rpsdob/rps/resreport.php?canid=397738667&amp;ac=A034582\_E234873

1/16

Q2895587 Where the Mind is Without Fear

Rabindranath Tagore's *Gitanjali* was composed and published about 115 years ago. One of the poems, Where the Mind is Without Fear, has inspired generations of Indians and Bangladeshis who consider it a hymn to inspire all mankind. Almost half a century before India attained Independence, Tagore here yearns for the 'heaven of freedom'. The verse continues to exhort people particularly in conflict zones across the world to seek fearless truth, progressive thoughts and actions, and to stand up and see the world as one, undivided by borders or 'narrow domestic walls'. President Barack Obama used the opening lines of this verse in his 2010 speech to the joint session of Parliament in New Delhi.

For Tagore, freedom was not merely political. He believed in the freedom of mind, speech, thought, belief and practice. In this pre-independence poem, the poet prays to God to awake his countrymen to the realization that they need to live in a free and united country. He desires peace, prosperity and self-reliance. He wants his countrymen to enjoy being citizens of a country where they can live with honour. He dreams of a nation where people would not be superstitious; rather they should be enlightened and knowledgeable. Reason should prevail over blind faith. Superstitious beliefs and dead old habits shall not impede the transparent flow of thought, and narrow parochial interests shall no longer separate nations or communities of people.

Q2895590 Which word in the passage is the opposite of 'superstitious'?

Score Obtained : -0.25 / 1.0

- A) inspired
- B) enlightened**
- C) transparent
- D) undivided

Q2895591 The poet dreams of a nation where the people would not be \_\_\_\_\_

Score Obtained : 1.0 / 1.0

- A) Enlightened and knowledgeable
- B) Honest and hardworking
- C) Self-reliant
- D) A prey to superstitious beliefs**

Q2895589 Which phrase in the passage best describes the words 'narrow domestic walls'?

Score Obtained : -0.25 / 1.0

- A) Flow of thought
- B) Blind faith
- C) Parochial interests**
- D) Communities of people

Q2895588 The poem 'Where the Mind is Without Fear' continues to inspire us because it

Score Obtained : -0.25 / 1.0

- A) exhorts people to seek fearless truth**
- B) advocates aggressive nationalism
- C) encourages blind faith
- D) promotes parochialism

Q2895592 The poem can best be described as \_\_\_\_\_

Score Obtained : -0.25 / 1.0

- A) A political treatise
- B) A lesson in morality
- C) A prayer to God**
- D) A religious song

Q2894960 Change the given sentence into a complex sentence:  
Follow this diet regularly and you will soon lose weight.

Score Obtained : 0.0 / 1.0

- A) If you follow this diet regularly, you will soon lose weight.**
- B) Following this diet regularly helps to lose weight.
- C) Follow this diet regularly or you will not lose weight.
- D) Regular dieting will lead to weight loss.

Q2894938 Choose the correct option to join the two sentences:  
Take your cardigan with you \_\_\_\_\_ you are not cold later in the evening.

Score Obtained : -0.25 / 1.0



- A) as if  
 B) not only  
**C) so that**  
 D) as soon as

Q2894661 Fill in the blanks with the correct form of verb:  
 His dog generally \_\_\_\_\_ everywhere with him.

Score Obtained :

- A) goes**  
 B) go  
 C) shall go  
 D) have gone

Q2894659 Fill in the blank/s with the correct form of the verb given in brackets:

If you \_\_\_\_\_ (sow) good seeds, you \_\_\_\_\_ (reap) a good harvest.

Score Obtained :

- A) sowed, will reap**  
 B) sow, might have reaped  
**C) had sown, would have reaped**  
 D) will sow, would reap

Q2895041 Fill in the blank with a suitable pronoun:

I really don't appreciate \_\_\_\_\_ walking late into the class like this.

Score Obtained :

- A) he  
 B) herself  
**C) your**  
 D) she

Q2894782 Change the voice of the following sentence: Manish did not give up play even though he was running a fever.

Score Obtained :

- A) Play was not being given up by Manish even though he was running a fever.**  
**B) Even though he was running a fever, play was not given up by Manish.**  
 C) Manish did not give up play even as he was running a fever.  
 D) Play was not giving up Manish even though he was running a fever.

Q2894784 Change the voice of the following sentence: A lecturer should ensure that students speak softly.

Score Obtained :

- A) That students should speak softly is an ensurance that must be given by a lecturer.  
**B) Speaking softly by the students could be ensured by a lecturer.**  
 C) A lecturer's ensurance that students speak softly must be given.  
**D) Should be ensured that the students speak softly by the lecturer.**

Q2894929 Which of the segment(s) has/have errors: [a] Reading the same text [b] get easier and easier, [c] whereas when writing the text from one's memory, one understand lesser-known facts such as "desirable difficulty", [d] that actually promotes learning.

Score Obtained :

- A) a, b & c  
**B) a, b & d**  
**C) b & c**  
 D) c & d

Q2895329 Select the right preposition to fill in the blank:

His duties were kind of ill-suited \_\_\_\_\_ his ardent and daring character.

Score Obtained :

8/6/22, 7:39 PM

[https://reports.merittracpariksha.com/rpsdob/rps/resreport.php?canid=397738667&ac=A034582\\_E234873](https://reports.merittracpariksha.com/rpsdob/rps/resreport.php?canid=397738667&ac=A034582_E234873)

- A) by  
B) on  
C) with  
D) to

## Odia Language

Q2901241 ଅନୁଛେଦକୁ ଧ୍ୟାନ ଦେଇ ପଢ଼ନ୍ତୁ ଓ ନିମ୍ନଲିଖିତ ପ୍ରଶ୍ନ ଗୁଡ଼ିକର ସଠିକ୍ ଉତ୍ତର ବାଛନ୍ତୁ।

କୋଇଲିବୈକୁଣ୍ଠରେ ମହାବିଶ୍ୱାମ ନେଲାପରେ ଅଶୌଚସମୟ ଆରମ୍ଭ ହୋଇଯାଏ । ତେଣୁ ଏହି ସମୟମାନଙ୍କରେ ପ୍ରାୟ ତେରଦିନ ଧରି ନୂତନ ବିଗ୍ରହମାନଙ୍କର କୌଣସି ନୀତି କରାଯାଏ ନାହିଁ । ସେମାନେ କେବଳ ଅଣସର ଘରେ ରହୁଥାଆନ୍ତି ଏବଂ ନୂତନ ଦ୍ୱାରରେ ଯେଉଁ ମୂର୍ତ୍ତି ନିର୍ମାଣ ହୋଇଥାଆନ୍ତି, ତାହା ଠାକୁରଙ୍କ ଶରୀରର ଅସ୍ଥି ସଦୃଶ ମା । ଆମେ ଯେଉଁ ଠାକୁରଙ୍କ ଦେଖୁଥାଉ, ସେ ଠାକୁର ସେତେବେଳେ ପ୍ରସ୍ତୁତ ହୋଇନିଥାନ୍ତି । ଏହି ଅଶୌଚସମୟ ଅତିକ୍ରମ ହେବାପରେ ଯାଇ ଦାନବିଗ୍ରହଙ୍କର ପୂର୍ଣ୍ଣ ରୂପାୟନ ହୋଇଥାଏ । ତେବେ ଘଟ ପରବର୍ତ୍ତନ ପରେ କୃଷ୍ଣ ଚତୁର୍ଦ୍ଦଶୀ ଠାରୁ ଶୁକ୍ଳ ନବମୀ ତଥ୍ ପର୍ଯ୍ୟନ୍ତ ନୂତନ ବିଗ୍ରହଙ୍କର ଶ୍ରୀଅଙ୍ଗରେ ଶ୍ୱେତ ଅଙ୍ଗରାଗ ବୋଳାଯାଇଥାଏ । ଏହାକୁ ଖଡ଼ିଲାଗି କୁହାଯାଏ ।

ଏହିଠାରେ ଜାଣିରଖିବା ଆବଶ୍ୟକ, ନୂତନ ବିଗ୍ରହଙ୍କ ବ୍ରହ୍ମକୋଠରୀରେ ବ୍ରହ୍ମପୋତଳ ସଂସ୍ଥାପନା ପରେ ତା' ଭିତରର ଗହ୍ୱରକୁ ଚନ୍ଦନ, କସ୍ତୁରୀ, କର୍ପୂରର ଏକ ବ୍ରହ୍ମଲେପରେ ପୂର୍ଣ୍ଣ କରାଯାଏ । ତା' ଉପରେ ବ୍ରହ୍ମକୋଠରୀର ହାର ନ୍ୟାସଦ୍ୱାରା ଦେଇ କୋଠରୀକୁ ପୂରାପୂରି ବନ୍ଦ କରାଯାଏ ।

ସଂସ୍କୃତ ଶାସ୍ତ୍ର ଅନୁଯାୟୀ ମାଦଳାପାଞ୍ଜିରେ ଉଲ୍ଲେଖ ଅଛି ଯେ, ମାନବର ଶରୀର ସାତୋଟି ଧାତୁରେ ନିର୍ମିତ । ତେଣୁ ଶ୍ରୀଶ୍ରୀଠାକୁରଙ୍କର ବିଗ୍ରହକୁ ପୂର୍ଣ୍ଣ ରୂପାୟନ ଦିଆଯାଇବେଳେ ସପ୍ତାବରଣ ପଦ୍ଧତିରେ ସାତୋଟି ଆବରଣ ଦିଆଯାଇଥାଏ ।

Q2901244 ନୂତନ ବିଗ୍ରହଙ୍କର ବ୍ରହ୍ମପୋତଳ ସଂସ୍ଥାପନା କେଉଁଠାରେ ହୋଇଥାଏ?

- A) ରତ୍ନସିଂହାସନରେ  
B) କୋଇଲିବୈକୁଣ୍ଠରେ  
C) ସ୍ନାନବେଦୀରେ  
D) ବ୍ରହ୍ମକୋଠରୀରେ

Score Obtained : 1.0 / 1.0

Q2901245 'ଉଲ୍ଲେଖ' ର ସନ୍ଧିବିଚ୍ଛେଦ କଲେ ହେବ -

- A) ଉତ୍ + ଲେଖ  
B) ଉଃ + ଲେଖ  
C) ଉଃ + ଲେଖ  
D) ଉଦ୍ + ଲେଖ

Score Obtained : 1.0 / 1.0

Q2901243 ନୂତନ ବିଗ୍ରହମାନଙ୍କର କେତେଦିନ ଧରି କୌଣସି ନୀତି କରାଯାଏନାହିଁ?

- A) ୧୩ ଦିନ  
B) ୧୨ ଦିନ  
C) ୧୫ ଦିନ  
D) ୧୪ ଦିନ

Score Obtained : 1.0 / 1.0

Q2901242 କୋଇଲିବୈକୁଣ୍ଠରେ ମହାବିଶ୍ୱାମ ନେଲାପରେ ଠାକୁର କେଉଁଠାରେ ରହନ୍ତି?

- A) ମାଉସୀମା' ମନ୍ଦିରରେ  
B) ଅଲାରନାଥ ମନ୍ଦିରରେ  
C) ଅଣସର ଘରେ  
D) ରତ୍ନସିଂହାସନରେ

Score Obtained : 1.0 / 1.0

Q2901246 'ମାନବ ଶରୀର ସାତୋଟି ଧାତୁରେ ନିର୍ମିତ ।' - ରେଖାଙ୍କିତ ପଦଟି କେଉଁ ବିଭକ୍ତି?

- A) ତତ୍ତ୍ୱର୍ଥୀ  
B) ତୃତୀୟା  
C) ଦ୍ୱିତୀୟା  
D) ନାମନୀ

Score Obtained : -0.25 / 1.0

[https://reports.merittracpariksha.com/rpsdob/rps/resreport.php?canid=397738667&ac=A034582\\_E234873](https://reports.merittracpariksha.com/rpsdob/rps/resreport.php?canid=397738667&ac=A034582_E234873)

4/1

Q2897605 'ପୂର୍ବେ ଯାତ ପରେ ଆୟାତ' ଉକ୍ତ ବିଗ୍ରହବାକ୍ୟର ସମାସ ନିଷ୍କନ୍ ପଦ ନିର୍ଣ୍ଣୟ କର ।

- A)** ଯାତାୟାତ  
 B) ଜାତାୟାତ  
 C) ଜାତାୟତ  
 D) ଯାତୟାତ

Q2897614 'ଭଙ୍ଗୁର' ଶବ୍ଦର ପ୍ରକୃତି ପ୍ରତ୍ୟୟ ଦର୍ଶାଅ ।

- A) ଭନଂ+ଉର  
**B)** ଭନଞ୍ଜ+ଉର  
 C) ଭନଂ+ଉର  
 D) ଭରଂ+ଉର

Q2897644 ନିମ୍ନୋକ୍ତ ମଧ୍ୟରୁ ଶୁଦ୍ଧ ବନାନ ଥିବା ବାକ୍ୟଟି ଚୟନ କର ।

- A) ସାସ୍ତ୍ରୀୟ ସଙ୍ଗୀତର ରାଗୀଣୀ ଖୁବ୍ ମଧୁର ।  
**B)** ଶାସ୍ତ୍ରୀୟ ସଙ୍ଗୀତର ରାଗୀଣୀ ଖୁବ୍ ମଧୁର ।  
 C) ଶାସ୍ତ୍ରୀୟ ସଂଗୀତର ରାଗୀଣୀ ଖୁବ୍ ମଧୁର ।  
 D) ଶାସ୍ତ୍ରୀୟ ସଂଗୀତର ରାଗେଣୀ ଖୁବ୍ ମଧୁର ।

Q2897668 'ବାପ ରାଣ ଭିକ୍ଷି ଗିଲ୍' ରୁଡ଼ିଚିର ଅର୍ଥ କ'ଣ?

- A)** ବାଧ୍ୟ କରିବା  
 B) ବିପଦକୁ ଠେଲିଦେବା  
 C) ଉପଦେଶ ଦେବା  
 D) ବାପାଙ୍କ ରାଣ ପକେଇବା

Q2898806 ବେଉଁଟି କ୍ରିୟାକ ବିଶେଷଣ ?

- A)** ଉରଜିଲା ମେଘ  
 B) ଭାରି ଖରାପ  
 C) ପ୍ରତୀକତମ ପୁସ୍ତକ  
 D) ସେହି ପର୍ବତ

Q2897666 'ଆପଣା ସୁନା ଭେଣ୍ଟି' ରୁଡ଼ିଚିର ଅର୍ଥ କ'ଣ?

- A) ନିଜ ଲୋକକୁ ହଇରାଣ କରିବା  
 B) ଅନ୍ୟକୁ ବିଶ୍ୱାସ ନ କରିବା  
 C) ନିଜ ଲୋକ କଥା ନ ଶୁଣିବା  
**D)** ନିଜ ଲୋକ ଅଯୋଗ

Q2897609 "ଆୟୁଷ୍ମାନ" - ଉକ୍ତ ଚିହ୍ନଟ ଶବ୍ଦର ପ୍ରକୃତି ପ୍ରତ୍ୟୟ ନିର୍ଣ୍ଣୟ କର ।

- A) ଆୟୁ+ସାନ  
 B) ଆୟୁଃ+ମାନ  
**C)** ଆୟୁଃ+ମନ୍  
 D) ଆୟୁଃ+ଆନ୍

Q2898528 'ଦୟା' ଶବ୍ଦ ନିମ୍ନଲିଖିତ କେଉଁ ପଦରେ ଅନ୍ତର୍ଭୁକ୍ତ ?

- A) ସଂସାରାଚକ  
B) ବସ୍ତୁବାଚକ  
**C) ସୁଶବ୍ଦାଚକ ବିଶେଷ୍ୟ**  
D) ଜାତିବାଚକ

Q2897618 'ପ୍ରଭୁତ୍ୱ' ଚିହ୍ନିତ ଶବ୍ଦରେ 'ତୁ' ପ୍ରତ୍ୟୟ କେଉଁ ଅର୍ଥରେ ବ୍ୟବହୃତ ହୋଇଛି?

- A) ଯୋଗ  
B) ଗୁଣି  
**C) ଭାବ**  
D) ଭକ୍ତ

Q2897622 'ମୌଳିକ' ଶବ୍ଦରେ କେଉଁ ଅର୍ଥରେ 'ଲକ' ପ୍ରତ୍ୟୟ ବ୍ୟବହୃତ ହୋଇଛି ଦର୍ଶାଅ।

- A) ଜାତ  
B) କୁଶଳ  
C) ଜ୍ଞାନ  
**D) ସମ୍ପ୍ରାପ୍ତ**

Q2897587 'ସୂଚ୍ୟାନ୍ତ' କୁ ସହି ବିଚ୍ଛେଦ କଲେ ହେବ -

- A) ସୂଚି + ଅନ୍ତ  
**B) ସୂଚୀ + ଅନ୍ତ**  
C) ସୂଚି + ଅନ୍ତ  
D) ସୂଚୀ + ଅନ୍ତ

Q2898411 କେଉଁଟି 'କଳକିଧି'ର ସମାର୍ଥ ବାଚକ ଶବ୍ଦ ?

- A) ପୋଷାକ  
B) ନବୀ  
C) ମେଘ  
**D) ସମୁଦ୍ର**

Q2898416 ନିମ୍ନୋକ୍ତ ଶବ୍ଦ ମଧ୍ୟରୁ କେଉଁଟି 'ଲଜ୍ଜା'ର ପ୍ରତିଶବ୍ଦ ନୁହେଁ ?

- A) ହୃଦୟ**  
B) ଆକାଂକ୍ଷା  
C) ଅଭିଳାଷ  
D) ମନୋରଥ

Q2897636 ନିମ୍ନଲିଖିତ କେଉଁ ଶବ୍ଦଟିର ବନାନ ଶୁଦ୍ଧ ଅଟେ?

- A) ଅକାଳକୁସ୍ମାଣ୍ଡ  
B) ଅକାଳକୁସ୍ମାଣ୍ଡ  
**C) ଅକାଳକୁସ୍ମାଣ୍ଡ**  
D) ଅକାଳକୁସ୍ମାଣ୍ଡ

Q2897598 'ଆବାଜରୁଦ୍ଧ ମର୍ମ୍ୟନ ମମୟେ ମଲାରେ ମୋନ ଦେଲଅଲୋ।' ରେଖାଙ୍କିତ ମତ କେଉଁ ମମାମକ ମନାଏ?

Score Obtained : 1.0 / 1.0

- A)** ଅବ୍ୟୟୀଭାବ  
 B) କର୍ମି ଧାରଣ  
 C) ଉପପଦ୍ ତତ୍ ପୁରୁଷ  
 D) ବହୁକ୍ରୀହି

**Aptitude**

Q2895710 Average price of 5 mangoes is 3 and the average price of 4 apples is 4. What is the average price of 9 fruits?

Score Obtained : 1.0 / 1.0

- A) 4.12  
 B) 3.82  
 C) 3.00  
**D) 3.44**

Q2895742 Running at  $\frac{4}{7}$ th of his usual speed a person is late by 9 hours. His usual time to cover the distance is

Score Obtained : 1.0 / 1.0

- A) 10 hours  
**B) 12 hours**  
 C) 6 hours  
 D) 9 hours

Q2895606 'A' scores 67% and gets 192 marks more than the minimum required marks while 'B' scores 27% marks and fails by 48 marks. What is the pass marks for the examination?

Score Obtained : 0.0 / 1.0

- A) 210**  
 B) 320  
 C) 440  
 D) 550

Q2895753 The ratio of money with A and B is 13:16 and that with B and C is 24:27. If C has Rs. 10800 then find the amount with A?

Score Obtained : 1.0 / 1.0

- A) Rs. 4400  
 B) Rs. 8900  
 C) Rs. 2987  
**D) Rs. 7800**

Q2895765 Ratio of the ages of father and son is 5:2. After 8 years the ratio of their ages will be 2:1. What was father's age 10 years ago?

Score Obtained : 1.0 / 1.0

- A) 32 years  
 B) 34 years  
 C) 28 years  
**D) 30 years**

Q2895609 The salary of an employee first increased by 40% and then further increased by 20%. What was the total percentage increase in his salary?

Score Obtained : 1.0 / 1.0

- A) 40  
**B) 68**  
 C) 64  
 D) 60

Q2895728 Shivam can type 5 lines in a minute. He types for 6 hours a day. He does NOT type on Sundays. How many lines can he type in month of October if there are 5 Sundays in the month of October?

Score Obtained : 1.0 / 1.0

- A) 24,400



- B)** 46,800  
C) 42,400  
D) 36,600

Q2895767 If  $5A = 4B = 6C$ , then A:B:C is

Score Obtained : -0.25 / 1.0

- A)** 5:4:6  
B) 9:7:3  
C) 4:6:3  
**D)** 12:15:10

Q2895729 A water tank has a capacity of 4000 litres. Pipes P and Q are attached to it. Efficiency of Pipe P is three times that of pipe Q. When both pipes are filling the tank, it takes 1 hour to fill the tank. In how much time can pipe P alone fill the tank?

Score Obtained : 0.0 / 1.0

- A) 2 hours  
**B)** 1 hour and 20 minutes  
C) 1 hour and 15 minutes  
D) 1 hour and 30 minutes

Q2895714 10 people can complete a task in 20 days. How many people are required to complete the same task in 25 days?

Score Obtained : 1.0 / 1.0

- A) 14  
B) 12  
C) 6  
**D)** 8

Q2895737 Two cyclists start from same point in opposite direction. One goes towards north at 20 kmph and other goes towards south at 25 kmph. What time will they take to be 90 km apart?

Score Obtained : 1.0 / 1.0

- A)** 2 hours  
B) 3 hours  
C) 1/2 hour  
D) 1 hour

Q2895702 10 Kg of rice which costs 18 per Kg is mixed with 8 Kg of rice which costs 15 per Kg. At what price should the mixture be sold so as to gain 20% profit?

Score Obtained : 0.0 / 1.0

- A) 16/kg  
B) 24/kg  
**C)** 20/kg  
D) 18/kg

Q2895709 The average age of 5 members of a family is 35 years. If the ages of four of them (in years) are 23, 32, 35 and 40 respectively, then what is the age of the fifth person?

Score Obtained : 1.0 / 1.0

- A) 50 years  
B) 38 years  
**C)** 45 years  
D) 48 years

Q2895600 If the numerator of a fraction is increased by 10% and its denominator is decreased by 20%, then the value of the fraction becomes  $\frac{55}{48}$ . What is the original fraction?

Score Obtained : 1.0 / 1.0

- A)  $\frac{13}{17}$   
B)  $\frac{62}{39}$   
C)  $\frac{61}{39}$   
**D)**  $\frac{5}{6}$



Q2895752 A train passes a standing man in 15.3 sec and it passes a bridge of length 196 m in 43.3 sec. The speed of the train is

Score Obtained : 1.0 / 1.0

- A) 7 m/s  
B) 18 km/hr  
C) 5 m/s  
D) 12 km/hr

#### Mental Ability and Reasoning

Q2895811 If Night is called Morning, Morning is called Evening, Evening is called Afternoon, then when does the sun rise?

Score Obtained : 1.0 / 1.0

- A) Night  
B) Morning  
 C) Evening  
D) Afternoon

Q2895843 A motorcyclist was sent by the X courier service to meet a plane from USA at Sahara airport. The plane landed ahead of the schedule and its mail was taken towards the X courier service by a scooter. After half an hour the scooter rider met the motorcyclist on the road and handed over the parcel. The motorcyclist returned to the X courier service office 20 minutes before he was expected. How many minutes early did the plane land?

Score Obtained : 0.0 / 1.0

- A) 30 mins  
B) 10 mins  
 C) 40 mins  
D) 20 mins

Q2895809 In certain language, "rini miki suki" is written as "we are together", "miki luci pinci" is written as "all are different", and "suki luci deni" is written as "all get together". What will be the code for "luci"?

Score Obtained : 1.0 / 1.0

- A) 'we'  
B) Either 'different' or 'together'  
C) 'get'  
 D) 'all'

Q2895790 A Soldier started marching in a playground towards south direction. He takes a left turn and walks for some distance. Again he takes a right turn and started walking. In which direction is he moving now?

Score Obtained : 1.0 / 1.0

- A) West  
B) East  
C) North  
 D) South

Q2899532 What is the 1st missing number in the series?

\_\_\_\_, 176, 132, 44, 33, 11

Score Obtained : 1.0 / 1.0

- A) 704  
B) 234  
 C) 528  
D) 132

Q2895791 From a certain starting point, a person moved towards south-west direction for 20 m. He then took a right turn, walked for 20 m and reached his destination. In which direction from here should he move to reach the starting point?

Score Obtained : 1.0 / 1.0

- A) East  
B) West  
C) North  
D) South

Q2895858 Study the following information carefully and answer the question given below:

Eight Persons J, K, L, M, N, O, P and Q are sitting around a circular table. Five of them are facing towards the centre while three of them are facing outside. K is facing outside and is third to the right of L who is third to the left of P who is facing towards the centre. N is sitting between K and P. O is not an immediate neighbour of L and P. Q is on immediate right of J who is not facing towards the centre.

Who is fourth to the right of Q?

Score Obtained : -0.25 / 1.0

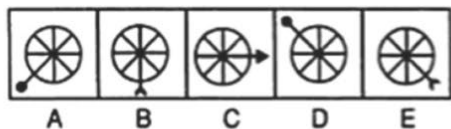
- A) K
- B) N
- C) M
- D) O

Q2896300 In the following question, the number in the square brackets is related in some way to the numbers on either side of it. The numbers in each group are related in the same way. Find the missing number in the last group.

(5 [30] 3) (8 [144] 9) (14 [56] 2) (18 [?] 5)

Score Obtained : 1.0 / 1.0

- A) 23
- B) 46
- C) 180
- D) 90



Q2895784

Score Obtained : -0.25 / 1.0

- A)
- B)
- C)
- D)

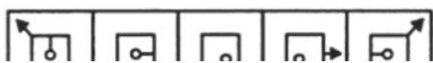
Q2895861 Study the following information carefully and answer the question given below:

Eight Persons J, K, L, M, N, O, P and Q are sitting around a circular table. Five of them are facing towards the centre while three of them are facing outside. K is facing outside and is third to the right of L who is third to the left of P who is facing towards the centre. N is sitting between K and P. O is not an immediate neighbour of L and P. Q is on immediate right of J who is not facing towards the centre.

Who is seventh to the right of M?

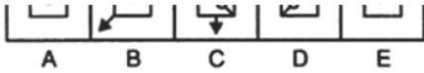
Score Obtained : 1.0 / 1.0

- A) O
- B) N
- C) L
- D) Q



tps://reports.merittracpariksha.com/rpsdob/rps/resreport.php?canid=397738667&ac=A034582\_E234873

10



Q2895786

Score Obtained : 1.0 / 1.0

- A)
- B)
- C)
- D)

Q2895834 Jathin is the son of Ramesh, who is married to Sunitha. Sunitha is the mother of Vani and sister of Monica. How is Monica related to Jathin?

Score Obtained : 1.0 / 1.0

- A) Aunt**
- B) Sister in law
- C) Mother
- D) Sister

Q2895827 Rakesh is the son-in-law of Jeevan's wife's father. How is Jeevan's wife related to Rakesh's wife?

Score Obtained : 1.0 / 1.0

- A) Sister**
- B) Daughter
- C) Niece
- D) Mother

Q2895813 In certain language, [RAT SAT HAT] is written as [^6^ \*5\*], [MAT LAT RAT] is written as [%1% #2#], [SAT MAT RAT] is written as [%1% ^6^ \*5\*], and [MAT HAT LAT] is written as [%1% &3& #2#]. What will be the code for "LAT"?

Score Obtained : 1.0 / 1.0

- A) \*5\*
- B) ^6^
- C) &3&
- D) #2#**

Q2895850 The number of candidates who holds B.Tech degree is 60%, number of candidates who have more than 2 years of experience is 40% and number of candidates who don't hold B.Tech degree and have at most 2 years of experience is 10%. If a person who holds B.Tech degree and has more than 2 years of experience is eligible for a job, then what percent of the total candidates is eligible for the job?

Score Obtained : 0.0 / 1.0

- A) 100%
- B) 10%**
- C) 0%
- D) 40%

**General Knowledge**

Q2896865 Ain-i-Akbari is the third volume of the Akbar Namah, written by:

Score Obtained : 1.0 / 1.0

- A) Abul Fazal**



- Q2896827 In March 2022, the Indian government has issued a USD 1 billion line of credit (LoC) for the import of food, necessary products, and medication to which of the following countries experiencing a serious economic crisis?
- C) Tansen
  - D) Humayun

Score Obtained : 1.0 / 1.0

- A) Myanmar
- B) Bhutan
- C) Nepal
- D) Sri Lanka**

Q2898449 As per Ministry of Agriculture in 2019-20 survey, which among the following states in India is the largest producer of Jowar?

Score Obtained : -0.25 / 1.0

- A) Karnataka
- B) Maharashtra**
- C) Andhra Pradesh
- D) Madhya Pradesh

Q2896954 Which of the following devices is used to acquire data for a computer?

Score Obtained : -0.25 / 1.0

- A) Processing device
- B) Output device
- C) Input device**
- D) Memory device

Q2896910 Which of the following is the capital city of Qatar, where 2022 FIFA World Cup is scheduled to happen?

Score Obtained : -0.25 / 1.0

- A) Baghdad
- B) Riyadh
- C) Doha**
- D) Muscat

Q2896929 Pound is the currency of which of the following countries?

Score Obtained : -0.25 / 1.0

- A) Germany
- B) Finland**
- C) Belgium
- D) United Kingdom

Q2898589 Match the following leaders in List I with their Corresponding famous slogans in List II

List I	List II
1) Bhagat Singh	a) Do or Die
2) Mahatma Gandhi	b) Dilli Chalo
3) Subhas Chandra Bose	c) Inquilab Zindabad

Score Obtained : 1.0 / 1.0

- A) 1-b, 2-c, 3-a
- B) 1-c, 2-a, 3-b**
- C) 1-a, 2-c, 3-b
- D) 1-a, 2-b, 3-c

Q2896898 Sea Turtle Project is supported by UNDP in India for wildlife protection. UNDP stands for:

- A) United Nations Demographic Programme
- B) United Nations Decentralization Programme

- C) United Nations Diversity Programme  
**D) United Nations Development Programme**

Q2896930 Which of the following is the highest Literary Award in India?

Score Obtained : 1.0 / 1.

- A) Dronacharya Award  
B) Birla Award  
**C) Jnanpith award**  
D) Jawaharlal Nehru Award

Q2896903 Which of the following temples is the sculptural excellence that symbolizes the heights of Pallava architecture and built by Narasimhavarman II at Mahabalipuram?

Score Obtained : 1.0 / 1.

- A) Dilwara Temple  
B) Chennakeshava Temple  
C) Meenakshi Temple  
**D) Shore Temple**

Q2896959 Which one of the following key combinations is used to select all text in a word document?

Score Obtained : 1.0 / 1.

- A) CTRL + A**  
B) CTRL + B  
C) CTRL + C  
D) CTRL + V

Q2896883 Which of the following is a major tributary of the Ravi river and its source is located in the Kailash Mountains at an elevation of 14,100 ft close to Bhaderwah Mountains of the State?

Score Obtained : -0.25 / 1.

- A) Jhelum  
B) Chenab  
**C) Ujh**  
D) Tawi

Q2896703 Election of the President is mentioned under which Article of Indian Constitution?

Score Obtained : 1.0 / 1.

- A) Article 52  
B) Article 56  
**C) Article 54**  
D) Article 53

Q2896723 Which of the following statements is TRUE about the Money Bill?

Score Obtained : 1.0 / 1.

- A) It needs the recommendation of the President for introduction in the Lok Sabha**  
B) It can be introduced only in the Rajya Sabha  
C) President may refuse to give his assent to the money bill and return it to the lower house  
D) Any deadlock regarding the money bill may be resolved by a joint sitting of the house

Q2896932 The first Indian English writer who won 54<sup>th</sup> Jnanpith award, 2018 for his outstanding contribution towards literature is

Score Obtained : -0.25 / 1.

- A) Shankha Ghosh  
B) Girish Karnad  
**C) Amitav Ghosh**  
D) Pratibha Ray

Q2896921

Victoria, one of the smallest capital cities in the world belongs to which of the following countries?

Score Obtained : -0.25 / 1.

- A) Maldives
- B) Mauritius
- C) Seychelles**
- D) Egypt

Q2896885 Which of the following is the tributary of river Ganga, starting at Amarkantak, Madhya Pradesh?

Score Obtained : 0.0 / 1.

- A) Son**
- B) Betwa
- C) Chambal
- D) Kosi

Q2896879 Kali Kundi glacier is the source of which of the following river?

Score Obtained : -0.25 / 1.

- A) Tawi**
- B) Markha
- C) Chenab
- D) Indus

Q2898579 Who wrote the book 'Poverty and Un-British Rule In India' that was about contrasting British liberal ideas with the actual practice of their rule in India?

Score Obtained : 1.0 / 1.

- A) Jawaharlal Nehru
- B) Dadabhai Naoroji**
- C) Rabindranath Tagore
- D) Mahatma Gandhi

Q2896943 The term "Cannons" is associated with the sport of:

Score Obtained : 1.0 / 1.

- A) Baseball
- B) Basketball
- C) Billiards**
- D) Badminton

Q2896840 Which of the following is a new initiative launched in June 2022, by Whatsapp India in collaboration with Josh Talks, to support small businesses go digital?

Score Obtained : 0.0 / 1.

- A) SXBSaathi Umbrella
- B) SVBSaathi Umang
- C) SSSaathi Unit
- D) SMBSaathi Utsav**

Q2896854 'The Book of Gold Leaves' a book which was shortlisted for the DSC Prize for South Asian Literature 2016 is written by which of the following authors from Jammu and Kashmir?

Score Obtained : -0.25 / 1.

- A) Mohammad Tabish**
- B) Salman Rushdie
- C) Manan Kapoor
- D) Mirza Waheed

Q2898239 If the time of sunrise in Arunachal Pradesh is 6.00 am, what will be the probable time of sunrise in Gujarat?

Score Obtained : -0.25 / 1.

- A) 7.00 am**

[https://reports.merittracpariksha.com/rpsdob/rps/resreport.php?canid=397738667&ac=A034582\\_E234873](https://reports.merittracpariksha.com/rpsdob/rps/resreport.php?canid=397738667&ac=A034582_E234873)

- B) 6.00 am  
C) 5.00 am  
**D) 8.00 am**

Q2896857 Who among the following dignitaries wrote the book, The Coalition Years?

Score Obtained : -0.25

- A) Raghuram Rajan  
**B) Pranab Mukherjee**  
C) Nitin Gadkari  
D) Sheila Dikshit

Q2896708 As per the Election Commission of India, "Bicycle" is the recognised election symbol of:

- (i) Samajwadi Party - Uttar Pradesh  
(ii) Manipur People's Party - Manipur  
(iii) Dravida Munnetra Kazhagam - Tamil Nadu

Score Obtained : 1.0

- A) All (i), (ii) and (iii)  
B) Only (i) and (iii)  
**C) Only (i) and (ii)**  
D) Only (ii) and (iii)

Q2896961 Which one of the following key combinations is used to cut the selected text or object to Clipboard?

Score Obtained : -0.25

- A) CTRL + X**  
B) CTRL + Z  
C) CTRL + U  
D) CTRL + Y

Q2896833 In September 2021, the sixth BRICS Young Scientist Conclave (hybrid mode –online and offline) was held at which of the following places in India?

Score Obtained : 1.0

- A) Chennai  
**B) Bengaluru**  
C) Hyderabad  
D) New Delhi

Q2898577 Who among the following was defeated in the Battle of Plassey in 1757?

Score Obtained : -0.25

- A) Mir Jafar  
**B) Siraj ud-Daulah**  
C) Lord Clive  
D) Col Watson

Q2896896 Pench National Park is one of the most popular wildlife reserves in India and has its mention in the famous story of 1894, 'The Jungle Book'. The national park is located in which of the following states of India?

Score Obtained : 1.0

- A) Arunachal Pradesh  
B) Maharashtra  
C) Rajasthan  
**D) Madhya Pradesh**

Q2896696 Which of the following statement is/are TRUE?

- A. The highest mountain peak in the state of Odisha is Deomali  
B. Deomali is situated in Malkangiri district



- A) Statement A is False and B is True
  - B) Both the statements A and B are False
  - C) Both the statements A and B are True
  - D) Statement A is True and B is False**
- 

