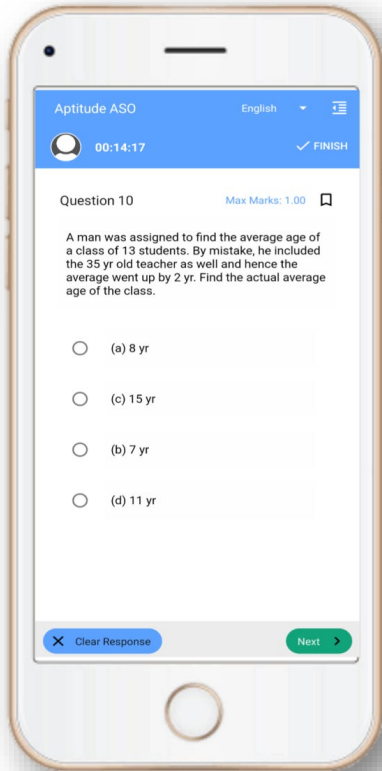


OSSC Exam- Mock Test, PYQS , Note,
E-Books Get Now On [App](#)



Tech Of World
Download App



[Click Here](#)

 **YouTube- [Click Here](#)**

 **Telegram- [Click Here](#)**

 **Facebook- [Click Here](#)**

4/29/22, 9:06 PM

https://reports.merittracpariksha.com/rpsdob/rps/resreport.php?canid=355701742&ac=A033877_E233917

Candidate Name

Assessment Name

Set Code

Candidate Id

Mobile Number

* Correct Answer is in Bold and slightly bigger

* Candidate selected option is Underlined

Odia Language

Q2860832 ନିମ୍ନଲିଖିତ ମଧ୍ୟରୁ କେଉଁ ଯୋଡ଼ା ସମପର୍ଯ୍ୟାୟବାଚୀ ଶବ୍ଦ ନୁହଁନ୍ତି ?

Score Obtained : 1.0 / 1.0

- A) ନଭ-ନେତ୍ର
 B) ଦେବତା-ଅମର
 C) ସିଂହ-କେଶରୀ
 D) ଗାଈ-ଗୋମାତା

Q2860802 'ଆମ ଦେଶରେ ଅନେକ ଲୋକ କୁଲି ଖଟନ୍ତି ।' ରେଖାଙ୍କିତ ଶବ୍ଦଟି କେଉଁ ପ୍ରକାର ଶବ୍ଦ ଅଟେ ?

Score Obtained : 0.0 / 1.0

- A) ତୁର୍କୀ
 B) ପର୍ତ୍ତୁଗାଳ
 C) ଆରବୀ
 D) ପାର୍ସୀ

Q2860809 'ସମ୍ବନ୍ଧ ପଦ' ରେ କେଉଁ ବିଭକ୍ତି ହୁଏ ?

Score Obtained : 1.0 / 1.0

- A) ଚତୁର୍ଥୀ
 B) ପଞ୍ଚମୀ
C) ଷଷ୍ଠୀ
 D) ତୃତୀୟା

Q2860777 'ପାଗଳ ଚି ଚଳନ୍ତା ଗାଡ଼ିରୁ ପଡ଼ିଗଲା ।' ରେଖାଙ୍କିତ ଶବ୍ଦଟି କି ପ୍ରକାର ବିଶେଷଣ ଦର୍ଶାଏ ?

Score Obtained : 1.0 / 1.0

https://reports.merittracpariksha.com/rpsdob/rps/resreport.php?canid=355701742&ac=A033877_E233917

- A) ପରିମାଣ ବାଚକ
 - B) ସର୍ବନାମିକ
 - C) ଅବସ୍ଥା ବାଚକ
 - D) କ୍ରିୟାଜ**
-

Q2860801 ଯେଉଁ ବର୍ଣ୍ଣ ଗୁଡ଼ିକର ଉଚ୍ଚାରଣରେ ସ୍ଵରତନ୍ତ୍ରୀ କମ୍ପିତ ହୁଏ, ସେଗୁଡ଼ିକୁ କେଉଁ ବ୍ୟଞ୍ଜନ କହନ୍ତି ?

- A) ସଘୋଷ**
 - B) ଅଜ୍ଞପ୍ରାଣ
 - C) ମହାପ୍ରାଣ
 - D) ଅଘୋଷ
-

Q2860778 ଭିନ୍ନଧର୍ମୀ ଶବ୍ଦଟି ଚିହ୍ନଟ କର ।

- A) ଗାୟକ**
 - B) ଜଗାଣ
 - C) ରକ୍ଷନ
 - D) ଭୋଜନ
-

Q2860803 ' କେଉଟ ' ର ସଂସ୍କୃତ ଶବ୍ଦ ଉଲ୍ଲେଖ କର ।

- A) କେଓଟ
 - B) କୈବର୍ତ୍ତ**
 - C) କେବଟ
 - D) କେବର୍ତ୍ତ
-

Q2860742 ନିମ୍ନଲିଖିତ ମଧ୍ୟରୁ କେଉଁଟି 'କୋକିଳ' ଶବ୍ଦର ପର୍ଯ୍ୟାୟବାଚୀ ଶବ୍ଦ ?

- A) ପିକ**
- B) କଳକଣ୍ଠ
- C) ପରତୁତ
- D) ବନପ୍ରିୟ

- A) ସୁଧାଂଶୁ
B) ଇନ୍ଦୁ
C) ତପନ
D) ଶଶାଙ୍କ

Q2860734 ଯେଉଁ କ୍ରିୟା ଦ୍ୱାରା କେହି କିଛି କରାଇବାର ବୁଝାଯାଏ, ତାହାକୁ କ'ଣ କୁହାଯାଏ ?

Score Obtained : 1.0 / 1.

- A) ଅସମ୍ପନ୍ନ କ୍ରିୟା
B) ଅସମାପିତ କ୍ରିୟା
C) ପ୍ରେରଣାର୍ଥକ କ୍ରିୟା
D) ସମ୍ପନ୍ନ କ୍ରିୟା

Q2863111 ଅନୁଛେଦକୁ ଧ୍ୟାନ ଦେଇ ପଢ଼ନ୍ତୁ ଓ ନିମ୍ନଲିଖିତ ପ୍ରଶ୍ନ ଗୁଡ଼ିକର ସଠିକ୍ ଉତ୍ତର ବାଛନ୍ତୁ ।

ଭିତରକନିକା ହେଉଛି ପ୍ରାକୃତିକ ସୌନ୍ଦର୍ଯ୍ୟର ଏକ ଗନ୍ତାଘର । ଏହାର ନଦୀ, ନାଳ, ଲୁଣାଜଙ୍ଗଲ, ହେଡ୍‌ଲ୍ୟାଣ୍ଡ, ଘଞ୍ଚି ଅରଣ୍ୟରେ ବାସ କରୁଥିବା ନାନାଜାତିର ପଶୁପକ୍ଷୀ ସବୁଗୁଡ଼ିକ ଦେଖିବାକୁ ସୁନ୍ଦର । ଥରେ ଏହି ଅଞ୍ଚଳକୁ ବୁଲିଗଲେ ଗୋଟିଏ ପୁରୀରାଜ୍ୟରେ ବଚରଣ କଲାଭଳି ମନେହୁଏ । ଭିତରକନିକା ଅଞ୍ଚଳଟି ଓଡ଼ିଶାର ପୂର୍ବ ଉପକୂଳରେ 'କେନ୍ଦ୍ରାପଡ଼ା' ଜିଲ୍ଲା ଅନ୍ତର୍ଗତ 'ରାଜନଗର' ଥାନାରେ ଅବସ୍ଥିତ । ବ୍ରାହ୍ମଣୀ, ବୈତରଣୀ ଓ ଧାମରା ନଦୀମୁହାଣରେ ଥିବା ଏକ ବିସ୍ତୃତ ଲୁଣାଜଙ୍ଗଲକୁ ଭିତରକନିକା ବୋଲି କୁହାଯାଏ । ଏହି ଅଞ୍ଚଳଟି ଆଗେ କନିକା ରାଜ୍ୟର ଅନ୍ତର୍ଭୁକ୍ତ ଥିଲା । ଏହାର ପୂର୍ବରେ ବଙ୍ଗୋପସାଗର ଅବସ୍ଥିତ । ଅନ୍ୟ ତିନି ପ୍ରାନ୍ତରେ ବ୍ରାହ୍ମଣୀ, ବୈତରଣୀ ଓ ଧାମରା ନଦୀ ଏବଂ ବ୍ରାହ୍ମଣୀର ଏକ ଶାଖାନଦୀ ଘେରି ରହିଛନ୍ତି । ସମସ୍ତ ନିକଟବର୍ତ୍ତୀ ହୋଇଥିବାରୁ ଏହା ଏକ ଲୁଣା ଅଞ୍ଚଳ ଏବଂ ନଦୀନାଳ ଦ୍ୱାରା ଖଣ୍ଡବିଖଣ୍ଡିତ । ଏଠାକୁ ଯିବାକୁ ହେଲେ ରାଜନଗର ଘାଟରୁ ଜଳପଥରେ ଡଙ୍ଗାକିମ୍ବା ମଟରଲକ୍ଷ୍ମୀ ଯୋଗେ ଯିବାକୁ ହୁଏ । ତାହାବାଲିଠାରୁ ବୈତରଣୀ ନଦୀ ବାଟେ ମଧ୍ୟ ଯାତାୟାତ ସୁବିଧା ଅଛି ।

ଭିତରକନିକାର ପ୍ରାକୃତିକ ସୌନ୍ଦର୍ଯ୍ୟ ଅତ୍ୟନ୍ତ ରମଣୀୟ । ମଟରଲକ୍ଷ୍ମୀରେ ଗଲାବେଳେ ନଦୀ ଏବଂ ନାଳର ଉଭୟପାଶ୍ୱର୍ରେ ଦେଖାଯାଏ ଘଞ୍ଚିଜଙ୍ଗଲ । ସ୍ଥାନେ ସ୍ଥାନେ ଗଛର ତାଳଗୁଡ଼ିକ ପାଣି ଉପରକୁ ନଇଁ ଆସିଥିବା ଗଛ ତାଳରେ ନାନା ଜାତିର ଚଢ଼େଇ ବସି କିଟିରିମିଟିରି ଶବ୍ଦ କରୁଥିବେ । ସେମାନଙ୍କ ମଧୁର କଲରବରେ ବନଭୂମି ମୁଖରିତ ହୋଇଉଠୁଥିବ । କେଉଁଠି କେଉଁଠି ମାଙ୍କଡ଼ମାନେ ହୁଙ୍କାର କରି ଏ ତାଳରୁ ସେତାଳ ଡେଇଁ ଗଛକୁ ଦୋହଲାଇ ଦେଉଥିବେ । ଭିତରକନିକା ହେଉଛି ନାନା ଜାତିର ପକ୍ଷୀଙ୍କର ଏକ ନିରାପଦ ଆଶ୍ରୟସ୍ଥଳ ।

Q2863154 କିଏ ପ୍ରାକୃତିକ ସୌନ୍ଦର୍ଯ୍ୟର ଗନ୍ତାଘର?

Score Obtained : 1.0 / 1.

- A) ଭିତରକନିକା
B) ବ୍ରାହ୍ମଣୀ
C) ବୈତରଣୀ
D) ନନ୍ଦନକାନନ

4/29/22, 9:06 PM

https://reports.merittracpariksna.com/rpsaob/rps/resreport.php?canid=355/U1/42&ac=AU338//_E23391/

Q2863156 ଭିତରକନକା କେଉଁମାନଙ୍କର ନରାପଦ ଆଶ୍ରୟକ୍ଷମ?

Score Obtained : 1.0 / 1.0

- A) ନାନା ଜଳଚର ଜୀବଙ୍କର
 B) ପଶୁମାନଙ୍କର
 C) ବିଦେଶୀ ପକ୍ଷୀଙ୍କର
D) ନାନା ଜାତିର ପକ୍ଷୀଙ୍କର

Q2863155 ଭିତରକନିକାକୁ ବୁଲିଗଲେ କେମିତି ଲାଗେ?

Score Obtained : 1.0 / 1.0

- A) ସମୁଦ୍ରରେ ବିଚରଣ କଲାପରି
 B) ସ୍ଵର୍ଗପୁରରେ ବିଚରଣ କଲାପରି
C) ପରୀରାଜ୍ୟରେ ବିଚରଣ କଲାପରି
 D) ସ୍ଵପ୍ନପୁରୀରେ ବିଚରଣ କଲାପରି

Q2863158 'ଅନ୍ତର୍ଗତ' ର ସନ୍ଧିବିଚ୍ଛେଦ କଲେ କ'ଣ ହେବ?

Score Obtained : 1.0 / 1.0

- A) ଅନ୍ତଃ + ଆଗତ
 B) ଅନ୍ତର + ଗତ
 C) ଅନ୍ତଃ + ଗତ
D) ଅନ୍ତଃ + ଗତ

Q2863157 'ସେମାନଙ୍କ ମଧୁର କଳରବରେ ବନଭୂମି ମୁଖରିତ ହୋଇଉଠୁଥିବ ।' - ରେଖାଙ୍କିତ ପଦଟି କେଉଁ ପ୍ରକାର ପଦ?

Score Obtained : 1.0 / 1.0

- A) ବିଶେଷଣ**
 B) ଅବ୍ୟୟ
 C) ସର୍ବନାମ
 D) ବିଶେଷ୍ୟ

English Language

4/29/22, 9:06 PM

https://reports.merittracpariksha.com/rpsdob/rps/resreport.php?canid=355701742&ac=A033877_E233917

chemical / of / properties/ the/ coal/ understood/ are /still /incompletely

Score Obtained : 1.0 / 1.0

- A) Incompletely are the chemical properties of coal still understood.
- B) Still understood incompletely are the chemical properties of coal.
- C)** The chemical properties of coal are still incompletely understood.
- D) Still incompletely understood the chemical properties of coal are.

Q2860071 Read the passage carefully and answer the questions given below it:

The once fashionable idea of giving students a say in how their schools are run is being challenged by a recently appointed head teacher as 'mere lip service to student participation.' As is now common in many schools, students in Mr Aziz's school elect representatives from each year group to attend meetings and discuss their concerns with the school authorities. But Mr Aziz believes that these school councils do more harm than good, draining students' and teachers' energies on a fake body whose decisions do not, and should not, influence children's education. 'The misguided belief that young people should be able to limit the actions of experienced educators is simply wrong,' he says. 'We're accountable to their parents to give them the best education: we cannot waste their time and ours consulting them at every stage about issues which they don't understand.'

One pupil, Sofia, who campaigned enthusiastically over a whole term for the votes of her Year 11 classmates last year, gave Mr Aziz some unexpected support. 'The school council meets every now and then to give the impression that students have a say, but nothing ever happens. We spent ages working on a report about improvements we wanted to see in the school – sensible things like more gym equipment and a wider curriculum. The teachers listened politely but the report was ignored. In class our teachers were even irritated that our homework was late because of all the planning involved!' Sofia's dad also had misgivings. 'We selected this school for its solid academic record. My daughter's here to learn – and I'm paying a lot for that,' he adds wryly.

Mr Aziz says it makes sense to be concerned about individual students' worries and ideas and his door is always open to those who are unhappy about any aspect of school life. 'And I encourage teachers to listen to their students and pass on any concerns to me,' he said. 'But one pupil told me the older representatives on the school council should even be consulted on teacher appointments! I have twenty years' experience to ensure that students leave my school with good academic results and the skills to become useful adults. Student representatives can't and shouldn't interfere with that.'

Q2860072 Why does Mr Aziz believe that school councils do more harm than good?

Score Obtained : -0.25 / 1.0

- A)** The time spent in meetings could be spent doing more useful things.
- B) Parents are already held accountable for addressing existing student issues.
- C)** It does not provide an opportunity for the students to air their concerns.
- D) Students must be permitted to guide educators on all school related matters.

Q2860074 What was it that irked the students the most about the outcomes of the council meetings?

Score Obtained : -0.2

- A) The parents felt they were not getting their money's worth from the school.
- B) The school was not giving them sufficient time to do their planning before a meeting.
- C) The teachers complained about the late submission of homework.**
- D) The fact that the school was not giving in to all their demands.

Q2860073 What is another word for 'accountable' as used in paragraph one?

Score Obtained : 1.

- A) Dedicated
- B) Dependable
- C) Unfailing
- D) Answerable**

Q2860076 What does Mr Aziz mean by 'his door is always open' in paragraph three?

Score Obtained : -0.2

- A) He is always available for guidance.**
- B) He is experienced at providing counselling.
- C) He can provide them with opportunities.
- D) He can solve all student issues all the time.

Q2860075 What is another word for 'misgivings' as used in paragraph two?

Score Obtained : -0.2

- A) Objections**
- B) Queries
- C) Disquiet
- D) Challenges

Q2860158 Given below is a sentence/phrase followed by four words. Choose the one that best describes the sentence/phrase.

A long narrow cut in a hard material

Score Obtained : 1.

- A) Groove**
- B) Glance
- C) Global
- D) Govern

Q2860197 Change the voice of the following sentence: The students must demonstrate their communication skills.

Score Obtained : 1.0 / 1.0

- A) Their communication skills the students must demonstrate.
B) Communication skills must be demonstrated by the students.
C) The students demonstrate their communication skills is a must.
D) It is a must their communication skills must be demonstrated by the students.
-

Q2860134 You will find a sentence using indirect speech (words actually spoken that have been reported) followed by four options. You are required to choose the one that is the correct form of the sentence in direct speech (words actually spoken).
Donna greeted her professor in the morning.

Score Obtained : 1.0 / 1.0

- A) Donna is saying Good morning Professor
B) Donna said, "Good morning, Professor!"
C) Donna said that "Good morning, Professor!"
D) Donna had said that, "Good morning, Professor"
-

Q2860179 Select the option that is grammatically and logically the most appropriate form of the question given:
I have not a fancy house like your.

Score Obtained : 1.0 / 1.0

- A) I have not a fancy house like your's.
B) I don't have a fancy house like yours.
C) I don't have not a fancy house like your.
D) I don't have a fancy house like your.
-

Q2860251 Choose the antonym of the underlined word.
Enemy wants to destroy India but its citizens will not allow it.

Score Obtained : 1.0 / 1.0

- A) Create**
B) Decimate
C) Damage
D) Eradicate
-

Q2860164 In each of the questions below is a sentence followed by 4 idiomatic expressions. You are required to choose the one that could be used in the sentence.

https://reports.meritracpariksha.com/rpsdob/rps/resreport.php?canid=355701742&ac=A033877_E233917

From where she stood Jill could see the whole city.

Score Obtained : 1.

- A) At the drop of a hat
 - B) An arm and a leg
 - C) As the crow flies
 - D) A bird's eye view**
-

Q2860209 Which of the segment(s) has/have errors: [a] Stricter provisions have been proposed [b] for offences such as juvenile driving, [c] driving within licence, dangerous driving, drunken driving, over-speeding [d] and steep overloading.

Score Obtained : 0.

- A) b & c
 - B) c & d**
 - C) a & d
 - D) a & b
-

Q2860237 Identify the synonym of the italicised word:

The only solution for drug addiction is sheer *abstinence*.

Score Obtained : -0.2

- A) Interest
 - B) Avoidance**
 - C) Intention
 - D) Determination
-

Q2860275 Fill in the blanks with the correct option:
_____ have endangered your life, forgive me.

Score Obtained : 1.

- A) He
 - B) I**
 - C) She
 - D) Me
-

Current Affairs and General Knowledge

Q2859435 Who among the following founded the Satyashodhak Samaj?

Score Obtained : 1.

https://reports.meritnation.com/peocvnp/parisereport.php?catid=333101724867800017_220017

- A)** Jyotiba Phule
- B) Ishwar Chandra Vidyasagar
- C) Swami Vivekananda
- D) Ramkrishna Paramahansa

Q2859455 Which of the following fundamental rights empowers the citizens to move a court of law in case of any denial of the fundamental rights?

Score Obtained : 1.0 / 1.0

- A) Right to freedom
- B) Right to equality
- C) Right to education
- D)** Right to constitutional remedies

Q2859255 In October 2021, India handed over 34.9 km long cross-border rail link to Nepal government, which is likely to enhance trade and commerce activities and people to people linkage between both the countries. It connects Kurtha in Nepal to Jayanagar in which of the following states of India?

Score Obtained : 1.0 / 1.0

- A) Uttarakhand
- B) Uttar Pradesh
- C) Sikkim
- D)** Bihar

Q2859248 In October 2021, Prime Minister Narendra Modi launched the second phase of Swachh Bharat Mission-Urban (SBM-U) and Atal Mission for Rejuvenation and Urban Transformation (AMRUT), missions. These have been designed to realise the aspiration of making the cities of India

Score Obtained : 1.0 / 1.0

- A) Slum Free and Food Secure
- B)** Garbage Free and Water Secure
- C) Crime Free and Food Secure
- D) Pollution Free and Home Secure

Q2859385 During Sixth Century B.C., Northern Part of India was divided into how many 'Mahajanapadas'(Great Kingdoms)?

Score Obtained : 1.0 / 1.0

- A) 46
- B) 26
- C) 36
- D)** 16

Q2859246 In October 2021, who became the first Indian woman to reach the finals and win the Silver medal at the 2021 World Wrestling Championships in the 57kg category?

Score Obtained : 0.0 / 1.0

- A)** Anshu Malik
- B) Vinesh Phogat
- C) Sakshi Malik
- D) Babita Kumari

Q2859407 The cultivators of Bengal and Bihar refused to work on which of the following plantations that led to a movement against British, in the year 1859?

Score Obtained : 1.0 / 1.0

- A) Jute
- B) Rice
- C)** Indigo
- D) Cotton

Q2859514 Who among the following appoints the Chief Justice of the Supreme Court in India?

Score Obtained : 1.0 / 1.0

- A) Prime Minister of India
- B) Members of Legislative Assemblies
- C)** President of India
- D) Members of Parliament

Q2859440 'Prohibition of traffic in human beings and forced labour' has been added in which category of fundamental rights of our Indian Constitution?

Score Obtained : 1.0 / 1.0

- A) Cultural and educational rights
- B)** Right against exploitation
- C) Right to freedom
- D) Right to equality

Q2859329 Which of the following passes in India is located in Uttarakhand state?

Score Obtained : -0.25 / 1.0

- A) Lanak
- B)** Khardung
- C) Kongka

https://reports.maritracnarikha.com/medoh/rs/resreport.php?canid=355701742&ac=4033877_F233917

D) Lipulekh

Q2859442 Prohibition of discrimination on grounds of religion, race, caste, sex or place of birth comes under the category of which fundamental rights of Indian Constitution?

Score Obtained : 1.0 / 1.0

- A)** Right to Equality
B) Cultural and Educational Rights
C) Right to Constitutional Remedies
D) Right to Freedom of Religion
-

Q2859251 In which of the following states of India, Raimona Reserve Forest and Dehing Patkai Wildlife Sanctuary were notified as National Parks in June 2021?

Score Obtained : 1.0 / 1.0

- A) Nagaland
B) Assam
C) Gujarat
D) Odisha
-

Q2859513 What is the tenure of each member of Rajya Sabha?

Score Obtained : 1.0 / 1.0

- A) 5 years
B) 6 years
C) 10 years
D) 4 years
-

Q2859515 Which of the following is a political right?

Score Obtained : 1.0 / 1.0

- A) Right to Work
B) Right to Property
C) Right to Vote
D) Right to Life
-

Q2859398 Who among the following led the Revolt of 1857 from the Kanpur region in India?

Score Obtained : -0.25 / 1.0

- A) Rani Laxmi Bai
B) Begam Hazrat Mahal

https://reports.merittracpariksha.com/rsdeb/rs/resreport.php?catid=355701742&ac=A033877_E233917

- C) Nana Sahib
 - D) Veer Kunwar Singh
-

Q2859330 The Romushi river is the tributary of which of the following rivers?

Score Obtained : 0.0 / 1.0

- A) Mahanadi
 - B) Jhelum**
 - C) Sutlej
 - D) Godavari
-

Q2859315 The historic town of Gwalior is situated on the banks of which of the following river?

Score Obtained : 0.0 / 1.0

- A) Godawari
 - B) Kshipra
 - C) Chambal**
 - D) Damodar
-

Q2859351 Omkareshwar Temple, one of the 12 Jyotirlingas in India is situated on the banks of which river?

Score Obtained : 0.0 / 1.0

- A) Krishna
 - B) Kaveri
 - C) Tapi
 - D) Narmada**
-

Q2859453 Which of the following is an INCORRECT option with respect to emergency provisions included in the Constitution of India?

Score Obtained : 1.0 / 1.0

- A) Financial Emergency
 - B) Deadlock Emergency**
 - C) National Emergency
 - D) Emergency in State (President's rule)
-

Q2859458 Which of the following forms of Justice is NOT mentioned in the Preamble of the Constitution of India?

- A) Social
B) Political
C) Economic
D) Faith
-

Logical Reasoning

Q2859720 In a coding scheme, every digit is coded as a multiple of 3 that is just greater than or equal to it. What will be the code for 6738312?

Score Obtained : 1.0 / 1.0

- A) 6939336
B) 3939333
C) 6939333
D) 6939633
-

Q2859849 If 'Monday' is related to 'Second', then 'Tuesday' is related to

Score Obtained : 1.0 / 1.0

- A) Fifth
B) Sixth
C) Fourth
D) Third
-

Q2859610 The next number in the sequence 39, 35, 29, 27, 21, 17, is

Score Obtained : 0.0 / 1.0

- A) 13
B) 11
C) 14
D) 15
-

Q2859612 The next number in the sequence -4, 3, 22, 59, is

Score Obtained : 1.0 / 1.0

- A) 89
B) 120
C) 65
D) 71
-

"time is precious" is written as "er ui af"

"time management is important" is written as "af jk op ui"

"management technique is used" is written as "cv af bn op"

What will the code for "time management" in the given code language?

Score Obtained : 1.0 / 1.0

- A) af op
- B) ui er
- C) _ui op**
- D) cv op

Q2859597 The next number in the sequence 344, 380, 348, 376, 352, 372, is

Score Obtained : 1.0 / 1.0

- A) 382
- B) _356**
- C) 364
- D) 378

Q2859753 In a certain code language,
"time is precious" is written as "er ui af"

"time management is important" is written as "af jk op ui"

"management technique is used" is written as "cv af bn op"

In the given code language, what does the code "jk" stand for?

Score Obtained : 1.0 / 1.0

- A) technique
- B) time
- C) management
- D) _important**

Q2859794 Indicating Sulata, Shantanu said, "The son of her brother is the brother of my wife." How is Sulata related to Shantanu?

Score Obtained : 1.0 / 1.0

- A) Mother-in-law
- B) Sister-in-law
- C) Grandmother
- D) _Sister of Father-in-law**

https://reports.maritracnarikha.com/medoh/rms/resreport.php?canid=355701742&ac=4033877_F233917

Q2859847 If 'April' is related to 'Fourth', then 'March' is related to

Score Obtained : 1.0 / 1.0

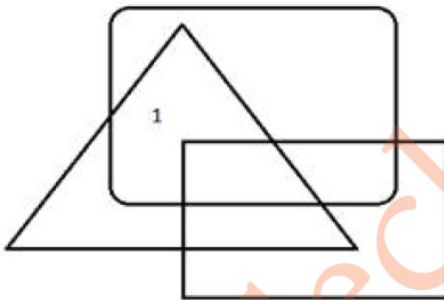
- A) Third
B) Seventh
C) Second
D) Fifth
-

Q2859661 When 20% of a number is added to 64, the resultant is the number itself. The number is

Score Obtained : 1.0 / 1.0

- A) 80
B) 45
C) 50
D) 75
-

Q2859881 An image is made from three geometric figures. In the image, some regions are formed. In each of these regions, as many dots are to be placed as the number of geometric figures that has this as a part of it. One of these regions is marked with number 1. How many dots will be placed in region 1?



Score Obtained : 1.0 / 1.0

- A) 2
B) 4
C) 1
D) 3
-

Q2859594 The next number in the sequence 670, 720, 772, 826, 882, is

Score Obtained : 1.0 / 1.0

- A) 964
B) 940
C) 1004

https://reports.meritracpariksha.com/rpsdob/rps/resreport.php?canid=355701742&ac=A033877_E233917

D) 986

Q2859787 Showing Joy, Rina said, "His son's sister is my mother-in-law." How is the Rina's Husband related to Joy?

Score Obtained : 1.0 / 1.0

- A) Nephew
 - B) Son
 - C) Father
 - D) Grandson**
-

Q2859768 Xavier introduced Yaltsin as the husband of the granddaughter of the father of my father. How is Yaltsin related to Xavier?

Score Obtained : 1.0 / 1.0

- A) Brother-in-law**
 - B) Father-in-law
 - C) Son-in-law
 - D) Cannot be determined
-

Q2859733 In a coding scheme, every digit is coded as a multiple of 3 that is just lesser than or equal to it. What will be the code for 97685345?

Score Obtained : 1.0 / 1.0

- A) 96663333**
 - B) 96963333
 - C) 96663933
 - D) 96663363
-

Q2859644 Two persons A and B start a business together. A invests 2,10,000. If the ratio of the shares of profit of A and B is 3 : 5, then the investment of B is

Score Obtained : 1.0 / 1.0

- A) 3,50,000**
 - B) 3,00,000
 - C) 4,00,000
 - D) 3,75,000
-

Q2859655 The cost of a book worth 500 was increased by 50. The percentage increase in the cost is

Score Obtained : 1.0 / 1.0

- A) 5
 - B) 7**
-

https://reports.merittracpariksha.com/rpsdob/rps/resreport.php?canid=355701742&ac=A033877_E233917

- C)**_10
D) 12
-

Q2859657 A number decreased by 30% is 140. The number is

Score Obtained : 1.0 / 1.0

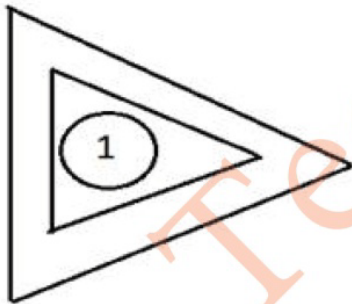
- A) 175
B)_200
C) 120
D) 150
-

Q2859812 P is the father of R, T is the daughter of R while U is the spouse of P. Q is the brother of R, and S is the son of Q. V is the spouse of Q while W is the father of V. Who is the grandmother of S?

Score Obtained : 1.0 / 1.0

- A) W
B) R
C) P
D)_U
-

Q2859880 An image is made from some geometric figures. In the image, some regions are formed. In each of these regions, as many dots are to be placed as the number of geometric figures that has this as a part of it. One of these regions is marked with number 1. How many dots will be placed in region 1?



Score Obtained : 1.0 / 1.0

- A) 4
B) 1
C) 2
D)_3
-

Computer Fundamentals

- A) Subject Line
 - B) To
 - C) From
 - D) CC**
-

Q2860327 Which component of a Computer decides the manner and sequence in a way all the operations are performed?

Score Obtained : 1.0 / 1.0

- A) Input Unit
 - B) Memory Unit
 - C) Arithmetic Logic Unit
 - D) Control Unit**
-

Q2860307 Which of the following type of devices provide a way for a computer to output data for communication with users or other computers?

Score Obtained : 1.0 / 1.0

- A) Processing devices
 - B) Memory devices
 - C) Output devices**
 - D) Input devices
-

Q2860371 Which shortcut key is used to delete a selected item permanently without moving it to Recycle Bin?

Score Obtained : 1.0 / 1.0

- A) Alt + Del
 - B) Ctrl + Del
 - C) Del
 - D) Shift + Del**
-

Q2860318 Which input device scans text character by character, converts them into a machine-readable code and stores the text in memory?

Score Obtained : 1.0 / 1.0

- A) OCR**
- B) MICR
- C) BCR
- D) OMR

Q2860350 Which keyboard shortcut is used to access File menu options in current program?

Score Obtained : 1.0 /

- A) Alt+F**
- B) Alt+E
- C) Alt+Tab
- D) Alt+A

Q2860513 Which is a popular software used primarily for creating documents such as letters, brochures, learning activities, tests, quizzes and students' homework assignments?

Score Obtained : 1.0 /

- A) MS Access
- B) Calculator
- C) MS Word**
- D) Paint

Q2860480 An e-mail consists of

Score Obtained : 1.0 /

- A) Only image
- B) Only text
- C) Only files
- D) Text, images, files, or other attachments**

Q2860368 Which is the shortcut key for Google Chrome browsers that allows user to toggle back and forth between full screen view and normal view?

Score Obtained : 0.0 /

- A) F10
- B) F12
- C) F11**
- D) F9

Q2860501 Which of the following is used to quickly copy formatting from one thing in a document to another?

Score Obtained : 1.0 /

- A) Word Art
- B) Format Painter**
- C) Word Art
- D) Word Art

https://www.techofworld.com/question/2860350-400037-500017

- C) Wrap text
D) Clipboard
-

Q2860398 Which data system is responsible for sending public and private messages to other users in "real time"?

Score Obtained : 0.0 / 1.0

- A)** Internet Relay Chat
B) CU-SeeMe
C) USENET newsgroups
D) Gopher
-

Q2862799 What is the purpose of File Encryption ?

Score Obtained : 1.0 / 1.0

- A) Reduce the file size on the disk
B) Secures the content of the file by applying security algorithm
C) Mark it for archiving by the operating system
D) None of the options.
-

Q2862801 What is cache memory?

- a. Cache memory is a RAM that stores data permanently.
b. It is a RAM that a computer microprocessor can access more quickly than it can access regular RAM.

Score Obtained : 1.0 / 1.0

- A) Only a
B) Only b
C) Both a & b
D) Neither a Nor b
-

Q2860430 Which one of the following is a version of Android operating system?

Score Obtained : -0.25 / 1.0

- A) Chewing gum
B) Ice Cream Sandwich
C) Candy Pop
D) Burger bread
-

Q2860532 Pages in MS PowerPoint are called as:

Score Obtained : 1.0 / 1.0

4/29/22, 9:06 PM

https://reports.meritracpariksha.com/rpsdob/rps/resreport.php?canid=355701742&ac=A033877_E233917

- A) Canvas
 - B) Frames
 - C) Slides**
 - D) Panes
-

General Science

Q2859030 The CORRECT order of energy flow in the ecosystem among the following options is:

Score Obtained : 1.0 / 1.0

- A) Herbivores > producers > secondary consumers > tertiary consumers
 - B) Producers > herbivores > secondary consumers > tertiary consumers**
 - C) Producers < tertiary consumers < secondary consumers < herbivores
 - D) Producers > secondary consumers > herbivores > tertiary consumers
-

Q2859168 The Earth's atmosphere is comprised of different layers based on temperature. The coldest region of the atmosphere is:

Score Obtained : -0.25 / 1.0

- A) Thermosphere
 - B) Mesosphere**
 - C) Exosphere
 - D) Stratosphere
-

Q2859201 The ocean thermal energy (OTE) is the energy available due to

Score Obtained : 1.0 / 1.0

- A) tides arising out in the ocean
 - B) volume difference between the water at different levels in the ocean
 - C) temperature difference between the water at different levels in the ocean**
 - D) pressure difference between the water at different levels in the ocean
-

Q2859081 Reproduction is the production of offspring. Which of the following reproduces through binary fission?

Score Obtained : 1.0 / 1.0

- A) Hydra
- B) Amoeba**
- C) Spirogyra
- D) Yeast

4/29/22, 9:06 PM

https://reports.merittracpariksha.com/rpsdob/rps/resreport.php?canid=355701742&ac=A033877_E233917

Q2859104 Meat takes longer to cook on mountains. Which of the following statements is the CORRECT reason for this?

Score Obtained : 1.0 /

- A) Atmospheric pressure increases with altitude and water starts boiling above 100° C
- B) Atmospheric pressure remains constant with altitude and water starts boiling at 100° C
- C) Atmospheric pressure decreases with altitude and water starts boiling at low temperature**
- D) Atmospheric pressure increases with altitude and water starts boiling at high temperature

Q2859206 Where is the world's most powerful telescope ALMA installed?

Score Obtained : 0.0 /

- A) Mount Graham, south-eastern Arizona
- B) La Serena, Chile
- C) Sheshan Mount, Shanghai, China
- D) Chile's Atacama desert**

Q2859010 What is the IUPAC name of the drug Ibuprofen?

Score Obtained : 0.0 /

- A) 2-Acetoxybenzoic acid
- B) 2-(4-isobutylphenyl) propionic acid**
- C) 3-(2-methoxyphenoxy)propane-1,2-diol
- D) 2-4-isobutylbutanoic acid

Q2859054 Which of the following statements is INCORRECT with respect to the flow of energy in an ecosystem?

Score Obtained : -0.25 /

- A) Energy flow in a food chain is unidirectional
- B) Energy is reused and recycled in the food chain**
- C) Flow of energy in an ecosystem takes place through food chain
- D) Some energy is always lost whenever there is a transfer of energy from one level to another

Q2859220 Identify the correct order of the speed of sound in different media at 25 °C

Score Obtained : -0.25 /

- A) Helium < fresh water < air
- B) Fresh water < air < helium
- C) Air < helium < fresh water**
- D) Helium < air < fresh water

Q2858928 Which gas will be liberated when sodium bicarbonate is added to acetic acid?

Score Obtained : 1.0 / 1.0

- A) O_2
 - B) CO_2**
 - C) H_2O
 - D) CO
-

Q2859037 Where does the majority of fat digestion of food occur in the human body?

Score Obtained : 1.0 / 1.0

- A) Small Intestine**
 - B) Oesophagus
 - C) Mouth
 - D) Spleen
-

Q2859076 Flowers are the reproductive structures of angiosperms. Which of the following is TRUE about bisexual flowers?

Score Obtained : 1.0 / 1.0

- A) They contain stamens only
- B) They contain both stamens and carpels**

fworld.in