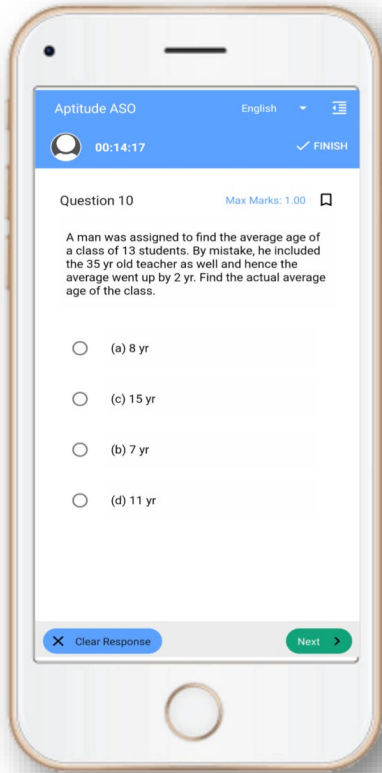


OSSC Exam- Mock Test, PYQS , Note,
E-Books Get Now On [App](#)



Tech Of World
Download App



[Click Here](#)

 **YouTube- [Click Here](#)**

 **Telegram- [Click Here](#)**

 **Facebook- [Click Here](#)**



Odia Language

Q2860828 'ଅତି କୁହାଳିଆ ପିଣ୍ଡୁ ପରୀକ୍ଷାରେ ଫେଲ ହେଲା ।' ଉକ୍ତ ବାକ୍ୟରେ କେଉଁଟି ବିଶେଷଣ ବିଶେଷଣ ପଦ ଚିହ୍ନଟ କର ।

Score C

- A) ପରୀକ୍ଷା
- B) ଫେଲ
- C) ଅତି**
- D) କୁହାଳିଆ

Q2860703 କୌଣସି ସଂଖ୍ୟା ବାଚକ ବିଶେଷଣ ପଦ କ୍ରମାନ୍ୱୟରେ ସବୁ ସଂଖ୍ୟା ନ ରୁଖାଇ ଏକ ନିର୍ଦ୍ଦିଷ୍ଟ ସଂଖ୍ୟାକୁ ରୁଖାଇଲେ, ତାହାକୁ କି ବିଶେଷଣ କୁହାଯାଏ ?

Score Ob

- A) ସଂଖ୍ୟା ବାଚକ
- B) ତୁଳନାତ୍ମକ
- C) ପୂରଣ ବାଚକ**
- D) ପରିମାଣ ବାଚକ

Q2863107 ଅନୁଛେଦକୁ ଧାନ ଦେଇ ପଢ଼ନ୍ତୁ ଓ ନିମ୍ନଲିଖିତ ପ୍ରଶ୍ନ ଗୁଡ଼ିକର ସଠିକ୍ ଉତ୍ତର ବାଛନ୍ତୁ ।

ମଣିଷ ବେଳେବେଳେ ଭୁଲ୍ କରେ, ଆଉ ଏମିତି ଭୁଲ୍ କରେ ବୋଲି ହିଁ ମଣିଷ ହୋଇ ରହେ । ପୁରାଣ ଓ ଇତିହାସରୁ ଜଣାଯାଏ ଯେ, ମଣିଷ ତିରଦିନହିଁ ମଝିରେ ମଝିରେ ଭୁଲ୍ କରୁଥାଏ ।

ସତ୍ୟଯୁଗର କଥା । ବିଶ୍ୱାମିତ୍ର କୁଆଡ଼େ ଭୁଲ୍ କରିଥିଲେ ଓ ସେଇ ଭୁଲରୁ ଜନ୍ମ ନେଇଥିଲେ ଶକୁନି । ତା'ପରେ ତେତୟା-ରାମାୟଣ ଯୁଗ । ପଞ୍ଚାବସ୍ତୁର ନିଦଶନସ୍ୱରୂପ ଓ ଜନମତର ଖାତିରରେ କରାଯାଇଥିଲେ ମଧ୍ୟ ସୀତାଙ୍କ ବନ୍ଦବାସ ଗୋଟିଏ ଭୁଲପର ମନେହୁଏ । ଦ୍ୱାପର ତଥା ମହାଭାରତ ଯୁଗ । ଧର୍ମର ପ୍ରତୀକ ପୁଧ୍ୟସିର ମଧ୍ୟ ଶକୁନି ସଙ୍ଗରେ ପଶାଖେଳି ନିଜ ହାଜ୍ୟ ସଙ୍ଗରେ ଦୋପଦୀଙ୍କ ହରାଇଥିଲେ । ଆଉ ଅଜିର ଏ କଳିଯୁଗ କଥା, ତା' ଛାଡ଼ି । ଗାନ୍ଧିଜୀଙ୍କ ପର ମହାତ୍ମା ମଧ୍ୟ ଭାରତୀୟମାନଙ୍କର ସତ୍ୟ ଓ ଅହଂସାରେ ବିଶ୍ୱାସ ରଖି ୧୯୨୧-୨୨ରେ ସେ ଅସହଯୋଗ ଆନ୍ଦୋଳନ ଓ ସତ୍ୟାଗ୍ରହପାଇଁ ଭାବିବା ଦେଇଥିବାରୁ ଗୋଟାଏ ମସୃବହୁ ଭୁଲ୍ କଲେବୋଲି କହିଲେ ଏବଂ ତାକୁ ସେ 'ହିମାଲୟାନ୍ ରୁଣ୍ଡର' ବୋଲି ବର୍ଣ୍ଣନା କରିଥିଲେ । କଥାରେ ଅଛି, ମନମାନଙ୍କର ମଧ୍ୟ ମତିଭ୍ରମ ହୁଏ ଓ ରକ୍ଷିମାନେ ହେଲେବେଳେ ଆଷ୍ଟ ପୟୋଗ କରନ୍ତି । ପୁରାଣ ଅନୁସାରେ ଦେବଦେବ ମହାଦେବ ମଧ୍ୟ ଭୁଲରେ ତାଙ୍କ ପୁଅ ଗଣେଶଙ୍କ ମୁଣ୍ଡ କାଟିଦେଇଥିଲେ ଓ ଭୁଲ୍ ଜାଣିସାରଲା ପରେ ଗୋଟାଏ ହାତୀମୁଣ୍ଡ ଆଣି ଯୋଡ଼ିଦେଲେ ।

ଏଣୁ ଭୁଲର ବର୍ଣ୍ଣନା କେବଳ ଯେ ହିନ୍ଦୁମାନଙ୍କର ପୁରାଣ ଓ ଇତିହାସରେ ଦେଖିବାକୁ ମିଳେ ତାହା ନୁହେଁ, ବାଇବେଲରେ ଆଦାମ୍ ଓ ଇଭ୍ୱଙ୍କ ଚରିତ୍ରବୃତ୍ତାନ୍ତ ମଧ୍ୟ ଠିକ୍ ସେଇ ଧରଣର ।

Q2863135 ଆଦାମ୍ ଓ ଇଭ୍ୱଙ୍କ ପ୍ରସଙ୍ଗ କେଉଁ ଧର୍ମଗ୍ରନ୍ଥରେ ବର୍ଣ୍ଣନା କରାଯାଇଛି?

Score Obtained : 1.0 / 1.0

- A) ଗୀତା
B) ବାଇବେଲ୍
 C) କୋରାନ୍
 D) ଭାଗବତ

Q2863134 ବିଶ୍ୱାମିତ୍ରଙ୍କ ଭୁଲ୍ ଯୋଗୁଁ କିଏ ଜନ୍ମ ନେଇଥିଲେ?

Score Obtained : 1.0 / 1.0

- A) ରମ୍ଭା
B) ଶକୁନି
 C) ରାଧା
 D) ଉର୍ବଶୀ

Q2863137 'ହିମାଲୟାନ୍ ରୁଣ୍ଡର'ର ଭାବାର୍ଥ କ'ଣ?

Score Obtained : 1.0 / 1.0

- A) ବରଫର ପାହାଡ଼
 - B) ଅସମ୍ଭବ ଘଟଣା
 - C) ମସୃବଡ଼ ଭୁଲ୍**
 - D) ହିମାଳୟ ପରି ମହାନ
-

Q2863138 'ମୁନିମାନଙ୍କର ମତିଭ୍ରମ ହୁଏ'- ରେଖାଙ୍କିତ ପଦଟି କେଉଁ ବିଭକ୍ତି?

- A) ଷଷ୍ଠୀ**
 - B) ପଞ୍ଚମୀ
 - C) ଚତୁର୍ଥୀ
 - D) ସପ୍ତମୀ
-

Q2863136 ଗଣେଶଙ୍କ ଦେହରେ କିଏ ହାତୀମୁଣ୍ଡ ଯୋଡ଼ିଥିଲେ?

- A) ମହାଦେବ**
 - B) ବିଷ୍ଣୁ
 - C) ବ୍ରହ୍ମା
 - D) ପାର୍ବତୀ
-

Q2860813 ଦିନକୁ ଦିନ - ରେଖାଙ୍କିତ ପଦଟିରେ କେଉଁ ବିଭକ୍ତି ଯୋଗ ହୋଇଛି ?

- A) ଦ୍ଵିତୀୟା**
- B) ତୃତୀୟା
- C) ଚତୁର୍ଥୀ

D) ପଞ୍ଚମୀ

Q2860785 'ହୋ' ଧାତୁରୁ 'ହେବା' ହୁଏ । ଏହି 'ହୋ' ଧାତୁର ସଂସ୍କୃତ ଧାତୁ ନିମ୍ନଲିଖିତ ମଧ୍ୟରୁ କେଉଁଟି ?

A) ହ୍

B) ହା

C) ହେ

D) ହୁ

Q2860769 'ଜଗଜ୍ଞାନନୀ' ଶବ୍ଦଟି ବ୍ୟାକରଣର କେଉଁ ନିୟମରେ ଗଠିତ ହୋଇଛି ?

A) କୃଦନ୍ତ

B) ଉପସର୍ଗ

C) ସନ୍ଧି

D) ତଦ୍ଭିତ

Q2860792 ନିମ୍ନଲିଖିତ ମଧ୍ୟରୁ କେଉଁ ଶବ୍ଦ ଯୋଡ଼ାଟି ପର୍ଯ୍ୟାୟବାଚୀ ଶବ୍ଦ ନୁହେଁ ?

A) ବାରିଧି-ବାରିଦ

B) ଚଞ୍ଚଳ-ଚପଳ

C) ଦନ୍ତୀ-ଦ୍ଵିରଦ

D) ଭାସ୍କର-ମିହିର

Q2860770 ନିମ୍ନଲିଖିତ ମଧ୍ୟରୁ କେଉଁ ଉପସର୍ଗଟି ଅତିଶୟ ଅର୍ଥରେ ବ୍ୟବହୃତ ହୁଏ ନାହିଁ ?

A) ପ୍ରତି

- B) ଅତି
 - C) ଉତ୍
 - D) ନିର୍
-

Q2860800 ' ଛଳ ଛଳ' - ଉକ୍ତ ଶବ୍ଦଟି କେଉଁ ପ୍ରକାର ଯୁଗ୍ମ ଶବ୍ଦ ?

- A) ସାର୍ଥକ ଓ ନିରର୍ଥକ
 - B) ଧ୍ବନ୍ୟାତ୍ମକ
 - C) ସମାନାର୍ଥକ
 - D) ଦ୍ବିରୁକ୍ତି**
-

Q2860837 ନିମ୍ନଲିଖିତ ମଧ୍ୟରୁ କେଉଁଟି 'ବଜ୍ର' ଶବ୍ଦର ପର୍ଯ୍ୟାୟବାଚୀ ଶବ୍ଦ ?

- A) ସ୍ଥିର
 - B) ରୁଚିର
 - C) ଅଟବୀ
 - D) କୁଳିଶ**
-

Q2860693 ନିମ୍ନଲିଖିତ ମଧ୍ୟରୁ କେଉଁଟି ପୂର୍ବ ପଦ ରୂପେ ବ୍ୟବହୃତ ଏକ ବିଶେଷଣ ?

- A) ଅନୁ
 - B) ଅଣ**
 - C) ପ୍ରତି
 - D) ଅନ
-

English Language

Q2860133 You will find a sentence using direct speech (words actually spoken) followed by four options. You are required to choose the one that is the correct form of the sentence in indirect/reported speech
Rita said, "Rise above the storm and you will find sunshine."

Score Obtained : -0.25 / 1.0

- A) Rita said that if we rose above the storm we will find sunshine.
- B)** Rita said that if we rise above the storm we could find sunshine.
- C) Rita said that if we rise above the storm we will find sunshine.
- D)** Rita said that if we were to rise above the storm we would find sunshine.

Q2860200 Change the voice of the following sentence: An advocate advised me on documents required to file the case.

Score Obtained : 1.0 / 1.0

- A) An advocate would advise me on all the required documentation to file the case.
- B) An advocate's advice to me on documents required to file case will be given by him.
- C)** I was advised by an advocate on the the documents required for filing the case.
- D) To file the case, documents will be required and that advice would be given by an advocate.

Q2860267 Fill in the blanks with the correct option:
_____ name is Dr. John and I work in an institution.

Score Obtained : 1.0 / 1.0

- A)** My
- B) Him
- C) Their
- D) I

Q2860083 Read the passage carefully and answer the questions given below it:

Venus is the second planet from the Sun, orbiting it every 224.7 Earth days. It has the longest rotation period of any planet in the Solar System and rotates in the opposite direction to most other planets. It does not have any natural satellites. It is named after the Roman

System and related to the opposite emotion of love, the planet is named after the Roman goddess of love and beauty.

The planet Venus – the only planet named after a female – may have been named for the most beautiful deity of her pantheon because it shone the brightest of the five planets known to ancient astronomers.

Data from the Pioneer spacecraft of NASA apparently prove the theory that the high surface temperature of Venus is due to an atmospheric greenhouse effect caused mainly by a blanket of carbon dioxide. Such a greenhouse effect is created when energy in the form of sunlight easily passes through a planet's atmosphere, warms its surface, and is converted to heat radiation that is then held in by the atmosphere from top to bottom.

Venus has a relatively thin atmosphere like the Earth's, but Venus' atmosphere consists of more than ninety percent carbon dioxide, compared to less than four percent in that of the Earth.

Because of its higher percentage of carbon dioxide, Venus' atmosphere traps much more heat radiation than does the Earth's. Thus, the Venus studies are believed to be important to the understanding of possible adverse effects on the Earth's agriculture that could result from the long-term use of fossil fuels, which add carbon dioxide to the atmosphere.

Q2860085 What is another word for 'deity' as used in paragraph two?

Score Obtained : 1.0 / 1.0

- A) conqueror
- B) heroine
- C) goddess**
- D) champion

Q2860084 According to paragraph, all of the following statements about the planet Venus are true EXCEPT:

Score Obtained : 1.0 / 1.0

- A) It has the longest rotation period among the planets.
- B) Venus is the Roman God of love and beauty.
- C) It is the second planet from the sun orbiting it every 224.7 Earth days.
- D) Its rotation pattern is similar to those of the other planets.**

Q2860087 According to the passage, which of the following statements is FALSE?

Score Obtained : 1.0 / 1.0

- A)** The atmosphere of Venus captures less heat radiation as compared to that of the Earth.
- B) Extended use of fossil fuels increases carbon dioxide levels in the atmosphere.
- C) The atmosphere of Venus contains far more carbon dioxide than that of the Earth.
- D) The atmosphere of Venus is thin like that of the Earth.
-

Q2860088 The high surface temperature of Venus is due to

- A) an atmospheric greenhouse effect that allows sunlight to freely pass through.
- B) an atmospheric greenhouse effect caused mainly by a blanket of carbon monoxide.
- C) an atmospheric greenhouse effect that fails to trap the radiation from the earth's surface.
- D)** an atmospheric greenhouse effect caused mainly by a blanket of carbon dioxide.
-

Q2860086 The data obtained help scientists to

- A)** forecast future agricultural problems on Earth.
- B) calculate the amount of carbon dioxide in the atmosphere accurately.
- C) increase the discharge of carbon dioxide into the atmosphere.
- D) test the effectiveness of the spacecraft sent to Venus by NASA.
-

Q2860228 Rearrange the jumbled words to form a meaningful sentence:
country's / culture/ language /a / indivisible /is/ its / from

- A)** A country's language is indivisible from its culture.
- B) From its culture a country's is indivisible language.
- C) Is indivisible language from its culture a country's.
- D) A culture from its country's language is indivisible.
-

Q2860161 In each of the questions below is a sentence followed by 4 idiomatic expressions. You are required to choose which one could be used in the sentence.

Josh will feel better once he has thrown up the poison that he has ingested.

Score Obtained : -0.25 / 1.

- A) As fit as a fiddle
- B) Get it out of the system**
- C) Every cloud has a silver lining
- D) Desperate times call for desperate measures

Q2860177 Select the option that is grammatically and logically the most appropriate form of the question given:
Han got through from his chair again and went around meddled other people's affairs.

Score Obtained : 1.0 / 1.

- A) Han got up from his chair again and went around meddling in other people's affairs.**
- B) Han got through from his chair again and went around meddling in other people's affairs.
- C) Han gotten up in his chair again and went around meddled other people's affairs.
- D) Han gets through on his chair again and went around meddled other people's affairs.

Q2860257 Choose the antonym of the underlined word.

The structure of the newly bought art piece is fragile.

Score Obtained : 1.0 / 1.

- A) Strong**
- B) Feeble
- C) Weak
- D) Brittle

Q2860249 Identify the synonym of the italicised word:

Enraged for being rejected in the interview, Sita refused to eat dinner with her family.

- A) Pressurised
 - B) Disappointed**
 - C) Infuriated
 - D) Satisfied
-

Q2860157 Given below is a sentence/phrase followed by four words. Choose the one that best describes the sentence/phrase.
One who holds a thing in trust for another

Score Obtained : -0.25 /

- A) Fiduciary**
 - B) Franchise
 - C) Formative
 - D) Freelance
-

Q2860207 Which of the segment(s) has/have errors: [a] Samsung need to make sure [b] that it is screening candidates [c] for the specify soft skills[d] that would lead it to successes.

Score Obtained : -0.25 /

- A) a, c & d**
 - B) a, b & c
 - C) a, b & d
 - D) a, b, c & d
-

Current Affairs and General Knowledge

Q2859259 The Central Government in June 2021, declared Smart City awards 2020. Which of the following states is the top performer among all Indian states?

Score Obtained : -0.25 /

- A) Tamil Nadu
- B) Uttar Pradesh**

- B)** Uttar Pradesh
C) Madhya Pradesh
D) Gujarat
-

Q2859415 Read the following statements and choose the CORRECT answer with respect to great poets of India.

- (i) 'Raghuvamsha' is a Sanskrit mahakavya composed by the famous poet Kalidasa.
(ii) 'Rajatarangini' is a historical chronicle of early India, written in Sanskrit verse by the great poet Banabhata.

Score Obtained : 1.0

- A) (i) is FALSE and (ii) is TRUE
B) (i) is TRUE and (ii) is FALSE
C) (i) is TRUE and (ii) is TRUE
D) (i) is FALSE and (ii) is FALSE
-

Q2859331 Kundapura Mangroove is located in which of the following states in India?

Score Obtained : -0.25

- A) Andhra Pradesh
B) Karnataka
C) Gujrat
D) West Bengal
-

Q2859365 Garo-Rajmahal Gap is located on which of the following plateaus?

Score Obtained : 1.0

- A) Marwar Plateau
B) Deccan Plateau
C) Chotanagpur Plateau
D) Meghalaya Plateau
-

Q2859470 According to the Indian Constitution, the Vice-President is elected for a term of how many years from the date of his appointment?

- A) ten years
 - B) nine years
 - C) five years**
 - D) three years
-

Q2859232 Which state government of India has launched the "Millet Mission" on September, 2021 with the objective of making the state a millet hub of India?

Score Obtained : 0.0 / 1.0

- A) Punjab
 - B) Bihar
 - C) Chhattisgarh**
 - D) Jharkhand
-

Q2859472 Which of the following Articles of the Indian Constitution related to human rights CANNOT be suspended even during proclamation of emergency?

Score Obtained : 1.0 / 1.0

- A) Articles 17 and 18
 - B) Articles 25 and 26
 - C) Articles 13 and 14
 - D) Articles 20 and 21**
-

Q2859495 Identify the human right that is not specified in Part III of the Constitution as a Fundamental Right but the Supreme Court of India has confirmed this as a fundamental right that is an integral part of the right to life and liberty.

Score Obtained : 1.0 / 1.0

- A) Right to Privacy**
- B) Right to travel Abroad

- C) Right to Education
- D) Right to Property

Q2859424 Read the following statements and choose the CORRECT option.

- (i) The Salt Satyagraha was a mass civil disobedience movement initiated by Mahatma Gandhi against the salt tax imposed by the British government in India.
- (ii) Lord Irwin wanted this movement and the Satyagraha to come to an end, that resulted in the agreement called Gandhi-Irwin Pact.

Score Obtained : 1.0 / 1.0

- A)** (i) is TRUE and (ii) is TRUE
- B) (i) is TRUE and (ii) is FALSE
- C) (i) is FALSE and (ii) is TRUE
- D) (i) is FALSE and (ii) is FALSE

Q2859233 Who won the Gold Medal in Men's Javelin Throw in 2021 Tokyo Olympics?

Score Obtained : 1.0 / 1.0

- A) Lovlina Borgohain
- B)** Neeraj Chopra
- C) Bajrang Punia
- D) Ravi Kumar Dahiya

Q2859433 The first Railway line in India in 1853 was laid under the administration of

Score Obtained : 1.0 / 1.0

- A)** Lord Dalhousie
- B) Lord Wellesley
- C) Lord William Bentinck
- D) Lord Cornwallis

Q2859467 According to the Indian Constitution, the number of judges can be prescribed in the Supreme Court by:

Score Obtained : 1.0 / 1.0

- A) Order of the Vice-President of India
- B) Supreme Court by law
- C) Parliament by law**
- D) Supreme Court by notification

Q2859334 Olive Ridley Sea Turtle or *Lepidochelys olivacea* migrate thousands of miles every year and come together as a group only once a year near Gahirmatha in which of the following Indian state?

Score Obtained : 1.0 / 1.0

- A) Kerala
- B) Odisha**
- C) Andhra Pradesh
- D) Tamil Nadu

Q2859337 Which of the following statements are TRUE with respect to Emergency provisions?

Statement I: When a national emergency is declared on the grounds of 'war', it is known as 'External Emergency'
Statement II: When a national emergency is declared on the grounds of 'armed rebellion', it is known as 'Internal Emergency'

Score Obtained : 1.0 / 1.0

- A) Statement I: FALSE Statement II: TRUE
- B) Statement I: FALSE Statement II: FALSE
- C) Statement I: TRUE Statement II: TRUE**
- D) Statement I: TRUE Statement II: FALSE

Q2859333 Which of the following is a triangular shaped plateau and is bounded by the Satpura range in the North, the Western Ghats in the West and the Eastern Ghats in the East?

Score Obtained : 1.0 / 1.0

- A) The Central highlands
- B) The Eastern Highlands

B) The Eastern Highlands

C) The Deccan Plateau

D) Southern Plateau

Q2859536 To be recognised as a 'State Political Party', the Election Commission has laid down a detailed criteria. Identify the CORRECT option in this context.

Score Obtained : 1.0 / 1.0

A) The party should have won at least one seat in forty percent of the Gram Panchayats, Ten Municipal Councils and at least two Municipal Corporations of the State

B) The party should have won at least thirty percent of the total number of seats in the Legislative Assembly of the State and secure more than twenty seats in the General Elections

C) The party should have conducted 15 public meetings with at least three lakh people assembled for each meeting and won at least 2 Legislative Assembly seats at a General Election to Lok Sabha or Legislative Assembly

D) The party should have polled minimum of 6% of votes in a State and must have won 1 Lok Sabha or 2 Legislative Assembly seats at a General Election to Lok Sabha or Legislative Assembly

Q2859302 The FIFA World Cup 2022 is scheduled to be held in which of the following countries?

Score Obtained : 1.0 / 1.0

A) Russia

B) Qatar

C) Brazil

D) Japan

Q2859397 Select the name of the Viceroy of India under whose tenure the Partition of Bengal was implemented.

Score Obtained : 1.0 / 1.0

A) Lord Hastings

B) Lord William Bentinck

C) Lord Cornwallis

D) Lord Curzon

Q2859525 The symbol of an elephant depicts which of the following Indian political parties?

Score Obtained : 1.0 / 1

- A) Lok Jan Shakti Party
- B) Biju Janata Dal
- C) Samajwadi Party
- D) Bahujan Samaj Party**

Q2859530 Which of the following is an INCORRECT statement with respect to the procedure for removal of Supreme Court judges in India?

Score Obtained : 1.0 / 1

- A) Article 310 of the Indian Constitution deals with the provision for the removal of the judges of Supreme Court**
- B) The judge of the Supreme Court can be removed on the ground of proved misbehaviour or incapacity
- C) A Judge of the Supreme Court shall not be removed from his office except by an order of the President
- D) The procedure for removal of Supreme Court judges in India is termed as Impeachment

Logical Reasoning

Q2859631 The next number in the sequence 34345, 34222, 34099, 33976, 33853, 33730, 33607, is

Score Obtained : 1.0 / 1

- A) 33484**
- B) 33233
- C) 33453
- D) 33654

Q2859707 In a coding scheme, every digit is coded as a multiple of 3 that is just greater than it. What will be the code for 6327710?

- A) 6639933
 - B) 9639936
 - C) 9639933**
 - D) 9339933
-

Q2859695 Which is the biggest positive integer that divides the numbers 12, 18 and 30 without leaving any remainder?

- A) 12
 - B) 3
 - C) 18
 - D) 6**
-

Q2859697 What are the three numbers such that their ratio is 2 : 3 : 5 and the sum of their squares is 608?

- A) 8, 10 and 12
 - B) 10, 12 and 14
 - C) 8, 12 and 20**
 - D) 10, 12 and 16
-

Q2859855 If 'Book' is related to 'Read', then 'Football' is related to

- A) Read
- B) Write
- C) Watch
- D) Play**

Q2859589 The next number in the sequence 300, 335, 372, 411, 452, is

Score Obtained : 1.0 / 1.0

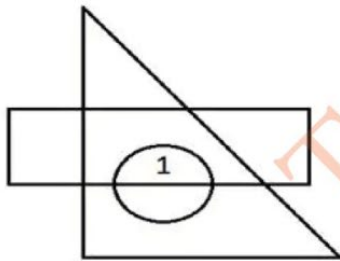
- A) 513
- B) 495**
- C) 467
- D) 517

Q2859860 If 'Watch' is related to 'Time', then what is related to 'Air'?

Score Obtained : 1.0 / 1.0

- A) Chair
- B) Fan**
- C) Trees
- D) Leaves

Q2859888 An image is made from three geometric figures. In the image, some regions are formed. In each of these regions, as many dots are to be placed as the number of geometric figures that has this as a part of it. One of these regions is marked with number 1. How many dots will be placed in region 1?



Score Obtained : 1.0 / 1.0

- A) 3**
- B) 2

- C) 1
 - D) 4
-

Q2859738 In a certain language GERMAN is coded as EGMRNA, then RESTORED is coded as:

Score Obtained : 1.0 / 1.0

- A) ERTSRODE**
 - B) ERTSORED
 - C) ERTSREOD
 - D) ERTSROED
-

Q2859609 The next number in the sequence 5, 7, 12, 19, 31, is

Score Obtained : 1.0 / 1.0

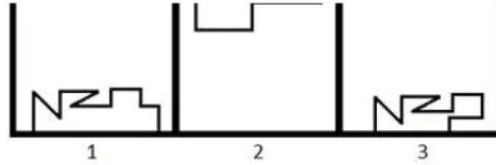
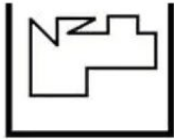
- A) 50**
 - B) 61
 - C) 37
 - D) 43
-

Q2859759 "TRIUMPH" is written as "UQJTNOI". How is "CONQUEST" written?

Score Obtained : 1.0 / 1.0

- A) DNOPDVTS
 - B) DNPOVDTS
 - C) DNOPVDTS**
 - D) DNOVPDTS
-

Q2859897 Given below is a figure on the left with a pattern. Observe and find which of the three images on the right looks similar to the top half of this pattern?



Score Obtained : 1.0 / 1.0

- A)** 1
 B) 3
 C) 2
 D) Both 1 and 2

Q2859645 A and B entered into partnership by investing ₹ 2,40,000 and ₹ 1,60,000 respectively. After 6 months, B withdrew ₹ 50,000 while A invested ₹ 50,000 more. If they earn a total profit of ₹ 1,60,000 at the end of the year, the share of A exceeds that of B by

Score Obtained : 1.0 / 1.0

- A)** ₹ 52,000
 B) ₹ 12,000
 C) ₹ 51,000
 D) ₹ 54,000

Q2859810 P is the son of Q while R is the sister of Q. S and T are the kids of R where U is an uncle of S. How is T related to U?

Score Obtained : 1.0 / 1.0

- A) Mother
 B) Sister or brother
 C) Wife
D) Niece or nephew

Q2859687 A purse contains a sum of ₹ 3850 which is made up of 66 notes which are either of ₹ 100 or ₹ 50 denominations. The number of ₹ 50 notes is

A) 55

B) 45

C) 34

D) 50

Q2859805 A is the sister of B, B is the brother of C, E is the brother of D while D is the daughter of C. Who is the niece of B?

A) C

B) E

C) D

D) A

Q2859600 The next number in the sequence 200, 183, 168, 155, 144, 135, 128, is

A) 123

B) 113

C) 117

D) 119

Q2859747 If the word "COMTEMPLATION" is coded as "5148396028714", then "POTENTIAL" can be coded as

A) 618343620

B) 618343270

C) 618348720

D) 618433720



Q2859822 Kapil is the brother of Nikhil and Sunil, Yamuna is the mother of Nikhil and Jawahar is the father of Kapil. Which one of the following relations is FALSE?

Score Obtained : 1.0 /

- A) Kapil is the son of Yamuna
- B) Yamuna is the wife of Jawahar
- C) Kapil is the son of Jawahar
- D) Kapil is the father of Sunil**

Q2859806 T is the son of P, S is the son of Q, T got married to R who is the daughter of Q. How is S related to T?

Score Obtained : 1.0 /

- A) Paternal Uncle
- B) Brother-in-law**
- C) Father-in-law
- D) Brother

Computer Fundamentals

Q2860322 Which input device of a computer is also known as tablet, can convert a signal from the television or camera into a series of numbers that could be stored in a computer?

Score Obtained : 1.0 /

- A) Optical Character Reader (OCR)
- B) Bar Code Reader
- C) Magnetic Ink Card Reader (MICR)
- D) Digitizer**

Q2860372 Which of the following shortcut key is used to move the cursor to the beginning of a line in a word document?

Score Obtained : 1.0 /

- A) END

B) HOME

C) ESC

D) PAGE UP

Q2860431 Which one of the following is responsible for controlling all the hardware components of computer system?

A) Application Software

B) Language Processor

C) Operating System

D) Database Management System

Q2860392 Which one of the following is NOT a valid version of Windows Operating System?

A) Windows 8

B) Windows 10

C) Windows 9

D) Windows 8.1

Q2860298 Which of the following is an output device?

A) Graphic Plotter

B) Joystick

C) Light pen

D) Bar Code Reader

Q2860432 Which one of the following protocol is NOT associated with delivery of email over internet?

- A) IMAP
 - B) FTP**
 - C) POP
 - D) SMTP
-

Q2860374 Which shortcut key is used to search for the topic in a Mozilla browser or Google Chrome?

- A) Ctrl + D
 - B) Ctrl + F**
 - C) Ctrl + E
 - D) Ctrl + Z
-

Q2860348 In Google Chrome, what is the functionality of the shortcut key given below?
Ctrl+U

- A) Displays Page sponsors
 - B) Displays Page address
 - C) Displays Page owners
 - D) Displays Page source code**
-

Q2860451 Which of the following is a well-known example of a network of networks?

- A) Internet**
- B) Metropolitan area network
- C) Campus area network
- D) Local area network

Q2860528 In MS Word, which technique is used to create a document that combines repetitive text elements with data taken from external data document?

Score Obtained : 1.0 / 1

- A)** Mail Merge
 - B) Envelopes
 - C) Print documents
 - D) Tracking
-

Q2860473 Which operating system allows multiple users to use the same computer at the same time and different times?

Score Obtained : 1.0 / 1

- A) Multiprocessing
 - B)** Multi-user
 - C) Multitasking
 - D) Real time
-

Q2860301 Which of the following is an input device?

Score Obtained : 1.0 / 1

- A) Speaker
 - B) Plotter
 - C)** Joystick
 - D) Projector
-

Q2860450 What is the full form of SSL?

Score Obtained : 0.0 / 1

- A) Switching Segment Layer
- B)** Secure Sockets Layer

Techofworld.In

- C) Secured Service Line
 - D) Secure Segment Layer
-

Q2860502 Which of the following type of database management technologies is used by Microsoft Access?

- A)** Relational Database Management System
 - B) Object Oriented Database Management System
 - C) Network Database Management System
 - D) Hierarchical Database Management System
-

Q2860515 Which of the following statements is FALSE about word processing software?

- A) Word processing software can insert elements from other software, such as illustrations or photographs
 - B) Word processing software can format text, such as font type, bolding, underlining or italicizing
 - C) Word processing software can create, edit, save and print documents
 - D)** Word processing software cannot correct spelling and grammar
-

General Science

Q2859193 The blue colour of the clear sky is due to which of the following optical phenomena?

- A)** Total Internal Reflection of light
 - B) Refraction of light
 - C) Dispersion of light
 - D)** Scattering of light
-

Q2859044 The flow of energy in an ecosystem can be explained with the help of:

- A) Hardy- Weinberg principle
 - B) Newton's Law of Gravity
 - C) Laws of Thermodynamics**
 - D) Blackman's Law of Limiting Factor
-

Q2858973 Which condition correctly illustrates electrorefining of impure copper?

- A) Pure copper is used as anode
 - B) Impure copper is used as cathode
 - C) A saturated solution of an electrolyte of CuSO_4 acidified with H_2SO_4 should be used**
 - D) Oxidation occurs at the cathode
-

Q2858949 Add a burning splint to a certain gas. If a popping sound is heard, the gas is

- A) Carbon dioxide
 - B) Oxygen
 - C) Hydrogen**
 - D) Nitrogen
-

Q2859217 1 light year is equivalent to

- A) 8.8×10^5 m**
 - B) 26.8×10^{25} m
 - C) 11.8×10^{18} m
 - D) 9.5×10^{15} m**
-

Q2859043 The members of class chlorophyceae in plants are commonly called

- A) brown algae
 - B) black algae
 - C) red algae
 - D) green algae**
-

Q2859198 Which among the following is the most effective electrical device employed to separate the particulate pollutants?

- A) Electrostatic precipitator**
 - B) Scrubber
 - C) Cyclone separator
 - D) Bag house filter
-

Q2859184 Which of the following celestial bodies can serve as time standards?

- A) Quasar
 - B) Asteroid
 - C) Comet
 - D) Pulsar**
-

Q2859036 Select the INCORRECT statement about wound healing in general.

- A) Red blood cells helps create collagen
- B) Fluid oozing from wound helps in cleaning the area
- C) White blood cells fight infections from germs
- D) Oxvaen is not essential durina healina**

Q2858972 What is the relationship between the rates of diffusion (r_1 and r_2) of two gases with molecular weights M_1 and M_2 ?

- A) $r_1/r_2=(M_1/M_2)^{1/2}$
- B) $r_1/r_2=(M_2/M_1)$
- C) $r_1/r_2=(M_2/M_1)^{1/2}$**
- D) $r_1/r_2=(M_2 \times M_1)^{1/2}$

Q2859080 Which of the following cell organelle helps in protein synthesis?

- A) Ribosomes**
- B) Peroxisomes
- C) Golgi complex
- D) Lysosomes

Q2859219 1 nanometer is equivalent to

- A) 10^{-12} m
- B) 10^{-6} m
- C) 10^{-3} m
- D) 10^{-9} m**

Q2859038 Which part of the stem in some varieties of cactus helps the stem to expand and contract depending on water availability?

- A) Ribs**

- B) Buds
 - C) Stigma
 - D) Stamen
-

Q2859003 Which of the statements CORRECTLY describes a medicine?

- A) Medicines may be considered as narcotic
 - B) All medicines are drugs but all drugs are not medicines**
 - C) All drugs are medicines but all medicines are not drugs
 - D) Medicines do not have any proper dose
-

Q2859000 Which of the following is a natural penicillin?

- A) Ampicillin
- B) Piperacillin
- C) Benzylpenicillin**
- D) Oxacillin