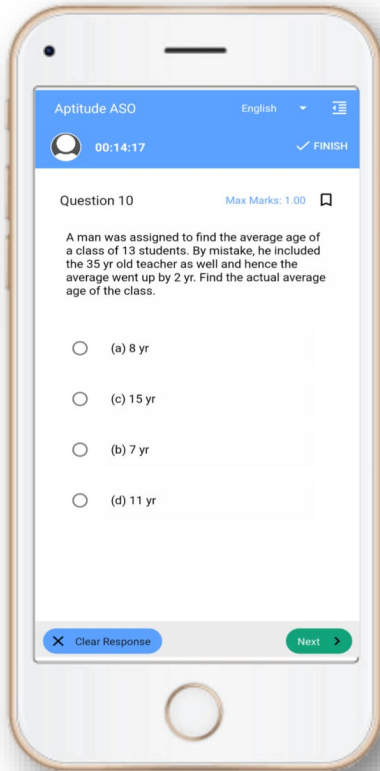


OSSC Exam- Mock Test, PYQS , Note,
E-Books Get Now On [App](#)



Tech Of World
Download App



[Click Here](#)

 **YouTube- [Click Here](#)**

 **Telegram- [Click Here](#)**

 **Facebook- [Click Here](#)**

Candidate Name

Techofworld.In

Assessment Name

: Techofworld.In

Set Code

Candidate Id

Mobile Number

* Correct Answer is in Bold and slightly bigger

* Candidate selected option is Underlined

Odia Language

Q2860699 ଯେଉଁ ପଦ କୌଣସି ନାମ କୁ ପ୍ରକାଶ କରେ ତାହାକୁ କ'ଣ କୁହାଯାଏ ?

Score Obtained : -0.25 / 1.0

- A)** ବିଶେଷ
 B) ବିଶେଷଣ
C) କର୍ତ୍ତା
 D) କ୍ରିୟା

Q2860756 କେଉଁଟି 'ବାପା' ର ଚତୁର୍ଥ ସମ ରୂପ ଅଟେ ?

Score Obtained : 0.0 / 1.0

- A) ବାଆ
 B) ବାବା
 C) ବପ୍ପା
D) ପିତା

Q2860689 ନିମ୍ନଲିଖିତ ମଧ୍ୟରୁ କେଉଁ ଶବ୍ଦ 'ନିର୍' ଉପସର୍ଗ ଯୋଗେ ଗଠିତ ?

Score Obtained : 1.0 / 1.0

- A)** ନିର୍ଣ୍ଣୟ
 B) ନିକ୍ଷେପ
 C) ନିକଟ
 D) ନିୟୁତ

Q2863109 ଅନୁଚ୍ଛେଦକୁ ଧ୍ୟାନ ଦେଇ ପଢ଼ନ୍ତୁ ଓ ନିମ୍ନଲିଖିତ ପ୍ରଶ୍ନ ଗୁଡ଼ିକର ସଠିକ୍ ଉତ୍ତର ବାଛନ୍ତୁ।

ଭାରତୀୟ ଦର୍ଶନରେ ଦୁଇଟି ପରମ୍ପରା ପ୍ରସିଦ୍ଧ ଓ ବହୁଚର୍ଚ୍ଚିତ । ବୈଦିକ ସାହିତ୍ୟର ସମ୍ବନ୍ଧିତ ଦର୍ଶନକୁ ଗୋଟିଏ

https://reports.merittracpariksha.com/rpsdob/rps/resreport.php?canid=355552107&ac=A033877_E233917

4/29/22, 7:39 PM

https://reports.merittracpariksha.com/rpsdob/rps/resreport.php?canid=355552107&ac=A033877_E233917

ପରମ୍ପରା ବୋଲି ଅଭିହିତ ହୋଇଥାଏ । ବୈଦିକ ପରମ୍ପରାକୁ 'ଆତ୍ମକ' ବୋଲି କହି ଦ୍ୱିତୀୟ ପରମ୍ପରାକୁ 'ନାତ୍ମକ' ବୋଲି ଅନେକ ଉଲ୍ଲେଖ କରିଥାନ୍ତି । ପରେ ବେଦକୁ ଜ୍ଞାନର ଅନ୍ୟତମ ସ୍ରୋତ ଭାବରେ ମାନୁଥିବା ଦର୍ଶନଗୁଡ଼ିକୁ ଆତ୍ମିକ କୁହାଗଲା ଓ ଯେଉଁ ମତଗୁଡ଼ିକ ବେଦକୁ ଜ୍ଞାନଭଣ୍ଡାର ବୋଲି ସ୍ୱୀକାର କଲେନାହିଁ ସେଗୁଡ଼ିକୁ ନାତ୍ମିକ କୁହାଗଲା । ଆତ୍ମିକ ଓ ନାତ୍ମିକ ବିଭାଗୀକରଣ ଇଶ୍ୱରଙ୍କ ଅସ୍ତିତ୍ୱ ନେଇ ନୁହେଁ, ଜ୍ଞାନର ସ୍ରୋତ ରୂପେ ବେଦର ମହତ୍ତ୍ୱକୁ ସ୍ୱୀକାର ଓ ଅସ୍ୱୀକାର ଉପରେ ପ୍ରତିଷ୍ଠିତ । ଯେଉଁମାନେ ବେଦର ପ୍ରାମାଣିକତାକୁ ସ୍ୱୀକାର କଲେ ସେମାନଙ୍କୁ ଆତ୍ମିକ କୁହାଗଲା ଓ ଅନ୍ୟପକ୍ଷରେ ବେଦର ପ୍ରାମାଣିକତାକୁ ଅସ୍ୱୀକାର କରିବା ଯୋଗୁଁ କେତେଗୁଡ଼ିଏ ଦର୍ଶନ ନାତ୍ମିକ ବୋଲି ଘୋଷିତ ହେଲେ । ତତ୍ତ୍ୱର ଚି.ଆର୍.ଭି. ମୂର୍ତ୍ତି ଭାରତରେ ଏ ଦୁଇଟି ପରମ୍ପରାର ଅସ୍ତିତ୍ୱକୁ ସ୍ୱୀକାର କରି ବୈଦିକ ପରମ୍ପରାକୁ ଆତ୍ମବାଦୀ ବୋଲି କହିଲେ ଓ ଅଣବୈଦିକ ପରମ୍ପରାକୁ ଅନାତ୍ମ ବା ନୈରାତ୍ମବାଦୀ କହିଲେ । ଆତ୍ମବାଦୀ ପରମ୍ପରା ଉପନିଷଦଗୁଡ଼ିକରେ ସେମାନଙ୍କର ତୁଙ୍ଗମା ଲାଭ କରିଥିଲେ ଓ ନୈରାତ୍ମବାଦୀମାନେ ବୌଦ୍ଧ ଚିନ୍ତନରେ ସେମାନଙ୍କର ଶୀର୍ଷସ୍ଥାନ ଅଧିକାର କରିଥିଲେ । କିନ୍ତୁ କଥାଟିର ଏପରି ସରଳୀକରଣ ଭାରତୀୟ ଦର୍ଶନକୁ ଠିକ୍‌ରୂପେ ପରିଚୟ ଦେଇପାରେନାହିଁ । ବେଦ କହିଲେ କେବଳ ଉପନିଷଦଗୁଡ଼ିକୁ ବୁଝାଯାଏନାହିଁ । ଚାରୋଟିଯାକ ବେଦରେ ସଂହିତା, ବ୍ରାହ୍ମଣ, ଆରଣ୍ୟକ ଓ ଉପନିଷଦ ବିଚାର ଦେଖିବାକୁ ମିଳେ ।

Q2863148 'ଜ୍ଞାନଭଣ୍ଡାର' - ଏହା କେଉଁ ସମାସ?

Score Obtained : 0.0 / 1

- A) ଚତୁର୍ଥୀ ତତ୍ପୁରୁଷ
B) ପଞ୍ଚମୀ ତତ୍ପୁରୁଷ
C) ଷଷ୍ଠୀ ତତ୍ପୁରୁଷ
D) ତୃତୀୟା ତତ୍ପୁରୁଷ

Q2863144 ଭାରତୀୟ ଦର୍ଶନରେ କେତୋଟି ପରମ୍ପରା ଅଛି?

Score Obtained : 1.0 / 1

- A) ତିନୋଟି
B) ଗୋଟିଏ
C) ଦୁଇଟି
D) ଚାରୋଟି

Q2863147 'ସନ୍ନିବିଷ୍ଣୁ' ର ସନ୍ନିବିଷ୍ଣୁତ୍ୱ କଲେ କ'ଣ ହେବ?

Score Obtained : 1.0 / 1

- A) ସ + ନିବିଷ୍ଣୁ
B) ସମ୍ + ନିବିଷ୍ଣୁ
C) ସଦ୍ + ନିବିଷ୍ଣୁ
D) ସନ୍ + ନିବିଷ୍ଣୁ

4/29/22, 7:39 PM

https://reports.merittracpariksha.com/rpsdob/rps/resreport.php?canid=355552107&ac=A033877_E233917

ପରମ୍ପରା ବୋଲି ଅଭିହିତ ହୋଇଥାଏ । ବୈଦିକ ପରମ୍ପରାକୁ 'ଆଷ୍ଟକ' ବୋଲି କହି ପ୍ରତୀୟ ପରମ୍ପରାକୁ 'ନାଷ୍ଟକ' ବୋଲି ଅନେକ ଉଲ୍ଲେଖ କରିଥାନ୍ତି । ପରେ ବେଦକୁ ଜ୍ଞାନର ଅନ୍ୟତମ ସ୍ରୋତ ଭାବରେ ମାନୁଥିବା ଦର୍ଶନଗୁଡ଼ିକୁ ଆଷ୍ଟିକ କୁହାଗଲା ଓ ଯେଉଁ ମତଗୁଡ଼ିକ ବେଦକୁ ଜ୍ଞାନଭଣ୍ଡାର ବୋଲି ସ୍ୱୀକାର କଲେନାହିଁ ସେଗୁଡ଼ିକୁ ନାଷ୍ଟିକ କୁହାଗଲା । ଆଷ୍ଟିକ ଓ ନାଷ୍ଟିକ ବିଭାଗୀକରଣ ଇଶ୍ୱରଙ୍କ ଅସ୍ତିତ୍ୱ ନେଇ ନୁହେଁ, ଜ୍ଞାନର ସ୍ରୋତ ରୂପେ ବେଦର ମହତ୍ତ୍ୱକୁ ସ୍ୱୀକାର ଓ ଅସ୍ୱୀକାର ଉପରେ ପ୍ରତିଷ୍ଠିତ । ଯେଉଁମାନେ ବେଦର ପ୍ରାମାଣିକତାକୁ ସ୍ୱୀକାର କଲେ ସେମାନଙ୍କୁ ଆଷ୍ଟିକ କୁହାଗଲା ଓ ଅନ୍ୟପକ୍ଷରେ ବେଦର ପ୍ରାମାଣିକତାକୁ ଅସ୍ୱୀକାର କରିବା ଯୋଗୁଁ କେତେଗୁଡ଼ିଏ ଦର୍ଶନ ନାଷ୍ଟିକ ବୋଲି ଘୋଷିତ ହେଲେ । ତତ୍ପରେ ଚି.ଆର୍.ଭି. ମୂର୍ତ୍ତି ଭାରତରେ ଏ ଦୁଇଟି ପରମ୍ପରାର ଅସ୍ତିତ୍ୱକୁ ସ୍ୱୀକାର କରି ବୈଦିକ ପରମ୍ପରାକୁ ଆତ୍ମବାଦୀ ବୋଲି କହିଲେ ଓ ଅଣବୈଦିକ ପରମ୍ପରାକୁ ଅନାତ୍ମ ବା ନୈରାତ୍ମବାଦୀ କହିଲେ । ଆତ୍ମବାଦୀ ପରମ୍ପରା ଉପନିଷଦଗୁଡ଼ିକରେ ସେମାନଙ୍କର ତୁଙ୍ଗମା ଲାଭ କରିଥିଲେ ଓ ନୈରାଶ୍ୟବାଦୀମାନେ ବୌଦ୍ଧ ଚିନ୍ତନରେ ସେମାନଙ୍କର ଶୀଘ୍ରମାନ ଅଧିକାର କରିଥିଲେ । କିନ୍ତୁ କଥାଟିର ଏପରି ସରଳୀକରଣ ଭାରତୀୟ ଦର୍ଶନକୁ ଠିକ୍‌ରୂପେ ପରିଚୟ ଦେଇପାରେନାହିଁ । ବେଦ କହିଲେ କେବଳ ଉପନିଷଦଗୁଡ଼ିକୁ ବୁଝାଯାଏନାହିଁ । ଚାରୋଟିଯାକ ବେଦରେ ସଂହିତା, ବ୍ରାହ୍ମଣ, ଆରଣ୍ୟକ ଓ ଉପନିଷଦ ବିଚାର ଦେଖିବାକୁ ମିଳେ ।

Q2863148 'ଜ୍ଞାନଭଣ୍ଡାର' - ଏହା କେଉଁ ସମାସ?

Score Obtained : 0.0 / 1.0

- A) ଚତୁର୍ଥୀ ତତ୍ପରୁଷ
B) ପଞ୍ଚମୀ ତତ୍ପରୁଷ
C) ଷଷ୍ଠୀ ତତ୍ପରୁଷ
D) ତୃତୀୟା ତତ୍ପରୁଷ

Q2863144 ଭାରତୀୟ ଦର୍ଶନରେ କେତୋଟି ପରମ୍ପରା ଅଛି?

Score Obtained : 1.0 / 1.0

- A) ତିନୋଟି
B) ଗୋଟିଏ
C) ଦୁଇଟି
D) ଚାରୋଟି

Q2863147 'ସନ୍ନିବିଷ୍ଣୁ' ର ସନ୍ନିବିଚ୍ଛେଦ କଲେ କ'ଣ ହେବ?

Score Obtained : 1.0 / 1.0

- A) ସ + ନିବିଷ୍ଣୁ
B) ସମ୍ + ନିବିଷ୍ଣୁ
C) ସଦ୍ + ନିବିଷ୍ଣୁ
D) ସନ୍ + ନିବିଷ୍ଣୁ

Q2863146 ବେଦ କହିଲେ କେବଳ କାହାକୁ ବୁଝାଏ ନାହିଁ ?

- A) ଗୀତା
B) ଉପନିଷଦ
 C) ପୁରାଣ
 D) ଶାସ୍ତ୍ର

Q2863145 'ଆସ୍ତିକ' କେଉଁମାନଙ୍କୁ କୁହାଗଲା ?

- A) ଯେ ଗୁରୁଙ୍କୁ ସ୍ୱୀକାର କଲେ
 B) ଯେ ବିଜ୍ଞାନକୁ ସ୍ୱୀକାର କଲେ
C) ଯେ ବେଦକୁ ସ୍ୱୀକାର କଲେ
 D) ଯେ ଈଶ୍ୱରଙ୍କୁ ଅସ୍ୱୀକାର କଲେ

Q2860779 'ଲେଖୁଥିବା' - ଏହି କ୍ରିୟା ପଦର ପ୍ରେରଣାର୍ଥକ କ୍ରିୟା କ'ଣ ହେବ ?

- A) ଲେଖୁଥିବା
B) ଲେଖିବା
 C) ଲେଖିଛି
D) ଲେଖାଉଥିବା

Q2860758 'ରାମ ଗୋଟିଏ ହୋକା ପିଲା ।' ରେଖାଙ୍କିତ ଶବ୍ଦଟି କେଉଁ ଶ୍ରେଣୀଭୁକ୍ତ ?

- A) ବୈଦେଶିକ
 B) ତତ୍ ସମ
 C) ତତ୍ ଭବ
D) ଦେଶଜ

Q2860717 ନିମ୍ନଲିଖିତ କେଉଁ ପୂର୍ବପଦଟି ଏକ ଅବ୍ୟୟ ?

- A) ଅପି
B) ପୁନଃ

Q2863146 ବେଦ କହିଲେ କେବଳ କାହାକୁ ବୁଝାଏ ନାହିଁ ?

- A) ଗୀତା
B) ଉପନିଷଦ
 C) ପୁରାଣ
 D) ଶାସ୍ତ୍ର

Q2863145 'ଆସ୍ତିକ' କେଉଁମାନଙ୍କୁ କୁହାଗଲା ?

- A) ଯେ ଗୁରୁଙ୍କୁ ସ୍ୱୀକାର କଲେ
 B) ଯେ ବିଜ୍ଞାନକୁ ସ୍ୱୀକାର କଲେ
C) ଯେ ବେଦକୁ ସ୍ୱୀକାର କଲେ
 D) ଯେ ଈଶ୍ୱରଙ୍କୁ ଅସ୍ୱୀକାର କଲେ

Q2860779 'ଲେଖୁଥିବା' - ଏହି କ୍ରିୟା ପଦର ପ୍ରେରଣାର୍ଥକ କ୍ରିୟା କ'ଣ ହେବ ?

- A) ଲେଖୁଥିବା
 B) ଲେଖିବା
 C) ଲେଖିଛି
D) ଲେଖାଉଥିବା

Q2860758 'ରାମ ଗୋଟିଏ ହୋକା ପିଲା ।' ରେଖାଙ୍କିତ ଶବ୍ଦଟି କେଉଁ ଶ୍ରେଣୀଭୁକ୍ତ ?

- A) ବୈଦେଶିକ
 B) ତତ୍ ସମ
 C) ତତ୍ ଭବ
D) ଦେଶଜ

Q2860717 ନିମ୍ନଲିଖିତ କେଉଁ ପୂର୍ବପଦଟି ଏକ ଅବ୍ୟୟ ?

- A) ଅପି
B) ପୁନଃ

- C) ଅନୁ
D) ଅଭି
-

Q2860764 ନିମ୍ନଲିଖିତ କେଉଁ ଶବ୍ଦଟି 'ପୁରସ୍କ' ଅବ୍ୟୟ ଦ୍ଵାରା ଗଠିତ ?

- A) ପ୍ରତିପକ୍ଷ
B) ପ୍ରତିମୂର୍ତ୍ତି
C) ପ୍ରତିକୃତି
D) ପୁରୋଭାଗ
-

Q2860685 ଧନିର ଲିଖିତ ରୂପକୁ କ'ଣ କୁହାଯାଏ ?

- A) ଶବ୍ଦ
B) ଭାଷା
C) ବର୍ଣ୍ଣ
D) ମାତ୍ରା
-

Q2860808 ଶୁ+ଅନ = ?

- A) ଶର୍ବଣ
B) ଶ୍ରବଣ
C) ଶ୍ରବଣ
D) ଶ୍ରୀବଣ
-

Q2860711 ନିମ୍ନଲିଖିତ ମଧ୍ୟରୁ କେଉଁଟି ଏକ ତତ୍ ସମ ଶବ୍ଦ ଅଟେ ?

- A) ଗଭୀର**
B) ଭଉଣୀ
C) ଆଠ
D) ପିଠି
-

- C) ଅନୁ
D) ଅଭି
-

Q2860764 ନିମ୍ନଲିଖିତ କେଉଁ ଶବ୍ଦଟି 'ପୁରସ୍କ' ଅବ୍ୟୟ ଦ୍ଵାରା ଗଠିତ ?

- A) ପ୍ରତିପକ୍ଷ
B) ପ୍ରତିମୂର୍ତ୍ତି
C) ପ୍ରତିକୃତି
D) ପୁରୋଭାଗ
-

Q2860685 ଧନିର ଲିଖିତ ରୂପକୁ କ'ଣ କୁହାଯାଏ ?

- A) ଶବ୍ଦ
B) ଭାଷା
C) ବର୍ଣ୍ଣ
D) ମାତ୍ରା
-

Q2860808 ଶୁ+ଅନ = ?

- A) ଶର୍ବଣ
B) ଶ୍ରବଣ
C) ଶ୍ରବଣ
D) ଶ୍ରୀବଣ
-

Q2860711 ନିମ୍ନଲିଖିତ ମଧ୍ୟରୁ କେଉଁଟି ଏକ ତତ୍ ସମ ଶବ୍ଦ ଅଟେ ?

- A) ଗଭୀର**
B) ଭଉଣୀ
C) ଆଠ
D) ପିଠି
-

English Language

<https://reports.merittracpariksha.com/rpsdob/rps/resreport.php?canid=355552107&ac=AI>

4/29/22, 7:39 PM

https://reports.merittracpariksha.com/rpsdob/rps/resreport.php?canid=355552107&ac=A033877_E233917

English Language

Q2860181 Select the option that is grammatically and logically the most appropriate form of the sentence given:

Jack won't be going to come to home next week.

Score Obtained : 0.0 / 1.0

- A) Jack won't going to come to home next week.
- B) Jack wont be going to come to home in next week.
- C) Jack won't be coming to home last week.
- D) Jack won't be coming home next week.**

Q2860089 Read the passage carefully and answer the questions given below it:

There is a place forty kilometres north-east of Portland, Victoria, which makes for an unusual visit. It is Lake Condah. Here are to be found remains of aboriginal settlements: the circular stone bases of several hundred huts, rock-lined water channels, and stone tools chipped from rock not normally found in the area. One of the attractions of Lake Condah long ago was its fish and the most startling evidence of aboriginal technology and engineering to be found there are the systems built to trap fish.

Water courses had been constructed by redirecting streams, building stone sides and even scraping out new channels. At strategic spots, they piled rocks across the water courses to create weirs and build funnels to channel eels and fish into conical baskets. This is an eel-fishing technique which has hardly changed to the present day. Beside some of the larger traps, there are the outlines of rectangular, stone-lined ponds, probably to hold fish and keep them fresh.

On the bluffs overlooking the lake, stone circles are all that remain of ancient dwellings. Not all of the stones were quarried locally. The huts vary in size, but all have gaps for doorways located on the lee side, away from the prevailing wind. One theory is that the stone walls were only waist to shoulder high, with the top roofed by branches and possibly packed with mud.

The site presents a picture of a semi-settled people quite different from the stereotype of nomadic hunter-gatherers of the desert.

Q2860094 What does the word 'stereotype' as used in the last paragraph mean?

Score Obtained : 0.0 / 1.0

- A) customary view**
- B) opposite depiction
- C) detached culture
- D) popular strategy

Q2860090 Lake Condah is perceived as unusual because

4/29/22, 7:39 PM

https://reports.merittracpariksha.com/rpsdob/rps/resreport.php?canid=355552107&ac=A033877_E233917

English Language

Q2860181 Select the option that is grammatically and logically the most appropriate form of the sentence given:

Jack won't be going to come to home next week.

Score Obtained : 0.0 / 1.0

- A) Jack won't going to come to home next week.
- B) Jack wont be going to come to home in next week.
- C) Jack won't be coming to home last week.
- D) Jack won't be coming home next week.**

Q2860089 Read the passage carefully and answer the questions given below it:

There is a place forty kilometres north-east of Portland, Victoria, which makes for an unusual visit. It is Lake Condah. Here are to be found remains of aboriginal settlements: the circular stone bases of several hundred huts, rock-lined water channels, and stone tools chipped from rock not normally found in the area. One of the attractions of Lake Condah long ago was its fish and the most startling evidence of aboriginal technology and engineering to be found there are the systems built to trap fish.

Water courses had been constructed by redirecting streams, building stone sides and even scraping out new channels. At strategic spots, they piled rocks across the water courses to create weirs and build funnels to channel eels and fish into conical baskets. This is an eel-fishing technique which has hardly changed to the present day. Beside some of the larger traps, there are the outlines of rectangular, stone-lined ponds, probably to hold fish and keep them fresh.

On the bluffs overlooking the lake, stone circles are all that remain of ancient dwellings. Not all of the stones were quarried locally. The huts vary in size, but all have gaps for doorways located on the lee side, away from the prevailing wind. One theory is that the stone walls were only waist to shoulder high, with the top roofed by branches and possibly packed with mud.

The site presents a picture of a semi-settled people quite different from the stereotype of nomadic hunter-gatherers of the desert.

Q2860094 What does the word 'stereotype' as used in the last paragraph mean?

Score Obtained : 0.0 / 1.0

- A) customary view**
- B) opposite depiction
- C) detached culture
- D) popular strategy

Q2860090 Lake Condah is perceived as unusual because

Score Obtained : 0.0 / 1.0

- A)** the people who'd lived there had surprising engineering skills.
B) it is located very close to a main town
C) the remains of buildings can still be seen
D) some of the building stone was imported
-

Q2860093 Which of the following statements about the ancient dwellings is FALSE?

Score Obtained

- A) They had gaps for doorways
B) The walls were waist to shoulder high
C) The doorways faced the stormy side
D) They varied in size
-

Q2860092 What is another word for 'prevailing' as used in the passage?

Score Obtained

- A) Weird
B) Uncommon
C) Usual
D) Infrequent
-

Q2860091 Which of the following methods was NOT used to construct water courses?

Score Obtained

- A) Scraping out new channels
B) Diverting streams
C) Piling rocks
D) Building stone sides
-

Q2860170 In each of the questions below is a sentence followed by 4 idiomatic expressions. You are required to choose the one that could be used in the sentence.
Henry always studies for his exams at the last minute.

Score Obtained

- A) Act one's age
B) At the eleventh hour
C) Against the clock
D) An Achilles heel
-

Q2860272 Fill in the blanks with the correct option:

<https://reports.merittracpariksha.com/rosdob/ros/resreport.php?canid=355552107&ac=A033877> E233917

4/29/22, 1:39 PM

https://reports.merittracpariksna.com/rps00b/rps/resreport.php?canid=35555210/&ac=AU3387/_E23391/

- A)** the people who'd lived there had surprising engineering skills.
 - B) it is located very close to a main town
 - C) the remains of buildings can still be seen
 - D) some of the building stone was imported
-

Q2860093 Which of the following statements about the ancient dwellings is FALSE?

Score Obtained : 0.0

- A) They had gaps for doorways
 - B) The walls were waist to shoulder high
 - C)** The doorways faced the stormy side
 - D) They varied in size
-

Q2860092 What is another word for 'prevailing' as used in the passage?

Score Obtained : 0.0

- A) Weird
 - B) Uncommon
 - C)** Usual
 - D) Infrequent
-

Q2860091 Which of the following methods was NOT used to construct water courses?

Score Obtained : 0.0

- A) Scraping out new channels
 - B) Diverting streams
 - C)** Piling rocks
 - D) Building stone sides
-

Q2860170 In each of the questions below is a sentence followed by 4 idiomatic expressions. You are required to choose the one that could be used in the sentence.
Henry always studies for his exams at the last minute.

Score Obtained : 0.0

- A) Act one's age
 - B)** At the eleventh hour
 - C) Against the clock
 - D) An Achilles heel
-

Q2860272 Fill in the blanks with the correct option:

4/29/22, 1:39 PM

https://reports.merittracpariksna.com/rpsdob/rps/resreport.php?canid=355552107&ac=A033877_E233917

She expresses about woman in _____ prose.

Score Obtained : 1.0 / 1.0

A) Hers

B) Her

C) It

D) Them

Q2860208 Which of the segment(s) has/have errors: [a] While harder skills [b] can be learned and develop, [c] the soft skills of a potential hiree [d] are what could make or bake the company.

Score Obtained : 0.0 / 1.0

A) a, b & c

B) b, c & d

C) a, b, c & d

D) a, b & d

Q2860260 Choose the antonym of the underlined word.

Catherine's oily hair shined a lot during her dance performance.

Score Obtained : 0.0 / 1.0

A) Viscous

B) Greasy

C) Unctuous

D) dry

Q2860153 Given below is a sentence/phrase followed by four words. Choose the one that best describes the sentence/phrase.

Go on board a ship or aircraft

Score Obtained : 0.0 / 1.0

A) Endure

B) Embark

C) Esteem

D) Excess

Q2860191 Change the voice of the following sentence: She never understood me, whenever I said something.

Score Obtained : 0.0 / 1.0

A) Whenever I said something, she was never understanding me.

B) She was not understanding me whenever I was saying something.

C) Whenever I said something, I was never understood by her.

https://reports.merittracpariksna.com/rpsdob/rps/resreport.php?canid=355552107&ac=A033877_E233917

A) Hers

B) Her

C) It

D) Them

Q2860208 Which of the segment(s) has/have errors: [a] While harder skills [b] can be learned and develop, [c] the soft skills of a potential hiree [d] are what could make or bake the company.

Score Obtained : 0.0 / 1.0

A) a, b & c

B) b, c & d

C) a, b, c & d

D) a, b & d

Q2860260 Choose the antonym of the underlined word.
Catherine's oily hair shined a lot during her dance performance.

Score Obtained : 0.0 / 1.0

A) Viscous

B) Greasy

C) Unctuous

D) dry

Q2860153 Given below is a sentence/phrase followed by four words. Choose the one that best describes the sentence/phrase.
Go on board a ship or aircraft

Score Obtained : 0.0 / 1.0

A) Endure

B) Embark

C) Esteem

D) Excess

Q2860191 Change the voice of the following sentence: She never understood me, whenever I said something.

Score Obtained : 0.0 / 1.0

A) Whenever I said something, she was never understanding me.

B) She was not understanding me whenever I was saying something.

C) Whenever I said something, I was never understood by her.

<https://reports.meritracpariksha.com/rpsdob/rps/resreport.php?canid=355552107&ac=A033877 E233917>

- C) Whenever I said something, I was never understood by her.
D) She whenever I said something had never understood me.
-

Q2860246 Identify the synonym of the italicised word:

At times the most unlikely individuals manage to *collaborate* effectively.

Score Obtained : 0.0

- A) Judge
B) Scold
C) Amalgamate
D) Excel
-

Q2860140 You will find a sentence using direct speech (words actually spoken) followed by four options. You are required to choose the one that is the correct form of the sentence in indirect/reported speech. Rita said, "I'll be going on a trip to Russia next year."

Score Obtained : 0.0

- A) Rita said she will be going on a trip to Russia next year
B) Rita said that she would have gone on a trip to Russia the following year
C) Rita said that she would be going on a trip to Russia the following year
D) Rita said that she would have gone on a trip to Russia next year
-

Q2860235 Rearrange the jumbled words to form a meaningful sentence:

there / dichotomy / is / between / often / a / what / politicians/ do / say/what / and / they

Score Obtained : 0.0

- A) There what they do is often and a dichotomy between what politicians say.
B) There is often a dichotomy between what politicians say and what they do.
C) There politicians say is often a dichotomy between what and what they do.
D) Between what politicians say there what they do is often and a dichotomy.
-

Current Affairs and General Knowledge

Q2859403 Who was the pioneer of Modern Hindi literature and known as the 'Father of Modern Hindi Literature and Hindi Theatre'?

Score Obtained : 0.0

- A) Ramchandra Shukla
B) Ramdhari Singh Dinkar
C) Bhartendu Harishchandra
D) Sumitranandan Pant

- Whenever I said something, I was never understood by her.
D) She whenever I said something had never understood me.

Q2860246 Identify the synonym of the italicised word:

At times the most unlikely individuals manage to *collaborate* effectively.

Score Obtained : 0.

- A) Judge
B) Scold
C) Amalgamate
D) Excel

Q2860140 You will find a sentence using direct speech (words actually spoken) followed by four options. You are required to choose the one that is the correct form of the sentence in indirect/reported speech. Rita said, "I'll be going on a trip to Russia next year."

Score Obtained : 0.

- A) Rita said she will be going on a trip to Russia next year
B) Rita said that she would have gone on a trip to Russia the following year
C) Rita said that she would be going on a trip to Russia the following year
D) Rita said that she would have gone on a trip to Russia next year

Q2860235 Rearrange the jumbled words to form a meaningful sentence:

there / dichotomy / is / between / often / a / what / politicians / do / say / what / and / they

Score Obtained : 0.

- A) There what they do is often a dichotomy between what politicians say.
B) There is often a dichotomy between what politicians say and what they do.
C) There politicians say is often a dichotomy between what and what they do.
D) Between what politicians say there what they do is often and a dichotomy.

Current Affairs and General Knowledge

Q2859403 Who was the pioneer of Modern Hindi literature and known as the 'Father of Modern Hindi Literature and Hindi Theatre'?

Score Obtained : 0.

- A) Ramchandra Shukla
B) Ramdhari Singh Dinkar
C) Bhartendu Harishchandra
D) Sumitranandan Pant

Q2859481 Which among the following terms have been added through a Constitutional Amendment in the Preamble of Indian Constitution?

Score Obtained : 0.0 / 1.0

- A) Sovereign and Republic
- B) Socialist and Secular**
- C) Secular and Democratic
- D) Democratic and Republic

Q2859243 The debut novel of which of the following Union Ministers of India released in November 2021 is titled as 'Lal Salaam'?

Score Obtained : 0.0 / 1.0

- A) Smriti Irani**
- B) Pratima Bhoomik
- C) Bharati Pawar
- D) Meenakshi Lekhi

Q2859254 In September 2021, Ministry of Defence signed a contract with which of the following companies for acquisition of 56 C-295MW transport aircraft for the Indian Air Force?

Score Obtained : 0.0 / 1.0

- A) Airbus Defence and Space, Spain**
- B) Dassault Aviation, France
- C) The Boeing Company, USA
- D) Lockheed Martin Corporation, USA

Q2859508 Which among the following is the Regional Political Party of India?

Score Obtained : 1.0 / 1.0

- A) BJP
- B) BSP
- C) INC
- D) AIADMK**

Q2859532 Which of the following terms in the Parliament of India means 'Termination of a sitting of the House without any definite date being fixed for the next sitting'?

Score Obtained : -0.25 / 1.0

- A) Resolution**
- B) Prorogation

https://reports.merittracpariksha.com/rpsdob/rps/resreport.php?canid=355552107&ac=A033877_E233917

Q2859481 Which among the following terms have been added through a Constitutional Amendment in the Preamble of Indian Constitution?

Score Obtained : 0.0 / 1.0

- A) Sovereign and Republic
- B) Socialist and Secular**
- C) Secular and Democratic
- D) Democratic and Republic

Q2859243 The debut novel of which of the following Union Ministers of India released in November 2021 is titled as 'Lal Salaam'?

Score Obtained : 0.0 / 1.0

- A) Smriti Irani**
- B) Pratima Bhoumik
- C) Bharati Pawar
- D) Meenakshi Lekhi

Q2859254 In September 2021, Ministry of Defence signed a contract with which of the following companies for acquisition of 56 C-295MW transport aircraft for the Indian Air Force?

Score Obtained : 0.0 / 1.0

- A) Airbus Defence and Space, Spain**
- B) Dassault Aviation, France
- C) The Boeing Company, USA
- D) Lockheed Martin Corporation, USA

Q2859508 Which among the following is the Regional Political Party of India?

Score Obtained : 1.0 / 1.0

- A) BJP
- B) BSP
- C) INC
- D) AIADMK**

Q2859532 Which of the following terms in the Parliament of India means 'Termination of a sitting of the House without any definite date being fixed for the next sitting'?

Score Obtained : -0.25 / 1.0

- A) Resolution**
- B) Prorogation

https://reports.merittracpariksha.com/rpsdob/rps/resreport.php?canid=355552107&ac=A033877_E233917

- B) Prolegation
 - C) Point of order
 - D) Adjournment sine die**
-

Q2859322 Which of the following is an INCORRECT answer pertaining to the world heritage sites located in Madhya Pradesh?

Score Obtained : 1.0 / 1.0

- A) Rock Shelters of Bhimbetka
 - B) Buddhist Monuments at Sanchi
 - C) Khajuraho Group of Monuments
 - D) Hampi Group of Monuments**
-

Q2859343 Which of the following river originates near the Hills of Darjeeling?

Score Obtained : 0.0 / 1.0

- A) Mahananda**
 - B) Godavari
 - C) Jhelum
 - D) Kaveri
-

Q2859531 The division of powers between Centre and States is notified through Union list, State list and Concurrent list. All the three lists are part of which schedule of the Constitution of India?

Score Obtained : -0.25 / 1.0

- A) Schedule XI
 - B) Schedule VIII**
 - C) Schedule III
 - D) Schedule VII**
-

Q2859399 Who among the following was proclaimed as Empress of India during the years 1876-1877, to take over the power to govern India from East India Company?

Score Obtained : 1.0 / 1.0

- A) Queen Elizabeth
- B) King George I
- C) Queen Victoria**
- D) King George II

- B) Prolegation
C) Point of order
D) Adjournment sine die
-

Q2859322 Which of the following is an INCORRECT answer pertaining to the world heritage sites located in Madhya Pradesh?

Score Obtained : 1.0 / 1.0

- A) Rock Shelters of Bhimbetka
B) Buddhist Monuments at Sanchi
C) Khajuraho Group of Monuments
D) Hampi Group of Monuments
-

Q2859343 Which of the following river originates near the Hills of Darjeeling?

Score Obtained : 0.0 / 1.0

- A) Mahananda**
B) Godavari
C) Jhelum
D) Kaveri
-

Q2859531 The division of powers between Centre and States is notified through Union list, State list and Concurrent list. All the three lists are part of which schedule of the Constitution of India?

Score Obtained : -0.25 / 1.0

- A) Schedule XI
B) Schedule VIII
C) Schedule III
D) Schedule VII
-

Q2859399 Who among the following was proclaimed as Empress of India during the years 1876-1877, to take over the power to govern India from East India Company?

Score Obtained : 1.0 / 1.0

- A) Queen Elizabeth
B) King George I
C) Queen Victoria
D) King George II

4/29/22, 1:39 PM

https://reports.merittracpariksna.com/rpsdoh/rps/resreport.php?canid=355552107&ac=A033877_E233917

Q2859533 As per Article 32 of our Indian Constitution, how many type of WRITS we have?

Score Obtained : -0.25 / 1.0

- A) 4
- B) 6
- C) 7
- D) 5**

Q2859342 The western southern part of the coastline in India is known by which of the following names?

Score Obtained : 1.0 / 1.0

- A) Circar Coast
- B) Coramondel Coast
- C) Malabar Coast**
- D) Kollam Coast

Q2859245 Which of the following cricket teams won the ICC T20 World Cup 2021 hosted by Oman and UAE?

Score Obtained : 1.0 / 1.0

- A) West Indies
- B) Australia**
- C) Pakistan
- D) New Zealand

Q2859405 The World famous Ellora Caves located in the state of Maharashtra, was built by the rulers of which dynasty?

Score Obtained : -0.25 / 1.0

- A) Haryanka Dynasty
- B) Kanva Dynasty
- C) Sunga Dynasty
- D) Rashtrakuta Dynasty**

Q2859478 The Chief Minister of a particular state announced ban on Liquor in that state. This is an example for implementation of which of the following options?

Score Obtained : -0.25 / 1.0

- A) Fundamental duties
- B) Directive Principles**
- C) Fundamental Rights
- D) Emergency provisions

https://reports.merittracpariksna.com/rpsdoh/rps/resreport.php?canid=355552107&ac=A033877_E233917

4/29/22, 7:39 PM

https://reports.merittracpariksha.com/rpsdob/rps/resreport.php?canid=355552107&ac=A033877_E233917

Q2859533 As per Article 32 of our Indian Constitution, how many type of WRITS we have?

Score Obtained : -0.25 /

- A) 4
- B) 6
- C) 7
- D) 5**

Q2859342 The western southern part of the coastline in India is known by which of the following names?

Score Obtained : 1.0 /

- A) Circar Coast
- B) Coramondel Coast
- C) Malabar Coast**
- D) Kollam Coast

Q2859245 Which of the following cricket teams won the ICC T20 World Cup 2021 hosted by Oman and UAE?

Score Obtained : 1.0 /

- A) West Indies
- B) Australia**
- C) Pakistan
- D) New Zealand

Q2859405 The World famous Ellora Caves located in the state of Maharashtra, was built by the rulers of which dynasty?

Score Obtained : -0.25 /

- A) Haryanka Dynasty
- B) Kanva Dynasty
- C) Sunga Dynasty
- D) Rashtrakuta Dynasty**

Q2859478 The Chief Minister of a particular state announced ban on Liquor in that state. This is an example for implementation of which of the following options?

Score Obtained : -0.25 /

- A) Fundamental duties
- B) Directive Principles**
- C) Fundamental Rights
- D) Emergency provisions

https://reports.merittracpariksha.com/rpsdob/rps/resreport.php?canid=355552107&ac=A033877_E233917

Q2859480 The Constitution (One Hundred and First Amendment) Act, 2016 is related to which of the following options?

Score Obtained : 1.0 / 1.0

- A) National Commission for Backward Classes
- B) Goods and Services Tax**
- C) Education of Children
- D) Anti-Defection Law

Q2859477 Which of the following options provide details regarding the acquisition and determination of Indian citizenship?

Score Obtained : 0.0 / 1.0

- A) Article 11 of the Indian Constitution
- B) Part III of the Indian Constitution
- C) The Citizenship Act, 1955**
- D) Article 12 of the Indian Constitution

Q2859313 Pakistan shares border with how many Indian states?

Score Obtained : 1.0 / 1.0

- A) Seven
- B) Four**
- C) Six
- D) Five

Q2859262 On 15th August 2021, Prime Minister Narendra Modi announced a 100-lakh crore national master plan for holistic infrastructure development in India. Identify the name of this scheme.

Score Obtained : -0.25 / 1.0

- A) Gati Shakti scheme**
- B) MURDA scheme
- C) SVANidhi scheme
- D) UDAN scheme**

Q2859404 The popular novel 'Chandrakanta' that marked a great milestone in Hindi language and literature was authored by

Score Obtained : 0.0 / 1.0

- A) Maithili Sharan Gupt

Q2859480 The Constitution (One Hundred and First Amendment) Act, 2016 is related to which of the following options?

Score Obtained : 1.0 / 1.0

- A) National Commission for Backward Classes
- B) Goods and Services Tax**
- C) Education of Children
- D) Anti-Defection Law

Q2859477 Which of the following options provide details regarding the acquisition and determination of Indian citizenship?

Score Obtained : 0.0 / 1.0

- A) Article 11 of the Indian Constitution
- B) Part III of the Indian Constitution
- C) The Citizenship Act, 1955**
- D) Article 12 of the Indian Constitution

Q2859313 Pakistan shares border with how many Indian states?

Score Obtained : 1.0 / 1.0

- A) Seven
- B) Four**
- C) Six
- D) Five

Q2859262 On 15th August 2021, Prime Minister Narendra Modi announced a 100-lakh crore national master plan for holistic infrastructure development in India. Identify the name of this scheme.

Score Obtained : -0.25 / 1.0

- A) Gati Shakti scheme**
- B) MURDA scheme
- C) SVANidhi scheme
- D) UDAN scheme**

Q2859404 The popular novel 'Chandrakanta' that marked a great milestone in Hindi language and literature was authored by

Score Obtained : 0.0 / 1.0

- A) Maithili Sharan Gupta
- B) Dakshinamoorthy Tagore

4/29/22, 1:39 PM

https://reports.merittracpariksna.com/rpsaod/rps/resreport.php?canid=35555210/&ac=A033877_E233917

- B) Kabinaranath Nagore
C) Ramdhari Singh Dinkar
D) Devakinandan Khatri

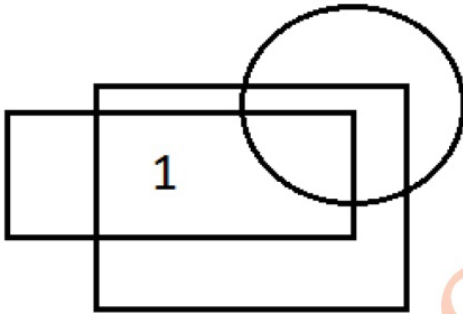
Logical Reasoning

Q2859712 In a number, if every digit is coded as its cube, then what would be the code for 42510?

Score Obtained : 1.0 / 1.0

- A) 64821610
B) 64812518
C) 27812510
D) 64812510

Q2859879 An image is made from some geometric figures. In the image, some regions are formed. In each of these regions, as many dots are to be placed as the number of geometric figures that has this as a part of it. One of these regions is marked with number 1. How many dots will be placed in region 1?



Score Obtained : 0.0 / 1.0

- A) 2**
B) 1
C) 4
D) 3

Q2859640 The next number in the sequence 654, 690, 726, 762, 798, 834, 870, 906, is

Score Obtained : 1.0 / 1.0

- A) 978
B) 1087
C) 1023
D) 942

Q2859599 The next number in the sequence 9, 11, 15, 17, 21, 27, is

4/29/22, 7:39 PM

https://reports.merittracpariksha.com/rpsdob/rps/resreport.php?canid=355552107&ac=A033877_E233917

- B) Karinranantr Nagore
C) Ramdhari Singh Dinkar
D) Devakinandan Khatri
-

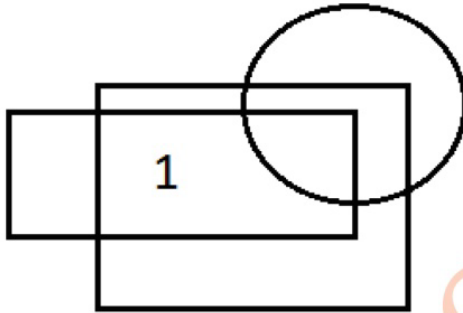
Logical Reasoning

Q2859712 In a number, if every digit is coded as its cube, then what would be the code for 42510?

Score Obtained : 1.0 / 1.0

- A) 64821610
B) 64812518
C) 27812510
D) 64812510
-

Q2859879 An image is made from some geometric figures. In the image, some regions are formed. In each of these regions, as many dots are to be placed as the number of geometric figures that has this as a part of it. One of these regions is marked with number 1. How many dots will be placed in region 1?



Score Obtained : 0.0 / 1.0

- A) 2**
B) 1
C) 4
D) 3
-

Q2859640 The next number in the sequence 654, 690, 726, 762, 798, 834, 870, 906, is

Score Obtained : 1.0 / 1.0

- A) 978
B) 1087
C) 1023
D) 942
-

Q2859599 The next number in the sequence 9, 11, 15, 17, 21, 27, is

- A) 39
 - B) 29**
 - C) 35
 - D) 41
-

Q2859765 Sunil told that Mohit was the son of the only brother of his father's wife. How is Mohit related to Sunil?

Score Obtained : -0.25 /

- A) Brother
 - B) Son
 - C) Maternal Uncle
 - D) Cousin**
-

Q2859773 Sujata introduced Subir as the son of the brother of her mother. How is Subir related to Sujata?

Score Obtained : 1.0 /

- A) Cousin**
 - B) Maternal Uncle
 - C) Son
 - D) Nephew
-

Q2859648 A, B, C are three partners in a business. If thrice the investment of A is equal to 5 times the investment of B and investment of B is 6 times the investment of C, then what is the share of C out of a total profit of 1,70,000?

Score Obtained : 0.0 /

- A) 15,000
 - B) 7,500
 - C) 10,000**
 - D) 12,000
-

Q2859684 The sum of two numbers is 85 and their LCM is 350. The numbers are

Score Obtained : 1.0 /

- A) 40 and 45
- B) 25 and 65
- C) 20 and 65
- D) 50 and 35**

- A) 39
B) 29
C) 35
D) 41
-

Q2859765 Sunil told that Mohit was the son of the only brother of his father's wife. How is Mohit related to Sunil?

Score Obtained : -0.25 / 1

- A) Brother
B) Son
C) Maternal Uncle
D) Cousin
-

Q2859773 Sujata introduced Subir as the son of the brother of her mother. How is Subir related to Sujata?

Score Obtained : 1.0 / 1

- A) Cousin**
B) Maternal Uncle
C) Son
D) Nephew
-

Q2859648 A, B, C are three partners in a business. If thrice the investment of A is equal to 5 times the investment of B and investment of B is 6 times the investment of C, then what is the share of C out of a total profit of 1,70,000?

Score Obtained : 0.0 / 1

- A) 15,000
B) 7,500
C) 10,000
D) 12,000
-

Q2859684 The sum of two numbers is 85 and their LCM is 350. The numbers are

Score Obtained : 1.0 / 1

- A) 40 and 45
B) 25 and 65
C) 20 and 65
D) 50 and 35
-

4/29/22, 7:39 PM

https://reports.merittracpariksha.com/rpsdob/rps/resreport.php?canid=355552107&ac=A033877_E233917

Q2859772 Showing a photograph, Pinto told, "Judith is the granddaughter of the elder brother of my father". How is Judith related to Pinto?

Score Obtained : 0.0 / 1.0

- A) Daughter
- B) Sister
- C) Aunty
- D) Niece**

Q2859714 In a coding language, every digit is coded as a multiple of 3 that is just greater than it. Which of these could possibly be coded as 6633939?

Score Obtained : 0.0 / 1.0

- A) 5421306
- B) 5431806
- C) 5421805
- D) 5421806**

Q2859766 Showing a photograph, Teja told that he was the only son of the father of my sister's brother. How is that person related to Teja?

Score Obtained : -0.25 / 1.0

- A) Mother
- B) Brother**
- C) Cousin
- D) Father

Q2859658 30% of a number is less than 15% of 700 by 30. The number is

Score Obtained : -0.25 / 1.0

- A) 450
- B) 280
- C) 250**
- D) 275

Q2859614 The next number in the sequence 11, 13, 16, 21, 28, 39, is

Score Obtained : 1.0 / 1.0

- A) 63
- B) 52**
- C) 47
- D) 49

4/29/22, 7:39 PM

https://reports.meritracpariksha.com/rpsdob/rps/resreport.php?canid=355552107&ac=A033877_E233917

Q2859772 Showing a photograph, Pinto told, "Judith is the granddaughter of the elder brother of my father". How is Judith related to Pinto?

Score Obtained : 0.0 / 1

- A) Daughter
- B) Sister
- C) Aunty
- D) Niece**

Q2859714 In a coding language, every digit is coded as a multiple of 3 that is just greater than it. Which of these could possibly be coded as 6633939?

Score Obtained : 0.0 / 1

- A) 5421306
- B) 5431806
- C) 5421805
- D) 5421806**

Q2859766 Showing a photograph, Teja told that he was the only son of the father of my sister's brother. How is that person related to Teja?

Score Obtained : -0.25 / 1

- A) Mother
- B) Brother**
- C) Cousin
- D) Father

Q2859658 30% of a number is less than 15% of 700 by 30. The number is

Score Obtained : -0.25 / 1

- A) 450**
- B) 280
- C) 250
- D) 275

Q2859614 The next number in the sequence 11, 13, 16, 21, 28, 39, is

Score Obtained : 1.0 / 1

- A) 63
- B) 52**
- C) 47
- D) 49

https://reports.meritracpariksha.com/rpsdob/rps/resreport.php?canid=355552107&ac=A033877_E233917

Q2859715 In a coding language, JOKER is coded as KPLFS and FIGHT is coded as GJHIU. How will SITUATION be coded in this scheme?

Score Obtained : -0.25 / 1.0

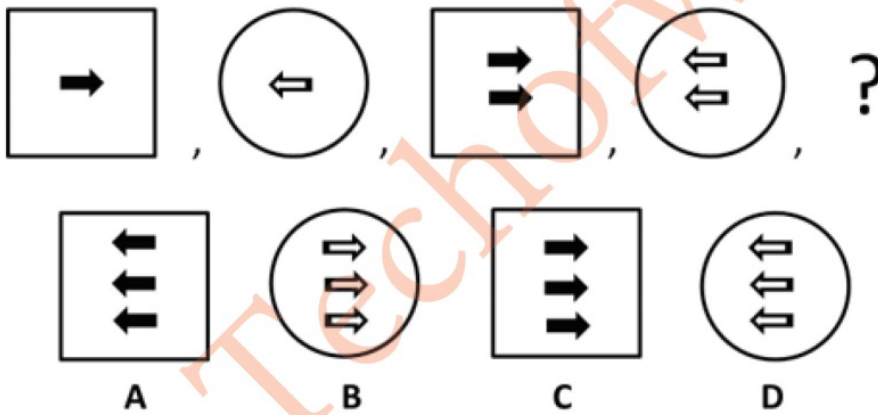
- A) TJUVBXJPO
- B) TJUVBUJPM
- C) TJUVBUJPO**
- D) TJTVBUJPO

Q2859844 If 'Lands and phenomena of Earth' is related to 'Geography', then what is related to 'Geology'?

Score Obtained : -0.25 / 1.0

- A) Inhabitants on Earth
- B) Rocks of which Earth is composed**
- C) Solar energy
- D) Environment change on Earth

Q2860917 Which is the next figure in the figure series given?



Score Obtained : 1.0 / 1.0

- A) A
- B) D
- C) C**
- D) B

Q2859875 Below are given two figures. The figure on the right is same as the left figure but the orientation is different. A dot is marked on one of the regions of the left figure. If a dot is to be placed in the same region in the right figure, observe and find the region in the right figure where it should be placed.

https://reports.merittracpariksha.com/rpsdob/rps/resreport.php?canid=355552107&ac=A033877_E233917

Q2859715 In a coding language, JOKER is coded as KPLFS and FIGHT is coded as GJHIU. How will SITUATION be coded in this scheme?

Score Obtained : -0.25 / 1.0

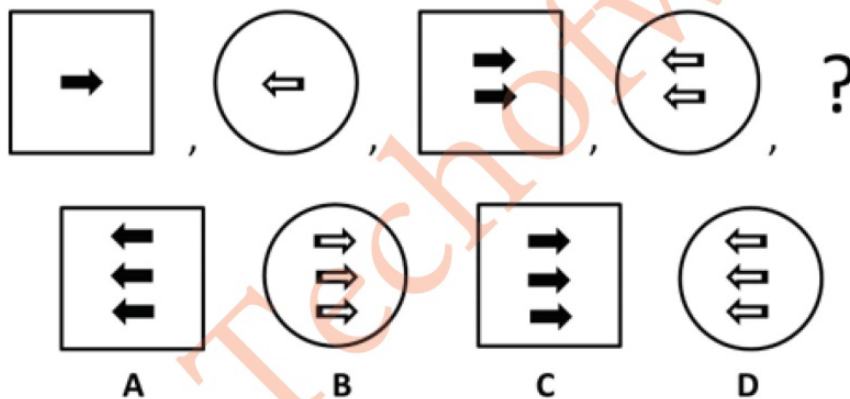
- A) TJUVBXJPO
- B) TJUVBUJPM
- C) TJUVBUJPO**
- D) TJTVBUJPO

Q2859844 If 'Lands and phenomena of Earth' is related to 'Geography', then what is related to 'Geology'?

Score Obtained : -0.25 / 1.0

- A) Inhabitants on Earth
- B) Rocks of which Earth is composed**
- C) Solar energy
- D) Environment change on Earth

Q2860917 Which is the next figure in the figure series given?



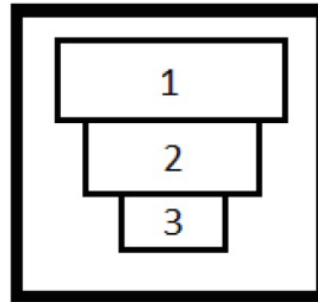
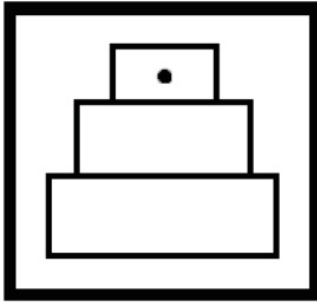
Score Obtained : 1.0 / 1.0

- A) A
- B) D
- C) C**
- D) B

Q2859875 Below are given two figures. The figure on the right is same as the left figure but the orientation is different. A dot is marked on one of the regions of the left figure. If a dot is to be placed in the same region in the right figure, observe and find the region in the right figure where it should be placed.

https://reports.meritracpariksha.com/rpsdob/rps/resreport.php?canid=355552107&ac=A033877_E233917

4/29/22, 7:39 PM

https://reports.meritracpariksha.com/rpsdob/rps/resreport.php?canid=355552107&ac=A033877_E233917

Score Obtained : 0.0

- A) Outside regions 1, 2 and 3
 B) 1
 C) 2
D) 3

Q2859656 What will be 60% of a number if 80% of that number is 160?

Score Obtained : 0.0

- A) 90
B) 120
 C) 140
 D) 150

Q2859591 The next number in the sequence 20, 30, 60, 150, is

Score Obtained : -0.25

- A) 195
B) 300
 C) 275
D) 450

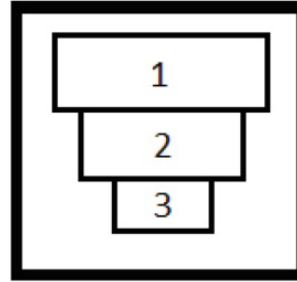
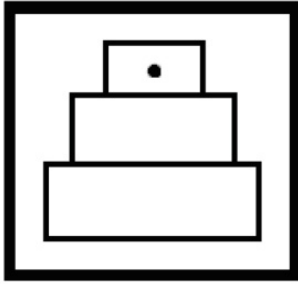
Q2859755 In a certain code language,
 "time is precious" is written as "er ui af"

"time management is important" is written as "af jk op ui"

"management technique is used" is written as "cv af bn op"

What is the code for "technique" in the given code language?

Score Obtained : 0.0



Score Obtain

- A) Outside regions 1, 2 and 3
- B) 1
- C) 2
- D) 3**

Q2859656 What will be 60% of a number if 80% of that number is 160?

Score Obtain

- A) 90
- B) 120**
- C) 140
- D) 150

Q2859591 The next number in the sequence 20, 30, 60, 150, is

Score Obtained

- A) 195
- B) 300**
- C) 275
- D) 450**

Q2859755 In a certain code language,
"time is precious" is written as "er ui af"

"time management is important" is written as "af jk op ui"

"management technique is used" is written as "cv af bn op"

What is the code for "technique" in the given code language?

Score Obtain

- A) bn
- B) cv
- C) Either "cv" or "bn"**

D) er

Computer Fundamentals

Q2860358 Which of the following function key of keyboard along with windows key need to be pressed to shows up Windows Help and Support screen?

Score Obtained : -0.25 / 1.0

- A) F1**
 - B) F10
 - C) F12
 - D) F5
-

Q2860382 Hemant wants to input data to the computer by pressing keys. Which input device should he use?

Score Obtained : -0.25 / 1.0

- A) Scanner
 - B) Mouse
 - C) Keyboard**
 - D) Joystick
-

Q2860364 Which of the following shortcut key in combination with ALT key, is used to close the the current active window? Also, if there is no active window then it will open the SHUT DOWN dialog box.

Score Obtained : 0.0 / 1.0

- A) F4**
 - B) F2
 - C) F1
 - D) F3
-

Q2860529 Name the feature that causes the word processor to force all text to fit within the defined margins.

Score Obtained : -0.25 / 1.0

- A) Auto correct
 - B) Auto format
 - C) Auto text
 - D) Word wrap**
-

Q2860466 What is a software program that enables the computer hardware to communicate and operate with the computer software?

D) er

Computer Fundamentals

Q2860358 Which of the following function key of keyboard along with windows key need to be pressed to shows up Windows Help and Support screen?

Score Obtained : -0.25 / 1.0

- A) F1**
 - B) F10
 - C) F12
 - D) F5
-

Q2860382 Hemant wants to input data to the computer by pressing keys. Which input device should he use?

Score Obtained : -0.25 / 1.0

- A) Scanner
 - B) Mouse
 - C) Keyboard**
 - D) Joystick
-

Q2860364 Which of the following shortcut key in combination with ALT key, is used to close the the current active window? Also, if there is no active window then it will open the SHUT DOWN dialog box.

Score Obtained : 0.0 / 1.0

- A) F4**
 - B) F2
 - C) F1
 - D) F3
-

Q2860529 Name the feature that causes the word processor to force all text to fit within the defined margins.

Score Obtained : -0.25 / 1.0

- A) Auto correct
 - B) Auto format
 - C) Auto text
 - D) Word wrap**
-

Q2860466 What is a software program that enables the computer hardware to communicate and operate with the computer software?

- A) Read Only Memory
 - B) Operating System**
 - C) Microsoft Word
 - D) Mother Board
-

Q2862797

Which of the following acts as a layer of a computer system between the hardware and the user program?

- A)
Operating environment
 - B)
Operating System**
 - C)
System environment
 - D)
Hardware
-

Q2860497 Which of the following is a default view of Microsoft Word 2013?

- A) Split Layout
 - B) Print Layout**
 - C) Web Layout
 - D) Draft Layout
-

Q2860484 What does W3C stand for?

- A) World Wide Web Consortium**
 - B) Worst Web Website Control
 - C) World Wide Web Control
 - D) Word Wide Website Control
-

Q2860530 MS PowerPoint is used for creating which of the following?

- A) Read Only Memory
 - B) Operating System**
 - C) Microsoft Word
 - D) Mother Board
-

Q2862797

Which of the following acts as a layer of a computer system between the hardware and the user program?

- A)
Operating environment
 - B)
Operating System**
 - C)
System environment
 - D)
Hardware
-

Q2860497 Which of the following is a default view of Microsoft Word 2013?

- A) Split Layout
 - B) Print Layout**
 - C) Web Layout
 - D) Draft Layout
-

Q2860484 What does W3C stand for?

- A) World Wide Web Consortium**
 - B) Worst Web Website Control
 - C) World Wide Web Control
 - D) Word Wide Website Control
-

Q2860530 MS PowerPoint is used for creating which of the following?

- A) Documents
 - B) Presentation**
 - C) Accounting
 - D) Editing documents only
-

Q2860453 Which among the following organisations develops and publishes technical, industrial and commercial standards.

Score Obtained :

- A) IANA
 - B) IETF
 - C) ISO**
 - D) IRTF
-

Q2860323 An optical laser scanner is an example of which type of device?

Score Obtained :

- A) Memory
 - B) Input**
 - C) Boot
 - D) Output
-

Q2860367 Which of the following shortcut key is used to close a document in MS Word?

Score Obtained :

- A) CTRL + F4**
 - B) CTRL + ALT + F4
 - C) ALT + W**
 - D) CTRL + W
-

Q2860447 Which of the following is the correct categories of the software to which the operating system belongs?

Score Obtained :

- A) System software**
 - B) Utility software
 - C) Language Processor
 - D) Application software
-

Q2860324 Which among the following are the internal components of a computer?

- A) Documents
 - B) Presentation**
 - C) Accounting
 - D) Editing documents only
-

Q2860453 Which among the following organisations develops and publishes technical, industrial and commercial standards.

Score Obtain

- A) IANA
 - B) IETF
 - C) ISO**
 - D) IRTF
-

Q2860323 An optical laser scanner is an example of which type of device?

Score Obtain

- A) Memory
 - B) Input**
 - C) Boot
 - D) Output
-

Q2860367 Which of the following shortcut key is used to close a document in MS Word?

Score Obtained

- A) CTRL + F4**
 - B) CTRL + ALT + F4
 - C) ALT + W**
 - D) CTRL + W
-

Q2860447 Which of the following is the correct categories of the software to which the operating system belongs?

Score Obtain

- A) System software**
 - B) Utility software
 - C) Language Processor
 - D) Application software
-

Q2860324 Which among the following are the internal components of a computer?

- A)** Motherboard, RAM
B) Printer, Monitor
C) CD, DVD
D) Keyboard, Mouse
-

Q2860476 Transmission of messages over communication networks is called as

Score Obtained : 1.0 / 1.0

- A) Computer hardware
B) Computer software
C) Computer network
D) E - Mail
-

General Science

Q2859210 Which of the following relations is NOT correct for power?

Score Obtained : -0.25 / 1.0

- A)** $P=V/R^2$
B) $P=RxI^2$
C) $P=IxV$
D) $P=V^2/R$
-

Q2859191 A lemon placed in a glass filled with water appears to be bigger and raised. This is due to the phenomenon of

Score Obtained : -0.25 / 1.0

- A) reflection
B) refraction of light
C) total internal reflection
D) diffraction
-

Q2859216 Which one of the following devices converts chemical energy into electrical energy?

Score Obtained : 1.0 / 1.0

- A) Dynamometer
B) Battery
C) Oscillator
D) Photovoltaic Cell
-

https://reports.merittracpariksha.com/rpsdob/rps/resreport.php?canid=355552107&ac=A033877_E233917

- A)** Motherboard, RAM
B) Printer, Monitor
C) CD, DVD
D) Keyboard, Mouse
-

Q2860476 Transmission of messages over communication networks is called as

Score Obtained : 1.0 / 1.0

- A) Computer hardware
B) Computer software
C) Computer network
D) E - Mail
-

General Science

Q2859210 Which of the following relations is NOT correct for power?

Score Obtained : -0.25 / 1.0

- A)** $P=V/R^2$
B) $P=R \times I^2$
C) $P=I \times V$
D) $P=V^2/R$
-

Q2859191 A lemon placed in a glass filled with water appears to be bigger and raised. This is due to the phenomenon of

Score Obtained : -0.25 / 1.0

- A) reflection
B) refraction of light
C) total internal reflection
D) diffraction
-

Q2859216 Which one of the following devices converts chemical energy into electrical energy?

Score Obtained : 1.0 / 1.0

- A) Dynamometer
B) Battery
C) Oscillator
D) Photovoltaic Cell

Q2859018 Which of the following sweeteners is an artificial sweetener?

Score Obtained : -0.25 / 1.0

- A) Agave nectar
 - B) Saccharin**
 - C) Mollases
 - D) Stevia
-

Q2858978 Which dye is responsible for the blue colour of jeans?

Score Obtained : 0.0 / 1.0

- A) Induline
 - B) Safranine
 - C) Rhodamine
 - D) Indigo**
-

Q2858998 What is the common name for the compound acetylsalicylic acid, widely used as a fever reducer and as a pain killer?

Score Obtained : -0.25 / 1.0

- A) Aspirin**
 - B) Advil
 - C) Tylenol
 - D) Paracetamol
-

Q2858924 Which of the following elements were predicted by Mendeleev in his periodic table?

Score Obtained : 1.0 / 1.0

- A) Ga and Ge**
 - B) Mo and W
 - C) Ti and V
 - D) Te and I
-

Q2859031 The hormone that is most commonly attributed to osmoregulation in mammals is:

Score Obtained : -0.25 / 1.0

- A) Thyroxine
- B) Oxytocin
- C) Vasopressin**
- D) Insulin

Q2859018 Which of the following sweeteners is an artificial sweetener?

Score Obtained : -0.25 / 1.0

- A) Agave nectar
 - B) Saccharin**
 - C) Mollases
 - D) Stevia
-

Q2858978 Which dye is responsible for the blue colour of jeans?

Score Obtained : 0.0 / 1.0

- A) Induline
 - B) Safranine
 - C) Rhodamine
 - D) Indigo**
-

Q2858998 What is the common name for the compound acetylsalicylic acid, widely used as a fever reducer and as a pain killer?

Score Obtained : -0.25 / 1.0

- A) Aspirin**
 - B) Advil
 - C) Tylenol
 - D) Paracetamol
-

Q2858924 Which of the following elements were predicted by Mendeleev in his periodic table?

Score Obtained : 1.0 / 1.0

- A) Ga and Ge**
 - B) Mo and W
 - C) Ti and V
 - D) Te and I
-

Q2859031 The hormone that is most commonly attributed to osmoregulation in mammals is:

Score Obtained : -0.25 / 1.0

- A) Thyroxine
- B) Oxytocin
- C) Vasopressin**
- D) Insulin

Q2858943 The formula for Carbon monoxide is

Score Obtained : -0.25 / 1

- A) CO_2
 - B)** CO
 - C) C_2O
 - D) C_2O_2
-

Q2859047 Which of the following options is a criterion for classification of living organisms into five kingdoms?

- (i) The body design of the organism or body organization
- (ii) The mode of nutrition
- (iii) The complexity of cell structure

Score Obtained : -0.25 / 1

- A)** All i, ii and iii
 - B) Only i
 - C) Only ii
 - D) Only iii
-

Q2859200 Which one of the following is the ultimate source of energy?

Score Obtained : 1.0 / 1

- A)** Sun
 - B) Uranium
 - C) River
 - D) Wind
-

Q2859085 Rickets is caused by deficiency of

Score Obtained : -0.25 / 1

- A) Vitamin A
 - B) Vitamin C
 - C)** Vitamin D
 - D) Vitamin B
-

Q2859040 Blood carries oxygen and nutrients to different parts of our body. The oxygen carrying pigment called Haemoglobin in our blood is a complex of which metal?

Q2858943 The formula for Carbon monoxide is

Score Obtained : -0.25 / 1.0

- A) CO_2
B) CO
C) C_2O
D) C_2O_2
-

Q2859047 Which of the following options is a criterion for classification of living organisms into five kingdoms?

- (i) The body design of the organism or body organization
(ii) The mode of nutrition
(iii) The complexity of cell structure

Score Obtained : -0.25 / 1.0

- A)** All i, ii and iii
B) Only i
C) Only ii
D) Only iii
-

Q2859200 Which one of the following is the ultimate source of energy?

Score Obtained : 1.0 / 1.0

- A) Sun
B) Uranium
C) River
D) Wind
-

Q2859085 Rickets is caused by deficiency of

Score Obtained : -0.25 / 1.0

- A) Vitamin A
B) Vitamin C
C) Vitamin D
D) Vitamin B
-

Q2859040 Blood carries oxygen and nutrients to different parts of our body. The oxygen carrying pigment called Haemoglobin in our blood is a complex of which metal?