

Section 1 - Paper I-General Knowledge and Current Affairs

1) The European Free Trade Association (EFTA) is the inter-governmental organisation of several countries. Which of the following countries is NOT one of the members of EFTA?

- A) Norway
- B) Iceland
- C) Switzerland
- D) France

2) In 2017, which of the following countries successfully launched its first cargo spacecraft?

- A) Japan
- B) Italy
- C) Australia
- D) China

3) What is the full-form of UPI pertaining to cashless transactions in India?

- A) Uniform Payable Installation
- B) Universal Pricing Institute
- C) Unified Payment Interface
- D) Unilateral Payment Instrument

4) Which of the following dates is celebrated as the 'National Technology Day' in India?

- A) 23rd June
- B) 29th August
- C) 5th June
- D) 11th May

5) In Feb 2018, Defence Research and Development Organisation (DRDO) successfully flight tested an indigenously-built Rustom 2 drone, a medium-altitude long-endurance UAV, at its Aeronautical Test Range (ATR) in which of the following states of India?

- A) Tamil Nadu
- B) Andhra Pradesh
- C) Karnataka
- D) West Bengal

6) The Food Safety and Standards Authority of India (FSSAI), a nodal statutory agency responsible for protecting and promoting public health through regulation and supervision of food safety operates under the aegis of

- A) Ministry of Health and Family Welfare
- B) Department of Science and Technology
- C) Ministry of Chemicals and Fertilizers
- D) Department of Animal Husbandry and Dairying

7) In 2016, which of the following states in India became the first state to launch Crime and Criminal Tracking Network and Systems (CCTNS)?

- A) Maharashtra
- B) Gujarat
- C) Karnataka
- D) Goa

8) Which of the following teams won the Ranji Trophy, a premier first-class cricket tournament, that took place in India between November 2018 and February 2019?

- A) Kerala
- B) Vidarbha
- C) Puducherry
- D) Saurashtra

9) Which of the following communities mainly celebrate the festival 'Paryushan Parva'?

- A) Jains
- B) Sikh
- C) Iyengars
- D) Parsi

10) Qutubuddin Aibak, Iltutmish and Ghiyasuddin Balban belonged to which of the following dynasties?

- A) Khilji Dynasty
- B) Tughluq Dynasty
- C) Slave Dynasty
- D) Sayyid Dynasty

Techofworld.In

11) 'Creative India; Innovative India' is an endeavor for which of the following policies of Government of India?

- A) NITI Aayog for Industrial development, 2015
- B) Technology Day Theme, 2017
- C) Intellectual Property Rights Policy, 2016
- D) National Science Congress, 2017

12) In March 2018, the Ministry of Tourism-Government of India, through SPIC MACAY organised the music series "Incredible India Heritage Series" at which of the following places?

- A) Chennai, Amritsar and Hyderabad
- B) Mumbai, Ahmedabad and Guwahati
- C) Lucknow, Shimla and Bhopal
- D) Varanasi, Delhi and Kochi

13) 'Therukoothu' an ancient folk art, belongs to which state of India?

- A) Karnataka
- B) Tamil Nadu
- C) Andhra Pradesh
- D) Kerala

14) Prithvi Raj Chauhan was the ruler of

- A) Hampi
- B) Raigad
- C) Kathiawar
- D) Ajmer

15) Which of the following fabrics is believed to have its origin way back in the Vedic period and was found by Lord Krishna's cousin Shishupal?

- A) Pochampally Ikat
- B) Paithani
- C) Banarasi
- D) Chanderi

16) Who headed the committee of administrators appointed by the Supreme Court to run the affairs of BCCI and implement court-approved recommendations of the Justice R. M. Lodha panel, in January 2017?

- A) Rajeev Shukla
- B) Vinod Rai
- C) Vikram Limaye
- D) Vijay Goel

17) Arrange the following rulers of the Mughal dynasty in chronological sequence starting from the first ruler to have ruled over India.

- (a) Jahangir
- (b) Babur
- (c) Humayun
- (d) Akbar

- A) (a), (b), (c), (d)
- B) (b), (c), (d), (a)
- C) (a), (c), (d), (b)
- D) (d), (a), (c), (b)

18) In the First Battle of Tarain, who among the following rulers was defeated by Prithviraj Chauhan?

- A) Alauddin Khilji
- B) Aram Shah
- C) Mohammad Ghori
- D) Iltutmish

19) In which of the following cliff shapes were the Ajanta caves excavated?

- A) Horse shoe shape
- B) Star shape
- C) L shape
- D) Rhombus shape

20) In Rugby, which of the following options is a means of restarting play after a stoppage which has been caused by a minor infringement of the Laws?

- A) Back
- B) Hooker
- C) Scrum
- D) Front

Techofworld.In

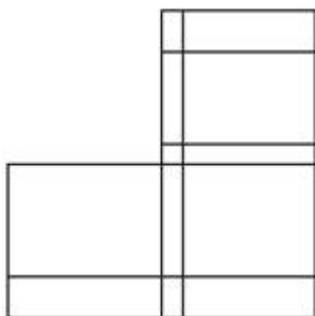
## Section 2 - Paper-I-Reasoning Ability

21) Anita rides her scooter South for 7 miles from her office. She then turns left, picks up her friend, turns right and travels for 3 miles more. She then takes another right turn and rides 15 miles more to drop her friend. She then turns right and travels for 5 miles more. Which direction should she look if she wants to spot her office?

- A) South-East
- B) West
- C) North-East
- D) South

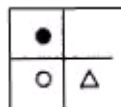
Techofworld.In

22) Choose one of the four options to complete the top left corner of this box.



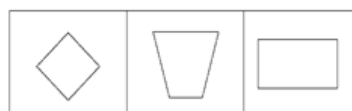
- A)
- B)
- C)
- D)

23) There is a figure given below with four figures in the answer option, you have to choose the figure from the answer options which is similar to the figure given below irrespective of rotations.



- A)
- B)
- C)
- D)

24) The following three figures are similar in some way. Based on this similarity find a figure from the options which is similar to the three figures.



- A)
- B)
- C)
- D)

25) What is the next term in the following series?

1, 4, 15, 64, ?

- A) 126
- B) 325
- C) 523
- D) 384

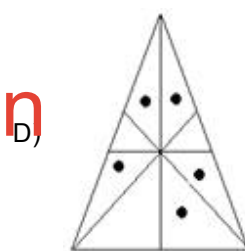
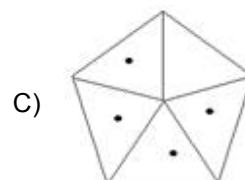
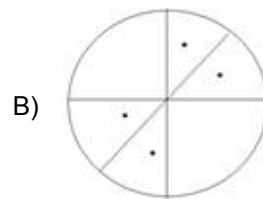
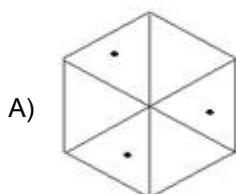
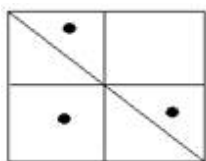
26) A man walks 10 metres to South after walking 20 metres to East. After this he walks 5 metres North after walking 35 metres to West. Then he walks 15 metres to East. The shortest distance between the starting and the terminal points is

- A) 10 metres
- B) 0 metre
- C) Cannot be determined
- D) 5 metres

27) If the word 'CODE' is coded as 'DQGI', then what is the code for 'DECODE'?

- A) EGFRIK
- B) EGDQGI
- C) EFGRIK
- D) EGFSIK

28) From the given options, please choose the image that is most similar to the problem image given below.



29) If TEMPLE can be written as GVNKOV. What will be written for CHAIR?

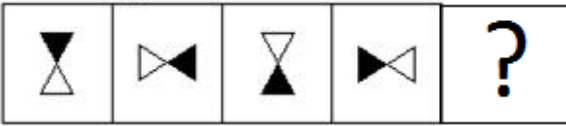
- A) TSXWE
- B) SXZIR
- C) XSZRI
- D) AKJIM

30) Ajay walks out of his house, takes his bicycle and cycles 2 kilometres west. He then turns left and cycles a further 3 kilometres. He turns left again and cycles another 4 kilometres. Which direction is Ajay now from his house?

- A) South-East
- B) North-West
- C) North-East
- D) South-West

31) What replaces the question mark in the given figure series?

Problem Figure



- A) B
- B) D
- C) A
- D) C

Techofworld.In

32) Complete the series:  
6, 20, ? 200, 606, 1820

- A) 50
- B) 10
- C) 66
- D) 20

33) A four member group consists of A, B, C & D. A's wife is C's sister. B's daughter's father is A. A's daughter is D. How is C related to D?

- A) Mother
- B) Sister
- C) Father
- D) Aunt or Uncle

34) Ramesh pushes his hand cart 50 metres south from the Market. He takes a u-turn and pushes his cart for 25 metres. Ramesh then takes a right and pushes the cart a further 30 metres. In which direction is Ramesh from the Market?

- A) South-West
- B) North-East
- C) North-West
- D) South-East

35) R told M, "Yesterday I defeated the only brother of the daughter of my paternal grandfather in chess". Whom did R defeat?

- A) Cousin
- B) Father
- C) Son
- D) Brother

36) B's daughter is C who is married to D. D's son is E, whose sister is F. How is F related to B?

- A) Granddaughter
- B) Daughter in law
- C) Niece
- D) Grandson

37) If ANGLE is coded as FRJNF, then what is the code for GREAT?

- A) LVHCU
- B) KUGBU
- C) KVHCU
- D) LVHCV

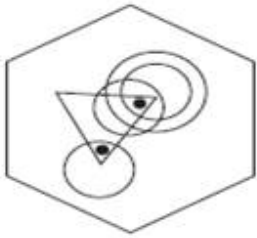
38) If CATALYST is coded as EEZIJUML then, SACHDEVA will be coded as

- A) PEBMVIOS
- B) UEIPBAPS
- C) GGERTVIM
- D) UEIBPASP

39) P's son is R, R is married to T, T's daughter is U. How is R related to U?

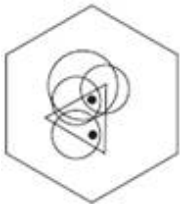
- A) Mother
- B) Uncle
- C) Father
- D) Aunt

40) From the given options, please choose the image that is most similar to the problem image given below.

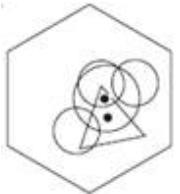


Techofworld.In

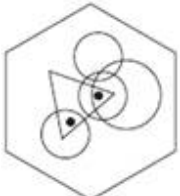
A)



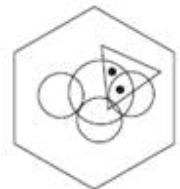
B)



C)



D)



Section 3 - Paper I-Computer Literacy

41) Alias for screen or monitor is

- A) Printer
- B) Scanner
- C) Hard disk
- D) Display

Techofworld.In

42) The Protocol which defines a set of standards that allows users of the World Wide Web to exchange information found on web pages is

- A) FTP
- B) TCP/IP
- C) SMTP
- D) HTTP

43) In Excel, when we want the reference to a cell to remain unchanged while copying of a formula then use

- A) Relative Cell Copying
- B) Relative Cell Referencing
- C) Absolute Cell Copying
- D) Absolute Cell Referencing

44) One of the best ways to provide secure access to your computers is to

- A) deadbolt protect it
- B) password protect it
- C) safemode protect it
- D) copyright protect it

45) The URL for web page is www.samplewebsite.edu, What does the extension .edu refer to?

- A) Government
- B) Commercial
- C) Educational
- D) Non-profit organization

46) All of the given options are valid examples of first generation computers EXCEPT

- A) EDSAC
- B) EDVAC
- C) EDPAC
- D) UNIVAC

47) Internet can be defined as

- A) network of worldwide networks
- B) stand alone computers
- C) network of local computers
- D) network of two computers

48) In MICR, C is known as

- A) colour
- B) computer
- C) code
- D) character

49) Which of the following Options is an INVALID type of optical storage disc?

- A) CD-RW
- B) CD-R
- C) CD-RR
- D) CD-ROM

50) Name the hardware port used to connect the monitor to the CPU which offers images at higher resolutions.

- A) Video Controller Array Port
- B) USB Port
- C) Parallel Port
- D) Video Graphics Array Port

---

**Section 4 - Paper I-Pedagogy Educational Management and Policy**

---

51) Clarifying relationships with diagrams or graphs or clarifying processes with flow charts is done in which method of teaching?

- A) Lecture method
  - B) Immersive environments
  - C) Graphic organizing
  - D) Interactive teaching
- 

52) The concept of micro teaching was developed in

- A) Oxford University
  - B) Cambridge University
  - C) Princeton University
  - D) Stanford University
- 

53) What are listening, reading, speaking and writing Skills referred to in the teaching of English?

- A) Objectives
  - B) Duties
  - C) Subjects
  - D) Skills
- 

54) Inductive model of information process sources is associated with

- A) Dewey and Herbart
  - B) Hilda Taba and R Suchman
  - C) Glaser and Frobel
  - D) Rinn and Wolpe
- 

55) Being able to both listen and speak, means having which skill?

- A) Written
- B) Listening
- C) Reading
- D) Oral

56) What is it called, when we are able to supplement Mathematical competence in one's native language with the necessary terms in English?

- A) Oral skills
  - B) Recreation
  - C) Competency
  - D) Numeracy
- 

57) Which agency takes care of writing text books for school students?

- A) UGC
  - B) NCTE
  - C) CBSE
  - D) NCERT
- 

58) In which process is recording the data collected, predictions made and the strategies used an important part?

- A) Using of manipulatives
  - B) Identifying the solution
  - C) Working backward
  - D) Problem solving
- 

59) To whom do the child and his present or future activities do NOT matter so much?

- A) Idealists
  - B) Pragmatists
  - C) Realists
  - D) Naturalists
- 

60) The model of teaching at memory level is connected with

- A) Herbart
- B) Kilpatrick
- C) Socrates
- D) Hunt

Techofworld.In



61) The project strategy of teaching was developed by

- A) Socrates
- B) Skinner
- C) Kilpatrick
- D) Dewey

62) "Communication is the sharing of ideas and feelings in a feeling of mutuality". Who said these words?

- A) Edgar Dale
- B) Kellogg
- C) Skinner
- D) Anderson

63) One has to know English language for International trade

- A) Because of globalization
- B) Due to industrialization
- C) Because of independence
- D) Due to civilization

64) Socratic model of teaching is a type of

- A) behaviour model of teaching
- B) modern model of teaching
- C) psychological model of teaching
- D) historical model of teaching

65) What is that form of teaching and learning in which the teacher and learner are not in the same place at the same time called ?

- A) Distance
- B) Active
- C) Co-operative
- D) Collaborative

66) What is the other objective of English teaching other than language development?

- A) Literary
- B) Physical
- C) Mental
- D) Personality

67) Meyers and Jones define which learning as learning environments that allow "Students to talk and listen, read, write and reflect as they approach course content."

- A) Co-operative
- B) Discussion
- C) Active
- D) Distance

68) Which approach allows the problem-solvers to map out many dimensions of a problem and see it clearly?

- A) Mental imaging
- B) Using manipulatives
- C) Creating a table
- D) Working backward

69) The model of teaching at understanding level is associated with

- A) Hilda Taba
- B) Hunt
- C) Dewey
- D) Morrison

70) Newspaper is a form of

- A) audio media
- B) visual media
- C) aural media
- D) print media

71) What should the teachers design, rather than force compliance, to increase student's desire to co-operate?

- A) Rules
- B) Activities
- C) Notes
- D) Content

72) What is the main function according to Halliday in using language to create interaction with others?

- A) Interactional
- B) Instrumental
- C) Personal
- D) Regulatory

Techhofworld.In

73) Which is the instructional strategy that engages students in active discussion about issues and problems inherent in practical application?

- A) Lecture method
- B) Co-operative learning
- C) Case method
- D) Distance learning

74) Related to understanding, Semantics is considered as which skill?

- A) Reading
- B) Writing
- C) Speaking
- D) Listening

75) In which method is class work highly structured, with the teacher controlling all activities?

- A) Audio-Lingual method
- B) The silent way
- C) Grammar-Translation method
- D) Direct method

76) Which chief force has the teacher to face in the problem of maintaining curiosity and interest behind learning?

- A) Curiosity
- B) Motivative
- C) Discovery
- D) Realistic

77) The ability to abstract, symbolize and deduce is done in which subject?

- A) Science
- B) Arts
- C) Mathematics
- D) Languages

78) The subject matter of educational psychology is knitted around whom?

- A) Behaviour in various spheres
- B) Learner
- C) Teacher
- D) Topics

79) How can the teachers eliminate most serious disruptions like - bullying, name calling, fighting?

- A) Punishing them severely
- B) Paying attention to each student's level of involvement
- C) Sending the students out of the class
- D) Ignoring them

80) What role do Youth organizations, religious and lay groups play in teaching situations?

- A) Primary
- B) Tertiary
- C) Secondary
- D) No role

81) In which method can the learners hear and mimic native speakers on reel-to-reel audio tapes often used with earphones in a language lab setting?

- A) Audio-Lingual
- B) Direct Method
- C) Black-Board
- D) Grammar-Translation

82) What assists adult learners as well, by allowing people with the full time jobs and family responsibilities to obtain professional certifications or college degrees?

- A) Schools
- B) Online education
- C) Special classes
- D) Colleges

Techofworld.In

83) What does the individual aim imply?

- A) Family should be educated
  - B) Education should train the individual first
  - C) The country should be educated
  - D) The society should be educated
- 

84) The Secondary Education Commission of 1952-1953 is also called

- A) National Knowledge Commission
  - B) Mudaliar Commission
  - C) Program of Action
  - D) Kothari Commission
- 

85) The emphasis in Communicative Language Teaching is NOT on mastery of language but on which process?

- A) Teaching
  - B) Communication
  - C) Graduation
  - D) Perfection
- 

86) What is the approach the teacher has to apply for the students to frame a problem in their own words?

- A) Hinder
  - B) Discourage
  - C) Refrain
  - D) Encourage
- 

87) What does Asher place primary importance on, in the Total Physical Response Method?

- A) Speaking skills
  - B) Listening comprehension
  - C) Communicative competence
  - D) Writing
- 

88) Elements of a model of teaching are

- A) teaching, evaluation, feedback
- B) output, feedback and synthesis
- C) focus, syntax, social system and support system
- D) input, output, feedback

89) Which is that method, which requires collecting, organizing, reflecting upon and publishing a variety of students work including papers, presentations, videos and images?

- A) Lecture
  - B) Portfolio
  - C) Problem solving
  - D) Podcasting
- 

90) As no transaction is allowed, how does the direct method allows students to perceive meaning through language?

- A) Directly
- B) Holistically
- C) Silently
- D) Indirectly

Section 5 - PaperII-History and Political Science

91) Which method is used to fix the dates of material remains recovered as a result of excavation and exploration?

- A) Archaeology
  - B) Pollen Analysis
  - C) Carbon Dating
  - D) Inscription
- 

92) Who was the famous astronomer and mathematician in the court of the emperor Chandragupta Vikramaditya?

- A) Charak
  - B) Aryabhatta
  - C) Varahmihira
  - D) Banabhatta
- 

93) Although Gupta period is known as the 'Golden Age' they were poor in

- A) Science and Technology
  - B) Literature
  - C) Painting
  - D) Architecture
- 

94) In Ancient India around 3rd century B.C, the earliest inscriptions were written in which language among the following options?

- A) French
  - B) Hindi
  - C) Prakrit
  - D) Persian
- 

95) Which of the following articles of Indian constitution deals with the Right to Freedom of Religion?

- A) Articles 29 to 31
- B) Articles 23 to 24
- C) Articles 25 to 28
- D) Articles 14 to 18

96) The name of Ashoka appears only in which of the following rock edicts?

- A) Major Rock Edicts
  - B) Minor Rock Edicts
  - C) Minor Pillar Edicts
  - D) Separate Rock Edicts
- 

97) Ashoka, after the Battle of Kalinga, decided to embrace which religion?

- A) Christianity
  - B) Jainism
  - C) Hinduism
  - D) Buddhism
- 

98) The rulers of which of the following dynasties issued maximum number of gold coins during the Ancient Period in India?

- A) Gupta Dynasty
  - B) Mauryan Dynasty
  - C) Vardhana Dynasty
  - D) Nanda Dynasty
- 

99) Who amongst the following was a Greek ambassador who lived in the court of Chandragupta Maurya?

- A) Fa-Hsien
  - B) Banabhatta
  - C) Megasthenes
  - D) Purnanavarma
- 

100) Upanishads mainly contain what among the following options?

- A) Prayers
- B) Methods to perform rituals
- C) Philosophical speculations
- D) Mythological stories

---

**Section 6 - PaperII-Geography and Economics**

---

101) Which of the following statements is CORRECT regarding production possibilities frontier (PPF)?

- A) The shape of the PPF is typically curved inward
  - B) The choices or points inside the PPF are efficient
  - C) As an economy grows, the PPF shifts outwards
  - D) The choices or points outside the PPF are attainable
- 

102) According to great economist Adam Smith, the unobservable market force that helps the demand and supply of goods in a free market to reach equilibrium automatically is called

- A) Market mechanism
  - B) Allocative efficiency
  - C) General equilibrium
  - D) Invisible hand
- 

103) Which of the following is NOT a macroeconomic concept?

- A) Individual Firm's Price Policy
  - B) Central Bank's Monetary Policy
  - C) Rural Employment Policy
  - D) Tax Policy of National Government
- 

104) Who was the proponent of the Nebular hypothesis theory in 1755?

- A) Charles Messier
  - B) Immanuel Kant
  - C) William Herschel
  - D) Edwin Hubble
- 

105) The Mohorovicic discontinuity is the boundary between

- A) earth's crust and surface
- B) earth's crust and mantle
- C) earth's core and mantle
- D) inner core and outer core of the earth

106) Which of the following is a major source of information for studying the interior of the earth?

- A) Sonar waves
  - B) Submarines
  - C) Seismic waves
  - D) Magma
- 

107) Complementary reinforces are ones that have a joint function such as toothbrush and toothpaste, paper and pencil etc. The cross elasticity of demand for toothpaste and toothbrushes is

- A) Negative
  - B) Zero
  - C) Equal to one
  - D) Positive
- 

108) The type of rock which mainly composes the continental crust is

- A) Basalt
  - B) Limestone
  - C) Gabbro
  - D) Granite
- 

109) Which of the following minerals are abundantly found in the inner core of the earth?

- A) Nickel and Iron
  - B) Nickel and Silica
  - C) Magnesium and Iron
  - D) Magnesium and Silica
- 

110) When the demand curve is a rectangular hyperbola, the demand can be said as

- A) Perfectly Inelastic Demand
- B) Relatively Elastic Demand
- C) Unit Elastic Demand
- D) Perfectly Elastic Demand

---

**Section 7 - PaperII-English**

---

111) Choose from the following options the nearest Antonym of the underlined word:

The notorious bandits managed to escape from prison.

- A) Ill-famed
- B) Infamous
- C) Inconspicuous
- D) Rascalion

---

Read the passage carefully and answer the questions that follow:

It is not an infrequent thing for a young man to decide his future on the toss of a coin, to make a choice in this way between two professions, to decide whether he shall stay at home or emigrate, or whether he shall accept this or that appointment. Most boys have to earn their living some day or other, and it is of vital importance that they should choose that type of work which they can do best. For those who have a decided bent there is little or no difficulty, except that they should consult their parents and friends in order that they may know what kind of a market there will be for their work. Others who evince no particular learning should exercise greater care, in order that they may find out what they can do best, and what is likely to be remunerative. Too often men find themselves burdened with a profession into which they cannot put their whole heart, or which, from overcrowding or other causes, will not bring them in sufficient for a decent livelihood, and bitterly they repent the hastiness or carelessness of their youth.

112) As per the author, which of the following is a good way of selecting and finalizing on a job

- A) Toss a coin and decide
- B) Emigrate to another place
- C) Consult their parents and friends
- D) Select any job they get

---

113) Men repent bitterly -

- A) The hastiness of their youth
- B) Choosing a profession
- C) About their future
- D) Not finding a job

114) What does the line "To decide whether he shall stay at home or emigrate", in the passage mean?

- A) To choose home over going to work
- B) To think twice before working at home
- C) To emigrate from home
- D) To decide about working in their home town or abroad.

---

115) What does the author mean by "for those who have a decided bent"?

- A) Those who emigrate to another place
- B) Those who select the first job they get
- C) Those who have a determined mind
- D) Those who are unsure about anything

---

116) Too often men find themselves burdened with\_\_\_\_\_ .

- A) consulting with their parents and friends
- B) earning their living someday
- C) a profession they can't put their whole heart in
- D) accepting this or that appointment

---

117) Replace the Underlined word with the correct option:

Owning to Persian and Islamic influences in North India from the 12th Century onwards, Hindustani music and Carnatic music styles diverged.

- A) Knowing to
- B) Owing to
- C) Owned by
- D) Owning by

---

118) Fill in the blanks with the correct article.

\_\_\_\_\_ bike parked near the gate is mine.

- A) No article required
- B) The
- C) An
- D) A

119) Choose from the following options the meaning of the underlined word:

The comment made by the speaker was quite devious.

- A) Direct
  - B) Indirect
  - C) Outspoken
  - D) Unworthy
- 

120) Choose from the following options, the meaning of the underlined phrase:

Mahesh is as daft as a brush.

- A) Cranky
  - B) Smart
  - C) Silly
  - D) Clever
- 

121) Choose from the following options the meaning of the underlined word:

Absurd questions were asked in the job interview.

- A) Wise
  - B) Indisputable
  - C) Ludicrous
  - D) Logical
- 

122) Choose from the following options the Antonym of the underlined word:

His folly got him in trouble.

- A) Foolishness
- B) Imprudence
- C) Prudence
- D) Nonsense

123) Choose from the following options the meaning of the underlined phrase:

After the speech, Sam realised that the crowd got the wrong end of the stick.

- A) Understood
  - B) Appreciated
  - C) Agreed with
  - D) Misunderstood
- 

124) Choose from the following options, the meaning of the underlined phrase:

After he heard that he cleared his exams with distinction, he was over the moon.

- A) Sad
  - B) Dancing
  - C) Elated
  - D) Lost
- 

125) Choose from the following options, the meaning of the underlined phrase:

You've got to hand it to her; she's a great singer.

- A) Admit
  - B) Help
  - C) Reject
  - D) Forget
- 

126) Choose from the following options, the meaning of the underlined phrase:

The guests decided to make a move, as it was past 10.00 PM.

- A) Sleep
- B) Leave
- C) Loiter
- D) Remain

127) Choose from the following options, the nearest Antonym of the underlined word:

The Universe is NOT finite.

- A) Bounded
  - B) Little
  - C) Limited
  - D) Unlimited
- 

128) Fill in the blanks with the correct options given:

She \_\_\_\_\_ with the one she loved and \_\_\_\_\_ through the forest with him.

- A) eloped, rode
  - B) riding, eloping
  - C) elopes, rode
  - D) rode, elopes
- 

129) Choose from the following options the meaning of the underlined word:

With a reputed company as its accomplice, the startup is doing very well.

- A) Foe
  - B) Adversary
  - C) Antagonist
  - D) Associate
- 

130) Choose from the following options, the meaning of the underlined phrase:

Let's sit somewhere else; they always talk shop over lunch, and it bores me rigid.

- A) Talk about work
- B) Talk of entertainment
- C) Talk of shopping
- D) Talk about buying



## Section 8 - PaperII-Odia

131) 'କୋକିଳ' ଶବ୍ଦଟି କେଉଁ ଶ୍ରେଣୀର ଅନ୍ତର୍ଗତ ?

- A) ସଂସ୍କୃତ
- B) ଓଡ଼ିଆ
- C) ଯାବନିକ
- D) ଦ୍ରାବିଡ଼

132) କେଉଁ ବିଭକ୍ତିର କୌଣସି ଚିହ୍ନ ନଥାଏ ?

- A) ୨ୟା ବିଭକ୍ତି ବହୁବଚନ
- B) ୧ମା ବିଭକ୍ତି ଏକବଚନ
- C) ୪ର୍ଥା ବିଭକ୍ତି ଏକବଚନ
- D) ୩ୟା ବିଭକ୍ତି ଏକବଚନ

133) 'ସୂତ' ଶବ୍ଦର ଅର୍ଥ

- A) ସାରଥୀ
- B) ଜନ୍ମନାତ
- C) ନବଜାତ ସନ୍ତାନ
- D) ପୁତ୍ର

134) 'ପୂର୍ଣ୍ଣଚନ୍ଦ୍ର' (I) ଚିହ୍ନଟି ବାକ୍ୟର କେଉଁଠି ବ୍ୟବହାର ହୁଏ ?

- A) ବାକ୍ୟର ଆରମ୍ଭରୁ
- B) ବାକ୍ୟର ମଧ୍ୟଭାଗରେ
- C) ଦୁଇ ବାକ୍ୟର ସଂଯୋଗ ସ୍ଥଳରେ
- D) ବାକ୍ୟର ସମାପ୍ତିରେ

135) କେଉଁଟି ଅର୍ଦ୍ଧସର ?

- A) ଯ
- B) ଔ
- C) ଶ
- D) ଏ

136) କେଉଁଟି ଲୋଡ଼ିତ ଧ୍ବନି ?

- A) ଦ୍ଵ
- B) ଶ
- C) ଯ
- D) ର

137) ତତ୍ତ୍ଵମ ଶବ୍ଦ କାହାର ବୃତ୍ତାନ୍ତ ?

- A) ଯେଉଁ ଶବ୍ଦ ଦ୍ରାବିଡ଼ ମୂଳ
- B) ଯେଉଁ ଶବ୍ଦ ଯବନ ମୂଳ
- C) ଯେଉଁ ଶବ୍ଦ ସଂସ୍କୃତ ଅନୁରୂପ
- D) ଯେଉଁ ଶବ୍ଦର ମୂଳରୂପ ଅନିର୍ଦ୍ଧାରିତ ।

138) ସିନାନ ଶବ୍ଦ କେଉଁ ମୂଳଶବ୍ଦରୁ ଉଦ୍ଭୁତ ?

- A) ସ୍ଵାହାନ
- B) ସୀନାନ
- C) ସ୍ତାହାନ
- D) ସ୍ଵାନ

139) କ୍ରିୟାର କାଳ କେତେ ପ୍ରକାରରେ ବିଭକ୍ତ ?

- A) ତିନି
- B) ପାଞ୍ଚ
- C) ଚାରି
- D) ଦୁଇ

140) 'ଗାୟକ' ଶବ୍ଦର ଗଠନ କିପରି ହୋଇଥାଏ ?

- A) ଗା + ଇକ
- B) ଗା + ଉକ
- C) ଗୌ + ଅକ
- D) ଗାୟ + କ୍ + କ

141) ଦୃଢ଼ତା ଶ୍ରେଣୀର ଚିହ୍ନ କେଉଁଟି ?

- A) ;
- B) !
- C) „
- D) :

142) ‘ଚନ୍ଦ୍ରସିଲକାର’ କି ପ୍ରକାର ଶବ୍ଦ ?

- A) ଦେଶଜ
- B) ଚଉପଦ
- C) ଯାବନିକ
- D) ଚଉପଦ

143) ବିସ୍ମୟ ବାଚକ ଚିହ୍ନ (!) କାହିଁକି ବ୍ୟବହୃତ ହୁଏ ?

- A) ବାକ୍ୟର ଅର୍ଥ ସଂଗତିକୁ ସୂଚାଇ
- B) ବାକ୍ୟର ଆଶ୍ଚର୍ଯ୍ୟ ଭାବକୁ ସୂଚାଇ
- C) ବାକ୍ୟର ବିନୟ ଭାବକୁ ସୂଚାଇ
- D) ବାକ୍ୟରେ ପଦବିନ୍ୟାସର ସାମ୍ୟକତା ସୂଚାଇ

144) ‘ବରୁଆ’ ଶବ୍ଦଟି କେଉଁ ଶବ୍ଦଭଣ୍ଡାରର ଅନ୍ତର୍ଗତ ?

- A) ଦେଶଜ
- B) ଚଉପଦ
- C) ଚଉପଦ
- D) ବୈଦେଶିକ

145)

ବିଶେଷ୍ୟ ପଦ ପରେ ବ୍ୟବହୃତ ବିଶେଷଣକୁ କ’ଣ କୁହାଯାଏ ?

- A) ବିଶେଷ୍ୟର ବିଶେଷଣ
- B) ବିଶେଷଣର ବିଶେଷଣ
- C) ବିଧେୟ ବିଶେଷଣ
- D) କ୍ରିୟା ବିଶେଷଣ

146) କ୍ରିୟାଭୂକ ବିଶେଷ୍ୟ ପଦରେ ନିମ୍ନ କେଉଁଟି ଗୁରୁତ୍ୱପୂର୍ଣ୍ଣ ?

- A) କାର୍ଯ୍ୟ
- B) ବ୍ୟକ୍ତି
- C) ସ୍ଥାନ
- D) ବସ୍ତୁ

147) ଭିକ୍ଷୁକ ଶବ୍ଦର ଗଠନ କିପରି ହୋଇଛି ?

- A) ଭିକ୍ଷୁ + ଲ + କ
- B) ଭିକ୍ଷୁ + ଏକ
- C) ଭିକ୍ଷୁ + ଉ
- D) ଭିକ୍ଷୁ + ଉକ

148) ‘ଡାହାଣୀ’ ଶବ୍ଦ କେଉଁ ଶବ୍ଦରୁ ଆସିଛି ?

- A) ଡାହାଣ ମଣି
- B) ଡାହାଣୀ
- C) ଡାକିନୀ
- D) ଯକ୍ଷରାଣୀ

149) ଯେଉଁ ସମାସରେ ସଂଖ୍ୟାବାଚକ ଶବ୍ଦ ପ୍ରଥମେ ଥାଏ ଏବଂ ସମାସ ନିଷ୍ପନ୍ନ ପଦ ସମଷ୍ଟିକୁ ବୁଝାଏ, ତାହାକୁ କେଉଁ ସମାସ କହନ୍ତି ?

- A) କର୍ମଧାରୟ
  - B) ତତ୍ପୁରୁଷ
  - C) ଦ୍ବିଗୁ
  - D) ଦ୍ବୟ
- 

150) ଅଷ୍ଟାଧ୍ୟାୟୀ ଗ୍ରନ୍ଥଟିକୁ କିଏ ରଚନା କରିଛନ୍ତି ?

- A) ଆର୍ଯ୍ୟଭଟ୍ଟ
- B) ଗୋପୀନାଥ ନନ୍ଦଶର୍ମା
- C) ଗୋଲୋକବିହାରୀ ଧଳ
- D) ପାଣିନୀ

Question Paper No:	52677_4
<b>Answer Key</b>	

1 D	31 D	61 C	91 C	121 C
2 D	32 C	62 A	92 B	122 C
3 C	33 D	63 A	93 D	123 D
4 D	34 D	64 D	94 C	124 C
5 C	35 B	65 A	95 C	125 A
6 A	36 A	66 A	96 B	126 B
7 A	37 A	67 C	97 D	127 D
8 B	38 B	68 A	98 A	128 A
9 A	39 C	69 D	99 C	129 D
10 C	40 A	70 D	100 C	130 A
11 C	41 D	71 B	101 C	131 D
12 D	42 D	72 A	102 D	132 B
13 B	43 D	73 C	103 A	133 A
14 D	44 B	74 D	104 B	134 D
15 D	45 C	75 C	105 B	135 A
16 B	46 C	76 B	106 C	136 D
17 B	47 A	77 C	107 A	137 C
18 C	48 D	78 B	108 D	138 D
19 A	49 C	79 B	109 A	139 A
20 C	50 D	80 C	110 C	140 C
21 C	51 C	81 A	111 C	141 A
22 A	52 D	82 B	112 C	142 C
23 C	53 D	83 D	113 A	143 B
24 C	54 B	84 B	114 D	144 A
25 B	55 D	85 B	115 C	145 C
26 D	56 D	86 D	116 C	146 A
27 D	57 D	87 B	117 B	147 D
28 A	58 D	88 C	118 B	148 C
29 C	59 A	89 B	119 B	149 B
30 A	60 A	90 A	120 C	150 D